

ck-12

flexbook
next generation textbooks

CK-12 Basic Algebra

Concept Collection



CK-12 Basic Algebra Concepts

Andrew Gloag
Melissa Kramer
Anne Gloag

Say Thanks to the Authors

Click <http://www.ck12.org/saythanks>

(No sign in required)

To access a customizable version of this book, as well as other interactive content, visit www.ck12.org

CK-12 Foundation is a non-profit organization with a mission to reduce the cost of textbook materials for the K-12 market both in the U.S. and worldwide. Using an open-content, web-based collaborative model termed the **FlexBook®**, CK-12 intends to pioneer the generation and distribution of high-quality educational content that will serve both as core text as well as provide an adaptive environment for learning, powered through the **FlexBook Platform®**.

Copyright © 2013 CK-12 Foundation, www.ck12.org

The names “CK-12” and “CK12” and associated logos and the terms “**FlexBook®**” and “**FlexBook Platform®**” (collectively “CK-12 Marks”) are trademarks and service marks of CK-12 Foundation and are protected by federal, state, and international laws.

Any form of reproduction of this book in any format or medium, in whole or in sections must include the referral attribution link <http://www.ck12.org/saythanks> (placed in a visible location) in addition to the following terms.

Except as otherwise noted, all CK-12 Content (including CK-12 Curriculum Material) is made available to Users in accordance with the Creative Commons Attribution-Non-Commercial 3.0 Unported (CC BY-NC 3.0) License (<http://creativecommons.org/licenses/by-nc/3.0/>), as amended and updated by Creative Commons from time to time (the “CC License”), which is incorporated herein by this reference.

Complete terms can be found at <http://www.ck12.org/terms>.

Printed: September 26, 2013

flexbook
next generation textbooks



AUTHORS

Andrew Gloag
Melissa Kramer
Anne Gloag

EDITOR

Annamaria Farbizio

Contents

1	Expressions, Equations, and Functions	1
1.1	Variable Expressions	2
1.2	Expressions with One or More Variables	5
1.3	PEMDAS	10
1.4	Algebra Expressions with Fraction Bars	14
1.5	Calculator Use with Algebra Expressions	17
1.6	Patterns and Expressions	21
1.7	Words that Describe Patterns	25
1.8	Equations that Describe Patterns	29
1.9	Inequalities that Describe Patterns	33
1.10	Function Notation	37
1.11	Domain and Range of a Function	41
1.12	Functions that Describe Situations	45
1.13	Functions on a Cartesian Plane	49
1.14	Vertical Line Test	58
1.15	Problem-Solving Models	63
1.16	Trends in Data	69
2	Properties of Real Numbers	77
2.1	Properties of Rational Numbers	78
2.2	Additive Inverses and Absolute Values	83
2.3	Addition of Integers	88
2.4	Addition of Rational Numbers	92
2.5	Subtraction of Rational Numbers	97
2.6	Multiplication of Rational Numbers	101
2.7	Mixed Numbers in Applications	104
2.8	Expressions and the Distributive Property	108
2.9	When to Use the Distributive Property	111
2.10	Division of Rational Numbers	115
2.11	Applications of Reciprocals	118
2.12	Square Roots and Irrational Numbers	121
2.13	Order of Real Numbers	125
2.14	Guess and Check, Work Backward	129
3	Linear Equations	136
3.1	One-Step Equations and Inverse Operations	138
3.2	Applications of One-Step Equations	142
3.3	Two-Step Equations and Properties of Equality	146
3.4	Multi-Step Equations with Like Terms	152
3.5	Distributive Property for Multi-Step Equations	156
3.6	Equations with Variables on Both Sides	160
3.7	Equations with Ratios and Proportions	165

3.8	Scale and Indirect Measurement Applications	170
3.9	Conversion of Decimals, Fractions, and Percent	177
3.10	Percent Equations	180
3.11	Percent of Change	183
3.12	Formulas for Problem Solving	188
4	Graphs of Linear Equations and Functions	195
4.1	Graphs in the Coordinate Plane	196
4.2	Graphs of Linear Equations	203
4.3	Horizontal and Vertical Line Graphs	209
4.4	Applications of Linear Graphs	214
4.5	Intercepts by Substitution	218
4.6	Intercepts and the Cover-Up Method	224
4.7	Slope	230
4.8	Rates of Change	238
4.9	Slope-Intercept Form	243
4.10	Graphs Using Slope-Intercept Form	247
4.11	Direct Variation	251
4.12	Applications Using Direct Variation	255
4.13	Function Notation and Linear Functions	259
4.14	Graphs of Linear Functions	264
4.15	Problem Solving with Linear Graphs	269
5	Forms of Linear Equations	281
5.1	Write an Equation Given the Slope and a Point	282
5.2	Write an Equation Given Two Points	287
5.3	Write a Function in Slope-Intercept Form	291
5.4	Linear Equations in Point-Slope Form	295
5.5	Forms of Linear Equations	300
5.6	Applications Using Linear Models	304
5.7	Equations of Parallel Lines	309
5.8	Equations of Perpendicular Lines	313
5.9	Families of Lines	317
5.10	Fitting Lines to Data	321
5.11	Linear Interpolation and Extrapolation	331
5.12	Problem Solving with Linear Models	339
5.13	Dimensional Analysis	346
6	Linear Inequalities and Absolute Value	354
6.1	Inequality Expressions	355
6.2	Inequalities with Addition and Subtraction	358
6.3	Inequalities with Multiplication and Division	361
6.4	Multi-Step Inequalities	366
6.5	Compound Inequalities	371
6.6	Applications with Inequalities	377
6.7	Absolute Value	381
6.8	Absolute Value Equations	384
6.9	Graphs of Absolute Value Equations	388
6.10	Absolute Value Inequalities	393
6.11	Linear Inequalities in Two Variables	397
6.12	Theoretical and Experimental Probability	406

7	Systems of Equations and Inequalities	415
7.1	Graphs of Linear Systems	416
7.2	Systems Using Substitution	423
7.3	Mixture Problems	429
7.4	Linear Systems with Addition or Subtraction	434
7.5	Linear Systems with Multiplication	440
7.6	Consistent and Inconsistent Linear Systems	447
7.7	Linear Programming	455
7.8	Probability and Permutations	464
7.9	Probability and Combinations	469
8	Exponents and Exponential Functions	478
8.1	Exponential Properties Involving Products	479
8.2	Exponential Properties Involving Quotients	484
8.3	Negative Exponents	487
8.4	Fractional Exponents	491
8.5	Scientific Notation	494
8.6	Scientific Notation with a Calculator	498
8.7	Exponential Growth	502
8.8	Exponential Decay	507
8.9	Geometric Sequences and Exponential Functions	513
8.10	Applications of Exponential Functions	518
9	Polynomials and Factoring	526
9.1	Polynomials in Standard Form	527
9.2	Addition and Subtraction of Polynomials	532
9.3	Multiplication of Monomials by Polynomials	536
9.4	Multiplication of Polynomials by Binomials	539
9.5	Special Products of Polynomials	544
9.6	Monomial Factors of Polynomials	549
9.7	Zero Product Principle	553
9.8	Factorization of Quadratic Expressions	557
9.9	Factor Polynomials Using Special Products	562
9.10	Factoring by Grouping	567
9.11	Factoring Completely	571
9.12	Probability of Compound Events	575
10	Quadratic Equations and Functions	583
10.1	Quadratic Functions and Their Graphs	584
10.2	Vertical Shifts of Quadratic Functions	589
10.3	Use Graphs to Solve Quadratic Equations	596
10.4	Use Square Roots to Solve Quadratic Equations	603
10.5	Completing the Square	607
10.6	Vertex Form of a Quadratic Equation	611
10.7	Quadratic Formula	615
10.8	Comparing Methods for Solving Quadratics	620
10.9	Solutions Using the Discriminant	624
10.10	Linear, Exponential, and Quadratic Models	629
10.11	Applications of Function Models	637
11	Radicals and Geometry Connections	648
11.1	Graphs of Square Root Functions	649

11.2	Simplification of Radical Expressions	656
11.3	Addition and Subtraction of Radicals	659
11.4	Multiplication and Division of Radicals	662
11.5	Radical Equations	666
11.6	Pythagorean Theorem and its Converse	671
11.7	Distance Formula	678
11.8	Midpoint Formula	683
11.9	Measures of Central Tendency and Dispersion	687
11.10	Stem-and-Leaf Plots	694
11.11	Box-and-Whisker Plots	703
12	Rational Equations and Functions	714
12.1	Inverse Variation Models	715
12.2	Graphs of Rational Functions	720
12.3	Division of Polynomials	726
12.4	Excluded Values for Rational Expressions	731
12.5	Multiplication of Rational Expressions	735
12.6	Division of Rational Expressions	739
12.7	Addition and Subtraction of Rational Expressions	743
12.8	Rational Equations Using Proportions	748
12.9	Clearing Denominators in Rational Equations	751
12.10	Surveys and Samples	755
	Back Matter	770

CHAPTER

1

Expressions, Equations, and Functions

Chapter Outline

- 1.1 VARIABLE EXPRESSIONS
- 1.2 EXPRESSIONS WITH ONE OR MORE VARIABLES
- 1.3 PEMDAS
- 1.4 ALGEBRA EXPRESSIONS WITH FRACTION BARS
- 1.5 CALCULATOR USE WITH ALGEBRA EXPRESSIONS
- 1.6 PATTERNS AND EXPRESSIONS
- 1.7 WORDS THAT DESCRIBE PATTERNS
- 1.8 EQUATIONS THAT DESCRIBE PATTERNS
- 1.9 INEQUALITIES THAT DESCRIBE PATTERNS
- 1.10 FUNCTION NOTATION
- 1.11 DOMAIN AND RANGE OF A FUNCTION
- 1.12 FUNCTIONS THAT DESCRIBE SITUATIONS
- 1.13 FUNCTIONS ON A CARTESIAN PLANE
- 1.14 VERTICAL LINE TEST
- 1.15 PROBLEM-SOLVING MODELS
- 1.16 TRENDS IN DATA

Introduction

The study of expressions, equations, and functions is the basis of mathematics. Each mathematical subject requires knowledge of manipulating equations to solve for a variable. Careers such as automobile accident investigators, quality control engineers, and insurance originators use equations to determine the value of variables.



Functions are methods of explaining relationships and can be represented as a rule, a graph, a table, or in words. The amount of money in a savings account, how many miles run in a year, or the number of trout in a pond are all described using functions.

Throughout this chapter, you will learn how to choose the best variables to describe a situation, simplify an expression using the Order of Operations, describe functions in various ways, write equations, and solve problems using a systematic approach.

1.1 Variable Expressions

Here you'll learn how to decide which variables to use when representing unknown quantities and how to form expressions by using these variables.

What if you were at the supermarket and saw the price of a loaf of bread, but you weren't sure how many loaves you wanted to buy? How could you represent the total amount of money spent on bread? After completing this Concept, you'll be able to write an expression that is equal to this amount, regardless of the number of loaves you buy.

Guidance

When someone is having trouble with algebra, they may say, "I don't speak math!" While this may seem weird to you, it is a true statement. Math, like English, French, Spanish, or Arabic, is a second language that you must learn in order to be successful. There are verbs and nouns in math, just like in any other language. In order to understand math, you must practice the language.

A verb is a "doing" word, such as running, jumping, or driving. In mathematics, verbs are also "doing" words. A math verb is called an **operation**. Operations can be something you have used before, such as addition, multiplication, subtraction, or division. They can also be much more complex like an exponent or square root.

Example A

Suppose you have a job earning \$8.15 per hour. What could you use to quickly find out how much money you would earn for different hours of work?

You could make a list of all the possible hours, but that would take forever! So instead, you let the "hours you work" be replaced with a symbol, like h for hours, and write an equation such as:

$$\text{amount of money} = 8.15(h)$$

A noun is usually described as a person, place, or thing. In mathematics, nouns are called numbers and **variables**. A variable is a symbol, usually an English letter, written to replace an unknown or changing quantity.



Example B

What variables could be choices for the following situations?

- the number of cars on a road
- time in minutes of a ball bounce
- distance from an object

Solution: There are many options, but here are a few to think about.

- Cars is the changing value, so c is a good choice.
- Time is the changing value, so t is a good choice.
- Distance is the varying quantity, so d is a good choice.

Example C

Write an expression for 2 more than 5 times a number.

Solution: First we need to choose a variable for this unknown number. The letter n is a common choice, so we'll use that. To write the expression, first express 5 times the number by

$$5(n).$$

Now we need to express "2 more" than

$$5(n)$$

. Two more means that we should add two.

$$5(n) + 2.$$

Video Review

MEDIA

Click image to the left for more content.



MEDIA

Click image to the left for more content.

Guided Practice

1. What variable would you use to represent the length in yards of fabric?
2. Suppose bananas cost \$0.29 each. Write an expression for the cost of buying a certain quantity of bananas.
3. Suppose your bank account charges you a \$9 fee every month plus \$2 for every time you use an ATM of another bank. Write an expression for the charges every month.

Answers

1. We often use the first letter of the word that the variable represents. Since we want to represent length, we could use l . We could also use y for yards, to be more specific. Either choice would be good in this case.

2. First we must choose a variable for the quantity of bananas purchased. What variable would you choose? One good choice is b , for banana. Now, it costs \$0.29 for each banana, so we multiply that by the number of bananas purchased:

$$\$0.29(b)$$

3. The bank charges \$2 for every ATM withdrawal from another bank. That means \$2 times the number of times you use the ATM of another bank is the amount of money charged. What variable should you use to represent the number of ATM withdrawals from another bank? One good choice would be A , for ATM. So the charges for the ATM are represented as follows:

$$2(A)$$

But the bank also charges us a fixed \$9 every month, so we have to **add** that to the expression:

$$2(A) + 9$$

Practice

In 1 – 5, choose an appropriate variable to describe each situation.

1. The number of hours you work in a week
2. The distance you travel
3. The height of an object over time
4. The area of a square
5. The number of steps you take in a minute

In 6 – 10, write an expression to describe each situation.

6. You have a job earning \$2000 a month
7. Avocados are sold for \$1.50 each
8. A car travels 50 miles per hour for a certain number of hours
9. Your vacation costs you \$500 for the airplane ticket plus \$100 per day
10. Your cell phone costs \$50 a month plus \$0.25 for each text message

In 11 – 15, underline the math verb(s) in the sentence.

11. Six times v
12. Four plus y minus six
13. Sixteen squared
14. U divided by three minus eight
15. 225 raised to the $\frac{1}{2}$ power

1.2 Expressions with One or More Variables

Here you'll be given an expression containing one or more variables and values for the variables. You'll learn how to plug the values into the expression and simplify the expression.

Suppose you know the area of a circle is approximately $3.14r^2$, where r is the radius of the circle. What if a circle has a radius of 25 inches? How would you find its area? In this Concept, you'll learn how to substitute 25 inches into the expression representing the area and evaluate the expression.

Guidance

Just like in the English language, mathematics uses several words to describe one thing. For example, *sum*, *addition*, *more than*, and *plus* all mean to add numbers together. The following definition shows an example of this.

Definition: To **evaluate** means to follow the verbs in the math sentence. **Evaluate** can also be called simplify or answer.

To begin to evaluate a mathematical **expression**, you must first **substitute** a number for the variable.

Definition: To **substitute** means to replace the variable in the sentence with a value.

Now try out your new vocabulary.

Example A

Evaluate $7y - 11$, when $y = 4$.

Solution: Evaluate means to follow the directions, which is to take 7 times y and subtract 11. Because y is the number 4, we can evaluate our expression as follows:

$$7 \times 4 - 11$$

$$28 - 11$$

$$17$$

The solution is 17.

We have "substituted" the number 4 for y .

We have multiplied 7 and 4.

We have subtracted 11 from 28.

Because algebra uses variables to represent the unknown quantities, the multiplication symbol \times is often confused with the variable x . To help avoid confusion, mathematicians replace the multiplication symbol with parentheses $()$ or the multiplication dot \cdot , or by writing the expressions side by side.

Example B

Rewrite $P = 2 \times l + 2 \times w$ with alternative multiplication symbols.

Solution: $P = 2 \times l + 2 \times w$ can be written as $P = 2 \cdot l + 2 \cdot w$.

It can also be written as $P = 2l + 2w$.

The following is a real-life example that shows the importance of evaluating a mathematical variable.

Example C

To prevent major accidents or injuries, these horses must be fenced in a rectangular pasture. If the dimensions of the pasture are 300 feet by 225 feet, how much fencing should the ranch hand purchase to enclose the pasture?



Solution: Begin by drawing a diagram of the pasture and labeling what you know.



To find the amount of fencing needed, you must add all the sides together:

$$L + L + W + W$$

By substituting the dimensions of the pasture for the variables L and W , the expression becomes:

$$300 + 300 + 225 + 225$$

Now we must evaluate by adding the values together. The ranch hand must purchase $300 + 300 + 225 + 225 = 1,050$ feet of fencing.

Video Review

MEDIA

Click image to the left for more content.



MEDIA

Click image to the left for more content.

Guided Practice

1. Write the expression $2 \times a$ in a more condensed form and then evaluate it for $3 = a$.
2. If it costs \$9.25 for a movie ticket, how much does it cost for 4 people to see a movie?

Solutions:

1. $2 \times a$ can be written as $2a$. We can substitute 3 for a :

$$2(3) = 6$$


2. Since each movie ticket is \$9.25, we multiply this price by the 4 people buying tickets to get the total cost:

$$\$9.25 \times 4 = \$37.00$$

It costs \$37 for 4 people to see a movie.

Practice

Sample explanations for some of the practice exercises below are available by viewing the following video. Note that there is not always a match between the number of the practice exercise in the video and the number of the practice exercise listed in the following exercise set. However, the practice exercise is the same in both. [CK-12 Basic Algebra: Variable Expressions \(12:26\)](#)



MEDIA

Click image to the left for more content.

In 1 – 4, write the expression in a more condensed form by leaving out the multiplication symbol.

1. $2 \times 11x$
2. $1.35 \cdot y$
3. $3 \times \frac{1}{4}$
4. $\frac{1}{4} \cdot z$

In 5 – 9, evaluate the expression.

5. $5m + 7$ when $m = 3$
6. $\frac{1}{3}(c)$ when $c = 63$
7. $\$8.15(h)$ when $h = 40$
8. $(k - 11) \div 8$ when $k = 43$

9. $(-2)^2 + 3(j)$ when $j = -3$

In 10 – 17, evaluate the expression. Let $a = -3$, $b = 2$, $c = 5$, and $d = -4$.

10. $2a + 3b$

11. $4c + d$

12. $5ac - 2b$

13. $\frac{2a}{c-d}$

14. $\frac{3b}{d}$

15. $\frac{a-4b}{3c+2d}$

16. $\frac{1}{a+b}$

17. $\frac{ab}{cd}$

In 18 – 25, evaluate the expression. Let $x = -1$, $y = 2$, $z = -3$, and $w = 4$.

18. $8x^3$

19. $\frac{5x^2}{6z^3}$

20. $3z^2 - 5w^2$

21. $x^2 - y^2$

22. $\frac{z^3+w^3}{z^3-w^3}$

23. $2x^2 - 3x^2 + 5x - 4$

24. $4w^3 + 3w^2 - w + 2$

25. $3 + \frac{1}{z^2}$

In 26 – 30, evaluate the expression in each real-life problem.

26. The measurement around the widest part of these holiday bulbs is called their *circumference*. The formula for circumference is $2(r)\pi$, where $\pi \approx 3.14$ and r is the radius of the circle. Suppose the radius is 1.25 inches. Find the *circumference*.



FIGURE 1.1

Christmas Baubles by Petr Kratochvil

27. The dimensions of a piece of notebook paper are 8.5 inches by 11 inches. Evaluate the writing area of the paper. The formula for area is length \times width.
28. Sonya purchased 16 cans of soda at \$0.99 each. What is the amount Sonya spent on soda?

29. Mia works at a job earning \$4.75 per hour. How many hours should she work to earn \$124.00?
30. The area of a square is the side length squared. Evaluate the area of a square with a side length of 10.5 miles.

1.3 PEMDAS

Here you'll learn how to decide which operations should be given precedence when evaluating an expression.

What if your teacher asked you to evaluate the expression $3 + 2 \times 6 \div (3 - 1)$? Which should you do first, the addition, subtraction, multiplication, or division? What should you do second, third, and fourth? Also, should the parentheses affect your decisions? After completing this Concept, you'll be able to answer these questions and correctly evaluate the expression to your teacher's delight!

Guidance

The Mystery of Math Verbs

Some math verbs are “stronger” than others and must be done first. This method is known as the **order of operations**.

A mnemonic (a saying that helps you remember something difficult) for the **order of operations** is PEMDAS - Please Excuse My Daring Aunt Sophie.

The order of operations:

Whatever is found inside **PARENTHESES** must be done first. **EXPONENTS** are to be simplified next. **MULTIPLICATION** and **DIVISION** are equally important and must be performed moving left to right. **ADDITION** and **SUBTRACTION** are also equally important and must be performed moving left to right.

Example A

Use the order of operations to simplify $(7 - 2) \times 4 \div 2 - 3$.

Solution: First, we check for parentheses. Yes, there they are and must be done first.

$$(7 - 2) \times 4 \div 2 - 3 = (5) \times 4 \div 2 - 3$$

Next we look for exponents (little numbers written a little above the others). No, there are no exponents so we skip to the next math verb.

Multiplication and division are equally important and must be done from left to right.

$$\begin{aligned} 5 \times 4 \div 2 - 3 &= 20 \div 2 - 3 \\ 20 \div 2 - 3 &= 10 - 3 \end{aligned}$$

Finally, addition and subtraction are equally important and must be done from left to right.

$$10 - 3 = 7$$

This is our answer.

Example B

Use the order of operations to simplify the following expressions.

a) $3 \times 5 - 7 \div 2$

b) $3 \times (5 - 7) \div 2$

c) $(3 \times 5) - (7 \div 2)$

Solutions:

a) There are no parentheses and no exponents. Go directly to multiplication and division from left to right: $3 \times 5 - 7 \div 2 = 15 - 7 \div 2 = 15 - 3.5$

Now subtract: $15 - 3.5 = 11.5$

b) Parentheses must be done first: $3 \times (-2) \div 2$

There are no exponents, so multiplication and division come next and are done left to right: $3 \times (-2) \div 2 = -6 \div 2 = -3$

c) Parentheses must be done first: $(3 \times 5) - (7 \div 2) = 15 - 3.5$

There are no exponents, multiplication, division, or addition, so simplify:

$$15 - 3.5 = 11.5$$

Parentheses are used two ways. The first is to alter the order of operations in a given expression, such as example (b). The second way is to clarify an expression, making it easier to understand.

Some expressions contain no parentheses, while others contain several sets of parentheses. Some expressions even have parentheses inside parentheses! When faced with **nested parentheses**, start at the innermost parentheses and work outward.

Example C

Use the order of operations to evaluate the following expression when

$$x = 2$$

$$(2x - 3) + x^2 - 3$$

Solution:

First, we will substitute in 2 for x .

$$(2(2) - 3) + (2)^2 - 3$$

Now we will use the order of operations to evaluate the expression, starting inside the parentheses and then with the exponent.

$$(2(2) - 3) + (2)^2 - 3 = (1) + 4 - 3 = 2$$

We finish evaluating with addition and subtraction.

Video Review



MEDIA

 Click image to the left for more content.



MEDIA

 Click image to the left for more content.

Guided Practice

1. Use the order of operations to simplify

$$8 - [19 - (2 + 5) - 7].$$

2. Use the order or operations to evaluate the following expression when

$$x = 3$$

and

$$y = 5$$

$$3 \cdot y^2 - 2(7 - x)$$

Solutions:

1. Begin with the innermost parentheses:

$$8 - [19 - (2 + 5) - 7] = 8 - [19 - 7 - 7]$$

Simplify according to the order of operations:

$$8 - [19 - 7 - 7] = 8 - [5] = 3$$

2.' First, we will substitute in 3 for x and 5 for y .

$$3 \cdot 5^2 - 2(7 - 3)$$

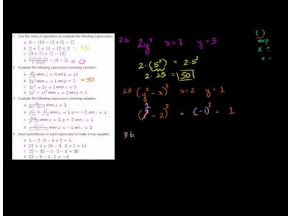
Now we will use the order of operations to evaluate the expression, doing parentheses and exponents first, then multiplication, and finally subtraction.

$$3 \cdot 5^2 - 2(7 - 3) = 3 \cdot 25 - 2(4) = 75 - 8 = 67.$$

Note that there was no division or addition, so we skipped those steps.

Practice

Sample explanations for some of the practice exercises below are available by viewing the following video. Note that there is not always a match between the number of the practice exercise in the video and the number of the practice exercise listed in the following exercise set. However, the practice exercise is the same in both. [CK-12 Basic Algebra: Order of Operations \(14:23\)](#)



MEDIA

Click image to the left for more content.

Use the order of operations to simplify the following expressions.

1. $8 - (19 - (2 + 5) - 7)$
2. $2 + 7 \times 11 - 12 \div 3$
3. $(3 + 7) \div (7 - 12)$
4. $8 \cdot 5 + 6^2$
5. $9 \div 3 \times 7 - 2^3 + 7$
6. $8 + 12 \div 6 + 6$
7. $(7^2 - 3^2) \div 8$

Evaluate the following expressions involving variables.

8. $2y^2$ when $y = 5$
9. $3x^2 + 2x + 1$ when $x = 5$
10. $(y^2 - x)^2$ when $x = 2$ and $y = 1$

1.4 Algebra Expressions with Fraction Bars

Here you'll add to your knowledge of the order of operations by investigating the role that fraction bars play when evaluating expressions.

What if you knew that the volume of a sphere could be represented by the formula $V = \frac{4\pi r^3}{3}$, where r is the radius, and that the radius of a sphere is 4 feet? How would the fraction bar in the formula affect the way that you found the sphere's volume? Which operation do you think the fraction bar represents? After completing this Concept, you'll be able to correctly interpret the fraction bar when finding the sphere's volume.

Guidance

Fraction bars count as grouping symbols for PEMDAS, and should be treated as a set of parentheses. All numerators and all denominators can be treated as if they have invisible parentheses. When **real** parentheses are also present, remember that the innermost grouping symbols should be evaluated first. If, for example, parentheses appear in a numerator, they would take precedence over the fraction bar. If the parentheses appear outside of the fraction, then the fraction bar takes precedence.

Example A

Use the order of operations to simplify the following expression:

$$\frac{z+3}{4} - 1$$

when

$$z = 2$$

Solution: Begin by substituting the appropriate value for the variable:

$$\frac{(2+3)}{4} - 1 = \frac{5}{4} - 1.$$

Rewriting 1 as a fraction, the expression becomes:

$$\frac{5}{4} - \frac{4}{4} = \frac{1}{4}$$

Example B

Use the order of operations to simplify the following expression:

$$\left(\frac{a+2}{b+4} - 1\right) + b \text{ when } a = 3 \text{ and } b = 1$$

Solution: Begin by substituting the appropriate value for the variable:

$$\frac{(3+2)}{(1+4)} = \frac{5}{5} = 1$$

$(1 - 1) + b$ Substituting 1 for b , the expression becomes $0 + 1 = 1$

Example C

Use the order of operations to simplify the following expression:

$$2 \times \left(\frac{w+(x-2z)}{(y+2)^2} - 1 \right) \text{ when } w = 11, x = 3, y = 1 \text{ and } z = -2$$

Solution: Begin by substituting the appropriate values for the variables:

$$2 \left(\frac{[11+(3-2(-2))]}{[(1+2)^2]} - 1 \right) = 2 \left(\frac{(11+7)}{3^2} - 1 \right) = 2 \left(\frac{18}{9} - 1 \right)$$

Continue simplifying:

$$2 \left(\frac{18}{9} - \frac{9}{9} \right) = 2 \left(\frac{9}{9} \right) = 2(1) = 2$$

Video Review**MEDIA**

Click image to the left for more content.

**MEDIA**

Click image to the left for more content.

Guided Practice

Use the order of operations to evaluate the following expression when

$$x = 6$$

and

$$y = 2$$

:

$$\left(\frac{x-1}{y-1} \right)^2 + \frac{2x}{y^2}$$

Solution:

Begin by substituting in 6 for x and 1 for y .

$$\left(\frac{6-1}{2-1} \right)^2 + \frac{2(6)}{2^2}$$

First, we work with what is inside the parentheses. There, we have a fraction so we have to simplify the fraction first, simplifying the numerator and then the denominator before dividing. We can simplify the other fraction at the same time.

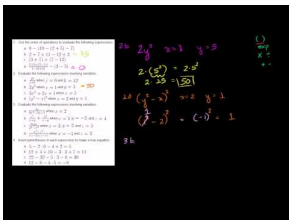
$$\left(\frac{5}{1} \right)^2 + \frac{12}{4}$$

Next we simplify the fractions, and finish with exponents and then addition:

$$(5)^2 + 3 = 25 + 3 = 28.$$

Practice

Sample explanations for some of the practice exercises below are available by viewing the following video. Note that there is not always a match between the number of the practice exercise in the video and the number of the practice exercise listed in the following exercise set. However, the practice exercise is the same in both. [CK-12 Basic Algebra: Order of Operations \(14:23\)](#)



MEDIA

Click image to the left for more content.

Use the order of operations to simplify the following expressions.

- $\frac{2 \cdot (3 + (2 - 1))}{4 - (6 + 2)} - (3 - 5)$
- $\frac{(2 + 3)^2}{3 - 8} - \frac{3 \cdot (10 - 4)}{7 - 4}$

Evaluate the following expressions involving variables.

- $\frac{jk}{j+k}$ when $j = 6$ and $k = 12$.
- $\frac{4x}{9x^2 - 3x + 1}$ when $x = 2$
- $\frac{z^2}{x+y} + \frac{x^2}{x-y}$ when $x = 1$, $y = -2$, and $z = 4$.
- $\frac{4xyz}{y^2 - x^2}$ when $x = 3$, $y = 2$, and $z = 5$
- $\frac{x^2 - z^2}{xz - 2x(z-x)}$ when $x = -1$ and $z = 3$

The formula to find the volume of a square pyramid is $V = \frac{s^2(h)}{3}$. Evaluate the volume for the given values.

- $s = 4$ inches, $h = 18$ inches
- $s = 10$ feet, $h = 50$ feet
- $h = 7$ meters, $s = 12$ meters
- $h = 27$ feet, $s = 13$ feet
- $s = 16$ cm, $h = 90$ cm

1.5 Calculator Use with Algebra Expressions

Here you'll learn how to type an expression into your calculator and evaluate it, either by entering the value(s) of the variable(s) directly into the expression, or by storing the value(s) of the variable(s) in your calculator's memory and then entering the expression.

What if you wanted to evaluate the expression $\frac{x^2+4x+3}{2x^2-9x-5}$ when $x = 7$? If you had your calculator handy, it could make things easier, but how would you enter an expression like this into your calculator? Also, how would you tell your calculator that $x = 7$? In this Concept, you will learn how to make use of your calculator when evaluating expressions like these.


Guidance

A calculator, especially a graphing calculator, is a very useful tool in evaluating algebraic expressions. A graphing calculator follows the order of operations, PEMDAS. In this section, we will explain two ways of evaluating expressions with a graphing calculator.

Example A

Method #1 This method is the direct input method. After substituting all values for the variables, you type in the expression, symbol for symbol, into your calculator.

Evaluate $[3(x^2 - 1)^2 - x^4 + 12] + 5x^3 - 1$ when $x = -3$.



Substitute the value $x = -3$ into the expression.

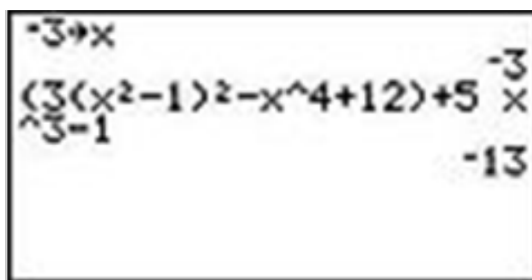
$$[3((-3)^2 - 1)^2 - (-3)^4 + 12] + 5(-3)^3 - 1$$

The potential error here is that you may forget a sign or a set of parentheses, especially if the expression is long or complicated. Make sure you check your input before writing your answer. An alternative is to type in the expression in appropriate chunks – do one set of parentheses, then another, and so on.

Example B

Method #2 This method uses the STORE function of the Texas Instrument graphing calculators, such as the TI-83, TI-84, or TI-84 Plus.

First, store the value $x = -3$ in the calculator. Type -3 [STO] x . (The letter x can be entered using the x -[VAR] button or [ALPHA] + [STO]). Then type in the expression in the calculator and press [ENTER].



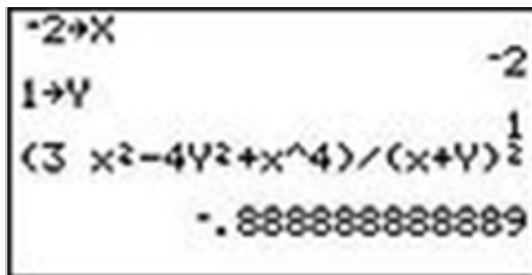
The answer is -13 .

Note: On graphing calculators there is a difference between the minus sign and the negative sign. When we stored the value negative three, we needed to use the negative sign, which is to the left of the [ENTER] button on the calculator. On the other hand, to perform the subtraction operation in the expression we used the minus sign. The minus sign is right above the plus sign on the right.

Example C

You can also use a graphing calculator to evaluate expressions with more than one variable.

Evaluate the expression: $\frac{3x^2-4y^2+x^4}{(x+y)^{\frac{1}{2}}}$ for $x = -2, y = 1$.



Store the values of x and y : -2 [STO] x , 1 [STO] y . The letters x and y can be entered using [ALPHA] + [KEY]. Input the expression in the calculator. When an expression shows the division of two expressions, be sure to use parentheses: (numerator) ÷ (denominator). Press [ENTER] to obtain the answer $-.8\bar{8}$ or $-\frac{8}{9}$.

Video Review



MEDIA

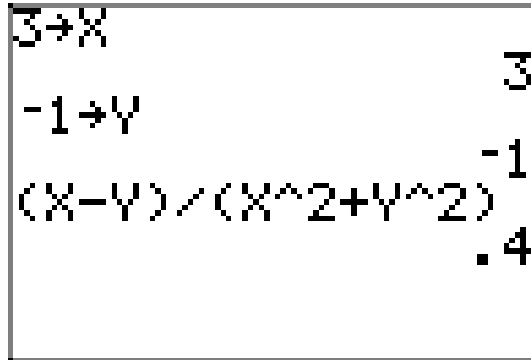
Click image to the left for more content.


MEDIA

Click image to the left for more content.

Guided Practice

Evaluate the expression $\frac{x-y}{x^2+y^2}$ for $x = 3, y = -1$.



Store the values of x and y : 3[STO] x , -1 [STO] y . The letters x and y can be entered using [ALPHA] + [KEY]. Input the expression in the calculator. When an expression shows the division of two expressions, be sure to use parentheses: (numerator) ÷ (denominator). Press [ENTER] to obtain the answer 0.4.

Practice

In 1-5, evaluate each expression using a graphing calculator.

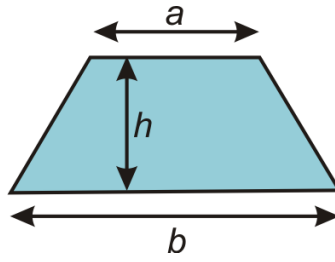
- $x^2 + 2x - xy$ when $x = 250$ and $y = -120$
- $(xy - y^4)^2$ when $x = 0.02$ and $y = -0.025$
- $\frac{x+y-z}{xy+yz+xz}$ when $x = \frac{1}{2}$, $y = \frac{3}{2}$, and $z = -1$
- $\frac{(x+y)^2}{4x^2-y^2}$ when $x = 3$ and $y = -5d$
- The formula to find the volume of a spherical object (like a ball) is $V = \frac{4}{3}(\pi)r^3$, where r = the radius of the sphere. Determine the volume for a grapefruit with a radius of 9 cm.

In 6-9, insert parentheses in each expression to make a true equation.

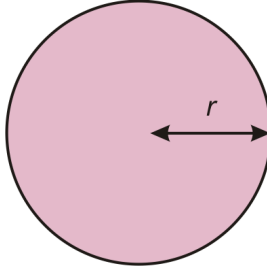
- $5 - 2 \cdot 6 - 4 + 2 = 5$
- $12 \div 4 + 10 - 3 \cdot 3 + 7 = 11$
- $22 - 32 - 5 \cdot 3 - 6 = 30$
- $12 - 8 - 4 \cdot 5 = -8$

Mixed Review

- Let $x = -1$. Find the value of $-9x + 2$.
- The area of a trapezoid is given by the equation $A = \frac{h}{2}(a + b)$. Find the area of a trapezoid with bases $a = 10$ cm, $b = 15$ cm, and height $h = 8$ cm.



12. The area of a circle is given by the formula $A = \pi r^2$. Find the area of a circle with radius $r = 17$ inches.



1.6 Patterns and Expressions

Here you'll learn how to take an English phrase and produce an equivalent algebraic expression. You'll also practice taking an algebraic expression and producing an equivalent English phrase.

Jeremy read that degrees Celsius converted to degrees Fahrenheit is "the sum of 32 and $\frac{9}{5}$ times the temperature in degrees Celsius." However, he's not sure how to convert this into an algebraic expression. What do you think an equivalent algebraic expression would be? This Concept will teach you how to translate such an English phrase into algebra so that you can help Jeremy out.

Guidance

In mathematics, especially in algebra, we look for patterns in the numbers that we see. Using mathematical verbs and variables, expressions can be written to describe a pattern. An **algebraic expression** is a mathematical phrase combining numbers and/or variables using mathematical operations. We can describe patterns using phrases as well, and we want to be able to translate these phrases into algebraic expressions.



Consider a theme park charging an admission of \$28 per person. A rule can be written to describe the relationship between the amount of money taken at the ticket booth and the number of people entering the park. In words, the relationship can be stated as “*The money taken in dollars is (equals) twenty-eight times the number of people who enter the park.*”

The English phrase above can be translated (written in another language) into an algebraic expression. Using mathematical verbs and nouns learned from previous lessons, any phrase can be written as an algebraic expression.

Example A

Write an algebraic expression for the following phrase.

The product of c and 4.

Solution:

The verb is *product*, meaning “to multiply.” Therefore, the phrase is asking for the answer found by multiplying c and 4. The nouns are the number 4 and the variable c . The expression becomes $4 \times c$, $4(c)$, or using shorthand, $4c$.

Example B

Write an expression to describe the amount of revenue of the theme park described above.

Solution:

An appropriate variable to describe the number of people could be p . Rewriting the English phrase into a mathematical phrase, it becomes $28 \times p$.

Some phrases are harder to translate than others.

Example C

Translate the phrase "5 less than 2 times a number."

Solution:

The word *less* lets you know that you are going to take away, or subtract, a number. Many students will want to turn this expression into $5 - 2n$. But this is not what our phrase is telling us. Whatever the value of "2 times a number" or $2n$, we want to write an expression that shows we have 5 less than that. That means that we need to subtract 5 from $2n$. The correct answer is $2n - 5$.

Video Review

MEDIA

Click image to the left for more content.



MEDIA

Click image to the left for more content.

Guided Practice

A student organization sells shirts to raise money for events and activities. The shirts are printed with the organization's logo and the total costs are \$100 plus \$7 for each shirt. The students sell the shirts for \$15 each. Write an expression for the cost and an expression for the revenue (money earned).


Solution:

We can use x to represent the number of shirts. For the cost, we have a fixed \$100 charge and then \$7 times the number of shirts printed. This can be expressed as $100 + 7x$. For the revenue, we have \$15 times the number of shirts sold, or $15x$.

Practice

Sample explanations for some of the practice exercises below are available by viewing the following video. Note that there is not always a match between the number of the practice exercise in the video and the number of the

practice exercise listed in the following exercise set. However, the practice exercise is the same in both. [CK-12 Basic Algebra:Patterns and Equations \(13:18\)](#)



MEDIA

Click image to the left for more content.

For exercises 1 – 15, translate the English phrase into an algebraic expression. For the exercises without a stated variable, choose a letter to represent the unknown quantity.

1. Sixteen more than a number
2. The quotient of h and 8
3. Forty-two less than y
4. The product of k and three
5. The sum of g and -7
6. r minus 5.8
7. 6 more than 5 times a number
8. 6 divided by a number minus 12
9. A number divided by -11
10. 27 less than a number times four
11. The quotient of 9.6 and m
12. 2 less than 10 times a number
13. The quotient of d and five times s
14. 35 less than x
15. The product of 6, -9 , and u

In exercises 16 – 24, write an English phrase for each algebraic expression

16. $J - 9$
17. $\frac{n}{14}$
18. $17 - a$
19. $3l - 16$
20. $\frac{1}{2}(h)(b)$
21. $\frac{b}{3} + \frac{z}{2}$
22. $4.7 - 2f$
23. $5.8 + k$
24. $2l + 2w$

In exercises 25 – 28, define a variable to represent the unknown quantity and write an expression to describe the situation.

25. The *unit cost* represents the quotient of the total cost and number of items purchased. Write an expression to represent the unit cost of the following: The total cost is \$14.50 for n objects.
26. The area of a square is the side length squared.
27. The total length of ribbon needed to make dance outfits is 15 times the number of outfits.
28. What is the remaining amount of chocolate squares if you started with 16 and have eaten some?

Use your sense of variables and operations to answer the following questions.

29. Describe a real-world situation that can be represented by $h + 9$.
30. What is the difference between $\frac{7}{m}$ and $\frac{m}{7}$?

1.7 Words that Describe Patterns

Here you'll learn how to interpret the figures in a table by writing an English sentence or an algebraic expression. You'll also use the algebraic expressions you find to make predictions about the future.

Many bicyclists have biking watches that are able to record the time spent biking and the distance traveled. They are able to download the data recorded by their watches to a computer and view a table with times in minutes in one column and distances in miles in another column. How could they use this data to write an English sentence or an algebraic expression? After completing this Concept, you'll be able to answer this question and use the algebraic expression to predict the distance traveled for any time spent biking.

Guidance

Using Words to Describe Patterns

Sometimes patterns are given in *tabular* format (meaning presented in a table). An important job of data analysts is to describe a pattern so others can understand it.

Example A

Using the table below, describe the pattern in words.

x	-1	0	1	2	3	4
y	-5	0	5	10	15	20

Solution: We can see from the table that y is five times bigger than x . Therefore, the pattern is that the “ y value is five times larger than the x value.”

Example B

Zarina has a \$100 gift card and has been spending money in small regular amounts. She checks the balance on the card at the end of every week and records the balance in the following table. Using the table, describe the pattern in words and in an expression.

TABLE 1.1:

Week #	Balance (\$)
1	78
2	56
3	34

Solution: Each week the amount of her gift card is \$22 less than the week before. The pattern in words is: “*The gift card started at \$100 and is decreasing by \$22 each week.*” As we saw in the last lesson, this sentence can be translated into the algebraic expression

$$100 - 22w$$

Example C

The expression found in example 2 can be used to answer questions and predict the future. Suppose, for instance, that Zarina wanted to know how much she would have on her gift card after 4 weeks if she used it at the same rate. By substituting the number 4 for the variable w , it can be determined that Zarina would have \$12 left on her gift card.

Solution:

$$100 - 22w$$

When $w = 4$, the expression becomes:

$$100 - 22(4)$$

$$100 - 88$$

$$12$$

After 4 weeks, Zarina would have \$12 left on her gift card.

Video Review



MEDIA

Click image to the left for more content.



MEDIA

Click image to the left for more content.

Guided Practice

Jose starts training to be a runner. When he starts, he can run 3 miles per hour. After 5 weeks of training, Jose can run faster. After each week, he records his average speed while running. He summarizes this information in the following table:

TABLE 1.2:

Week #	Average Speed (miles per hour)
1	3.25

TABLE 1.2: (continued)

Week #	Average Speed (miles per hour)
2	3.5
3	3.75
4	4.0
5	4.25

Write an expression for Jose's increased speed and predict how fast he will be able to run after 6 weeks.

Solution:

We will use w to represent the number of weeks. Jose's speed starts at 3 mph, and from the table we can see that it increases by 0.25 miles per hour every week. This gives us the expression $3 + 0.25w$. Now we substitute in $w = 6$ and get the following:


$$3 + 0.25(6)$$

$$3 + 1.5 = 4.5$$

If Jose keeps up his training, by the end of the 6th week, he should be able to run 4.5 miles per hour.

Practice

Sample explanations for some of the practice exercises below are available by viewing the following video. Note that there is not always a match between the number of the practice exercise in the video and the number of the practice exercise listed in the following exercise set. However, the practice exercise is the same in both. [CK-12 Basic Algebra: Patterns and Equations \(13:18\)](#)

**MEDIA**

Click image to the left for more content.

In questions 1 – 4, write the pattern of the table: a) in words and b) with an algebraic expression.

- Number of workers and number of video games packaged

People	0	1	2	5	10	50	200
Amount	0	65	87	109	131	153	175

- The number of hours worked and the total pay

Hours	1	2	3	4	5	6
Total Pay	15	22	29	36	43	50

- The number of hours of an experiment and the total number of bacteria

Hours	0	1	2	5	10
Bacteria	0	2	4	32	1024

4. With each filled seat, the number of people on a Ferris wheel doubles.
 - a. Write an expression to describe this situation.
 - b. How many people are on a Ferris wheel with 17 seats filled?
5. Using the theme park situation from the lesson, how much revenue would be generated by 2,518 people?

Mixed Review

6. Use parentheses to make the equation true: $10 + 6 \div 2 - 3 = 5$.
7. Find the value of $5x^2 - 4y$ for $x = -4$ and $y = 5$.
8. Find the value of $\frac{x^2y^3}{x^3+y^2}$ for $x = 2$ and $y = -4$.
9. Simplify: $2 - (t - 7)^2 \times (u^3 - v)$ when $t = 19$, $u = 4$, and $v = 2$.
10. Simplify: $2 - (19 - 7)^2 \times (4^3 - 2)$.

1.8 Equations that Describe Patterns

Here you will learn how to read about a real-life situation and write an equation that represents this situation. You will then solve the equation and plug the answer back into the equation to check your work.

Suppose that you have 45 minutes to do your math homework, and your teacher has assigned 15 problems. To find out, on average, how many minutes you can spend on each problem, what equation could you set up? Also, if you set up an equation and solve it to find the answer, how will you know that your answer is correct? In this Concept, you will learn how to decide what equation to use and how to make sure your answer is correct once you've found it.

Guidance

When an algebraic expression is set equal to another value, variable, or expression, a new mathematical sentence is created. This sentence is called an **equation**.

Definition: An **algebraic equation** is a mathematical sentence connecting an expression to a value, a variable, or another expression with an equal sign (=).

Suppose there is a concession stand at a theme park selling burgers and French fries. Each burger costs \$2.50 and each order of French fries costs \$1.75. You and your family will spend exactly \$25.00 on food. How many burgers can be purchased? How many orders of fries? How many of each type can be purchased if your family plans to buy a combination of burgers and fries?



The underlined word exactly lends a clue to the type of mathematical sentence you will need to write to model this situation.

These words can be used to symbolize the equal sign:

Exactly, equivalent, the same as, identical, is

The word *exactly* is synonymous with equal, so this word is directing us to write an equation. Using the methods learned in lessons 1.1 and 1.6, read every word in the sentence and translate each into mathematical symbols.

Example A

Your family is planning to purchase only burgers. How many can be purchased with \$25.00?

Solution:

Step 1: Choose a variable to represent the unknown quantity, say b for burgers.

Step 2: Write an equation to represent the situation: $2.50b = 25.00$.

Step 3: Think. What number multiplied by 2.50 equals 25.00?

That number is 10. Checking an answer to an equation is almost as important as the equation itself. By substituting the value for the variable, you are making sure both sides of the equation balance. Let's check that 10 is the solution to our equation by substituting it back in for b .

$$2.50(10) = 25.00$$

$$25.00 = 25.00$$

Since these numbers are equal, 10 is the solution. Your family can purchase exactly ten burgers

Example B

Is $z = 3$ a solution to $z^2 + 2z = 8$?

Solution: Begin by substituting the value of 3 for z .

$$3^2 + 2(3) = 8$$

$$9 + 6 = 8$$

$$15 = 8$$

Because $15 = 8$ is NOT a true statement, we can conclude that $z = 3$ is not a solution to $z^2 + 2z = 8$.

Example C

Check that $x = 5$ is the solution to the equation $3x + 2 = -2x + 27$.

Solution: To check that $x = 5$ is the solution to the equation, substitute the value of 5 for the variable, x :

$$3x + 2 = -2x + 27$$

$$3 \cdot x + 2 = -2 \cdot x + 27$$

$$3 \cdot 5 + 2 = -2 \cdot 5 + 27$$

$$15 + 2 = -10 + 27$$

$$17 = 17$$

Because $17 = 17$ is a true statement, we can conclude that $x = 5$ is a solution to $3x + 2 = -2x + 27$.

Video Review



MEDIA

 Click image to the left for more content.



MEDIA

 Click image to the left for more content.

Guided Practice

Translate the following into equations:

- 9 less than twice a number is 33.
- Five more than four times a number is 21.
- \$20.00 was one-quarter of the money spent on pizza.

Solutions:

a) Let “a number” be n . So, twice a number is $2n$.

Nine less than that is $2n - 9$.

The word *is* means the equal sign, so $2n - 9 = 33$.

b) Let “a number” be x . So five more than four times a number is 21 can be written as: $4x + 5 = 21$.

c) Let “of the money” be m . The equation could be written as $\frac{1}{4}m = 20.00$.

More Practice

For c) above, find how much money was spent on pizza.



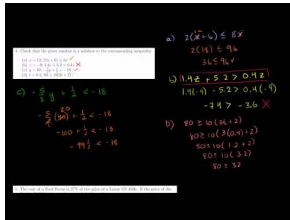
$$\frac{1}{4}m = 20.00$$

Think: One-quarter can also be thought of as *divide by four*. What divided by 4 equals 20.00?

The solution is 80. So, the money spent on pizza was \$80.00.

Practice

Sample explanations for some of the practice exercises below are available by viewing the following video. Note that there is not always a match between the number of the practice exercise in the video and the number of the practice exercise listed in the following exercise set. However, the practice exercise is the same in both. [CK-12 Basic Algebra: Equations and Inequalities \(16:11\)](#)



MEDIA

Click image to the left for more content.

In 1 – 3, define the variables and translate the following statements into algebraic equations.

- Peter's Lawn Mowing Service charges \$10 per job and \$0.20 per square yard. Peter earns \$25 for a job.
- Renting the ice-skating rink for a birthday party costs \$200 plus \$4 per person. The rental costs \$324 in total.
- Renting a car costs \$55 per day plus \$0.45 per mile. The cost of the rental is \$100.

In 4 – 7, check that the given number is a solution to the corresponding equation.

- $a = -3$; $4a + 3 = -9$
- $x = \frac{4}{3}$; $\frac{3}{4}x + \frac{1}{2} = \frac{3}{2}$
- $y = 2$; $2.5y - 10.0 = -5.0$
- $z = -5$; $2(5 - 2z) = 20 - 2(z - 1)$

In 8-12, find the value of the variable.

- $m + 3 = 10$
- $6 \times k = 96$
- $9 - f = 1$
- $8h = 808$
- $a + 348 = 0$

In 13-15, answer by writing an equation and solving for the variable.

- You are having a party and are making sliders. Each person will eat 5 sliders. There will be seven people at your party. How many sliders do you need to make?
- The cost of a Ford Focus is 27% of the price of a Lexus GS 450h. If the price of the Ford is \$15,000, what is the price of the Lexus?
- Suppose your family will purchase only orders of French fries using the information found in the opener of this lesson. How many orders of fries can be purchased for \$25.00?

1.9 Inequalities that Describe Patterns

Here you will learn how to read about a real-life situation and write an inequality that represents this situation. You will then solve the inequality and plug the answer back into the inequality to check your work.

What if you were driving a car at 45 miles per hour and you knew that your destination was less than 150 miles away? What inequality could you set up to solve for the number of hours that you have left to travel? After you've solved the inequality, how could you check to make sure that your answer is correct? Once you've completed this Concept, you'll be able to find and verify solutions to inequalities representing scenarios like these.

Guidance

Sometimes Things Are Not Equal

In some cases there are multiple answers to a problem or the situation requires something that is not exactly equal to another value. When a mathematical sentence involves something other than an equal sign, an **inequality** is formed.

Definition: An **algebraic inequality** is a mathematical sentence connecting an expression to a value, a variable, or another expression with an inequality sign.

Listed below are the most common inequality signs.

$>$ “greater than”

\geq “greater than or equal to”

\leq “less than or equal to”

$<$ “less than”

\neq “not equal to”

Below are several examples of inequalities.

$$3x < 5$$

$$x^2 + 2x - 1 > 0$$

$$\frac{3x}{4} \geq \frac{x}{2} - 3$$

$$4 - x \leq 2x$$

Example A

Translate the following into an inequality: Avocados cost \$1.59 per pound. How many pounds of avocados can be purchased for less than \$7.00?

Solution: Choose a variable to represent the number of pounds of avocados purchased, say a .

$$1.59(a) < 7$$

You will be asked to solve this inequality in the exercises



Checking a Solution to an Inequality

Unlike equations, inequalities have more than one solution. However, you can check whether a value, such as $x = 6$, is *a solution* to an inequality the same way as you would check if it is *the solution* to an equation - by substituting it in and seeing if you get a true algebraic statement.

The following two examples show you how this works.

Example B

Check whether $m = 11$ is a solution set to $4m + 30 \leq 70$.

Solution:

Plug in $m = 11$, to see if we get a true statement.

$$4(11) + 30 \leq 70$$

$$44 + 30 \leq 70$$

$$74 \leq 70$$

Since $m = 11$ gives us a false statement, it is not a solution to the inequality.

Example C

Check whether $m = 10$ is a solution to $4m + 30 \leq 70$.

Solution:

Substitute in $m = 10$:

$$4(10) + 30 \leq 70$$

$$40 + 30 \leq 70$$

$$70 \leq 70$$

For $70 \leq 70$ to be a true statement, we need $70 < 70$ or $70 = 70$. Since $70 = 70$, this is a true statement, so $m = 10$ is a solution.

Video Review



MEDIA

Click image to the left for more content.



MEDIA

Click image to the left for more content.

Guided Practice

1. Check whether $x = 3$ is a solution to $2x - 5 < 7$.
2. Check whether $x = 6$ is a solution to $2x - 5 < 7$.

Solutions:

1. Substitute in $x = 3$, to see if it is a solution to $2x - 5 < 7$.

$$\begin{aligned} 2(3) - 5 &< 7 \\ 6 - 5 &< 7 \\ 1 &< 7 \end{aligned}$$

Since 1 is less than 7, we have a true statement, so $x = 3$ is a solution to $2x - 5 < 7$.

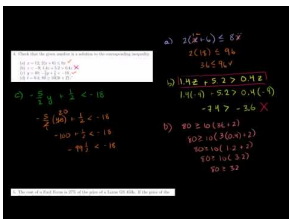
2. Check if $x = 6$ is a solution to $2x - 5 < 7$.

$$\begin{aligned} 2(6) - 5 &< 7 \\ 12 - 5 &< 7 \\ 7 &< 7 \end{aligned}$$

Since 7 is not less than 7, this is a false statement. Thus $x = 6$ is not a solution to $2x - 5 < 7$.

Practice

Sample explanations for some of the practice exercises below are available by viewing the following video. Note that there is not always a match between the number of the practice exercise in the video and the number of the practice exercise listed in the following exercise set. However, the practice exercise is the same in both. [CK-12 Basic Algebra: Equations and Inequalities](#) (16:11)



MEDIA

Click image to the left for more content.

1. Define *solution*.
2. What is the difference between an algebraic equation and an algebraic inequality? Give an example of each.
3. What are the five most common inequality symbols?

In 4 – 7, define the variables and translate the following statements into algebraic equations.

4. A bus can seat 65 passengers or fewer.
5. The sum of two consecutive integers is less than 54.
6. An amount of money is invested at 5% annual interest. The interest earned at the end of the year is greater than or equal to \$250.
7. You buy hamburgers at a fast food restaurant. A hamburger costs \$0.49. You have at most \$3 to spend. Write an inequality for the number of hamburgers you can buy.

For exercises 8 – 11, check whether the given solution set is the solution set to the corresponding inequality.

8. $x = 12$; $2(x + 6) \leq 8x$
9. $z = -9$; $1.4z + 5.2 > 0.4z$
10. $y = 40$; $-\frac{5}{2}y + \frac{1}{2} < -18$
11. $t = 0.4$; $80 \geq 10(3t + 2)$

In 12-14, find the solution set.

12. Using the burger and French fries situation from the previous Concept, give three combinations of burgers and fries your family can buy without spending more than \$25.00.
13. Solve the avocado inequality from Example A and check your solution.
14. On your new job you can be paid in one of two ways. You can either be paid \$1000 per month plus 6% commission on total sales or be paid \$1200 per month plus 5% commission on sales over \$2000. For what amount of sales is the first option better than the second option? Assume there are always sales over \$2000.

Mixed Review

15. Translate into an algebraic equation: 17 less than a number is 65.
16. Simplify the expression: $3^4 \div (9 \times 3) + 6 - 2$.
17. Rewrite the following without the multiplication sign: $A = \frac{1}{2} \cdot b \cdot h$.
18. The volume of a box without a lid is given by the formula $V = 4x(10 - x)^2$, where x is a length in inches and V is the volume in cubic inches. What is the volume of the box when $x = 2$?

1.10 Function Notation

Here you'll learn how to take an equation or inequality and rewrite it as a function. You'll also find out the difference between an independent variable and a dependent variable.

Suppose that you want to set up a function that allows you to input a dog's age in human years and which outputs the dog's age in dog years. How would you go about setting up such a function, and what notation would you use? Would the notation be the same as it was for the equations that you've looked at in previous Concepts? In this Concept, you'll learn what is needed to write a function such as this.

Guidance

Instead of purchasing a one-day ticket to the theme park, Joseph decided to pay by ride. Each ride costs \$2.00. To describe the amount of money Joseph will spend, several mathematical concepts can be used.



First, an expression can be written to describe the relationship between the cost per ride and the number of rides, r . An equation can also be written if the total amount he wants to spend is known. An inequality can be used if Joseph wanted to spend less than a certain amount.

Example A

Using Joseph's situation, write the following:

- An expression representing his total amount spent
- An equation representing his total amount spent
- An equation that shows Joseph wants to spend exactly \$22.00 on rides
- An inequality that describes the fact that Joseph will not spend more than \$26.00 on rides

Solution: The variable in this situation is the number of rides Joseph will pay for. Call this r .

- $2(r)$
- $2(r) = m$

c. $2(r) = 22$

d. $2(r) \leq 26$

In addition to an expression, equation, or inequality, Joseph's situation can be expressed in the form of a function or a table.

Definition: A **function** is a relationship between two variables such that the input value has ONLY one output value.

Writing Equations as Functions

A function is a set of ordered pairs in which the first coordinate, usually x , matches with exactly one second coordinate, y . Equations that follow this definition can be written in function notation. The y coordinate represents the **dependent variable**, meaning the values of this variable depend upon what is substituted for the other variable.

Consider Joseph's equation $m = 2r$. Using function notation, the value of the equation (the money spent m) is replaced with $f(r)$. f represents the function name and (r) represents the variable. In this case the parentheses do not mean multiplication; rather, they separate the function name from the **independent variable**.

$$\begin{array}{c} \text{input} \\ \downarrow \\ \underbrace{f(x) = y}_{\text{function}} \leftarrow \text{out put} \\ \text{box} \end{array}$$

Example B

Rewrite the following equations in function notation.

a. $y = 7x - 3$

b. $d = 65t$

c. $F = 1.8C + 32$

Solution:

a. According to the definition of a function, $y = f(x)$, so $f(x) = 7x - 3$.

b. This time the dependent variable is d . Function notation replaces the dependent variable, so $d = f(t) = 65t$.

c. $F = f(C) = 1.8C + 32$

Why Use Function Notation?

Why is it necessary to use function notation? The necessity stems from using multiple equations. Function notation allows one to easily decipher between the equations. Suppose Joseph, Lacy, Kevin, and Alfred all went to the theme park together and chose to pay \$2.00 for each ride. Each person would have the same equation $m = 2r$. Without asking each friend, we could not tell which equation belonged to whom. By substituting function notation for the dependent variable, it is easy to tell which function belongs to whom. By using function notation, it will be much easier to graph multiple lines.

Example C

Write functions to represent the total each friend spent at the park.

Solution:

$J(r) = 2r$ represents Joseph's total,

$L(r) = 2r$ represents Lacy's total,

$K(r) = 2r$ represents Kevin's total, and

$A(r) = 2r$ represents Alfred's total.

Video Review



MEDIA

Click image to the left for more content.



MEDIA

Click image to the left for more content.

Guided Practice

Recall the example from a previous Concept where a student organization sells shirts to raise money. The cost of printing the shirts was expressed as $100 + 7x$ and for the revenue, we had the expression $15x$, where x is the number of shirts.

- Write two functions, one for the cost and one for revenue.
- Express that the cost must be less than or equal to \$800.
- Express that the revenue must be equal to \$1500.
- How many shirts must the students sell in order to make \$1500?

Solution:

- The cost function we will write as $C(x) = 100 + 7x$ and the revenue function we will write as $R(x) = 15x$.
- Since $C(x)$ represents the costs, we substitute in \$800 for $C(x)$ and replace the equation with the appropriate inequality symbol

$$100 + 7x \leq 800$$

This reads that $100 + 7x$ is less than or equal to \$800, so we have written the inequality correctly.

- We substitute in \$1500 for $R(x)$, getting

$$1500 = 15x.$$

- We want to find the value of x that will make this equation true. It looks like 100 is the answer. Checking this we see that 100 does satisfy the equation. The students must sell 100 shirts in order to have a revenue of \$1500.

$$1500 = 15(100)$$

$$1500 = 1500$$

Practice

1. Rewrite using function notation: $y = \frac{5}{6}x - 2$.
2. Rewrite using function notation: $m = n^2 + 2n - 3$.
3. What is one benefit of using function notation?
4. Write a function that expresses the money earned after working some number of hours for \$10 an hour.
5. Write a function that represents the number of cuts you need to cut a ribbon in x number of pieces.
6. Jackie and Mayra each will collect a \$2 pledge for every basket they make during a game. Write two functions, one for each girl, expressing how much money she will collect.

Mixed Review

7. Compare the following numbers 23 ___ 21.999 .
8. Write an equation to represent the following: the quotient of 96 and 4 is g .
9. Write an inequality to represent the following: 11 minus b is at least 77.
10. Find the value of the variable k : $13(k) = 169$.

1.11 Domain and Range of a Function

Here you'll build on your previous knowledge of functions by learning how to create a table of values for a function and how to identify its domain and range.

Suppose you have a function that allows you to input the number of years you have until retirement and which outputs the amount of money you should have saved. How would you go about determining the domain of such a function? How would you decide on the range? After completing this Concept, you'll be able to create a table of values for a function like this and give its domain and range.

Guidance

Using a Function to Generate a Table

A function really is an equation. Therefore, a table of values can be created by choosing values to represent the **independent variable**. The answers to each substitution represent $f(x)$.

Example A

Use Joseph's function to generate a table of values. Because the variable represents the number of rides Joseph will pay for, negative values do not make sense and are not included in the list of values of the independent variable.

Solution:

TABLE 1.3:

R	$J(r) = 2r$
0	$2(0) = 0$
1	$2(1) = 2$
2	$2(2) = 4$
3	$2(3) = 6$
4	$2(4) = 8$
5	$2(5) = 10$
6	$2(6) = 12$

As you can see, the list cannot include every possibility. A table allows for precise organization of data. It also provides an easy reference for looking up data and offers a set of coordinate points that can be plotted to create a graphical representation of the function. A table does have limitations; namely it cannot represent infinite amounts of data and it does not always show the possibility of fractional values for the independent variable.

Domain and Range of a Function

The set of all possible input values for the independent variable is called the **domain**. The domain can be expressed in words, as a set, or as an inequality. The values resulting from the substitution of the domain represent the **range** of a function.

The domain of the function representing Joseph's situation will not include negative numbers because it does not make sense to ride negative rides. He also cannot ride a fraction of a ride, so decimals and fractional values do not make sense as input values. Therefore, the values of the independent variable r will be whole numbers beginning at zero.

Domain: All whole numbers

The values resulting from the substitution of whole numbers are whole numbers times two. Therefore, the **range** of the function representing Joseph's situation is still whole numbers, just twice as large.

Range: All even whole numbers

Example B

A tennis ball is bounced from a height and bounces back to 75% of its previous height. Write the function for this scenario and determine its domain and range.

Solution: The function representing this situation is $h(b) = 0.75b$, where b represents the previous bounce height.

Domain: The previous bounce height can be any positive number, so $b \geq 0$.

Range: The new height is 75% of the previous height, and therefore will also be any positive number (decimal or whole number), so the range is **all positive real numbers**.

Example C

Find the range of $f(x) = 2x - 3$ when the domain is 0, 1, 2, 3.

Solution:

Since the range is the output, we plug in the values in the domain to see what values we will get out.

$$f(0) = 2(0) - 3 = -3$$

$$f(1) = 2(1) - 3 = -1$$

$$f(2) = 2(2) - 3 = 1$$

$$f(3) = 2(3) - 3 = 3$$

The range for the given domain is $-3, -1, 1, 3$.

Notice that we used function notation to keep track of which input value gave us which output value. This will be useful later.

Video Review



MEDIA

Click image to the left for more content.



MEDIA

Click image to the left for more content.

Guided Practice

Eli makes \$20 an hour tutoring math.

- Write a function expressing the amount of money she earns.
- What are the domain and range of this function?
- Suppose Eli will only work for either 1, 1.5 or 2 hours. Express this domain and the corresponding range in a table.

Solutions:

- Let $M(h)$ represent money earned for h hours. Then the function is $M(h) = 20h$.
- Since hours worked can only be zero or positive, $h \geq 0$ is the domain. If Eli works for zero hours, she will earn zero dollars. She could also earn any positive amount of money, so the range is also all non-negative real numbers. That is, $M \geq 0$.
- First we plug the domain into our function:

$$M(1) = 20(1) = 20$$

$$M(1.5) = 20(1.5) = 30$$

$$M(2) = 20(2) = 40.$$


Putting this into a table, we get:

TABLE 1.4:

h	$M(h)$
1	20
1.5	30
2	40

Practice

Sample explanations for some of the practice exercises below are available by viewing the following video. Note that there is not always a match between the number of the practice exercise in the video and the number of the practice exercise listed in the following exercise set. However, the practice exercise is the same in both. [CK-12 Basic Algebra: Domain and Range of a Function \(12:52\)](#)

**MEDIA**

Click image to the left for more content.

- Define *domain*.
- True or false?* Range is the set of all possible inputs for the independent variable.
- Generate a table from $-5 \leq x \leq 5$ for $f(x) = -(x)^2 - 2$.

In 4-8, identify the domain and range of the function.

- Dustin charges \$10 per hour for mowing lawns.

5. Maria charges \$25 per hour for math tutoring, with a minimum charge of \$15.
6. $f(x) = 15x - 12$
7. $f(x) = 2x^2 + 5$
8. $f(x) = \frac{1}{x}$

9. Make up a situation in which the domain is all real numbers but the range is all whole numbers.
10. What is the range of the function $y = x^2 - 5$ when the domain is $-2, -1, 0, 1, 2$?
11. What is the range of the function $y = 2x - \frac{3}{4}$ when the domain is $-2.5, 1.5, 5$?
12. Angie makes \$6.50 per hour working as a cashier at the grocery store. Make a table of values that shows her earnings for the input values 5, 10, 15, 20, 25, 30.
13. The area of a triangle is given by: $A = \frac{1}{2}bh$. If the base of the triangle is 8 centimeters, make a table of values that shows the area of the triangle for heights 1, 2, 3, 4, 5, and 6 centimeters.
14. Make a table of values for the function $f(x) = \sqrt{2x+3}$ for the input values $-1, 0, 1, 2, 3, 4, 5$.

1.12 Functions that Describe Situations

Here you'll learn how to interpret situations that occur in everyday life and use functions to represent them. You'll also use these functions to answer questions that come up.

What if your bank charged a monthly fee of \$15 for your checking account and also charged \$0.10 for each check written? How would you represent this scenario with a function? Also, what if you could only afford to spend \$20 a month on fees? Could you use your function to find out how many checks you could write per month? In this Concept, you'll learn how to handle situations like these by using functions.

Guidance

Write a Function Rule

In many situations, data is collected by conducting a survey or an experiment. To visualize the data, it is arranged into a table. Most often, a function rule is needed to predict additional values of the independent variable.

Example A

Write a function rule for the table.

Number of CDs	2	4	6	8	10
Cost (\$)	24	48	72	96	120



Solution:

You pay \$24 for 2 CDs, \$48 for 4 CDs, and \$120 for 10 CDs. That means that each CD costs \$12.

We can write the function rule.

Cost = \$12 \times number of CDs or $f(x) = 12x$

Example B

Write a function rule for the table.

x	-3	-2	-1	0	1	2	3
y	3	2	1	0	1	2	3

Solution:

The values of the dependent variable are always the corresponding positive outcomes of the input values. This relationship has a special name, the absolute value. The function rule looks like this: $f(x) = |x|$.

Represent a Real-World Situation with a Function

Let's look at a real-world situation that can be represented by a function.

Example C

Maya has an internet service that currently has a monthly access fee of \$11.95 and a connection fee of \$0.50 per hour. Represent her monthly cost as a function of connection time.

Solution:

Let x = the number of hours Maya spends on the internet in one month and let y = Maya's monthly cost. The monthly fee is \$11.95 with an hourly charge of \$0.50.

The total cost = flat fee + hourly fee \times number of hours. The function is $y = f(x) = 11.95 + 0.50x$.

Video Review

MEDIA

Click image to the left for more content.



MEDIA

Click image to the left for more content.

Guided Practice

When diving in the ocean, you must consider how much pressure you will experience from diving a certain depth. From the atmosphere, we experience 14.7 pounds per square inch (psi) and for every foot we dive down into the ocean, we experience another 0.44 psi in pressure.

- Write a function expressing how pressure changes depending on depth underwater.
- How far can you dive without experiencing more than 58.7 psi of pressure on your body?

Solution:

a.) We are always experiencing 14.7 psi from the atmosphere, and that pressure increases by 0.44 psi for every foot we descend into the ocean. Let d be our depth in feet underwater. Our dependent variable is the pressure P , which is a function of d :

$$P = P(d) = 14.7 + 0.44d$$

b.) We want to know what our depth would be for a pressure of 58.7 psi.

$$58.7 = 14.7 + 0.44d$$

Simplifying our equation by subtracting 14.7 from each side:

$$44 = 0.44d$$

What should d be in order to satisfy this equation? It looks like d should be 100. Let's check:

$$44 = 0.44(100) = 44$$

So we do not want to dive more than 100 feet, because then we would experience more than 58.7 psi of pressure.

Practice

- Use the following situation: *Sheri is saving for her first car. She currently has \$515.85 and is saving \$62 each week.*
 - Write a function rule for the situation.
 - Can the domain be "all real numbers"? Explain your thinking.
 - How many weeks would it take Sheri to save \$1,795.00?
- Write a function rule for the table.

x	3	4	5	6
y	9	16	25	36

- Write a function rule for the table.

hours	0	1	2	3
cost	15	20	25	30

- Write a function rule for the table.

x	0	1	2	3
y	24	12	6	3

- Write a function that represents the number of cuts you need to cut a ribbon in x number of pieces.
- Solomon charges a \$40 flat rate and \$25 per hour to repair a leaky pipe. Write a function that represents the total fee charged as a function of hours worked. How much does Solomon earn for a three-hour job?
- Rochelle has invested \$2500 in a jewelry-making kit. She makes bracelets that she can sell for \$12.50 each. How many bracelets does Rochelle need to make before she breaks even?

Quick Quiz

1. Write a function rule to describe the following table:

of Books	1	2	3	4	5	6
Cost	4.75	5.25	5.75	6.25	6.75	7.25

2. Simplify: $84 \div [(18 - 16) \times 3]$.

3. Evaluate the expression $\frac{2}{3}(y + 6)$ when $y = 3$.

4. Rewrite using function notation: $y = \frac{1}{4}x^2$.

5. You purchased six video games for \$29.99 each and three DVD movies for \$22.99. What is the total amount of money you spent?

1.13 Functions on a Cartesian Plane

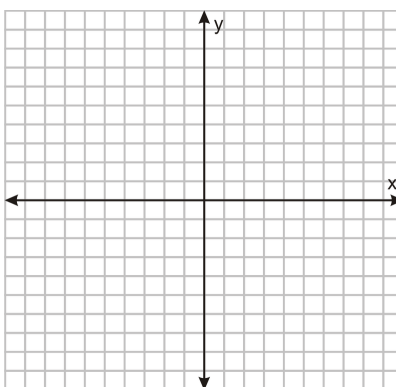
Here you'll learn how to plot points generated from a function on a Cartesian plane. You'll also learn how to generate a table of values and a function rule by looking at the graph of a function.

Suppose that you have a set of points, where the x -coordinates represent the number of months since you purchased a computer and the y -coordinates represent how much the computer is worth. Would you know how to plot these points on a Cartesian plane? How about if the situation were reversed and you had the plotted points? Could you come up with the coordinates of the points and the function rule that would generate these points? In this Concept, you'll learn the skills necessary to perform tasks like these.

Guidance

Functions as Graphs

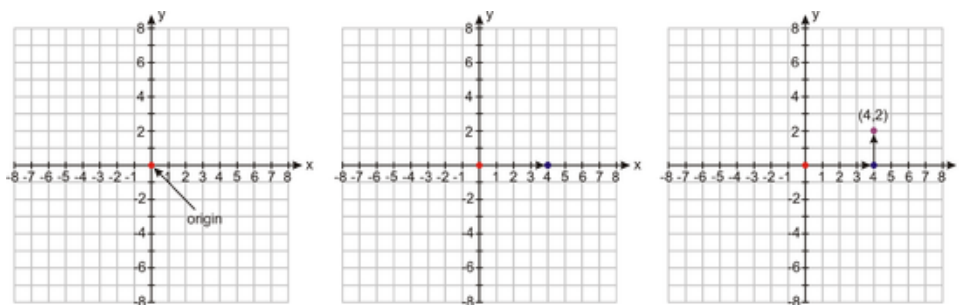
Once a table has been created for a function, the next step is to visualize the relationship by graphing the coordinates (*independent value, dependent value*). In previous courses, you have learned how to plot ordered pairs on a coordinate plane. The first coordinate represents the horizontal distance from the origin (the point where the axes intersect). The second coordinate represents the vertical distance from the origin.



To graph a coordinate point such as $(4,2)$ we start at the origin.

Because the first coordinate is positive four, we move 4 units to the right.

From this location, since the second coordinate is positive two, we move 2 units up.

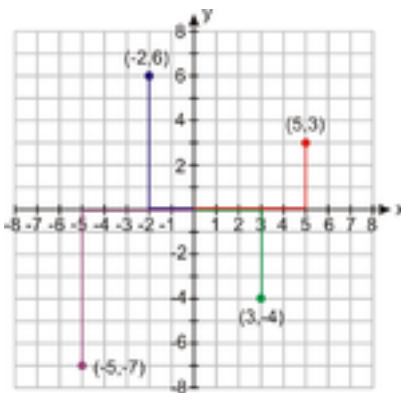


Example A

Plot the following coordinate points on the Cartesian plane.

- (a) $(5, 3)$
- (b) $(-2, 6)$
- (c) $(3, -4)$
- (d) $(-5, -7)$

Solution: We show all the coordinate points on the same plot.



Notice that:

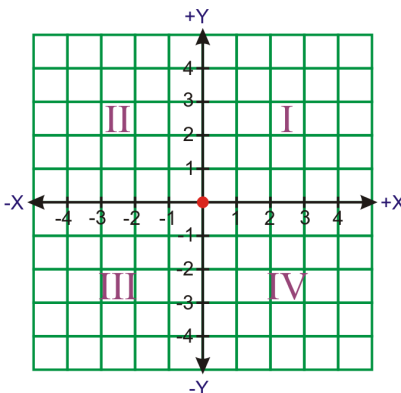
For a positive x value we move to the right.

For a negative x value we move to the left.

For a positive y value we move up.

For a negative y value we move down.

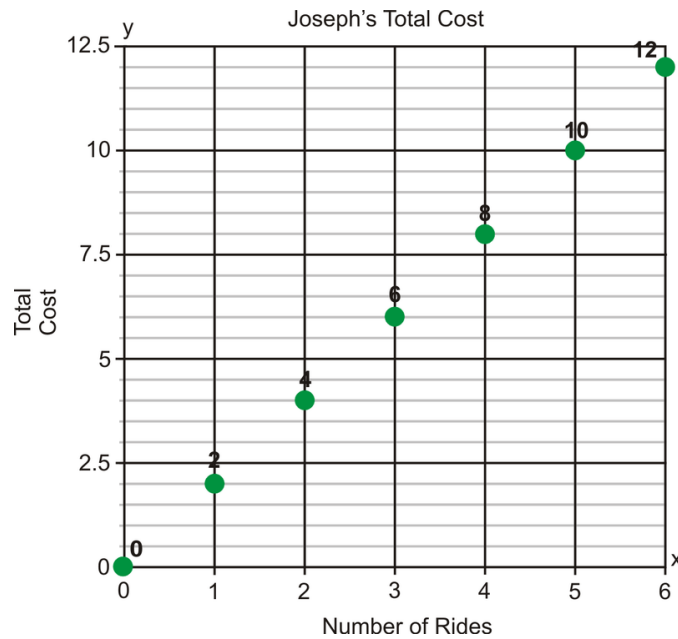
When referring to a coordinate plane, also called a Cartesian plane, the four sections are called **quadrants**. The first quadrant is the upper right section, the second quadrant is the upper left, the third quadrant is the lower left and the fourth quadrant is the lower right.

**Example B**

Suppose we wanted to visualize Joseph's total cost of riding at the amusement park. Using the table generated in a previous Concept, the graph can be constructed as (number of rides, total cost).

TABLE 1.5:

r	$J(r) = 2r$
0	$2(0) = 0$
1	$2(1) = 2$
2	$2(2) = 4$
3	$2(3) = 6$
4	$2(4) = 8$
5	$2(5) = 10$
6	$2(6) = 12$



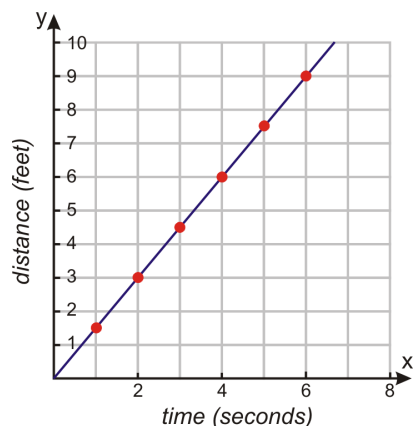
The green dots represent the combination of $(r, J(r))$. The dots are not connected because the domain of this function is all whole numbers. By connecting the points we are indicating that all values between the ordered pairs are also solutions to this function. Can Joseph ride $2\frac{1}{2}$ rides? Of course not! Therefore, we leave this situation as a **scatter plot**.

Writing a Function Rule Using a Graph

In this course, you will learn to recognize different kinds of functions. There will be specific methods that you can use for each type of function that will help you find the function rule. For now, we will look at some basic examples and find patterns that will help us figure out the relationship between the dependent and independent variables.

Example C

The graph below shows the distance that an inchworm covers over time. Find the function rule that shows how distance and time are related to each other.



Solution: Make a table of values of several coordinate points to identify a pattern.

Time	0	1	2	3	4	5	6
Distance	0	1.5	3	4.5	6	7.5	9

We can see that for every minute the distance increases by 1.5 feet. We can write the function rule as:

$$\text{Distance} = 1.5 \times \text{time}$$

The equation of the function is $f(x) = 1.5x$.

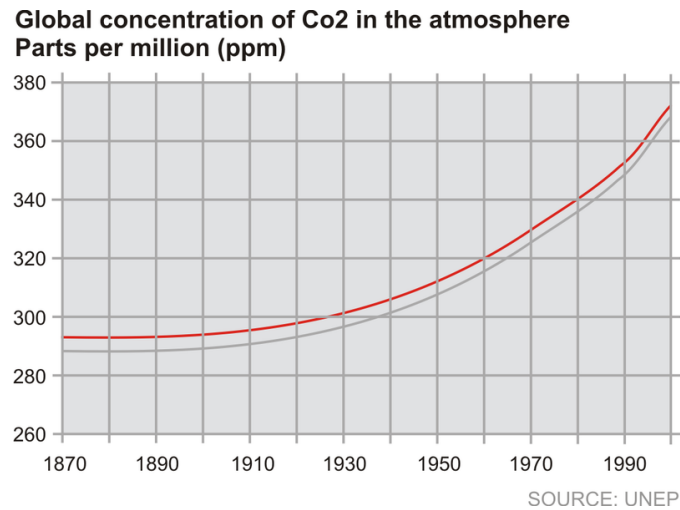
In many cases, you are given a graph and asked to determine the relationship between the independent and dependent variables. From a graph, you can read pairs of coordinate points that are on the curve of the function. The coordinate points give values of dependent and independent variables. These variables are related to each other by a rule. It is important we make sure this rule works for all the points on the curve. Finding a function rule for real-world data allows you to make predictions about what may happen.

Analyze the Graph of a Real-World Situation

Graphs are used to represent data in all areas of life. You can find graphs in newspapers, political campaigns, science journals, and business presentations.

Example D

Here is an example of a graph you might see reported in the news. Most mainstream scientists believe that increased emissions of greenhouse gases, particularly carbon dioxide, are contributing to the warming of the planet. The graph below illustrates how carbon dioxide levels have increased as the world has industrialized.



From this graph, we can find the concentration of carbon dioxide found in the atmosphere in different years.

1900 - 285 parts per million

1930 - 300 parts per million

1950 - 310 parts per million

1990 - 350 parts per million

In future lessons, you will learn how to approximate an equation to fit this data using a graphing calculator.

Video Review



MEDIA

Click image to the left for more content.



MEDIA

Click image to the left for more content.

Guided Practice

Graph the function that has the following table of values. Find the function rule.

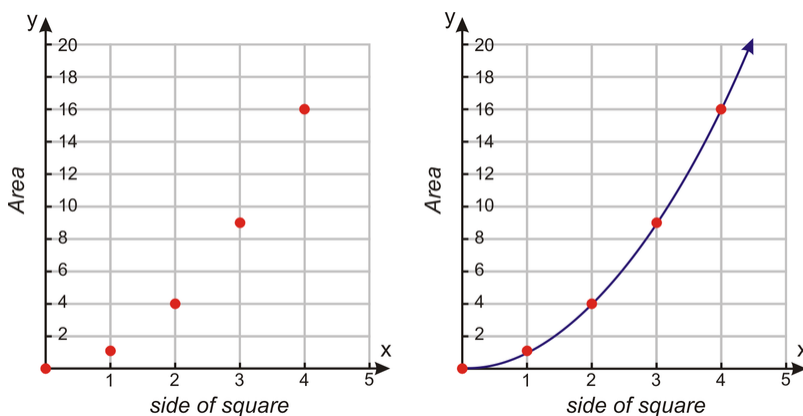
0	1	2	3	4
0	1	4	9	16

Solution:

The table gives us five sets of coordinate points:

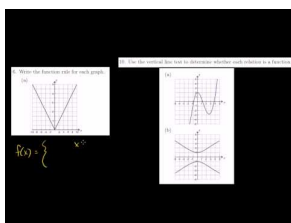
$(0, 0)$, $(1, 1)$, $(2, 4)$, $(3, 9)$, $(4, 16)$.

To graph the function, we plot all the coordinate points. We observe that the pattern is that the dependent values are the squares of the independent values. Because squaring numbers will always result in a positive output, and squaring a fraction results in a fraction, the domain of this function is all positive real numbers, or $x \geq 0$. This means the ordered pairs can be connected with a smooth curve. This curve will continue forever in the positive direction, shown by an arrow.



Practice

Sample explanations for some of the practice exercises below are available by viewing the following video. Note that there is not always a match between the number of the practice exercise in the video and the number of the practice exercise listed in the following exercise set. However, the practice exercise is the same in both. [CK-12 Basic Algebra: Functions as Graphs \(9:34\)](#)



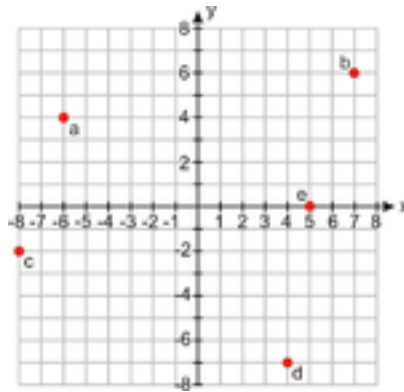
MEDIA

Click image to the left for more content.

In 1 – 5, plot the coordinate points on the Cartesian plane.

1. $(4, -4)$
2. $(2, 7)$
3. $(-3, -5)$
4. $(6, 3)$
5. $(-4, 3)$

Using the coordinate plane below, give the coordinates for a – e.



In 7 – 9, graph the relation on a coordinate plane. According to the situation, determine whether to connect the ordered pairs with a smooth curve or leave the graph as a scatter plot.

7.

<i>X</i>	-10	-5	0	5	10
<i>Y</i>	-3	-0.5	2	4.5	7

TABLE 1.6:

Side of cube (in inches)	Volume of cube (in inches ³)
0	0
1	1
2	8
3	27
4	64

TABLE 1.7:

Time (in hours)	Distance (in miles)
-2	-50
-1	25
0	0
1	5
2	50

In 10 – 12, graph the function.

10. Brandon is a member of a movie club. He pays a \$50 annual membership and \$8 per movie.

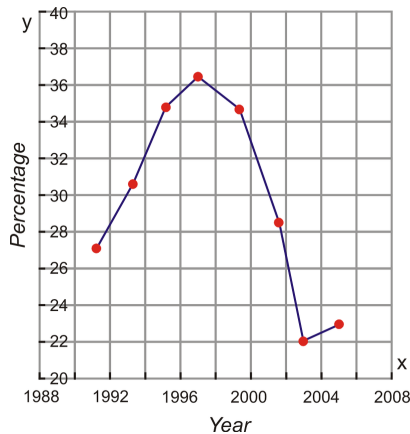
11. $f(x) = (x - 2)^2$

12. $f(x) = 3.2^x$

13. The students at a local high school took the Youth Risk Behavior Survey. The graph below shows the percentage of high school students who reported that they were current smokers. A person qualifies as a current smoker if he/she has smoked one or more cigarettes in the past 30 days. What percentage of high school students were current smokers in the following years?

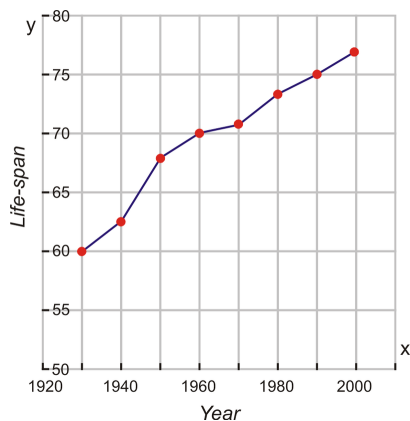
(a) 1991

- (b) 1996
- (c) 2004
- (d) 2005



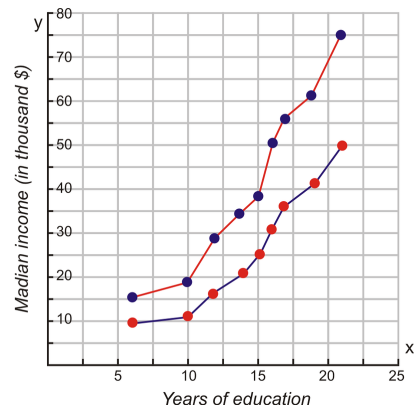
14. The graph below shows the average lifespan of people based on the year in which they were born. This information comes from the National Vital Statistics Report from the Center for Disease Control. What is the average lifespan of a person born in the following years?

- (a) 1940
- (b) 1955
- (c) 1980
- (d) 1995



15. The graph below shows the median income of an individual based on his/her number of years of education. The top curve shows the median income for males and the bottom curve shows the median income for females (Source: US Census, 2003). What is the median income of a male who has the following years of education?

- (a) 10 years of education
 - (b) 17 years of education
- What is the median income of a female who has the same years of education?
- (c) 10 years of education
 - (d) 17 years of education



1.14 Vertical Line Test

Here you'll learn how to use techniques such as a flow chart or the vertical line test to decide if a relation is a function.

Suppose each student in your class were represented by a point, with the x -coordinate being the student's year in school and the y -coordinate being the student's age. Would the set of points represent a function? How would you know? What if you graphed the set of points on a Cartesian plane? Is there any sort of test you could use to find out if you had a function? Upon finishing this Concept, you'll be able to answer these questions and determine whether or not any relation is a function.

Guidance

Determining Whether a Relation Is a Function

You saw that a function is a **relation** between the independent and the dependent variables. It is a rule that uses the values of the independent variable to give the values of the dependent variable. A function rule can be expressed in words, as an equation, as a table of values, and as a graph. All representations are useful and necessary in understanding the relation between the variables.

Definition: A **relation** is a set of ordered pairs.

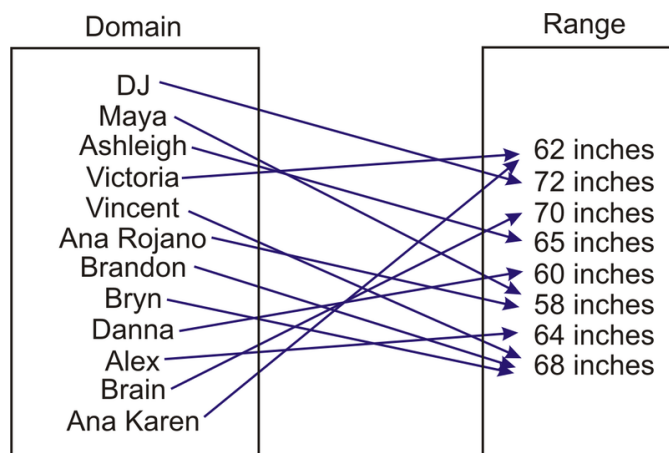
Mathematically, a function is a special kind of relation.

Definition: A **function** is a relation between two variables such that the independent value has EXACTLY one dependent value.

This usually means that each x -value has only one y -value assigned to it. But, not all functions involve x and y .

Example A

One way to determine whether a relation is a function is to construct a **flow chart** linking each dependent value to its matching independent value. Consider the relation that shows the heights of all students in a class. The domain is the set of people in the class and the range is the set of heights. Each person in the class cannot be more than one height at the same time. This relation is a function because for each person there is exactly one height that belongs to him or her.



Notice that in a function, a value in the range can belong to more than one element in the domain, so more than one person in the class can have the same height. The opposite is not possible; that is, one person cannot have multiple heights.

Example B

Determine if the relation is a function.

a) $(1, 3), (-1, -2), (3, 5), (2, 5), (3, 4)$

b) $(-3, 20), (-5, 25), (-1, 5), (7, 12), (9, 2)$

Solution:

a) To determine whether this relation is a function, we must use the definition of a function. Each x -coordinate can have ONLY one y -coordinate. However, since the x -coordinate of 3 has two y -coordinates, 4 and 5, this relation is NOT a function.

b) Applying the definition of a function, each x -coordinate has only one y -coordinate. Therefore, this relation is a function.

Determining Whether a Graph Is a Function

Suppose all you are given is the graph of the relation. How can you determine whether it is a function?

You could organize the ordered pairs into a table or a flow chart, similar to the student and height situation. This could be a lengthy process, but it is one possible way. A second way is to use the **vertical line test**. Applying this test gives a quick and effective visual to decide if the graph is a function.

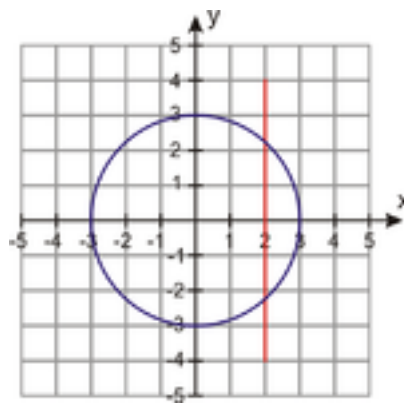
Theorem:

Part A) A relation is a function if there are no vertical lines that intersect the graphed relation in more than one point.

Part B) If a graphed relation does not intersect a vertical line in more than one point, then that relation is a function.

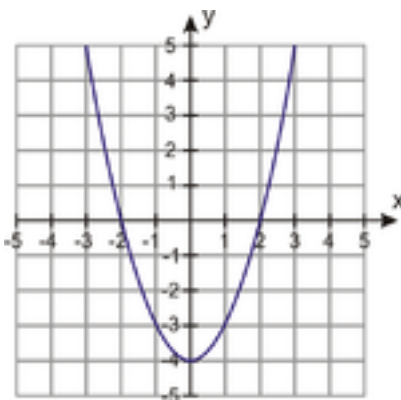
Example C

Is this graphed relation a function?



By drawing a vertical line (the red line) through the graph, we can see that the vertical line intersects the circle more than once. Therefore, this graph is NOT a function.

Here is a second example:



No matter where a vertical line is drawn through the graph, there will be only one intersection. Therefore, this graph is a function.

Video Review



MEDIA

Click image to the left for more content.

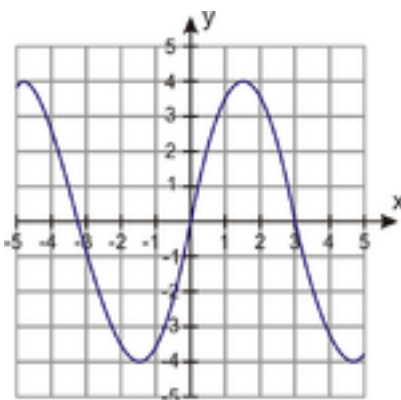


MEDIA

Click image to the left for more content.

Guided Practice

Determine if the graphed relation is a function.



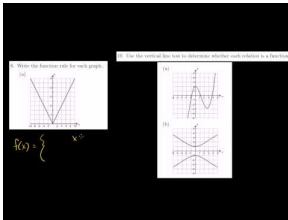
Solution:

Imagine moving a vertical line across the plane. Do you see anywhere that this vertical line would intersect the graph at more than one place?

There is no place on this graph where a vertical line would intersect the graph at more than one place. Using the vertical line test, we can conclude the relation is a function.

Practice

Sample explanations for some of the practice exercises below are available by viewing the following video. Note that there is not always a match between the number of the practice exercise in the video and the number of the practice exercise listed in the following exercise set. However, the practice exercise is the same in both. [CK-12 Basic Algebra: Functions as Graphs \(9:34\)](#)



MEDIA

Click image to the left for more content.

In 1 – 4, determine if the relation is a function.

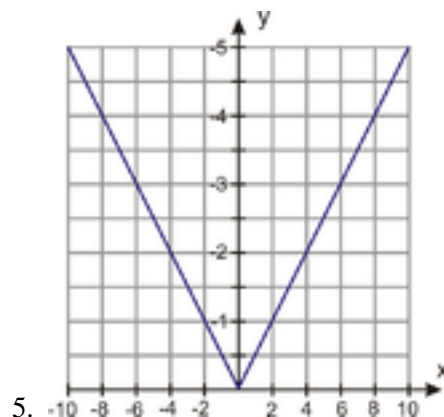
- $(1, 7), (2, 7), (3, 8), (4, 8), (5, 9)$
- $(1, 1), (1, -1), (4, 2), (4, -2), (9, 3), (9, -3)$
-

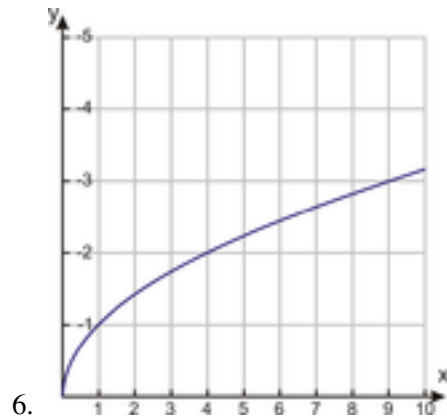
Age	20	25	25	30	35
Number of jobs by that age	3	4	7	4	2

4.

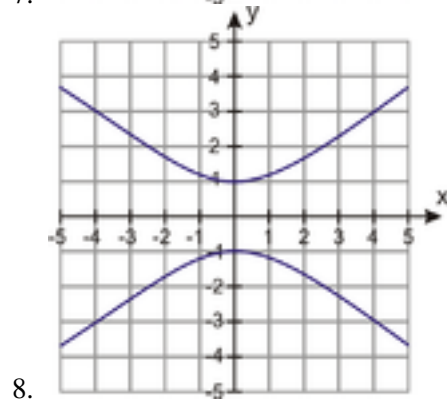
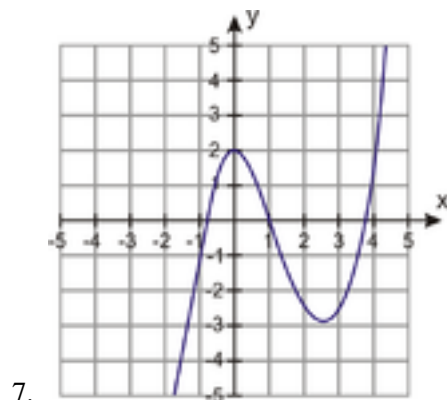
x	-4	-3	-2	-1	0
y	16	9	4	1	0

In 5 and 6, write a function rule for the graphed relation.





In 7-8, determine whether the graphed relation is a function.



Mixed Review

9. A theme park charges \$12 entry to visitors. Find the money taken if 1296 people visit the park.
10. A group of students are in a room. After 25 students leave, it is found that $\frac{2}{3}$ of the original group are left in the room. How many students were in the room at the start?
11. Evaluate the expression $\frac{x^2+9}{y+2}$ when $y = 3$ and $x = 4$.
12. The amount of rubber needed to make a playground ball is found by the formula $A = 4\pi r^2$, where $r = \text{radius}$. Determine the amount of material needed to make a ball with a 7-inch radius.

1.15 Problem-Solving Models

Here you'll be exposed to many different methods that you can use to solve a problem and the way that these methods should fit into your overall problem-solving plan.

Suppose you're taking a standardized test to get into college and you encounter a type of problem that you've never seen before. What tools could you use to help solve the problem? Is there anything you should do before trying to solve the problem? Is there anything you should do afterwards? In this Concept, you'll be presented with a step-by-step guide to problem solving and some strategies that you can use to solve any problem.

Guidance

A Problem-Solving Plan

Much of mathematics applies to real-world situations. To think critically and to problem solve are mathematical abilities. Although these capabilities may be the most challenging, they are also the most rewarding.

To be successful in applying mathematics in real-life situations, you must have a “toolbox” of strategies to assist you. Many algebra lessons are devoted to filling this toolbox so you become a better problem solver and can tackle mathematics in the real world.

Step #1: Read and Understand the Given Problem

Every problem you encounter gives you clues needed to solve it successfully. Here is a checklist you can use to help you understand the problem.

✓ Read the problem carefully. Make sure you read all the sentences. Many mistakes have been made by failing to fully read the situation.

✓ Underline or highlight key words. These include mathematical operations such as *sum*, *difference*, and *product*, and mathematical verbs such as *equal*, *more than*, *less than*, and *is*. Key words also include the nouns the situation is describing, such as *time*, *distance*, *people*, etc.

Visit the Wylie Intermediate Website (http://wylie.region14.net/webs/shamilton/math_clue_words.htm) for more clue words.

✓ Ask yourself if you have seen a problem like this before. Even though the nouns and verbs may be different, the general situation may be similar to something else you've seen.

✓ What are you being asked to do? What is the question you are supposed to answer?

✓ What facts are you given? These typically include numbers or other pieces of information.

Once you have discovered what the problem is about, the next step is to declare what variables will represent the nouns in the problem. Remember to use letters that make sense!

Step #2: Make a Plan to Solve the Problem

The next step in problem-solving is to **make a plan** or **develop a strategy**. How can the information you know assist you in figuring out the unknown quantities?

Here are some common strategies that you will learn.



- Drawing a diagram
- Making a table
- Looking for a pattern
- Using guess and check
- Working backwards
- Using a formula
- Reading and making graphs
- Writing equations
- Using linear models
- Using dimensional analysis
- Using the right type of function for the situation

In most problems, you will use a combination of strategies. For example, drawing a diagram and looking for patterns are good strategies for most problems. Also, making a table and drawing a graph are often used together. The “writing an equation” strategy is the one you will work with the most frequently in your study of algebra.

Step #3: Solve the Problem and Check the Results

Once you develop a plan, you can use it to **solve the problem**.

The last step in solving any problem should always be to **check and interpret** the answer. Here are some questions to help you to do that.

- Does the answer make sense?
- If you substitute the solution into the original problem, does it make the sentence true?
- Can you use another method to arrive at the same answer?

Step #4: Compare Alternative Approaches

Sometimes a certain problem is best solved by using a specific method. Most of the time, however, it can be solved by using several different strategies. When you are familiar with all of the problem-solving strategies, it is up to you to choose the methods that you are most comfortable with and that make sense to you. In this book, we will often use more than one method to solve a problem. This way we can demonstrate the strengths and weaknesses of different strategies when applied to different types of problems.

Regardless of the strategy you are using, you should always implement the problem-solving plan when you are solving word problems. Here is a summary of the problem-solving plan.

Step 1: Understand the problem.

Step 2: Devise a plan – Translate. Come up with a way to solve the problem. Set up an equation, draw a diagram, make a chart, or construct a table as a start to begin your problem-solving plan.

Step 3: Carry out the plan – Solve.

Step 4: Check and Interpret: Check to see if you have used all your information. Then look to see if the answer makes sense.

Solve Real-World Problems Using a Plan

Example A

Jeff is 10 years old. His younger brother, Ben, is 4 years old. How old will Jeff be when he is twice as old as Ben?

Solution: Begin by understanding the problem. Highlight the key words.

Jeff is 10 years old. His younger brother, Ben, is 4 years old. How old will Jeff be when he is twice as old as Ben?

The question we need to answer is. “What is Jeff’s age when he is twice as old as Ben?”

You could guess and check, use a formula, make a table, or look for a pattern.

The key is “twice as old.” This clue means two times, or double Ben’s age. Begin by doubling possible ages. Let’s look for a pattern.

$4 \times 2 = 8$. Jeff is already older than 8.

$5 \times 2 = 10$. This doesn’t make sense because Jeff is already 10.

$6 \times 2 = 12$. In two years, Jeff will be 12 and Ben will be 6. Jeff will be twice as old.

Jeff will be 12 years old when he is twice as old as Ben.

Example B

Another way to solve the problem above is to write an algebraic equation.

Solution:

Let x be the age of Ben. We want to know when Jeff will be twice as old as Ben, which can be expressed as $2x$. We also know that since Jeff is 10 and Ben is 4, that Jeff is 6 years older than Ben. Jeff’s age can be expressed as $x + 6$. We want to know when Jeff’s age will be twice Ben’s age, so putting these together, we get

$$2x = x + 6.$$

What value of x would satisfy this equation? Solving this equation, we can find that $x = 6$. But $x = 6$ is Ben’s age, and Jeff is 6 years older so $x + 6 = 6 + 6 = 12$.

When Jeff is 12, he will be twice Ben’s age, since 12 is twice the age of 6.

Example C

Matthew is planning to harvest his corn crop this fall. The field has 660 rows of corn with 300 ears per row. Matthew estimates his crew will have the crop harvested in 20 hours. How many ears of corn will his crew harvest per hour?



Solution: Begin by highlighting the key information.

Matthew is planning to harvest his corn crop this fall. The field has **660 rows** of corn with **300 ears per row**. Matthew estimates his crew will have the **crop harvested in 20 hours**. **How many ears of corn will his crew harvest per hour?**

You could draw a picture (it may take a while), write an equation, look for a pattern, or make a table. Let's try to use reasoning.

We need to figure out how many ears of corn are in the field: $660(300) = 198,000$. There are 198,000 ears in the field. It will take 20 hours to harvest the entire field, so we need to divide 198,000 by 20 to get the number of ears picked per hour.

$$\frac{198,000}{20} = 9,900$$

The crew can harvest 9,900 ears per hour.

Video Review



MEDIA

Click image to the left for more content.



MEDIA

Click image to the left for more content.

Guided Practice

The sum of angles in a triangle is 180 degrees. If the second angle is twice the size of the first angle and the third angle is three times the size of the first angle, what are the measures of the angles in the triangle?

Solution:

Step 1 is to read and determine what the problem is asking us. After reading, we can see that we need to determine the measure of each angle in the triangle. We will use the information given to figure this out.

Step 2 tells us to devise a plan. Since we are given a lot of information about how the different pieces are related, it looks like we can write some algebraic expressions and equations in order to solve this problem. Let a be the measure of the first angle. The second angle is twice the first, so think about how you can express that algebraically. The correct expression is $2a$. Also, the third angle is three times the size of the first so that would be $3a$. Now the other piece of information given to us is that all three angles must add up to 180 degrees. From this we will write an equation, adding together the expressions of the three angles and setting them equal to 180.

$$a + 2a + 3a = 180$$

Step 3 is to solve the problem. Simplifying this we get

$$6a = 180$$

$$a = 30$$

Now we know that the first angle is 30 degrees, which means that the second angle is 60 degrees and the third is 90 degrees. Let's check whether these three angles add up to 180 degrees.

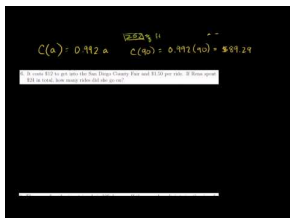
$$30 + 60 + 90 = 180$$

The three angles do add up to 180 degrees.

Step 4 is to consider other possible methods. We could have used guess and check and possibly found the correct answer. However, there are many choices we could have made. What would have been our first guess? There are so many possibilities for where to start with guess and check that solving this problem algebraically was the simplest way.

Practice

Sample explanations for some of the practice exercises below are available by viewing the following video. Note that there is not always a match between the number of the practice exercise in the video and the number of the practice exercise listed in the following exercise set. However, the practice exercise is the same in both. [CK-12 Basic Algebra: Word Problem-Solving Plan 1 \(10:12\)](#)



MEDIA

Click image to the left for more content.

1. What are the four steps to solving a problem?
2. Name three strategies you can use to help make a plan. Which one(s) are you most familiar with already?
3. Which types of strategies work well together? Why?
4. Suppose Matthew's crew takes 36 hours to harvest the field. How many ears per hour will they harvest?
5. Why is it difficult to solve Ben and Jeff's age problem by drawing a diagram?

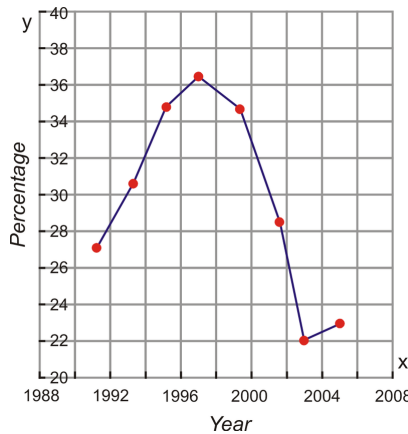
6. How do you check a solution to a problem? What is the purpose of checking the solution?
7. There were 12 people on a jury, with four more women than men. How many women were there?
8. A rope 14 feet long is cut into two pieces. One piece is 2.25 feet longer than the other. What are the lengths of the two pieces?
9. A sweatshirt costs \$35. Find the total cost if the sales tax is 7.75%.
10. This year you got a 5% raise. If your new salary is \$45,000, what was your salary before the raise?
11. It costs \$250 to carpet a room that is $14 \text{ ft} \times 18 \text{ ft}$. How much does it cost to carpet a room that is $9 \text{ ft} \times 10 \text{ ft}$?
12. A department store has a 15% discount for employees. Suppose an employee has a coupon worth \$10 off any item and she wants to buy a \$65 purse. What is the final cost of the purse if the employee discount is applied before the coupon is subtracted?
13. To host a dance at a hotel, you must pay \$250 plus \$20 per guest. How much money would you have to pay for 25 guests?
14. It costs \$12 to get into the San Diego County Fair and \$1.50 per ride. If Rena spent \$24 in total, how many rides did she go on?
15. An ice cream shop sells a small cone for \$2.92, a medium cone for \$3.50, and a large cone for \$4.25. Last Saturday, the shop sold 22 small cones, 26 medium cones, and 15 large cones. How much money did the store take in?

Mixed Review

16. Choose an appropriate variable for the following situation: *It takes Lily 45 minutes to bathe and groom a dog. How many dogs can she groom in an 9-hour day?*
17. Translate the following into an algebraic inequality: *Fourteen less than twice a number is greater than or equal to 16.*
18. Write the pattern of the table below in words and using an algebraic equation.

x	-2	-1	0	1
y	-8	-4	0	4

20. Check that $m = 4$ is a solution to $3y - 11 \geq -3$.
21. What is the domain and range of the graph shown?



1.16 Trends in Data

Here you'll learn how to answer questions about data by looking for trends in the data and by viewing the data in tabular form.

Suppose that everyday you take the same number of vitamins so that the number of vitamins remaining in the bottle always decreases by the same amount. If you know how many vitamins were in the bottle to begin with, do you think you can determine the number of vitamins in the bottle after a certain number of days? Would it be easier if you looked at the data in a table, with the number of days in one column and the number of vitamins remaining in the bottle in another column? In this Concept, you'll look for patterns in data so that you can solve problems such as this.

Guidance

Problem-Solving Strategies: Make a Table; Look for a Pattern

This lesson focuses on two of the strategies introduced previously: making a table and looking for a pattern. These are the most common strategies you have used before algebra. Let's review the four-step problem-solving plan from a previous Concept.

Step 1: Understand the problem.

Step 2: Devise a plan – Translate. Come up with a way to solve the problem. Set up an equation, draw a diagram, make a chart, or construct a table as a start to begin your problem-solving plan.

Step 3: Carry out the plan – Solve.

Step 4: Check and Interpret: Check to see if you used all your information. Then look to see if the answer makes sense.

Using a Table to Solve a Problem

When a problem has data that needs to be organized, a table is a highly effective problem-solving strategy. A table is also helpful when the problem asks you to record a large amount of information. Patterns and numerical relationships are easier to see when data are organized in a table.

Example A

Josie takes up jogging. In the first week she jogs for 10 minutes per day, and in the second week she jogs for 12 minutes per day. Each week, she wants to increase her jogging time by 2 minutes per day. If she jogs six days per week each week, what will be her total jogging time in the sixth week?

Solution: Organize the information in a table

TABLE 1.8:

Week 1	Week 2	Week 3	Week 4
10 minutes	12 minutes	14 minutes	16 minutes
60 min/week	72 min/week	84 min/week	96 min/week

We can see the pattern that the number of minutes is increasing by 12 each week. Continuing this pattern, Josie will run 120 minutes in the sixth week.

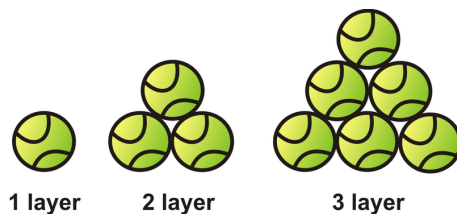
Don't forget to check the solution! The pattern starts at 60 and adds 12 each week after the first week. The equation to represent this situation is $t = 60 + 12(w - 1)$. By substituting 6 for the variable of w , the equation becomes $t = 60 + 12(6 - 1) = 60 + 60 = 120$

Solve a Problem by Looking for a Pattern

Some situations have a readily apparent pattern, which means that the pattern is easy to see. In this case, you may not need to organize the information into a table. Instead, you can use the pattern to arrive at your solution.

Example B

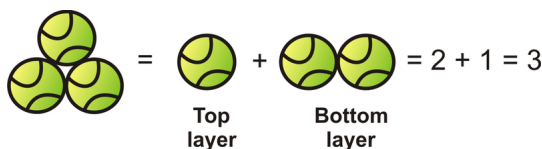
You arrange tennis balls in triangular shapes as shown. How many balls will there be in a triangle that has 8 layers?




One layer: It is simple to see that a triangle with one layer has only one ball.



Two layers: For a triangle with two layers we add the balls from the top layer to the balls of the bottom layer. It is useful to make a sketch of the different layers in the triangle.



Three layers: We add the balls from the top triangle to the balls from the bottom layer.



We can fill the first three rows of the table.

1	2	3	4
1	3	6	6 + 4 = 10

To find the number of tennis balls in 8 layers, continue the pattern.

$$\begin{array}{c} 5 \\ 10 + 5 = 15 \end{array}$$

$$\begin{array}{c} 6 \\ 15 + 6 = 21 \end{array}$$

$$\begin{array}{c} 7 \\ 21 + 7 = 28 \end{array}$$

$$\begin{array}{c} 8 \\ 28 + 8 = 36 \end{array}$$

There will be 36 tennis balls in the 8 layers.

Check: Each layer of the triangle has one more ball than the previous one. In a triangle with 8 layers, each layer has the same number of balls as its position. When we add these we get:

$$1 + 2 + 3 + 4 + 5 + 6 + 7 + 8 = 36 \text{ balls}$$

The answer checks out.

Comparing Alternative Approaches to Solving Problems

In this section, we will compare the methods of “Making a Table” and “Looking for a Pattern” by using each method in turn to solve a problem.

Example C

Andrew cashes a \$180 check and wants the money in \$10 and \$20 bills. The bank teller gives him 12 bills. How many of each kind of bill does he receive?

Solution: Method 1: Making a Table

Tens	0	2	4	6	8	10	12	14	16	18
Twenties	9	8	7	6	5	4	3	2	1	0

The combination that has a sum of 12 is six \$10 bills and six \$20 bills.

Method 2: Using a Pattern

The pattern is that for every pair of \$10 bills, the number of \$20 bills is reduced by one. Begin with the most number of \$20 bills. For every \$20 bill lost, add two \$10 bills.

$$6(\$10) + 6(\$20) = \$180$$

Check: Six \$10 bills and six \$20 bills = $6(\$10) + 6(\$20) = \$60 + \$120 = \$180$.

Video Review



MEDIA

Click image to the left for more content.



MEDIA

Click image to the left for more content.

Guided Practice

Students are going to march in a homecoming parade. There will be one kindergartener, two first-graders, three second-graders, and so on through 12th grade. How many students will be walking in the homecoming parade?

Could you make a table? Absolutely. Could you look for a pattern? Absolutely.

Solution 1: Make a table:

K	1	2	3	4	5	6	7	8	9	10	11	12
1	2	3	4	5	6	7	8	9	10	11	12	13

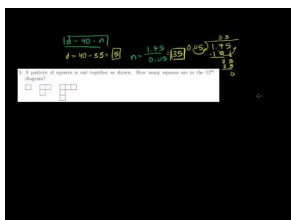
The solution is the sum of all the numbers, 91. There will be 91 students walking in the homecoming parade.

Solution 2: Look for a pattern.

The pattern is that the number of students is one more than their grade level. Therefore, the solution is the sum of the numbers from 1 (kindergarten) through 13 (12th grade). The solution is 91.

Practice

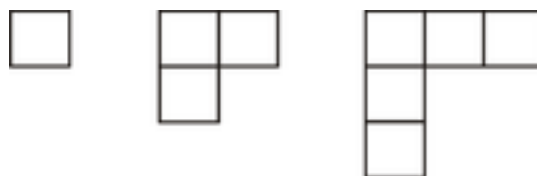
Sample explanations for some of the practice exercises below are available by viewing the following video. Note that there is not always a match between the number of the practice exercise in the video and the number of the practice exercise listed in the following exercise set. However, the practice exercise is the same in both. [CK-12 Basic Algebra: Word Problem-Solving Strategies \(12:51\)](#)



MEDIA

Click image to the left for more content.

1. In Example A, what will be Josie's total jogging time in the eighth week?
2. Britt has \$2.25 in nickels and dimes. If she has 40 coins in total how many of each coin does she have?
3. A pattern of squares is placed together as shown. How many squares are in the 12th diagram?



4. Oswald is trying to cut down on drinking coffee. His goal is to cut down to 6 cups per week. If he starts with 24 cups the first week, cuts down to 21 cups the second week, and drops to 18 cups the third week, how many weeks will it take him to reach his goal?
5. Taylor checked out a book from the library and it is now 5 days late. The late fee is 10 cents per day. How much is the fine?
6. How many hours will a car traveling at 75 miles per hour take to catch up to a car traveling at 55 miles per hour if the slower car starts two hours before the faster car?
7. Grace starts biking at 12 miles per hour. One hour later, Dan starts biking at 15 miles per hour, following the same route. How long would it take him to catch up with Grace?

8. Lemuel wants to enclose a rectangular plot of land with a fence. He has 24 feet of fencing. What is the largest possible area that he could enclose with the fence?

Mixed Review

9. Determine if the relation is a function: $\{(2, 6), (-9, 0), (7, 7), (3, 5), (5, 3)\}$.
10. Roy works construction during the summer and earns \$78 per job. Create a table relating the number of jobs he could work, j , and the total amount of money he can earn, m .
11. Graph the following order pairs: $(4, 4)$; $(-5, 6)$, $(-1, -1)$, $(-7, -9)$, $(2, -5)$.
12. Evaluate the following expression: $-4(4z - x + 5)$; use $x = -10$ and $z = -8$.
13. The area of a circle is given by the formula $A = \pi r^2$. Determine the area of a circle with radius 6 mm.
14. Louie bought 9 packs of gum at \$1.19 each. How much money did he spend?
15. Write the following without the multiplication symbol: $16 \times \frac{1}{8}c$.

Summary

This chapter first deals with expressions and how to evaluate them by using the correct order of operations. Tips on using a calculator are also given. It then builds on this knowledge by moving on to talk about equations and inequalities and the methods used to solve them. Next, functions are discussed in detail, with instruction given on using the proper notation, determining a function's domain and range, and graphing a function. How to determine whether or not a relation is a function is also covered. Finally, the chapter concludes by highlighting some general problem-solving strategies.

Expressions, Equations, and Functions Review

Define the following words:

1. Domain
2. Range
3. Solution
4. Evaluate
5. Substitute
6. Operation
7. Variable
8. Algebraic expression
9. Equation
10. Algebraic inequality
11. Function
12. Independent variable

Evaluate the following expressions.

13. $3y(7 - (z - y))$; use $y = -7$ and $z = 2$
14. $\frac{m+3n-p}{4}$; use $m = 9$, $n = 7$, and $p = 2$
15. $|p| - \left(\frac{n}{2}\right)^3$; use $n = 2$ and $p = 3$
16. $|v - 21|$; use $v = -70$

Choose an appropriate variable to describe the situation.

17. The number of candies you can eat in a day
18. The number of tomatoes a plant can grow
19. The number of cats at a humane society
20. The amount of snow on the ground
21. The number of water skiers on a lake
22. The number of geese migrating south
23. The number of people at a trade show

The surface area of a sphere is found by the formula $A = 4\pi r^2$. Determine the surface area for the following radii/diameters.

24. *radius = 10 inches*
25. *radius = 2.4 cm*
26. *diameter = 19 meters*
27. *radius = 0.98 mm*
28. *diameter = 5.5 inches*

Insert parentheses to make a true equation.

29. $1 + 2 \cdot 3 + 4 = 15$
30. $5 \cdot 3 - 2 + 6 = 35$
31. $3 + 1 \cdot 7 - 2^2 \cdot 9 - 7 = 24$
32. $4 + 6 \cdot 2 \cdot 5 - 3 = 40$
33. $3^2 + 2 \cdot 7 - 4 = 33$

Translate the following into an algebraic expression, equation, or inequality.

34. Thirty-seven more than a number is 612.
35. The product of u and -7 equals 343.
36. The quotient of k and 18
37. Eleven less than a number is 43.
38. A number divided by -9 is -78 .
39. The difference between 8 and h is 25.
40. The product of 8, -2 , and r
41. Four plus m is less than or equal to 19.
42. Six is less than c .
43. Forty-two less than y is greater than 57.

Write the pattern shown in the table with words and with an algebraic equation.

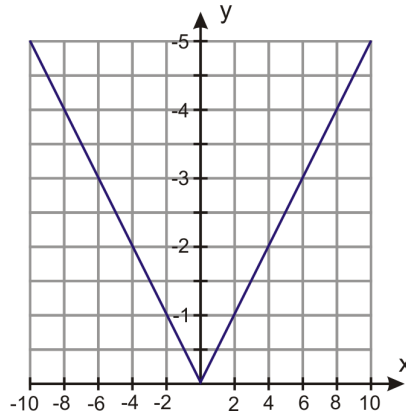
44.

Movies watched	0	1	2	3	4	5
Total time	0	1.5	3	4.5	6	7.5

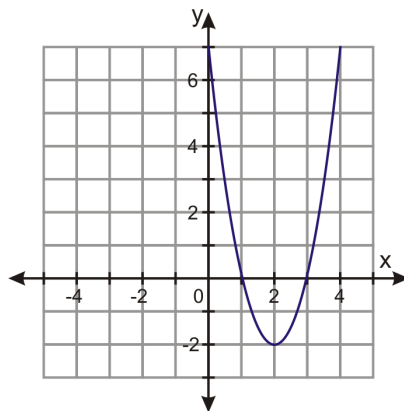
45. A case of donuts is sold by the half-dozen. Suppose 168 people purchase cases of donuts. How many individual donuts have been sold?
46. Write an inequality to represent the situation: *Peter's Lawn Mowing Service charges \$10 per mowing job and \$35 per landscaping job. Peter earns at least \$8,600 each summer.*

Check that the given number is a solution to the given equation or inequality.

47. $t = 0.9$, $54 \leq 7(9t + 5)$
48. $f = 2$; $f + 2 + 5f = 14$
49. $p = -6$; $4p - 5p \leq 5$
50. Logan has a cell phone service that charges \$18 dollars per month and \$0.05 per text message. Represent Logan's monthly cost as a function of the number of texts he sends per month.
51. An online video club charges \$14.99 per month. Represent the total cost of the video club as a function of the number of months that someone has been a member.
52. What is the domain and range for the following graph?



53. Henry invested \$5,100 in a vending machine service. Each machine pays him \$128. How many machines does Henry need to install to break even?
54. Is the following relation a function?

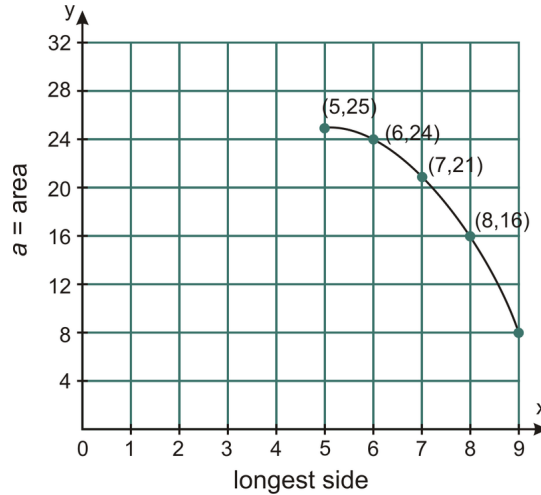


Solve the following questions using the 4-step problem-solving plan.

55. Together, the Raccoons and the Pelicans won 38 games. If the Raccoons won 13 games, how many games did the Pelicans win?
56. Elmville has 250 fewer people than Maplewood. Elmville has 900 people. How many people live in Maplewood?
57. The cell phone Bonus Plan gives you 4 times as many minutes as the Basic Plan. The Bonus Plan gives you a total of 1200 minutes. How many minutes does the Basic Plan give?
58. Margarite exercised for 24 minutes each day for a week. How many total minutes did Margarite exercise?
59. The downtown theater costs \$1.50 less than the mall theater. Each ticket at the downtown theater costs \$8. How much do tickets at the mall theater cost?
60. Mega Tape has 75 more feet of tape than everyday tape. A roll of Mega Tape has 225 feet of tape. How many feet does everyday tape have?
61. In bowling DeWayne got 3.5 times as many strikes as Junior. If DeWayne got 28 strikes, how many strikes did Junior get?

Expressions, Equations, and Functions Test

- Write the following as an algebraic equation and determine its value. *On the stock market, Global First hit a price of \$255 on Wednesday. This was \$59 greater than the price on Tuesday. What was the price on Tuesday?*
- The oak tree is 40 feet taller than the maple. Write an expression that represents the height of the oak.
- Graph the following ordered pairs: (1, 2), (2, 3), (3, 4), (4, 5) (5, 6), (6, 7).
- Determine the domain and range of the following function:



- Is the following relation a function? Explain your answer. $\{(3,2), (3,4), (5,6), (7,8)\}$
- Evaluate the expression $(5bc) - a$ if $a = 2$, $b = 3$, and $c = 4$.
- Simplify: $3[36 \div (3 + 6)]$.
- Translate the following into an algebraic equation and find the value of the variable: *One-eighth of a pizza costs \$1.09. How much was the entire pizza?*
- Use the 4-step problem-solving method to determine the solution to the following: *The freshman class has 17 more girls than boys. There are 561 freshmen. How many are girls?*
- Underline the math verb in this sentence: 8 divided by y is 48.
- Jesse packs 16 boxes per hour. Complete the table to represent this situation.

Hours	0	2	4	5	8	10	12	14
Boxes								

- A group of students are in a room. After 18 leave, it is found that $\frac{7}{8}$ of the original number of students remain. How many students were in the room in the beginning?
- What are the domain and range of the following relation: $\{(2,3), (4,5), (6,7), (-2,-3), (-3,-4)\}$?
- Write a function rule for the following table:

Time in hours, x	0	1	2	3	4
Distance in miles, y	0	60	120	180	240

- Determine if the given number is a solution to the following inequality: $\frac{6-y}{y} > -8$; $y = 6$

Texas Instruments Resources

In the CK-12 Texas Instruments Algebra I FlexBook, there are graphing calculator activities designed to supplement the objectives for some of the lessons in this chapter. See <http://www.ck12.org/flexr/chapter/9611>.

Properties of Real Numbers

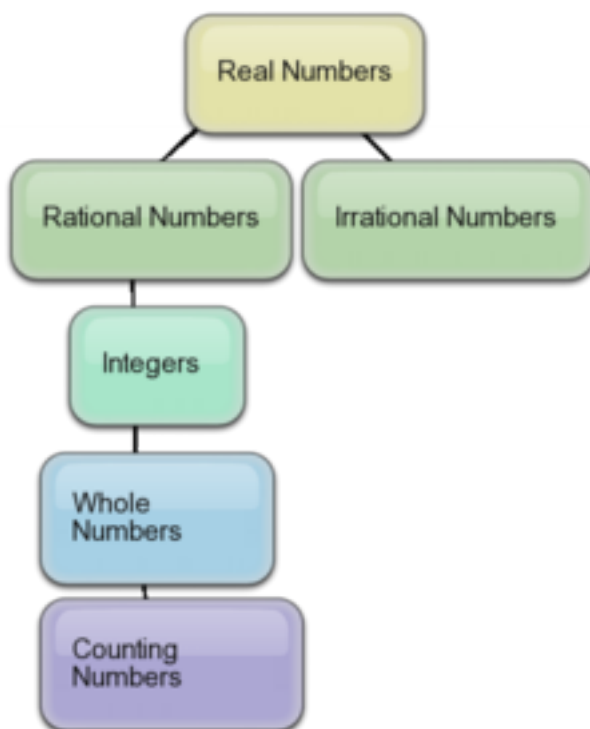
Chapter Outline

- 2.1 PROPERTIES OF RATIONAL NUMBERS
 - 2.2 ADDITIVE INVERSES AND ABSOLUTE VALUES
 - 2.3 ADDITION OF INTEGERS
 - 2.4 ADDITION OF RATIONAL NUMBERS
 - 2.5 SUBTRACTION OF RATIONAL NUMBERS
 - 2.6 MULTIPLICATION OF RATIONAL NUMBERS
 - 2.7 MIXED NUMBERS IN APPLICATIONS
 - 2.8 EXPRESSIONS AND THE DISTRIBUTIVE PROPERTY
 - 2.9 WHEN TO USE THE DISTRIBUTIVE PROPERTY
 - 2.10 DIVISION OF RATIONAL NUMBERS
 - 2.11 APPLICATIONS OF RECIPROCAL
 - 2.12 SQUARE ROOTS AND IRRATIONAL NUMBERS
 - 2.13 ORDER OF REAL NUMBERS
 - 2.14 GUESS AND CHECK, WORK BACKWARD
-

Introduction

Integers and Rational Numbers

Integers and rational numbers are important in daily life. The price per square yard of carpet is a rational number. The number of frogs in a pond is expressed using an integer. The organization of real numbers can be drawn as a **hierarchy**. Look at the hierarchy below.



Real numbers are all around us. The majority of numbers calculated are considered **real numbers**. This chapter defines a real number and explains important properties and rules that apply to real numbers. The most generic number is the real number; it can be a combination of negative, positive, decimal, fractional, or non-repeating decimal values. Real numbers have two major categories: rational numbers and irrational numbers. **Irrational numbers** are non-repeating, non-terminating decimals such as π or $\sqrt{2}$. In this chapter, you will learn how to perform operations and solve problems involving rational numbers and integers, which are a special kind of rational number.

2.1 Properties of Rational Numbers

Here you'll learn how to distinguish between rational numbers written as proper and improper fractions. You'll also learn how to simplify these fractions and decide if one is less than or greater than another.

Suppose that you and two of your friends went out to lunch and that you ate $\frac{3}{5}$ of a personal pan pizza, one of your friends ate $\frac{5}{8}$ of a personal pan pizza, and your other friend ate $\frac{4}{3}$ of a personal pan pizza. Could you tell which of your fractions of pizza were proper and which were improper? Also, could you put the fractions of pizza in order from smallest to largest? In this Concept, you will answer questions such as these for any group of fractions, also known as rational numbers.

Guidance

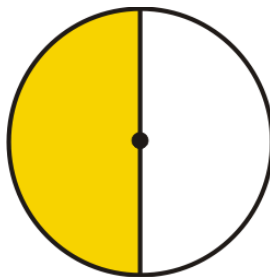
Rational numbers include fractions, integers and whole numbers. The definition below shows that all rational numbers can be written in the form of a fraction:

Definition: A **rational number** is a number that can be written in the form $\frac{a}{b}$, where a and b are integers and $b \neq 0$.

An integer, such as the number 3, is also a rational number because it can be written as $\frac{3}{1}$.

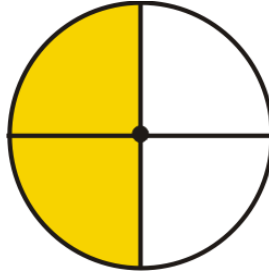
A Review of Fractions

You can think of a rational number as a fraction of a cake. If you cut the cake into b slices, your share is a of those slices. For example, when we see the rational number $\frac{1}{2}$, we imagine cutting the cake into two parts. Our share is one of those parts. Visually, the rational number $\frac{1}{2}$ looks like this.



There are three main types of fractions:

- **Proper fractions** are rational numbers where the numerator is less than the denominator. A proper fraction represents a number less than one. With a proper fraction you always end up with less than a whole cake!
- **Improper fractions** are rational numbers where the numerator is greater than the denominator. Improper fractions can be rewritten as a mixed number – an integer plus a proper fraction. An improper fraction represents a number greater than one.
- **Equivalent fractions** are two fractions that give the same numerical value when evaluated. For example, look at a visual representation of the rational number $\frac{2}{4}$.



The visual of $\frac{1}{2}$ is equivalent to the visual of $\frac{2}{4}$. We can write out the prime factors of both the numerator and the denominator and cancel matching factors that appear in both the numerator **and** denominator.

$$\left(\frac{2}{4}\right) = \left(\frac{\cancel{2} \cdot 1}{\cancel{2} \cdot 2 \cdot 1}\right) \text{ We then re-multiply the remaining factors. } \left(\frac{2}{4}\right) = \left(\frac{1}{2}\right)$$

Therefore, $\frac{1}{2} = \frac{2}{4}$. This process is called **reducing** the fraction, or writing the fraction in lowest terms. Reducing a fraction does not change the value of the fraction; rather, it simplifies the way we write it. When we have canceled all common factors, we have a fraction in its **simplest form**.

Example A

Classify and simplify the following rational numbers.

a) $\left(\frac{3}{7}\right)$

b) $\left(\frac{9}{3}\right)$

c) $\left(\frac{50}{60}\right)$

Solution:

a) Because both 3 and 7 are prime numbers, $\frac{3}{7}$ is a proper fraction written in its simplest form.

b) The numerator is larger than the denominator; therefore, this is an improper fraction.

$$\frac{9}{3} = \frac{3 \times 3}{3} = \frac{3}{1} = 3$$

c) This is a proper fraction; $\frac{50}{60} = \frac{5 \times 2 \times 5}{6 \times 2 \times 5} = \frac{5}{6}$

Ordering Rational Numbers

To order rational numbers is to arrange them according to a set of directions, such as ascending (lowest to highest) or descending (highest to lowest). Ordering rational numbers is useful when determining which unit cost is the cheapest.

Example B

Cans of tomato sauce come in three sizes: 8 ounces, 16 ounces, and 32 ounces. The costs for each size are \$0.59, \$0.99, and \$1.29, respectively. Find the unit cost and order the rational numbers in ascending order.

Solution: Use proportions to find the cost per ounce: $\frac{\$0.59}{8} = \frac{\$0.07375}{\text{ounce}}$, $\frac{\$0.99}{16} = \frac{\$0.061875}{\text{ounce}}$, $\frac{\$1.29}{32} = \frac{\$0.0403125}{\text{ounce}}$. Arranging the rational numbers in ascending order, we have: 0.0403125, 0.061875, 0.07375.

Example C

Which is greater, $\frac{3}{7}$ or $\frac{4}{9}$?

Solution: Begin by creating a common denominator for these two fractions. Which number is evenly divisible by 7 and 9? $7 \times 9 = 63$, so the common denominator is 63.

$$\frac{3 \times 9}{7 \times 9} = \frac{27}{63}$$

$$\frac{4 \times 7}{9 \times 7} = \frac{28}{63}$$

Because $28 > 27$, $\frac{4}{9} > \frac{3}{7}$.

Video Review



MEDIA

Click image to the left for more content.



MEDIA

Click image to the left for more content.

Guided Example

For the fractions $\frac{5}{9}$ and $\frac{10}{20}$:

- Determine whether these are proper or improper fractions.
- Simplify if necessary.
- Order the two fractions.

Solution:

a.) For both fractions, the numerator is smaller than the denominator, so they are both proper fractions.

b.) For $\frac{5}{9}$, since 5 is prime and 9 is not a multiple of 5, this fraction cannot be simplified.

For $\frac{10}{20}$, both 10 and 20 are multiples of 10, so we rewrite them as

$$\frac{1 \cdot 10}{2 \cdot 10} = \frac{1}{2}.$$

c.) To order the fractions, we'll use the simplified versions:

$$\frac{5 \cdot 2}{9 \cdot 2} = \frac{10}{18} \text{ and } \frac{1 \cdot 9}{2 \cdot 9} = \frac{9}{18}.$$

Since

$$\frac{9}{18} < \frac{10}{18}$$

then

$$\frac{1}{2} < \frac{5}{9}.$$

Practice

Sample explanations for some of the practice exercises below are available by viewing the following video. Note that there is not always a match between the number of the practice exercise in the video and the number of the practice exercise listed in the following exercise set. However, the practice exercise is the same in both. [CK-12 Basic Algebra: Integers and Rational Numbers \(13:00\)](#)

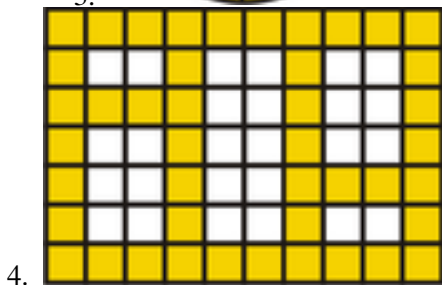
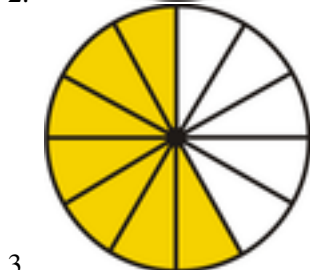
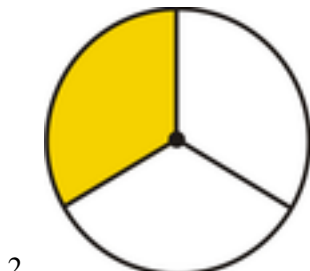


MEDIA

Click image to the left for more content.

1. What are the three types of fractions?

In 2 – 4, determine what fraction of the whole each shaded region represents.



In 5 – 8, place the following sets of rational numbers in order from least to greatest.

5. $\frac{1}{2}, \frac{1}{3}, \frac{1}{4}$
6. $\frac{11}{12}, \frac{12}{11}, \frac{13}{10}$
7. $\frac{39}{60}, \frac{49}{80}, \frac{59}{100}$
8. $\frac{7}{11}, \frac{8}{13}, \frac{12}{19}$

In 9 – 14, find the simplest form of the following rational numbers.

9. $\frac{22}{44}$
10. $\frac{9}{27}$
11. $\frac{12}{18}$
12. $\frac{315}{420}$
13. $\frac{19}{101}$
14. $\frac{99}{11}$

Mixed Review

15. Evaluate the following expression: $\frac{5}{6}d + 7a^2$; use $a = (-1)$ and $d = 24$.
16. The length of a rectangle is one more inch than its width. If the perimeter is 22 inches, what are the dimensions of the rectangle?
17. Determine if $x = -2$ is a solution to $4x + 7 \leq 15$.
18. Simplify: $\frac{(7+3) \div 2 \times 3^2 - 5}{(58-8)}$.

2.2 Additive Inverses and Absolute Values

Here you'll learn how to find the opposite of a number and also its distance from zero on a number line, which is its absolute value.

Suppose that you are creating a budget and that you have expenses of \$2500 per month. How much money would you have to bring in each month in order to break even? Would the expenses be thought of as a positive or negative number? What would be the additive inverse of the expenses? What would be the absolute value? After finishing this Concept, you'll be able to answer questions such as these so that you don't break your budget!

Guidance

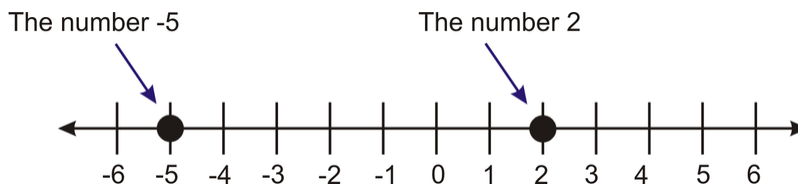
Graph and Compare Integers

More specific than the rational numbers are the **integers**. Integers are whole numbers and their negatives. When comparing integers, you will use the math verbs such as less than, greater than, approximately equal to, and equal to. To graph an integer on a number line, place a dot above the number you want to represent.

Example A

Compare the numbers 2 and -5 .

Solution: First, we will plot the two numbers on a number line.



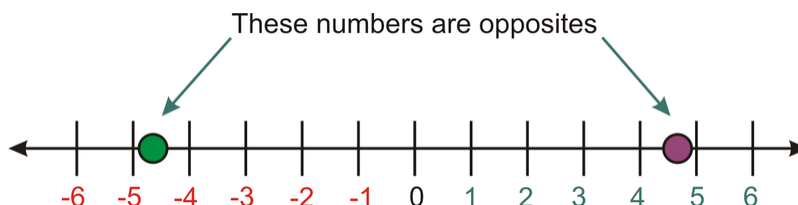
We can compare integers by noting which is the **greatest** and which is the **least**. The **greatest** number is farthest to the right, and the **least** is farthest to the left.

In the diagram above, we can see that 2 is farther to the right on the number line than -5 , so we say that 2 is greater than -5 . We use the symbol $>$ to mean "greater than."

Therefore, $2 > -5$.

Numbers and Their Opposites

Every real number, including integers, has an **opposite**, which represents the same distance from zero but in the other direction.



A special situation arises when adding a number to its opposite. The sum is zero. This is summarized in the following property.

The **Additive Inverse Property**: For any real number a , $a + (-a) = 0$.

We see that $-a$ is the additive inverse, or opposite, of a .

Example B

Find the **opposite** number of the following numbers. Use the Additive Inverse Property to show that they are opposites.

- a.) -5
- b.) $1/2$
- c.) 5.1

Solutions:

- a.) The opposite number of -5 is 5. Using the Additive Inverse Property: $-5 + (5) = 0$.
- b.) The opposite number of $1/2$ is $-1/2$. The Additive Inverse Property shows us that they are opposites: $\frac{1}{2} + (-\frac{1}{2}) = 0$.
- c.) The opposite number of 5.1 is -5.1. The Additive Inverse Property gives: $5.1 + (-5.1) = 0$.

Absolute Value

Absolute value represents the distance from zero when graphed on a number line. For example, the number 7 is 7 units away from zero. The number -7 is also 7 units away from zero. The absolute value of a number is the distance it is from zero, so the absolute value of 7 and the absolute value of -7 are both 7. ***A number and its additive inverse are always the same distance from zero, and so they have the same absolute value.***

We **write** the absolute value of -7 like this: $|-7|$.

We **read** the expression $|x|$ like this: “the absolute value of x .”

- Treat absolute value expressions like parentheses. If there is an operation inside the absolute value symbols, evaluate that operation first.
- The absolute value of a number or an expression is **always** positive or zero. It cannot be negative. With absolute value, we are only interested in how far a number is from zero, not the direction.

Example C

Evaluate the following absolute value expressions.

- a) $|5 + 4|$
- b) $3 - |4 - 9|$
- c) $|-5 - 11|$
- d) $-|7 - 22|$

Solution:

a)

$$\begin{aligned} |5 + 4| &= |9| \\ &= 9 \end{aligned}$$

b)

$$\begin{aligned} 3 - |4 - 9| &= 3 - |-5| \\ &= 3 - 5 \\ &= -2 \end{aligned}$$

c)

$$\begin{aligned} |-5 - 11| &= |-16| \\ &= 16 \end{aligned}$$

d)

$$\begin{aligned} -|7 - 22| &= -|-15| \\ &= -(15) \\ &= -15 \end{aligned}$$

Video Review



MEDIA

 Click image to the left for more content.



MEDIA

 Click image to the left for more content.

Guided Practice

1. What is the opposite of $x - 1$?

2. Evaluate the following:

a.) $|3 - 4| - 2$

b.) $|5 - 7.5| + 3$

Solutions:

1. The opposite of $x - 1$ is $-(x - 1)$. We can use the Additive Inverse Property to prove it:

Since $-(x - 1) = -x - 1$, we can see that

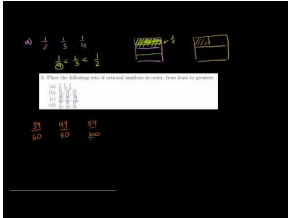
$$(x - 1) + (-(x - 1)) = (x - 1) + (-x - 1) = 0.$$

2a.) $|3 - 4| - 2 = |-1| - 2 = 1 - 2 = -1$

2b.) $|5 - 7.5| + 3 = |-2.5| + 3 = 2.5 + 3 = 5.5$

Practice

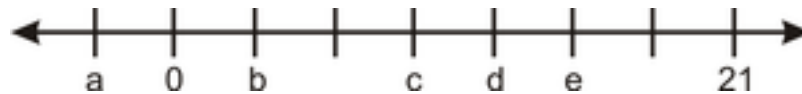
Sample explanations for some of the practice exercises below are available by viewing the following video. Note that there is not always a match between the number of the practice exercise in the video and the number of the practice exercise listed in the following exercise set. However, the practice exercise is the same in both. [CK-12 Basic Algebra: Integers and Rational Numbers \(13:00\)](#)



MEDIA

Click image to the left for more content.

1. Define absolute value.
2. Give an example of a real number that is not an integer.
3. The tick-marks on the number line represent evenly spaced integers. Find the values of a , b , c , d , and e .



In 4 – 9, find the opposite of each of the following.

4. 1.001
5. -9.345
6. $(16 - 45)$
7. $(5 - 11)$
8. $(x + y)$
9. $(x - y)$

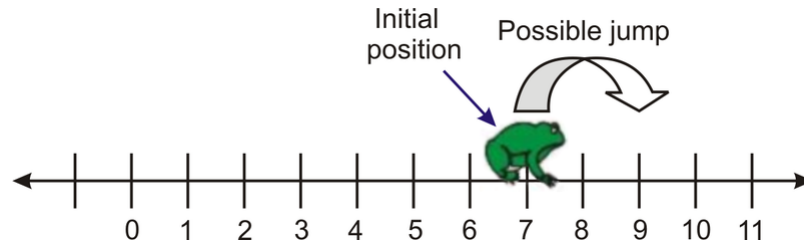
In 10 – 19, simplify.

10. $|-98.4|$
11. $|123.567|$
12. $-|16 - 98|$
13. $11 - |-4|$
14. $|4 - 9| - |-5|$
15. $|-5 - 11|$
16. $7 - |22 - 15 - 19|$
17. $-|-7|$
18. $|-2 - 88| - |88 + 2|$
19. $|-5 - 99| + -|16 - 7|$

In 20 – 25, compare the two real numbers.

20. 8 and 7.99999
21. -4.25 and $\frac{-17}{4}$
22. 65 and -1
23. 10 units left of zero and 9 units right of zero

24. A frog is sitting perfectly on top of number 7 on a number line. The frog jumps randomly to the left or right, but always jumps a distance of exactly 2. Describe the set of numbers that the frog may land on, and list all the possibilities for the frog's position after exactly 5 jumps.



25. Will a real number always have an additive inverse? Explain your reasoning.

2.3 Addition of Integers

Here you'll learn the Commutative Property of Addition, Associative Property of Addition, and Identity Property of Addition so that you can effectively add integers.

Suppose you took a job as a peer tutor and the person you were tutoring asked you to give examples of the Commutative Property of Addition, Associative Property of Addition, and Identity Property of Addition. Could you do it? Would you be able to distinguish between the different properties? After completing this Concept, you'll have a firm understanding of these properties so that you can easily add integers.

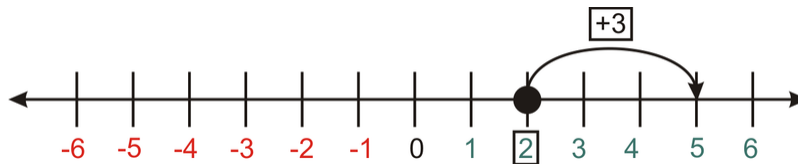
Guidance

Addition of Integers

A football team gains 11 yards on one play, then loses 5 yards on the next play, and then loses 2 yards on the third play. What is the total loss or gain of yardage?

A loss can be expressed as a negative integer. A gain can be expressed as a positive integer. To find the net gain or loss, the individual values must be added together. Therefore, the sum is $11 + (-5) + (-2) = 4$. The team has a net gain of 4 yards.

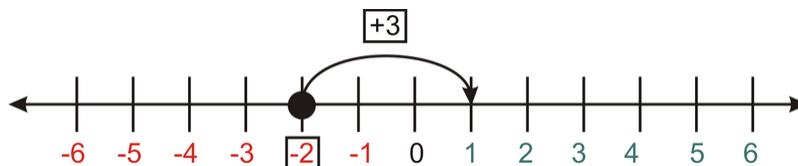
Addition can also be shown using a number line. If you need to add $2 + 3$, start by making a point at the value of 2 and move three integers to the right. The ending value represents the sum of the values.



Example A

Find the sum of $-2 + 3$ using a number line.

Solution: Begin by making a point at -2 and moving three units to the right. The final value is 1, so $-2 + 3 = 1$.

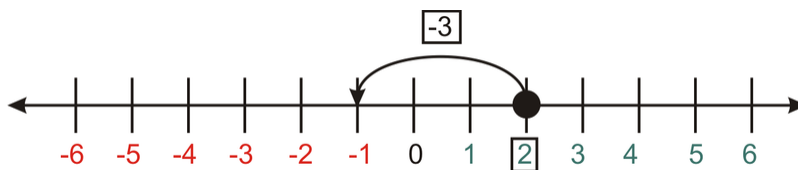


When the value that is being added is positive, we jump to the right. If the value is negative, we jump to the left (in a negative direction).

Example B

Find the sum of $2 - 3$ using a number line.

Solution: Begin by making a point at 2. The expression represents subtraction, so we will count three jumps to the left.



The solution is: $2 - 3 = -1$.

Algebraic Properties of Addition

In the previous Concept, you learned the Additive Inverse Property. This property states that the sum of a number and its opposite is zero. Algebra has many other properties that help you manipulate and organize information.

The **Commutative Property of Addition:** For all real numbers a and b , $a + b = b + a$.

To *commute* means to change locations, so the Commutative Property of Addition allows you to rearrange the objects in an addition problem.

The **Associative Property of Addition:** For all real numbers a , b , and c , $(a + b) + c = a + (b + c)$.

To *associate* means to group together, so the Associative Property of Addition allows you to regroup the objects in an addition problem.

The **Identity Property of Addition:** For any real number a , $a + 0 = a$.

This property allows you to use the fact that the sum of any number and zero is the original value.

These properties apply to all real numbers, but in this lesson we are applying them to integers, which are just a special kind of real number.

Example C

Nadia and Peter are building sand castles on the beach. Nadia built a castle two feet tall, stopped for ice-cream, and then added one more foot to her castle. Peter built a castle one foot tall before stopping for a sandwich. After his sandwich, he built up his castle by two more feet. Whose castle is taller?



Solution:

Nadia's castle is $(2 + 1)$ feet tall. Peter's castle is $(1 + 2)$ feet tall. According to the **Commutative Property of Addition**, the two castles are the same height.

Video Review**MEDIA**

Click image to the left for more content.

**MEDIA**

Click image to the left for more content.

Guided Practice

Simplify the following using the properties of addition:

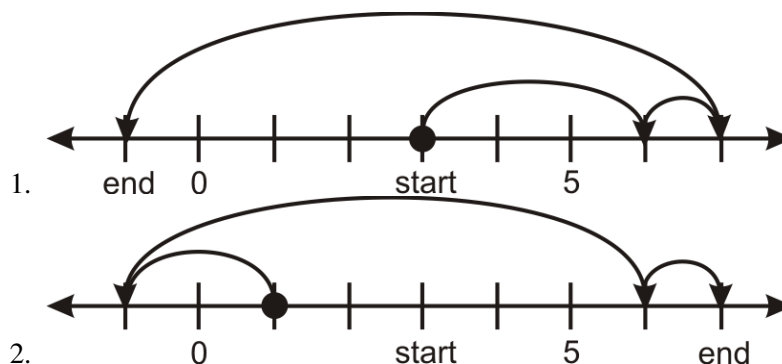
- $9 + (1 + 22)$
- $4,211 + 0$

Solution:

- It is easier to regroup $9 + 1$, so by applying the Associative Property of Addition, $(9 + 1) + 22 = 10 + 22 = 32$.
- The Additive Identity Property states the sum of a number and zero is itself; therefore, $4,211 + 0 = 4,211$.

Practice

In exercises 1 and 2, write the sum represented by the moves on the number line.



In 3 – 6, which property of addition does each situation involve?

- Shari's age minus the negative of Jerry's age equals the sum of the two ages.

- Kerri has 16 apples and has added zero additional apples. Her current total is 16 apples.
- A blue whale dives 160 feet below the surface and then rises 8 feet. Write the addition problem and find the sum.
- The temperature in Chicago, Illinois one morning was $-8^{\circ}F$. Over the next six hours the temperature rose 25 degrees Fahrenheit. What was the new temperature?

Mixed Review

- Find the opposite of -72 .
- Evaluate $|16 - 29 + 78 - 114|$.
- What is the domain and range of the following: $\{(2, -1), (3, 0), (4, 6), (1, -3)\}$?
- Write a rule for the following table:

TABLE 2.1:

Volume (in <i>inches</i>³)	Mass (in grams)
1	20.1
2	40.2
3	60.3
4	80.4

2.4 Addition of Rational Numbers

Here you'll learn how to add fractions (also known as rational numbers), even when one or more of the fractions is improper and when the fractions have different denominators.

Suppose you drank $\frac{7}{8}$ of a bottle of juice on Monday, $\frac{2}{5}$ of a bottle on Tuesday, and $\frac{3}{2}$ of a bottle on Wednesday. Can you identify which of the fractions of a bottle of juice are improper, and can you write the fractions with a common denominator? Also, can you add these fractions of a bottle of juice together? After completing this Concept, you'll be able to perform these tasks so that you can figure out how many bottles of juice you drank in total over the three days.

Guidance

Addition of Rational Numbers

To add rational numbers, we must first remember how to rewrite mixed numbers as improper fractions. Begin by multiplying the denominator of the mixed number to the whole value. Add the numerator to this product. This value is the numerator of the improper fraction. The denominator is the original.

Example A

Write $11\frac{2}{3}$ as an improper fraction:

Solution: $3 \times 11 = 33 + 2 = 35$. This is the numerator of the improper fraction.

$$11\frac{2}{3} = \frac{35}{3}$$

Now that we know how to rewrite a mixed number as an improper fraction, we can begin to add rational numbers. There is one thing to remember when finding the sum or difference of rational numbers: The denominators must be equivalent.

The **Addition Property of Fractions:** For all real numbers a , b , and c , $\frac{a}{c} + \frac{b}{c} = \frac{a+b}{c}$.

Example B

Add the following sets of fractions (rational numbers):

a.) $\frac{1}{3} + \frac{2}{3}$

b.) $4\frac{1}{7} + \frac{2}{7}$

Solutions:

a.) Since the denominators are the same, we can go ahead and add the numerators:

$$\frac{1}{3} + \frac{2}{3} = \frac{1+2}{3} = \frac{3}{3} = 1$$

b.) $4\frac{1}{7}$ is a mixed fraction, and reads "4 and one seventh." This means we can think of it as $4 + \frac{1}{7}$. Since the other fraction also has 7 as a denominator, we can add the two fractions:

$$4\frac{1}{7} + \frac{2}{7} = 4 + \frac{1}{7} + \frac{2}{7} = 4 + \frac{1+2}{7} = 4 + \frac{3}{7} = 4\frac{3}{7}.$$

This mixed fraction can be turned into an improper fraction as follows:

$$4 \times 7 = 28$$

$$\frac{28+3}{7} = \frac{31}{7}$$

Algebraic Properties of Addition

Since these properties apply to all real numbers, they apply to fractions or rational numbers as well. Let's review them here:

The **Commutative Property of Addition**: For all real numbers a , and b , $a + b = b + a$.

To *commute* means to change locations, so the Commutative Property of Addition allows you to rearrange the objects in an addition problem.

The **Associative Property of Addition**: For all real numbers a , b , and c , $(a + b) + c = a + (b + c)$.

To *associate* means to group together, so the Associative Property of Addition allows you to regroup the objects in an addition problem.

The **Identity Property of Addition**: For any real number a , $a + 0 = a$.

Another way you sometimes see a rational number is as a decimal number, such as 2.5, 30.01, or 2.9999. We will practice some of the above properties on rational numbers in their different forms.

Example C

To convince ourselves that the algebraic properties are true, in this exercise we will check whether the following equations are equal:

a.) Commutative Property: $2.5 + 3.5 = 3.5 + 2.5$

b.) Associate Property: $\frac{1}{9} + \left(\frac{2}{9} + \frac{5}{9}\right) = \left(\frac{1}{9} + \frac{2}{9}\right) + \frac{5}{9}$

Solutions:

a.) We will check each side separately to see if they equal the same thing.

$$2.5 + 3.5 = 6$$

$$3.5 + 2.5 = 6$$

So we conclude that the equality is satisfied.

b.) We check each side of the equation here as well.

$$\frac{1}{9} + \left(\frac{2}{9} + \frac{5}{9}\right) = \frac{1}{9} + \frac{7}{9} = \frac{8}{9}$$

$$\left(\frac{1}{9} + \frac{2}{9}\right) + \frac{5}{9} = \frac{3}{9} + \frac{5}{9} = \frac{8}{9}$$

So we conclude that the equality is satisfied.

Common Denominators

In order to add two fractions, they must have a **common denominator**. This means that they must have the same number in the denominator. If two fractions to be added do not have common denominators, either one or both of the fractions can be changed so that they do have common denominators. In general, when two fractions have different denominators, use the pattern below.

$$\frac{a}{b} + \frac{c}{d} = \frac{a}{b} \cdot \frac{d}{d} + \frac{c}{d} \cdot \frac{b}{b} = \frac{ad}{bd} + \frac{bc}{bd} = \frac{ad+bc}{bd}$$

To understand how this works, see the next example.

Example D

Find common denominators for the follow sums, and then add them.

1. f
2. $\frac{1}{5} + \frac{3}{10}$

Solutions:

1. Follow the pattern; that is, multiply the top and bottom of each fraction by the denominator of the other fraction:

$$\frac{2}{11} + \frac{1}{3} = \frac{2}{11} \cdot \frac{3}{3} + \frac{1}{3} \cdot \frac{11}{11} = \frac{6}{33} + \frac{11}{33} = \frac{6+11}{33} = \frac{17}{33}$$

2. In this example, our denominator, 10, is a multiple of the other denominator, 5. There is no need to change the fraction with a denominator of 10. Simply multiply the top and bottom of the first fraction in order to make its denominator 10:

$$\frac{1}{5} + \frac{3}{10} = \frac{1}{5} \cdot \frac{2}{2} + \frac{3}{10} = \frac{2}{10} + \frac{3}{10} = \frac{2+3}{10} = \frac{5}{10} = \frac{1}{2}$$

Video Review

MEDIA

Click image to the left for more content.



MEDIA

Click image to the left for more content.

Guided Practice

Perform the addition of rational numbers and give your final answer as an mixed fraction.

$$5\frac{1}{3} + 2\frac{3}{4}$$

Solution:

We can break up the mixed fractions:

$$5\frac{1}{3} + 2\frac{3}{4} = 5 + \frac{1}{3} + 2 + \frac{3}{4}$$

Using the Commutative Property we can rearrange and simplify by adding integers:

$$5 + \frac{1}{3} + 2 + \frac{3}{4} = 5 + 2 + \frac{1}{3} + \frac{3}{4} = 7 + \frac{1}{3} + \frac{3}{4}$$

Now we just need to add the fractions. Since they do not have common denominators, we have to give them common denominators. The denominators do not share any factors, so we need to multiply them by each other:

$$\frac{1}{3} + \frac{3}{4} = \frac{1 \times 4}{3 \times 4} + \frac{3 \times 3}{4 \times 3} = \frac{4}{12} + \frac{9}{12} = \frac{4+9}{12} = \frac{13}{12}$$

Now we know what the sum of the fractions is:

$$7 + \frac{1}{3} + \frac{3}{4} = 7 + \frac{13}{12}.$$

Since our answer needs to be a mixed fraction, we will turn the improper fraction into a mixed fraction. Since 12 goes into 13 one time with a remainder of 1, we get:

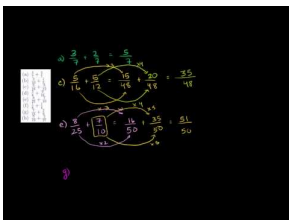
$$7 + \frac{13}{12} = 7 + 1\frac{1}{12} = 8\frac{1}{12}.$$

The answer is:

$$5\frac{1}{3} + 2\frac{3}{4} = 8\frac{1}{12}.$$

Practice

Sample explanations for some of the practice exercises below are available by viewing the following video. Note that there is not always a match between the number of the practice exercise in the video and the number of the practice exercise listed in the following exercise set. However, the practice exercise is the same in both. [CK-12 Basic Algebra: Addition of Rational Numbers \(7:40\)](#)



MEDIA

Click image to the left for more content.

Find the sum. Write the answer in its **simplest form**.

1. $\frac{3}{7} + \frac{2}{7}$
2. $\frac{3}{10} + \frac{1}{5}$
3. $\frac{5}{16} + \frac{5}{12}$
4. $\frac{3}{8} + \frac{9}{16}$
5. $\frac{8}{25} + \frac{1}{10}$
6. $\frac{1}{6} + \frac{1}{4}$
7. $\frac{7}{15} + \frac{2}{9}$
8. $\frac{5}{19} + \frac{2}{27}$
9. $-2.6 + 11.19$
10. $-8 + 13$
11. $-7.1 + (-5.63)$
12. $9.99 + (-0.01)$
13. $4\frac{7}{8} + 1\frac{1}{2}$
14. $-3\frac{1}{3} + (-2\frac{3}{4})$

In 15 – 17, which property of addition does each situation involve?

15. Whichever order your groceries are scanned at the store, the total will be the same.
16. Suppose you go buy a DVD for \$8.00, another for \$29.99, and a third for \$14.99. You can add $(8 + 29.99) + 14.99$ or you can add $8 + (29.99 + 14.99)$ to obtain the total.
17. Nadia, Peter, and Ian are pooling their money to buy a gallon of ice cream. Nadia is the oldest and gets the greatest allowance. She contributes half of the cost. Ian is next oldest and contributes one third of the cost. Peter, the youngest, gets the smallest allowance and contributes one fourth of the cost. They figure that this will be enough money. When they get to the check-out, they realize that they forgot about sales tax and worry there will not be enough money. Amazingly, they have exactly the right amount of money. What fraction of the cost of the ice cream was added as tax?

In 18 – 24, evaluate each expression for $v = 5.8$.

18. $9.1 + v$

19. $v + (-v)$

20. $-v + 4.12$

21. $-23.14 + -v$

22. $7.86 + (-v)$

23. $-v + 3.5$

24. $-v + v$

2.5 Subtraction of Rational Numbers

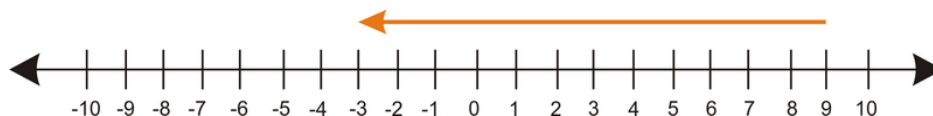
Here you'll learn how to subtract a negative number by using the Opposite-Opposite Property. You'll also learn how to find a common denominator when subtracting fractions and how to find the difference in a dependent variable relative to the difference in the independent variable.

Suppose that you know that two points on a line are $(2, -4)$ and $(3, -2)$. How would you go about finding the "steepness" of the line? As you'll learn in a future concept, it is the difference of the dependent variable divided by the difference of the independent variable. Do you know how to do this? After completing this Concept, you will.

Guidance

Subtraction of Rational Numbers

In the previous two concepts, you have learned how to find the opposite of a rational number and them together. You can use these two ideas to subtract rational numbers as well. Suppose you want to find the difference of 9 and 12. Symbolically, it would be $9 - 12$. Begin by placing a dot at nine and move to the **left** 12 units.



$$9 - 12 = -3$$

Rule: To subtract a number, add its opposite.

$$3 - 5 = 3 + (-5) = -2$$

$$9 - 16 = 9 + (-16) = -7$$

A special case of this rule can be written when trying to subtract a negative number.

The **Opposite-Opposite Property:** For any real numbers a and b , $a - (-b) = a + b$.

Example A

Simplify $-6 - (-13)$.

Solution: Using the Opposite-Opposite Property, the double negative is rewritten as a positive.

$$-6 - (-13) = -6 + 13 = 7$$

Example B

Simplify $\frac{5}{6} - (-\frac{1}{18})$.

Solution: Begin by using the Opposite-Opposite Property.

$$\frac{5}{6} + \frac{1}{18}$$

Next, create a common denominator: $\frac{5 \times 3}{6 \times 3} + \frac{1}{18} = \frac{15}{18} + \frac{1}{18}$.

Add the fractions: $\frac{15}{18} + \frac{1}{18} = \frac{16}{18}$.

Reduce: $\frac{2 \times 2 \times 2 \times 2}{3 \times 3 \times 2} = \frac{8}{9}$.

Evaluating Change Using a Variable Expression

You have learned how to graph a function by using an algebraic expression to generate a table of values. Using the table of values you can find the **difference of the dependent values** relative to the difference of the two independent values.

Example C

In a previous concept, you wrote an expression to represent the pattern of the total cost to the number of CDs purchased. The table is repeated below:

Number of CDs	2	4	6	8	10
Cost (\$)	24	48	72	96	120

To determine the average cost of the CDs, you must find the difference between the **dependent values** and divide it by the difference in the **independent values**.

Solution: We begin by finding the difference between the cost of two values. For example, the change in cost between 4 CDs and 8 CDs.

$$96 - 48 = 48$$

Next, we find the difference between the number of CDs.

$$8 - 4 = 4$$

Finally, we divide.

$$\frac{48}{4} = 12$$

This tells us that the cost for each CD was 12 dollars.

Video Review



MEDIA

Click image to the left for more content.



MEDIA

 Click image to the left for more content.

Guided Practice

For the equation $y = 3x - 5$, find the difference between the dependent variable from $x = 2$ and $x = 4$. Then, find the steepness of the line.

Solution: First we find the value of the equation, or the value of y for each x value:

$$y = 3x - 5 = 3(2) - 5 = 6 - 5 = 1$$

$$y = 3x - 5 = 3(4) - 5 = 12 - 5 = 7$$

Now, we calculate the difference in the dependent values:

$$7 - 1 = 6$$

Finally, to find the steepness (also called slope in later concepts) we divide by the difference between the independent values:


$$4 - 2 = 2$$

$$\frac{6}{2} = 3$$

The steepness is 3. Notice that this is the value in front of x in the equation. We will learn more about that in future concepts.

Practice

Sample explanations for some of the practice exercises below are available by viewing the following video. Note that there is not always a match between the number of the practice exercise in the video and the number of the practice exercise listed in the following exercise set. However, the practice exercise is the same in both. [CK-12 Basic Algebra: Subtraction of Rational Numbers \(10:22\)](#)



MEDIA

 Click image to the left for more content.

In 1 – 20, subtract the following rational numbers. Be sure that your answer is in the **simplest form**.

1. $9 - 14$

2. $2 - 7$

3. $21 - 8$

4. $8 - (-14)$

5. $-11 - (-50)$

6. $\frac{5}{12} - \frac{9}{18}$
7. $5.4 - 1.01$
8. $\frac{2}{3} - \frac{1}{4}$
9. $\frac{3}{4} - \frac{1}{3}$
10. $\frac{1}{4} - \left(-\frac{2}{3}\right)$
11. $\frac{15}{11} - \frac{9}{7}$
12. $\frac{2}{13} - \frac{1}{11}$
13. $-\frac{7}{8} - \left(-\frac{8}{3}\right)$
14. $\frac{7}{27} - \frac{9}{39}$
15. $\frac{6}{11} - \frac{3}{22}$
16. $-3.1 - 21.49$
17. $\frac{13}{64} - \frac{7}{40}$
18. $\frac{11}{70} - \frac{11}{30}$
19. $-68 - (-22)$
20. $\frac{1}{3} - \frac{1}{2}$
21. Determine the steepness of the line between $(1, 9)$ and $(5, -14)$.
22. Consider the equation $y = 3x + 2$. Determine the steepness in the line between $x = 3$ and $x = 7$.
23. Consider the equation $y = \frac{2}{3}x + \frac{1}{2}$. Determine the steepness in the line between $x = 1$ and $x = 2$.
24. *True or false? If the statement is false, explain your reasoning.* The difference of two numbers is less than each number.
25. *True or false? If the statement is false, explain your reasoning.* A number minus its opposite is twice the number.
26. KMN stock began the day with a price of \$4.83 per share. At the closing bell, the price dropped \$0.97 per share. What was the closing price of KMN stock?

In 27 – 32, evaluate the expression. Assume $a = 2$, $b = -3$, and $c = -1.5$.

27. $(a - b) + c$
28. $|b + c| - a$
29. $a - (b + c)$
30. $|b| + |c| + a$
31. $7b + 4a$
32. $(c - a) - b$

Mixed Review

33. Graph the following ordered pairs: $\{(0, 0), (4, 4), (7, 1), (3, 8)\}$. Is the relation a function?
34. Evaluate the following expression when $m = \left(-\frac{2}{3}\right)$: $\frac{2^3 + m}{4}$.
35. Translate the following into an algebraic equation: *Ricky has twelve more dollars than Stacy. Stacy has 5 less dollars than Aaron. The total of the friends' money is \$62.*
36. Simplify $\frac{1}{3} + \frac{7}{5}$.
37. Simplify $\frac{21}{4} - \frac{2}{3}$.

2.6 Multiplication of Rational Numbers

Here you'll learn how to use the Multiplication Property of -1 , the Multiplicative Identity Property, and the Zero Property of Multiplication when multiplying rational numbers in the form of integers and fractions.

Suppose you wrote a computer program that multiplies $\frac{1}{5}$ by a random number. What if the random number were -1 ? What if it were 0 ? What if it were 1 ? In fact, the random number doesn't even have to be an integer. What if it were $\frac{3}{4}$? What if it were $-\frac{2}{7}$? In this Concept, you'll learn about the Multiplication Property of -1 , the Multiplicative Identity Property, and the Zero Property of Multiplication so that you can answer these questions.

Guidance

When you began learning how to multiply whole numbers, you replaced repeated addition with the multiplication sign (\times). For example:

$$6 + 6 + 6 + 6 + 6 = 5 \times 6 = 30$$

Multiplying rational numbers is performed the same way. We will start with the Multiplication Property of -1 .

The **Multiplication Property of -1** : For any real number a , $(-1) \times a = -a$.

This can be summarized by saying, "A number times a negative is the opposite of the number."

Example A

Evaluate $-1 \cdot 9,876$.

Solution:

Using the Multiplication Property of -1 : $-1 \cdot 9,876 = -9,876$.

This property can also be used when the values are negative, as shown in Example B.

Example B

Evaluate $-1 \cdot -322$.

Solution:

Using the Multiplication Property of -1 : $-1 \cdot -322 = 322$.

A basic algebraic property is the Multiplicative Identity. Similar to the Additive Identity, this property states that any value multiplied by 1 will result in the original value.

The **Multiplicative Identity Property**: For any real number a , $(1) \times a = a$.

A third property of multiplication is the Multiplication Property of Zero. This property states that any value multiplied by zero will result in zero.

The **Zero Property of Multiplication**: For any real number a , $(0) \times a = 0$.

Multiplication of fractions can also be shown visually, as you can see in the example below.

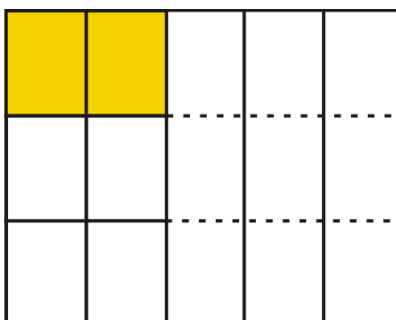
Example C

Find $\frac{1}{3} \cdot \frac{2}{5}$, drawing one model to represent the first fraction and a second model to represent the second fraction.

Solution:



By placing one model (divided in thirds horizontally) on top of the other (divided in fifths vertically), you divide one whole rectangle into smaller parts.



The product of the two fractions is the $\frac{\text{shaded regions}}{\text{total regions}}$.

$$\frac{1}{3} \cdot \frac{2}{5} = \frac{2}{15}$$

Video Review

MEDIA

Click image to the left for more content.



MEDIA

Click image to the left for more content.

Guided Practice

Simplify $\frac{3}{7} \cdot \frac{4}{5}$.

Solution: By drawing visual representations, you can see that



$$\frac{3}{7} \cdot \frac{4}{5} = \frac{12}{35}$$

Practice

Multiply the following rational numbers.

- $\frac{1}{2} \cdot \frac{3}{4}$
- $-7.85 \cdot -2.3$
- $\frac{2}{5} \cdot \frac{5}{9}$
- $\frac{1}{3} \cdot \frac{2}{7} \cdot \frac{2}{5}$
- $4.5 \cdot -3$
- $\frac{1}{2} \cdot \frac{2}{3} \cdot \frac{3}{4} \cdot \frac{4}{5}$
- $\frac{5}{12} \times \frac{9}{10}$
- $\frac{27}{5} \cdot 0$
- $\frac{2}{3} \times \frac{1}{4}$
- $-11.1(4.1)$

Multiply the following by negative one.

- 79.5
- π
- $(x+1)$
- $|x|$
- 25
- 105
- x^2
- $(3+x)$
- $(3-x)$

Quick Quiz

- Order from least to greatest: $(\frac{5}{6}, \frac{23}{26}, \frac{31}{32}, \frac{3}{14})$.
- Simplify $\frac{5}{9} \times \frac{27}{4}$.
- Simplify $|-5+11|-|9-37|$.
- Add $\frac{21}{5}$ and $\frac{7}{8}$.

2.7 Mixed Numbers in Applications

Here you'll multiply mixed numbers and fractions to solve real-world multiplication problems.

Suppose you're skateboarding at an average rate of $15\frac{1}{2}$ miles per hour, and you skateboard for $\frac{3}{5}$ of an hour. How far did you travel? In this Concept, you'll learn how to multiply mixed numbers and fractions so that you can answer real-world questions such as this.

Guidance

You've decided to make cookies for a party. The recipe you've chosen makes 6 dozen cookies, but you only need 2 dozen. How do you reduce the recipe?



In this case, you should not use subtraction to find the new values. Subtraction means to make less by taking away. You haven't made any cookies; therefore, you cannot take any away. Instead, you need to make $\frac{2}{6}$ or $\frac{1}{3}$ of the original recipe. This process involves multiplying fractions.

For any real numbers a, b, c , and d , where $b \neq 0$ and $d \neq 0$:

$$\frac{a}{b} \cdot \frac{c}{d} = \frac{ac}{bd}$$

Example A

The original cookie recipe calls for 8 cups flour. How much is needed for the reduced recipe?

Solution: Begin by writing the multiplication situation. $8 \cdot \frac{1}{3}$. You need to rewrite this product in the form of the property above. In order to perform this multiplication, you need to rewrite 8 as the fraction $\frac{8}{1}$.

$$8 \times \frac{1}{3} = \frac{8}{1} \times \frac{1}{3} = \frac{8 \cdot 1}{1 \cdot 3} = \frac{8}{3} = 2\frac{2}{3}$$

You will need $2\frac{2}{3}$ cups of flour.

Multiplication Properties

Properties that hold true for addition such as the Associative Property and Commutative Property also hold true for multiplication. They are summarized below.

The **Associative Property of Multiplication:** For any real numbers a , b , and c ,

$$(a \cdot b) \cdot c = a \cdot (b \cdot c)$$

The **Commutative Property of Multiplication:** For any real numbers a and b ,

$$a(b) = b(a)$$

The **Same Sign Multiplication Rule:** The product of two positive or two negative numbers is positive.

The **Different Sign Multiplication Rule:** The product of a positive number and a negative number is a negative number.

Example B

Ayinde is making a dog house that is $3\frac{1}{2}$ feet long and $2\frac{2}{3}$ feet wide. How many square feet of area will the dog house be?

Solution:

Since the formula for area is

$$\text{area} = \text{length} \times \text{width},$$

we plug in the values for length and width:

$$\text{area} = 3\frac{1}{2} \times 2\frac{2}{3}.$$

We first need to turn the mixed fractions into improper fractions:

$$\text{area} = 3\frac{1}{2} \times 2\frac{2}{3} = \frac{7}{2} \times \frac{8}{3} = \frac{7 \times 8}{2 \times 3} = \frac{56}{6}.$$

Now we turn the improper fraction back into a mixed fraction. Since 56 divided by 6 is 9 with a remainder of 2, we get:

$$\frac{56}{6} = 9\frac{2}{6} = 9\frac{1}{3}$$

The dog house will have an area of $9\frac{1}{3}$ square feet.

Note: The units of the area are square feet, or feet squared, because we multiplied two numbers each with units of feet:

$$\text{feet} \times \text{feet} = \text{feet}^2,$$

which we call square feet.

Example C

Doris's truck gets $10\frac{2}{3}$ miles per gallon. Her tank is empty so she puts in $5\frac{1}{2}$ gallons of gas.

How far can she travel?

Solution: Begin by writing each mixed number as an improper fraction.

$$10\frac{2}{3} = \frac{32}{3}$$

$$5\frac{1}{2} = \frac{11}{2}$$

Now multiply the two values together.

$$\frac{32}{3} \cdot \frac{11}{2} = \frac{352}{6} = 58\frac{4}{6} = 58\frac{2}{3}$$

Doris can travel $58\frac{2}{3}$ miles on 5.5 gallons of gas.

Video Review



MEDIA

Click image to the left for more content.



MEDIA

Click image to the left for more content.

Guided Practice

Anne has a bar of chocolate and she offers Bill a piece. Bill quickly breaks off $\frac{1}{4}$ of the bar and eats it. Another friend, Cindy, takes $\frac{1}{3}$ of what was left. Anne splits the remaining candy bar into two equal pieces, which she shares with a third friend, Dora. How much of the candy bar does each person get?



Solution: Think of the bar as one whole.

$1 - \frac{1}{4} = \frac{3}{4}$. This is the amount remaining after Bill takes his piece.

$\frac{1}{3} \times \frac{3}{4} = \frac{1}{4}$. This is the fraction Cindy receives.

$\frac{3}{4} - \frac{1}{4} = \frac{2}{4} = \frac{1}{2}$. This is the amount remaining after Cindy takes her piece.

Anne divides the remaining bar into two equal pieces. Every person receives $\frac{1}{4}$ of the bar.

Practice

Multiply the following rational numbers.

1. $\frac{3}{4} \times \frac{1}{3}$
2. $\frac{15}{11} \times \frac{9}{7}$
3. $\frac{2}{7} \cdot -3.5$
4. $\frac{1}{13} \times \frac{1}{11}$
5. $\frac{7}{27} \times \frac{9}{14}$
6. $\left(\frac{3}{5}\right)^2$
7. $\frac{1}{11} \times \frac{22}{21} \times \frac{7}{10}$
8. $5.75 \cdot 0$

In 9 – 11, state the property that applies to each of the following situations.

9. A gardener is planting vegetables for the coming growing season. He wishes to plant potatoes and has a choice of a single 8 by 7 meter plot, or two smaller plots of 3 by 7 meters and 5 by 7 meters. Which option gives him the largest area for his potatoes?
10. Andrew is counting his money. He puts all his money into \$10 piles. He has one pile. How much money does Andrew have?
11. Nadia and Peter are raising money by washing cars. Nadia is charging \$3 per car, and she washes five cars in the first morning. Peter charges \$5 per car (including a wax). In the first morning, he washes and waxes three cars. Who has raised the most money?
12. Teo is making a flower box that is 5-and-a-half inches by 15-and-a-half inches. How many square inches will he have in which to plant flowers?

Mixed Review

13. Compare these rational numbers: $\frac{16}{27}$ and $\frac{2}{3}$.
14. Define *rational numbers*.
15. Give an example of a proper fraction. How is this different from an improper fraction?
16. Which property is being applied? $16 - (-14) = 16 + 14 = 30$
17. Simplify $11\frac{1}{2} + \frac{2}{9}$.

2.8 Expressions and the Distributive Property

Here you'll learn to simplify an expression in the form $M(N + K)$ or $M(N - K)$ by using the Distributive Property.

Suppose a piece of gift-wrapping paper had a length of 5 feet and a width of x feet. When wrapping a present, you cut off a vertical strip of 1 foot so that the width of the piece of gift-wrapping paper decreased by 1 foot. What would be the area of the remaining paper in square feet? Could you write this expression in simplified form? In this Concept, you'll learn to use the Distributive property so that you can simplify expressions like the one representing this area.

Guidance



At the end of the school year, an elementary school teacher makes a little gift bag for each of his students. Each bag contains one class photograph, two party favors, and five pieces of candy. The teacher will distribute the bags among his 28 students. How many of each item does the teacher need?

Example A

You could begin to solve this problem by deciding your variables.

Let $p = \text{photograph}$, $f = \text{favors}$, and $c = \text{candy}$.

Next you can write an expression to represent the situation: $p + 2f + 5c$.

There are 28 students in class, so the teacher needs to repeat the bag 28 times. An easier way to write this is $28 \cdot (p + 2f + 5c)$.

We can omit the multiplication symbol and write $28(p + 2f + 5c)$.

Therefore, the teacher needs $28p + 28(2f) + 28(5c)$ or $28p + 56f + 140c$.

The teacher needs 28 photographs, 56 favors, and 140 pieces of candy to complete the end-of-year gift bags.

When you multiply an algebraic expression by another expression, you apply the **Distributive Property**.

The **Distributive Property**: For any real numbers M , N , and K :

$$M(N + K) = MN + MK$$

$$M(N - K) = MN - MK$$

Example B

Determine the value of $11(2 + 6)$ using both Order of Operations and the Distributive Property.

Solution: Using the Order of Operations: $11(2 + 6) = 11(8) = 88$.

Using the Distributive Property: $11(2 + 6) = 11(2) + 11(6) = 22 + 66 = 88$.

Regardless of the method, the answer is the same.

Example C

Simplify $7(3x - 5)$.

Solution 1: Think of this expression as seven groups of $(3x - 5)$. You could write this expression seven times and add all the like terms.

$$(3x - 5) + (3x - 5) + (3x - 5) + (3x - 5) + (3x - 5) + (3x - 5) + (3x - 5) = 21x - 35$$

Solution 2: Apply the Distributive Property.

$$7(3x - 5) = 7(3x) + 7(-5) = 21x - 35$$

Video Review



MEDIA

Click image to the left for more content.



MEDIA

Click image to the left for more content.

Guided Practice

Simplify $\frac{2}{7}(3y^2 - 11)$.

Solution: Apply the Distributive Property.

$$\begin{aligned}\frac{2}{7}(3y^2 + -11) &= \frac{2}{7}(3y^2) + \frac{2}{7}(-11) = \\ \frac{2}{7} \frac{(3y^2)}{1} + \frac{2}{7} \frac{(-11)}{1} &= \frac{2 \times 3y^2}{7 \times 1} + \frac{2 \times (-11)}{7 \times 1} = \\ \frac{6y^2}{7} + \frac{-22}{7} &= \frac{6y^2}{7} - \frac{22}{7}\end{aligned}$$

Practice

Use the Distributive Property to simplify the following expressions.

- $(x+4) - 2(x+5)$
- $\frac{1}{2}(4z+6)$
- $(4+5) - (5+2)$
- $(x+2+7)$
- $0.25(6q+32)$
- $y(x+7)$
- $-4.2(h-11)$
- $13x(3y+z)$
- $\frac{1}{2}(x-y) - 4$
- $0.6(0.2x+0.7)$
- $(2-j)(-6)$
- $4(m+7) - 6(4-m)$
- $-5(y-11) + 2y$

Mixed Review

- Translate the following into an inequality: *Jacob wants to go to Chicago for his class trip. He needs at least \$244 for the bus, hotel stay, and spending money. He already has \$104. How much more does he need to pay for his trip?*
- Underline the math verb(s) in this sentence: *6 times a number is 4 less than 16.*
- Draw a picture to represent $3\frac{3}{4}$.
- Determine the change in y in the equation $y = \frac{1}{6}x - 4$ between $x = 3$ and $x = 9$.

2.9 When to Use the Distributive Property

Here you'll learn when to simplify an expression in the form $M(N + K)$ or $M(N - K)$ by using the Distributive Property.

David and Denise are having an argument. David says that you can't use the Distributive Property to simplify the expression $\frac{4x+5}{8}$, while Denise says that you can. Who do you think is right? After completing this Concept, you'll know when to use the Distributive Property to simplify expressions so that you can settle arguments such as these.

Guidance

Identifying Expressions Involving the Distributive Property

The Distributive Property often appears in expressions, and many times it does not involve parentheses as grouping symbols. In a previous Concept, we saw how the fraction bar acts as a grouping symbol. The following example involves using the Distributive Property with fractions.

Example A

Simplify $\frac{9-6y}{3}$.

Solution:

The denominator needs to be *distributed* to each part of the expression in the numerator.

We can rewrite the expression so that we can see how the Distributive Property should be used:

$$\begin{aligned}\frac{9-6y}{3} &= \frac{1}{3}(9-6y) = \\ \frac{1}{3}(9) - \frac{1}{3}(6y) &= \frac{9}{3} - \frac{6y}{3} = \\ 3 - 2y.\end{aligned}$$

Example B

Simplify $\frac{2x+4}{8}$.

Solution:

Think of the denominator as $\frac{1}{8}$: $\frac{2x+4}{8} = \frac{1}{8}(2x+4)$.

Now apply the Distributive Property: $\frac{1}{8}(2x) + \frac{1}{8}(4) = \frac{2x}{8} + \frac{4}{8}$.

Simplified: $\frac{x}{4} + \frac{1}{2}$.

Solve Real-World Problems Using the Distributive Property

The Distributive Property is one of the most common mathematical properties seen in everyday life. It crops up in business and in geometry. Anytime we have two or more groups of objects, the Distributive Property can help us solve for an unknown.

Example C

An octagonal gazebo is to be built as shown below. Building code requires five-foot-long steel supports to be added along the base and four-foot-long steel supports to be added to the roof-line of the gazebo. What length of steel will be required to complete the project?



Solution: Each side will require two lengths, one of five and one of four feet respectively. There are eight sides, so here is our equation.

Steel required = $8(4 + 5)$ feet.

We can use the Distributive Property to find the total amount of steel.

Steel required = $8 \times 4 + 8 \times 5 = 32 + 40$ feet.

A total of 72 feet of steel is needed for this project.

Video Review

MEDIA

Click image to the left for more content.



MEDIA

Click image to the left for more content.

Guided Practice

Simplify $\frac{10x+8y-1}{2}$.

Solution:

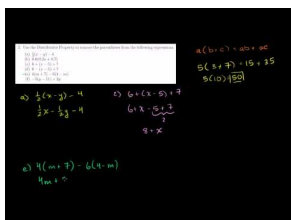
First we rewrite the expression so we can see how to distribute the denominator:

$$\frac{10x + 8y - 1}{2} = \frac{1}{2}(10x + 8y - 1) =$$

$$\frac{1}{2}(10x) + \frac{1}{2}(8y) - \frac{1}{2}(1) = 5x + 4y - \frac{1}{2}$$

Practice

Sample explanations for some of the practice exercises below are available by viewing the following video. Note that there is not always a match between the number of the practice exercise in the video and the number of the practice exercise listed in the following exercise set. However, the practice exercise is the same in both. [CK-12 Basic Algebra: Distributive Property \(5:39\)](#)



MEDIA

Click image to the left for more content.

Use the Distributive Property to simplify the following expressions.

- $(2 - j)(-6)$
- $(r + 3)(-5)$
- $6 + (x - 5) + 7$

Use the Distributive Property to simplify the following fractions.

- $\frac{8x+12}{4}$
- $\frac{9x+12}{3}$
- $\frac{11x+12}{2}$
- $\frac{3y+2}{6}$
- $-\frac{6z-2}{3}$
- $\frac{7-6p}{3}$

In 10 – 17, write an expression for each phrase.

- $\frac{2}{3}$ times the quantity of n plus 16
- Twice the quantity of m minus 3
- $-4x$ times the quantity of x plus 2
- A bookshelf has five shelves, and each shelf contains seven poetry books and eleven novels. How many of each type of book does the bookcase contain?
- Use the Distributive Property to show how to simplify $6(19.99)$ in your head.
- A student rewrote $4(9x + 10)$ as $36x + 10$. Explain the student's error.
- Use the Distributive Property to simplify $9(5998)$ in your head.
- Amar is making giant holiday cookies for his friends at school. He makes each cookie with 6 oz of cookie dough and decorates each one with macadamia nuts. If Amar has 5 lbs of cookie dough ($1 \text{ lb} = 16 \text{ oz}$) and 60 macadamia nuts, calculate the following.
 - How many (**full**) cookies can he make?

- b. How many macadamia nuts can he put on each cookie if each is supposed to be identical?



2.10 Division of Rational Numbers

Here you will learn how to use reciprocals to divide a number by a fraction, also known as a rational number.

Suppose a box of cereal is $\frac{4}{5}$ full, and you want to divide the remaining cereal into portions so that each portion is $\frac{1}{5}$ of the full box. In this case, you would have to divide a fraction by a fraction to come up with the number of portions you could make. After completing this Concept, you'll be able to use reciprocals to perform division problems such as these.

Guidance

Division of Rational Numbers

Previously, you have added, subtracted, and multiplied rational numbers. It now makes sense to learn how to divide rational numbers. We will begin with a definition of **inverse operations**.

Inverse operations "undo" each other.

For example, addition and subtraction are inverse operations because addition cancels subtraction and vice versa. The additive identity results in a sum of zero. In the same sense, multiplication and division are inverse operations. This leads into the next property: The Inverse Property of Multiplication.

The Inverse Property of Multiplication: For every nonzero number a , there is a multiplicative inverse $\frac{1}{a}$ such that $a\left(\frac{1}{a}\right) = 1$.

This means that the multiplicative inverse of a is $\frac{1}{a}$. The values of a and $\frac{1}{a}$ are called also called **reciprocals**. In general, two nonzero numbers whose product is 1 are multiplicative inverses or reciprocals.

Reciprocal: The reciprocal of a nonzero rational number $\frac{a}{b}$ is $\frac{b}{a}$.

Note: The number zero does not have a reciprocal.

Using Reciprocals to Divide Rational Numbers

When dividing rational numbers, use the following rule:

“When dividing rational numbers, multiply by the ‘right’ reciprocal.”

In this case, the “right” reciprocal means to take the reciprocal of the fraction on the right-hand side of the division operator.

Example A

Simplify $\frac{2}{9} \div \frac{3}{7}$.

Solution:

Begin by multiplying by the “right” reciprocal.

$$\frac{2}{9} \times \frac{7}{3} = \frac{14}{27}$$

Example B

Simplify $\frac{7}{3} \div \frac{2}{3}$.

Solution:

Begin by multiplying by the “right” reciprocal.

$$\frac{7}{3} \div \frac{2}{3} = \frac{7}{3} \times \frac{3}{2} = \frac{7 \cdot 3}{2 \cdot 3} = \frac{7}{2}$$

Instead of the division symbol \div , you may see a large fraction bar. This is seen in the next example.

Example C

Simplify $\frac{2}{3} \overline{) \frac{7}{8}}$.

Solution:

The fraction bar separating $\frac{2}{3}$ and $\frac{7}{8}$ indicates division.

$$\frac{2}{3} \overline{) \frac{7}{8}}$$

Simplify as in Example B:

$$\frac{2}{3} \times \frac{8}{7} = \frac{16}{21}$$

Video Review

MEDIA

Click image to the left for more content.



MEDIA

Click image to the left for more content.

Guided Practice

1. Find the multiplicative inverse of $\frac{5}{7}$.
2. Simplify $5 \div \frac{3}{2}$.

Solutions:

1. The multiplicative inverse of $\frac{5}{7}$ is $\frac{7}{5}$. We can see that by multiplying them together:

$$\frac{5}{7} \times \frac{7}{5} = \frac{5 \times 7}{7 \times 5} = \frac{35}{35} = 1.$$

2. When we are asked to divide by a fraction, we know we can rewrite the problem as multiplying by the reciprocal:

$$5 \div \frac{3}{2} = 5 \times \frac{2}{3} = \frac{5 \times 2}{3} = \frac{10}{3}$$

Practice

1. Define *inverse*.
2. What is a multiplicative inverse? How is this different from an additive inverse?

In 3 – 11, find the multiplicative inverse of each expression.

3. 100
4. $\frac{2}{8}$
5. $-\frac{19}{21}$
6. 7
7. $-\frac{z^3}{2xy^2}$
8. 0
9. $\frac{1}{3}$
10. $-\frac{19}{18}$
11. $\frac{3xy}{8z}$

In 12 – 20, divide the rational numbers. Be sure that your answer is in the simplest form.

12. $\frac{5}{2} \div \frac{1}{4}$
13. $\frac{1}{2} \div \frac{7}{9}$
14. $\frac{5}{11} \div \frac{6}{7}$
15. $\frac{1}{2} \div \frac{1}{2}$
16. $-\frac{x}{2} \div \frac{5}{7}$
17. $\frac{1}{2} \div \frac{x}{4y}$
18. $\left(-\frac{1}{3}\right) \div \left(-\frac{3}{5}\right)$
19. $\frac{7}{2} \div \frac{7}{4}$
20. $11 \div \left(-\frac{x}{4}\right)$

2.11 Applications of Reciprocals

Here you'll learn how to divide by fractions in real-world contexts by using reciprocals.

Suppose that a car did one lap around a circular race track with a circumference of $1\frac{4}{7}$ miles. If you use $\frac{22}{7}$ as an approximation for π , could you find the diameter of the race track? After completing this Concept, you'll be able to solve real-world problems such as this by using reciprocals.

Guidance

Using Reciprocals to Solve Real-World Problems

The need to divide rational numbers is necessary for solving problems in physics, chemistry, and manufacturing. The following example illustrates the need to divide fractions in physics.

Example A

Newton's Second Law relates acceleration to the force of an object and its mass: $a = \frac{F}{m}$. Suppose $F = 7\frac{1}{3}$ and $m = \frac{1}{5}$. Find a , the acceleration.

Solution: Before beginning the division, the mixed number of force must be rewritten as an improper fraction.

Replace the fraction bar with a division symbol and simplify: $a = \frac{22}{3} \div \frac{1}{5}$.

$\frac{22}{3} \times \frac{5}{1} = \frac{110}{3} = 36\frac{2}{3}$. Therefore, the acceleration is $36\frac{2}{3} \text{ m/s}^2$.

Example B

Anne runs a mile and a half in one-quarter hour. What is her speed in miles per hour?

Solution: Use the formula $speed = \frac{distance}{time}$.

$$s = 1.5 \div \frac{1}{4}$$

Rewrite the expression and simplify: $s = \frac{3}{2} \cdot \frac{4}{1} = \frac{4 \cdot 3}{2 \cdot 1} = \frac{12}{2} = 6 \text{ mi/hr}$.

Example C

For a certain recipe of cookies, you need 3 cups of flour for every 2 cups of sugar. If Logan has $\frac{1}{2}$ cup flour, how many cups of sugar will he need to use to make a smaller batch?

Solution: First we need to figure out how many times bigger 3 is than $\frac{1}{2}$, by dividing 3 by $\frac{1}{2}$:

$$3 \div \frac{1}{2} = 3 \times \frac{2}{1} = 3 \times 2 = 6.$$

Since $\frac{1}{2}$ goes into 3 six times, then we need to divide the 2 cups of sugar by 6:

$$2 \div 6 = 2 \times \frac{1}{6} = \frac{2}{6} = \frac{1}{3}.$$

Logan needs $\frac{1}{3}$ cup of sugar to make a smaller batch with $\frac{1}{2}$ cup flour.

Video Review



MEDIA

Click image to the left for more content.



MEDIA

Click image to the left for more content.

Guided Practice

1. Newton's Second Law relates acceleration to the force of an object and its mass: $a = \frac{F}{m}$. Suppose $F = 5\frac{1}{2}$ and $m = \frac{2}{3}$. Find a , the acceleration.
2. Mayra runs 3 and a quarter miles in one-half hour. What is her speed in miles per hour?

Solutions:

1. Before we substitute the values into the formula, we must turn the mixed fraction into an improper fraction:

$$5\frac{1}{2} = \frac{5 \times 2 + 1}{2} = \frac{11}{2}$$

$$\begin{aligned} a &= \frac{F}{m} = \frac{\frac{11}{2}}{\frac{2}{3}} = \\ &= \frac{11}{2} \div \frac{2}{3} = \frac{11}{2} \times \frac{3}{2} = \\ &= \frac{11 \times 3}{2 \times 2} = \frac{33}{4} = 8\frac{1}{4} \end{aligned}$$

Therefore, the acceleration is $8\frac{1}{4}m/s^2$.

2. Use the formula $speed = \frac{distance}{time}$:

$$\begin{aligned} speed &= \frac{distance}{time} = 3\frac{1}{4} \div \frac{1}{2} = \\ &= \frac{13}{4} \div \frac{1}{2} = \frac{13}{4} \times 2 = \\ &= \frac{13 \times 2}{4}. \end{aligned}$$

Before we continue, we will simplify the fraction:

$$\frac{13 \times 2}{4} = \frac{13 \times 2}{2 \times 2} = \frac{13}{2} = 6\frac{1}{2}.$$

Mayra can run 6-and-a-half miles per hour.

Practice

In 1 – 3, evaluate the expression.

1. $\frac{x}{y}$ for $x = \frac{3}{8}$ and $y = \frac{4}{3}$
2. $4z \div u$ for $u = 0.5$ and $z = 10$
3. $\frac{-6}{m}$ for $m = \frac{2}{5}$
4. The label on a can of paint states that it will cover 50 square feet per pint. If I buy a $\frac{1}{8}$ -pint sample, it will cover a square two feet long by three feet high. Is the coverage I get more, less, or the same as that stated on the label?
5. The world's largest trench digger, "Bagger 288," moves at $\frac{3}{8}$ mph. How long will it take to dig a trench $\frac{2}{3}$ -mile long?
6. A $\frac{2}{7}$ Newton force applied to a body of unknown mass produces an acceleration of $\frac{3}{10} m/s^2$. Calculate the mass of the body. Note: Newton = $kg\ m/s^2$
7. Explain why the reciprocal of a nonzero rational number is not the same as the opposite of that number.
8. Explain why zero does not have a reciprocal.

Mixed Review

Simplify.

9. $199 - (-11)$
10. $-2.3 - (-3.1)$
11. $|16 - 84|$
12. $|\frac{-11}{4}|$
13. $(4 \div 2 \times 6 + 10 - 5)^2$
14. Evaluate $f(x) = \frac{1}{9}(x - 3)$; $f(21)$.
15. Define *range*.

2.12 Square Roots and Irrational Numbers

Here you'll learn how to decide whether a number is rational or irrational and how to take the square root of a number.

Suppose an elementary school has a square playground with an area of 3000 square feet. Could you find the width of the playground? Would the width be a rational or irrational number? In this Concept, you'll learn how to take the square root of a number and decide whether the result is rational or irrational so that you can answer questions such as these.

Guidance



Human chess is a variation of chess, often played at Renaissance fairs, in which people take on the roles of the various pieces on a chessboard. The chessboard is played on a square plot of land that measures 324 square meters with the chess squares marked on the grass. How long is each side of the chessboard?

To answer this question, you will need to know how to find the square root of a number.

The **square root** of a number n is any number s such that $s^2 = n$.

Every positive number has two square roots, the positive and the negative. The symbol used to represent the square root is \sqrt{x} . It is assumed that this is the positive square root of x . To show both the positive and negative values, you can use the symbol \pm , read “plus or minus.”

For example:

$\sqrt{81} = 9$ means the positive square root of 81.

$-\sqrt{81} = -9$ means the negative square root of 81.

$\pm\sqrt{81} = \pm 9$ means the positive or negative square root of 81.

Example A

The human chessboard measures 324 square meters. How long is one side of the square?

Solution: The area of a square is $s^2 = \text{Area}$. The value of *Area* can be replaced with 324.

$$s^2 = 324$$

The value of s represents the square root of 324.

$$s = \sqrt{324} = 18$$

The chessboard is 18 meters long by 18 meters wide.

Approximating Square Roots

When the square root of a number is a whole number, this number is called a **perfect square**. 9 is a perfect square because $\sqrt{9} = 3$.

Not all square roots are whole numbers. Many square roots are irrational numbers, meaning there is no rational number equivalent. For example, 2 is the square root of 4 because $2 \times 2 = 4$. The number 7 is the square root of 49 because $7 \times 7 = 49$. What is the square root of 5?

There is no whole number multiplied by itself that equals five, so $\sqrt{5}$ is not a whole number. To find the value of $\sqrt{5}$, we can use estimation.

To estimate the square root of a number, look for the perfect integers **less than** and **greater than** the value, and then estimate the decimal.

Example B

Estimate $\sqrt{5}$.

Solution: The perfect square below 5 is 4 and the perfect square above 5 is 9. Therefore, $4 < 5 < 9$. Therefore, $\sqrt{5}$ is between $\sqrt{4}$ and $\sqrt{9}$, or $2 < \sqrt{5} < 3$. Because 5 is closer to 4 than 9, the decimal is a low value: $\sqrt{5} \approx 2.2$.

Identifying Irrational Numbers

Recall the number hierarchy from a previous Concept. Real numbers have two categories: rational and irrational. If a value is not a perfect square, then it is considered an **irrational number**. These numbers cannot be written as a fraction because the decimal does not end (**non-terminating**) and does not repeat a pattern (**non-repeating**). Although irrational square roots cannot be written as fractions, we can still write them **exactly**, without typing the value into a calculator.

For example, suppose you do not have a calculator and you need to find $\sqrt{18}$. You know there is no whole number squared that equals 18, so $\sqrt{18}$ is an irrational number. The value is between $\sqrt{16} = 4$ and $\sqrt{25} = 5$. However, we need to find the exact value of $\sqrt{18}$.

Begin by writing the **prime factorization** of $\sqrt{18}$. $\sqrt{18} = \sqrt{9 \times 2} = \sqrt{9} \times \sqrt{2}$. $\sqrt{9} = 3$ but $\sqrt{2}$ does not have a whole number value. Therefore, the exact value of $\sqrt{18}$ is $3\sqrt{2}$.

You can check your answer on a calculator by finding the decimal approximation for each square root.

Example C

Find the exact value of $\sqrt{75}$.

Solution:

$$\sqrt{75} = \sqrt{25 \times 3} = \sqrt{25} \times \sqrt{3} = 5\sqrt{3}$$

Video Review



MEDIA

Click image to the left for more content.



MEDIA

Click image to the left for more content.

Guided Practice

The area of a square is 50 square feet. What are the lengths of its sides?

Solution:

We know that the formula for the area of a square is $a = s^2$. Using this formula:

$$\begin{aligned} a &= s^2 \\ 50 &= s^2 \\ \sqrt{50} &= \sqrt{s^2} \\ \sqrt{50} &= s \end{aligned}$$

Now we will simplify:

$$\sqrt{50} = \sqrt{25 \cdot 2} = 5\sqrt{2}.$$

The length of each side of the square is $5\sqrt{2}$ feet.

Practice

Find the following square roots **exactly without using a calculator**. Give your answer in the simplest form.

1. $\sqrt{25}$
2. $\sqrt{24}$
3. $\sqrt{20}$
4. $\sqrt{200}$
5. $\sqrt{2000}$
6. $\sqrt{\frac{1}{4}}$
7. $\sqrt{\frac{9}{4}}$
8. $\sqrt{0.16}$
9. $\sqrt{0.1}$

10. $\sqrt{0.01}$

Use a calculator to find the following square roots. Round to two decimal places.

11. $\sqrt{13}$

12. $\sqrt{99}$

13. $\sqrt{123}$

14. $\sqrt{2}$

15. $\sqrt{2000}$

16. $\sqrt{0.25}$

17. $\sqrt{1.35}$

18. $\sqrt{0.37}$

19. $\sqrt{0.7}$

20. $\sqrt{0.01}$

2.13 Order of Real Numbers

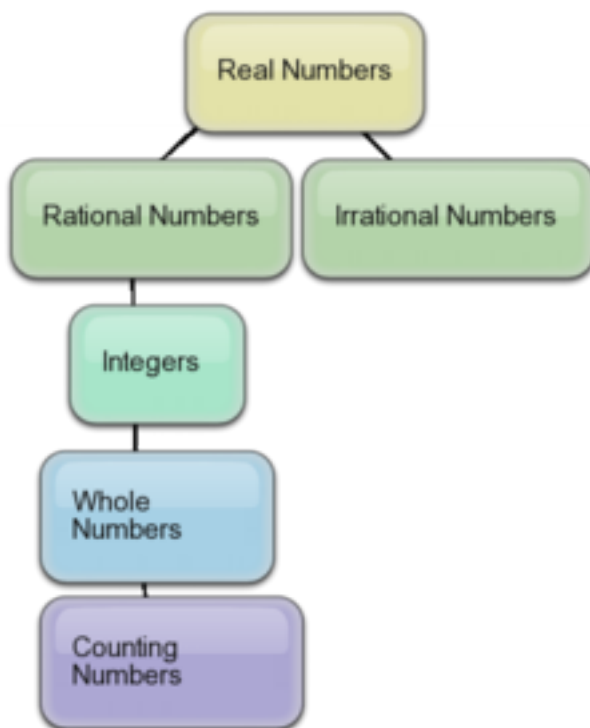
Here you'll learn how to decide if a number is a whole number, an integer, a rational or irrational number, or a real number. You'll also learn how to put numbers in order and how to graph them on a number line.

Suppose that you and three friends were playing a game where you each drew a number from a hat and the person with the highest number won. Let's say that you drew the number $\frac{3}{2}$, while your friends drew the numbers $\sqrt{3}$, 1.7, and $\frac{\pi}{3}$, respectively. Could you figure out who won the game? In this Concept, you'll learn how to classify, order, and graph real numbers so that you can compare values such as these.

Guidance

Classifying Real Numbers

Example A



Using the chart above, categorize the following numbers:

- a) 0
- b) -1
- c) $\frac{\pi}{3}$
- d) $\frac{\sqrt{36}}{9}$

Solutions:

- a) Zero is a whole number, an integer, a rational number, and a real number.
- b) -1 is an integer, a rational number, and a real number.
- c) $\frac{\pi}{3}$ is an irrational number and a real number.
- d) $\frac{\sqrt{36}}{9} = \frac{6}{9} = \frac{2}{3}$. This is a rational number and a real number.

Graphing and Ordering Real Numbers

Every real number can be positioned between two integers. Many times you will need to organize real numbers to determine the least value, greatest value, or both. This is usually done on a number line.

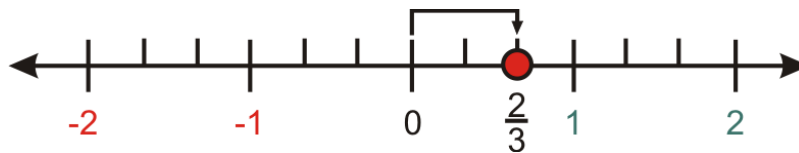
Example B

Plot the following rational numbers on a number line.

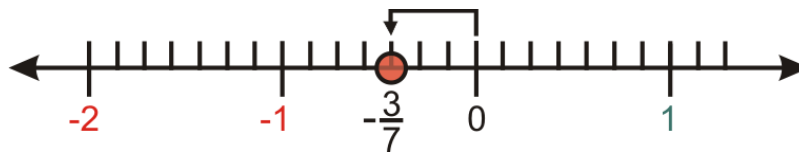
- a) $\frac{2}{3}$
- b) $-\frac{3}{7}$
- c) $\frac{57}{16}$

Solutions:

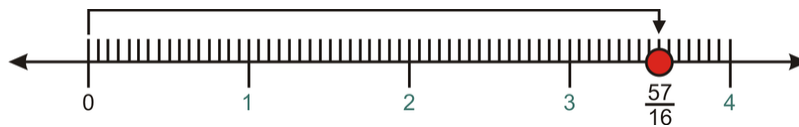
- a) $\frac{2}{3} = 0.\overline{6}$, which is between 0 and 1.



- b) $-\frac{3}{7}$ is between -1 and 0 .



- c) $\frac{57}{16} = 3.5625$



Example C

Compare $\frac{\pi}{15}$ and $\frac{\sqrt{3}}{\sqrt{75}}$.

Solution:

First we simplify in order to better compare:

$$\frac{\sqrt{3}}{\sqrt{75}} = \frac{\sqrt{3}}{5\sqrt{3}} = \frac{1}{5}.$$

Now we rewrite $\frac{\pi}{15}$ to compare it to $\frac{1}{5}$:

$$\frac{\pi}{15} = \frac{\pi}{3 \times 5} = \frac{\pi}{3} \times \frac{1}{5}.$$

Since $\pi > 3$,

$$\frac{\pi}{3} > 1$$

so

$$\frac{\pi}{3} \times \frac{1}{5} > \frac{1}{5}.$$

Therefore, $\frac{\pi}{15} > \frac{\sqrt{3}}{\sqrt{75}}$.

Video Review



MEDIA

Click image to the left for more content.



MEDIA

Click image to the left for more content.

Guided Practice

For the numbers: $\frac{\sqrt{12}}{2}$, $1.5 \cdot \sqrt{3}$, $\frac{3}{2}$, $\frac{2\sqrt{5}}{\sqrt{20}}$

1. Classify each number.
2. Order the four numbers.

Solutions:

1. We need to simplify the numbers in order to classify them:

$\frac{\sqrt{12}}{2} = \frac{\sqrt{4 \times 3}}{2} = \frac{2\sqrt{3}}{2} = \sqrt{3}$. This is an irrational number. An irrational number is a type of real number.

$1.5 \cdot \sqrt{3}$. This number cannot be simplified, but since it is a multiple of an irrational number, it is also irrational. In other words, we cannot get rid of the irrational part, and so we cannot write it as a rational number. It is also a real number.

$\frac{3}{2}$. Since this number is in the form of a proper fraction, it is also a rational number and real number.

$\frac{2\sqrt{5}}{\sqrt{20}} = \frac{2\sqrt{5}}{\sqrt{4 \times 5}} = \frac{2\sqrt{5}}{2\sqrt{5}} = 1$. This number can be simplified to an integer. All integers can be expressed as rational numbers and are a special kind of real number.

2. The four numbers are ordered as follows: $1 < \frac{3}{2} < \sqrt{3} < 1.5 \cdot \sqrt{3}$.


$1 < \frac{3}{2}$ since the numerator is larger than the denominator and $\frac{3}{2} = 1.5$.

$\frac{3}{2} < \sqrt{3}$ since we can see on our calculators that $\sqrt{3} \approx 1.7$

$\sqrt{3} < 1.5 \cdot \sqrt{3}$ since multiplying by 1.5 makes any number larger.

Practice

Sample explanations for some of the practice exercises below are available by viewing the following video. Note that there is not always a match between the number of the practice exercise in the video and the number of the practice exercise listed in the following exercise set. However, the practice exercise is the same in both. [CK-12 Basic Algebra: Square Roots and Real Numbers \(10:18\)](#)



MEDIA

Click image to the left for more content.

Classify the following numbers. Include all the categories that apply to the number.

- $\sqrt{0.25}$
- $\sqrt{1.35}$
- $\sqrt{20}$
- $\sqrt{25}$
- $\sqrt{100}$
- Place the following numbers in numerical order from lowest to highest.

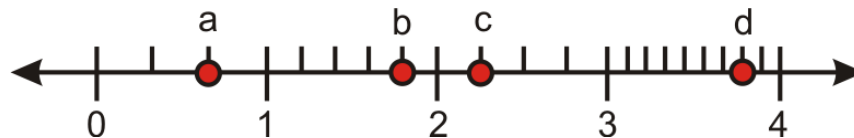
$$\frac{\sqrt{6}}{2}$$

$$\frac{61}{50}$$

$$\sqrt{1.5}$$

$$\frac{16}{13}$$

- Find the value of each marked point.



Mixed Review

- Simplify $\frac{9}{4} \div 6$.
- The area of a triangle is given by the formula $A = \frac{b(h)}{2}$, where $b = \text{base of the triangle}$ and $h = \text{height of the triangle}$. Determine the area of a triangle with $\text{base} = 3 \text{ feet}$ and $\text{height} = 7 \text{ feet}$.
- Reduce the fraction $\frac{144}{6}$.
- Construct a table for the following situation: *Tracey jumps 60 times per minute*. Let the minutes be $\{0, 1, 2, 3, 4, 5, 6\}$. What is the range of this function?

2.14 Guess and Check, Work Backward

Here you'll learn about the problem-solving strategies guess and check and working backward so that you can effectively tackle many questions that arise in the real world.

Suppose that you and your brother both play baseball. Last season, you had 12 more hits than 3 times the number of hits that your brother had. If you had 159 hits, could you figure out how many hits your brother had? In this Concept, you'll learn how to guess and check and work backward so that you can solve problems such as this.

Guidance

This lesson will expand your toolbox of problem-solving strategies to include **guess and check** and **working backward**. Let's begin by reviewing the four-step problem-solving plan.

Step 1: Understand the problem.

Step 2: Devise a plan – Translate.

Step 3: Carry out the plan – Solve.

Step 4: Look – Check and Interpret.

Develop and Use the Strategy: Guess and Check

The strategy for the “guess and check” method is to guess a solution and use that guess in the problem to see if you get the correct answer. If the answer is too big or too small, then make another guess that will get you closer to the goal. You continue guessing until you arrive at the correct solution. The process might sound like a long one; however, the guessing process will often lead you to patterns that you can use to make better guesses along the way.

Here is an example of how this strategy is used in practice.

Example A

Nadia takes a ribbon that is 48 inches long and cuts it in two pieces. One piece is three times as long as the other. How long is each piece?

Solution: We need to find two numbers that add to 48. One number is three times the other number.

Guess	5 and 15	The sum is $5 + 15 = 20$,	which is too small.
Guess bigger numbers	6 and 18	The sum is $6 + 18 = 24$,	which is too small.

However, you can see that the previous answer is exactly half of 48.

Multiply 6 and 18 by two.

Our next guess is	12 and 36.	The sum is $12 + 36 = 48$.	This is correct.
-------------------	------------	-----------------------------	------------------

Develop and Use the Strategy: Work Backward

The “work backward” method works well for problems in which a series of operations is applied to an unknown quantity and you are given the resulting value. The strategy in these problems is to start with the result and apply the

operations in reverse order until you find the unknown. Let's see how this method works by solving the following problem.

Example B

Anne has a certain amount of money in her bank account on Friday morning. During the day she writes a check for \$24.50, makes an ATM withdrawal of \$80, and deposits a check for \$235. At the end of the day, she sees that her balance is \$451.25. How much money did she have in the bank at the beginning of the day?

Solution: We need to find the money in Anne's bank account at the beginning of the day on Friday. From the unknown amount, we subtract \$24.50 and \$80 and we add \$235. We end up with \$451.25. We need to start with the result and apply the operations in reverse.

Start with \$451.25. Subtract \$235, add \$80, and then add \$24.50.

$$451.25 - 235 + 80 + 24.50 = 320.75$$

Anne had \$320.75 in her account at the beginning of the day on Friday.

Plan and Compare Alternative Approaches to Solving Problems

Most word problems can be solved in more than one way. Often one method is more straightforward than others. In this section, you will see how different problem-solving approaches compare when solving different kinds of problems.

Example C

Nadia's father is 36. He is 16 years older than four times Nadia's age. How old is Nadia?

Solution: This problem can be solved with either of the strategies you learned in this section. Let's solve the problem using both strategies.

Guess and Check Method:

We need to find Nadia's age.

We know that her father is 16 years older than four times her age, or $4 \times (\text{Nadia's age}) + 16$.

We know her father is 36 years old.

Work Backward Method:

Nadia's father is 36 years old.

To get from Nadia's age to her father's age, we multiply Nadia's age by four and add 16.

Working backward means we start with the father's age, subtract 16, and divide by 4.

Video Review



MEDIA

Click image to the left for more content.



MEDIA

Click image to the left for more content.

Guided Practice

Hana rents a car for a day. Her car rental company charges \$50 per day and \$0.40 per mile. Peter rents a car from a different company that charges \$70 per day and \$0.30 per mile. How many miles do they have to drive before Hana and Peter pay the same price for the rental for the same number of miles?

Solution: Hana's total cost is \$50 plus \$0.40 times the number of miles.

Peter's total cost is \$70 plus \$0.30 times the number of miles.

Guess the number of miles and use this guess to calculate Hana's and Peter's total cost.

Keep guessing until their total cost is the same.


Guess	50 miles		
Check	$\$50 + \$0.40(50) = \$70$		$\$70 + \$0.30(50) = \$85$
Guess	60 miles		
Check	$\$50 + \$0.40(60) = \$74$		$\$70 + \$0.30(60) = \$88$

Notice that for an increase of 10 miles, the difference between total costs fell from \$15 to \$14. To get the difference to zero, we should try increasing the mileage by 140 miles.

Guess	200 miles		
Check	$\$50 + \$0.40(200) = \$130$	$\$70 + \$0.30(200) = \$130$	correct

Practice

Sample explanations for some of the practice exercises below are available by viewing the following video. Note that there is not always a match between the number of the practice exercise in the video and the number of the practice exercise listed in the following exercise set. However, the practice exercise is the same in both. [CK-12 Basic Algebra: Problem Solving Word Problems 2](#) (12:20)



MEDIA

Click image to the left for more content.

1. Nadia is at home and Peter is at school, which is 6 miles away from home. They start traveling toward each other at the same time. Nadia is walking at 3.5 miles per hour and Peter is skateboarding at 6 miles per hour. When will they meet and how far from home is their meeting place?
2. Peter bought several notebooks at Staples for \$2.25 each and he bought a few more notebooks at Rite-Aid for \$2 each. He spent the same amount of money in both places and he bought 17 notebooks in total. How many notebooks did Peter buy in each store?
3. Andrew took a handful of change out of his pocket and noticed that he was holding only dimes and quarters in his hand. He counted that he had 22 coins that amounted to \$4. How many quarters and how many dimes does Andrew have?
4. Anne wants to put a fence around her rose bed that is one-and-a-half times as long as it is wide. She uses 50 feet of fencing. What are the dimensions of the garden?
5. Peter is outside looking at the pigs and chickens in the yard. Nadia is indoors and cannot see the animals. Peter gives her a puzzle. He tells her that he counts 13 heads and 36 feet and asks her how many pigs and how many chickens are in the yard. Help Nadia find the answer.
6. Andrew invests \$8000 in two types of accounts: a savings account that pays 5.25% interest per year and a more risky account that pays 9% interest per year. At the end of the year, he has \$450 in interest from the two accounts. Find the amount of money invested in each account.
7. There is a bowl of candy sitting on our kitchen table. This morning Nadia takes one-sixth of the candy. Later that morning Peter takes one-fourth of the candy that's left. This afternoon, Andrew takes one-fifth of what's left in the bowl and finally Anne takes one-third of what is left in the bowl. If there are 16 candies left in the bowl at the end of the day, how much candy was there at the beginning of the day?
8. Nadia can completely mow the lawn by herself in 30 minutes. Peter can completely mow the lawn by himself in 45 minutes. How long does it take both of them to mow the lawn together?

Mixed Review

9. Rewrite $\sqrt{500}$ as a simplified square root.
10. To which number categories does $-\frac{2}{13}$ belong?
11. Simplify $\frac{1}{2}|19 - 65| - 14$.
12. Which property is being applied? $16 + 4c + 11 = (16 + 11) + 4c$
13. Is $\{(4, 2), (4, -2), (9, 3), (9, -3)\}$ a function?
14. Write using function notation: $y = \frac{1}{12}x - 5$.
15. *Jordyn spent \$36 on four cases of soda. How much was each case?*

Summary

This chapter talks about the properties of rational numbers and how to add, subtract, multiply, and divide them. It also shows how to add integers and covers additive inverses, absolute values, reciprocals, and the distributive property. Square roots and irrational numbers are discussed as well, and how to classify and order real numbers is explained in detail. Finally, many real-world problems are given, and the chapter concludes by going over the guess and check and working backward problem-solving strategies.

Properties of Real Numbers Review

Compare the real numbers.

1. 7 and -11
2. $\frac{4}{5}$ and $\frac{11}{16}$

3. $\frac{10}{15}$ and $\frac{2}{3}$
4. 0.985 and $\frac{31}{32}$
5. -16.12 and $-\frac{300}{9}$

Order the real numbers from least to greatest.

6. $\frac{8}{11}, \frac{7}{10}, \frac{5}{9}$
7. $\frac{2}{7}, \frac{1}{11}, \frac{8}{13}, \frac{4}{7}, \frac{8}{9}$

Graph these values on the same number line.

8. $3\frac{1}{3}$
9. -1.875
10. $\frac{7}{8}$
11. $0.\overline{16}$
12. $-\frac{55}{5}$

Simplify by applying the Distributive Property.

13. $6n(-2 + 5n) - n(-3n - 8)$
14. $7x + 2(-6x + 2)$
15. $-7x(x + 5) + 3(4x - 8)$
16. $-3(-6r - 5) - 2r(1 + 6r)$
17. $1 + 3(p + 8)$
18. $3(1 - 5k) - 1$

Approximate the square root to the nearest hundredth.

19. $\sqrt{26}$
20. $\sqrt{330}$
21. $\sqrt{625}$
22. $\sqrt{121}$
23. $\sqrt{225}$
24. $\sqrt{11}$
25. $\sqrt{8}$

Rewrite the square root without using a calculator.

26. $\sqrt{50}$
27. $\sqrt{8}$
28. $\sqrt{80}$
29. $\sqrt{32}$

Simplify by combining like terms.

30. $8 + b + 1 - 7b$
31. $9n + 9n + 17$
32. $7h - 3 + 3$
33. $9x + 11 - x - 3 + 5x + 2$

Evaluate.

34. $\frac{8}{5} - \frac{4}{3}$
35. $\frac{4}{3} - \frac{1}{2}$
36. $\frac{1}{6} + 1\frac{5}{6}$
37. $\frac{-5}{4} \times \frac{1}{3}$
38. $\frac{4}{9} \times \frac{7}{4}$
39. $-1\frac{5}{7} \times -2\frac{1}{2}$
40. $\frac{1}{9} \div -1\frac{1}{3}$
41. $\frac{-3}{2} \div \frac{-10}{7}$
42. $-3\frac{7}{10} \div 2\frac{1}{4}$
43. $1\frac{1}{5} - (-3\frac{3}{4})$
44. $4\frac{2}{3} + 3\frac{2}{3}$
45. $5.4 + (-9.7)$
46. $(-7.1) + (-0.4)$
47. $(-4.79) + (-3.63)$
48. $(-8.1) - (-8.9)$
49. $1.58 - (-13.6)$
50. $(-13.6) + 12 - (-15.5)$
51. $(-5.6) - (-12.6) + (-6.6)$
52. $19.4 + 24.2$
53. $8.7 + 3.8 + 12.3$
54. $9.8 - 9.4$
55. $2.2 - 7.3$

List all the categories that apply to the following numbers.

56. 10.9
57. $\frac{-9}{10}$
58. 3π
59. $\frac{\pi}{2} - \frac{\pi}{2}$
60. -21
61. 8

Which property has been applied?

62. $6.78 + (-6.78) = 0$
63. $9.8 + 11.2 + 1.2 = 9.8 + 1.2 + 11.2$
64. $3a + (4a + 8) = (3a + 4a) + 8$
65. $\frac{4}{3} - (-\frac{5}{6}) = \frac{4}{3} + \frac{5}{6}$
66. $(1)j = j$
67. $8(11)(\frac{1}{8}) = 8(\frac{1}{8})(11)$

Solve the real-world situation.

68. Carol has 18 feet of fencing and purchased an additional 132 inches. How much fencing does Carol have?
69. Ulrich is making cookies for a fundraiser. Each cookie requires $\frac{3}{8}$ -pound of dough. He has 12 pounds of cookie dough. How many cookies can Ulrich make?
70. Herrick bought 11 DVDs at \$19.99 each. Use the Distributive Property to show how Herrick can mentally calculate the amount of money he will need.
71. Bagger 288 is a trench digger, which moves at $\frac{3}{8}$ miles/hour. How long will it take to dig a trench 14 miles long?

72. Georgia started with a given amount of money, a . She spent \$4.80 on a large latte, \$1.20 on an English muffin, \$68.48 on a new shirt, and \$32.45 for a present. She now has \$0.16. How much money, a , did Georgia have in the beginning?
73. The formula for the area of a square is $A = s^2$. A square garden has an area of 145 meters². Find the exact length of the garden.

Properties of Real Numbers Test

Simplify by using the Distributive Property.

1. $-3 + 7(3a - 2)$
2. $8(3 + 2q) + 5(q + 3)$

Simplify.

3. $8p - 5p$
4. $9z + 33 - 2z - 15$
5. $-\frac{9}{5} \div 2$
6. $1\frac{6}{7} \times 5\frac{3}{4}$
7. $\frac{1}{2} - 3\frac{2}{3}$
8. $\frac{3}{14} + \frac{15}{8}$
9. $3.5 - 5 - 10.4$
10. $\frac{1}{6} - (-6.5) \times \frac{6}{5}$

Find the exact value of the square root without a calculator.

11. $\sqrt{125}$
12. $\sqrt{18}$
13. How is the multiplicative inverse different from the additive inverse?
14. A square plot of land has an area of 168 *miles*². To the nearest tenth, what is the length of the land?
15. Troy plans to equally divide 228 candies among 16 people. Can this be done? Explain your answer.
16. Laura withdrew \$15 from the ATM, wrote a check for \$46.78, and deposited her paycheck of \$678.12. After her deposit she had \$1123.45 in her account. How much money did Laura begin with?
17. Will the area of a circle always be an irrational number? Explain your reasoning.
18. When would you use the Commutative Property of Multiplication? Give an example to help illustrate your explanation.

Texas Instruments Resources

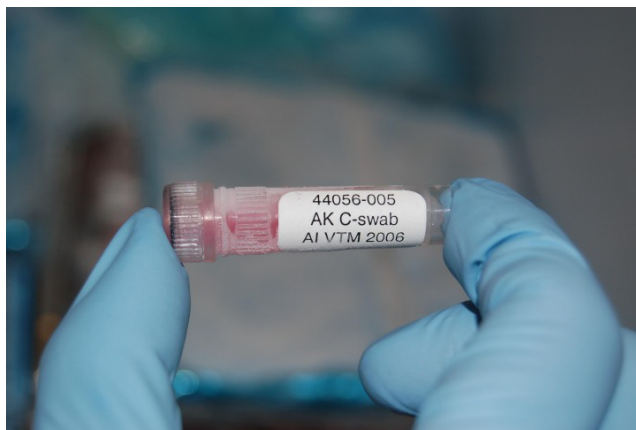
In the CK-12 Texas Instruments Algebra I FlexBook, there are graphing calculator activities designed to supplement the objectives for some of the lessons in this chapter. See <http://www.ck12.org/flexr/chapter/9612>.

Chapter Outline

- 3.1 ONE-STEP EQUATIONS AND INVERSE OPERATIONS
- 3.2 APPLICATIONS OF ONE-STEP EQUATIONS
- 3.3 TWO-STEP EQUATIONS AND PROPERTIES OF EQUALITY
- 3.4 MULTI-STEP EQUATIONS WITH LIKE TERMS
- 3.5 DISTRIBUTIVE PROPERTY FOR MULTI-STEP EQUATIONS
- 3.6 EQUATIONS WITH VARIABLES ON BOTH SIDES
- 3.7 EQUATIONS WITH RATIOS AND PROPORTIONS
- 3.8 SCALE AND INDIRECT MEASUREMENT APPLICATIONS
- 3.9 CONVERSION OF DECIMALS, FRACTIONS, AND PERCENT
- 3.10 PERCENT EQUATIONS
- 3.11 PERCENT OF CHANGE
- 3.12 FORMULAS FOR PROBLEM SOLVING

Introduction

Aside from simplifying algebraic expressions and graphing functions, solving equations is one of the most important concepts in mathematics. To successfully manipulate an equation, you must understand and be able to apply the rules of mathematics.



Mathematical equations are used in many different career fields. Medical researchers use equations to determine the length of time it takes for a drug to circulate throughout the body, botanists use equations to determine the amount of time it takes a Sequoia tree to reach a particular height, and environmental scientists can use equations to approximate the number of years it will take to repopulate the bison species.



In this chapter, you will learn how to manipulate linear equations to solve for a particular variable. You already have some experience solving equations. This chapter is designed to help formalize the mental math you use to answer questions in daily life.



3.1 One-Step Equations and Inverse Operations

Here you'll learn how to isolate variables using inverse operations in order to solve equations in one step.

What if you were in a math contest and were given the equation $x + 4 = 16$? Or how about the equation $9x = 72$? Could you solve each of these equations in one step? After completing this Concept, you'll be able to solve equations like these in a just a single step by using inverse operations.

Guidance

It's Easier than You Think

You have been solving equations since the beginning of this textbook, although you may not have recognized it. For example, in a previous Concept, you determined the answer to the pizza problem below.

$\$20.00$ was one-quarter of the money spent on pizza.

$\frac{1}{4}m = 20.00$ What divided by 4 equals 20.00?

The solution is 80. So, the amount of money spent on pizza was $\$80.00$.

By working through this question mentally, you were applying mathematical rules and solving for the variable m .

Definition: To **solve** an equation means to write an equivalent equation that has the variable by itself on one side. This is also known as **isolating the variable**.

In order to begin solving equations, you must understand three basic concepts of algebra: inverse operations, equivalent equations, and the Addition Property of Equality.

Inverse Operations and Equivalent Equations

In another Concept, you learned how to simplify an expression using the Order of Operations: **P**arentheses, **E**xponents, **M**ultiplication and **D**ivision completed in order from left to right, and **A**ddition and **S**ubtraction (also completed from left to right). Each of these operations has an **inverse**. Inverse operations “undo” each other when combined.

For example, the inverse of addition is subtraction. The inverse of an exponent is a root.

Definition: **Equivalent equations** are two or more equations having the same solution.

The Addition Property of Equality

Just like Spanish, chemistry, or even music, mathematics has a set of rules you must follow in order to be successful. These rules are called properties, theorems, or axioms. They have been proven or agreed upon years ago, so you can apply them to many different situations.

For example, the **Addition Property of Equality** allows you to apply the same operation to each side of an equation, or “what you do to one side of an equation you can do to the other.”

The Addition Property of Equality

For all real numbers a , b , and c :

If $a = b$, then $a + c = b + c$.

Solving One-Step Equations Using Addition or Subtraction

Because subtraction can be considered “adding a negative,” the Addition Property of Equality also works if you need to subtract the same value from each side of an equation.

Example A

Solve for y :

$$16 = y - 11.$$

Solution: When asked to solve for y , your goal is to write an equivalent equation with the variable y isolated on one side.

Write the original equation: $16 = y - 11$.

Apply the Addition Property of Equality: $16 + 11 = y - 11 + 11$.

Simplify by adding like terms: $27 = y$.

The solution is $y = 27$.

Example B

Solve for z :

$$5 = z + 12$$

Solution:

Apply the Addition Property of Equality:

$$\begin{aligned}
 5 &= z + 12 \\
 5 - 12 &= z + 12 - 12 \\
 5 - 12 &= z \\
 -7 &= z
 \end{aligned}$$

The solution is $-7 = z$.

Equations that take one step to isolate the variable are called **one-step equations**. Such equations can also involve multiplication or division.

Solving One-Step Equations Using Multiplication or Division**The Multiplication Property of Equality**

For all real numbers a , b , and c :

If $a = b$, then $a(c) = b(c)$.

Example C

Solve for k : $-8k = -96$.

Solution: Because $-8k = -8 \times k$, the inverse operation of multiplication is division. Therefore, we must cancel multiplication by applying the Multiplication Property of Equality.

Write the original equation: $-8k = -96$.

Apply the Multiplication Property of Equality: $-8k \div -8 = -96 \div -8$.

The solution is $k = 12$.

When working with fractions, you must remember: $\frac{a}{b} \times \frac{b}{a} = 1$. In other words, in order to cancel a fraction using division, you really must multiply by its reciprocal.

Video Review



MEDIA

Click image to the left for more content.



MEDIA

Click image to the left for more content.

Guided Practice

1. Determine the inverse of division.
2. Solve $\frac{1}{8} \cdot x = 1.5$.

Solutions:

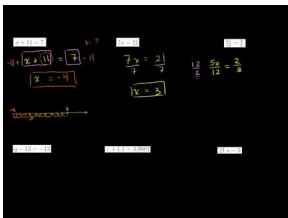
1. To undo division by a number, you would multiply by the same number.
2. The variable x is being multiplied by one-eighth. Instead of dividing two fractions, we multiply by the reciprocal of $\frac{1}{8}$, which is 8.

$$8 \left(\frac{1}{8} \cdot x \right) = 8(1.5)$$

$$x = 12$$

Practice

Sample explanations for some of the practice exercises below are available by viewing the following video. Note that there is not always a match between the number of the practice exercise in the video and the number of the practice exercise listed in the following exercise set. However, the practice exercise is the same in both. [CK-12 Basic Algebra: One-Step Equations](#) (12:30)



MEDIA

Click image to the left for more content.

Solve for the given variable.

1. $x + 11 = 7$

2. $x - 1.1 = 3.2$

3. $7x = 21$

4. $4x = 1$

5. $\frac{5x}{12} = \frac{2}{3}$

6. $x + \frac{5}{2} = \frac{2}{3}$

7. $x - \frac{5}{6} = \frac{3}{8}$

8. $0.01x = 11$

9. $q - 13 = -13$

10. $z + 1.1 = 3.0001$

11. $21s = 3$

12. $t + \frac{1}{2} = \frac{1}{3}$

13. $\frac{7f}{11} = \frac{7}{11}$

14. $\frac{3}{4} = -\frac{1}{2} \cdot y$

15. $6r = \frac{3}{8}$

16. $\frac{9b}{16} = \frac{3}{8}$

3.2 Applications of One-Step Equations

Here you'll learn how to write equations representing real-world scenarios and how to solve them with just one step.

Suppose you have 115 connections on a social networking website, which is 28 more than your friend has. If you represented the number of your friend's connections with the variable c , could you write an equation to represent this situation and solve it in only one step? How about if you had 3 times as many connections as your friend? After completing this Concept, you'll be able to write equations for both of these scenarios and solve each of them in a single step.

Guidance

Many careers base their work on manipulating linear equations. Consider the botanist studying bamboo as a renewable resource. She knows bamboo can grow up to 60 centimeters per day. If the specimen she measured was 1 meter tall, how long would it take to reach 5 meters in height? By writing and solving this equation, she will know exactly how long it should take for the bamboo to reach the desired height. In this Concept, you will see examples where one-step linear equations are used to solve real-world problems.

Example A

One method to weigh a horse is to load it into an empty trailer with a known weight and reweigh the trailer. A Shetland pony is loaded onto a trailer that weighs 2,200 pounds empty. The trailer is then reweighed. The new weight is 2,550 pounds. How much does the pony weigh?

Solution: Choose a variable to represent the weight of the pony, say p .

Write an equation: $2550 = 2200 + p$.

Apply the Addition Property of Equality: $2550 - 2200 = 2200 + p - 2200$.

Simplify: $350 = p$.

The Shetland pony weighs 350 pounds.

Example B

In good weather, tomato seeds can grow into plants and bear ripe fruit in as few as 19 weeks. Lorna planted her seeds 11 weeks ago. How long must she wait before her tomatoes are ready to be picked?

Solution: The variable in question is the number of weeks until the tomatoes are ready. Call this variable w .

Write an equation: $w + 11 = 19$.

Solve for w by using the Addition Property of Equality.

$$\begin{aligned}w + 11 - 11 &= 19 - 11 \\w &= 8\end{aligned}$$



It will take as few as 8 weeks for the plant to bear ripe fruit.

Example C

In 2004, Takeru Kobayashi of Nagano, Japan, ate $53\frac{1}{2}$ hot dogs in 12 minutes. He broke his previous world record, set in 2002, by three hot dogs. Calculate:

- How many minutes it took him to eat one hot dog.
- How many hot dogs he ate per minute.
- What his old record was.

Solution:

- Write an equation, letting m represent the number of minutes to eat one hot dog: $53.5m = 12$.

Applying the Multiplication Property of Equality:

$$\begin{aligned}\frac{53.5m}{53.5} &= \frac{12}{53.5} \\ m &= 0.224 \text{ minutes}\end{aligned}$$

It took approximately 0.224 minutes, or 13.44 seconds, to eat one hot dog.

Questions b) and c) are left for you to complete in the exercises.

Video Review



MEDIA

Click image to the left for more content.



MEDIA

Click image to the left for more content.

Guided Practice

In a previous Concept, we calculated that Mayra could run 6.5 miles per hour. If Mayra runs for 2-and-a-quarter hours, how far will she have gone?

Solution:

We can use the formula for speed: $speed = \frac{distance}{time}$.

Substituting in $speed = 6.5$ and $time = 2.25$ we get:

$$6.5 = \frac{distance}{2.25}$$

Now we use the Multiplication Property of Equality:

$$6.5 \times 2.25 = \frac{distance}{2.25} \times 2.25$$

$$6.5 \times 2.25 = \frac{distance}{\cancel{2.25}} \times \cancel{2.25}$$

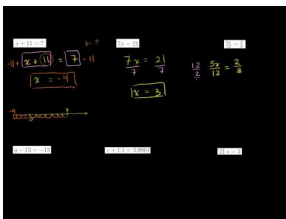
$$6.5 \times 2.25 = distance$$

$$13.5 = distance$$

Mayra can run 13.5 miles in 2-and-a-quarter hours.

Practice

Sample explanations for some of the practice exercises below are available by viewing the following video. Note that there is not always a match between the number of the practice exercise in the video and the number of the practice exercise listed in the following exercise set. However, the practice exercise is the same in both. [CK-12 Basic Algebra: One-Step Equations](#) (12:30)



MEDIA

Click image to the left for more content.

1. Peter is collecting tokens on breakfast cereal packets in order to get a model boat. In eight weeks he has collected 10 tokens. He needs 25 tokens for the boat. Write an equation and determine the following information.
 - a. How many more tokens he needs to collect, n .
 - b. How many tokens he collects per week, w .

- c. How many more weeks remain until he can send off for his boat, r .
2. Juan has baked a cake and wants to sell it in his bakery. He is going to cut it into 12 slices and sell them individually. He wants to sell it for three times the cost of making it. The ingredients cost him \$8.50, and he allowed \$1.25 to cover the cost of electricity to bake it. Write equations that describe the following statements.
 - a. The amount of money that he sells the cake for (u).
 - b. The amount of money he charges for each slice (c).
 - c. The total profit he makes on the cake (w).
3. Solve the remaining two questions regarding Takeru Kobayashi in Example C.

Mixed Review

4. Simplify $\sqrt{48}$.
5. Classify 6.23 according to the real number chart.
6. Reduce $\frac{118}{4}$.
7. Graph the following ordered pairs: $\{(2, -2), (4, -1), (5, -5), (3, -2)\}$.
8. Define *evaluate*.
9. Underline the math verb in this sentence: m minus n is 16.
10. What property is illustrated here? $4(a + 11.2) = 4(a) + 4(11.2)$

3.3 Two-Step Equations and Properties of Equality

Here you'll learn how to use the Addition Property and Multiplication Property to solve equations that you have written in two steps.

Suppose you are saving up to buy a leather jacket that costs \$250. You currently have \$90 put away, and you're saving at a rate of \$40 per month. Can you write an equation to represent this situation and then solve it in two steps to find the number of months needed to reach your goal? In this Concept, you'll learn how to solve problems just like this.

Guidance

Suppose Shaun weighs 146 pounds and wants to lose enough weight to wrestle in the 130-pound class. His nutritionist designed a diet for Shaun so he will lose about 2 pounds per week. How many weeks will it take Shaun to weigh enough to wrestle in his class?

This is an example that can be solved by working backward. In fact, you may have already found the answer by using this method. *The solution is 8 weeks.*

By translating this situation into an algebraic sentence, we can begin the process of **solving equations**. To solve an equation means to “undo” all the operations of the sentence, leaving a value for the variable.

Translate Shaun's situation into an equation.

$$-2w + 146 = 130$$

This sentence has two operations: addition and multiplication. To find the value of the variable, we must use both properties of equality: the Addition Property of Equality and the Multiplication Property of Equality.

Procedure to Solve Equations of the Form $ax + b = \text{some number}$:

1. Use the Addition Property of Equality to get the variable term ax alone on one side of the equation:

$$ax = \text{some number}$$

2. Use the Multiplication Property of Equality to get the variable x alone on one side of the equation:

$$x = \text{some number}$$

Example A

Solve Shaun's problem.

Solution: $-2w + 146 = 130$

Apply the Addition Property of Equality: $-2w + 146 - 146 = 130 - 146$.

Simplify: $-2w = -16$.

Apply the Multiplication Property of Equality: $-2w \div -2 = -16 \div -2$.

The solution is $w = 8$.

It will take 8 weeks for Shaun to weigh 130 pounds.

Solving Equations by Combining Like Terms

Michigan has a 6% sales tax. Suppose you made a purchase and paid \$95.12, including tax. How much was the purchase before tax?

Begin by determining the noun that is unknown and choose a letter as its representation.

The purchase price is unknown so this is our variable. Call it p . Now translate the sentence into an algebraic equation.

$$\begin{aligned} \text{price} + (0.06)\text{price} &= \text{total amount} \\ p + 0.06p &= 95.12 \end{aligned}$$

To solve this equation, you must know how to **combine like terms**.

Like terms are expressions that have **identical** variable parts.

According to this definition, you can only combine like terms if they are identical. **Combining like terms only applies to addition and subtraction!** This is not a true statement when referring to multiplication and division.

The numerical part of an algebraic term is called the **coefficient**. To combine like terms, you add (or subtract) the coefficients of the identical variable parts.

Example B

Identify the like terms, and then combine.

$$10b + 7bc + 4c + (-8b)$$

Solution: Like terms have identical variable parts. The only terms having identical variable parts are $10b$ and $-8b$. To combine these like terms, add them together.

$$10b + 7bc + 4c + -8b = 2b + 7bc + 4c$$

You will now apply this concept to the Michigan sales tax situation.

Example C

What was the purchase amount from this section's opening scenario?

Solution: $p + 0.06p = 95.12$

Combine the like terms: $p + 0.06p = 1.06p$, since $p = 1p$.

Simplify: $1.06p = 95.12$.

Apply the Multiplication Property of Equality: $1.06p \div 1.06 = 95.12 \div 1.06$.

Simplify: $p = 89.74$.

The price before tax was \$89.74.

The next several examples show how algebraic equations can be created to represent real-world situations.



Video Review



MEDIA

Click image to the left for more content.



MEDIA

Click image to the left for more content.

Guided Practice

1. An emergency plumber charges \$65 as a call-out fee plus an additional \$75 per hour. He arrives at a house at 9:30 and works to repair a water tank. If the total repair bill is \$196.25, at what time was the repair completed?
2. To determine the temperature in Fahrenheit, multiply the Celsius temperature by 1.8 and then add 32. Determine the Celsius temperature if it is 89°F.

Solutions:

1. Translate the sentence into an equation. The number of hours it took to complete the job is unknown, so call it h .

Write the equation: $65 + 75(h) = 196.25$.

Apply the Addition Property and simplify.

$$65 + 75(h) - 65 = 196.25 - 65$$

$$75(h) = 131.25$$

Apply the Multiplication Property of Equality: $75(h) \div 75 = 131.25 \div 75$.

Simplify: $h = 1.75$.

The plumber worked for 1.75 hours, or 1 hour, 45 minutes. Since he started at 9:30, the repair was completed at 11:15.

2. Translate the sentence into an equation. The temperature in Celsius is unknown; call it C .

Write the equation: $1.8C + 32 = 89$.

Apply the Addition Property and simplify.

$$\begin{aligned} 1.8C + 32 - 32 &= 89 - 32 \\ 1.8C &= 57 \end{aligned}$$

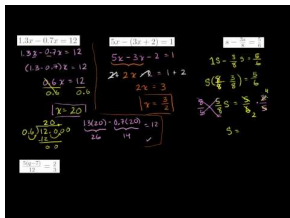
Apply the Multiplication Property of Equality: $1.8C \div 1.8 = 57 \div 1.8$.

Simplify: $C = 31.67$.

If the temperature is $89^\circ F$, then it is $31.67^\circ C$.

Practice

Sample explanations for some of the practice exercises below are available by viewing the following video. Note that there is not always a match between the number of the practice exercise in the video and the number of the practice exercise listed in the following exercise set. However, the practice exercise is the same in both. [CK-12 Basic Algebra: Two-Step Equations \(13:50\)](#)



MEDIA

Click image to the left for more content.

1. Define *like terms*. Give an example of a pair of like terms and a pair of unlike terms.
2. Define *coefficient*.

In 3 – 7, combine the like terms.

3. $-7x + 39x$
4. $3x^2 + 21x + 5x + 10x^2$
5. $6xy + 7y + 5x + 9xy$
6. $10ab + 9 - 2ab$
7. $-7mn - 2mn^2 - 2mn + 8$
8. Explain the procedure used to solve $-5y - 9 = 74$.

Solve and check your solution.

9. $1.3x - 0.7x = 12$
10. $6x - 1.3 = 3.2$
11. $5x - (3x + 2) = 1$

12. $4(x + 3) = 1$
13. $5q - 7 = \frac{2}{3}$
14. $\frac{3}{5}x + \frac{5}{2} = \frac{2}{3}$
15. $s - \frac{3s}{8} = \frac{5}{6}$
16. $0.1y + 11 = 0$
17. $\frac{5q-7}{12} = \frac{2}{3}$
18. $\frac{5(q-7)}{12} = \frac{2}{3}$
19. $33t - 99 = 0$
20. $5p - 2 = 32$
21. $14x + 9x = 161$
22. $3m - 1 + 4m = 5$
23. $8x + 3 = 11$
24. $24 = 2x + 6$
25. $66 = \frac{2}{3}k$
26. $\frac{5}{8} = \frac{1}{2}(a + 2)$
27. $16 = -3d - 5$
28. Jayden purchased a new pair of shoes. Including a 7% sales tax, he paid \$84.68. How much did his shoes cost before sales tax?
29. A mechanic charges \$98 for parts and \$60 per hour for labor. Your bill totals \$498.00, including parts and labor. How many hours did the mechanic work?
30. An electric guitar and amp set costs \$1195.00. You are going to pay \$250 as a down payment and pay the rest in 5 equal installments. How much should you pay each month?
31. Jade is stranded downtown with only \$10 to get home. Taxis cost \$0.75 per mile, but there is an additional \$2.35 hire charge. Write a formula and use it to calculate how many miles she can travel with her money. Determine how many miles she can ride.
32. Jasmin's dad is planning a surprise birthday party for her. He will hire a bouncy castle and provide party food for all the guests. The bouncy castle costs \$150 dollars for the afternoon, and the food will cost \$3.00 per person. Andrew, Jasmin's dad, has a budget of \$300. Write an equation to help him determine the maximum number of guests he can invite.

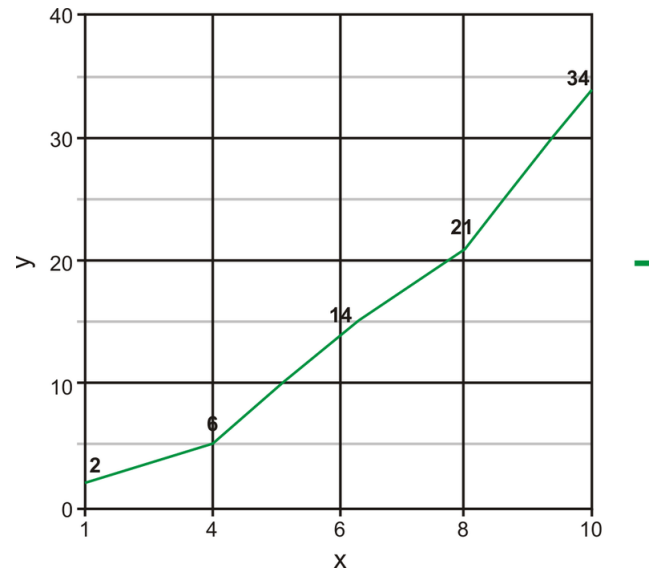
Mixed Review

33. Trish showed her work solving the following equation. What did she do incorrectly?

$$-2c = 36$$

$$c = 18$$

34. Write an expression for the following situation: *Yoshi had d dollars, spent \$65, and earned \$12. He had \$96 left.*
35. Find the domain of the following graph.
36. Does the graph represent a function? Explain your answer.



37. Find the difference: $\frac{1}{2} - \frac{15}{9}$.
38. What is the additive identity?
39. Find the opposite of -4.1398 .

3.4 Multi-Step Equations with Like Terms

Here you'll learn to write and then solve equations with multiple steps, one of which is the combining of like terms.

Suppose you and your classmate are selling raffle tickets. Before today, \$96 worth of tickets had been sold, and today, you sold 25 tickets and your classmate sold 35 tickets. Currently, \$576 worth of tickets have been sold. Can you write an equation representing this scenario and solve it in multiple steps, including the combining of like terms, to determine how much each raffle ticket costs? In this Concept, you'll learn how to solve these types of problems.

Guidance

So far, you have learned how to solve one-step equations of the form $y = ax$ and two-step equations of the form $y = ax + b$. This Concept will expand upon solving equations to include solving multi-step equations and equations involving the Distributive Property.

Solving Multi-Step Equations by Combining Like Terms

In the last Concept, you learned the definition of like terms and how to combine such terms. We will use the following situation to further demonstrate solving equations involving like terms.

You are hosting a Halloween party. You will need to provide 3 cans of soda per person, 4 slices of pizza per person, and 37 party favors. You have a total of 79 items. How many people are coming to your party?

This situation has several pieces of information: soda cans, slices of pizza, and party favors. Translate this into an algebraic equation.

$$3p + 4p + 37 = 79$$

This equation requires three steps to solve. In general, to solve any equation you should follow this procedure.

Procedure to Solve Equations:

1. Remove any parentheses by using the Distributive Property or the Multiplication Property of Equality.
2. Simplify each side of the equation by combining like terms.
3. Isolate the ax term. Use the Addition Property of Equality to get the variable on one side of the equal sign and the numerical values on the other.
4. Isolate the variable. Use the Multiplication Property of Equality to get the variable alone on one side of the equation.
5. Check your solution.

Example A

Determine the number of party-goers in the opening example.

Solution: $3p + 4p + 37 = 79$

Combine like terms: $7p + 37 = 79$.

Apply the Addition Property of Equality: $7p + 37 - 37 = 79 - 37$.

Simplify: $7p = 42$.

Apply the Multiplication Property of Equality: $7p \div 7 = 42 \div 7$.

The solution is $p = 6$.

There are six people coming to the party.

Example B

Kashmir needs to fence in his puppy. He will fence in three sides, connecting it to his back porch. He wants the length to be 12 feet, and he has 40 feet of fencing. How wide can Kashmir make his puppy enclosure?

Solution: Translate the sentence into an algebraic equation. Let w represent the width of the enclosure.

$$w + w + 12 = 40$$

Solve for w .

$$2w + 12 = 40$$

$$2w + 12 - 12 = 40 - 12$$

$$2w = 28$$

$$2w \div 2 = 28 \div 2$$

$$w = 14$$

The dimensions of the enclosure are 14 feet wide by 12 feet long.

Example C

Solve for v when $3v + 5 - 7v + 18 = 17$.

Solution:

$$3v + 5 - 7v + 18 = 17$$

$$3v - 7v + 18 + 5 = 17$$

$$-4v + 23 = 17$$

$$-4v + 23 - 23 = 17 - 23$$

$$-4v = -6$$

$$-\frac{1}{4} \cdot -4v = -\frac{1}{4} \cdot -6$$

$$v = \frac{6}{4}$$

$$v = \frac{3}{2}$$

Checking the solution:

$$\begin{aligned}
 3 \cdot \frac{3}{2} + 5 - 7 \cdot \frac{3}{2} + 18 &= 17 \\
 \frac{9}{2} + 5 - \frac{21}{2} + 18 &= 17 \\
 -\frac{12}{2} + 23 &= 17 \\
 -6 + 23 &= 17 \\
 17 &= 17
 \end{aligned}$$

Video Review



MEDIA

Click image to the left for more content.



MEDIA

Click image to the left for more content.

Guided Practice

Solve for w when $5\left(2w - \frac{3}{5}\right) + 10 = w + 16$.

Solution:

Start by distributing the 5.

$$5\left(2w - \frac{3}{5}\right) + 10 = w + 16$$

$$\Rightarrow 10w - 3 + 10 = w + 16$$

$$\Rightarrow 10w + 7 = w + 16$$

$$\Rightarrow 10w + 7 - 7 - w = w + 16 - 7 - w$$

$$\Rightarrow 9w = 9$$

$$\Rightarrow \frac{9w}{9} = \frac{9}{9}$$

$$\Rightarrow w = 1$$

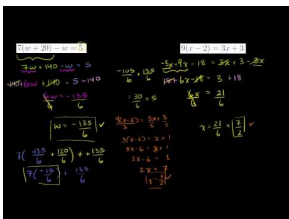
Combine like terms on the left side.

Subtract 7 and w from each side.

Isolate w by dividing each side by 9.

Practice

Sample explanations for some of the practice exercises below are available by viewing the following video. Note that there is not always a match between the number of the practice exercise in the video and the number of the practice exercise listed in the following exercise set. However, the practice exercise is the same in both. [CK-12 Basic Algebra: Multi-Step Equations](#) (15:01)



MEDIA

Click image to the left for more content.

In 1 – 3, solve the equation.

1. $f - 1 + 2f + f - 3 = -4$
2. $2x + 3 + 5x = 18$
3. $5 - 7y - 2y + 10y = 30$

In 4-8, write an equation and then solve for the variable.

4. Find four consecutive even integers whose sum is 244.
5. Four more than two-thirds of a number is 22. What is the number?
6. The total cost of lunch is \$3.50, consisting of a juice, a sandwich, and a pear. The juice cost 1.5 times as much as the pear. The sandwich costs \$1.40 more than the pear. What is the price of the pear?
7. Camden High has five times as many desktop computers as laptops. The school has 65 desktop computers. How many laptops does it have?
8. A realtor receives a commission of \$7.00 for every \$100 of a home's selling price. How much was the selling price of a home if the realtor earned \$5,389.12 in commission?

Mixed Review

9. Simplify $1\frac{6}{7} \times \frac{2}{3}$.
10. Define *evaluate*.
11. Simplify $\sqrt{75}$.
12. Solve for m : $\frac{1}{9}m = 12$.
13. Evaluate: $((-5) - (-7) - (-3)) \times (-10)$.
14. Subtract: $0.125 - \frac{1}{5}$.

3.5 Distributive Property for Multi-Step Equations

Here you'll learn how to use the Distributive Property to solve problems with multiple steps.

Suppose you were a contestant on a game show where they gave you the answer and you had to think of the corresponding question. If the answer were, " $M(N + K) = MN + MK$ or $M(N - K) = MN - MK$," what would you give for the question? How about, "What is the Distributive Property?" In this Concept, you will learn all about the Distributive Property and how to use it to solve equations with multiple steps.

Guidance

Solving Multi-Step Equations by Using the Distributive Property

When faced with an equation such as $2(5x + 9) = 78$, the first step is to remove the parentheses. There are two options to remove the parentheses. You can apply the Distributive Property or you can apply the Multiplication Property of Equality. This Concept will show you how to use the Distributive Property to solve multi-step equations.

Example A

Solve for x : $2(5x + 9) = 78$.

Solution: Apply the Distributive Property: $10x + 18 = 78$.

Apply the Addition Property of Equality: $10x + 18 - 18 = 78 - 18$.

Simplify: $10x = 60$.

Apply the Multiplication Property of Equality: $10x \div 10 = 60 \div 10$.

The solution is $x = 6$.

Check: Does $10(6) + 18 = 78$? Yes, so the answer is correct.

Example B

Solve for n when $2(n + 9) = 6n$.

Solution:

$$\begin{aligned}
 2(n + 9) &= 6n \\
 2 \cdot n + 2 \cdot 9 &= 6n \\
 2n + 18 &= 6n \\
 -2n + 2n + 18 &= -2n + 6n \\
 18 &= 4n \\
 \frac{1}{4} \cdot 18 &= \frac{1}{4} \cdot 4n \\
 4.5 &= n
 \end{aligned}$$

Checking the answer:

$$2(6 + 9) = 5(6)$$

$$2(15) = 30$$

$$30 = 30$$

Example C

Solve for d when $3(d + 15) - 18d = 0$.

Solution:

$$3(d + 15) - 18d = 0$$

$$3 \cdot d + 3 \cdot 15 - 18d = 0$$

$$3d + 45 - 18d = 0$$

$$-15d + 45 = 0$$

$$-15d + 45 - 45 = 0 - 45$$

$$-15d = -45$$

$$-\frac{1}{15} \cdot -15d = -\frac{1}{15} \cdot -45$$

$$d = 3$$

Checking the answer:

$$3(3 + 15) - 18(3) = 0$$

$$3(3 + 15) - 18(3) = 0$$

$$3(18) - 18(3) = 0$$

$$54 - 54 = 0$$

$$0 = 0$$

Video Review



MEDIA

Click image to the left for more content.



MEDIA

Click image to the left for more content.

Guided Practice

Solve for x when $3(2x + 5) + 2x = 7$.

Solution:

Step 1: Apply the Distributive Property.

$$\begin{aligned} 3(2x + 5) + 2x &= 7 \\ 3 \cdot 2x + 3 \cdot 5 + 2x &= 7 \\ 6x + 15 + 2x &= 7 \end{aligned}$$

Step 2: Combine like terms.

$$\begin{aligned} 6x + 15 + 2x &= 7 \\ 8x + 15 &= 7 \end{aligned}$$

Step 3: Isolate the variable and its coefficient by using the Addition Property.

$$\begin{aligned} 8x + 15 &= 7 \\ 8x + 15 - 15 &= 7 - 15 \\ 8x &= -8 \end{aligned}$$

Step 4: Isolate the variable by applying the Multiplication Property.

$$\begin{aligned} 8x &= -8 \\ \frac{1}{8} \cdot 8x &= -8 \cdot \frac{1}{8} \\ \frac{1}{8} \cdot 8x &= -8 \cdot \frac{1}{8} \\ x &= -1 \end{aligned}$$

Step 5: Check your answer.

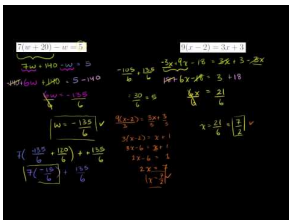
Substitute $x = -1$ into $3(2x + 5) = 7$.

$$3(2(-1)x + 5) + 2(-1) = 3(-2 + 5) - 2 = 3(3) - 2 = 9 - 2 = 7.$$

Therefore, $x = -1$.

Practice

Sample explanations for some of the practice exercises below are available by viewing the following video. Note that there is not always a match between the number of the practice exercise in the video and the number of the practice exercise listed in the following exercise set. However, the practice exercise is the same in both. [CK-12 Basic Algebra: Multi-Step Equations \(15:01\)](#)



MEDIA

Click image to the left for more content.

In 1 – 22, solve the equation.

1. $3(x - 1) - 2(x + 3) = 0$
2. $7(w + 20) - w = 5$
3. $9(x - 2) = 3x + 3$
4. $2\left(5a - \frac{1}{3}\right) = \frac{2}{7}$
5. $\frac{2}{9}\left(i + \frac{2}{3}\right) = \frac{2}{5}$
6. $4\left(v + \frac{1}{4}\right) = \frac{35}{2}$
7. $22 = 2(p + 2)$
8. $-(m + 4) = -5$
9. $48 = 4(n + 4)$
10. $\frac{6}{5}\left(v - \frac{3}{5}\right) = \frac{6}{25}$
11. $-10(b - 3) = -100$
12. $6v + 6(4v + 1) = -6$
13. $-46 = -4(3s + 4) - 6$
14. $8(1 + 7m) + 6 = 14$
15. $0 = -7(6 + 3k)$
16. $35 = -7(2 - x)$
17. $-3(3a + 1) - 7a = -35$
18. $-2\left(n + \frac{7}{3}\right) = -\frac{14}{3}$
19. $-\frac{59}{60} = \frac{1}{6}\left(-\frac{4}{3}r - 5\right)$
20. $\frac{4y+3}{7} = 9$
21. $(c + 3) - 2c - (1 - 3c) = 2$
22. $5m - 3[7 - (1 - 2m)] = 0$

3.6 Equations with Variables on Both Sides

Here you'll learn about equations that have the variable on both sides and how to solve them.

Bill and Kate are both reading a 500-page novel. So far, Bill has read 70 pages and Kate has read 50 pages, but from this point forward, Bill plans to read 25 pages per day, while Kate plans to read 29 pages per day. After how many days will they have read the same number of pages? Do you know how to set up and solve an equation to answer a question like this? Such an equation would have the variable on both sides, and in this Concept, you'll learn how to solve this type of equation.

Watch This

Multimedia Link: Watch this video: [to see how to solve an equation with a variable on each side of the equation.](#)

Guidance

As you may now notice, equations come in all sizes and styles. There are single-step, double-step, and multi-step equations. In this Concept, you will learn how to solve equations with a variable appearing on each side of the equation. The process you need to solve this type of equation is similar to solving a multi-step equation. The procedure is repeated here.

Procedure to Solve Equations:

1. Remove any parentheses by using the Distributive Property or the Multiplication Property of Equality.
2. Simplify each side of the equation by combining like terms.
3. Isolate the ax term. Use the Addition Property of Equality to get the variable on one side of the equal sign and the numerical values on the other.
4. Isolate the variable. Use the Multiplication Property of Equality to get the variable alone on one side of the equation.
5. Check your solution.



Karen and Sarah have bank accounts. Karen has a starting balance of \$125.00 and is depositing \$20 each week.

Sarah has a starting balance of \$43 and is depositing \$37 each week. When will the girls have the same amount of money?

To solve this problem, you could use the “guess and check” method. You are looking for a particular week in which the bank accounts are equal. This could take a long time! You could also translate the sentence into an equation. The number of weeks is unknown so this is our variable. Call it w . Now translate this situation into an algebraic equation:

$$125 + 20w = 43 + 37w$$

This is a situation in which the variable w appears on both sides of the equation. To begin to solve for the unknown, we must use the Addition Property of Equality to gather the variables on one side of the equation.

Example A

Determine when Sarah and Karen will have the same amount of money.

Solution: Using the Addition Property of Equality, move the variables to one side of the equation:

$$125 + 20w - 20w = 43 + 37w - 20w$$

Simplify: $125 = 43 + 17w$

Solve using the steps from a previous Concept:

$$125 - 43 = 43 - 43 + 17w$$

$$82 = 17w$$

$$82 \div 17 = 17w \div 17$$

$$w \approx 4.82$$

It will take about 4.8 weeks for Sarah and Karen to have equal amounts of money.

Example B

Solve for y when $2y - 5 = 3y + 10$.

Solution:

To solve this equation, we need to get both terms with a variable onto the same side. The easiest way to do this is to subtract the variable with the smaller coefficient from each side:

$$2y - 5 = 3y + 10$$

$$-2y + 2y - 5 = -2y + 3y + 10$$

$$-5 = y + 10$$

$$-5 - 10 = y + 10 - 10$$

$$-15 = y$$

Checking our answer:

$$\begin{aligned} 2(-15) - 5 &= 3(-15) + 10 \\ -30 - 5 &= -45 + 10 \\ -35 &= -35 \end{aligned}$$

Example C

Solve for h : $3(h + 1) = 11h - 23$.

Solution: First you must remove the parentheses by using the Distributive Property:

$$3h + 3 = 11h - 23$$

Gather the variables on one side:

$$3h - 3h + 3 = 11h - 3h - 23$$

Simplify:

$$3 = 8h - 23$$

Solve using the steps from a previous Concept:

$$\begin{aligned} 3 + 23 &= 8h - 23 + 23 \\ 26 &= 8h \\ 26 \div 8 &= 8h \div 8 \\ h &= \frac{13}{4} = 3.25 \end{aligned}$$

Video Review



MEDIA

Click image to the left for more content.



MEDIA

Click image to the left for more content.

Guided Practice

Solve for g when $-5g + 3 = -8g + 9$.

Solution:

In this case, our two terms with the variable are negative. The same suggestion in Example B works, and since $-8 < -5$, we will subtract -8 . However, subtracting -8 can be simplified to adding 8 (Opposite-Opposite Property). This will leave us with a positive coefficient in front of our variable.

$$\begin{aligned} -5g + 3 &= -8g + 9 \\ +8g - 5g + 3 &= +8g - 8g + 9 \\ 3g + 3 &= 9 \\ 3g + 3 - 3 &= 9 - 3 \\ 3g &= 6 \\ \frac{1}{3} \cdot 3g &= \frac{1}{3} \cdot 6 \\ g &= 2 \end{aligned}$$

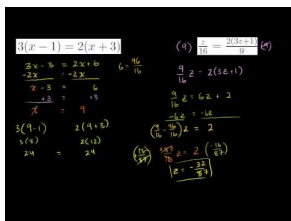
Checking the answer:

$$\begin{aligned} -5(2) + 3 &= -8(2) + 9 \\ -10 + 3 &= -16 + 9 \\ -7 &= -7 \end{aligned}$$

Therefore, $g = 2$.

Practice

Sample explanations for some of the practice exercises below are available by viewing the following video. Note that there is not always a match between the number of the practice exercise in the video and the number of the practice exercise listed in the following exercise set. However, the practice exercise is the same in both. [CK-12 Basic Algebra: Equations with Variables on Both Sides \(9:28\)](#)



MEDIA

Click image to the left for more content.

In 1 – 13, solve the equation.

- $3(x - 1) = 2(x + 3)$
- $7(x + 20) = x + 5$
- $9(x - 2) = 3x + 3$

4. $2\left(a - \frac{1}{3}\right) = \frac{2}{5}\left(a + \frac{2}{3}\right)$
5. $\frac{2}{7}\left(t + \frac{2}{3}\right) = \frac{1}{5}\left(t - \frac{2}{3}\right)$
6. $\frac{1}{7}\left(v + \frac{1}{4}\right) = 2\left(\frac{3v}{2} - \frac{5}{2}\right)$
7. $\frac{v-4}{11} = \frac{2}{5} \cdot \frac{2y+1}{3}$
8. $\frac{z}{16} = \frac{2(3z+1)}{9}$
9. $\frac{q}{16} + \frac{q}{6} = \frac{(3q+1)}{9} + \frac{3}{2}$
10. $21 + 3b = 6 - 6(1 - 4b)$
11. $-2x + 8 = 8(1 - 4x)$
12. $3(-5v - 4) = -6v - 39$
13. $-5(5k + 7) = 25 + 5k$
14. Manoj and Tamar are arguing about how a number trick they heard goes. Tamar tells Andrew to think of a number, multiply it by five, and subtract three from the result. Then Manoj tells Andrew to think of a number, add five, and multiply the result by three. Andrew says that whichever way he does the trick he gets the same answer. What was Andrew's number?
15. I have enough money to buy five regular priced CDs and have \$6 left over. However, all CDs are on sale today for \$4 less than usual. If I borrow \$2, I can afford nine of them. How much are CDs on sale for today?
16. Jaime has a bank account with a balance of \$412 and is saving \$18 each week. George has a bank account with a balance of \$874 and is spending \$44 dollars each week. When will the two have the same amount of money?
17. Cell phone plan A charges \$75.00 each month and \$0.05 per text. Cell phone plan B charges \$109 dollars and \$0.00 per text.
 - a. At how many texts will the two plans charge the same?
 - b. Suppose you plan to text 3,000 times per month. Which plan should you choose? Why?
18. To rent a dunk tank, Modern Rental charges \$150 per day. To rent the same tank, Budgetwise charges \$7.75 per hour.
 - a. When will the two companies charge the same?
 - b. You will need the tank for a 24-hour fund raise-a-thon. Which company should you choose?

Mixed Review

19. Solve for t : $-12 + t = -20$.
20. Solve for r : $3r - 7r = 32$.
21. Solve for e : $35 = 5(e + 2)$.
22. 25 more than four times a number is 13. What is the number?
23. Find the opposite of $9\frac{1}{5}$. Write your answer as an improper fraction.
24. Evaluate $(|b| - a) - (|d| - a)$. Let $a = 4$, $b = -6$, and $d = 5$.
25. Give an example of an integer that is not a counting number.

Quick Quiz

1. Determine the inverse of addition.
2. Solve for w : $-4w = 16$.
3. Write an equation to represent the following situation and solve. *Shauna ran the 400 meter dash in 56.7 seconds, 0.98 seconds less than her previous time. What was her previous time?*
4. Solve for b : $\frac{1}{2}b + 5 = 9$.
5. Solve for q : $3q + 5 - 4q = 19$.

3.7 Equations with Ratios and Proportions

Here you'll learn what ratios and proportions are and how to solve problems by using them.

Suppose that in 5 minutes, you can type 150 words. If you continued at this rate, do you know how many words you could type in 12 minutes? In order to answer this question, you could use ratios or a proportion. In this Concept, you'll learn how to solve equations with ratios and proportions so that you'll be able to answer questions like this when they arise.

Guidance

Ratios and **proportions** have a fundamental place in mathematics. They are used in geometry, size changes, and trigonometry. This Concept expands upon the idea of fractions to include ratios and proportions.

A **ratio** is a fraction comparing two things with the same units.

A **rate** is a fraction comparing two things with different units.

You have experienced rates many times: 65 *milhour*, \$1.99/*pound*, and \$3.79/*yd*². You have also experienced ratios. A “student to teacher” ratio shows approximately how many students one teacher is responsible for in a school.

Example A

The State Dining Room in the White House measures approximately 48 feet long by 36 feet wide. Compare the length of the room to the width, and express your answer as a ratio.

Solution:

$$\frac{48 \text{ feet}}{36 \text{ feet}} = \frac{4}{3}$$

The length of the State Dining Room is $\frac{4}{3}$ the width.

A **proportion** is a statement in which two fractions are equal: $\frac{a}{b} = \frac{c}{d}$.

Example B

Is $\frac{2}{3} = \frac{6}{12}$ a proportion?

Solution: Find the least common multiple of 3 and 12 to create a common denominator.

$$\frac{2}{3} = \frac{8}{12} \neq \frac{6}{12}$$

This is NOT a proportion because these two fractions are not equal.

A ratio can also be written using a colon instead of the fraction bar.

$\frac{a}{b} = \frac{c}{d}$ can also be read, “*a* is to *b* as *c* is to *d*” or $a : b = c : d$.

The values of a and d are called the **extremes** of the proportion and the values of b and c are called the **means**. To solve a proportion, you can use the **cross products**.

The Cross Products of a Proportion:

If $\frac{a}{b} = \frac{c}{d}$, then $ad = bc$.

Example C

Solve $\frac{a}{9} = \frac{7}{6}$.

Solution: Apply the Cross Products of a Proportion.

$$6a = 7(9)$$

$$6a = 63$$

Solve for a .

$$a = 10.5$$

Video Review



MEDIA

Click image to the left for more content.



MEDIA

Click image to the left for more content.

Guided Practice

Consider the following situation: *A train travels at a steady speed. It covers 15 miles in 20 minutes. How far will it travel in 7 hours, assuming it continues at the same rate?*

**Solution:**

This is an example of a problem that can be solved using several methods, including proportions. To solve using a proportion, you need to translate the statement into an algebraic sentence. The key to writing correct proportions is to keep the units the same in each fraction.

$$\frac{\text{miles}}{\text{time}} = \frac{\text{miles}}{\text{time}} \qquad \frac{\text{miles}}{\text{time}} \neq \frac{\text{time}}{\text{miles}}$$

Before we substitute in miles and time into our proportion, we need to have our units consistent. We are given the train's rate in minutes, and asked how far the train will go in 7 hours, so we need to figure out how many minutes are an equivalent amount of time to 7 hours. Since there are 60 minutes in each hour:

$$7 \times 60 = 420$$

So 7 hours is equivalent to 420 minutes.

$$\frac{\text{miles}}{\text{time}} = \frac{\text{miles}}{\text{time}}$$

$$\frac{15}{20} = \frac{\text{miles}}{420}$$

Now we solve for the number of miles using the Cross Product of Proportions:

$$15 \times 420 = \text{miles} \times 20$$

$$15 \times 420 \times \frac{1}{20} = \text{miles} \times 20 \times \frac{1}{20}$$

$$15 \times \frac{420}{20} = \text{miles}$$


$$15 \times 21 = \text{miles}$$

$$315 = \text{miles}$$

The train traveled 315 miles in 7 hours.

Practice

Sample explanations for some of the practice exercises below are available by viewing the following video. Note that there is not always a match between the number of the practice exercise in the video and the number of the practice exercise listed in the following exercise set. However, the practice exercise is the same in both. [CK-12 Basic Algebra: Ratio and Proportion \(10:25\)](#)



MEDIA

Click image to the left for more content.

Write the following comparisons as ratios. Simplify fractions where possible.

- \$150 to \$3
- 150 boys to 175 girls
- 200 minutes to 1 hour
- 10 days to 2 weeks

In 5 – 10, write the ratios as a unit rate.

- 54 hot dogs to 12 minutes
- 5000 lbs to 250 in^2
- 20 computers to 80 students
- 180 students to 6 teachers
- 12 meters to 4 floors
- 18 minutes to 15 appointments
- Give an example of a proportion that uses the numbers 5, 1, 6, and 30
- In the following proportion, identify the means and the extremes: $\frac{5}{12} = \frac{35}{84}$

In 13 – 23, solve the proportion.

- $\frac{13}{6} = \frac{5}{x}$
- $\frac{1.25}{7} = \frac{3.6}{x}$
- $\frac{6}{19} = \frac{x}{11}$
- $\frac{1}{x} = \frac{0.01}{5}$
- $\frac{300}{4} = \frac{x}{99}$
- $\frac{2.75}{9} = \frac{x}{(\frac{2}{9})}$
- $\frac{1.3}{4} = \frac{x}{1.3}$
- $\frac{0.1}{1.01} = \frac{1.9}{x}$
- $\frac{5p}{12} = \frac{3}{11}$
- $-\frac{9}{x} = \frac{4}{11}$
- $\frac{n+1}{11} = -2$
- A restaurant serves 100 people per day and takes in \$908. If the restaurant were to serve 250 people per day, what might the cash collected be?
- The highest mountain in Canada is Mount Yukon. It is $\frac{298}{67}$ the size of Ben Nevis, the highest peak in Scotland. Mount Elbert in Colorado is the highest peak in the Rocky Mountains. Mount Elbert is $\frac{220}{67}$ the height of Ben Nevis and $\frac{44}{48}$ the size of Mont Blanc in France. Mont Blanc is 4800 meters high. How high is Mount Yukon?

26. At a large high school, it is estimated that two out of every three students have a cell phone, and one in five of all students have a cell phone that is one year old or less. Out of the students who own a cell phone, what proportion own a phone that is more than one year old?
27. The price of a Harry Potter Book on Amazon.com is \$10.00. The same book is also available used for \$6.50. Find two ways to compare these prices.
28. To prepare for school, you purchased 10 notebooks for \$8.79. How many notebooks can you buy for \$5.80?
29. It takes 1 cup mix and $\frac{3}{4}$ cup water to make 6 pancakes. How much water and mix is needed to make 21 pancakes?
30. Ammonia is a compound consisting of a 1:3 ratio of nitrogen and hydrogen atoms. If a sample contains 1,983 hydrogen atoms, how many nitrogen atoms are present?
31. The Eagles have won 5 out of their last 9 games. If this trend continues, how many games will they have won in the 63-game season?

Mixed Review

32. Solve $\frac{15}{16} \div \frac{5}{8}$.
33. Evaluate $|9 - 108|$.
34. Simplify: $8(8 - 3x) - 2(1 + 8x)$.
35. Solve for n : $7(n + 7) = -7$.
36. Solve for x : $-22 = -3 + x$.
37. Solve for u : $18 = 2u$.
38. Simplify: $-\frac{1}{7} - (-1\frac{1}{3})$.
39. Evaluate: $5 \times \frac{p}{6}|n|$ when $n = 10$ and $p = -6$.
40. Make a table when $-4 \leq x \leq 4$ for $f(x) = \frac{1}{8}x + 2$.
41. Write as an English phrase: $y + 11$.

3.8 Scale and Indirect Measurement Applications

Here you'll learn how to use proportions to make indirect measurements.

Suppose an architectural firm is constructing a building, and they first build a model that is 4 feet tall. If the scale is 1:125 when compared to the height of the real building, can you figure out how tall the real building is? What proportion would you set up? After completing this Concept, you'll be able to set up and solve for the variable in a proportion when encountering problems such as this one.

Guidance

We are occasionally faced with having to make measurements of things that would be difficult to measure directly: the height of a tall tree, the width of a wide river, the height of the moon's craters, and even the distance between two cities separated by mountainous terrain. In such circumstances, measurements can be made **indirectly**, using proportions and similar triangles. Such indirect methods link measurement with geometry and numbers. In this Concept, we will examine some of the methods used for making indirect measurements.



A map is a two-dimensional, geometrically accurate representation of a section of the Earth's surface. Maps are used to show, pictorially, how various geographical features are arranged in a particular area. The **scale** of the map describes the relationship between distances on the map and the corresponding distances on the Earth's surface. These measurements are expressed as a fraction or a ratio.

In the last Concept, you learned the different ways to write a ratio: using the fraction bar, using a colon, and in words. Outside of mathematics books, ratios are often written as two numbers separated by a colon (:). Here is a

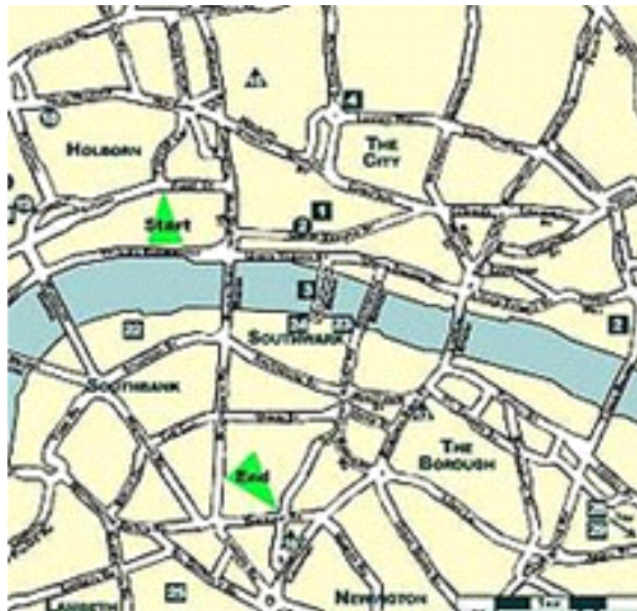
table that compares ratios written in two different ways.

TABLE 3.1:

Ratio	Is Read As	Equivalent To
1:20	one to twenty	$\left(\frac{1}{20}\right)$
2:3	two to three	$\left(\frac{2}{3}\right)$
1:1000	one to one-thousand	$\left(\frac{1}{1000}\right)$

Example A

If a map had a scale of 1:1000 (“one to one-thousand”), one unit of measurement on the map (1 inch or 1 centimeter, for example) would represent 1000 of the same units on the ground. A 1:1 (one to one) map would be a map as large as the area it shows!



Example B

Anne is visiting a friend in London and is using the map above to navigate from Fleet Street to Borough Road. She is using a 1:100,000 scale map, where 1 cm on the map represents 1 km in real life. Using a ruler, she measures the distance on the map as 8.8 cm. How far is the real distance from the start of her journey to the end?

The scale is the ratio of distance on the map to the corresponding distance in real life and can be written as a proportion.

$$\frac{\text{dist.on map}}{\text{real dist.}} = \frac{1}{100,000}$$

By substituting known values, the proportion becomes:

$$\frac{8.8 \text{ cm}}{\text{real dist.}(x)} = \frac{1}{100,000}$$

Cross multiply.

$$880000 \text{ cm} = x$$

$$x = 8800 \text{ m}$$

$100 \text{ cm} = 1 \text{ m}.$
 $1000 \text{ m} = 1 \text{ km}.$

The distance from Fleet Street to Borough Road is 8800 *m* or 8.8 *km*.

We could, in this case, use our intuition: the 1 *cm* = 1 *km* scale indicates that we could simply use our reading in centimeters to give us our reading in km. Not all maps have a scale this simple. In general, you will need to refer to the map scale to convert between measurements on the map and distances in real life!

Example C

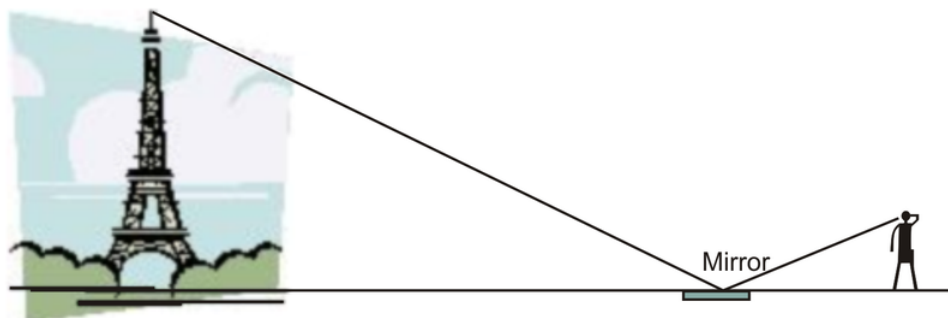
Oscar is trying to make a scale drawing of the Titanic, which he knows was 883 feet long. He would like his drawing to be 1:500 scale. How long, in inches, must his sheet of paper be?

Solution: We can reason that since the scale is 1:500 that the paper must be $\frac{883}{500} = 1.766$ feet long. Converting to inches gives the length as $12(1.766) \text{ in} = 21.192 \text{ in}$.

The paper should be at least 22 inches long.

Not everything has a scale. Architecture such as the St. Louis Arch, St. Basil's Cathedral, or the Eiffel Tower does not have a scale written on the side. It may be necessary to measure such buildings. To do so requires knowledge of similar figures and a method called **indirect measurement**.

Similar figures are often used to make indirect measurements. Two shapes are said to be **similar** if they are the same shape and "in proportion." The ratio of every measurable length in one figure to the corresponding length in the other is the same. **Similar triangles** are often used in indirect measurement.

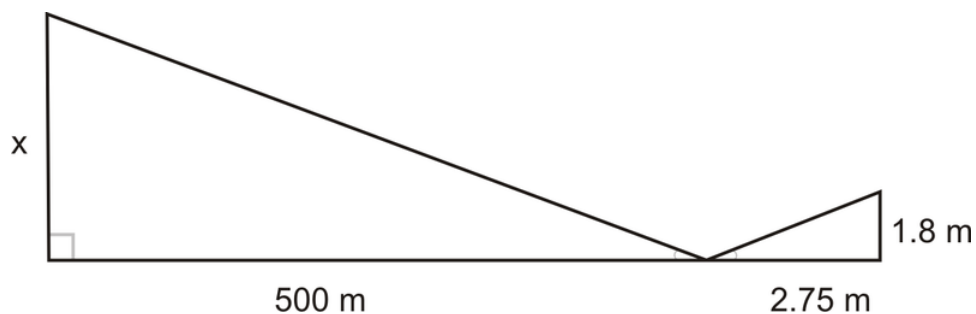


Anatole is visiting Paris, and wants to know the height of the Eiffel Tower. Since he's unable to speak French, he decides to measure it in three steps.

1. He measures out a point 500 meters from the base of the tower, and places a small mirror flat on the ground.
2. He stands behind the mirror in such a spot that standing upright he sees the top of the tower reflected in the mirror.
3. He measures both the distance from the spot where he stands to the mirror (2.75 meters) and the height of his eyes from the ground (1.8 meters).

Explain how Anatole is able to determine the height of the Eiffel Tower from these numbers and determine what that height is.

First, we will draw and label a scale diagram of the situation.



The Law of Reflection states, “The angle at which the light reflects off the mirror is the same as the angle at which it hits the mirror.” Using this principle and the figure above, you can conclude that these triangles are similar with proportional sides.

This means that the ratio of the long leg in the large triangle to the length of the long leg in the small triangle is the **same ratio** as the length of the short leg in the large triangle to the length of the short leg in the small triangle.

$$\begin{aligned}\frac{500\text{ m}}{2.75\text{ m}} &= \frac{x}{1.8\text{ m}} \\ 1.8 \cdot \frac{500}{2.75} &= \frac{x}{1.8} \cdot 1.8 \\ 327.3 &\approx x\end{aligned}$$

The Eiffel Tower, according to this calculation, is approximately 327.3 meters high.

Video Review



MEDIA

Click image to the left for more content.

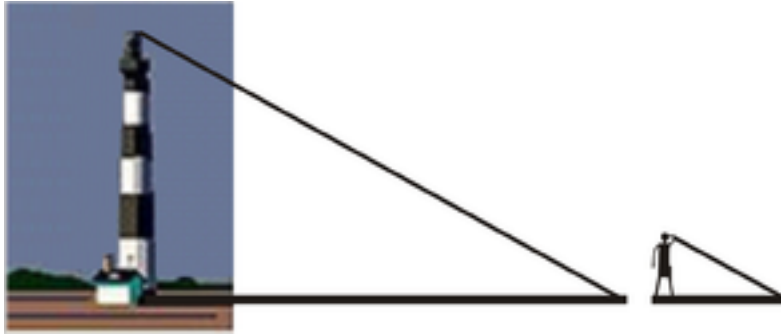


MEDIA

Click image to the left for more content.

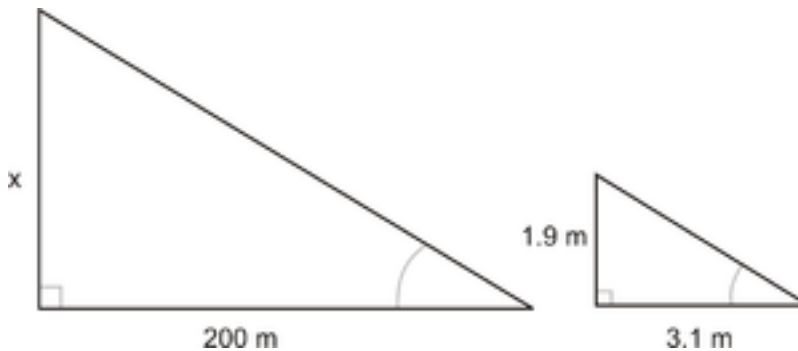
Guided Example

Bernard is looking at a lighthouse and wondering how high it is. He notices that it casts a long shadow, which he measures at 200 meters long. At the same time, he measures his own shadow at 3.1 meters long. Bernard is 1.9 meters tall. How tall is the lighthouse?



Solution: Begin by drawing a scale diagram.

You can see there are two right triangles. The angle at which the sun causes the shadow from the lighthouse to fall is the same angle at which Bernard's shadow falls. We have two similar triangles, so we can again say that the ratio of the corresponding sides is the same.

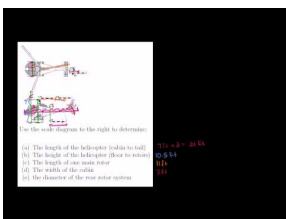


$$\begin{aligned}\frac{200\text{ m}}{3.1\text{ m}} &= \frac{x}{1.9\text{ m}} \\ 1.9 \cdot \frac{200\text{ m}}{3.1\text{ m}} &= \frac{x}{1.9\text{ m}} \cdot 1.9 \\ 122.6 &\approx x\end{aligned}$$

The lighthouse is approximately 122.6 meters tall.

Practice

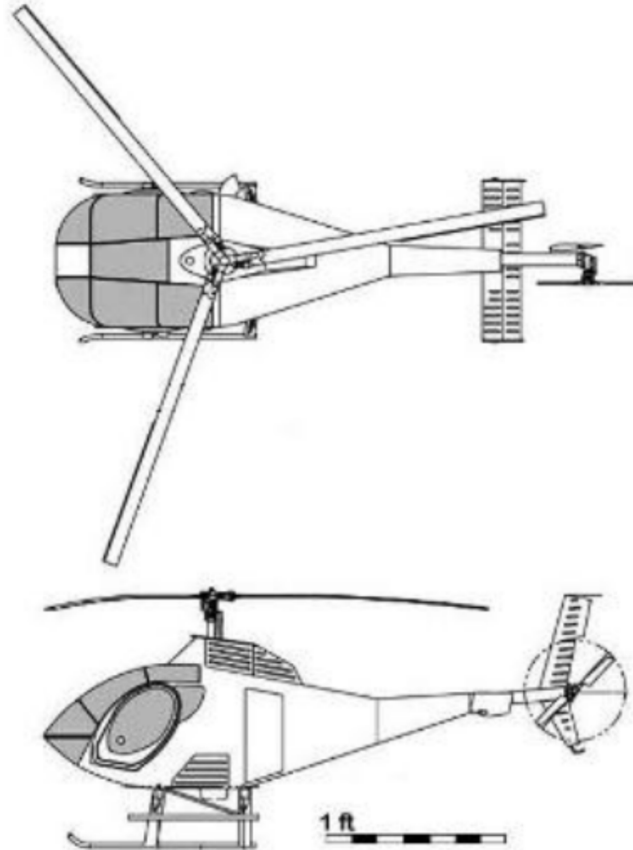
Sample explanations for some of the practice exercises below are available by viewing the following video. Note that there is not always a match between the number of the practice exercise in the video and the number of the practice exercise listed in the following exercise set. However, the practice exercise is the same in both. [CK-12 Basic Algebra: Scale and Indirect Measurement](#) (10:44)



MEDIA

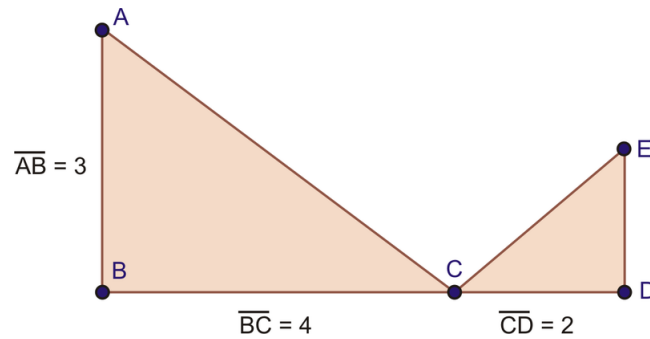
Click image to the left for more content.

1. Define *similar figures*.
2. What is true about similar figures?
3. What is the process of *indirect measurement*? When is indirect measurement particularly useful?
4. State the Law of Reflection. How does this law relate to similar figures?
5. A map has a 1 *inch* : 20 *mile* scale. If two cities are 1,214 miles apart, how far apart would they be on this map?
6. What would a scale of 1 *mile* : 1 *mile* mean on a map? What problems would the cartographer encounter?
7. A woman 66 inches tall stands beside a tree. The length of her shadow is 34 inches and the length of the tree's shadow is 98 inches. To the nearest foot, how tall is the tree?



8.

9. Use the scale diagram above to determine:
 - a. The length of the helicopter (cabin to tail)
 - b. The height of the helicopter (floor to rotors)
 - c. The length of one main rotor
 - d. The width of the cabin
 - e. The diameter of the rear rotor system
10. On a sunny morning, the shadow of the Empire State Building is 600 feet long. At the same time, the shadow of a yardstick (3 feet long) is 1 foot, $5\frac{1}{4}$ inches. How high is the Empire State building?
11. Omar and Fredrickson are 12.4 inches apart on a map with a scale of 1.2 inches : 15 miles. How far apart are their two cities in miles?
12. A man 6 feet tall is standing next to a dog. The man's shadow is 9 feet and the dog's shadow is 6 feet. How tall is the dog?
13. A model house is 12 inches wide. It was built with a ratio of 3 inches : 4 meters. How wide is the actual house?
14. Using the diagram below and assuming the two triangles are similar, find \overline{DE} , the length of segment DE .



16. A 42.9-foot flagpole casts a 253.1-foot shadow. What is the length of the shadow of a woman 5 feet 5 inches standing next to the flagpole?

Mixed Review

- Solve for a : $-(7 - 7a) + 4a = -23 + 3a$.
- How is evaluating different from solving? Provide an example to help you illustrate your explanation.
- Simplify $\sqrt{243}$.
- Simplify: $2(8g + 2) - 1 + 4g - (2 - 5g)$.
- Draw a graph that is not a function. Explain why your picture is not a function.
- Jose has $\frac{2}{3}$ the amount of money that Chloe has. Chloe has four dollars less than Huey. Huey has \$26. How much does Jose have?

3.9 Conversion of Decimals, Fractions, and Percent

Here you'll learn how to change a decimal to a percent, a percent to a decimal, a fraction to a percent, and a percent to a fraction.

Suppose you're taking the written test for your driver's license and you get $\frac{4}{5}$ of the questions correct. The proctor of the test said that you needed to get at least 70% of the questions right in order to pass. Do you think you passed the test for your driver's license? Do you know how to convert $\frac{4}{5}$ to a percent? What if you had to convert a decimal to a percent, a percent to a decimal, or a percent to a fraction? Could you do it? After completing this Concept, you'll be able to!

Percent Problems

A **percent** is a ratio whose denominator is 100. Before we can use percents to solve problems, let's review how to convert percents to decimals and fractions and vice versa.

To convert a decimal to a percent, multiply the decimal by 100.

Example A

Convert 0.3786 to a percent.

$$0.3786 \times 100 = 37.86\%$$

To convert a percentage to a decimal, divide the percentage by 100.

Example B

Convert 98.6% into a decimal.

$$98.6 \div 100 = 0.986$$

When converting fractions to percents, we can substitute $\frac{x}{100}$ for $x\%$, where x is the unknown.

Example C

Express $\frac{3}{5}$ as a percent.

We start by representing the unknown as $x\%$ or $\frac{x}{100}$.

$$\left(\frac{3}{5}\right) = \frac{x}{100}$$

$$5x = 100 \cdot 3$$

$$5x = 300$$

$$x = \frac{300}{5} = 60$$

$$\left(\frac{3}{5}\right) = 60\%$$

Cross multiply.

Divide both sides by 5 to solve for x .

Video Review



MEDIA

Click image to the left for more content.



MEDIA

Click image to the left for more content.

Guided Practice

Express 75% as a reduced fraction.

Solution:

75% means $\frac{75}{100}$. We just need to reduce it:

$$\frac{75}{100} = \frac{3 \times 25}{4 \times 25} = \frac{3}{4}$$

Practice

Sample explanations for some of the practice exercises below are available by viewing the following video. Note that there is not always a match between the number of the practice exercise in the video and the number of the practice exercise listed in the following exercise set. However, the practice exercise is the same in both. [CK-12 Basic Algebra:PercentProblems \(14:15\)](#)



MEDIA

Click image to the left for more content.

Express the following decimals as percents.

1. 0.011
2. 0.001
3. 0.91
4. 1.75
5. 20

Express the following fractions as a percent (round to two decimal places when necessary).

6. $\frac{1}{6}$
7. $\frac{5}{24}$
8. $\frac{6}{7}$
9. $\frac{11}{7}$
10. $\frac{13}{97}$

Express the following percentages as reduced fractions.

11. 11%
12. 65%
13. 16%
14. 12.5%
15. 87.5%

3.10 Percent Equations

Here you'll learn how to form equations involving percentages in order to solve problems.

Suppose that there was an article in your school newspaper that said that 80% of the students in your school plan on attending the prom. It also said that 500 students in your school plan on attending the prom. Would you be able to tell from this information how many students there are in your school? In this Concept, you'll learn how to solve equations involving percentages so that you can determine information such as this.

Guidance

Now that you remember how to convert between decimals and percents, you are ready for the *percent equation*:

$$\text{part} = \% \text{ rate} \times \text{base}$$

The key words in a percent equation will help you translate it into a correct algebraic equation. Remember the equal sign symbolizes the word “is” and the multiplication symbol symbolizes the word “of.”

Example A

Find 30% of 85.

Solution: You are asked to find the part of 85 that is 30%. First, translate into an equation:

$$n = 30\% \times 85$$

Convert the percent to a decimal and simplify:

$$n = 0.30 \times 85$$

$$n = 25.5$$

Example B

A dime is worth what percent of a dollar?

Solution:

Since a dime is 10 cents and a dollar is 100 cents, we can set up the following equation:

$$\frac{10}{100} = 10\%$$

Example C

50 is 15% of what number?

Solution: Translate into an equation:

$$50 = 15\% \times w$$

Rewrite the percent as a decimal and solve:

$$\begin{aligned} 50 &= 0.15 \times w \\ \frac{50}{0.15} &= \frac{0.15 \times w}{0.15} \\ 333\frac{1}{3} &= w \end{aligned}$$

Video Review



MEDIA

Click image to the left for more content.



MEDIA

Click image to the left for more content.

Guided Practice

6 is 2% of what number?

Solution:

First, use the percent equation:

$$6 = 2\% \times n$$

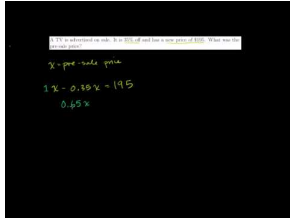
We can also use the fractional form of a percentage. Substitute in $\frac{2}{100}$ for 2%, since they are equivalent expressions:

$$\begin{aligned} 6 &= \frac{2}{100} \times n \\ \frac{100}{2} \times 6 &= \frac{100}{2} \times \frac{2}{100} \times n \\ \frac{600}{2} &= n \\ 300 &= n \end{aligned}$$

6 is 2% of 300.

Practice

Sample explanations for some of the practice exercises below are available by viewing the following video. Note that there is not always a match between the number of the practice exercise in the video and the number of the practice exercise listed in the following exercise set. However, the practice exercise is the same in both. [CK-12 Basic Algebra:PercentProblems](#) (14:15)

**MEDIA**

Click image to the left for more content.

Answer the following.

1. 32% of 600 is what number?
2. 50% of \$9.00 is what number?
3. $\frac{3}{4}\%$ of 16 is what number?
4. 9.2% of 500 is what number?
5. 8 is 20% of what number?
6. 99 is 180% of what number?
7. What percent of 7.2 is 45?
8. What percent of 150 is 5?
9. What percent of 50 is 2500?
10. \$3.50 is 25% of what number?

3.11 Percent of Change

Here you'll take a look at problems involving a percent change and learn how to solve them.

Have you ever heard of the stock market? You can buy a share of a company, and its value can go up or down. Suppose a share of your favorite company has risen in price by 40% this year and is now worth \$200. Do you know how to find the price of a share at the beginning of the year? What if you knew the price at the beginning of the year and the percent increase? Could you find the current price? How about if you knew the price at the beginning of the year and the current price? Could you find the percent increase? You'll be able to answer questions such as these after completing this Concept.

Guidance

A useful way to express changes in quantities is through percents. You have probably seen signs such as "20% more free," or "save 35% today." When we use percents to represent a change, we generally use the formula:

$$\text{Percent change} = \left(\frac{\text{final amount} - \text{original amount}}{\text{original amount}} \right) \times 100\%$$

A **positive** percent change would thus be an **increase**, while a **negative** change would be a **decrease**.

Example A

A school of 500 students is expecting a 20% increase in students next year. How many students will the school have?

Solution: Using the percent of change equation, translate the situation into an equation. Because the 20% is an increase, it is written as a positive value.

$$\text{Percent change} = \left(\frac{\text{final amount} - \text{original amount}}{\text{original amount}} \right) \times 100\%$$

$$20\% = \left(\frac{\text{final amount} - 500}{500} \right) \times 100\%$$

Divide both sides by 100%.

$$0.2 = \frac{x - 500}{500}$$

Let x = final amount.

$$100 = x - 500$$

Multiply both sides by 500.

$$600 = x$$

Add 500 to both sides.

The school will have 600 students next year.

Example B

A \$150 mp3 player is on sale for 30% off. What is the price of the player?

Solution: Using the percent of change equation, translate the situation into an equation. Because the 30% is a discount, it is written as a negative.

$$\text{Percent change} = \left(\frac{\text{final amount} - \text{original amount}}{\text{original amount}} \right) \times 100\%$$

$$\left(\frac{x - 150}{150} \right) \cdot 100\% = -30\%$$

Divide both sides by 100%.

$$\left(\frac{x - 150}{150} \right) = -0.3\%$$

Multiply both sides by 150.

$$x - 150 = 150(-0.3) = -45$$

Add 150 to both sides.

$$x = -45 + 150$$

$$x = 105$$

The mp3 player will cost \$105.

Many real situations involve percents. Consider the following.

Example C

A shirt is marked down to \$20 from its original price of \$30. Additionally, all sale items are another 20% off.

- What is the cost of the shirt?
- What percent is this cost from the original price?

Solutions:

- In this case, \$20 is our original price, and the percent change will be a decrease by 20%.

$$\left(\frac{x - 20}{20} \right) \cdot 100\% = -20\%$$

Divide both sides by 100%.

$$\left(\frac{x - 20}{20} \right) = -0.2\%$$

Multiply both sides by 20.

$$x - 20 = 20(-0.2) = -4$$

Add 20 to both sides.

$$x = -4 + 20$$

$$x = 16$$

The shirt will cost \$16 after the additional 20% off.

- Now we need to calculate what percentage \$16 is of the original price, \$30.

$$\left(\frac{16 - 30}{30} \right) \cdot 100\% = \text{Percent Change}$$

Simplify the left side.

$$\left(\frac{-14}{30} \right) \cdot 100\% = \text{Percent Change}$$

Simplify the left side.

$$\left(\frac{-7}{15} \right) \cdot 100\% = \text{Percent Change}$$

Simplify the left side.

$$-0.47 \cdot 100\% = \text{Percent Change}$$

Replace with an approximate decimal.

$$-47\% = \text{Percent Change}$$

Multiply to find the final answer.

The shirt was purchased at about 47% off the original price of \$30.

Video Review



MEDIA

Click image to the left for more content.



MEDIA

Click image to the left for more content.

Guided Example

In 2004, the **US Department of Agriculture** had 112,071 employees, of which 87,846 were Caucasian. Of the remaining minorities, African-American and Hispanic employees were the two largest demographic groups, with 11,754 and 6899 employees, respectively.*

- Calculate the total percentage of minority (non-Caucasian) employees at the USDA.
- Calculate the percentage of African-American employees at the USDA.
- Calculate the percentage of minority employees at the USDA who were neither African-American nor Hispanic.

Solutions:

a) Use the percent equation $\text{Rate} \times \text{Total} = \text{Part}$. The **total** number of employees is 112,071. We know that the number of Caucasian employees is 87,846, which means that there must be $(112,071 - 87,846) = 24,225$ non-Caucasian employees. This is the **part**.

$$\text{Rate} \times 112,071 = 24,225$$

$$\text{Rate} \approx 0.216$$

$$\text{Rate} \approx 21.6\%$$

Divide both sides by 112,071.

Multiply by 100 to obtain percent.

Approximately 21.6% of USDA employees in 2004 were from minority groups.

b) Total = 112,071 Part = 11,754

$$\text{Rate} \times 112,071 = 11,754$$

$$\text{Rate} \approx 0.105$$

$$\text{Rate} \approx 10.5\%$$

Divide both sides by 112,071.

Multiply by 100 to obtain percent.

Approximately 10.5% of USDA employees in 2004 were African-American.

c) We now know there are 24,225 non-Caucasian employees. That means there must be $(24,225 - 11,754 - 6899) = 5572$ minority employees who are neither African-American nor Hispanic. The part is 5572.

$$\text{Rate} \times 112,071 = 5572$$

$$\text{Rate} \approx 0.05$$

$$\text{Rate} \approx 5\%$$

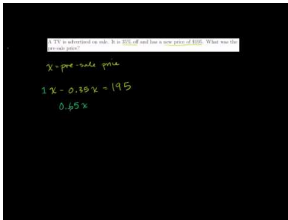
Divide both sides by 112,071.

Multiply by 100 to obtain percent.

Approximately 5% of USDA minority employees in 2004 were neither African-American nor Hispanic.

Practice

Sample explanations for some of the practice exercises below are available by viewing the following video. Note that there is not always a match between the number of the practice exercise in the video and the number of the practice exercise listed in the following exercise set. However, the practice exercise is the same in both. [CK-12 Basic Algebra:PercentProblems](#) (14:15)



MEDIA

Click image to the left for more content.

Find the following.

1. A realtor earns 7.5% commission on the sale of a home. How much commission does the realtor make if the home sells for \$215,000?
2. The fire department hopes to raise \$30,000 to repair a fire house. So far the department has raised \$1,750.00. What percent is this of their goal?
3. A \$49.99 shirt goes on sale for \$29.99. By what percent was the shirt discounted?
4. A TV is advertised on sale. It is 35% off and has a new price of \$195. What was the pre-sale price?
5. An employee at a store is currently paid \$9.50 per hour. If she works a full year, she gets a 12% pay raise. What will her new hourly rate be after the raise?
6. Store A and Store B both sell bikes, and both buy bikes from the same supplier at the same prices. Store A has a 40% mark-up for their prices, while store B has a 90% mark-up. Store B has a permanent sale and will always sell at 60% off those prices. Which store offers the better deal?
7. 788 students were surveyed about their favorite type of television show. 18% stated that their favorite show was reality-based. How many students said their favorite show was reality-based?

Mixed Review

8. List the property used at each step of solving the following equation:

$$4(x - 3) = 20$$

$$4x - 12 = 20$$

$$4x = 32$$

$$x = 8$$

9. The volume of a cylinder is given by the formula $Volume = \pi r^2 h$, where $r =$ the radius and $h =$ the height of the cylinder. Determine the volume of a soup can with a 3-inch radius and a 5.5-inch height.
10. Circle the math noun in this sentence: *Jerry makes holiday baskets for his youth group. He can make one every 50 minutes. How many baskets can Jerry make in 25 hours?*
11. When is making a table a good problem-solving strategy? When may it not be such a good strategy?
12. Solve for w : $\frac{10}{w} = \frac{12}{3}$.

3.12 Formulas for Problem Solving

Here you'll include using formulas in your toolbox of problem-solving strategies.

Suppose you were allowed to enter formulas into your graphing calculator before taking a quiz. Would you know how to enter the formula for the surface area of a cube? How about the formula for the volume of a cone? What about the formula for the area of a rectangle? In this Concept, you'll learn how to use all these formulas, so you may not need your calculator after all!

Guidance

Some problems are easily solved by applying a formula, such as the Percent Equation or the area of a circle. Formulas are especially common in geometry, and we will see a few of them in this lesson. In many real-world problems, you have to write your own equation, and then solve for the unknown.

Example A

The surface area of a cube is given by the formula $SurfaceArea = 6x^2$, where x = side of the cube. Determine the surface area of a die with a 2-inch side length.

Solution:

Since $x = 2$ in this problem, we substitute that into the formula for surface area.

$$\begin{aligned} \text{Surface Area} &= 6x^2 \\ \text{Surface Area} &= 6(2)^2 \\ \text{Surface Area} &= 6 \cdot 4 = 24 \end{aligned}$$

The surface area is 24 square inches.

Example B

A 500-sheet stack of copy paper is 1.75 inches high. The paper tray on a commercial copy machine holds a two-foot-high stack of paper. Approximately how many sheets is this?

Solution:

In this situation, we will write an equation using a proportion.

$$\frac{\text{number of sheets}}{\text{height}} = \frac{\text{number of sheets}}{\text{height}}$$

We need to have our heights have the same units, so we will figure out how many inches are in 2 feet. Since 1 foot is 12 inches, then 2 feet are equivalent to 24 inches.

$$\frac{500}{1.75} = \frac{\text{number of sheets}}{24}$$

$$\frac{500}{1.75} \times 24 = \frac{\text{number of sheets}}{24} \times 24$$

$$6857.14 \approx \text{number of sheets}$$

A two-foot-high stack of paper will be approximately 6857 sheets of paper.

Example C

The volume of a cone is given by the formula $\text{Volume} = \frac{\pi r^2(h)}{3}$, where r = the radius, and h = the height of the cone. Determine the amount of liquid a paper cone can hold with a 1.5-inch diameter and a 5-inch height.

Solution:

We want to substitute in values for the variables. But first, we are given the diameter, and we need to find the radius. The radius is half of the diameter so $1.5 \div 2 = 1.5 \times \frac{1}{2} = 0.75$.

$$\text{Volume} = \frac{\pi r^2(h)}{3}$$

$$\text{Volume} = \frac{\pi(0.75)^2(5)}{3}$$

We evaluate the expression in our calculator, using $\pi \approx 3.14$.

Volume ≈ 2.94

The volume of the cone is approximately 2.94 inches cubed. It is approximate because we used an approximation of π .

Video Review



MEDIA

Click image to the left for more content.

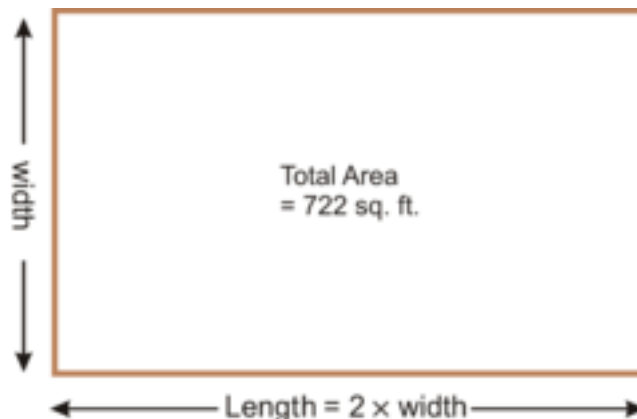


MEDIA

Click image to the left for more content.

Guided Practice

An architect is designing a room that is going to be twice as long as it is wide. The total square footage of the room is going to be 722 square feet. What are the dimensions in feet of the room?



A formula applies very well to this situation. The formula for the area of a rectangle is $A = l(w)$, where $l = \text{length}$ and $w = \text{width}$. From the situation, we know the length is twice as long as the width. Translating this into an algebraic equation, we get:

$$A = (2w)w$$

Simplifying the equation: $A = 2w^2$

Substituting the known value for A: $722 = 2w^2$

$$2w^2 = 722$$

$$w^2 = 361$$

$$w = \sqrt{361} = 19$$

$$2w = 2 \times 19 = 38$$

$$w = 19$$


Divide both sides by 2.

Take the square root of both sides.

The width is 19 feet and the length is 38 feet.

Practice

Sample explanations for some of the practice exercises below are available by viewing the following video. Note that there is not always a match between the number of the practice exercise in the video and the number of the practice exercise listed in the following exercise set. However, the practice exercise is the same in both. [CK-12 Basic Algebra: Word Problem Solving 3](#) (11:06)



MEDIA

Click image to the left for more content.

1. Patricia is building a sandbox for her daughter. It's going to be five feet wide and eight feet long. She wants the height of the sandbox to be four inches above the height of the sand. She has 30 cubic feet of sand. How high should the sandbox be?
2. It was sale day at Macy's and everything was 20% less than the regular price. Peter bought a pair of shoes, and using a coupon, got an additional 10% off the discounted price. The price he paid for the shoes was \$36. How much did the shoes cost originally?
3. Peter is planning to show a video file to the school at graduation, but he's worried that the distance the audience sits from the speakers will cause the sound and the picture to be out of sync. If the audience sits 20 meters from the speakers, what is the delay between the picture and the sound? (The speed of sound in air is 340 meters per second.)
4. Rosa has saved all year and wishes to spend the money she has on new clothes and a vacation. She will spend 30% more on the vacation than on clothes. If she saved \$1000 in total, how much money (to the nearest whole dollar) can she spend on the vacation?
5. On a DVD, data is stored between a radius of 2.3 cm and 5.7 cm. Calculate the total area available for data storage in square cm.
6. If a Blu-ray TM DVD stores 25 gigabytes (GB), what is the **storage density** in GB per square cm ?
7. The volume of a cone is given by the formula $Volume = \frac{\pi r^2(h)}{3}$, where $r = \text{the radius}$, and $h = \text{the height of the cone}$. Determine the amount of liquid a paper cone can hold with a 1.5-inch diameter and a 5-inch height.
8. Consider the conversion $1 \text{ meter} = 39.37 \text{ inches}$. How many inches are in a kilometer? (Hint: A kilometer is equal to 1,000 meters.)
9. Yanni's motorcycle travels 108 *miles/hour*. $1 \text{ mph} = 0.44704 \text{ meters/second}$. How many meters did Yanni travel in 45 seconds?
10. The area of a rectangle is given by the formula $A = l(w)$. A rectangle has an area of 132 square centimeters and a length of 11 centimeters. What is the perimeter of the rectangle?

Mixed Review

11. Write the following ratio in simplest form: 14:21.
12. Write the following ratio in simplest form: 55:33.
13. Solve for a : $\frac{15a}{36} = \frac{45}{12}$.
14. Solve for x : $\frac{4x+5}{5} = \frac{2x+7}{7}$.
15. Solve for x : $4(x-7) + x = 2$.
16. What is 24% of 96?
17. Find the sum: $4\frac{2}{5} - (-\frac{7}{3})$.

Summary

This chapter begins by talking about one-step equations and provides some real-world problems to solve by using these types of equations. It then moves on to two-step equations and multi-step equations, covering both the combining of like terms and the Distributive Property. Next, solving equations with variables on both sides and with ratios and proportions is discussed, as well as solving problems using scales and indirect measurement. The chapter then gives instruction on percents, including the percent equation and the percent of change. Finally, the using a formula problem-solving strategy is highlighted.

Linear Equations Review

Solve for the variable.

1. $a + 11.2 = 7.3$

2. $9.045 + j = 27$
3. $11 = b + \frac{5}{7}$
4. $-22 = -3 + k$
5. $-9 = n - 6$
6. $-6 + l = -27$
7. $\frac{s}{2} = -18$
8. $29 = \frac{e}{27}$
9. $u \div -66 = 11$
10. $-5f = -110$
11. $76 = -19p$
12. $-h = -9$
13. $\frac{q+1}{11} = -2$
14. $-2 - 2m = -22$
15. $-5 + \frac{d}{6} = -7$
16. $32 = 2b - 3b + 5b$
17. $9 = 4h + 14h$
18. $u - 3u - 2u = 144$
19. $2i + 5 - 7i = 15$
20. $-10 = t + 15 - 4t$
21. $\frac{1}{2}k - 16 + 2\frac{1}{2}k = 0$
22. $\frac{-1543}{120} = \frac{3}{5}x + \frac{11}{4} \left(-\frac{11}{5}x + \frac{8}{5} \right)$
23. $-5.44x + 5.11(7.3x + 2) = -37.3997 + 6.8x$
24. $-5(5r + 7) = 25 + 5r$
25. $-7p + 37 = 2(-6p + 1)$
26. $3(-5y - 4) = -6y - 39$
27. $5(a - 7) + 2(a - 3(a - 5)) = 0$

Write the following comparisons as ratios. Simplify when appropriate.

28. 10 boys to 25 students
29. 96 apples to 42 pears
30. \$600 to \$900
31. 45 miles to 3 hours

Write the following as a unit rate.

32. \$4.99 for 16 ounces of turkey burger
33. 40 computers to 460 students
34. 18 teachers to 98 students
35. 48 minutes to 15 appointments

Solve the proportion.

36. Solve for n : $-\frac{6}{n-7} = -\frac{2}{n+1}$.
37. Solve for x : $-\frac{9}{5} = \frac{x-7}{x+10}$.
38. Solve for b : $\frac{5b}{12} = \frac{3}{11}$.
39. Solve for n : $-\frac{12}{n} = \frac{5}{2n+6}$.

Write each decimal as a percent.

40. 0.4567

41. 2.01
42. 0.005
43. 0.043

Write each percent as a decimal.

44. 23.5%
45. 0.08%
46. 0.025%
47. 125.4%

Write each percent as a fraction.

48. 78%
49. 11.2%
50. 10.5%
51. $33.\bar{3}\%$

Solve using the percent equation.

52. 32.4 is 45% of what number?
53. 58.7 is what percent of 1,000?
54. What is 12% of 78?
55. The original price is \$44 and the mark-up is 20%. What is the new price?
56. An item originally priced at \$240 has a 15% discount. What is the new price?
57. A pair of shoes originally priced at \$89.99 is discounted to \$74.99. What is the percent of mark-down?
58. A salon's haircut rose in price from \$10 to \$14. What is the percent of mark-up?
59. The price of an item costing c dollars decreased by \$48, resulting in a 30% mark-down. What was the original price?
60. The width of a rectangle is 15 units less than its length. The perimeter of the rectangle is 98 units. What is the rectangle's length?
61. George took a cab from home to a job interview. The cab fare was \$4.00 plus \$0.25 per mile. His total fare was \$16.75. How many miles did he travel?
62. The sum of twice a number and 38 is 124. What is the number?
63. The perimeter of a square parking lot is 260 yards. What are the dimensions of the parking lot?
64. A restaurant charges \$3.79 for $\frac{1}{8}$ of a pie. At this rate, how much does the restaurant charge for the entire pie?
65. A 60-watt light bulb consumes 0.06 *kilowatts/hour* of energy. How long was the bulb left on if it consumed 5.56 *kilowatts/hour* of energy?
66. A $6\frac{1}{2}$ -foot-tall car casts a 33.2-foot shadow. Next to the car is an elephant casting a 51.5-foot shadow. How tall is the elephant?
67. Two cities are 87 miles apart. How far apart would they be on a map with a scale of 5 *inches* : 32 *miles*?

Linear Equations Test

1. School lunch rose from \$1.60 to \$2.35. What was the percent of mark-up?
2. Solve for c : $\frac{3c}{8} = 11$.
3. Write 6.35 as a percent.
4. Write the following as a simplified ratio: 85 tomatoes to 6 plants.
5. Yvonne made 12 more cupcakes than she did yesterday. She made a total of 68 cupcakes over the two days. How many cupcakes did she make the second day?
6. A swing set 8 feet tall casts a 4-foot-long shadow. How long is the shadow of a lawn gnome 4 feet tall?

7. Solve the proportion: $\frac{v}{v-2} = -\frac{9}{5}$.
8. Find the distance between Owosso and Perry if they are 16 cm apart on a map with a scale of 21 km : 4 cm.
9. Solve for j : $-\frac{13}{4} - \frac{3}{2}(\frac{3}{4}j - \frac{4}{5}) = -\frac{14}{5}$.
10. Solve for m : $2m(2-4) + 5m(-8) = 9$.
11. Job A pays \$15 plus \$2.00 per hour. Job B pays \$3.75 per hour. When will the two jobs pay exactly the same?
12. Solve for k : $9.0604 + 2.062k = 0.3(2.2k + 5.9)$.
13. Solve for a : $-9 - a = 15$.
14. 46 tons is 11% of what?
15. 17% of what is 473 meters?
16. Find the percent of change from 73 to 309.
17. JoAnn wants to adjust a bread recipe by tripling its ingredients. If the recipe calls for $4\frac{1}{3}$ cups of pastry flour, how much should she use?
18. A sweater originally marked \$80.00 went on sale for \$45. What was the percent of change?

Texas Instruments Resources

In the CK-12 Texas Instruments Algebra I FlexBook, there are graphing calculator activities designed to supplement the objectives for some of the lessons in this chapter. See <http://www.ck12.org/flexr/chapter/9613>.

CHAPTER

4

Graphs of Linear Equations and Functions

Chapter Outline

- 4.1 GRAPHS IN THE COORDINATE PLANE
 - 4.2 GRAPHS OF LINEAR EQUATIONS
 - 4.3 HORIZONTAL AND VERTICAL LINE GRAPHS
 - 4.4 APPLICATIONS OF LINEAR GRAPHS
 - 4.5 INTERCEPTS BY SUBSTITUTION
 - 4.6 INTERCEPTS AND THE COVER-UP METHOD
 - 4.7 SLOPE
 - 4.8 RATES OF CHANGE
 - 4.9 SLOPE-INTERCEPT FORM
 - 4.10 GRAPHS USING SLOPE-INTERCEPT FORM
 - 4.11 DIRECT VARIATION
 - 4.12 APPLICATIONS USING DIRECT VARIATION
 - 4.13 FUNCTION NOTATION AND LINEAR FUNCTIONS
 - 4.14 GRAPHS OF LINEAR FUNCTIONS
 - 4.15 PROBLEM SOLVING WITH LINEAR GRAPHS
-

Introduction

The ability to graph linear equations and functions is important in mathematics. In fact, graphing equations and solving equations are two of the most important concepts in mathematics. If you master these, all mathematical subjects will be much easier, even Calculus!

This chapter focuses on the visual representations of linear equations. You will learn how to graph lines from equations and write functions of graphed lines. You will also learn how to find the slope of a line and how to use a slope to interpret a graph.

Weather, such as temperature and the distance of a thunderstorm can be predicted using linear equations. You will learn about these applications and more in this chapter.



4.1 Graphs in the Coordinate Plane

Here you'll learn how to find the coordinates of points that have been plotted on a Cartesian plane and how to plot points given the coordinates.

Suppose that every year you go to the doctor for a routine physical, and each time the doctor measures your resting heart rate in beats per minute. The doctor has kept this data, and in order to see how your resting heart rate has changed over time, you want to plot the data on a coordinate plane. Could you do it? Or what if the doctor has already plotted the points for you? Could you look at the points and determine what your resting heart rate was each year? After completing this Concept, you'll be able to perform tasks like these.

Guidance

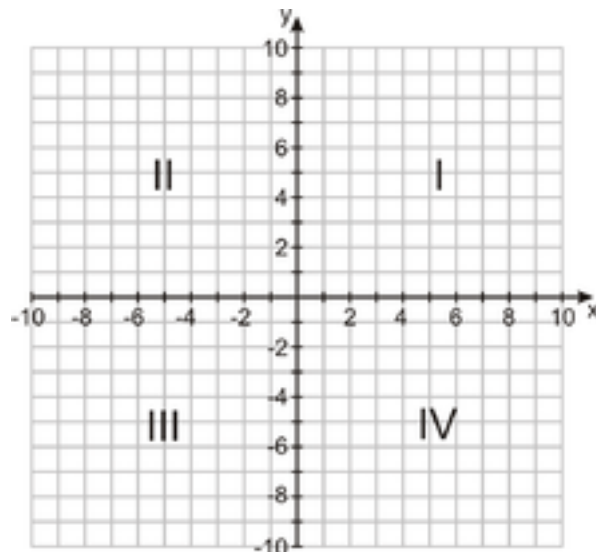
The Coordinate Plane

In a previous Concept, you graphed ordered pairs. This Concept will expand upon your knowledge of graphing ordered pairs to include vocabulary and the naming of specific items related to ordered pairs.

An ordered pair is also called a **coordinate**. The y -value is called the ordinate and the x -value is called the abscissa.

A two-dimensional (2-D) coordinate has the form (x, y) .

The 2-D plane that is used to graph coordinates or equations is called a **Cartesian plane** or a coordinate plane. This 2-D plane is named after its creator, Rene Descartes. The Cartesian plane is separated into four **quadrants** by two **axes**. The horizontal axis is called the x -**axis** and the vertical axis is called the y -**axis**. The quadrants are named using Roman numerals. The image below illustrates the quadrant names.

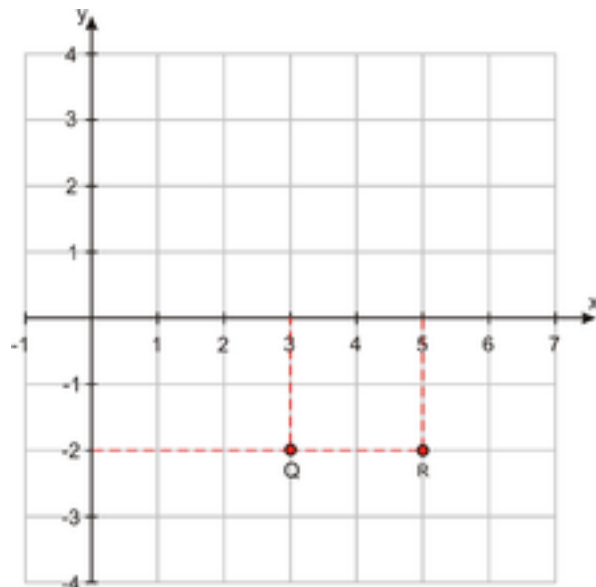


The first value of the ordered pair is the x -**value**. This value moves along the x -axis (horizontally). The second value of the ordered pair is the y -**value**. This value moves along the y -axis (vertically). This ordered pair provides the direction of the coordinate.

Multimedia link: For more information on the Cartesian plane and how to graph ordered pairs, visit Purple Math's - <http://www.purplemath.com/modules/plane.htm> - website.

Example A

Find the coordinates of points Q and R .



Solution: In order to get to Q , we move three units to the right, in the positive x direction, then two units down, in the negative y direction. The x -coordinate of Q is +3; the y -coordinate of Q is -2 .

$$Q = (3, -2)$$

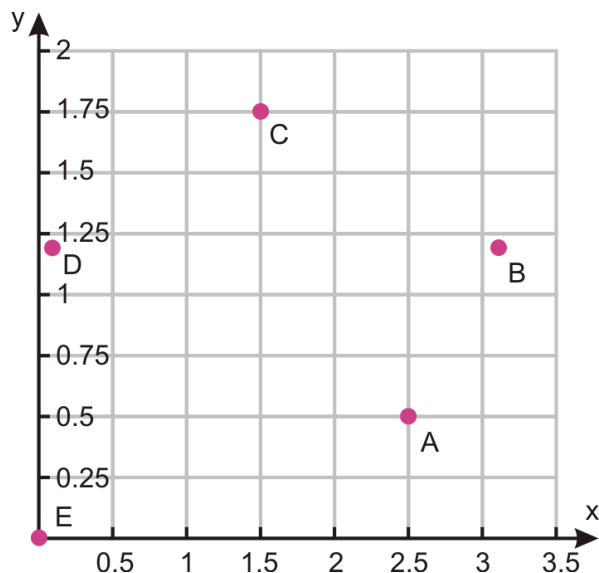
The coordinates of R are found in a similar way. The x -coordinate is +5 (five units in the positive x direction). The y -coordinate is -2 (two units in the negative y direction).

$$R = (5, -2).$$

Words of Wisdom from the Graphing Plane

Not all axes will be labeled for you. There will be many times you are required to label your own axes. Some problems may require you to graph only the first quadrant. Others need two or all four quadrants. The tic marks do not always count by ones. They can be marked in increments of 2, 5, or even $\frac{1}{2}$. The axes do not even need to have the same increments! The Cartesian plane below shows an example of this.

The increments by which you count your axes should MAXIMIZE the clarity of the graph.



In previous Concepts, you learned the vocabulary words **relation**, **function**, **domain**, and **range**.

A **relation** is a set of ordered pairs.

A **function** is a relation in which every x -coordinate matches with exactly one y -coordinate.

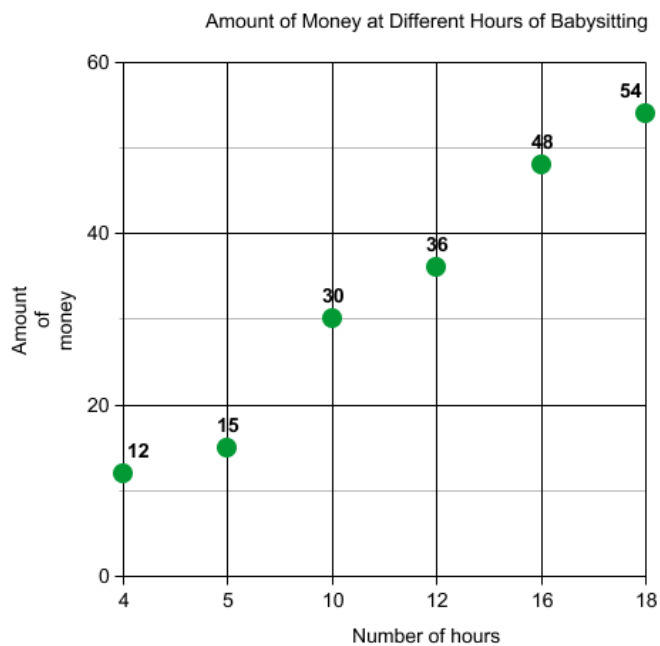
The set of all possible x -coordinates is the **domain**.

The set of all possible y -coordinates is called the **range**.

Example B

Graphing Given Tables and Rules

If you kept track of the amount of money you earned for different hours of babysitting, you created a relation. You can graph the information in this table to visualize the relationship between these two variables.



Hours	4	5	10	12	16	18
Total \$	12	15	30	36	48	54

The domain of the situation would be *all positive real numbers*. You can babysit for a fractional amount of time but not a negative amount of time. The domain would also be *all positive real numbers*. You can earn fractional money, but not negative money.

Example C

If you read a book and can read twenty pages an hour, there is a relationship between how many hours you read and how many pages you read. You may even know that you could write the formula as either:

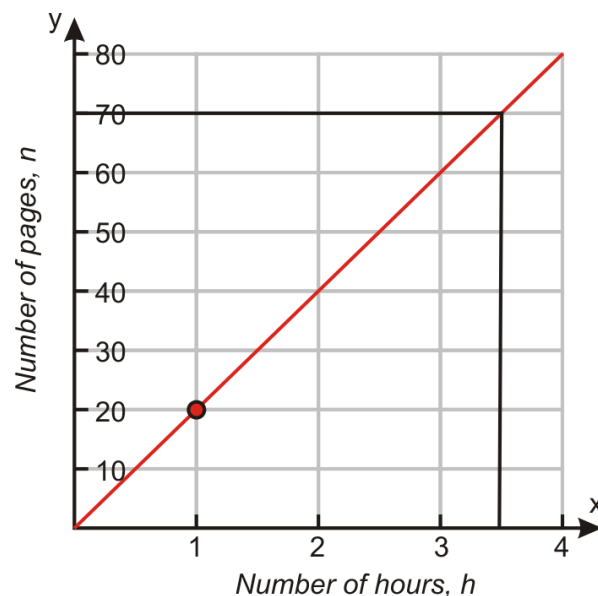
$$n = 20 \cdot h \quad n = \text{number of pages}; \quad h = \text{time measured in hours. OR...}$$

$$h = \frac{n}{20}$$

To graph this relation, you could make a chart. By picking values for the number of hours, you can determine the number of pages read. By graphing these coordinates, you can visualize the relation.

TABLE 4.1:

Hours	Pages
1	20
1.5	30
2	40
3.5	70
5	100



This relation appears to form a straight line. Therefore, the relationship between the total number of read pages and the number of hours can be called **linear**. The study of linear relationships is the focus of the next series of lessons.

Video Review



MEDIA

Click image to the left for more content.



MEDIA

Click image to the left for more content.

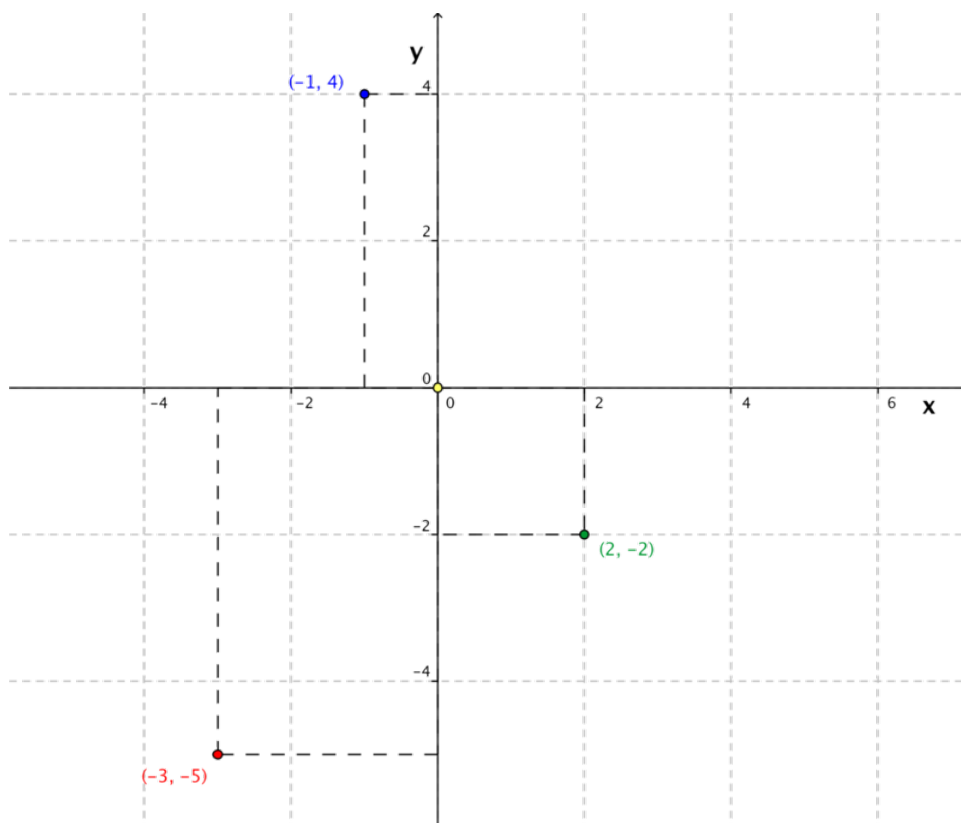
Guided Practice

Graph the following points, and give their coordinates:

- 3 to the left, and 5 down.
- 4 up, and 1 to the left.
- 2 to the right, and 2 down.

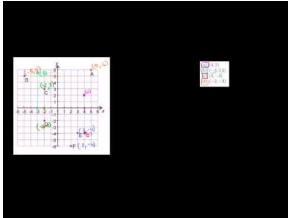
Solutions:

The yellow point is the origin, from where you start. Following the instructions, arrive at the red point $(-3, -5)$, blue point $(-1, 4)$, and green point $(2, -2)$.



Practice

Sample explanations for some of the practice exercises below are available by viewing the following video. Note that there is not always a match between the number of the practice exercise in the video and the number of the practice exercise listed in the following exercise set. However, the practice exercise is the same in both. [CK-12 Basic Algebra: The Coordinate Plane](#) (6:50)

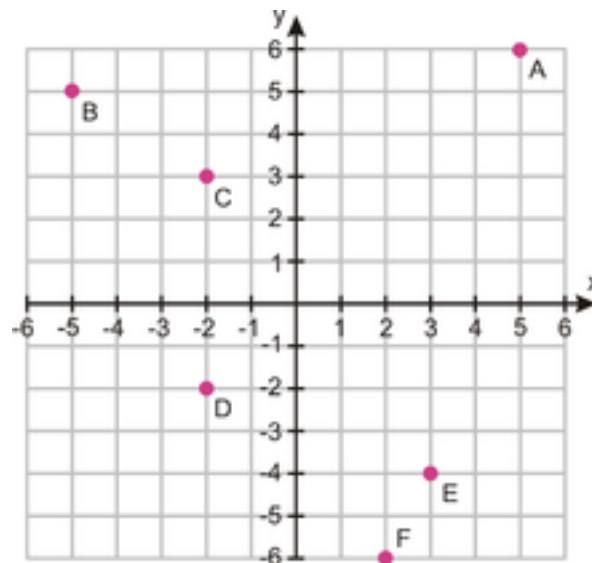


MEDIA

Click image to the left for more content.

In questions 1 – 6, identify the coordinates of the given letter.

1. D
2. A
3. F
4. E
5. B
6. C



Graph the following ordered pairs on one Cartesian plane. Identify the quadrant in which each ordered pair is located.

7. (4, 2)
8. (-3, 5.5)
9. (4, -4)
10. (-2, -3)
11. $(\frac{1}{2}, -\frac{3}{4})$
12. (-0.75, 1)
13. $(-2\frac{1}{2}, -6)$

14. (1.60, 4.25)

In 15 – 22, using the directions given in each problem, find and graph the coordinates on a Cartesian plane. The directions tell how far the point should be from the origin.

15. Six left, four down

16. One-half right, one-half up

17. Three right, five down

18. Nine left, seven up

19. Four and one-half left, three up

20. Eight right, two up

21. One left, one down

22. One right, three-quarter down

23. Plot the vertices of triangle ABC : $(0, 0)$, $(4, -3)$, $(6, 2)$.

24. The following three points are three vertices of square $ABCD$. Plot them on a coordinate plane then determine what the coordinates of the fourth point, D , would be. Plot that fourth point and label it. $A(-4, -4)$ $B(3, -4)$ $C(3, 3)$

25. Does the ordered pair $(2, 0)$ lie in a quadrant? Explain your thinking.

26. Why do you think $(0, 0)$ is called the origin?

27. Becky has a large bag of MMs that she knows she should share with Jaeyun. Jaeyun has a packet of Starburst candy. Becky tells Jaeyun that for every Starburst he gives her, she will give him three MMs in return. If x is the number of Starburst that Jaeyun gives Becky, and y is the number of MMs he gets in return, complete each of the following.

a. Write an algebraic rule for y in terms of x .

b. Make a table of values for y with x values of 0, 1, 2, 3, 4, 5.

c. Plot the function linking x and y on the following scale $0 \leq x \leq 10, 0 \leq y \leq 10$.

28. Consider the rule: $y = \frac{1}{4}x + 8$. Make a table. Then graph the relation.

29. Ian has the following collection of data. Graph the ordered pairs and make a conclusion from the graph.

TABLE 4.2:

Year	% of Men Employed in the United States
1973	75.5
1980	72.0
1986	71.0
1992	69.8
1997	71.3
2002	69.7
2005	69.6
2007	69.8
2009	64.5

4.2 Graphs of Linear Equations

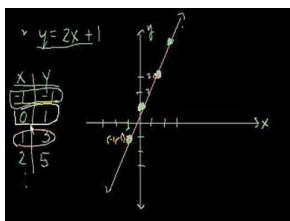
Here you'll learn how to use coordinate pairs to graph linear equations.

Suppose that there is a linear relationship between your annual income and the amount you must pay in state income tax. What if you wanted to make a graph that showed how much tax you must pay based on your income? Could you do it? After completing this Concept, you'll be able to take a linear equation like the one representing the situation just described and graph it on a coordinate plane.

Watch This

To see some simple examples of graphing linear equations by hand, view the video

[KhanAcademygraphing lines](#) (9:49)



MEDIA

Click image to the left for more content.

The narrator of the video models graphing linear equations by using a table of values to plot points and then connecting those points with a line. This process reinforces the procedure of graphing lines by hand.

Guidance

Previously, you learned how to solve equations in one variable. The answer was of the form *variable = some number*. In this Concept, you will learn how to solve equations with two variables. Below are several examples of two-variable equations:

$$p = 20(h)$$

$$m = 8.15(n)$$

$$y = 4x + 7$$

You have seen each of these equations used in a previous Concept, and you will see how to graph them in this Concept. Their solutions are not one value because there are *two variables*. The solutions to these equations are *pairs of numbers*. These pairs of numbers can be graphed in a Cartesian plane.

The solutions to an equation in two variables are sets of ordered pairs.

The solutions to a **linear equation** are the coordinates on the graphed line.

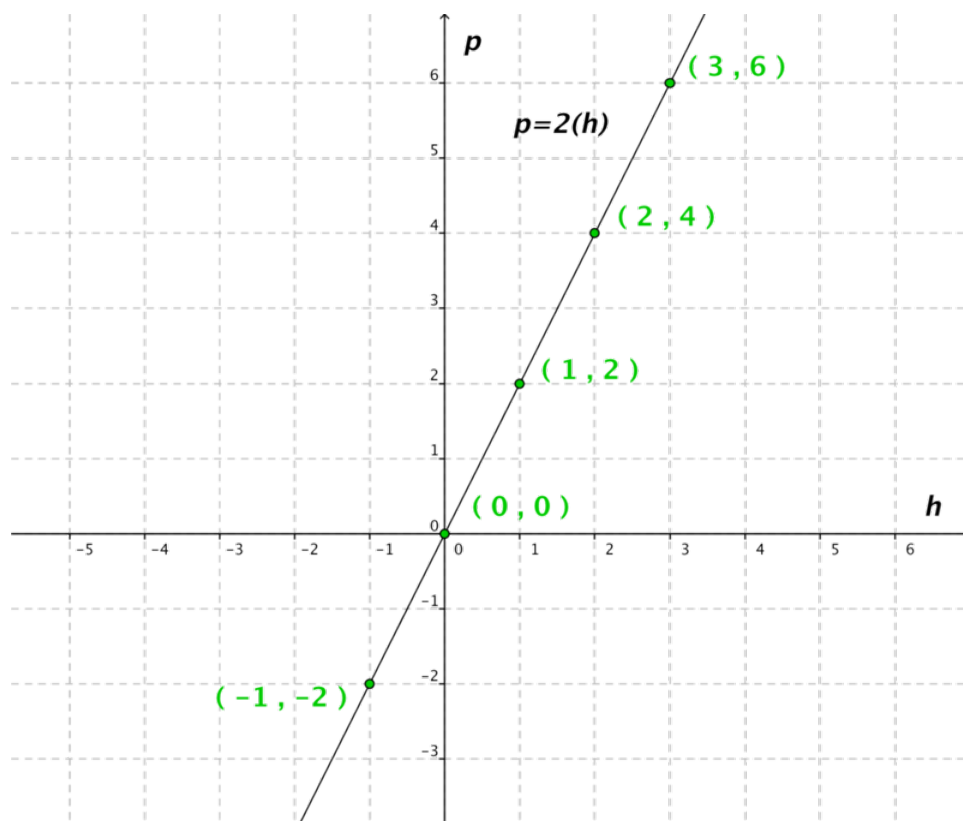
By making a table, you are finding the solutions to the equation with two variables.

Example AGraph $p = 2(h)$.**Solution:**

Make a table and then graph the points:

TABLE 4.3:

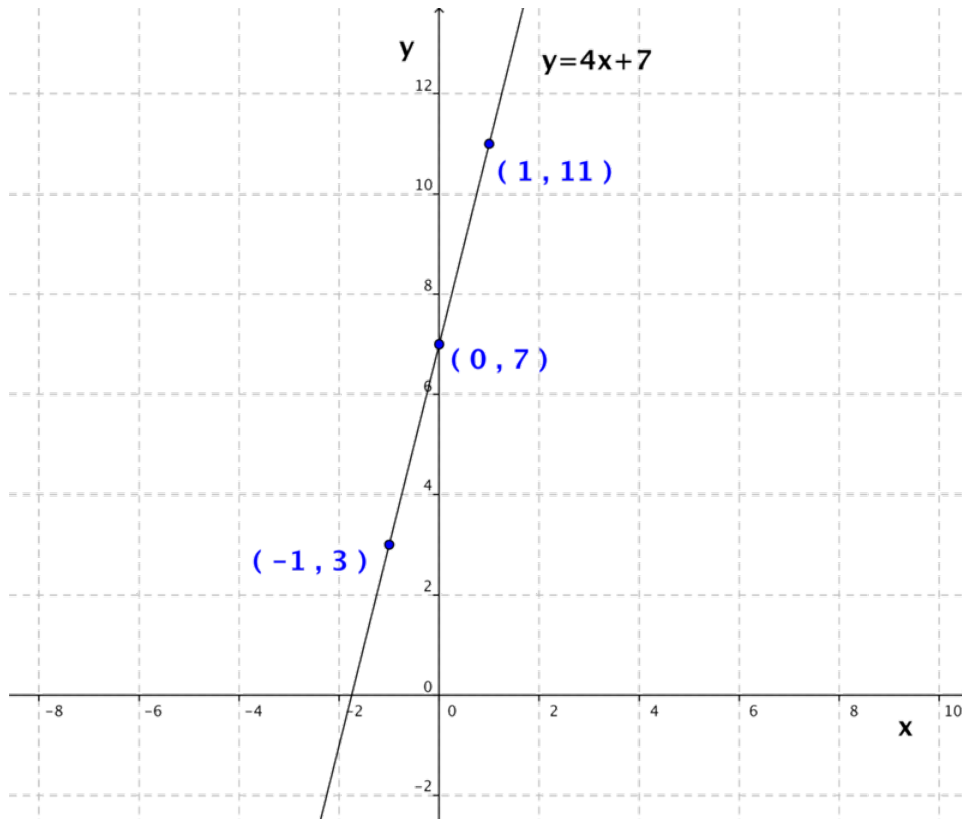
h	p
0	0
1	2
2	4
3	6

**Example B**Graph $y = 4x + 7$.**Solution:**

Make a table and then graph the points.

TABLE 4.4:

x	y
-1	3
0	7
1	13

**Example C**

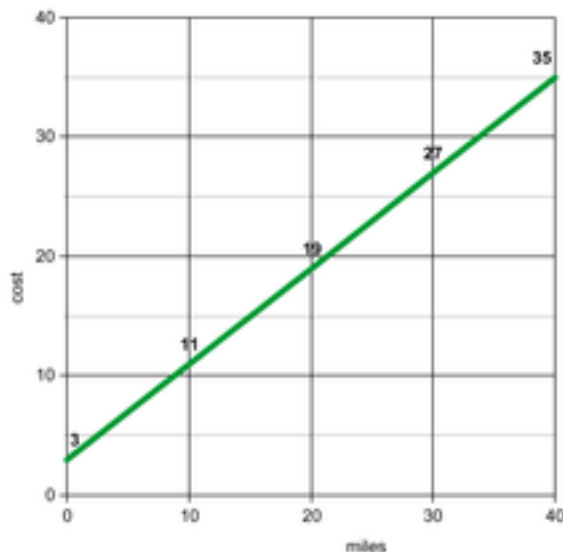
A taxi fare costs more the further you travel. Taxis usually charge a fee on top of the per-mile charge. In this case, the taxi charges \$3 as a set fee and \$0.80 per mile traveled. Find all the possible solutions to this equation.

Solution: Here is the equation linking the cost in dollars (y) to hire a taxi and the distance traveled in miles (x):
 $y = 0.8x + 3$.

This is an equation in two variables. By creating a table, we can graph these ordered pairs to find the solutions.

TABLE 4.5:

x (miles)	y (cost \$)
0	3
10	11
20	19
30	27
40	35



The solutions to the taxi problem are located on the green line graphed above. To find any cab ride cost, you just need to find the y of the desired x .

Video Review



MEDIA
Click image to the left for more content.



MEDIA
Click image to the left for more content.

Guided Practice

Graph $m = 8.15(n)$.

Solution:

To graph this linear equation, we will make a table of some points. We can plug in values for h to get values for m . For example:

$$m = 8.15(-1) = -8.15$$

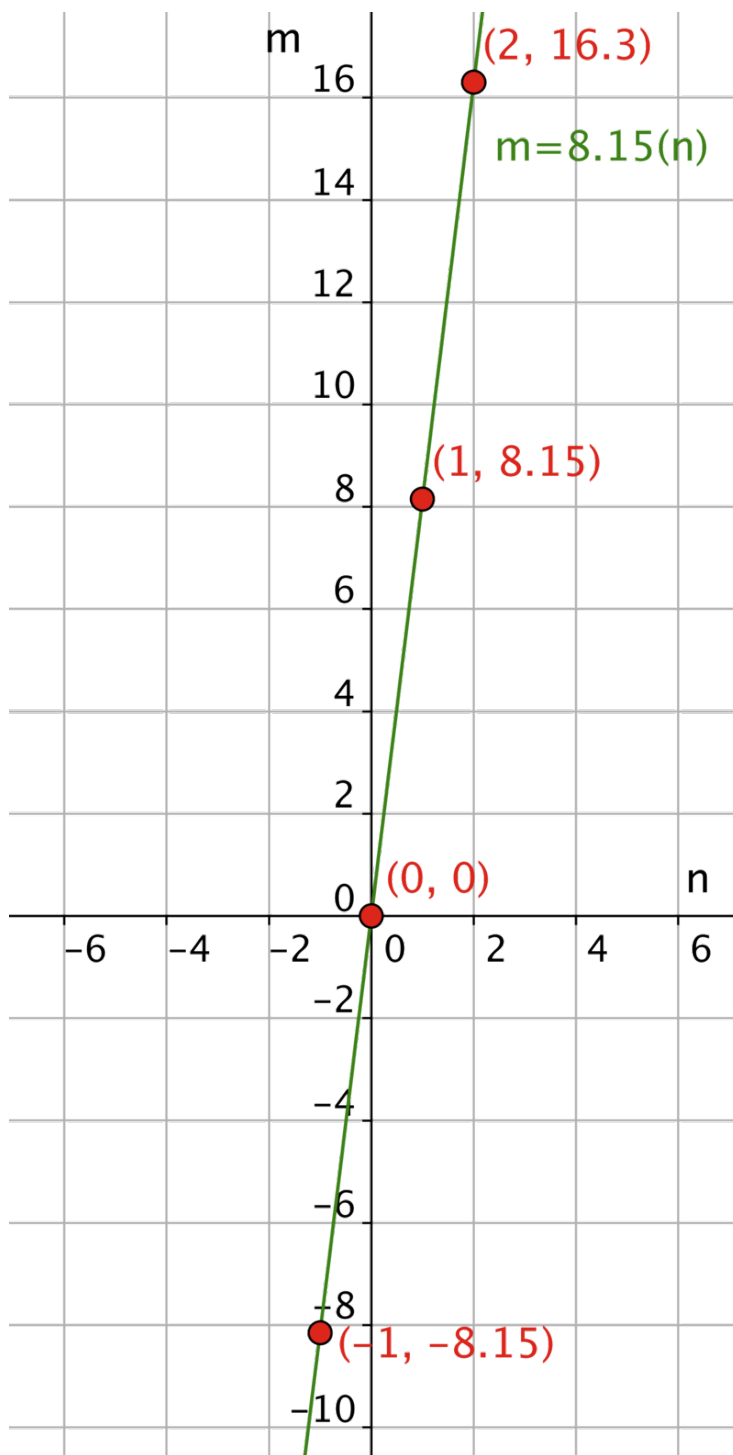
TABLE 4.6:

n	m
-1	-8.15
0	0

TABLE 4.6: (continued)

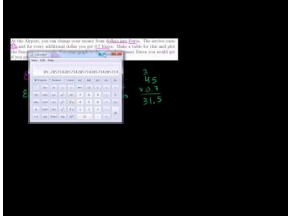
n	m
1	8.15
2	16.3

Next, we will graph each point, and then connect the points with a line.



Practice

Sample explanations for some of the practice exercises below are available by viewing the following video. Note that there is not always a match between the number of the practice exercise in the video and the number of the practice exercise listed in the following exercise set. However, the practice exercise is the same in both. [CK-12 Basic Algebra: Graphs of Linear Equations \(13:09\)](#)



MEDIA

Click image to the left for more content.

1. What are the solutions to an equation in two variables? How is this different from an equation in one variable?
2. **Think of a number. Triple it, and then subtract seven from your answer.** Make a table of values and plot the function that this sentence represents.

Graph the solutions to each linear equation by making a table and graphing the coordinates.

3. $y = 2x + 7$
4. $y = 0.7x - 4$
5. $y = 6 - 1.25x$

Mixed Review

6. Find the sum: $\frac{3}{8} + \frac{1}{5} - \frac{5}{9}$.
7. Solve for m : $0.05m + 0.025(6000 - m) = 512$.
8. Solve the proportion for u : $\frac{16}{u-8} = \frac{36}{u}$.
9. What does the Additive Identity Property allow you to do when solving an equation?
10. Shari has 28 apples. Jordan takes $\frac{1}{4}$ of the apples. Shari then gives away 3 apples. How many apples does Shari have?
11. The perimeter of a triangle is given by the formula $Perimeter = a + b + c$, where a, b , and c are the lengths of the sides of a triangle. The perimeter of $\triangle ABC$ is 34 inches. One side of the triangle is 12 inches. A second side is 7 inches. How long is the remaining side of the triangle?
12. Evaluate $\frac{y^2 - 16 + 10y + 2x}{2}$, for $x = 2$ and $y = -2$.

4.3 Horizontal and Vertical Line Graphs

Here you'll learn about horizontal and vertical lines and how to graph them.

Suppose you're at an all-you-can-eat pancake house where you can pay \$8.99 and have all the pancakes you want. What if you graphed the number of pancakes you ate along the x -axis and the amount of money you have to pay along the y -axis. Would the line representing this situation be horizontal or vertical? In this Concept, you'll learn about horizontal and vertical lines so that you'll be able to create a graph for this type of scenario.

Guidance

Not all graphs are slanted or **oblique**. Some are horizontal or vertical. Read through the next situation to see why.

Example A

"Mad-cabs" have an unusual offer going on. They are charging \$7.50 for a taxi ride of any length within the city limits. Graph the function that relates the cost of hiring the taxi (y) to the length of the journey in miles (x).

Solution: No matter the mileage, your cab fare will be \$7.50. To see this visually, create a graph. You can also create a table to visualize the situation.

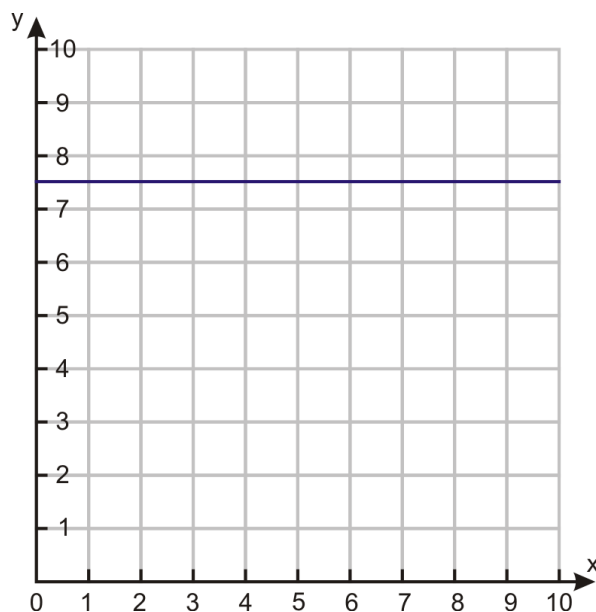


TABLE 4.7:

# of miles (x)	Cost (y)
0	7.50
10	7.50
15	7.50
25	7.50
60	7.50

Because the mileage can be anything, the equation should relate only to the restricted value, in this case, y . The equation that represents this situation is:

$$y = 7.50$$

Whenever there is an equation of the form $y = \text{constant}$, the graph is a horizontal line that intercepts the y -axis at the value of the constant.

Similarly, if there is an equation of the form $x = \text{constant}$, the graph is a vertical line that intercepts the x -axis at the value of the constant. Notice that this is a relation but not a function because each x value (there's only one in this case) corresponds to many (actually an infinite number of) y values.

Example B

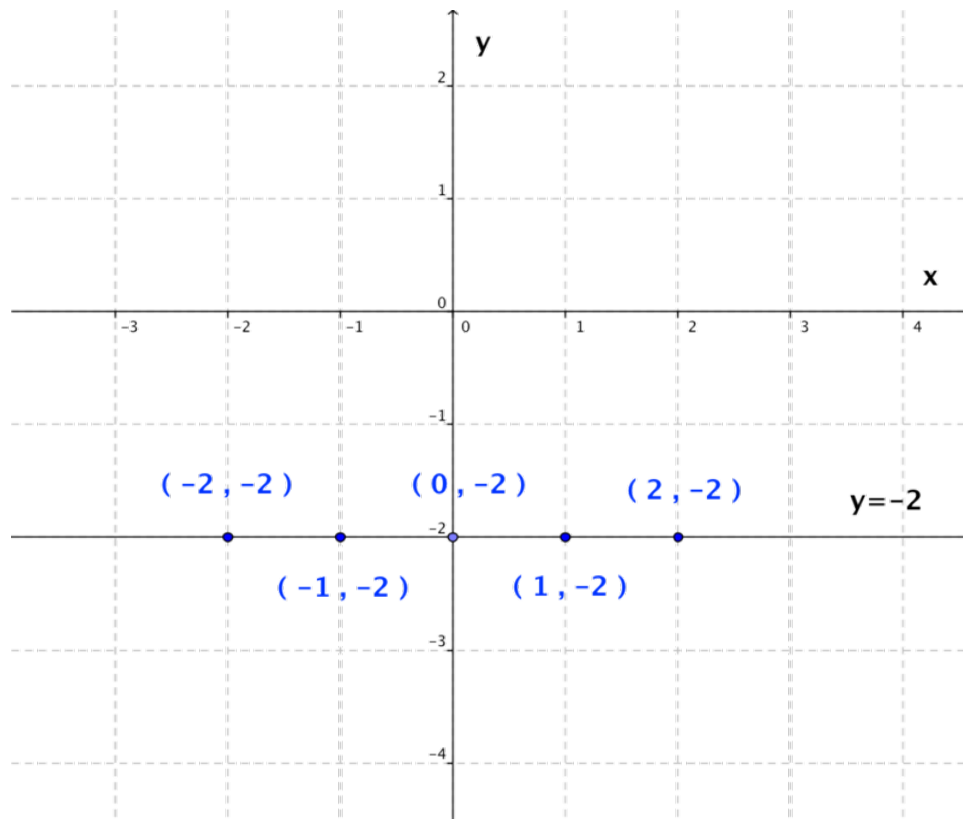
Graph $y = -2$ by making a table and plotting the points.

Solution:

Notice that there is no x in this equation. So, no matter what the value of x is, y will always be -2 . A table of points on this line will look like the following:

TABLE 4.8:

(x)	(y)
-2	-2
-1	-2
0	-2
1	-2
2	-2

**Example C**

Graph the following lines.

- (a) $y = 4$
- (b) $y = -4$
- (c) $x = 4$
- (d) $x = -4$

Solution:

- (a) $y = 4$ is a horizontal line that crosses the y -axis at 4.
- (b) $y = -4$ is a horizontal line that crosses the y -axis at -4 .
- (c) $x = 4$ is a vertical line that crosses the x -axis at 4.
- (d) $x = -4$ is a vertical line that crosses the x -axis at -4 .

Video Review**MEDIA**

Click image to the left for more content.

**MEDIA**

Click image to the left for more content.

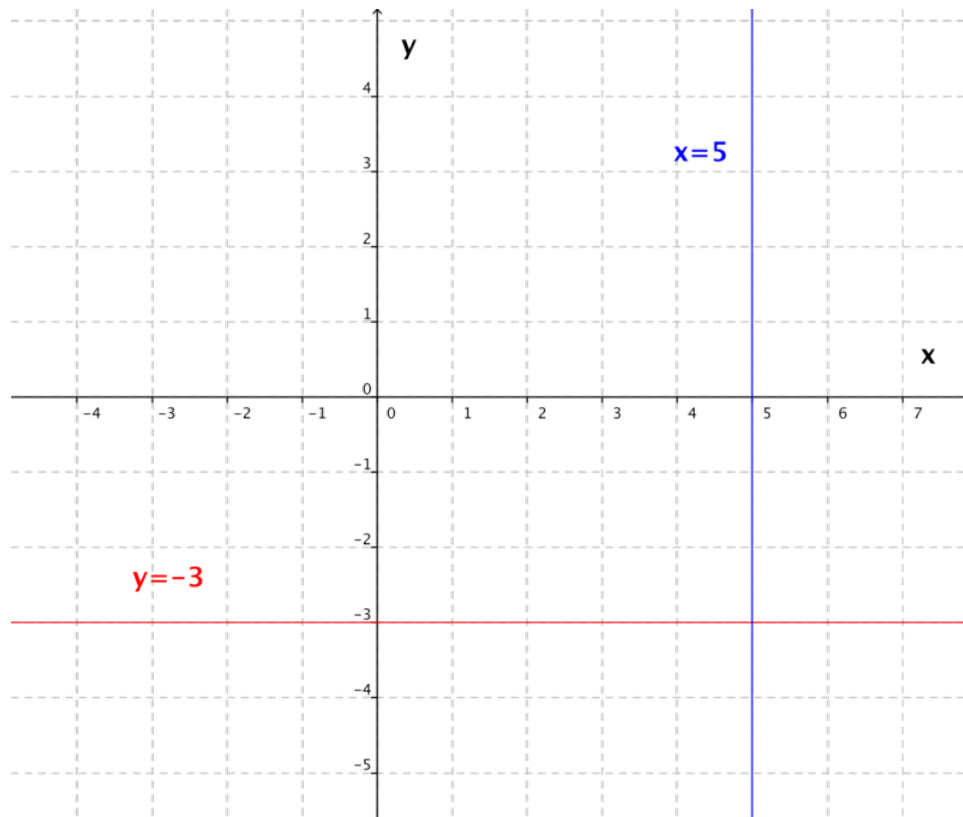
Guided Practice

Graph the following:

1. $y = -3$
2. $x = 5$

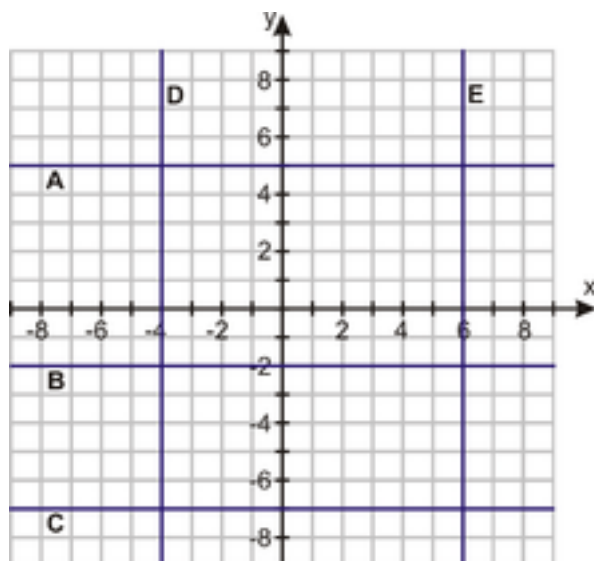
Solutions:

The graph of $y = -3$ is a horizontal line where y is always equal to 3 no matter what x is, and the graph of $x = 5$ is a vertical line where x is always equal to 5 no matter what y is:

**Practice**

1. What is the equation for the x -axis?
2. What is the equation for the y -axis?

Write the equations for the graphed lines pictured below.



3. E
4. B
5. C
6. A
7. D

8. Graph $x = -7$.
9. Graph $y = 100$.
10. Graph $y = 1/2$.

4.4 Applications of Linear Graphs

Here you'll learn how to solve real-world problems by using graphs.

Did you know that the United States uses miles to measure distances, while most of the rest of the world uses kilometers? Suppose you were an American visiting Asia, and you were using a graph to convert kilometers to miles to make distances easier to understand. Would you know how to convert a distance such as 10 kilometers? After completing this Concept, you'll be able use graphs to solve problems such as this one.

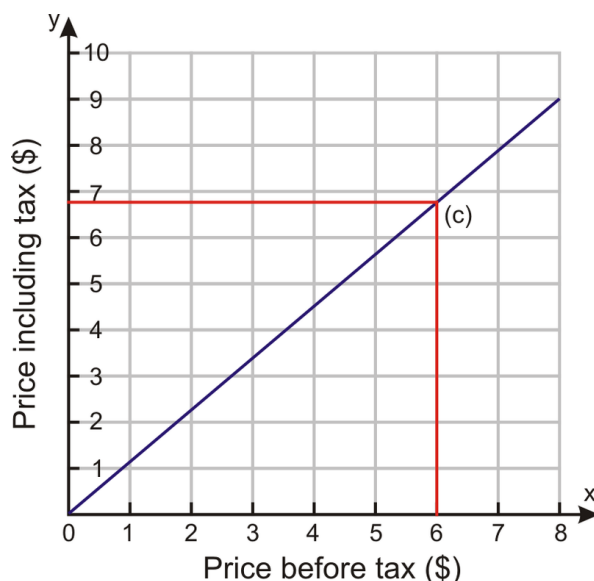
Guidance

Analyzing linear graphs is a part of life – whether you are trying to decide to buy stock, figure out if your blog readership is increasing, or predict the temperature from a weather report. Although linear graphs can be quite complex, such as a six-month stock graph, many are very basic to analyze.

Example A

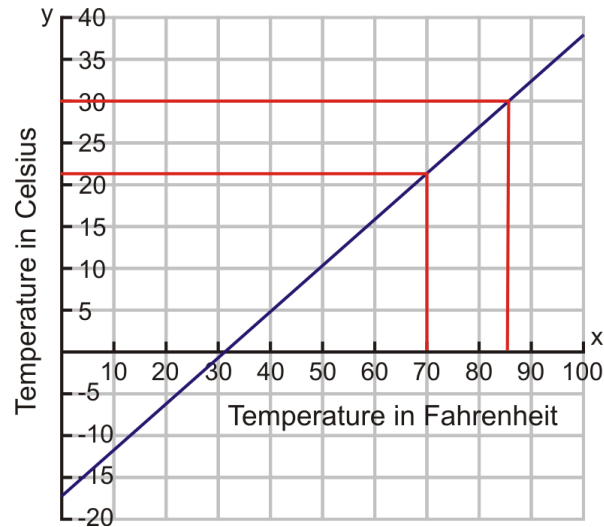
The graph below shows the solutions to the price before tax and the price after tax at a particular store. Determine the price after tax of a \$6.00 item.

By finding the appropriate x value (\$6.00), you can find the solution, which is the y value (approximately \$6.80). Therefore, the price after tax of a \$6.00 item is approximately \$6.80.



Example B

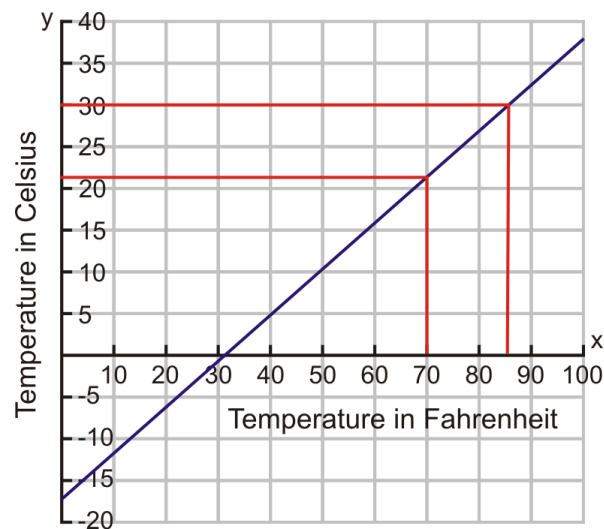
The following graph shows the linear relationship between Celsius and Fahrenheit temperatures. Using the graph, convert $70^{\circ}F$ to Celsius.



By finding the temperature of $70^{\circ}F$ and locating its appropriate Celsius value, you can determine that $70^{\circ}F \approx 22^{\circ}C$.

Example C

Use the same graph to convert 30 degrees Celsius to Fahrenheit.



By finding the temperature of $30^{\circ}C$ and locating its appropriate Fahrenheit value, you can determine that $30^{\circ}C \approx 85^{\circ}F$.

Video Review



MEDIA

Click image to the left for more content.

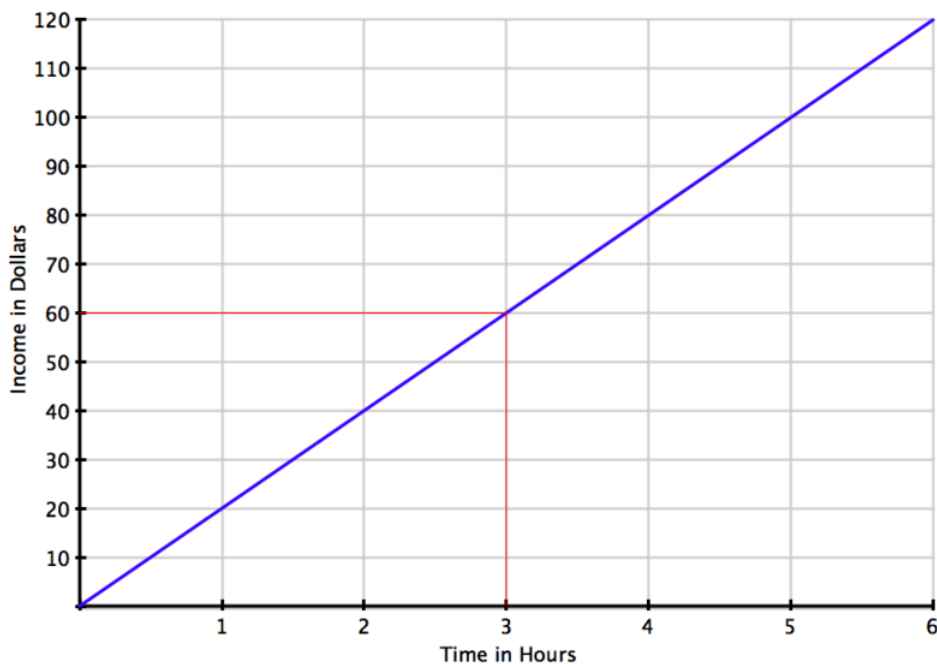


MEDIA

 Click image to the left for more content.

Guided Practice

Suppose a job pays \$20 per hour. A graph of income based on hours worked is shown below. Use the graph to determine how many hours are required to earn \$60.

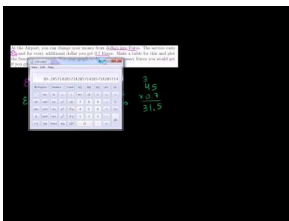


Solution:

By finding the amount of \$60 on the vertical axis, you can follow a horizontal line through the value, until it meets the graph. Follow a vertical line straight down from there, until it meets the horizontal axis. There, the value in hours is 3. This means that the number of hours of work needed to earn \$60 is 3 hours.

Practice

Sample explanations for some of the practice exercises below are available by viewing the following video. Note that there is not always a match between the number of the practice exercise in the video and the number of the practice exercise listed in the following exercise set. However, the practice exercise is the same in both. [CK-12 Basic Algebra: Graphs of Linear Equations](#) (13:09)

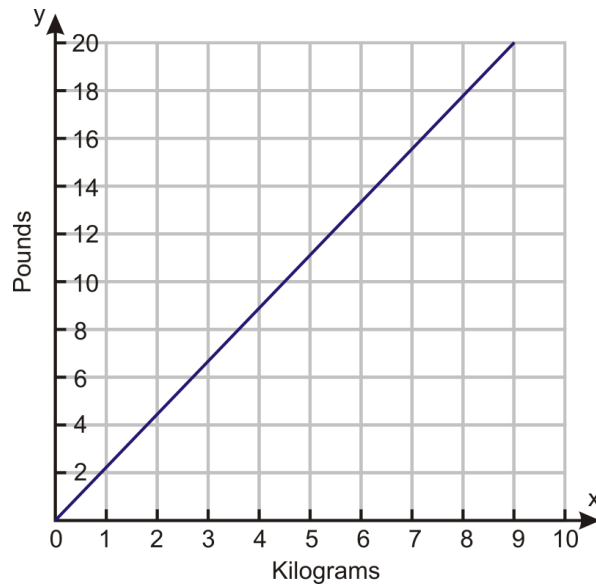


MEDIA

 Click image to the left for more content.

1. Using the tax graph from the Concept, determine the net cost of an item costing \$8.00 including tax.
2. Using the temperature graph from the Concept, determine the following:
 - a. The Fahrenheit temperature of $0^{\circ}C$
 - b. The Celsius temperature of $0^{\circ}F$
 - c. The Celsius equivalent to the boiling point of water ($212^{\circ}F$)
3. At the airport, you can change your money from dollars into Euros. The service costs \$5, and for every additional dollar you get 0.7 Euros. Make a table for this information and plot the function on a graph. Use your graph to determine how many Euros you would get if you give the exchange office \$50.

The graph below shows a conversion chart for converting between the weight in kilograms and the weight in pounds. Use it to convert the following measurements.



- 4.
5. 4 kilograms into weight in pounds
6. 9 kilograms into weight in pounds
7. 12 pounds into weight in kilograms
8. 17 pounds into weight in kilograms

Mixed Review

8. Find the percent of change: An item costing \$17 now costs \$19.50.
9. Give an example of an ordered pair located in Quadrant III.
10. Jodi has $\frac{1}{3}$ of a pie. Her little brother asks for half of her slice. How much pie does Jodi have?
11. Solve for b : $b + 16 = 3b - 2$.
12. What is 16% of 97?
13. Cheyenne earned a 73% on an 80-question exam. How many questions did she answer correctly?
14. List four math verbs.

4.5 Intercepts by Substitution

Here you'll learn how to use substitution to find the intercepts of a line so that you can graph a linear equation.

Suppose the number of gallons of gas left in the tank of a car depends on the number of miles driven and can be represented by a linear equation. You know how much gas is in the tank when 0 miles have been driven, and you also know after how many miles you will have 0 gallons left in the tank. Could you graph the linear equation? In this Concept, you'll learn how to graph equations in situations like this one, where you know the intercepts.

Guidance

As you may have seen in the previous Concept, graphing solutions to an equation of two variables can be time-consuming. Fortunately, there are several ways to make graphing solutions easier. This Concept will focus on graphing a line by finding its intercepts. A future Concept will show you how to graph a line using its slope and y -intercept.

In geometry, there is a postulate that states, "Two points determine a line." Therefore, to draw any line, all you need is two points. One way is to find its **intercepts**.

An **intercept** is the point at which a graphed equation crosses an axis.

The x -**intercept** is an ordered pair at which the line crosses the x -axis (the horizontal axis). Its ordered pair has the form $(x, 0)$.

The y -**intercept** is an ordered pair at which the line crosses the y -axis (the vertical axis). Its ordered pair has the form $(0, y)$.

By finding the intercepts of an equation, you can quickly graph all the possible solutions to the equation.

Finding Intercepts Using Substitution

Remember that the Substitution Property allows the replacement of a variable with a numerical value or another expression. You can use this property to help find the intercepts of an equation.

Example A

Graph $2x + 3y = -6$ using its intercepts.

Solution: The x -intercept has the ordered pair $(x, 0)$. Therefore, the y -coordinate has a value of zero. By substituting zero for the variable of y , the equation becomes:

$$2x + 3(0) = -6$$

Continue solving for x :

$$2x + 0 = -6$$

$$2x = -6$$

$$x = -3$$

The x -intercept has an ordered pair of $(-3, 0)$.

Repeat the process to find the y -intercept. The ordered pair of the y -intercept is $(0, y)$. Using substitution:

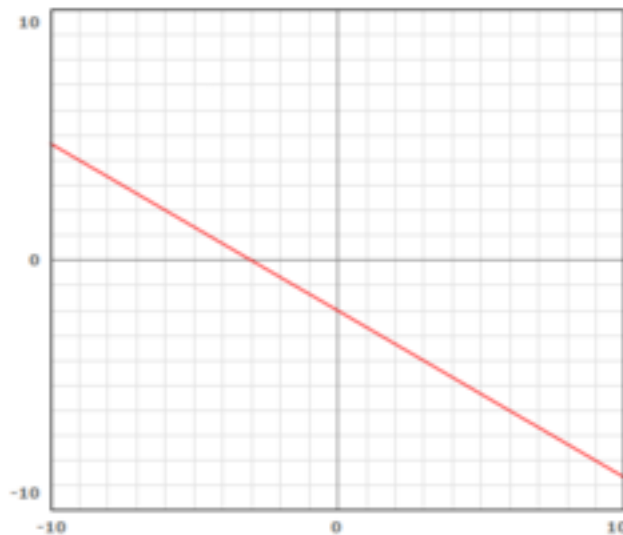
$$2(0) + 3y = -6$$

$$3y = -6$$

$$y = -2$$

The y -intercept has the ordered pair $(0, -2)$.

To graph the line formed by the solutions of the equation $2x + 3y = -6$, graph the two intercepts and connect them with a straight line.



Example B

Graph $4x - 2y = 8$ using its intercepts.

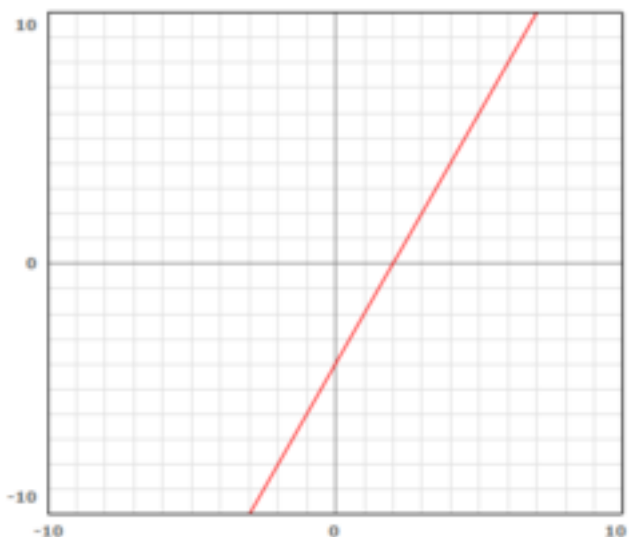
Solution: Determine the x -intercept by substituting zero for the variable y .

$$4x - 2(0) = 8$$

$$4x = 8$$

$$x = 2$$

The ordered pair of the x -intercept is $(2, 0)$. By repeating this process, you'll find the y -intercept has the ordered pair $(0, -4)$. Graph these two ordered pairs and connect them with a line.

**Example C**

Graph $x - 2y = 10$ using intercepts.

Solution:

First, find the intercepts by substituting in zero for x and y :

Substitute in zero for x .

Simplify.

Solve for y .

$$(0) - 2y = 10$$

$$-2y = 10$$

$$y = -5$$

This means that the y -intercept is at the point $(0, -5)$.

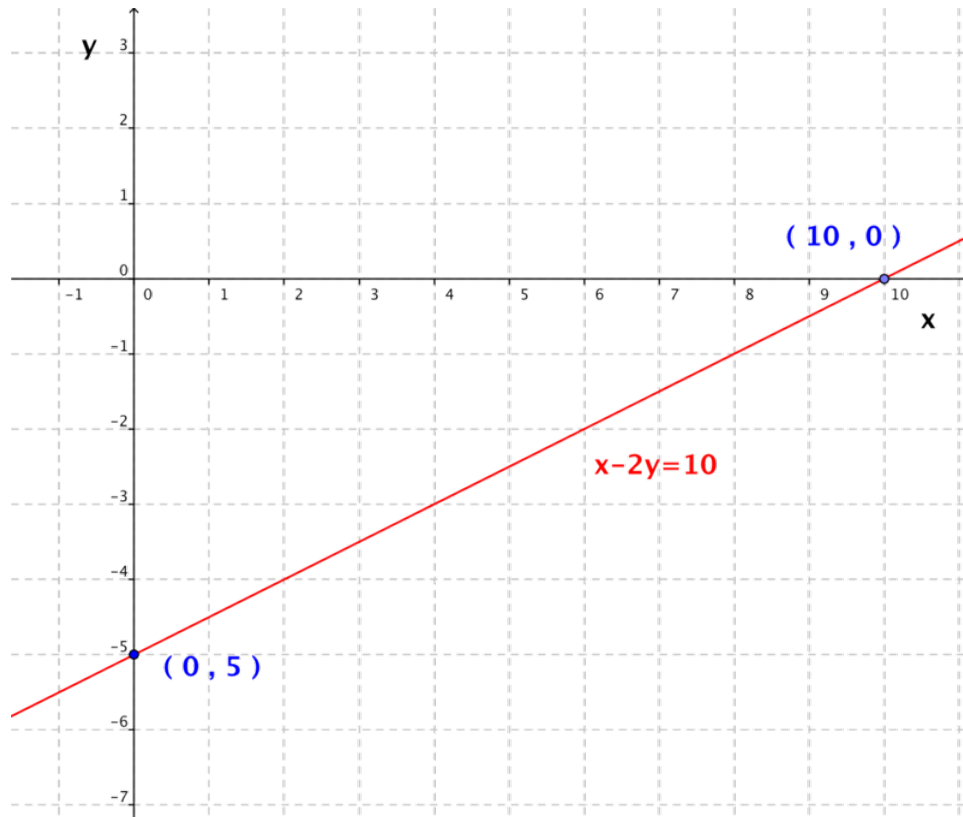
Substitute in zero for y .

Solve for x .

$$x - 6(0) = 10$$

$$x = 10$$

This means that the x -intercept is at the point $(10, 0)$.



Video Review



MEDIA

Click image to the left for more content.



MEDIA

Click image to the left for more content.

Guided Practice

Find the intercepts and use them to graph $y = -2x + 8$.

Solution:

Substitute in zero for x and y , in order to find the intercepts.

Substitute in zero for x .

Solve for y .

$$y = -2(0) + 8$$

$$y = 8$$

This means that the y -intercept is at the point $(0,8)$.

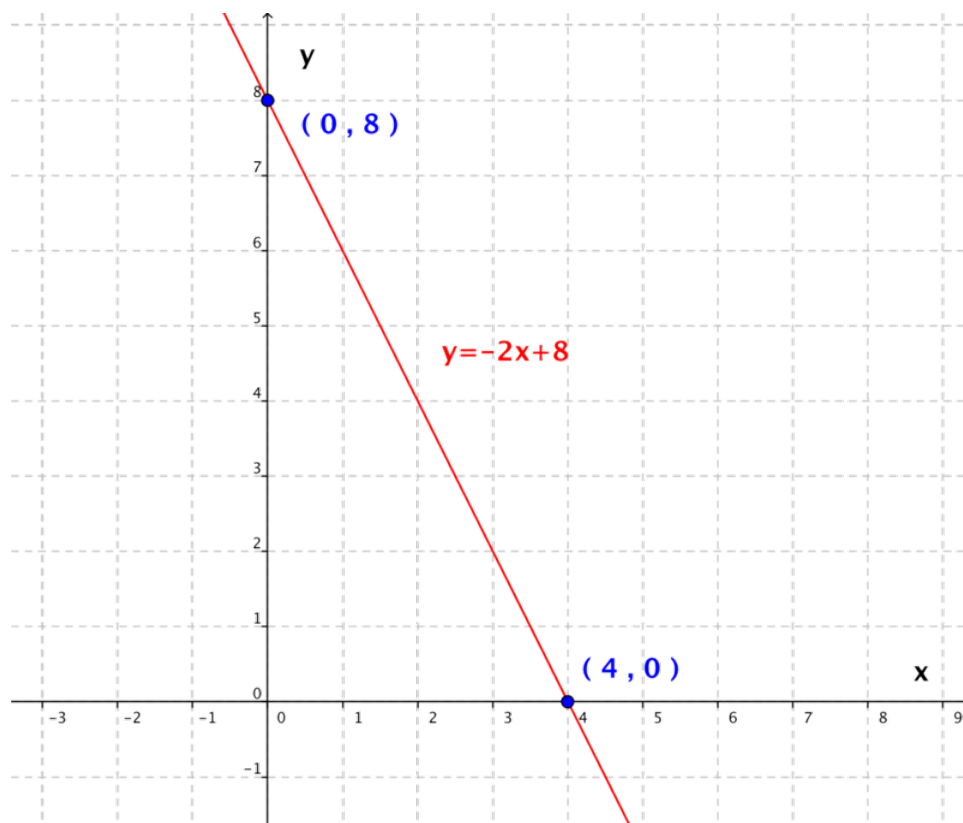
Substitute in zero for y .

Solve for x .

$$0 = -2x + 8$$

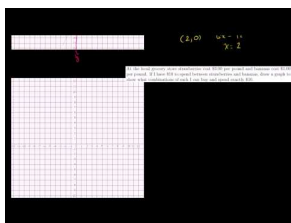
$$x = 4$$

This means that the x -intercept is at the point $(4,0)$.



Practice

Sample explanations for some of the practice exercises below are available by viewing the following video. Note that there is not always a match between the number of the practice exercise in the video and the number of the practice exercise listed in the following exercise set. However, the practice exercise is the same in both. [CK-12 Basic Algebra: Graphing Using Intercepts](#) (12:18)



MEDIA

Click image to the left for more content.

1. Define *intercept*.
2. What is the ordered pair for an x -intercept?

Find the intercepts for the following equations using substitution.

3. $y = 3x - 6$
4. $y = -2x + 4$
5. $y = 14x - 21$
6. $y = 7 - 3x$

7. Which intercept does a vertical line have?
8. Does the equation $y = 5$ have both an x -intercept and a y -intercept? Explain your answer.
9. Write an equation having only an x -intercept at $(-4, 0)$.
10. How many equations can be made with only one intercept at $(0, 0)$? Hint: Draw a picture to help you.

Mixed Review

For 11-12, Determine whether each ordered pair is a solution to the equation.

11. $5x + 2y = 23$; $(7, -6)$ and $(3, 4)$
12. $3a - 2b = 6$; $(0, 3)$ and $(\frac{5}{3}, \frac{-1}{2})$.
13. Graph the solutions to the equation $x = -5$.
14. Solve: $\frac{4}{5}k - 16 = -\frac{1}{4}$.
15. Is the following relation a function? $\{(-1, 1), (0, 0), (1, 1), (2, 3), (0, 6)\}$
16. Using either a finite set of counting numbers, whole numbers, or integers, how would you describe the domain of the following situation: *The number of donuts purchased at a coffee shop on a particular day?*
17. Find the percent of change: *Old price = \$1,299; new price = \$1,145.*

4.6 Intercepts and the Cover-Up Method

Here you'll learn how to use the Cover-Up Method to determine the x -intercept and the y -intercept of a graph.

Suppose you had a cat, and you gave him 1 treat per day. What if you wanted to graph the number of treats left in his treat jar as a function of the number of days that have passed? You could do it if you knew the intercepts, but how would you find them? One way would be to use the Cover-Up Method. In this Concept, you'll learn all about the Cover-Up method so that you can create graphs such as this.

Guidance

In the last Concept, you saw how to find intercepts by substituting the value of zero in for one of the variables.

To find the x -**intercept**, substitute zero for the y -**value**.

To find the y -**intercept**, substitute zero for the x -**value**.

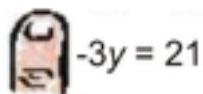
This method works for any form of linear equations.

A second method of finding the intercepts is called the Cover-Up Method. Using the Multiplication Property of Zero $a(0) = 0$, you can “cover-up” the other variable and solve for the intercept you wish to find. This method only works for linear equations that are in the form $ax + by = c$. We will see how to use the Cover-Up Method on equations in this form below.

Example A

Graph $-7x - 3y = 21$ using its intercepts.

Solution: To solve for the y -intercept we set $x = 0$ and cover up the x term:



$$\text{Cover up } -7x \text{ term: } -3y = 21$$

$$-3y = 21$$

$$y = -7$$

$(0, -7)$ is the y -intercept.

To solve for the x -intercept, cover up the y -variable and solve for x :



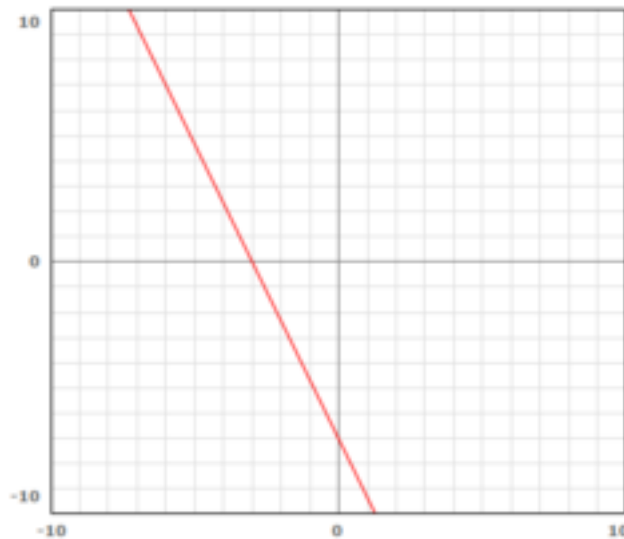
$$\text{Cover up } -3y \text{ term: } -7x = 21$$

$$-7x = 21$$

$$x = -3$$

$(-3, 0)$ is the x -intercept.

Now graph by first plotting the intercepts and then drawing a line through these points.

**Example B**

Jose has \$30 to spend on food for a class barbecue. Hot dogs cost \$0.75 each (including the bun) and burgers cost \$1.25 (including bun and salad). Plot a graph that shows all the combinations of hot dogs and burgers he could buy for the barbecue, spending exactly \$30.

Solution: Begin by translating this sentence into an algebraic equation. Let $y =$ the number of hot dogs and $x =$ the number of burgers.

$$1.25(x) + 0.75(y) = 30$$

Find the intercepts of the graph. This example will use the Cover-Up Method. Feel free to use substitution if you prefer.

$$\text{Cover up } x \text{ with a finger} \quad 0.75y = 30$$

$$0.75y = 30$$

$$y = 40$$

y – intercept $(0, 40)$

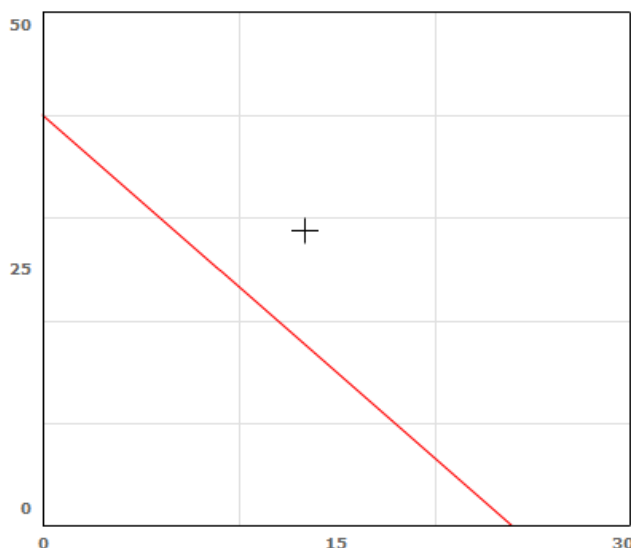
$$1.25x + \text{Cover up } y \text{ with a finger} = 30$$

$$1.25x = 30$$

$$x = 24$$

x – intercept $(24, 0)$

By graphing Jose's situation, you can determine the combinations of hot dogs and burgers he can purchase for exactly \$30.00.



Understanding the Cover-Up Method

The cover-up method simply removes one variable at a time, in order to solve for the other variable. The solutions are then the intercepts, since removing a variable, or "covering up" a variable, is the same thing as setting it equal to zero. Try out this concept in the example below:

Example C

Graph $y + \frac{3}{2}x = -3$ using the Cover-Up Method.

Solution:

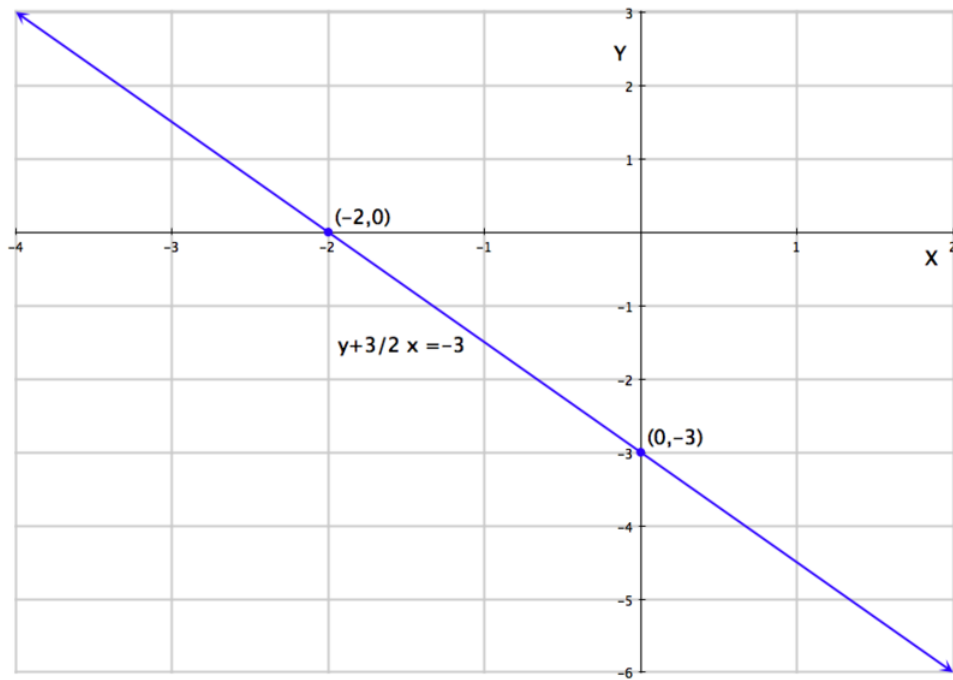
First start by "covering up" y . This results in:

When $y = 0$, $x = -2$. This is the x -intercept.

Now, "cover-up" x :

When $x = 0$, $y = -3$. This is the y -intercept.

Now graph the equation by plotting the two intercepts and connecting them with a line.



Video Review



MEDIA

Click image to the left for more content.



MEDIA

Click image to the left for more content.

Guided Practice

Graph $4y - 3x = 12$ using the cover-up method.

Solution:

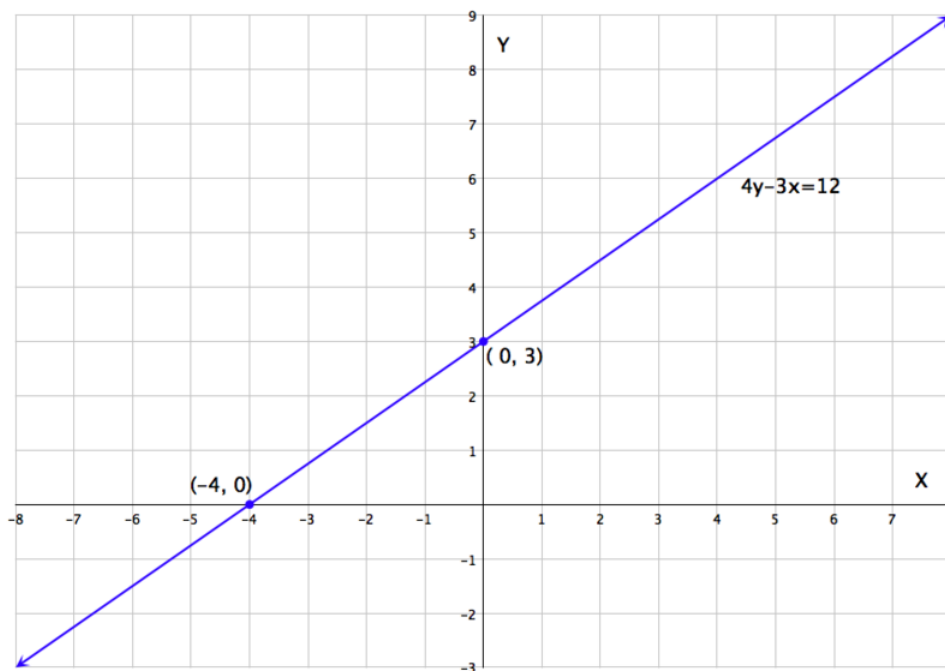
First start by "covering up" y . This results in:

When $y = 0$, $x = -4$. This is the x -intercept.

Now, "cover-up" x :

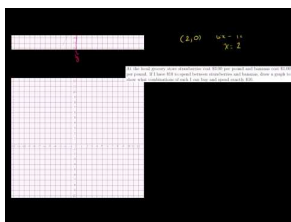
When $x = 0$, $y = 3$. This is the y -intercept.

Now graph the equation by plotting the two intercepts and connecting them with a line.



Practice

Sample explanations for some of the practice exercises below are available by viewing the following video. Note that there is not always a match between the number of the practice exercise in the video and the number of the practice exercise listed in the following exercise set. However, the practice exercise is the same in both. [CK-12 Basic Algebra: Graphing Using Intercepts \(12:18\)](#)



MEDIA

Click image to the left for more content.

1. Explain the process of the Cover-Up Method.
2. Do you prefer the Substitution Method or the Cover-Up Method? Why?

Find the intercepts of the following equations using the Cover-Up Method.

3. $5x - 6y = 15$
4. $3x - 4y = -5$
5. $2x + 7y = -11$
6. $5x + 10y = 25$

In 7 – 18, use any method to find the intercepts and then graph the equation.

7. $y = 2x + 3$
8. $6(x - 1) = 2(y + 3)$
9. $x - y = 5$
10. $x + y = 8$
11. $4x + 9y = 0$
12. $\frac{1}{2}x + 4y = 12$
13. $x - 2y = 4$
14. $7x - 5y = 10$
15. $4x - y = -3$
16. $x - y = 0$
17. $5x + y = 5$
18. $7x - 2y = -6$
19. What needs to be done to the following equation **before** you can use either method to find its intercepts?
 $3(x + 2) = 2(y + 3)$
20. At the local grocery store, strawberries cost \$3.00 per pound and bananas cost \$1.00 per pound. If I have \$10 to spend between strawberries and bananas, draw a graph to show what combinations of each I can buy and spend exactly \$10.
21. A movie theater charges \$7.50 for adult tickets and \$4.50 for children. If the \$900 theater takes in ticket sales for a particular screening, draw a graph that depicts the possibilities for the number of adult tickets and the number of child tickets sold.
22. In football, touchdowns are worth 6 points, field goals are worth 3 points, and safeties are worth 2 points. Suppose there were no safeties and the team scored 36 points. Graph the situation to determine the combinations of field goals and touchdowns the team could have had.

4.7 Slope

Here you'll learn how to analyze vertical change and horizontal change so that you can calculate the slope of a line.

Suppose you have a toy airplane, and upon takeoff, it rises 5 feet for every 6 feet that it travels along the horizontal. What would be the slope of its ascent? Would it be a positive value or a negative value? In this Concept, you'll learn how to determine the slope of a line by analyzing vertical change and horizontal change so that you can handle problems such as this one.

Guidance

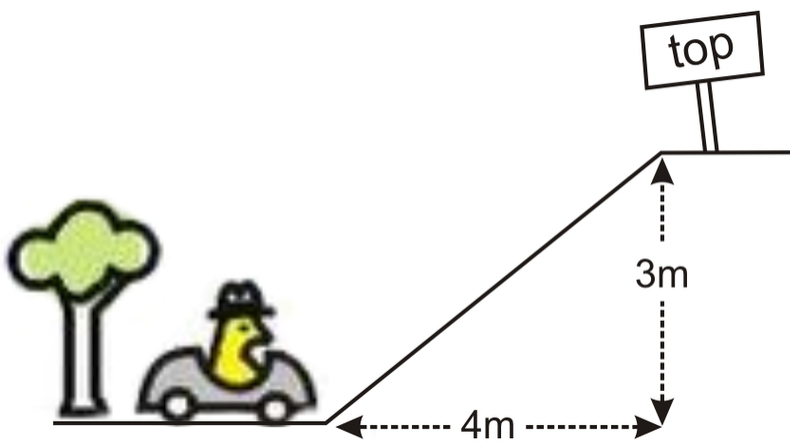
The pitch of a roof, the slant of a ladder against a wall, the incline of a road, and even your treadmill incline are all examples of slope.

The **slope** of a line measures its steepness (either negative or positive).

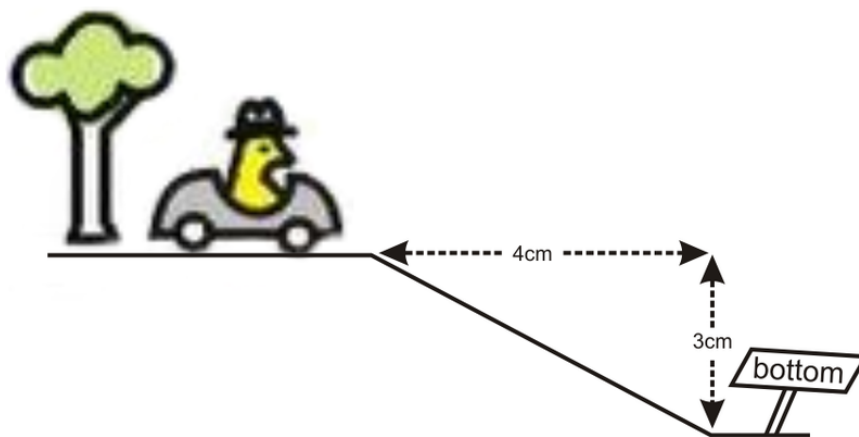
For example, if you have ever driven through a mountain range, you may have seen a sign stating, "10% incline." The percent tells you how steep the incline is. You have probably seen this on a treadmill too. The incline on a treadmill measures how steep you are walking uphill. Below is a more formal definition of slope.

The **slope** of a line is the vertical change divided by the horizontal change.

In the figure below, a car is beginning to climb up a hill. The height of the hill is 3 meters and the length of the hill is 4 meters. Using the definition above, the slope of this hill can be written as $\frac{3 \text{ meters}}{4 \text{ meters}} = \frac{3}{4}$. Because $\frac{3}{4} = 75\%$, we can say this hill has a 75% positive slope.



Similarly, if the car begins to descend *down* a hill, you can still determine the slope.



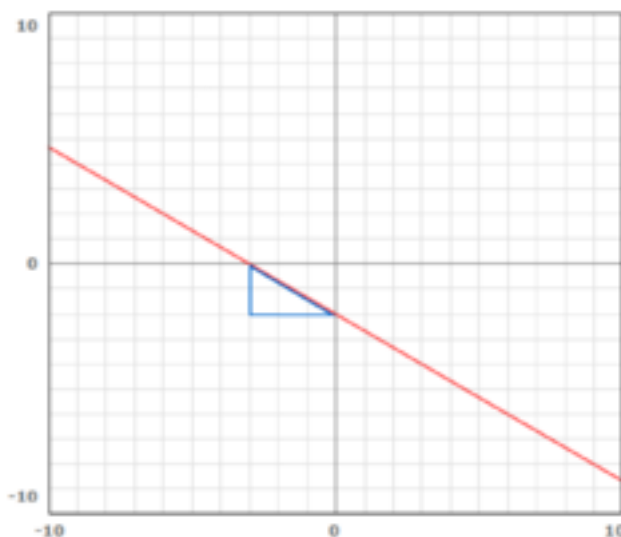
$$\text{Slope} = \frac{\text{vertical change}}{\text{horizontal change}} = \frac{-3}{4}$$

The slope in this instance is negative because the car is traveling downhill.

Another way to think of slope is: $\text{slope} = \frac{\text{rise}}{\text{run}}$.

When graphing an equation, slope is a very powerful tool. It provides the directions on how to get from one ordered pair to another. To determine slope, it is helpful to draw a **slope-triangle**.

Using the following graph, choose two ordered pairs that have integer values such as $(-3, 0)$ and $(0, -2)$. Now draw in the slope triangle by connecting these two points as shown.



The vertical leg of the triangle represents the *rise* of the line and the horizontal leg of the triangle represents the *run* of the line. A third way to represent slope is:

$$\text{slope} = \frac{\text{rise}}{\text{run}}$$

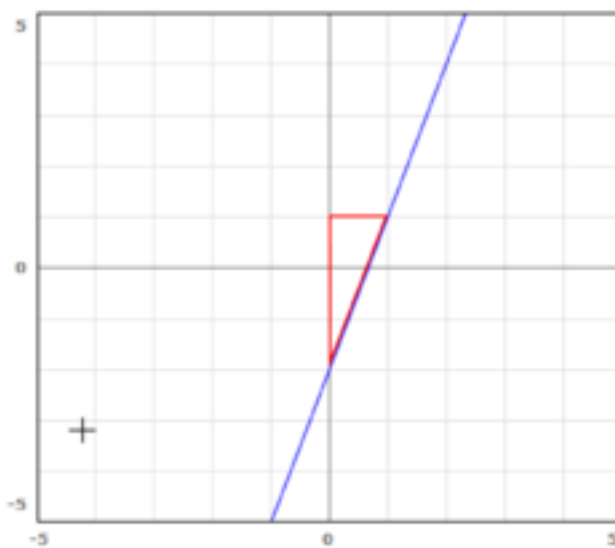
Starting at the left-most coordinate, count the number of vertical units and horizontal units it took to get to the right-most coordinate.

$$\text{slope} = \frac{\text{rise}}{\text{run}} = \frac{-2}{+3} = -\frac{2}{3}$$

Example A

Find the slope of the line graphed below.

Solution: Begin by finding two pairs of ordered pairs with integer values: (1, 1) and (0, -2).



Draw in the slope triangle.

Count the number of vertical units to get from the left ordered pair to the right.

Count the number of horizontal units to get from the left ordered pair to the right.

$$\text{Slope} = \frac{\text{rise}}{\text{run}} = \frac{+3}{+1} = \frac{3}{1}$$

A more algebraic way to determine a slope is by using a formula. The formula for slope is:

The slope between any two points (x_1, y_1) and (x_2, y_2) is: $\text{slope} = \frac{y_2 - y_1}{x_2 - x_1}$.

(x_1, y_1) represents one of the two ordered pairs and (x_2, y_2) represents the other. The following example helps show this formula.

Example B

Using the slope formula, determine the slope of the equation graphed in Example A.

Solution: Use the integer ordered pairs used to form the slope triangle: (1, 1) and (0, -2). Since (1, 1) is written first, it can be called (x_1, y_1) . That means $(0, -2) = (x_2, y_2)$

Use the formula: $\text{slope} = \frac{y_2 - y_1}{x_2 - x_1} = \frac{-2 - 1}{0 - 1} = \frac{-3}{-1} = \frac{3}{1}$

As you can see, the slope is the same regardless of the method you use. If the ordered pairs are fractional or spaced very far apart, it is easier to use the formula than to draw a slope triangle.

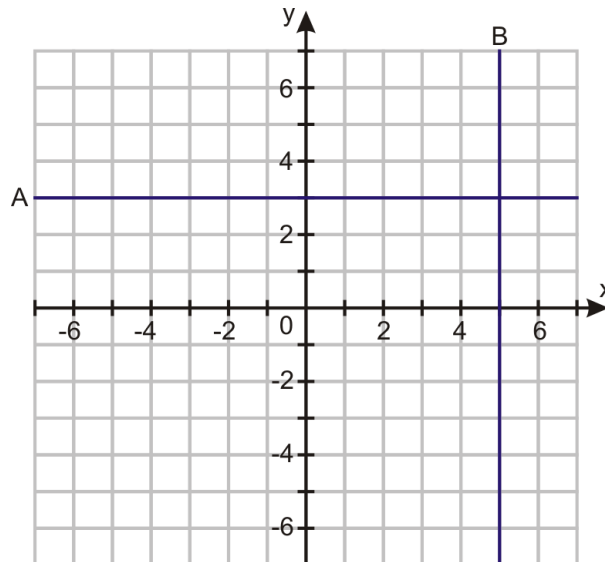
Types of Slopes

Slopes come in four different types: negative, zero, positive, and undefined. The first graph of this Concept had a negative slope. The second graph had a positive slope. Slopes with zero slopes are lines without any steepness, and undefined slopes cannot be computed.

Any line with a slope of zero will be a **horizontal** line with equation $y = \text{some number}$.

Any line with an undefined slope will be a **vertical** line with equation $x = \text{some number}$.

We will use the next two graphs to illustrate the previous definitions.



Example C

To determine the slope of *line A*, you need to find two ordered pairs with integer values.

$(-4, 3)$ and $(1, 3)$. Choose one ordered pair to represent (x_1, y_1) and the other to represent (x_2, y_2) .

Now apply the formula: $\text{slope} = \frac{y_2 - y_1}{x_2 - x_1} = \frac{3 - 3}{1 - (-4)} = \frac{0}{1 + 4} = 0$.

To determine the slope of *line B*, you need to find two ordered pairs on this line with integer values and apply the formula.

$(5, 1)$ and $(5, -6)$

$$\text{slope} = \frac{y_2 - y_1}{x_2 - x_1} = \frac{-6 - 1}{5 - 5} = \frac{-7}{0} = \text{Undefined}$$

It is impossible to divide by zero, so the slope of *line B* cannot be determined and is called **undefined**.

Video Review

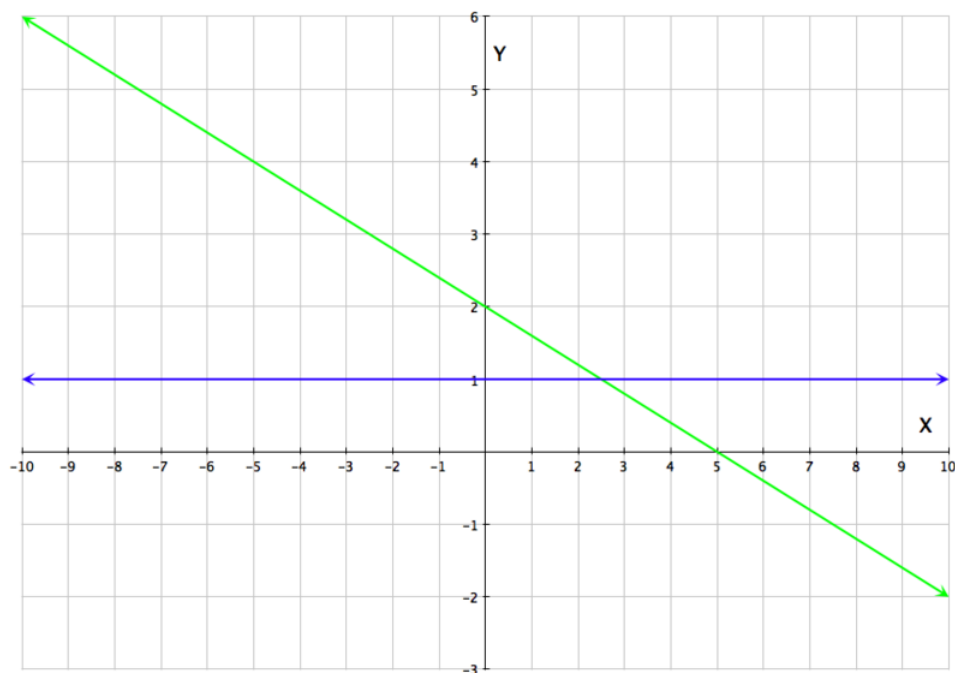


MEDIA

Click image to the left for more content.

**MEDIA**

Click image to the left for more content.

Guided Practice*Find the slope of each line in the graph below:***Solution:**

For each line, identify two coordinate pairs on the line and use them to calculate the slope.

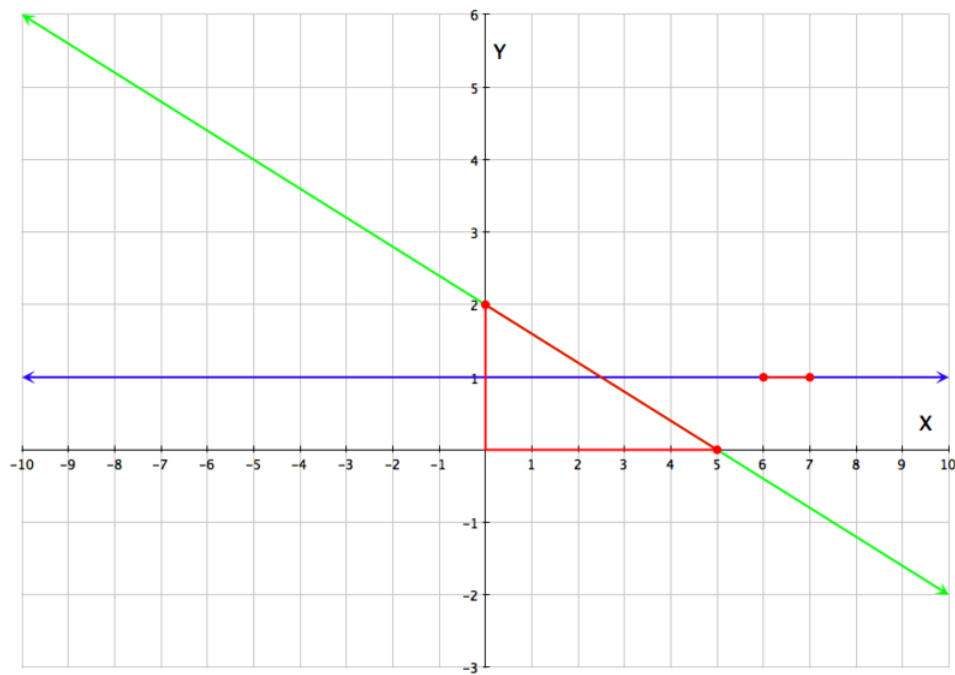
For the green line, one choice is (0, 2) and (5, 0). This results in a slope of:

$$\text{slope} = \frac{0-2}{5-0} = -\frac{2}{5}$$

For the blue line, one choice is (6, 1) and (7, 1). This results in a slope of:

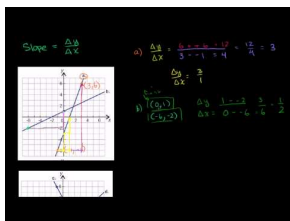
$$\text{slope} = \frac{1-1}{7-6} = \frac{0}{1} = 0$$

The slopes can be seen in this graph:



Practice

Sample explanations for some of the practice exercises below are available by viewing the following video. Note that there is not always a match between the number of the practice exercise in the video and the number of the practice exercise listed in the following exercise set. However, the practice exercise is the same in both. [CK-12 Basic Algebra:Slope and Rate of Change \(13:42\)](#)

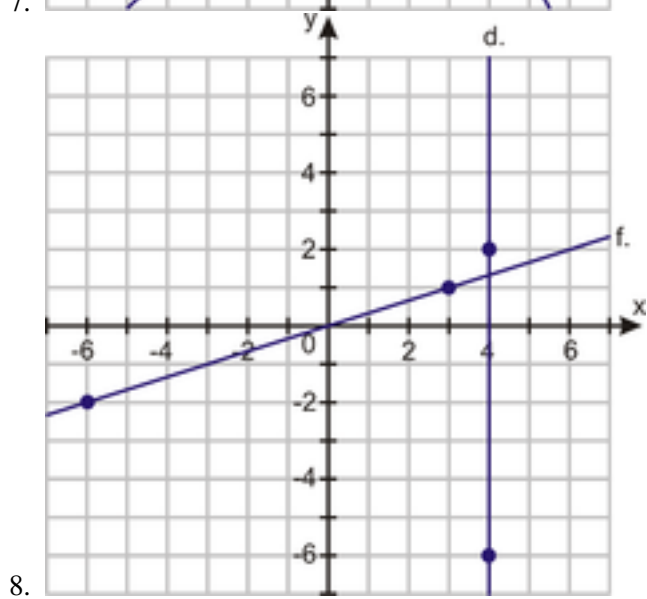
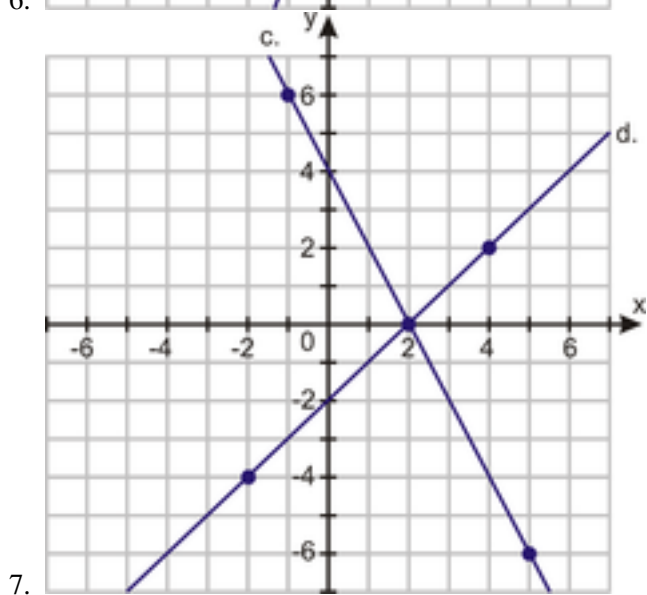
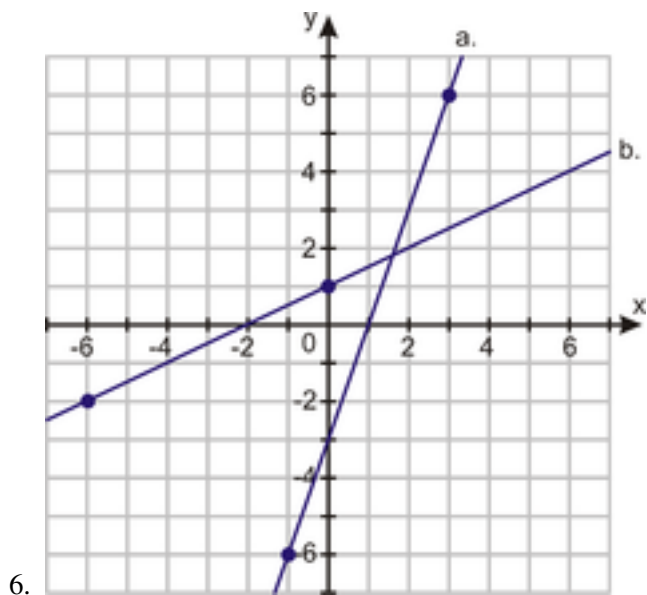


MEDIA

Click image to the left for more content.

1. Define *slope*.
2. Describe the two methods used to find slope. Which one do you prefer and why?
3. What is the slope of all vertical lines? Why is this true?
4. What is the slope of all horizontal lines? Why is this true?

Using the graphed coordinates, find the slope of each line.



In 9 – 21, find the slope between the two given points.

9. $(-5, 7)$ and $(0, 0)$
10. $(-3, -5)$ and $(3, 11)$
11. $(3, -5)$ and $(-2, 9)$
12. $(-5, 7)$ and $(-5, 11)$
13. $(9, 9)$ and $(-9, -9)$
14. $(3, 5)$ and $(-2, 7)$
15. $(\frac{1}{2}, \frac{3}{4})$ and $(-2, 6)$
16. $(-2, 3)$ and $(4, 8)$
17. $(-17, 11)$ and $(4, 11)$
18. $(31, 2)$ and $(31, -19)$
19. $(0, -3)$ and $(3, -1)$
20. $(2, 7)$ and $(7, 2)$
21. $(0, 0)$ and $(\frac{2}{3}, \frac{1}{4})$
22. Determine the slope of $y = 16$.
23. Determine the slope of $x = -99$.

4.8 Rates of Change

Here you'll learn the meaning of rate of change, how to calculate it, and how to make predictions about the future based on it.

What if 1 week after a gym opened, it had 20 members, 2 weeks after it opened, it had 40 members, and 3 weeks after it opened, it had 60 members? How would you calculate the rate of change in the number of gym members? How is this different than the slope? If this rate continues, how long will it take for the gym to have 300 members? In this Concept, you'll learn the meaning of rate of change and how to calculate it. You'll also learn how to make predictions about the future based on a rate of change so that you can answer questions about real-world scenarios such as the gym.

Try This

Multimedia Link: For more information regarding rates of change, visit NCTM's website for an interactive – <http://standards.nctm.org/document/eexamples/chap6/6.2/part2.htm> – rate of change activity.

Guidance

Finding the Rate of Change

When finding the slope of real-world situations, it is often referred to as **rate of change**. “Rate of change” means the same as “slope.” If you are asked to find the rate of change, use the slope formula or make a slope triangle.

Example A

Andrea has a part-time job at the local grocery store. She saves for her vacation at a rate of \$15 every week. Find her rate of change.

Solution: Begin by finding two ordered pairs. You can make a chart or use the Substitution Property to find two coordinates.

Sample: (2, 30) and (10, 150). Since (2, 30) is written first, it can be called (x_1, y_1) . That means $(10, 150) = (x_2, y_2)$.

Use the formula: $slope = \frac{y_2 - y_1}{x_2 - x_1} = \frac{150 - 30}{10 - 2} = \frac{120}{8} = \frac{15}{1}$.

Andrea's rate of change is \$15/1 week.

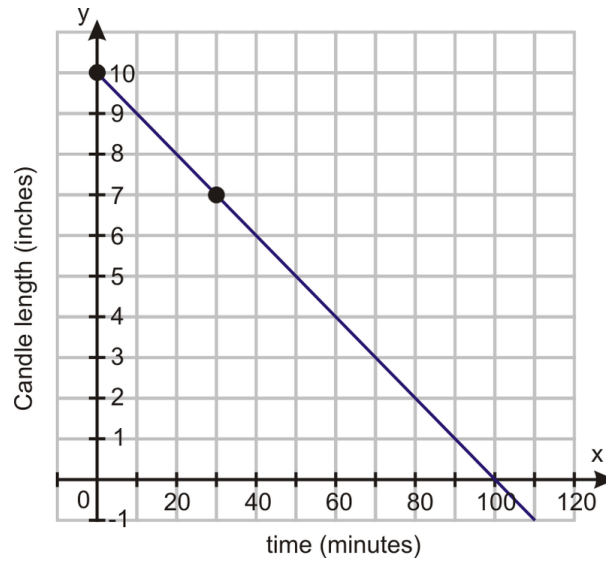
Example B

A candle has a starting length of 10 inches. Thirty minutes after lighting it, the length is 7 inches. Determine the rate of change in the length of the candle as it burns. Determine how long the candle takes to completely burn to nothing.

Solution: Begin by finding two ordered pairs. The candle begins at 10 inches in length. So at time “zero”, the length is 10 inches. The ordered pair representing this is (0, 10). 30 minutes later, the candle is 7 inches, so the ordered pair is (30, 7). Since (0, 10) is written first, it can be called (x_1, y_1) . That means $(30, 7) = (x_2, y_2)$.

Use the formula: $slope = \frac{y_2 - y_1}{x_2 - x_1} = \frac{7 - 10}{30 - 0} = \frac{-3}{30} = -\frac{1}{10}$.

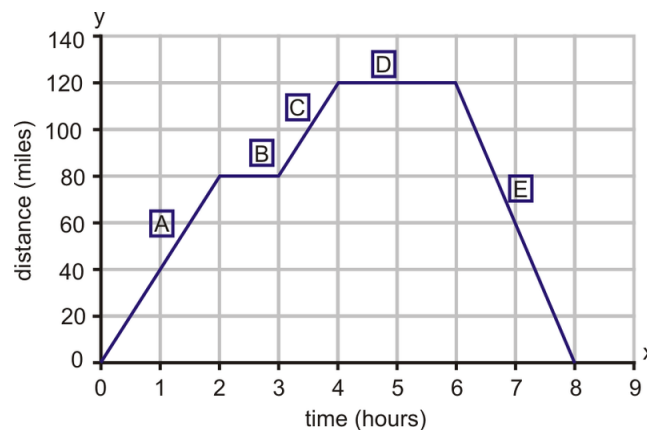
The candle has a rate of change of -1 inch/10 minutes. To find the length of time it will take for the candle to burn out, you can create a graph, use guess and check, or solve an equation.



You can create a graph to help visualize the situation. By plotting the ordered pairs you were given and by drawing a straight line connecting them, you can estimate it will take 100 minutes for the candle to burn out.

Example C

Examine the following graph. It represents a journey made by a large delivery truck on a particular day. During the day, the truck made two deliveries, each one taking one hour. The driver also took a one-hour break for lunch. Identify what is happening at each stage of the journey (stages A through E).



Truck's Distance from Home by Time

Here is the driver's journey.

- A. The truck sets off and travels 80 miles in 2 hours.
- B. The truck covers no distance for 1 hour.
- C. The truck covers $(120 - 80) = 40$ miles in 1 hour.
- D. The truck covers no distance for 2 hours.

E. The truck covers 120 miles in 2 hours.

Solution: To identify what is happening at each leg of the driver's journey, you are being asked to find each rate of change.

The rate of change for *line segment A* can be found using either the formula or the slope triangle. Using the slope triangle, *vertical change* = 80 and the *horizontal change* = 2.

$$\text{slope} = \frac{\text{rise}}{\text{run}} = \frac{80 \text{ miles}}{2 \text{ hours}} = 40 \text{ miles/1 hour.}$$

Segments *B* and *D* are horizontal lines and each has a slope of zero.

The rate of change for *line segment C* using the slope formula: Rate of change = $\frac{\Delta y}{\Delta x} = \frac{(120-80) \text{ miles}}{(4-3) \text{ hours}} = 40$ miles per hour.

The rate of change for *line segment E* using the slope formula: Rate of change = $\frac{\Delta y}{\Delta x} = \frac{(0-120) \text{ miles}}{(8-6) \text{ hours}} = \frac{-120 \text{ miles}}{2 \text{ hours}} = -60$ miles per hour. The truck is traveling at **negative** 60 mph. A better way to say this is that the truck is **returning home at a rate of 60 mph**.

Video Review



MEDIA

Click image to the left for more content.



MEDIA

Click image to the left for more content.

Guided Practice

Adel spent \$125 on groceries in one week. Use this to predict how much Adel will spend on groceries, if she keeps buying them at the same rate, after about a month.

Solution:

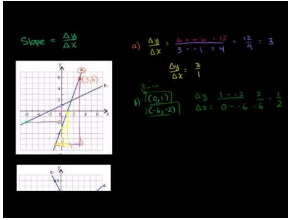
Adel's weekly rate is \$125 per week. Since a month is about 4 weeks, multiply \$125/week times 4 weeks:

$$\frac{\$125}{1 \text{ week}} \cdot 4 \text{ weeks} = \frac{\$125}{\cancel{1 \text{ week}}} \cdot \cancel{4 \text{ weeks}} = \$125 \cdot 4 = \$500$$

Adel will spend about \$500 on groceries in about four weeks or a month.

Practice

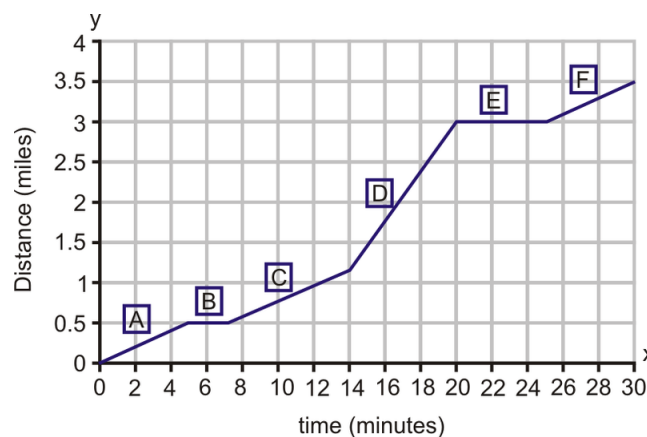
Sample explanations for some of the practice exercises below are available by viewing the following video. Note that there is not always a match between the number of the practice exercise in the video and the number of the practice exercise listed in the following exercise set. However, the practice exercise is the same in both. [CK-12 Basic Algebra:Slope and Rate of Change \(13:42\)](#)



MEDIA

Click image to the left for more content.

- How is slope related to rate of change? In what ways is it different?
- The graph below is a distance-time graph for Mark's 3.5-mile cycle ride to school. During this particular ride, he rode on cycle paths but the terrain was hilly. His speed varied depending upon the steepness of the hills. He stopped once at a traffic light and at one point he stopped to mend a tire puncture. Identify each section of the graph accordingly.



- Four hours after she left home, Sheila had traveled 145 miles. Three hours later she had traveled 300 miles. What was her rate of change?
- Jenna earns \$60 every $2\frac{1}{2}$ weeks. What is her rate of change?
- Geoffrey has a rate of change of 10 feet/1 second. Write a situation that could fit this slope.

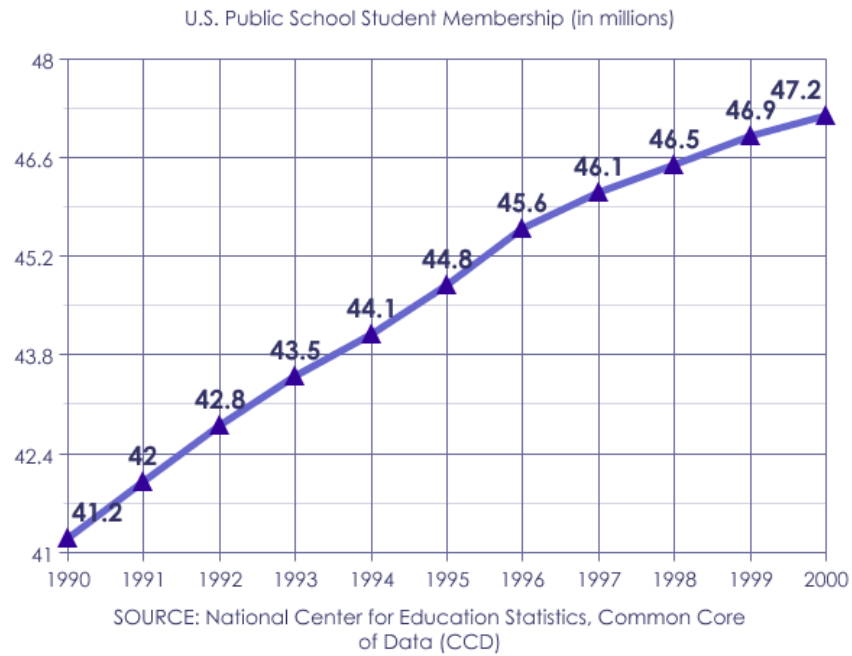
Mixed Review

- Find the intercepts of $3x - 5y = 10$.
- Graph the line $y = -6$.
- Draw a line with a negative slope passing through the point (3, 1).
- Draw a graph to represent the number of quarter and dime combinations that equal \$4.00.
- What is the domain and range of the following: $\{(-2, 2), (-1, 1), (0, 0), (1, 1), (2, 2)\}$?
- Solve for y : $16y - 72 = 36$.
- Describe the process used to solve an equation such as: $3x + 1 = 2x - 35$.
- Solve the proportion: $\frac{6}{a} = \frac{14}{2a+1}$.

Quick Quiz

- Find the intercepts of $3x + 6y = 25$ and graph the equation.
- Find the slope between (8, 5) and (-5, 6).
- Graph $f(x) = 2x + 1$.
- Graph the ordered pair with the following directions: 4 units west and 6 units north of the origin.

5. Using the graph below, list two “trends” about this data. A **trend** is something you can conclude about the given data.



4.9 Slope-Intercept Form

Here you'll learn how to convert a linear equation into slope-intercept form and determine the slope and y-intercept of the line.

Suppose that you were a senior in high school and wanted to graph a linear equation that could be used to find the number of days until graduation based on the day of the year. One way to graph such an equation would be to find the slope and y-intercept, but how could you determine this information? The answer is by converting the equation into slope-intercept form, and in this Concept, you'll learn all about this form of a linear equation.

Guidance

So, you have learned how to graph the solutions to an equation in two variables by making a table and by using its intercepts. A previous lesson introduced the formulas for slope. This lesson will combine intercepts and slope into a new formula.

You have seen different forms of this formula. Below are several examples.

$$\begin{aligned}2x + 5 &= y \\ y &= \frac{-1}{3}x + 11 \\ d &= 60(h) + 45\end{aligned}$$

The proper name given to each of these equations is **slope-intercept form** because each equation tells the slope and the y-intercept of the line.

The **slope-intercept form of an equation** is: $y = (\text{slope})x + (\text{y-intercept})$.

$y = (m)x + b$, where $m = \text{slope}$ and $b = \text{y-intercept}$

This equation makes it quite easy to graph the solutions to an equation of two variables because it gives you two necessary values:

1. The starting position of your graph (the y-intercept)
2. The directions to find your second coordinate (the slope)

Example A

Determine the slope and the y-intercept of the first two equations in the opener of this Concept.

Solution: Using the definition of slope-intercept form; $2x + 5 = y$ has a slope of 2 and a y-intercept of (0, 5).

$y = \frac{-1}{3}x + 11$ has a slope of $\frac{-1}{3}$ and a y-intercept of (0, 11).

Slope-intercept form applies to many equations, even those that do not look like the “standard” equation.

Example B

Determine the slope and y-intercept of $7x = y$.

Solution: At first glance, this does not look like the “standard” equation. However, we can substitute values for the slope and y -intercept.

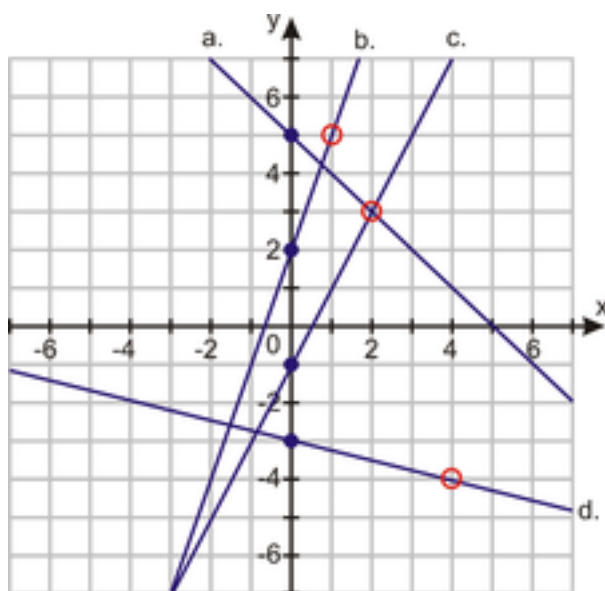
$$7x + 0 = y$$

This means the slope is 7 and the y -intercept is 0.

Example C

Determine the slope and y -intercept of the lines graphed below.

Solution: Beginning with line a , you can easily see the graph crosses the y -axis (the y -intercept) at $(0, 5)$. From this point, find a second coordinate on the line crossing at a **lattice point**.



Line a: The y -intercept is $(0, 5)$. The line also passes through $(2, 3)$.

$$\text{slope } m = \frac{\Delta y}{\Delta x} = \frac{-2}{2} = -1$$

Line b: The y -intercept is $(0, 2)$. The line also passes through $(1, 5)$.

$$\text{slope } m = \frac{\Delta y}{\Delta x} = \frac{3}{1} = 3$$

The remaining lines will be left for you in the Practice Set.

Video Review



MEDIA

 Click image to the left for more content.



MEDIA

 Click image to the left for more content.

Guided Practice

Determine the slope and y -intercept of $y = 5$.

Solution:

Using what you learned in the last Concept, the slope of every line of the form $y = \text{some number}$ is zero because it is a horizontal line. Rewriting our original equation to fit slope-intercept form yields:

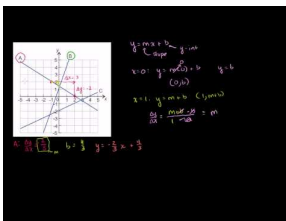
$$y = (0)x + 5$$

Therefore, the slope is zero and the y -intercept is $(0, 5)$.

You can also use a graph to determine the slope and y -intercept of a line.

Practice

Sample explanations for some of the practice exercises below are available by viewing the following video. Note that there is not always a match between the number of the practice exercise in the video and the number of the practice exercise listed in the following exercise set. However, the practice exercise is the same in both. [CK-12 Basic Algebra: Graphs Using Slope-Intercept Form \(11:11\)](#)



MEDIA

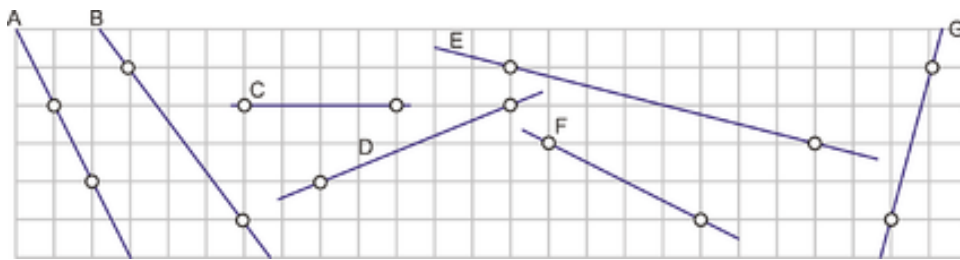
 Click image to the left for more content.

In 1 – 8, identify the slope and y -intercept for the equation.

1. $y = 2x + 5$
2. $y = -0.2x + 7$
3. $y = x$
4. $y = 3.75$
5. $\frac{2}{3}x - 9 = y$
6. $y = -0.01x + 10,000$

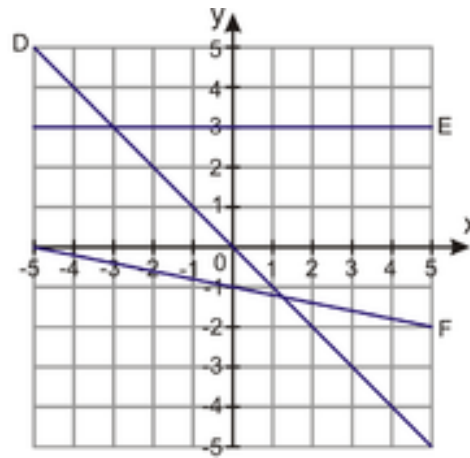
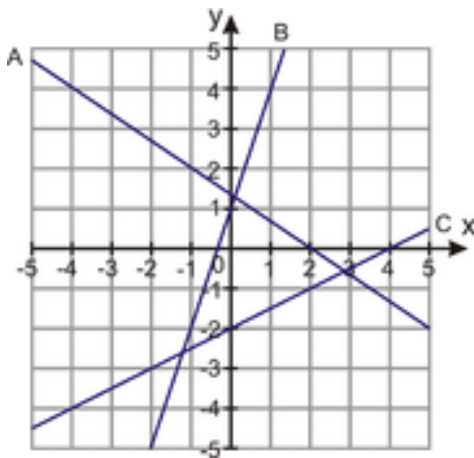
7. $7 + \frac{3}{5}x = y$
8. $-5x + 12 = 20$

In 9 – 15, identify the slope of the following lines.



9. *F*
10. *C*
11. *A*
12. *G*
13. *B*
14. *D*
15. *E*

In 16 – 21, identify the slope and *y*-intercept for the following functions.



16. *D*
17. *A*
18. *F*
19. *B*
20. *E*
21. *C*

4.10 Graphs Using Slope-Intercept Form

Here you'll learn how to use the slope-intercept form of a line to graph it, as well as how to recognize the slope of parallel lines.

Suppose a company had the slope and y -intercept of a line representing revenue based on units sold. How could the company graph this line? Does it have enough information? What if another company graphed its own revenue line, and it was parallel to the first company's line? Does this mean that the slopes of the two lines are the same, the y -intercepts are the same, both are the same, or neither are the same? In this Concept, you'll learn to graph lines using slope-intercept form so that you can answer questions like these.

Guidance

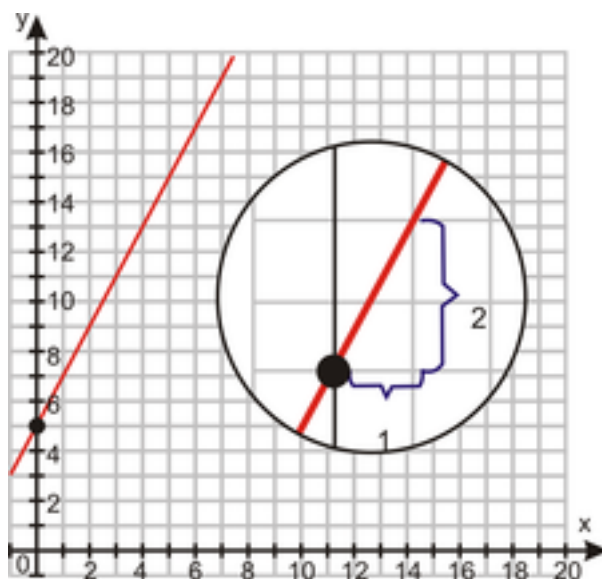
Once we know the slope and the y -intercept of an equation, it is quite easy to graph the solutions.

Example A

Graph the solutions to the equation $y = 2x + 5$.

Solution:

The equation is in slope-intercept form. To graph the solutions to this equation, you should start at the y -intercept. Then, using the slope, find a second coordinate. Finally, draw a line through the ordered pairs.

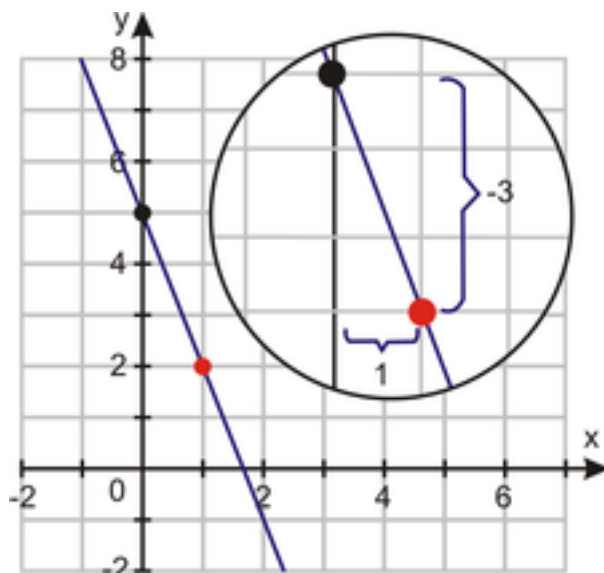


Example B

Graph the equation $y = -3x + 5$.

Solution:

Using the definition of slope-intercept form, this equation has a y -intercept of $(0, 5)$ and a slope of $-\frac{3}{1}$.



Slopes of Parallel Lines

Parallel lines will never **intersect**, or cross. The only way for two lines never to cross is if the method of finding additional coordinates is the same.

Therefore, it's true that **parallel lines** have the same slope.

You will use this fact in later algebra lessons as well as in geometry.

Example C

Determine the slope of any line parallel to $y = -3x + 5$.

Solution:

Because parallel lines have the same slope, the slope of any line parallel to $y = -3x + 5$ must also be -3 .

Video Review



MEDIA

Click image to the left for more content.



MEDIA

Click image to the left for more content.

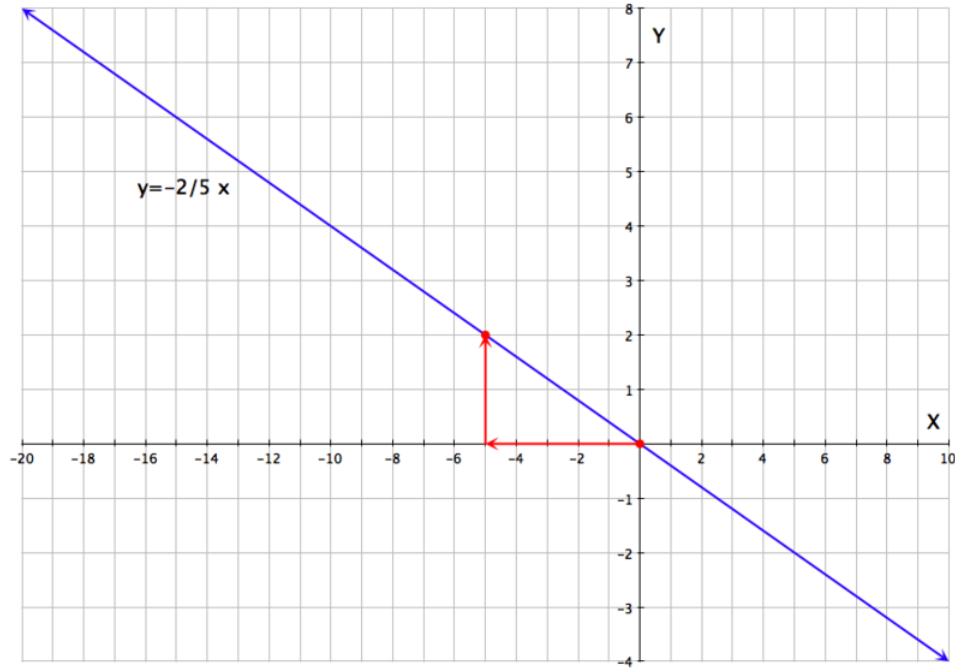
Guided Practice

Graph $y = -\frac{2}{3}x$ by graphing the y -intercept first, and then using the slope to find a second point to graph.

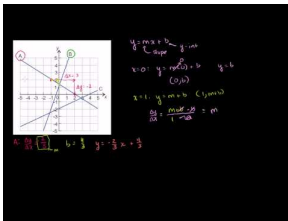
Solution:

First, graph the y-intercept, which is $(0,0)$.

Next, the slope is $-\frac{2}{5}$. The negative can go along with the denominator or numerator. Either way, you will get a slope on the same line. Let the rise be 2 and the run be -5. This means, from the starting point, go to the left 5, and then go up 2:

**Practice**

Sample explanations for some of the practice exercises below are available by viewing the following video. Note that there is not always a match between the number of the practice exercise in the video and the number of the practice exercise listed in the following exercise set. However, the practice exercise is the same in both. [CK-12 Basic Algebra: Graphs Using Slope-Intercept Form \(11:11\)](#)

**MEDIA**

Click image to the left for more content.

Plot the following functions on a graph.

1. $y = 2x + 5$
2. $y = -0.2x + 7$
3. $y = -x$
4. $y = 3.75$
5. $\frac{2}{7}x - 4 = y$
6. $y = -4x + 13$
7. $-2 + \frac{3}{8}x = y$

8. $y = \frac{1}{2} + 2x$

In 9 – 16, state the slope of a line parallel to the line given.

9. $y = 2x + 5$

10. $y = -0.2x + 7$

11. $y = -x$

12. $y = 3.75$

13. $y = -\frac{1}{5}x - 11$

14. $y = -5x + 5$

15. $y = -3x + 11$

16. $y = 3x + 3.5$

Mixed Review

17. Graph $x = 4$ on a Cartesian plane.

18. Solve for g : $|8 - 11| + 4g = 99$.

19. What is the order of operations? When is the order of operations used?

20. Give an example of a negative irrational number.

21. Give an example of a positive rational number.

22. *True or false:* An integer will always be considered a rational number.

4.11 Direct Variation

Here you'll learn what direct variation means and how to calculate a constant of proportionality.

Suppose a person's annual salary is directly proportional to the number of years he or she has spent in school. What do you think this means? Could you determine the constant of proportionality? What information would you need to do so? If you wrote a linear equation to represent this relationship, what would be the slope and y -intercept? In this Concept, you'll learn all about direct variation so you can answer these types of questions.

Direct Variation

At the local farmer's market, you saw someone purchase 5 pounds of strawberries and pay \$12.50. You want to buy strawberries too, but you want only 2 pounds. How much would you expect to pay?



This situation is an example of a **direct variation**. You would expect that the strawberries are priced on a “per pound” basis, and that if you buy two-fifths of the amount of strawberries, you would pay two-fifths of \$12.50 for your strawberries, or \$5.00. Similarly, if you bought 10 pounds of strawberries (twice the amount), you would pay \$25.00 (twice \$12.50), and if you did not buy any strawberries you would pay nothing.

Direct variation can be expressed as the equation $y = (k)x$, where k is called the constant of proportionality.

Direct variation occurs when:

- The fraction $\frac{\text{rise}}{\text{run}}$ or $\frac{\text{change in } y}{\text{change in } x}$ is always the same, and
- The ordered pair $(0, 0)$ is a solution to the equation.

Example A

If y varies directly with x according to the relationship $y = k \cdot x$, and $y = 7.5$ when $x = 2.5$, determine the constant of proportionality, k .

Solution: We can solve for the constant of proportionality using substitution.

Substitute $x = 2.5$ and $y = 7.5$ into the equation $y = k \cdot x$.

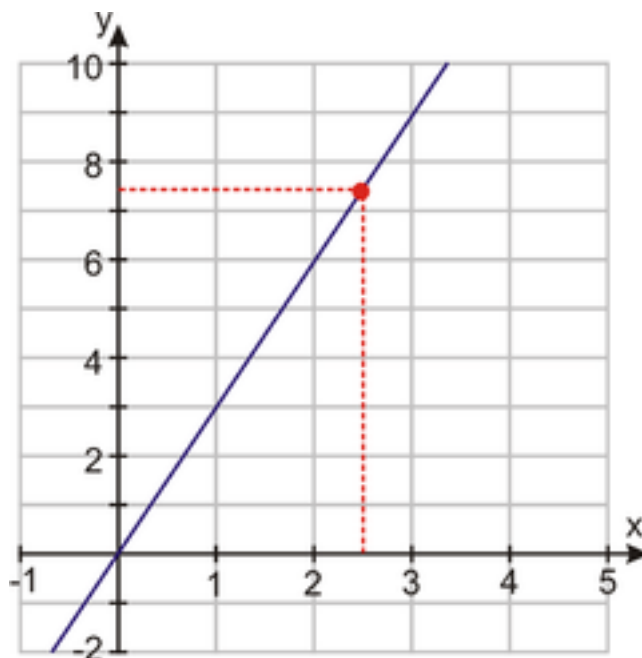
$$7.5 = k(2.5)$$

Divide both sides by 2.5.

$$\frac{7.5}{2.5} = k = 3$$

The constant of variation (or the constant of proportionality) is 3.

You can use this information to graph this direct variation situation. Remember that all direct variation situations cross the origin. You can plot the ordered pair $(0, 0)$ and use the constant of variation as your slope.



Example B

Explain why each of the following equations are not examples of direct variation.

$$y = \frac{2}{x}$$

$$y = 5x - 1$$

$$2x + y = 6$$

Solution: In equation 1, the variable is in the denominator of the fraction, violating the definition.

In equation 2, there is a y -intercept of -1 , violating the definition.

In equation 3, there is also a y -intercept, violating the definition.

Translating a Sentence into a Direct Variation Equation

Direct variation equations use the same phrase to give the reader a clue. The phrase is either “directly proportional” or “varies directly.”

Example C

The area of a square varies directly as the square of its side.

Solution: The first variable you encounter is “area.” Think of this as your y . The phrase “varies directly” means $= (k) \times$. The second variable is “square of its side.” Call this letter s .

Now translate into an equation: $y = (k) \times s^2$.

You’ve written your first direct variation equation.

Video Review



MEDIA

Click image to the left for more content.



MEDIA

Click image to the left for more content.

Guided Practice

The distance you travel is directly proportional to the time you have been traveling. Write this situation as a direct variation equation.

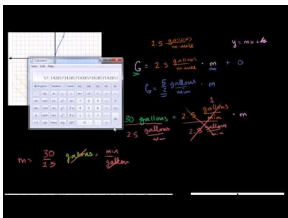
Solution:

The first variable is *distance*; call it d . The second variable is the *time you have been traveling*; call it t . Apply the direct variation definition:

$$d = (k) \times t$$

Practice

Sample explanations for some of the practice exercises below are available by viewing the following video. Note that there is not always a match between the number of the practice exercise in the video and the number of the practice exercise listed in the following exercise set. However, the practice exercise is the same in both. [CK-12 Basic Algebra:Direct Variation Models \(11:11\)](#)



MEDIA

Click image to the left for more content.

1. Describe direct variation.

2. What is the formula for direct variation? What does k represent?

Translate the following direct variation situations into equations. Choose appropriate letters to represent the varying quantities.

3. The amount of money you earn is directly proportional to the number of hours you work.
4. The weight of an object on the Moon varies directly with its weight on Earth.
5. The volume of a gas is directly proportional to its temperature in Kelvin.
6. The number of people served varies directly with the amount of ground meat used to make burgers.
7. The amount of a purchase varies directly with the number of pounds of peaches.

Explain why each equation is not an example of direct variation.

8. $\frac{4}{x} = y$
9. $y = 9$
10. $x = -3.5$
11. $y = \frac{1}{8}x + 7$
12. $4x + 3y = 1$

Graph the following direct variation equations.

13. $y = \frac{4}{3}x$
14. $y = -\frac{2}{3}x$
15. $y = -\frac{1}{6}x$
16. $y = 1.75x$
17. Is $y = 6x - 2$ an example of direct variation? Explain your answer.

Mixed Review

18. Graph $3x + 4y = 48$ using its intercepts.
19. Graph $y = \frac{2}{3}x - 4$.
20. Solve for u : $4(u + 3) = 3(3u - 7)$.
21. Are these lines parallel? $y = \frac{1}{2}x - 7$ and $2y = x + 2$
22. In which quadrant is $(-99, 100)$?
23. Find the slope between $(2, 0)$ and $(3, 7)$.
24. Evaluate if $a = -3$ and $b = 4$: $\frac{1+4b}{2a-5b}$.

4.12 Applications Using Direct Variation

Here you'll use various formulas to solve real-world direct variation problems.

Did you know that to find the flow rate of water in a pipeline, you can use the formula $Q = AV$, where Q is the flow rate, A is the area of a cross-section of the pipe, and V is the velocity of the water? This means that if you know the flow rate and the area, you can find the velocity, if you know the flow rate and the velocity, you can find the area, and if you know the area and the velocity, you can find the flow rate. In this Concept, you'll work with equations like this one to solve real-world problems involving direct variation.

Guidance

Direct variation has numerous real-world examples. You have already seen three examples: the area of a square is directly proportional to its side length; the distance you travel varies directly as the time you have been driving; and the total cost is directly proportional to the number of pounds of strawberries you purchase.

Newton's Second Law

In 1687, Sir Isaac Newton published the famous *Principia Mathematica*. It contained his Second Law of Motion. This law is often written as: $F = m \cdot a$, where F = the amount of force applied to an object with mass (m) and a = acceleration.

Acceleration is given in the units meters/second² and force is given in units of Newtons.

Example A

If a 175 Newton force causes a heavily loaded shopping cart to accelerate down the aisle with an acceleration of 2.5 m/s^2 , calculate the mass of the shopping cart.

Solution: This question is basically asking us to solve for the constant of proportionality. Let us compare the two formulas.

$$y = k \cdot x$$

The direct variation equation

$$F = m \cdot a$$

Newton's Second law

We see that the two equations have the same form. The variable y is equal to force and x is equal to acceleration.

$$175 = m \cdot 2.5$$

Now solve for m , the constant of variation.

$$\frac{175}{2.5} = \frac{m \cdot 2.5}{2.5}$$

$$m = 70$$

Example B

If a 175 Newton force causes a heavily-loaded shopping cart to accelerate down the aisle with an acceleration of 2.5 m/s^2 , calculate the force needed to accelerate the same cart at 6 m/s^2 .

Solution: Now you know the constant of variation is 70. In this formula, 70 represents the mass. To find the force needed to move the cart at an accelerated rate of 6 meters/second, substitute 6 for a and evaluate the equation.

When $a = 6$, $F = 70 \cdot 6 = 420$.

The force needed to accelerate the cart is 420 Newtons.

Solving Direct Variation Using Proportions

You can use the Cross Products Theorem of proportions to solve direct variation situations. Because the fraction $\frac{\text{rise}}{\text{run}}$ is constant in a direct variation situation, you can create a proportion.

Example C

Ohm's Law states that the voltage (V) is equal to the electrical current (I) in amps times the resistance (R) in ohms. Translating this to an equation, $V = I \cdot R$.

Suppose an electronics device passed a current of 1.3 amps at a voltage of 2.6 volts. What was the current when the voltage was increased to 12 volts?

Ohm's Law matches with the definition of direct variation, so you can write a proportion. $\frac{2.6 \text{ volts}}{1.3 \text{ amps}} = \frac{12 \text{ volts}}{I \text{ amps}}$. Using the Cross Products Theorem, solve for I . $I = 6$. Therefore, when the voltage was increased to 12 volts, the electronics device passed a current of 6 amps.

Video Review

MEDIA

Click image to the left for more content.



MEDIA

Click image to the left for more content.

Guided Practice

Suppose a car uses 5 liters of gasoline to drive 40 kilometers. How much gasoline will the car require in order to drive 128 kilometers?

Solution:

This is a problem of direct variation involving a constant that is kilometers per liter of gasoline. You can use a proportion to solve this problem. When setting up proportions, you need to make sure that the same unit is on the same side: top, bottom, left, or right. The same units cannot be placed so that they are on a diagonal from each other.

It's easiest if you set up your proportion so that the unknown value is not in the denominator of the fraction. Since we are solving for liters, we will place liters in the numerators.

Set up the proportion so that liters are both on top.

$$\frac{5 \text{ liters}}{40 \text{ km}} = \frac{x \text{ liters}}{128 \text{ km}}$$

Isolate the variable.


$$128 \cdot \frac{5}{40} = x$$

Simplify.

$$16 = x$$

Practice

Sample explanations for some of the practice exercises below are available by viewing the following video. Note that there is not always a match between the number of the practice exercise in the video and the number of the practice exercise listed in the following exercise set. However, the practice exercise is the same in both. [CK-12 Basic Algebra:Direct Variation Models](#) (11:11)



MEDIA

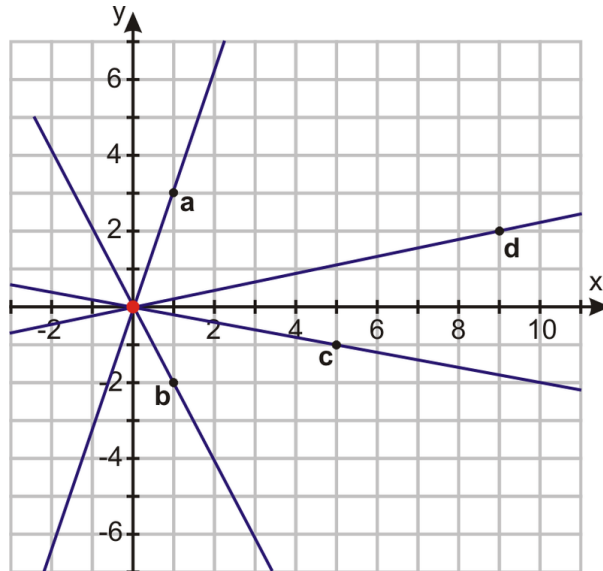
Click image to the left for more content.

1. What two methods can be used to solve a direct variation problem?
2. *True or false?* Every linear equation is a direct variation situation.

In 3 – 7, determine the constant of variation in each exercise.

3. y varies directly as x ; when $x = 4$, $y = 48$
4. d varies directly as t ; when $t = 7$, $d = 329$
5. l varies directly as h ; when $l = 112$, $h = -16$
6. m is directly proportional to h ; when $m = 461.50$, $h = 89.6$
7. z is directly proportional to r ; when $r = 412$, $z = 51.5$
8. Determine the equation of the strawberry purchase in the opener of this Concept.
9. Dasan's mom takes him to the video arcade for his birthday. In the first 10 minutes, he spends \$3.50 playing games. If his allowance for the day is \$20.00, how long can he keep playing games before his money is gone?
10. The current standard for low-flow showerheads is 2.5 gallons per minute. Calculate how long it would take to fill a 30-gallon bathtub using such a showerhead to supply the water.
11. An electrical device passes a force of 288 volts at 32 amps. Using Ohm's Law, determine:
 - a. The constant of proportionality
 - b. The force needed to pass 65 amps
12. The diameter of a circle is directly proportional to its radius. If a circle with a 2-inch diameter has a circumference of approximately 6.28 inches, what is the circumference of a 15-inch circle?
13. Amin is using a hose to fill his new swimming pool for the first time. He starts the hose at 10:00 P.M. and leaves it running all night. At 6:00 A.M. he measures the depth and calculates that the pool is four-sevenths full. At what time will his new pool be full?
14. Land in Wisconsin is for sale to property investors. A 232-acre lot is listed for sale for \$200,500. Assuming the same price per acre, how much would a 60-acre lot sell for?

15. The force (F) needed to stretch a spring by a distance x is given by the equation $F = k \cdot x$, where k is the spring constant (measured in Newtons per centimeter, N/cm). If a 12-Newton force stretches a certain spring by 10 cm, calculate:
- The spring constant, k
 - The force needed to stretch the spring by 7 cm
 - The distance the spring would stretch with a 23-Newton force
16. Determine the equations of graphs $a - d$ below.



4.13 Function Notation and Linear Functions

Here you'll learn how to convert an equation to function notation and how to input a value into a function in order to get an output value.

Suppose you just purchased a used car, and the number of miles on the odometer can be represented by the equation $y = x + 30,000$, where y is the number of miles on the odometer, and x is the number of miles you have driven it. Could you convert this equation to function notation? How many miles will be on the odometer if you drive the car 700 miles? In this Concept, you'll learn how to convert equations such as this one to function notation and how to input a value into a function in order to get an output value.

Guidance

So far, the term **function** has been used to describe many of the equations we have been graphing. The concept of a function is extremely important in mathematics. Not all equations are functions. To be a function, for each value of x there is one and only one value for y .

Definition: A **function** is a relationship between two variables such that the input value has **ONLY** one unique output value.

Recall from a previous Concept that a function rule replaces the variable y with its function name, usually $f(x)$. Remember that these parentheses do not mean multiplication. They separate the function name from the independent variable, x .

$$\begin{array}{c}
 \text{input} \\
 \downarrow \\
 \underbrace{f(x)} = y \leftarrow \text{output} \\
 \text{function} \\
 \text{box}
 \end{array}$$

$f(x)$ is read “the function f of x ” or simply “ f of x .”

If the function looks like this: $h(x) = 3x - 1$, it would be read h of x equals 3 times x minus 1.

Using Function Notation

Function notation allows you to easily see the input value for the independent variable inside the parentheses.

Example A

Consider the function $f(x) = -\frac{1}{2}x^2$.

Evaluate $f(4)$.

Solution: The value inside the parentheses is the value of the variable x . Use the Substitution Property to evaluate the function for $x = 4$.

$$f(4) = -\frac{1}{2}(4^2)$$

$$f(4) = -\frac{1}{2} \cdot 16$$

$$f(4) = -8$$

To use function notation, the equation must be written in terms of x . This means that the y -variable must be isolated on one side of the equal sign.

Example B

Rewrite $9x + 3y = 6$ using function notation.

Solution: The goal is to rearrange this equation so the equation looks like $y =$. Then replace $y =$ with $f(x) =$.

$$9x + 3y = 6$$

$$3y = 6 - 9x$$

$$y = \frac{6 - 9x}{3} = 2 - 3x$$

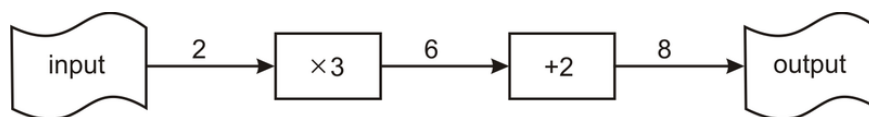
$$f(x) = 2 - 3x$$

Subtract $9x$ from both sides.

Divide by 3.

Functions as Machines

You can think of a function as a machine. You start with an input (some value), the machine performs the operations (it does the work), and your output is the answer. For example, $f(x) = 3x + 2$ takes *some number*, x , multiplies it by 3 and adds 2. As a machine, it would look like this:



When you use the function machine to evaluate $f(2)$, the solution is $f(2) = 8$.

Example C

A function is defined as $f(x) = 6x - 36$. Determine the following:

a) $f(2)$

b) $f(p)$

Solution:

a) Substitute $x = 2$ into the function $f(x)$: $f(2) = 6 \cdot 2 - 36 = 12 - 36 = -24$.

b) Substitute $x = p$ into the function $f(x)$: $f(p) = 6p - 36$.

Video Review

**MEDIA**

Click image to the left for more content.

**MEDIA**

Click image to the left for more content.

Guided Practice

Rewrite the equation $2y - 4x = 10$ in function notation where $f(x) = y$, and then evaluate $f(-1)$, $f(2)$, $f(0)$, and $f(z)$.

Solution:

First we need to solve for y .

Adding $4x$ to both sides gives $2y = 4x + 10$, and dividing by 2 gives $y = 2x + 5$.

Now we just replace the y with $f(x)$ to get $f(x) = 2x + 5$.

Now we can evaluate $f(x) = y = 2x + 5$ for $f(-1)$, $f(2)$, $f(0)$, and $f(z)$:

$$f(-1) = 2(-1) + 5 = -2 + 5 = 3$$

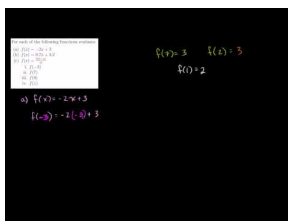
$$f(2) = 2(2) + 5 = 4 + 5 = 9$$

$$f(0) = 2(0) + 5 = 5$$

$$f(z) = 2z + 5$$

Practice

Sample explanations for some of the practice exercises below are available by viewing the following video. Note that there is not always a match between the number of the practice exercise in the video and the number of the practice exercise listed in the following exercise set. However, the practice exercise is the same in both. [CK-12 Basic Algebra: Linear Function Graphs](#) (11:49)

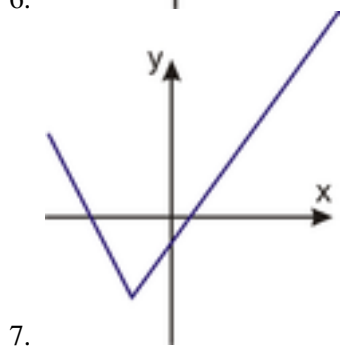
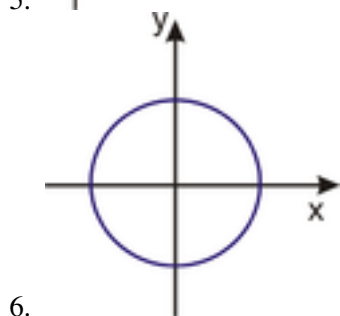
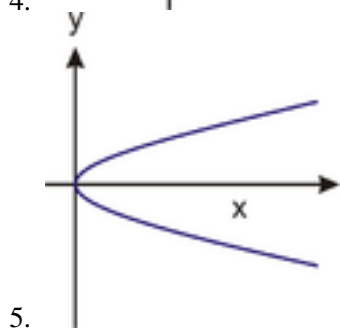
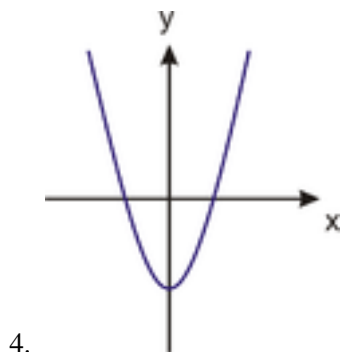
**MEDIA**

Click image to the left for more content.

(<http://www.youtube.com/watch?v=EmTvdKkAUtE>)

1. How is $f(x)$ read?
2. What does function notation allow you to do? Why is this helpful?
3. Define *function*. How can you tell if a graph is a function?

In 4 – 7, tell whether the graph is a function. Explain your reasoning.



Rewrite each equation using function notation.

8. $y = 7x - 21$

9. $6x + 8y = 36$

10. $x = 9y + 3$

11. $y = 6$

12. $d = 65t + 100$

13. $F = 1.8C + 32$

14. $s = 0.10(m) + 25,000$

In 15 – 19, evaluate $f(-3)$, $f(7)$, $f(0)$, and $f(z)$.

15. $f(x) = -2x + 3$

16. $f(x) = 0.7x + 3.2$

17. $f(x) = \frac{5(2-x)}{11}$

18. $f(t) = \frac{1}{2}t^2 + 4$

19. $f(x) = 3 - \frac{1}{2}x$

4.14 Graphs of Linear Functions

Here you'll learn how to graph a linear function by finding the graph's slope and y -intercept.

Suppose the linear function $f(x) = -0.25x + 10$ represents the amount of money you have left to play video games, where $f(x)$ is the amount of money you have left and x is the number of video games that you have played so far. Do you know how to graph this function? What would be the slope and y -intercept of the graph? In this Concept, you'll learn how to graph linear functions like this one by finding the graph's slope and y -intercept.

Guidance

You can see that the notation $f(x) =$ and $y =$ are interchangeable. This means you can substitute the notation $y =$ for $f(x) =$ and use all the concepts you have learned on linear equations.

Example A

$$\text{Graph } f(x) = \frac{1}{3}x + 1.$$

Replace $f(x) =$ with $y =$.

$$y = \frac{1}{3}x + 1$$

This equation is in slope-intercept form. You can now graph the function by graphing the y -intercept and then using the slope as a set of directions to find your second coordinate.

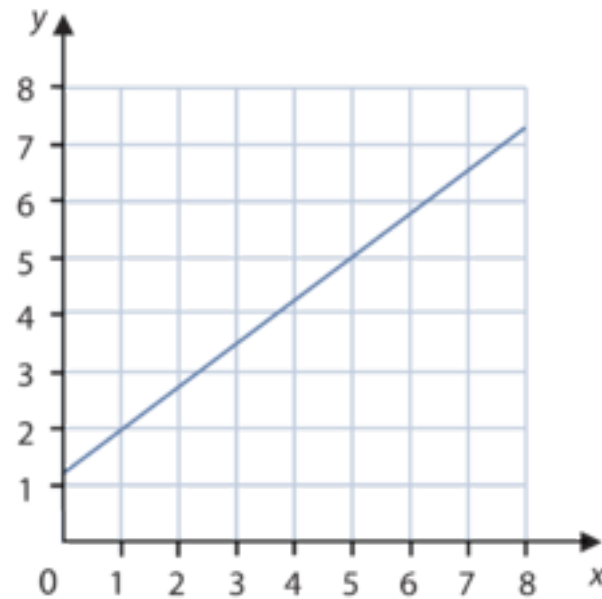
Example B

$$\text{Graph } f(x) = \frac{3x+5}{4}.$$

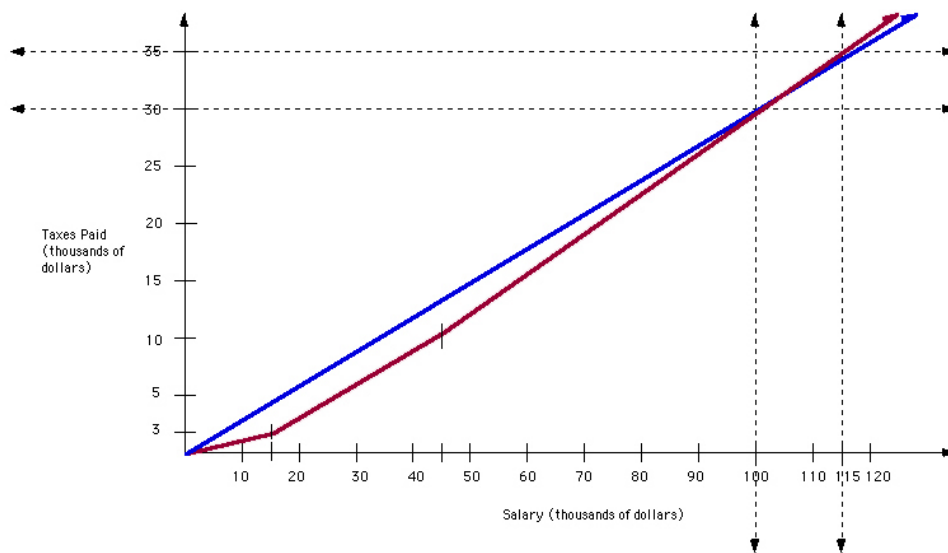
Solution: The first step is to rewrite the single fraction as two separate fractions.

$$f(x) = \frac{3x+5}{4} = \frac{3}{4}x + \frac{5}{4}$$

This equation is in slope-intercept form. The y -intercept is at the ordered pair $(0, \frac{5}{4})$ and the slope is $\frac{\text{rise}}{\text{run}} = \frac{3}{4}$. Beginning at the y -intercept and using the slope to find a second coordinate, you get the graph:



Analyzing Graphs of Real-World Linear Functions



The previous graph, written by T. Barron and S. Katsberg from the University of Georgia <http://jwilson.coe.u ga.edu/emt668/EMAT6680.Folders/Barron/unit/Lesson%204/4.html>, shows the relationship between the salary (in thousands of dollars) and the taxes paid (in thousands of dollars) in red. The blue function represents a direct variation situation in which the constant of variation (or the **slope**) is 0.30, or a 30% tax rate. This direct variation represents a flat tax of 30%.

The red line has three slopes. The first portion of the line from \$0 to \$15,000 has a slope of 0.20, or 20%. The second portion of the line from \$15,000 to \$45,000 has a slope of 0.25, or 25%. The slope of the portion of the line representing greater than \$45,000 of salary is 0.35, or 35%.

Example C

Suppose you wanted to compare the amount of taxes you would pay if your salary was \$60,000. If the blue line was $blue(s)$ and the red line was $red(s)$, then you would evaluate each function for $s = 60,000$.

Using the graph, $blue(60) = 18$ and $red(60) = 15$. Therefore, you would pay more taxes with the blue line tax rate than the red line tax rate. We will look at how to use graphs as a problem-solving strategy in the next Concept.

Video Review



MEDIA

Click image to the left for more content.



MEDIA

Click image to the left for more content.

Guided Practice

Car A uses 15 gallons of gasoline to drive 2.5 hours. Write an equation for this function, graph it and use it to answer: How much gas would this car use if it were driving 30 minutes?

Solution:

The car uses a certain number of gallons of gasoline per hour. That is a rate, and if you multiply it by a certain number of hours, it will tell you how many gallons are needed to drive that many hours. This can be written as a linear function, where the dependent variable $f(x)$ is the number of gallons. In other words, the number of gallons needed depends on what length of time the car drives. Time in hours is the independent variable, x .

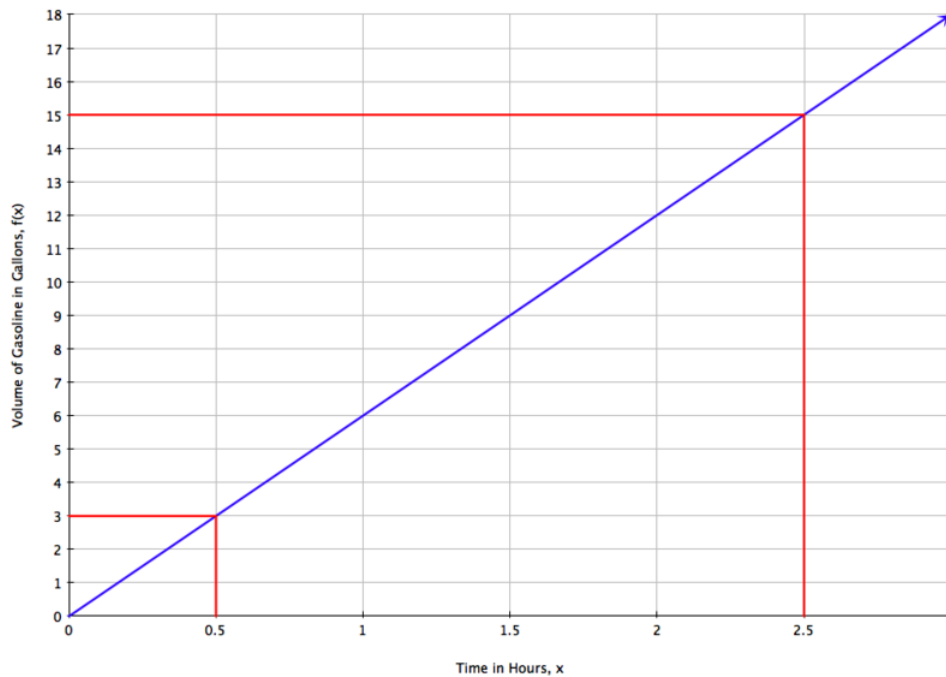
The rate, which is the slope, is:

$$\frac{\text{rise}}{\text{run}} = \frac{\text{gallons}}{\text{hours}} = \frac{15}{2.5} = 6.$$

The function is then:

$$f(x) = 6x.$$

The graph looks like the following:

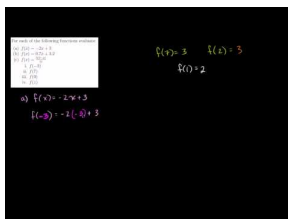


You can see in the graph that $f(0.5) = 3$. Thus, to drive a half hour will require 3 gallons of gasoline.

You can also check that your graph was correct in the first place by seeing that one of the coordinate pairs is 2.5 hours and 15 gallons, which was originally given in the problem.

Practice

Sample explanations for some of the practice exercises below are available by viewing the following video. Note that there is not always a match between the number of the practice exercise in the video and the number of the practice exercise listed in the following exercise set. However, the practice exercise is the same in both. [CK-12 Basic Algebra: Linear Function Graphs](#) (11:49)



MEDIA

Click image to the left for more content.

(<http://www.youtube.com/watch?v=EmTvdKkAUtE>)

- The roasting guide for a turkey suggests cooking for 100 minutes plus an additional 8 minutes per pound.
 - Write a function for the roasting time, given the turkey weight in pounds (x).
 - Determine the time needed to roast a 10-lb turkey.
 - Determine the time needed to roast a 27-lb turkey.
 - Determine the maximum size turkey you could roast in $4\frac{1}{2}$ hours.
- $F(C) = 1.8C + 32$ is the function used to convert Celsius to Fahrenheit. Find $F(100)$ and explain what it represents.

3. A prepaid phone card comes with \$20 worth of calls. Calls cost a flat rate of \$0.16 per minute. Write the value of the card as a function of minutes per call. Use a function to determine the number of minutes of phone calls you can make with the card.
4. You can burn 330 calories during one hour of bicycling. Write this situation using $b(h)$ as the function notation. Evaluate $b(0.75)$ and explain its meaning.
5. Sadie has a bank account with a balance of \$650.00. She plans to spend \$55 per week.
 - a. Write this situation using function notation.
 - b. Evaluate her account after 10 weeks. What can you conclude?

Mixed Review

6. Simplify $-120\left(\frac{1}{2}\right)\left(\frac{3}{5}\right)$.
7. Find the sum: $7\frac{1}{4} + 3\frac{2}{3} + 5\frac{3}{4}$.
8. Simplify $-3(4m + 11)$.
9. Is the following situation an example of a function? Let $x = \text{salary}$ and $y = \text{taxes paid}$.
10. y varies directly as z , and $y = 450$ when $z = 6$. Find the constant of variation.

4.15 Problem Solving with Linear Graphs

Here you'll learn how to solve real-world linear problems by constructing and interpreting graphs.

Suppose that you have a part-time job delivering newspapers and that you can deliver 9 newspapers every 15 minutes. If you deliver at a constant rate, how many newspapers could you deliver in 2 hours? Could you construct a graph to represent this situation? How would the graph help you to solve the problem? In this Concept, you'll learn how to construct a graph to solve real-world linear problems such as this one.

Guidance

Graphing is a very useful tool when analyzing a situation. This Concept will focus on using graphs to help solve linear problems that occur in real life.

Remember the 4-Step Problem-Solving Plan:

1. Understand the problem and underline or highlight key information.
2. Translate the problem and devise a method to solve the problem.
3. Carry out the plan and solve the problem.
4. Check and interpret your answer. Does it make sense?

Example A

A cell phone company is offering its customers the following deal. You can buy a new cell phone for \$60 and pay a monthly flat rate of \$40 per month for unlimited calls. How much money will this deal cost you after 9 months?

Solution:

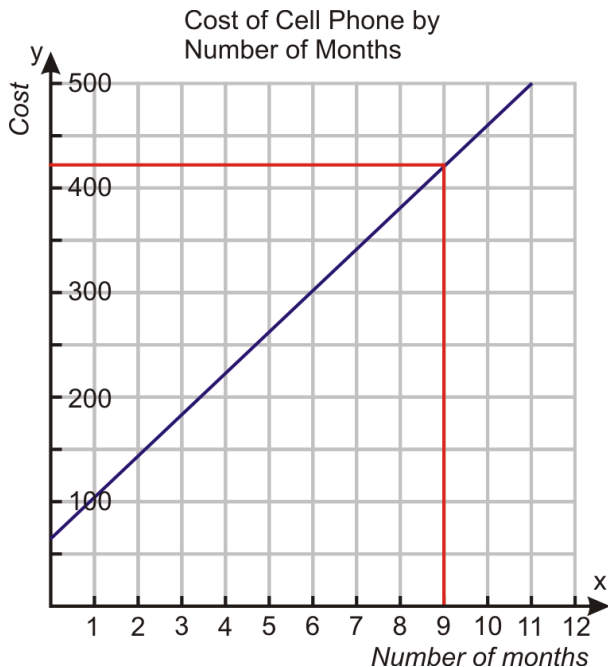
Begin by translating the sentence into an algebraic equation.

$$\text{cell phone} = \$60 + \$40 \text{ per month}$$

Let $m =$ the number of months and $t =$ total cost. The equation becomes:

$$t(m) = 60 + 40m$$

You could use guess and check or solve this equation. However, this Concept focuses on using a graph to problem-solve. This equation is in slope-intercept form. By graphing the line of this equation, you will find all the ordered pairs that are solutions to the cell phone problem.



Finding the cost at month 9, you can see the cost is approximately \$425.00. To check if this is approximately correct, substitute 9 in for the variable m .

$$\begin{aligned} \text{Phone} &= \$60 \\ \text{Calling plan} &= \$40 \times 9 = \$360 \\ \text{Total cost} &= \$420. \end{aligned}$$

Our answer, \$425.00, is approximately equal to the exact solution, \$420.00.

Example B

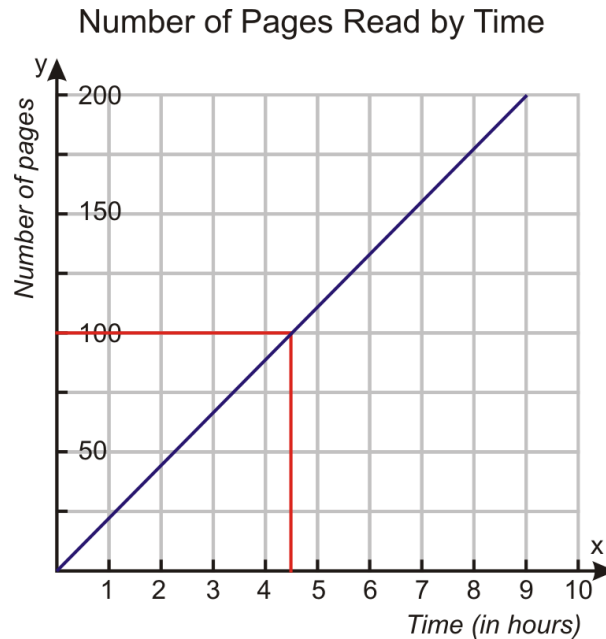
Christine took one hour to read 22 pages of “Harry Potter and the Order of the Phoenix.” She has 100 pages left to read in order to finish the book. Assuming that she reads at a constant rate of pages per hour, how much time should she expect to spend reading in order to finish the book?



Solution:

We do not have enough information to write an equation. We do not know the slope or the y -intercept. However, we have two points we can graph. We know that if Christine had never picked up the book, she would have read

zero pages. So it takes Christine 0 hours to read 0 pages. We also know it took Christine one hour to read 22 pages. The two coordinates we can graph are $(0, 0)$ and $(1, 22)$.



Using the graph and finding 100 pages, you can determine it will take Christine about 4.5 hours to read 100 pages. You can also think of this as a direct variation situation and solve it by writing a proportion.

$$\frac{22 \text{ pages}}{1 \text{ hour}} = \frac{100 \text{ pages}}{h \text{ hours}}$$

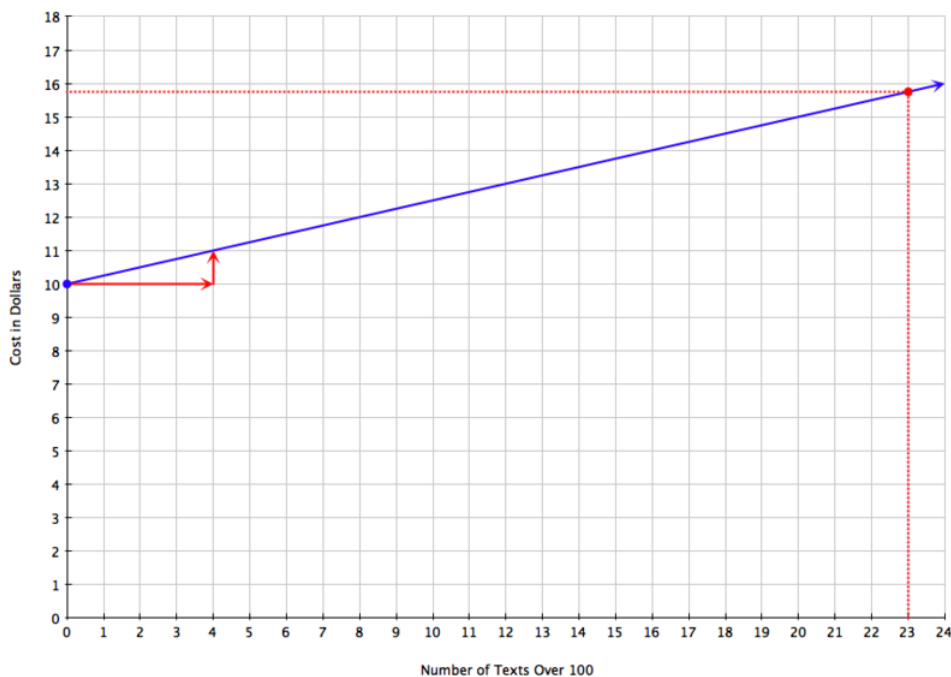
By using the Cross Products Theorem, you can find out $h \approx 4.55$. It will take Christine about 4.55 hours to read 100 pages, which is very close to your original estimate of 4.5 hours.

Example C

A cell phone monthly messaging plan costs \$10 for the first 100 texts and then \$0.25 for each additional text. Make a graph of this relation. Use the graph to determine the cost of sending 123 text messages in a month.

Solution:

The plan costs \$10 no matter how many texts you send under 100. Even if you send zero texts, the cost is \$10. So, \$10 is the y-intercept. The slope, or rate, is \$0.25 per text, or $\frac{1}{4}$, but only for texts after the first 100. Also, the independent variable x represents the number of texts sent **over 100**. Since we want to know the cost of sending 123 text messages in a month, we really need to consider when $x = 23$. First, we will graph the equation by using the y-intercept and slope:



The coordinate pair for when $x = 23$ is between 15 and 16. In situations like this, it is helpful to write the equation to solve for the exact value, which in this case is 15.75.

It would cost \$15.75 to send 123 texts on this plan.

Video Review



MEDIA

Click image to the left for more content.



MEDIA

Click image to the left for more content.

Guided Practice

Jerome drove 20 miles an hour for 15 minutes on city streets, and then 40 miles an hour for 30 minutes on the highway, 60 miles an hour for an hour on the freeway, and finally 20 miles an hour for 15 minutes on city streets. Use a graph to determine how far Jerome drove.

Solution:

Jerome's different speeds are his different rates, in miles per hour. Since his times are given in minutes, convert the rates to miles per minute:

$$\frac{20 \text{ miles}}{\text{hour}} = \frac{20 \text{ miles}}{60 \text{ minutes}} = \frac{1 \text{ mile}}{3 \text{ minutes}}$$

If the change in time is 15 minutes, then the change in distance is $\frac{1 \text{ mile}}{3 \text{ minutes}} \cdot 15 \text{ minutes} = 5 \text{ miles}$. So the rate can be written as $\frac{5 \text{ miles}}{15 \text{ minutes}}$.

$$\frac{40 \text{ miles}}{\text{hour}} = \frac{40 \text{ miles}}{60 \text{ minutes}} = \frac{2 \text{ mile}}{3 \text{ minutes}}$$

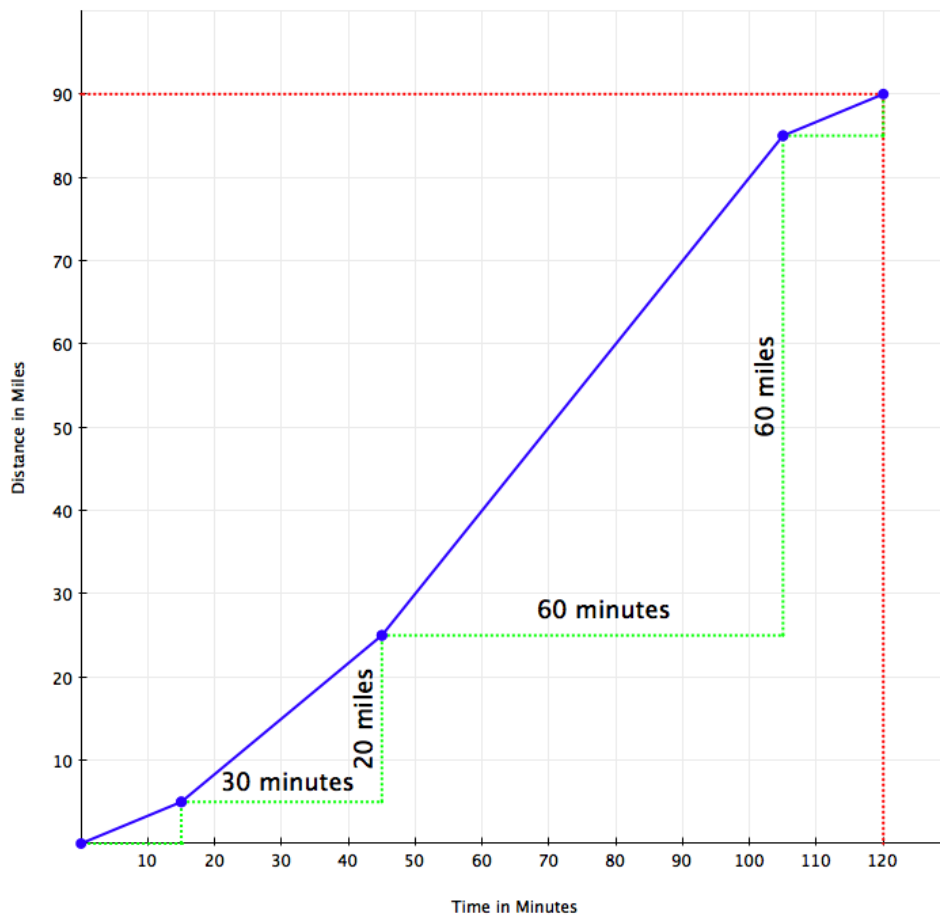
If the change in time is 30 minutes, then the change in distance is $\frac{2 \text{ mile}}{3 \text{ minutes}} \cdot 30 \text{ minutes} = 20 \text{ miles}$. So the rate can be written as $\frac{20 \text{ miles}}{30 \text{ minutes}}$.

$$\frac{60 \text{ miles}}{\text{hour}} = \frac{60 \text{ miles}}{1 \text{ minutes}} = \frac{1 \text{ mile}}{1 \text{ minutes}}$$

If the change in time is 60 minutes, then the change in distance is $\frac{1 \text{ mile}}{1 \text{ minutes}} \cdot 60 \text{ minutes} = 60 \text{ miles}$. So the rate can be written as $\frac{60 \text{ miles}}{60 \text{ minutes}}$.

The last interval has the same rate as the first: $\frac{5 \text{ miles}}{15 \text{ minutes}}$.

Use these rates to draw a graph of distance in miles as a function of time in minutes.




From the graph you can see that Jerome's trip takes 120 minutes, or two hours, and that he drives 90 miles.

Practice

Sample explanations for some of the practice exercises below are available by viewing the following video. Note that there is not always a match between the number of the practice exercise in the video and the number of the

practice exercise listed in the following exercise set. However, the practice exercise is the same in both. [CK-12 Basic Algebra: Word Problem Solving 4](#) (10:05)

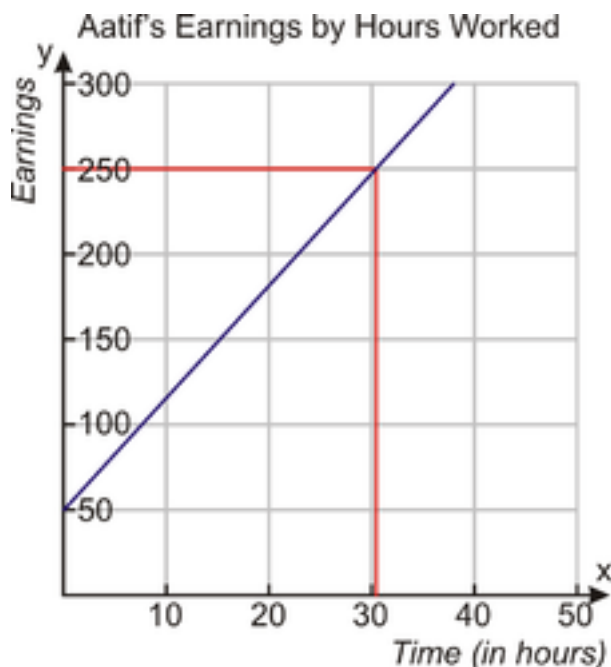


MEDIA

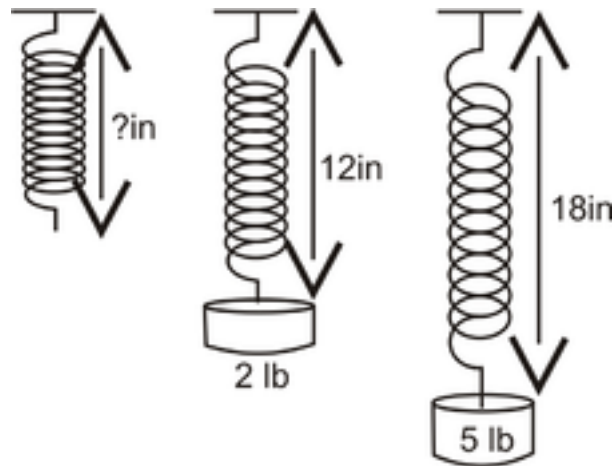
Click image to the left for more content.

(<http://www.youtube.com/watch?v=5EdbPz1ZVn0>)

1. Using the following graph, determine these values:
 - a. The amount of earnings after 40 hours
 - b. How many hours it takes to earn \$250.00
 - c. The slope of the line and what it represents
 - d. The y -intercept of the line and what it represents



2. A stretched spring has a length of 12 inches when a weight of 2 lbs is attached to it. The same spring has a length of 18 inches when a weight of 5 lbs is attached to it. It is known from physics that within certain weight limits, the function that describes how much a spring stretches with different weights is a linear function. What is the length of the spring when no weights are attached?



- A gym is offering a deal to new members. Customers can sign up by paying a registration fee of \$200 and a monthly fee of \$39. How much will this membership cost a member by the end of one year?
- A candle is burning at a linear rate. The candle measures five inches two minutes after it was lit. It measures three inches eight minutes after it was lit. What was the original length of the candle?
- Tali is trying to find the thickness of a page of his telephone book. To do this, he takes a measurement and finds out that 550 pages measure 1.25 inches. What is the thickness of one page of the phone book?
- Bobby and Petra are running a lemonade stand and they charge 45 cents for each glass of lemonade. To break even, they must make \$25. How many glasses of lemonade must they sell to break even?
- The tip for a \$78.00 restaurant bill is \$9.20. What is the tip for a \$21.50 meal?
- Karen left her house and walked at a rate of 4 miles/hour for 30 minutes. She realized she was late for school and began to jog at a rate of 5.5 miles/hour for 25 minutes. Using a graph, determine how far she is from her house at the end of 45 minutes.

Mixed Review

- Simplify $-4|-21 - 11| + 16$.
- Give an example of a direct variation equation and label its constant of variation.
- Identify the slope and y -intercept: $\frac{5}{3}x = y - 4$.
- Suppose $A = (x, y)$ is located in quadrant I. Write a rule that would move A into quadrant III.
- Find the intercepts of $0.04x + 0.06y = 18$.
- Evaluate $f(4)$ when $f(x) = \frac{3x^2}{8}$.

Summary

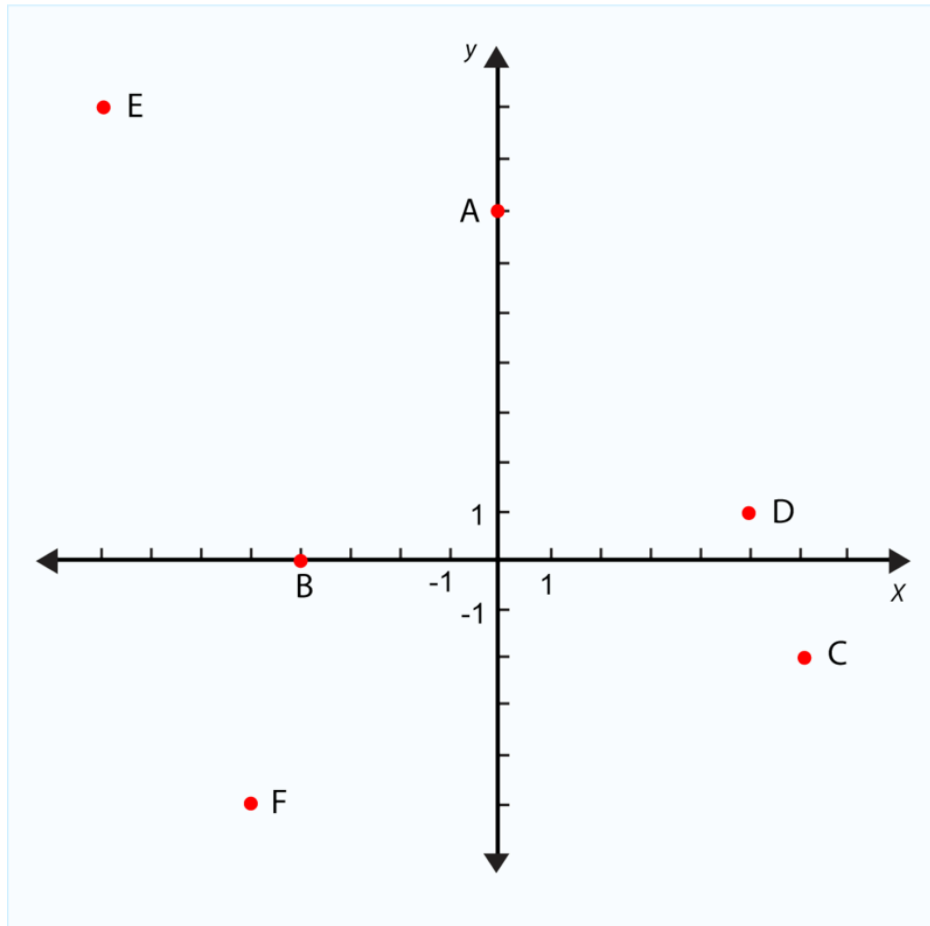
This chapter deals with graphing, including plotting points on a coordinate plane and graphing linear equations. As part of this topic, the chapter discusses horizontal and vertical graphs and analyzing linear graphs. It then moves on to intercepts and slopes, showing how to find intercepts by substituting and by using the Cover-Up Method and why slopes should be interpreted as rates of change. Slope-intercept form is also covered. Next, direct variation is talked about, and many real-world problems are solved. Finally, the chapter concludes by touching on function notation and linear functions, giving instruction on the graphs of linear functions and how to solve problems by making and reading a graph.

Graphing Linear Equations and Functions Review

Define the following words:

1. x -intercept
2. y -intercept
3. direct variation
4. parallel lines
5. rate of change

In 6 – 11, identify the coordinates using the graph below.



6. D
7. F
8. A
9. E
10. B
11. C

In 12 – 16, graph the following ordered pairs on one Cartesian Plane.

12. $(\frac{1}{2}, -4)$
13. $(-6, 1)$
14. $(0, -5)$
15. $(8, 0)$
16. $(\frac{3}{2}, \frac{8}{4})$

In 17 and 18, graph the function using the table.

TABLE 4.9:

x	y
-2	7
-1	9
0	11
1	13
2	15

18.

d	0	1	2	3	4	5	6
t	0	75	150	225	300	375	450

In 19 – 24, graph the following lines on one set of axes.

19. $y = -\frac{3}{2}$

20. $x = 4$

21. $y = 5$

22. $x = -3$

23. $x = 0$

24. $y = 0$

In 25 – 28, find the intercepts of each equation.

25. $y = 4x - 5$

26. $5x + 5y = 20$

27. $x + y = 7$

28. $8y - 16x = 48$

In 29 – 34, graph each equation using its intercepts.

29. $3x + 7y = 21$

30. $2y - 5x = 10$

31. $x - y = 4$

32. $16x + 8y = 16$

33. $x + 9y = 18$

34. $7 + y = \frac{1}{7}x$

In 35 – 44, find the slope between the sets of points.

35. (3, 20) and (19, 8)

36. (12, 5) and (12, 0)

37. $(-\frac{1}{2}, 5)$ and $(\frac{3}{2}, 3)$

38. (8, 3) and (12, 3)

39. (14, 17) and (-14, -22)

40. (1, 4) and (18, 6)

41. (10, 6) and (10, -6)

42. (-3, 2) and (19, 5)

43. (13, 9) and (2, 9)

44. (10, -1) and (-10, 6)

In 45 – 50, determine the rate of change.

45. Charlene reads 150 pages in 3 hours.
46. Benoit cuts 65 onions in 1.5 hours.
47. Brad drives 215 miles in 3.9 hours.
48. Reece completes 65 jumping jacks in one minute.
49. Harriet is charged \$48.60 for 2,430 text messages.
50. Samuel can eat 65 hotdogs in 22 minutes.

In 51 – 55, identify the slope and the y -intercept of each equation.

51. $x + y = 3$
52. $\frac{1}{3}x = 7 + y$
53. $y = \frac{2}{5}x + 3$
54. $x = 4$
55. $y = \frac{1}{4}$

In 56 – 60, graph each equation.

56. $y = \frac{5}{6}x - 1$
57. $y = x$
58. $y = -2x + 2$
59. $y = -\frac{3}{8}x + 5$
60. $y = -x + 4$

In 61 – 63, decide whether the given lines are parallel.

61. $3x + 6y = 8$ and $y = 2x - 8$
62. $y = x + 7$ and $y = -7 - x$
63. $2x + 4y = 16$ and $y = \frac{-1}{2}x + 6$

In 64 – 70, evaluate the function for the indicated value.

64. $g(n) = -2|n - 3|$; Find $g(7)$.
65. $h(a) = a^2 - 4a$; Find $h(8)$.
66. $p(t) = 3t + 1$; Find $p(\frac{1}{6})$.
67. $g(x) = 4|x|$; Find $g(-3)$.
68. $h(n) = \frac{1}{3}n - 4$; Find $h(24)$.
69. $f(x) = \frac{x+8}{6}$; Find $f(20)$.
70. $r(c) = 0.06(c) + c$; Find $r(26.99)$.
71. The distance traveled by a semi-truck varies directly with the number of hours it has been traveling. If the truck went 168 miles in 4 hours, how many miles will it go in 7 hours?
72. The function for converting Fahrenheit to Celsius is given by $C(F) = \frac{F-32}{1.8}$. What is the Celsius equivalent to $84^\circ F$?
73. Sheldon started with 32 cookies and is baking more at a rate of 12 cookies/30 minutes. After how many hours will Sheldon have 176 cookies?
74. Mixture A has a 12% concentration of acid. Mixture B has an 8% concentration of acid. How much of each mixture do you need to obtain a 60-ounce solution with 12 ounces of acid?
75. The amount of chlorine needed to treat a pool varies directly with its size. If a 5,000-gallon pool needs 5 units of chlorine, how much is needed for a 7,500-gallon pool?
76. The temperature (in Fahrenheit) outside can be predicted by crickets using the rule, "Count the number of cricket chirps in 15 seconds and add 40."

77. (i) Convert this expression to a function. Call it

78. $T(c)$

79. , where

80. $T =$

81. *temperature*

82. and

83. $c =$

84. *number of chirps in 15 seconds.*

85. (ii) Graph this function. (iii) How many chirps would you expect to hear in 15 seconds if the temperature were

86. $67^{\circ}F$

87. ? (iv) What does the

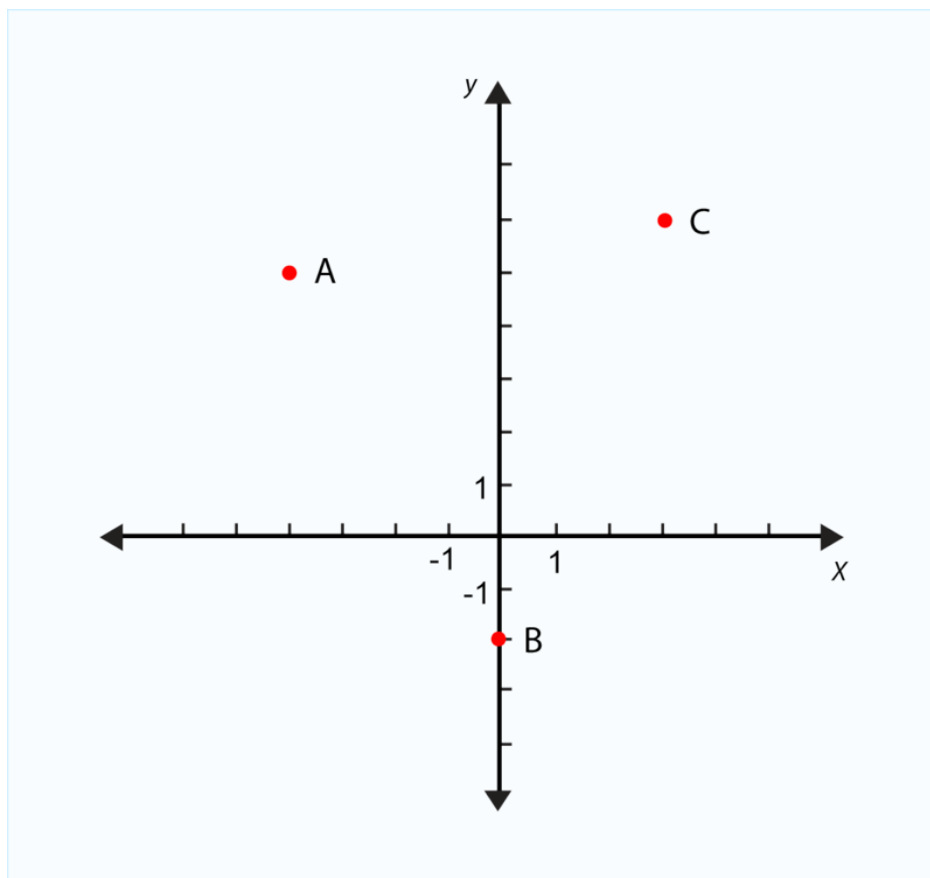
88. y -

89. intercept mean? (v) Are there values for which this graph would not predict well? Why?

Graphing Linear Equations and Functions Test

Give the location of the following ordered pairs using the graph below.

1. A
2. B
3. C



4. Graph $y = \frac{7}{3}x - 4$.
5. Find the slope between $(-3, 5)$ and $(-1.25, -2.25)$.
6. Find the intercepts of $6x + 9y = 54$.

7. In 2004, the high school graduation rate in the state of New Jersey was 86.3%. In 2008, the high school graduation rate in New Jersey was 84.6%. Determine the average rate of change. Use this information to make a conclusion regarding the graduation rate in New Jersey (source: <http://nces.ed.gov/pubs2010/2010341.pdf>).
8. Identify the slope and y -intercept of $4x + 7y = 28$.
9. Identify the slope and y -intercept of $y = \frac{-3}{5}x - 8$.
10. Graph $y = 9$.
11. Graph the line containing $(3, 5)$ and $(3, -7)$. What type of line have you created?
12. The number of cups of milk is directly proportional to the number of quarts. If 26 quarts yields 104 cups of milk, how many cups of milk is 2.75 quarts?
13. Graph the direct variation situation using the table below:

0	1	2	3	4	5	6	7
0	2.25	4.5	6.75	9	11.25	13.5	15.75

14. h varies directly as m , and when $m = 4, h = 27$. Find h when $m = -5.5$.
15. $h(n) = \frac{1}{2}|6 - n| + 11$; Find $h(25)$.
16. Are these lines parallel? $y = -2x + 1$ and $y = 2x - 1$
17. Mixture A has a 2% hydrogen solution and mixture B has a 1.5% hydrogen solution. How much of mixture B needs to be added to 6 ounces of mixture A to obtain a value of 0.51?

Texas Instruments Resources

In the CK-12 Texas Instruments Algebra I FlexBook, there are graphing calculator activities designed to supplement the objectives for some of the lessons in this chapter. See <http://www.ck12.org/flexr/chapter/9614>.

Chapter Outline

- 5.1 WRITE AN EQUATION GIVEN THE SLOPE AND A POINT
 - 5.2 WRITE AN EQUATION GIVEN TWO POINTS
 - 5.3 WRITE A FUNCTION IN SLOPE-INTERCEPT FORM
 - 5.4 LINEAR EQUATIONS IN POINT-SLOPE FORM
 - 5.5 FORMS OF LINEAR EQUATIONS
 - 5.6 APPLICATIONS USING LINEAR MODELS
 - 5.7 EQUATIONS OF PARALLEL LINES
 - 5.8 EQUATIONS OF PERPENDICULAR LINES
 - 5.9 FAMILIES OF LINES
 - 5.10 FITTING LINES TO DATA
 - 5.11 LINEAR INTERPOLATION AND EXTRAPOLATION
 - 5.12 PROBLEM SOLVING WITH LINEAR MODELS
 - 5.13 DIMENSIONAL ANALYSIS
-

Introduction

You saw in the last chapter that linear graphs and equations are used to describe a variety of real-life situations. In mathematics, the goal is to find an equation that explains a situation as presented in a problem. In this way, we can determine the rule that describes the relationship. Knowing the equation or rule is very important since it allows us to find the values for the variables. There are different ways to find the best equation to represent a problem. The methods are based on the information you can gather from the problem.

This chapter focuses on several formulas used to help write equations of linear situations, such as slope-intercept form, standard form, and point-slope form. This chapter also teaches you how to fit a line to data and how to use a fitted line to predict data.

5.1 Write an Equation Given the Slope and a Point

Here you'll be given the slope of a line and a point on the line and you'll learn to write the equation of the line.

Suppose that you sent out a text message to all of your friends, asking them what information was needed to write the equation of a line. One of your friends responded that all you need is the slope of the line and a point on the line. Do you think that your friend was correct? If so, does it matter what point you have, and how could you use this information to come up with the equation? In this Concept, you'll get answers to these questions so that you can judge the merits of your friend's advice.

Guidance

Previously, you learned how to graph solutions to two-variable equations in slope-intercept form. This Concept focuses on how to write an equation for a graphed line when given the slope and a point. There are two things you will need from the graph to write the equation in slope-intercept form:

1. The y -intercept of the graph
2. The slope of the line

Having these two pieces of information will allow you to make the appropriate substitutions in the slope-intercept formula. Recall the following:

Slope-intercept form: $y = (\text{slope})x + (\text{y-intercept})$ or $y = mx + b$

Example A

Write the equation for a line with a slope of 4 and a y -intercept of $(0, -3)$.

Solution: Slope-intercept form requires two things: the slope and y -intercept. To write the equation, you substitute the values into the formula.

$$y = (\text{slope})x + (\text{y-intercept})$$

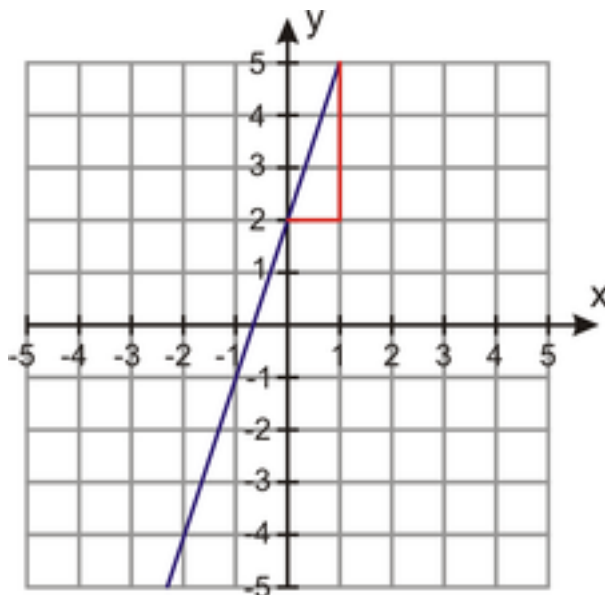
$$y = 4x + (-3)$$

$$y = 4x - 3$$

You can also use a graphed line to determine the slope and y -intercept.

Example B

Use the graph below to write an equation in slope-intercept form.

**Solution:**

The y -intercept is $(0, 2)$. Using the slope triangle, you can determine the slope is $\frac{\text{rise}}{\text{run}} = \frac{-3}{-1} = \frac{3}{1}$. Substituting the value 2 for b and the value 3 for m , the equation for this line is $y = 3x + 2$.

Writing an Equation Given the Slope and a Point

You will not always be given the y -intercept, but sometimes you will be given any point on the line. When asked to write the equation given a graph, it may be difficult to determine the y -intercept. Perhaps the y -intercept is rational instead of an integer. Maybe all you have is the slope and an ordered pair. You can use this information to write the equation in slope-intercept form. To do so, you will need to follow several steps.

Step 1: Begin by writing the formula for slope-intercept form: $y = mx + b$.

Step 2: Substitute the given slope for m .

Step 3: Use the ordered pair you are given (x, y) and substitute these values for the variables x and y in the equation.

Step 4: Solve for b (the y -intercept of the graph).

Step 5: Rewrite the original equation in Step 1, substituting the slope for m and the y -intercept for b .

Example C

Write an equation for a line with a slope of 4 that contains the ordered pair $(-1, 5)$.

Solution:

Step 1: Begin by writing the formula for slope-intercept form.

$$y = mx + b$$

Step 2: Substitute the given slope for m .

$$y = 4x + b$$

Step 3: Use the ordered pair you are given, $(-1, 5)$, and substitute these values for the variables x and y in the equation.

$$5 = (4)(-1) + b$$

Step 4: Solve for b (the y -intercept of the graph).

$$\begin{aligned}5 &= -4 + b \\5 + 4 &= -4 + 4 + b \\9 &= b\end{aligned}$$

Step 5: Rewrite $y = mx + b$, substituting the slope for m and the y -intercept for b .

$$y = 4x + 9$$

Video Review



MEDIA

Click image to the left for more content.



MEDIA

Click image to the left for more content.

Guided Practice

Write the equation for a line with a slope of -3 containing the point $(3, -5)$.

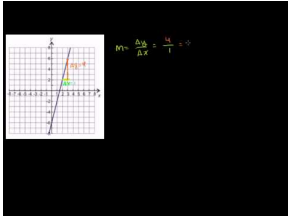
Solution:

Using the five-steps from above:

$$\begin{aligned}y &= (\text{slope})x + (\text{y-intercept}) \\y &= -3x + b \\-5 &= -3(3) + b \\-5 &= -9 + b \\4 &= b \\y &= -3x + 4\end{aligned}$$

Practice

Sample explanations for some of the practice exercises below are available by viewing the following video. Note that there is not always a match between the number of the practice exercise in the video and the number of the practice exercise listed in the following exercise set. However, the practice exercise is the same in both. [CK-12 Basic Algebra: Linear Equations in Slope-Intercept Form](#) (14:58)



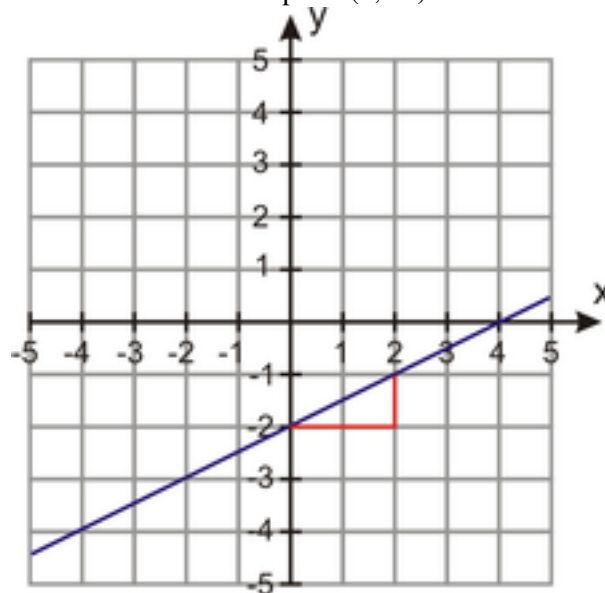
MEDIA

Click image to the left for more content.

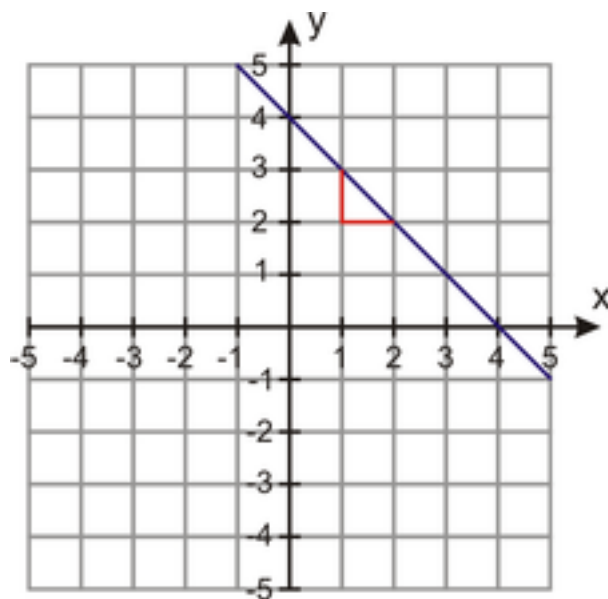
1. What is the formula for slope-intercept form? What do the variables m and b represent?
2. What are the five steps needed to determine the equation of a line given the slope and a point on the graph (not the y -intercept)?

In 3 – 13, find the equation of the line in slope–intercept form.

3. The line has a slope of 7 and a y -intercept of -2 .
4. The line has a slope of -5 and a y -intercept of 6.
5. The line has a slope of -2 and a y -intercept of 7.
6. The line has a slope of $\frac{2}{3}$ and a y -intercept of $\frac{4}{5}$.
7. The line has a slope of $-\frac{1}{4}$ and contains the point $(4, -1)$.
8. The line has a slope of $\frac{2}{3}$ and contains the point $(\frac{1}{2}, 1)$.
9. The line has a slope of -1 and contains the point $(\frac{4}{5}, 0)$.
10. The slope of the line is $-\frac{2}{3}$, and the line contains the point $(2, -2)$.
11. The slope of the line is -3 , and the line contains the point $(3, -5)$.



12.



13.

5.2 Write an Equation Given Two Points

Here you'll be given two points and you'll learn how to write the equation of the line that passes through them.

Suppose two travelers were lost in a forest. From the same spot, one person traveled 5 miles east and 10 miles south, while the other person traveled 2 miles west and 8 miles north. If a coordinate plane were transposed on top of the forest, with the line going from west to east as the x -axis and the line going from north to south as the y -axis, could you write the equation of the line that passes through the points representing the travelers' new locations? After completing this Concept, you'll be able to solve these types of problems.

Guidance

In many cases, especially real-world situations, you are given neither the slope nor the y -intercept. You might have only two points to use to determine the equation of the line.

To find an equation for a line between two points, you need two things:

1. The y -intercept of the graph
2. The slope of the line

Previously, you learned how to determine the slope between two points. Let's repeat the formula here.

The slope between any two points (x_1, y_1) and (x_2, y_2) is: $slope = \frac{y_2 - y_1}{x_2 - x_1}$.

The procedure for determining a line given two points is the same five-step process as writing an equation given the slope and a point.

Example A

Write the equation for the line containing the points $(3, 2)$ and $(-2, 4)$.

Solution: You need the slope of the line. Find the line's slope by using the formula. Choose one ordered pair to represent (x_1, y_1) and the other ordered pair to represent (x_2, y_2) .

$$slope = \frac{y_2 - y_1}{x_2 - x_1} = \frac{4 - 2}{-2 - 3} = -\frac{2}{5}$$

Now use the five-step process to find the equation for this line.

Step 1: Begin by writing the formula for slope-intercept form.

$$y = mx + b$$

Step 2: Substitute the given slope for m .

$$y = -\frac{2}{5}x + b$$

Step 3: Use one of the ordered pairs you are given, $(-2, 4)$, and substitute these values for the variables x and y in the equation.

$$4 = \left(\frac{-2}{5}\right)(-2) + b$$

Step 4: Solve for b (the y -intercept of the graph).

$$\begin{aligned} 4 &= \frac{4}{5} + b \\ 4 - \frac{4}{5} &= \frac{4}{5} - \frac{4}{5} + b \\ \frac{16}{5} &= b \end{aligned}$$

Step 5: Rewrite $y = mx + b$, substituting the slope for m and the y -intercept for b .

$$y = \frac{-2}{5}x + \frac{16}{5}$$

Example B

Write the equation for a line containing the points $(-4, 1)$ and $(-2, 3)$.

Solution:

1. Start with the slope-intercept form of the line, $y = mx + b$.
2. Find the slope of the line: $m = \frac{y_2 - y_1}{x_2 - x_1} = \frac{3 - 1}{-2 - (-4)} = \frac{2}{2} = 1$.
3. Substitute the value of the slope for m : $y = (1)x + b$.
4. Substitute the coordinates $(-2, 3)$ into the equation for the variables x and y : $3 = -2 + b \Rightarrow b = 5$.
5. Rewrite the equation, substituting the slope for m and the y -intercept for b : $y = x + 5$.

Example C

Write the equation of the line containing the points $(3, 6)$ and $(-2, 6)$.

Solution:

1. Start with the slope-intercept form of the line $y = mx + b$.
2. Find the slope of the line: $m = \frac{y_2 - y_1}{x_2 - x_1} = \frac{6 - 6}{-2 - (3)} = \frac{0}{-5} = 0$.
3. Substitute the value of the slope in for m : $y = (0)x + b \Rightarrow y = b$.

Notice that this is an equation where y equals some number. This means it is a horizontal line. This makes sense since the slope is zero and a horizontal line has a slope of zero.

1. Substitute the coordinates $(3, 6)$ into the equation for the variables x and y : $6 = (0)3 + b \Rightarrow b = 6$.
2. Rewrite the equation, substituting the slope for m and the y -intercept for b : $y = 6$.

We can see when this will happen in the future, without having to do all the work. Because the two y values were the same, this must be a horizontal line.

Video Review



MEDIA

Click image to the left for more content.



MEDIA

Click image to the left for more content.

Guided Practice

Write the equation of the line containing the points (2, -3) and (2, 10).

Solution:

In this case, notice that the two x values are the same. What does this mean? Remember, that for a vertical line, the x value stays the same no matter what the y value is.

Since we are trying to write an equation of a line, and in both cases $x = 2$, we can conclude that our equation is:

$$x = 2$$

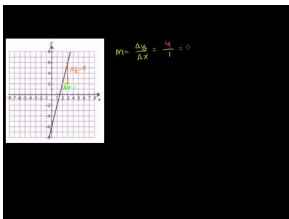
Note: If we were to calculate the slope of the line given the two points, we would get the following:

$$m = \frac{y_2 - y_1}{x_2 - x_1} = \frac{-3 - (-2)}{2 - (2)} = \frac{-1}{0} = \text{undefined.}$$

Since our slope is undefined, it must be a vertical line. We would come to the same conclusion that this is a vertical line where $x = 2$.

Practice

Sample explanations for some of the practice exercises below are available by viewing the following video. Note that there is not always a match between the number of the practice exercise in the video and the number of the practice exercise listed in the following exercise set. However, the practice exercise is the same in both. [CK-12 Basic Algebra: Linear Equations in Slope-Intercept Form](#) (14:58)



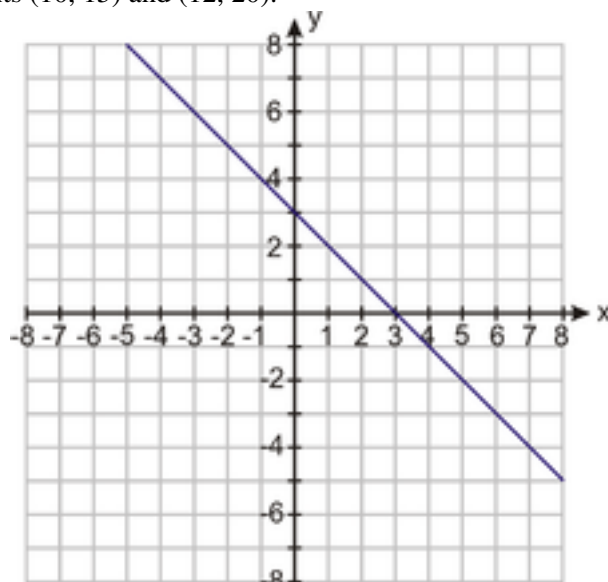
MEDIA

Click image to the left for more content.

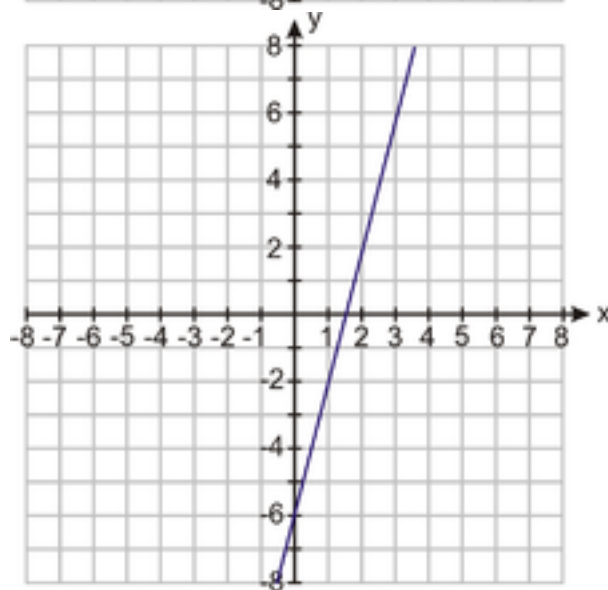
1. What is the first step in finding the equation of a line given two points?

In 2 – 7, find the equation of the line in slope–intercept form.

2. The line containing the points (2, 6) and (5, 0).
3. The line containing the points (5, -2) and (8, 4).
4. The line containing the points (3, 5) and (-3, 0).
5. The line containing the points (10, 15) and (12, 20).



6.



7.

Mixed Review

8. Translate into an algebraic sentence: *One-third of a number is seven less than that number.*
9. The perimeter of a square is 67 cm. What is the length of its side?
10. A hockey team played 17 games. They won two more than they lost. They lost 3 more than they tied. How many games did they win, lose, and tie?
11. Simplify $\frac{(30-4+4\div 2)\div(21\div 3)}{2}$.
12. What is the opposite of 16.76?
13. Graph the following on a number line: $\{6, \frac{11}{3}, -5.65, \frac{21}{7}\}$.
14. Simplify: $[(-4 + 4.5) + (18 - |-13|) + (-3.3)]$.

5.3 Write a Function in Slope-Intercept Form

Here you'll learn how to write the slope-intercept form of linear functions and how to work with functions in this form.

What if the linear function $W(g)$ represented a family's monthly water bill, with g as the number of gallons of water used. If you knew what the function was, could you find $W(25)$? How about if you knew the slope of the function and the value of $W(25)$? Could you determine what the function was? Suppose you knew the values of $W(25)$ and $W(50)$. Could you determine the function in this case? After completing this Concept, you'll be able to perform tasks like these.

Guidance

Remember that a linear function has the form $f(x) = mx + b$. Here $f(x)$ represents the y values of the equation or the graph. So $y = f(x)$ and they are often used interchangeably. Using the functional notation in an equation often provides you with more information.

For instance, the expression $f(x) = mx + b$ shows clearly that x is the independent variable because you **substitute** values of x into the function and perform a series of operations on the value of x in order to calculate the values of the dependent variable, y .

$$y = f(x) = mx + b$$

In this case when you substitute x into the function, the function tells you to multiply it by m and then add b to the result. This process generates all the values of y you need.

Example A

Consider the function $f(x) = 3x - 4$. Find $f(2)$, $f(0)$, and $f(-1)$.

Solution:

Each number in parentheses is a value of x that you need to substitute into the equation of the function.

$$f(2) = 3(2) - 4 = 6 - 4 = 2 \quad f(0) = 3(0) - 4 = 0 - 4 = -4 \quad f(-1) = 3(-1) - 4 = -3 - 4 = -7$$

$$f(2) = 2; f(0) = -4; \text{ and } f(-1) = -7$$

Function notation tells you much more than the value of the independent variable. It also indicates a point on the graph. For example, in the above example, $f(-1) = -7$. This means the ordered pair $(-1, -7)$ is a solution to $f(x) = 3x - 4$ and appears on the graphed line. You can use this information to write an equation for a function.

Example B

Write an equation for a line with $m = 3.5$ and $f(-2) = 1$.

Solution:

You know the slope, and you know a point on the graph, $(-2, 1)$. Using the methods presented in this Concept, write the equation for the line.

Begin with slope-intercept form.

	$y = mx + b$
Substitute the value for the slope.	$y = 3.5x + b$
Use the ordered pair to solve for b .	$1 = 3.5(-2) + b$
	$b = 8$
Rewrite the equation.	$y = 3.5x + 8$
or	$f(x) = 3.5x + 8$

Example C

Write an equation for a line with $f(-1) = 2$ and $f(5) = 20$.

Solution:

You know two points on the graph. Using the methods presented in the previous Concept, write the equation for the line. First, you must find the slope:

$$m = \frac{y_2 - y_1}{x_2 - x_1} = \frac{20 - 2}{5 - (-1)} = \frac{18}{6} = 3.$$

Now use the slope-intercept form:

	$y = mx + b$
Substitute the value for the slope.	$y = 3x + b$
Use the ordered pair to solve for b .	$2 = 3(-1) + b$
	$b = 5$
Rewrite the equation.	$y = 3x + 5$
or	$f(x) = 3x + 5$

Video Review**MEDIA**

Click image to the left for more content.



MEDIA

Click image to the left for more content.

Guided Practice

Write an equation for a line with $f(0) = 2$ and $f(3) = -4$ and use it to find $f(-5)$, $f(2)$, $f(0)$, and $f(z)$.

Solution:

Notice that the first point given as an input value is 0, and the output is 2, which means the point is (0,2). This is the y-intercept. So, all we have to do is find the slope and then plug both values into the slope-intercept form:

$$m = \frac{y_2 - y_1}{x_2 - x_1} = \frac{-4 - 2}{3 - 0} = \frac{-6}{3} = -2.$$

Now use the slope-intercept form.

	$y = mx + b$
Substitute the value for the slope.	$y = -2x + b$
Substitute the value for the y-intercept	$y = -2x + 2$
or	$f(x) = -2x + 2$

Now we find the values of $f(-5)$, $f(2)$, $f(0)$, and $f(z)$ for $f(x) = -2x + 2$.

$$f(-5) = -2(-5) + 2 = 10 + 2 = 12$$

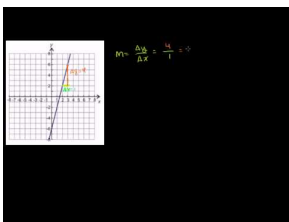
$$f(2) = -2(2) + 2 = -2$$

$$f(0) = -2(0) + 2 = 2$$

$$f(z) = -2z + 2$$

Practice

Sample explanations for some of the practice exercises below are available by viewing the following video. Note that there is not always a match between the number of the practice exercise in the video and the number of the practice exercise listed in the following exercise set. However, the practice exercise is the same in both. [CK-12 Basic Algebra: Linear Equations in Slope-Intercept Form](#) (14:58)



MEDIA

Click image to the left for more content.

1. Consider the function $f(x) = -2x - 3$. Find $f(-3)$, $f(0)$, and $f(5)$.
2. Consider the function $f(x) = \frac{2}{3}x + 10$. Find $f(-9)$, $f(0)$, and $f(9)$.

In 3 – 10, find the equation of the linear function in slope–intercept form.

3. $m = 5, f(0) = -3$
4. $m = -2, f(0) = 5$
5. $m = -7, f(2) = -1$
6. $m = \frac{1}{3}, f(-1) = \frac{2}{3}$
7. $m = 4.2, f(-3) = 7.1$
8. $f\left(\frac{1}{4}\right) = \frac{3}{4}, f(0) = \frac{5}{4}$
9. $f(1.5) = -3, f(-1) = 2$
10. $f(-1) = 1, f(1) = -1$

Mixed Review

11. Translate into a sentence: $4(j + 2) = 400$.
12. Evaluate $0.45 \cdot 0.25 - 24 \div \frac{1}{4}$.
13. The formula to convert Fahrenheit to Celsius is $C(F) = \frac{F-32}{1.8}$. What is the Celsius equivalent to $35^\circ F$?
14. Find the rate of change: The diver dove 120 meters in 3 minutes.
15. What percent of 87.4 is 106?
16. Find the percent of change: The original price was \$25.00. The new price is \$40.63.
17. Solve for w : $606 = 0.045(w - 4000) + 0.07w$.

5.4 Linear Equations in Point-Slope Form

Here you'll learn how to work with linear equations and functions in point-slope form.

Suppose that the cost of a wedding was a function of the number of guests attending. If you knew the slope of the function and you also knew how much the wedding would cost if 150 guests attended, could you write a linear equation representing this situation? If so, what form of the equation would be easiest to use? In this Concept, you'll learn about the point-slope form of a linear equation so that you can answer questions like these.

Guidance

Equations can be written in many forms. The previous Concepts taught you how to write equations of lines in slope-intercept form. This Concept will provide a second way to write an equation of a line: **point-slope form**.

The equation of the line between any two points (x_1, y_1) and (x_2, y_2) can be written in the following form: $y - y_1 = m(x - x_1)$.

To write an equation in point-slope form, you need two things:

1. The slope of the line
2. A point on the line

Example A

Write an equation for a line containing $(9, 3)$ and $(4, 5)$.

Solution: Begin by finding the slope.

$$\text{slope} = \frac{y_2 - y_1}{x_2 - x_1} = \frac{5 - 3}{4 - 9} = -\frac{2}{5}$$

Instead of trying to find b (the y -intercept), you will use the point-slope formula.

$$\begin{aligned}y - y_1 &= m(x - x_1) \\y - 3 &= \frac{-2}{5}(x - 9)\end{aligned}$$

It doesn't matter which point you use.

You could also use the other ordered pair to write the equation:

$$y - 5 = \frac{-2}{5}(x - 4)$$

These equations may look completely different, but by solving each one for y , you can compare the slope-intercept form to check your answer.

$$y - 3 = \frac{-2}{5}(x - 9) \Rightarrow y = \frac{-2}{5}x + \frac{18}{5} + 3$$

$$y = \frac{-2}{5}x + \frac{33}{5}$$

$$y - 5 = \frac{-2}{5}(x - 4)$$

$$y = \frac{-2}{5}x + \frac{8}{5} + 5$$

$$y = \frac{-2}{5}x + \frac{33}{5}$$

This process is called **rewriting in slope-intercept form**.

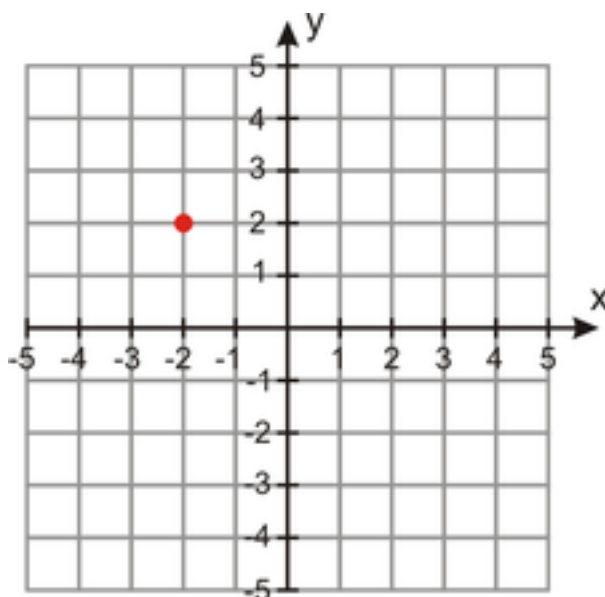
Graphing Equations Using Point-Slope Form

If you are given an equation in point-slope form, it is not necessary to re-write it in slope-intercept form in order to graph it. The point-slope form of the equation gives you enough information so you can graph the line.

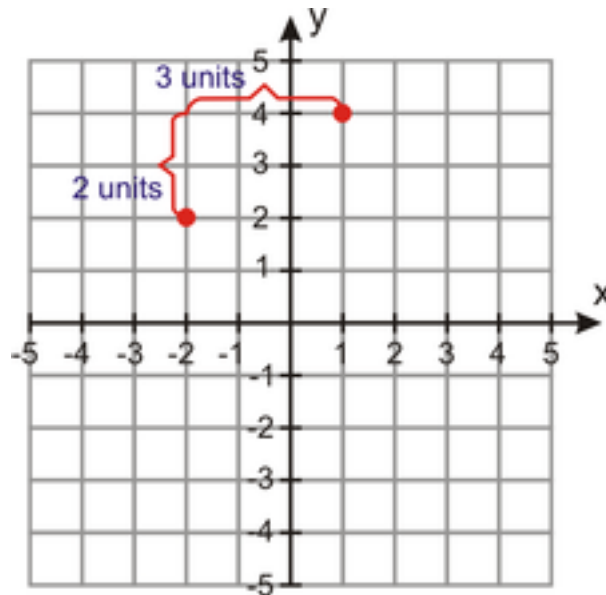
Example B

Make a graph of the line given by the equation $y - 2 = \frac{2}{3}(x + 2)$.

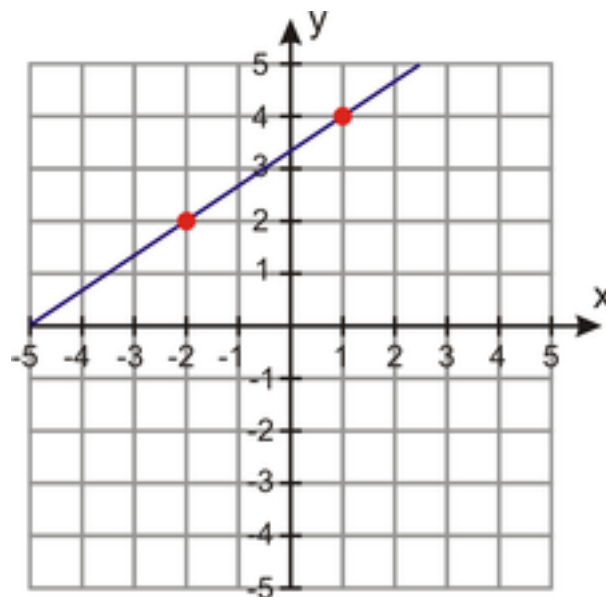
Solution: Begin by rewriting the equation to make it point-slope form: $y - 2 = \frac{2}{3}(x - (-2))$ Now we see that point $(-2, 2)$ is on the line and that the slope $= \frac{2}{3}$. First plot point $(-2, 2)$ on the graph.



A slope of $\frac{2}{3}$ tells you that from your point you should move 2 units up and 3 units to the right and draw another point.



Now draw a line through the two points and extend the line in both directions.



Writing a Linear Function in Point-Slope Form

Remember from the previous Concept that $f(x)$ and y are used interchangeably. Therefore, to write a function in point-slope form, you replace $y - y_1$ with $f(x) - y_1$.

Example C

Write the equation of the linear function in point-slope form.

$$m = 9.8 \text{ and } f(5.5) = 12.5$$

Solution: This function has a slope of 9.8 and contains the ordered pair (5.5, 12.5). Substituting the appropriate values into point-slope form, we get the following:

$$y - 12.5 = 9.8(x - 5.5)$$

Replacing $y - y_1$ with $f(x) - y_1$, the equation in point-slope form is:

$$\begin{aligned}f(x) - 12.5 &= 9.8(x - 5.5) \\f(x) - 12.5 &= 9.8x - 53.9 \\f(x) &= 9.8x - 41.4\end{aligned}$$

where the last equation is in slope-intercept form.

Video Review



MEDIA

Click image to the left for more content.



MEDIA

Click image to the left for more content.

Guided Practice

Rewrite $y - 5 = 3(x - 2)$ in slope-intercept form.

Solution: Use the Distributive Property to simplify the right side of the equation:

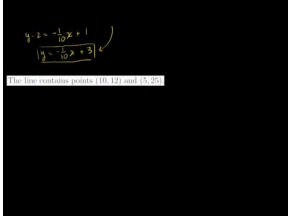
$$y - 5 = 3x - 6$$

Solve for y :

$$\begin{aligned}y - 5 + 5 &= 3x - 6 + 5 \\y &= 3x - 1\end{aligned}$$

Practice

Sample explanations for some of the practice exercises below are available by viewing the following video. Note that there is not always a match between the number of the practice exercise in the video and the number of the practice exercise listed in the following exercise set. However, the practice exercise is the same in both. [CK-12 Basic Algebra: Linear Equations in Point-Slope Form \(9:38\)](#)



MEDIA

Click image to the left for more content.

1. What is the equation for a line containing the points (x_1, y_1) and (x_2, y_2) in point-slope form?
2. In what ways is it easier to use point-slope form rather than slope-intercept form?

In 3 - 13, write the equation for the line in point-slope form.

3. The slope is $\frac{1}{3}$; the y -intercept is -4 .
4. The slope is $-\frac{1}{10}$ and contains the point $(10, 2)$.
5. The slope is -75 and contains the point $(0, 125)$.
6. The slope is 10 and contains the point $(8, -2)$.
7. The line contains the points $(-2, 3)$ and $(-1, -2)$.
8. The line contains the points $(0, 0)$ and $(1, 2)$.
9. The line contains the points $(10, 12)$ and $(5, 25)$.
10. The line contains the points $(2, 3)$ and $(0, 3)$.
11. The line has a slope of $\frac{3}{5}$ and a y -intercept of -3 .
12. The line has a slope of -6 and a y -intercept of 0.5 .
13. The line contains the points $(-4, -2)$ and $(8, 12)$.

In 14 - 17, write each equation in slope-intercept form.

14. $y - 2 = 3(x - 1)$
15. $y + 4 = \frac{-2}{3}(x + 6)$
16. $0 = x + 5$
17. $y = \frac{1}{4}(x - 24)$

In 18 - 25, write the equation of the linear function in point-slope form.

18. $m = -\frac{1}{5}$ and $f(0) = 7$
19. $m = -12$ and $f(-2) = 5$
20. $f(-7) = 5$ and $f(3) = -4$
21. $f(6) = 0$ and $f(0) = 6$
22. $m = 3$ and $f(2) = -9$
23. $m = -\frac{9}{5}$ and $f(0) = 32$
24. $m = 25$ and $f(0) = 250$
25. $f(32) = 0$ and $f(77) = 25$

5.5 Forms of Linear Equations

Here you'll learn about the standard form of a linear equation and how to find the slope and y -intercept of an equation in this form.

Suppose that you go to a website that allows you to enter two points and that returns the equation of the line that passes through these points. The only problem is that the website returns the equation in the form $Ax + By = C$, where A , B , and C are integers and A and B are not both zero. You wanted to know the slope and y -intercept of the line, so what should you do now? In this Concept, you'll find out what to do by learning about the standard form of a linear equation and how to find the slope and y -intercept of an equation in this form.

Guidance

As the previous few lessons have shown, there are several ways to write a linear equation. This Concept introduces another method: **standard form**. You have already seen examples of standard form equations in a previous Concept. For example, here are some equations written in standard form.

$$\begin{aligned}0.75(h) + 1.25(b) &= 30 \\7x - 3y &= 21 \\2x + 3y &= -6\end{aligned}$$

The **standard form** of a linear equation has the form $Ax + By = C$, where A , B , and C are integers and A and B are **not both zero**.

Equations written in standard form do not have fractional **coefficients** and the variables are written on the same side of the equation.

You should be able to rewrite any of the formulas in an alternate form.

$$\begin{aligned}\textit{Slope - intercept form} &\leftrightarrow \textit{Standard form} \\ \textit{Slope - intercept form} &\leftrightarrow \textit{Point - slope form} \\ \textit{Point - slope form} &\leftrightarrow \textit{Standard form}\end{aligned}$$

Example A

Rewrite $\frac{3}{4}(h) + \frac{5}{4}(b) = 30$ in standard form.

Solution: According to the definition of standard form, the coefficients must be integers. So we need to **clear the fractions** of the denominator using multiplication.

$$\begin{aligned}\frac{3}{4}h + \frac{5}{4}b = 30 &\rightarrow 4\left(\frac{3}{4}h + \frac{5}{4}b\right) = 4(30) \\ 3h + 5b &= 120\end{aligned}$$

This equation is now in standard form: $A = 3$, $B = 5$, and $C = 120$.

Example B

Rewrite $y - 5 = 3(x - 2)$ in standard form.

Solution: Use the Distributive Property to simplify the right side of the equation.

$$y - 5 = 3x - 6$$

Rewrite this equation so the variables x and y are on the same side of the equation.

$$y - 5 + 6 = 3x - 6 + 6$$

$$y - y + 1 = 3x - y$$

$$1 = 3x - y,$$

$$\text{where } A = 3, B = -1, \text{ and } C = 1.$$

Finding Slope and y -Intercept of a Standard Form Equation

Slope-intercept form and point-slope form of a linear equation both contain the slope of the equation explicitly, but the standard form does not. Since the slope is such an important feature of a line, it is useful to figure out how you would find the slope if you were given the equation of the line in standard form.

Begin with standard form: $Ax + By = C$.

If you rewrite this equation in slope-intercept form, it becomes:

$$Ax - Ax + By = C - Ax$$

$$\frac{By}{B} = \frac{-Ax + C}{B}$$

$$y = \frac{-A}{B}x + \frac{C}{B}$$

When you compare this form to slope-intercept form, $y = mx + b$, you can see that the slope of a standard form equation is $\frac{-A}{B}$ and the y -intercept is $\frac{C}{B}$.

The **standard form** of a linear equation, $Ax + By = C$, has the following:

$$\text{slope} = \frac{-A}{B} \text{ and } y\text{-intercept} = \frac{C}{B}.$$

Example C

Find the slope and y -intercept of $2x - 3y = -8$.

Solution: Using the definition of standard form, $A = 2$, $B = -3$, and $C = -8$.

$$\text{slope} = \frac{-A}{B} = \frac{-2}{-3} \rightarrow \frac{2}{3}$$

$$y\text{-intercept} = \frac{C}{B} = \frac{-8}{-3} \rightarrow \frac{8}{3}$$

The slope is $\frac{2}{3}$ and the y -intercept is $\frac{8}{3}$.

Video Review



MEDIA

Click image to the left for more content.



MEDIA

Click image to the left for more content.

Guided Practice

Rewrite the following in standard form.

- $5x - 7 = y$
- $0.75h + 1.25b = 30$

Solutions:

- Rewrite this equation so the variables x and y are on the same side of the equation.

$$5x - 7 + 7 = y + 7$$

$$5x - y = y - y + 7$$

$$5x - y = 7,$$

$$\text{where } A = 5, B = -1, \text{ and } C = 7.$$

- This equation is almost in the form already, since the two variables are on the same side, and the number is on the opposite side. What this equation needs is to have integer coefficients. In this example, we will **clear the decimals**, which is similar to **clearing fractions**. What can we multiply by 0.75 and 1.25 to make them be integers? Since each decimal goes to the hundredths place, we need to multiply each by 100.

$$0.75h + 1.25b = 30$$

$$100 \cdot (0.75h + 1.25b) = 100 \cdot (30)$$

$$75h + 125b = 3000,$$

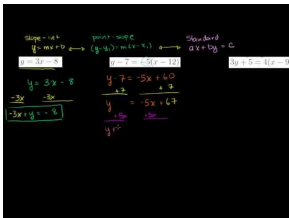
$$\text{where } A = 75, B = 125, \text{ and } C = 3000.$$

Note: Technically, A and B can go with either variable, and can just be thought of as the two coefficients in front of the two variables. Usually, we have A in front of x and B in front of y . But this is just something mathematicians choose to do to be consistent. Since our variables are not x and y , A and B can go with either variable.

Practice

Sample explanations for some of the practice exercises below are available by viewing the following video. Note that there is not always a match between the number of the practice exercise in the video and the number of the

practice exercise listed in the following exercise set. However, the practice exercise is the same in both. [CK-12 Basic Algebra: Linear Equations in Standard Form \(10:08\)](#)



MEDIA

Click image to the left for more content.

1. What is the standard form of a linear equation? What do A , B , and C represent?
2. What is the meaning of “clear the fractions”? How would you go about doing so?
3. Consider the equation $Ax + By = C$. What are the slope and y -intercept of this equation?

Rewrite the following equations in standard form.

4. $y = 3x - 8$
5. $y = -x - 6$
6. $y = \frac{5}{3}x - 4$
7. $0.30x + 0.70y = 15$
8. $5 = \frac{1}{6}x - y$
9. $y - 7 = -5(x - 12)$
10. $2y = 6x + 9$
11. $y = \frac{9}{4}x + \frac{1}{4}$
12. $y + \frac{3}{5} = \frac{2}{3}(x - 2)$
13. $3y + 5 = 4(x - 9)$

Find the slope and y -intercept of the following lines.

14. $5x - 2y = 15$
15. $3x + 6y = 25$
16. $x - 8y = 12$
17. $3x - 7y = 20$
18. $9x - 9y = 4$
19. $6x + y = 3$
20. $x - y = 9$
21. $8x + 3y = 15$
22. $4x + 9y = 1$

In 23 – 27, write each equation in standard form by first writing it in point-slope form.

23. Slope = -1 through point $(-3, 5)$
24. Slope = $-\frac{1}{4}$ through point $(4, 0)$
25. Line through $(5, -2)$ and $(-5, 4)$
26. Line through $(-3, -2)$ and $(5, 1)$
27. Line through $(1, -1)$ and $(5, 2)$

5.6 Applications Using Linear Models

Here you'll learn how to solve real-world problems using linear equations and how to decide which form of a linear equation is easiest to use in a given situation.

Suppose a movie rental service charges a fixed fee per month and also charges \$3.00 per movie rented. Last month you rented 8 movies, and your monthly bill was \$30.00. Could you write a linear equation to model this situation? Would slope-intercept form, point-slope form, or standard form be easiest to use? In this Concept, you'll learn to solve real-world problems such as this one using linear models, and you'll also learn to decide which form of a linear equation is easiest to use in a given situation.

Guidance

Let's apply the methods we learned in previous lessons to a few application problems that can be modeled using a linear relationship.

Example A

Nadia has \$200 in her savings account. She gets a job that pays \$7.50 per hour and she deposits all her earnings in her savings account. Write the equation describing this problem in slope–intercept form. How many hours would Nadia need to work to have \$500 in her account?



Solution: Begin by defining the variables:

y = amount of money in Nadia's savings account

x = number of hours

The problem gives the y -intercept and the slope of the equation.

We are told that Nadia has \$200 in her savings account, so $b = 200$.

We are told that Nadia has a job that pays \$7.50 per hour, so $m = 7.50$.

By substituting these values into slope–intercept form, $y = mx + b$, we obtain $y = 7.5x + 200$.

To answer the question, substitute \$500 for the value of y and solve.

$$500 = 7.5x + 200 \Rightarrow 7.5x = 300 \Rightarrow x = 40$$

Nadia must work 40 hours if she is to have \$500 in her account.

Example B

Marciel rented a moving truck for the day. Marciel remembers only that the rental truck company charges \$40 per day and some amount of cents per mile. Marciel drives 46 miles and the final amount of the bill (before tax) is \$63. What is the amount per mile the truck rental company charges? Write an equation in point-slope form that describes this situation. How much would it cost to rent this truck if Marciel drove 220 miles?



Solution: Define the variables: x = distance in miles; y = cost of the rental truck in dollars. There are two ordered pairs: (0, 40) and (46, 63).

Step 1: Begin by finding the slope: $\frac{63-40}{46-0} = \frac{23}{46} = \frac{1}{2}$.

Step 2: Substitute the slope for m and one of the coordinates for (x_1, y_1) .

$$y - 40 = \frac{1}{2}(x - 0)$$

To find out how much will it cost to rent the truck for 220 miles, substitute 220 for the variable x .

$$y - 40 = \frac{1}{2}(220 - 0)$$

$$y - 40 = 0.5(220) \Rightarrow y = \$150$$

Example C

Nimitha buys fruit at her local farmer's market. This Saturday, oranges cost \$2 per pound and cherries cost \$3 per pound. She has \$12 to spend on fruit. Write an equation in standard form that describes this situation. If she buys 4 pounds of oranges, how many pounds of cherries can she buy?



Solution: Define the variables: x = pounds of oranges and y = pounds of cherries.

The equation that describes this situation is: $2x + 3y = 12$

If she buys 4 pounds of oranges, we substitute $x = 4$ into the equation and solve for y .

$2(4) + 3y = 12 \Rightarrow 3y = 12 - 8 \Rightarrow 3y = 4 \Rightarrow y = \frac{4}{3}$. Nimitha can buy $1\frac{1}{3}$ pounds of cherries.

Video Review



MEDIA

Click image to the left for more content.



MEDIA

Click image to the left for more content.

Guided Practice

1. A stalk of bamboo of the family *Phyllostachys nigra* grows at steady rate of 12 inches per day and achieves its full height of 720 inches in 60 days. Write the equation describing this problem in slope–intercept form. How tall is the bamboo 12 days after it started growing?
2. Jethro skateboards part of the way to school and walks for the rest of the way. He can skateboard at 7 miles per hour and he can walk at 3 miles per hour. The distance to school is 6 miles. Write an equation in standard form that describes this situation. If Jethro skateboards for $\frac{1}{2}$ of an hour, how long does he need to walk to get to school?



Solutions:

1. Define the variables.

y = the height of the bamboo plant in inches

x = number of days

The problem gives the slope of the equation and a point on the line.

The bamboo grows at a rate of 12 inches per day, so $m = 12$.

We are told that the plant grows to 720 inches in 60 days, so we have the point (60, 720).

Start with the slope-intercept form of the line.	$y = mx + b$
Substitute 12 for the slope.	$y = 12x + b$
Substitute the point (60, 720).	$720 = 12(60) + b \Rightarrow b = 0$
Substitute the value of b back into the equation.	$y = 12x$

To answer the question, substitute the value $x = 12$ to obtain $y = 12(12) = 144$ inches.

The bamboo is 144 inches 12 days after it starts growing.

2. Define the variables: x = hours Jethro skateboards and y = hours Jethro walks.

The equation that describes this situation is $7x + 3y = 6$.

If Jethro skateboards $\frac{1}{2}$ of an hour, we substitute $x = 0.5$ into the equation and solve for y .

$7(0.5) + 3y = 6 \Rightarrow 3y = 6 - 3.5 \Rightarrow 3y = 2.5 \Rightarrow y = \frac{5}{6}$. Jethro must walk $\frac{5}{6}$ of an hour.

Practice

- To buy a car, Andrew puts in a down payment of \$1500 and pays \$350 per month in installments. Write an equation describing this problem in slope-intercept form. How much money has Andrew paid at the end of one year?
- Anne transplants a rose seedling in her garden. She wants to track the growth of the rose, so she measures its height every week. In the third week, she finds that the rose is 10 inches tall and in the eleventh week she finds that the rose is 14 inches tall. Assuming the rose grows linearly with time, write an equation describing this problem in slope-intercept form. What was the height of the rose when Anne planted it?
- Ravi hangs from a giant exercise spring whose length is 5 m. When his child Nimi hangs from the spring, his length is 2 m. Ravi weighs 160 lbs. and Nimi weighs 40 lbs. Write the equation for this problem in slope-intercept form. What should we expect the length of the spring to be when his wife Amardeep, who weighs 140 lbs., hangs from it?
- Petra is testing a bungee cord. She ties one end of the bungee cord to the top of a bridge and to the other end she ties different weights. She then measures how far the bungee stretches. She finds that for a weight of 100 lbs., the bungee stretches to 265 feet and for a weight of 120 lbs., the bungee stretches to 275 feet. Physics tells us that in a certain range of values, including the ones given here, the amount of stretch is a linear function of the weight. Write the equation describing this problem in slope-intercept form. What should we expect the stretched length of the cord to be for a weight of 150 lbs?
- Nadia is placing different weights on a spring and measuring the length of the stretched spring. She finds that for a 100 gram weight the length of the stretched spring is 20 cm and for a 300 gram weight the length of the stretched spring is 25 cm. Write an equation in point-slope form that describes this situation. What is the unstretched length of the spring?
- Andrew is a submarine commander. He decides to surface his submarine to periscope depth. It takes him 20 minutes to get from a depth of 400 feet to a depth of 50 feet. Write an equation in point-slope form that describes this situation. What was the submarine's depth five minutes after it started surfacing?
- Anne got a job selling window shades. She receives a monthly base salary and a \$6 commission for each window shade she sells. At the end of the month, she adds up her sales and she figures out that she sold 200 window shades and made \$2500. Write an equation in point-slope form that describes this situation. How much is Anne's monthly base salary?
- The farmer's market sells tomatoes and corn. Tomatoes are selling for \$1.29 per pound and corn is selling for \$3.25 per pound. If you buy 6 pounds of tomatoes, how many pounds of corn can you buy if your total spending cash is \$11.61?
- The local church is hosting a Friday night fish fry for Lent. They sell a fried fish dinner for \$7.50 and a baked

fish dinner for \$8.25. The church sold 130 fried fish dinners and took in \$2,336.25. How many baked fish dinners were sold?

10. Andrew has two part-time jobs. One pays \$6 per hour and the other pays \$10 per hour. He wants to make \$366 per week. Write an equation in standard form that describes this situation. If he is only allowed to work 15 hours per week at the \$10 per hour job, how many hours does he need to work per week at his \$6 per hour job in order to achieve his goal?
11. Anne invests money in two accounts. One account returns 5% annual interest and the other returns 7% annual interest. In order not to incur a tax penalty, she can make no more than \$400 in interest per year. Write an equation in standard form that describes this problem. If she invests \$5000 in the 5% interest account, how much money does she need to invest in the other account?

Mixed Review

12. Write the following equation in slope-intercept form: $y - 2 = 6(x - 3)$.
13. Solve for p : $\frac{p-2}{7} = \frac{p+1}{6}$.
14. Describe the graph of $x = 1.5$.
15. Tell whether $(4, -3)$ is a solution to $5x + 3y = 9$.
16. Give the coordinates of a point located in quadrant III.
17. Find the slope between $(6, 6)$ and $(16, 6)$.
18. Graph the equation $y = \frac{5}{9}x - 7$.

5.7 Equations of Parallel Lines

Here you'll learn to tell if two lines are parallel, and given the equation of a line, you'll learn how to find the equation of a second line that is parallel to it, as long as you know a point on the second line.

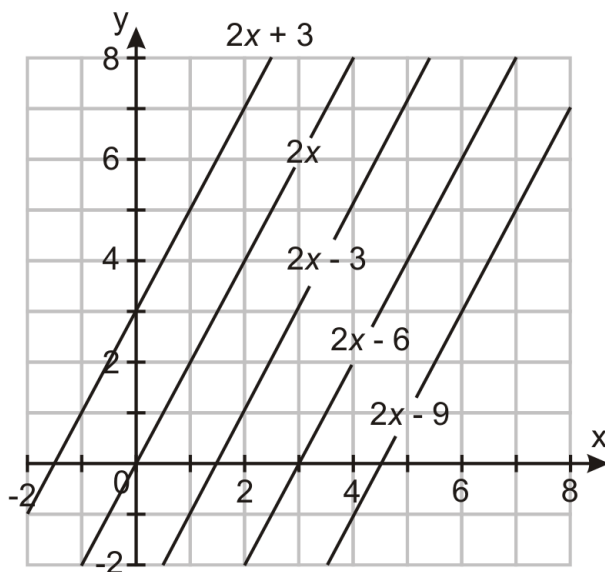
Suppose a coordinate plane were transposed over the map of a city, and Main Street had the equation $y = 2x + 5$. If Broad Street ran parallel to Main Street, and it passed through the point $(3, 14)$, what would be the equation of Broad Street? How do you know? In this Concept, given the equation of one line, you'll learn how to find the equation of a second line that is parallel to the first line, as long as you know a point that the second line passes through.

Guidance

In a previous Concept, you learned how to identify parallel lines.

Parallel lines have the same slope.

Each of the graphs below have the same slope, which is 2. According to the definition, all these lines are parallel.



Example A

Are $y = \frac{1}{3}x - 4$ and $-3x + 9y = 18$ parallel?

Solution: The slope of the first line is $\frac{1}{3}$. Any line parallel to this must also have a slope of $\frac{1}{3}$.

Find the slope of the second equation: $A = -3$ and $B = 9$.

$$\text{slope} = \frac{-A}{B} = \frac{3}{9} \rightarrow \frac{1}{3}$$

These two lines have the same slope so they are parallel.

Writing Equations of Parallel Lines

Sometimes, you will be asked to write the equation of a line parallel to a given line that goes through a given point. In the following example, you will see how to do this.

Example B

Find the equation parallel to the line $y = 6x - 9$ passing through $(-1, 4)$.

Solution:

Parallel lines have the same slope, so the slope will be 6. You have a point and the slope, so you can use point-slope form.

$$y - y_1 = m(x - x_1)$$

$$y - 4 = 6(x + 1)$$

You could rewrite it in slope-intercept form:

$$y = 6x + 6 + 4$$

$$y = 6x + 10$$

Example C

Find the equation of the line parallel to the line $y - 5 = 2(x + 3)$ passing through $(1, 1)$.

Solution:

First, we notice that this equation is in point-slope form, so let's use point-slope form to write this equation.

$$y - y_1 = m(x - x_1)$$

$$y - 1 = 2(x - 1)$$

$$y - 1 = 2x - 2$$

$$y - 1 + 1 = 2x - 2 + 1,$$

$$y = 2x - 1$$

Starting with point-slope form.
Substituting in the slope and point.
Distributing on the left.
Rearranging into slope-intercept form.

Video Review



MEDIA

Click image to the left for more content.



MEDIA

Click image to the left for more content.

Guided Practice

Find the equation of the line parallel to the line $2x - 3y = 24$ passing through $(2, -6)$.

Solution:

Since this is in standard form, we must first find the slope. For $Ax + By = C$, recall that the slope is $m = -\frac{A}{B}$. Since $A = 2$ and $B = -3$:

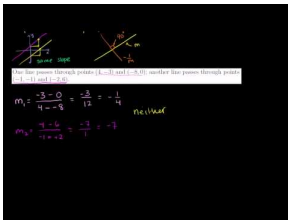
$$m = -\frac{A}{B} = -\frac{2}{-3} = \frac{2}{3}.$$

Now that we have the slope, we can plug it in:

$y - y_1 = m(x - x_1)$	Starting with point-slope form.
$y - 2 = \frac{2}{3}(x + 6)$	Substituting in the slope and point.
$y - 2 = 4x - 12$	Distributing on the left.
$y - 2 + 2 = 4x - 12 + 2,$	Rearranging into slope-intercept form.
$y = 4x - 10$	

Practice

Sample explanations for some of the practice exercises below are available by viewing the following video. Note that there is not always a match between the number of the practice exercise in the video and the number of the practice exercise listed in the following exercise set. However, the practice exercise is the same in both. [CK-12 Basic Algebra: Equations of Parallel and Perpendicular Lines](#) (9:13)

**MEDIA**

Click image to the left for more content.

1. Define *parallel lines*.

Determine the slope of a line parallel to each line given.

2. $y = -5x + 7$
3. $2x + 8y = 9$
4. $x = 8$
5. $y = -4.75$
6. $y - 2 = \frac{1}{5}(x + 3)$

For the following equations, find the line parallel to it through the given point.

7. $y = -\frac{3}{5}x + 2; (0, -2)$
8. $5x - 2y = 7; (2, -10)$
9. $x = y; (2, 3)$
10. $x = -5; (-2, -3)$

Mixed Review

11. Graph the equation $2x - y = 10$.
12. On a model boat, the stack is 8 inches high. The actual stack is 6 feet tall. How tall is the mast on the model if the actual mast is 40 feet tall?
13. The amount of money charged for a classified advertisement is directly proportional to the length of the advertisement. If a 50-word advertisement costs \$11.50, what is the cost of a 70-word advertisement?
14. Simplify $\sqrt{112}$.
15. Simplify $\sqrt{12^2 - 7^2}$.
16. Is $\sqrt{3} - \sqrt{2}$ rational, irrational, or neither? Explain your answer.
17. Solve for s : $15s = 6(s + 32)$.

5.8 Equations of Perpendicular Lines

Here you'll learn how to tell if two lines are perpendicular, and given the equation of a line, you'll learn to find the equation of a second line that is perpendicular to it, as long as you know a point that the second line passes through.

Suppose a coordinate grid were transposed over the blueprint for a house under construction, and two lines on the blueprint were perpendicular to each other. If one of the lines had the equation $y = \frac{1}{2}x + 1$, and the other line passed through the point $(3, 3)$, what would be the equation of the second line? After completing this Concept, given the equation of one line, you'll be able to find the equation of a second line that is perpendicular to the first line, as long as you know a point on the second line.

Guidance

Lines can be parallel, **coincident** (overlap each other), or intersecting (crossing). Lines that intersect at 90° angles have a special name: **perpendicular lines**. The slopes of perpendicular lines have a special property.

Perpendicular lines form a right angle. The product of their slopes is -1 .

$$m_1 \cdot m_2 = -1$$

Example A

Verify that the following lines are perpendicular.

Line a: passes through points $(-2, -7)$ and $(1, 5)$

Line b: passes through points $(4, 1)$ and $(-8, 4)$

Solution: Find the slopes of each line.

$$\text{Line } a: \frac{5 - (-7)}{1 - (-2)} = \frac{12}{3} = 4$$

$$\text{Line } b: \frac{4 - 1}{-8 - 4} = \frac{3}{-12} = -\frac{1}{4}$$

To verify that the lines are perpendicular, the product of their slopes must equal -1 .

$$\frac{4}{1} \times \frac{-1}{4} = -1$$

Because the product of their slopes is -1 , lines *a* and *b* are perpendicular.

Example B

Determine whether the two lines are parallel, perpendicular, or neither:

Line 1: $2x = y - 10$; Line 2: $y = -2x + 5$

Solution: Begin by finding the slopes of lines 1 and 2.

$$2x + 10 = y - 10 + 10$$

$$2x + 10 = y$$

The slope of the first line is 2.

$$y = -2x + 5$$

The slope of the second line is -2 .

These slopes are not identical, so these lines are not parallel.

To check if the lines are perpendicular, find the product of the slopes. $2 \times -2 = -4$. The product of the slopes is not -1 , so the lines are not perpendicular.

Lines 1 and 2 are neither parallel nor perpendicular.

Writing Equations of Perpendicular Lines

Writing equations of perpendicular lines is slightly more difficult than writing parallel line equations. The reason is because you must find the slope of the perpendicular line before you can proceed with writing an equation.

Example C

Find the equation of the line perpendicular to the line $y = -3x + 5$ that passes through point $(2, 6)$.

Solution: Begin by finding the slopes of the perpendicular line. Using the perpendicular line definition, $m_1 \cdot m_2 = -1$. The slope of the original line is -3 . Substitute that for m_1 .

$$-3 \cdot m_2 = -1$$

Solve for m_2 , the slope of the perpendicular line.

$$\begin{aligned} \frac{-3m_2}{-3} &= \frac{-1}{-3} \\ m_2 &= \frac{1}{3} \end{aligned}$$

The slope of the line perpendicular to $y = -3x + 5$ is $\frac{1}{3}$.

You now have the slope and a point. Use point-slope form to write its equation.

$$y - 6 = \frac{1}{3}(x - 2)$$

You can rewrite this in slope-intercept form: $y = \frac{1}{3}x - \frac{2}{3} + 6$.

$$y = \frac{1}{3}x + \frac{16}{3}$$

Multimedia Link: For more help with writing lines, visit [AlgebraLab](#).

Video Review



MEDIA

 Click image to the left for more content.



MEDIA

 Click image to the left for more content.

Guided Practice

Find the equation of the line perpendicular to the line $y = 5$ and passing through $(5, 4)$.

Solution:

The line $y = 5$ is a horizontal line with a slope of zero.


Lines that make a 90° angle with a horizontal line are vertical lines.

Vertical lines are in the form $x = \text{constant}$.

Since the vertical line must go through $(5, 4)$, the equation is $x = 5$.

Practice

Sample explanations for some of the practice exercises below are available by viewing the following video. Note that there is not always a match between the number of the practice exercise in the video and the number of the practice exercise listed in the following exercise set. However, the practice exercise is the same in both. [CK-12 Basic Algebra: Equations of Parallel and Perpendicular Lines](#) (9:13)



MEDIA

 Click image to the left for more content.

1. Define *perpendicular lines*.
2. What is true about the slopes of perpendicular lines?

Determine the slope of a line perpendicular to each line given.

3. $y = -5x + 7$
4. $2x + 8y = 9$

5. $x = 8$
6. $y = -4.75$
7. $y - 2 = \frac{1}{5}(x + 3)$

In 8 – 14, determine whether the lines are parallel, perpendicular, or neither.

8. *Line a* : passing through points $(-1, 4)$ and $(2, 6)$; *Line b* : passing through points $(2, -3)$ and $(8, 1)$.
9. *Line a* : passing through points $(4, -3)$ and $(-8, 0)$; *Line b* : passing through points $(-1, -1)$ and $(-2, 6)$.
10. *Line a* : passing through points $(-3, 14)$ and $(1, -2)$; *Line b* : passing through points $(0, -3)$ and $(-2, 5)$.
11. *Line a* : passing through points $(3, 3)$ and $(-6, -3)$; *Line b* : passing through points $(2, -8)$ and $(-6, 4)$.
12. Line 1: $4y + x = 8$; Line 2: $12y + 3x = 1$
13. Line 1: $5y + 3x + 1$; Line 2: $6y + 10x = -3$
14. Line 1: $2y - 3x + 5 = 0$; Line 2: $y + 6x = -3$

For the following equations, find the line perpendicular to it through the given point.

15. $x + 4y = 12$; $(-3, -2)$
16. $y = \frac{1}{3}x + 2$; $(-3, -1)$
17. $y = \frac{3}{5}x - 4$; $(6, -2)$
18. $2x + y = 5$; $(2, -2)$
19. $y = x - 6$; $(-2, 0)$
20. $5x - 7 = 3y$; $(8, -2)$
21. $y = \frac{2}{3}x - 1$; $(4, 7)$

5.9 Families of Lines

Here you'll learn about two types of families of lines and how to write general equations for each.

Think about the members of your family. You probably all have some things in common, but you're definitely not all identical! The same is true of a family of lines. What could a family of lines have in common? What might be different? In this Concept, you'll learn about two types of families of lines and how to write general equations for each type of family.

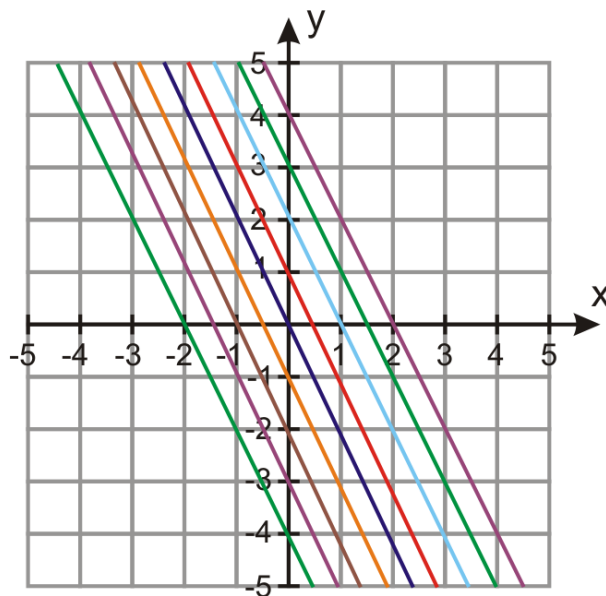
Guidance

A straight line has two very important properties, its **slope** and its **y-intercept**. The slope tells us how steeply the line rises or falls, and the y-intercept tells us where the line intersects the y-axis. In this Concept, we will look at two families of lines.

A **family of lines** is a set of lines that have something in common with each other. Straight lines can belong to two types of families: where the slope is the same and where the y-intercept is the same.

Family 1: The slope is the same

Remember that lines with the same slope are parallel. Each line on the Cartesian plane below has an identical slope with different y-intercepts. All the lines look the same but they are shifted up and down the y-axis. As b gets larger the line rises on the y-axis and as b gets smaller the line goes lower on the y-axis. This behavior is often called a **vertical shift**.



Example A

Write the equation for the red line in the image above.

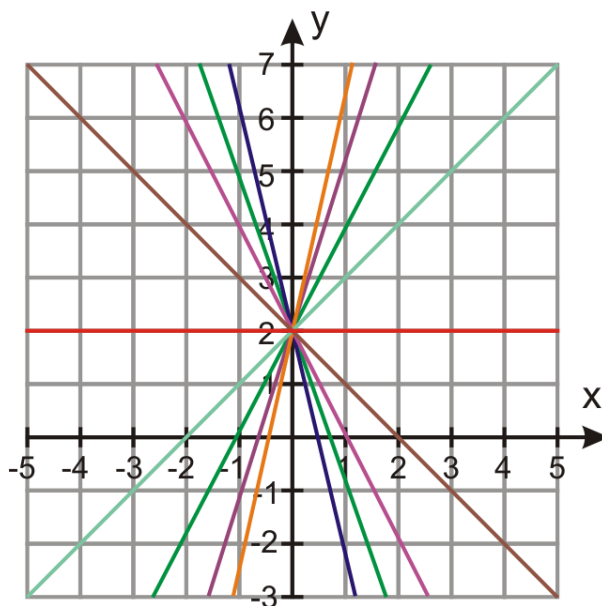
Solution:

We can see from the graph that the equation has a y-intercept of 1. Since all the lines have the same slope, we can look at any line to determine the slope, so the slope is -2 . Therefore, the equation of the red line is:

$$y = -2x + 1.$$

Family 2: The y-intercept is the same

The graph below shows several lines with the same y-intercept but with varying slopes.



Example B

Write the equation for the brown line in the image above.

Solution:

All the lines share the same y-intercept, which is 2. Looking at the graph, the slope is -1. Thus, the equation is:

$$y = -x + 2.$$

Example C

Write a general equation for each family of lines shown in the images in this Concept.

Solutions:

For family 1, the red line has the equation $y = -2x + 1$. Since all the lines share the same slope, we keep the slope of -2. But they all have different y-intercepts, so we will use b :

$$y = -2x + b.$$

For family 2, the brown line has the equation $y = -x + 2$. Since all the lines share the same y-intercept but have different slopes:

$$y = mx + 2.$$

Video Review



MEDIA

 Click image to the left for more content.



MEDIA

 Click image to the left for more content.

Guided Practice

Write the equation of the family of lines perpendicular to $6x + 2y = 24$.

Solution:

First we must find the slope of $6x + 2y = 24$:

$$\text{slope} = -\frac{6}{2} = -3.$$

Now we find the slope of any line perpendicular to our original line:

$$-3 \cdot m = -1$$

$$\frac{-3 \cdot m}{-3} = \frac{-1}{-3}$$

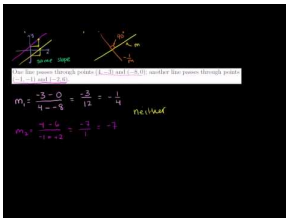
$$m = \frac{1}{3}$$

The family of lines perpendicular to $6x + 2y = 24$ will have a slope of $m = \frac{1}{3}$. They will all have different y-intercepts:

$$y = \frac{1}{3}x + b.$$

Practice

Sample explanations for some of the practice exercises below are available by viewing the following video. Note that there is not always a match between the number of the practice exercise in the video and the number of the practice exercise listed in the following exercise set. However, the practice exercise is the same in both. [CK-12 Basic Algebra: Equations of Parallel and Perpendicular Lines \(9:13\)](#)



MEDIA

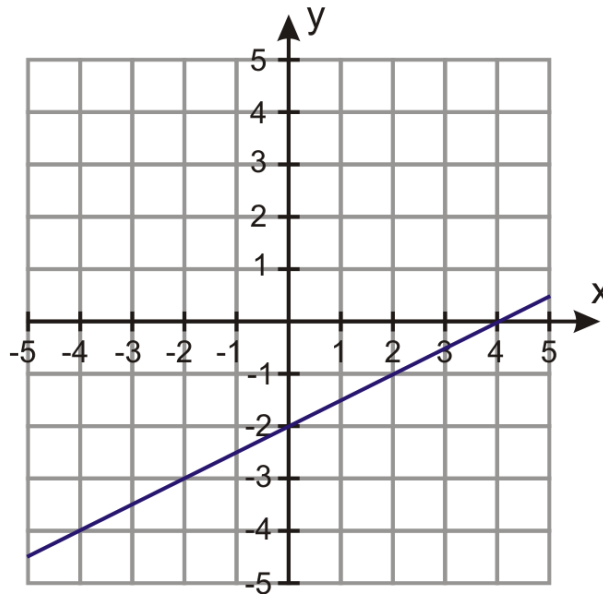
 Click image to the left for more content.

1. What is a *family of lines*?
2. Find the equation of the line parallel to $5x - 2y = 2$ that passes through the point $(3, -2)$.
3. Find the equation of the line perpendicular to $y = -\frac{2}{5}x - 3$ that passes through the point $(2, 8)$.
4. Find the equation of the line parallel to $7y + 2x - 10 = 0$ that passes through the point $(2, 2)$.
5. Find the equation of the line perpendicular to $y + 5 = 3(x - 2)$ that passes through the point $(6, 2)$.

6. Find the equation of the line through $(2, -4)$ perpendicular to $y = \frac{2}{7}x + 3$.
7. Find the equation of the line through $(2, 3)$ parallel to $y = \frac{3}{2}x + 5$.

In 8 – 11, write the equation of the family of lines satisfying the given condition.

8. All lines pass through point $(0, 4)$.
9. All lines are perpendicular to $4x + 3y - 1 = 0$.
10. All lines are parallel to $y - 3 = 4x + 2$.
11. All lines pass through point $(0, -1)$.
12. Write an equation for a line parallel to the equation graphed below.
13. Write an equation for a line perpendicular to the equation graphed below and passing through the point $(0, -1)$.



Quick Quiz

1. Write an equation for a line with a slope of $\frac{4}{3}$ and a y -intercept of $(0, 8)$.
2. Write an equation for a line containing $(6, 1)$ and $(7, -3)$.
3. A plumber charges \$75 for a 2.5-hour job and \$168.75 for a 5-hour job. Assuming the situation is linear, write an equation to represent the plumber's charge and use it to predict the cost of a 1-hour job.
4. Rewrite in standard form: $y = \frac{6}{5}x + 11$.
5. Sasha took tickets for the softball game. Student tickets were \$3.00 and adult tickets were \$3.75. She collected a total of \$337.50 and sold 75 student tickets. How many adult tickets were sold?

5.10 Fitting Lines to Data

Here you'll learn how to use a graphing calculator to find the line of best fit for a group of data points so that you can make predictions based on the equation of the line.

Suppose that each day an ice cream truck recorded the high temperature outside and the number of ice cream treats sold. They then entered the data points into a graphing calculator. Do you think that they could find the equation of the line that best fit the data? If so, how would they do it? Could they make predictions based on the equation? After completing this Concept, you'll be able work on problems like this one by entering data points into a graphing calculator and finding the line of best fit.

Guidance

The real-world situations you have been studying so far form linear equations. However, most data in life is messy and does not fit a line in slope-intercept form with 100% accuracy. Because of this tendency, people spend their entire career attempting to fit lines to data. The equations that are created to fit the data are used to make predictions, as you will see in the next Concept.

This Concept focuses on graphing **scatter plots** and using a scatter plot to find a linear equation that will best fit the data.

A **scatter plot** is a plot of all the ordered pairs in a table. This means that a scatter plot is a relation, and not necessarily a function. Also, the scatter plot is **discrete**, as it is a set of distinct points. Even when we expect the relationship we are analyzing to be linear, we should not expect that all the points would fit perfectly on a straight line. Rather, the points will be “scattered” about a straight line. There are many reasons why the data does not fall perfectly on a line. Such reasons include **measurement errors** and **outliers**.

Measurement error is the amount you are off by reading a ruler or graph.

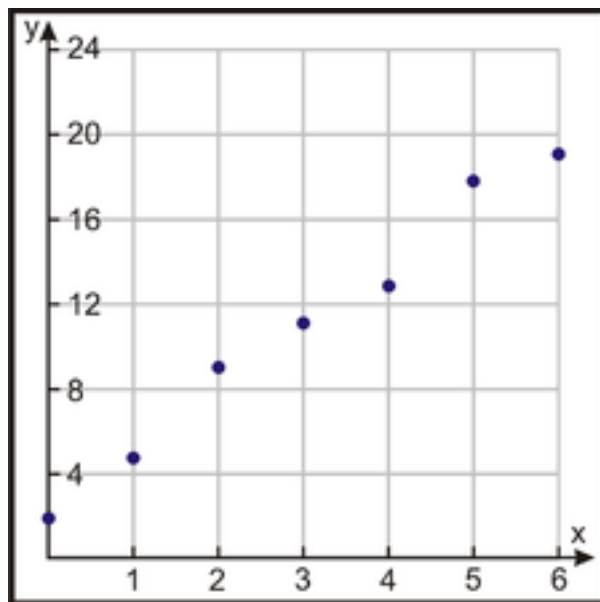
An **outlier** is a data point that does not fit with the general pattern of the data. It tends to be “outside” the majority of the scatter plot.

Example A

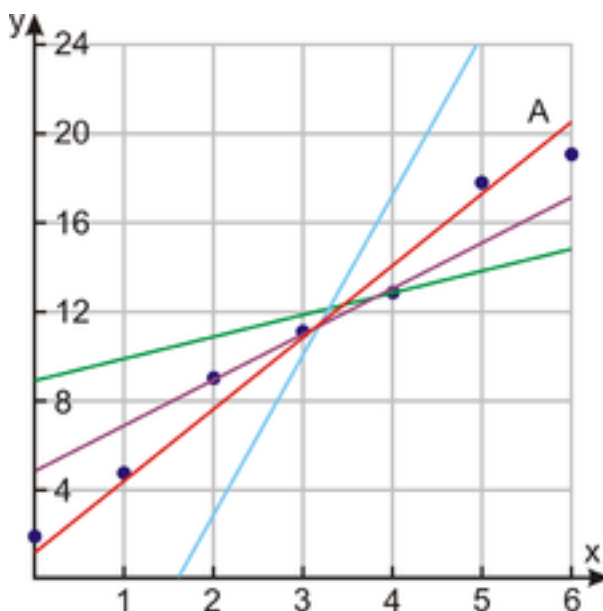
Make a scatter plot of the following ordered pairs.

(0, 2), (1, 4.5), (2, 9), (3, 11), (4, 13), (5, 18), (6, 19.5)

Solution: Graph each ordered pair on one Cartesian plane.



Notice that the points graphed on the plane above look like they might be part of a straight line, although they would not fit perfectly. If the points were perfectly lined up, it would be quite easy to draw a line through all of them and find the equation of that line. However, if the points are “scattered,” we try to find a line that best fits the data. The graph below shows several potential **lines of best fit**.



You see that we can draw many lines through the points in our data set. These lines have equations that are very different from each other. We want to use the line that is closest to **all** the points on the graph. The best candidate in our graph is the red line, A. Line A is the **line of best fit** for this scatter plot.

Writing Equations for Lines of Best Fit

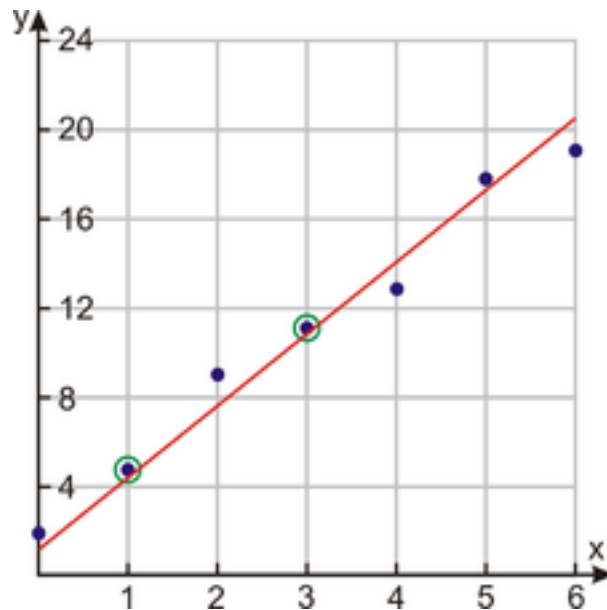
Once you have decided upon your line of best fit, you need to write its equation by finding two points on it and using either:

- Point-slope form;
- Standard form; or

- Slope-intercept form.

The form you use will depend upon the situation and the ease of finding the y -intercept.

Using the red line from the example above, locate two points on the line.



Find the slope: $m = \frac{11-4.5}{3-1} = \frac{6.5}{2} = 3.25$.

Then $y = 3.25x + b$.

Substitute (3, 11) into the equation. $11 = 3.25(3) + b \Rightarrow b = 1.25$

The equation for the line that fits the data best is $y = 3.25x + 1.25$.

Finding Equations for Lines of Best Fit Using a Calculator

Graphing calculators can make writing equations of best fit easier and more accurate. Two people working with the same data might get two different equations because they would be drawing different lines. To get the most accurate equation for the line, we can use a graphing calculator. The calculator uses a mathematical algorithm to find the line that minimizes the error between the data points and the line of best fit.

Example B

Use a graphing calculator to find the equation of the line of best fit for the following data: (3, 12), (8, 20), (1, 7), (10, 23), (5, 18), (8, 24), (11, 30), (2, 10).

Solution:

Step 1: Input the data into your calculator. Press [STAT] and choose the [EDIT] option.

L1	L2	L3	2
1	7		
10	23		
5	18		
8	24		
11	30		
2	10		

L2(B) = 10			

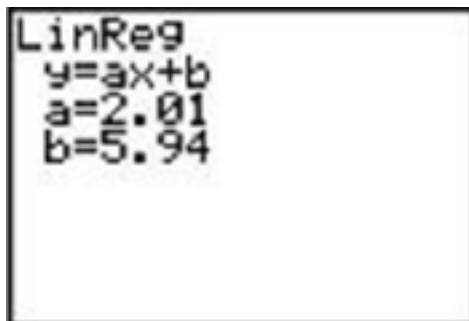
Input the data into the table by entering the x values in the first column and the y values in the second column.

Step 2: Find the equation of the line of best fit.



Press [STAT] again and use the right arrow to select [CALC] at the top of the screen.

Choose option number 4: $LinReg(ax + b)$ and press [ENTER]. The calculator will display $LinReg(ax + b)$.



Press [ENTER] and you will be given the a and b values.

Here a represents the slope and b represents the y -intercept of the equation. The linear regression line is $y = 2.01x + 5.94$.

Step 3: Draw the scatter plot.

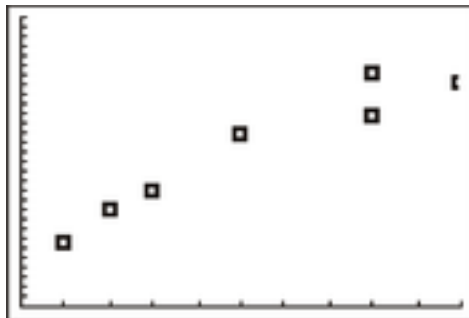


To draw the scatter plot press [STATPLOT] [2nd] [Y=].

Choose Plot 1 and press [ENTER].

Press the **On** option and choose the Type as scatter plot (the one highlighted in black).

Make sure that the X list and Y list names match the names of the columns of the table in Step 1.



Choose the box or plus as the mark since the simple dot may make it difficult to see the points.

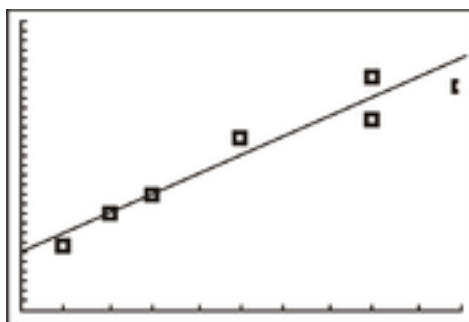
Press [GRAPH] and adjust the window size so you can see all the points in the scatter plot.

Step 4: Draw the line of best fit through the scatter plot.

Press [Y=].

Enter the equation of the line of best fit that you just found: $Y_1 = 2.01X + 5.94$.

Press [GRAPH].



Using Lines of Best Fit to Solve Situations

Example C

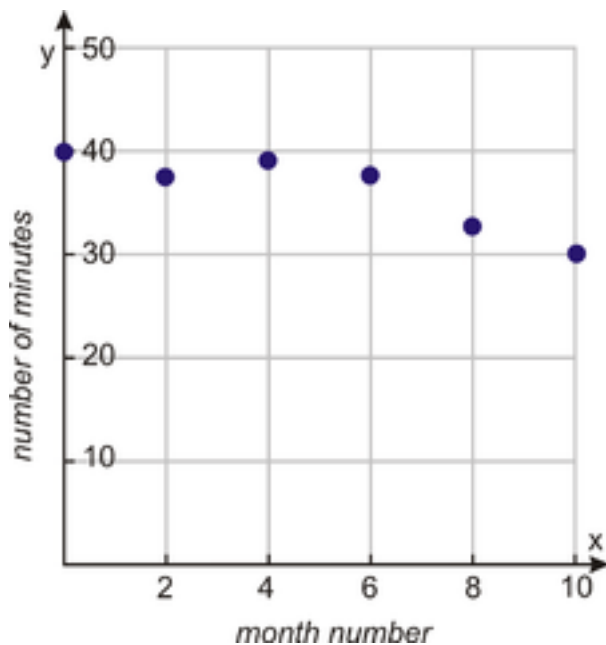
Gal is training for a 5K race (a total of 5000 meters, or about 3.1 miles). The following table shows her times for each month of her training program. Assume here that her times will decrease in a straight line with time. Find an equation of a line of fit. Predict her running time if her race is in August.



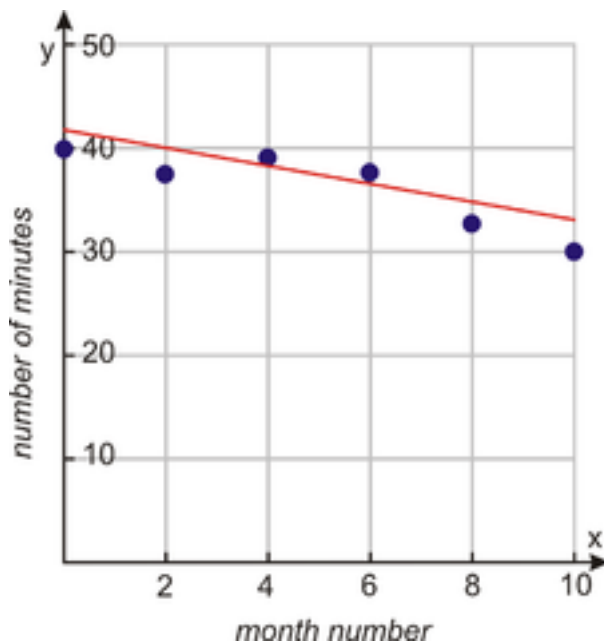
TABLE 5.1:

Month	Month number	Average time (minutes)
January	0	40
February	1	38
March	2	39
April	3	38
May	4	33
June	5	30

Solution: Begin by making a scatter plot of Gal's running times. The independent variable, x , is the month number and the dependent variable, y , is the running time in minutes. Plot all the points in the table on the coordinate plane.



Draw a line of fit. When doing this by eye, there are many lines that look like a good fit, so you just have to use your best judgement.



Choose two points on the line you chose: (0, 41) and (4, 38).

Find the equation of the line, first noticing that one of our points, (0,41), is the y-intercept. Now, all we need is to find the slope.

$$m = \frac{38 - 41}{4 - 0} = -\frac{3}{4}$$

$$y = -\frac{3}{4}x + 41$$

In a real-world problem, the slope and y-intercept have a physical significance.

$$\text{Slope} = \frac{\text{number of minutes}}{\text{month}}$$

Since the slope is negative, the number of minutes Gal spends running a 5K race decreases as the months pass. The slope tells us that Gal's running time decreases 0.75 minutes per month.

The y-intercept tells us that when Gal started training, she ran a distance of 5K in 41 minutes, which is just an estimate, since the actual time was 40 minutes.

The problem asks us to predict Gal's running time in August. Since June is assigned to month number five, August will be month number seven. Substitute $x = 7$ into the line-of-best-fit-equation.

$$y = -\frac{3}{4}(7) + 41 = -\frac{21}{4} + 41 = -\frac{21}{4} + \frac{164}{4} = \frac{143}{4} = 35\frac{3}{4}$$

The equation predicts that Gal will be running the 5K race in 35.75 minutes.

Video Review



MEDIA

 Click image to the left for more content.



MEDIA

 Click image to the left for more content.

<!--

Vocabulary

Scatter plot: A **scatter plot** is a plot of all the ordered pairs in the table. This means that a scatter plot is a relation, and not necessarily a function. Also, the scatter plot is **discrete**, as it is a set of distinct points. Even when we expect the relationship we are analyzing to be linear, we should not expect that all the points would fit perfectly on a straight line. Rather, the points will be “scattered” about a straight line. There are many reasons why the data does not fall perfectly on a line. Such reasons include **measurement errors** and **outliers**.

Measurement error: The amount you are off by reading a ruler or graph is called *measurement error*.

Outlier: An **outlier** is a data point that does not fit with the general pattern of the data. It tends to be “outside” the majority of the scatter plot.

Discrete: Discrete numbers or data are those for which there are only certain values or points. For example, many things can only be measured by integers, such as the number of people. You cannot use any real number to represent the number of people; only integers are allowed. In other words, the number of people is *discrete*.

The line of best fit: The line that is closest to all the points on the graph is the *best fit line*.

Guided Practice

Make a scatter plot and find the equation of a best fit line for the following set of points: (57, 45) (65, 61) (34, 30) (87, 78) (42, 41) (35, 36) (59, 35) (61, 57) (25, 23) (35, 34).

Solution:

First we will make a scatter plot:

Next, draw in a line, finding the best fit by eye:

Since the two green points, (34,30) and (25,23), are on the line, we can use them to write the equation. First, find the slope:

$$m = \frac{30-23}{34-25} = \frac{7}{9}$$

Plugging this into point-slope:

$$y - 30 = \frac{7}{9}(x - 34)$$

$$y - 30 = \frac{7}{9}x - \frac{7}{9} \cdot (34)$$

$$\text{Since } \frac{7}{9} \cdot (34) \approx 26.44$$

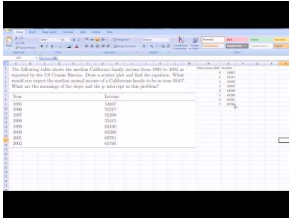
$$y - 30 = \frac{7}{9}x - 26.44$$

$$y - 30 + 30 = \frac{7}{9}x - 26.44 + 30$$

$$y = \frac{7}{9}x + 3.56$$

Practice

Sample explanations for some of the practice exercises below are available by viewing the following video. Note that there is not always a match between the number of the practice exercise in the video and the number of the practice exercise listed in the following exercise set. However, the practice exercise is the same in both. [CK-12 Basic Algebra: Fitting a Line to Data \(7:48\)](#)



MEDIA

Click image to the left for more content.

For each data set, draw the scatter plot and find the equation of the line of best fit by hand.

In 9 – 11, for each data set, use a graphing calculator to find the equation of the line of best fit.

TABLE 5.2:

Day	No. of Samosas
1	30
2	34
3	36
4	36
5	40
6	43
7	45

TABLE 5.3:

Initial height (cm)	Bounce height (cm)
30	22
35	26
40	29
45	34
50	38
55	40
60	45
65	50
70	52

TABLE 5.4: Candle Burning Time Based on Candle Weight

Candle weight (oz)	Time (hours)
2	15

TABLE 5.4: (continued)

Candle weight (oz)	Time (hours)
3	20
4	35
5	36
10	80
16	100
22	120
26	180

TABLE 5.5:

Year	Income
1995	53,807
1996	55,217
1997	55,209
1998	55,415
1999	63,100
2000	63,206
2001	63,761
2002	65,766

Mixed Review

5.11 Linear Interpolation and Extrapolation

Here you'll learn how to make inferences from data by using linear interpolation and linear extrapolation.

Suppose that you've plotted a number of data points on a coordinate plane, with the x -coordinate of each data point representing the number of months since you've planted a tree, and the y -coordinate of each point representing the tree's height in meters. If you have data for 1 month, 2 months, 3 months, and 4 months, do you think you could guess what the tree's height will be at 5 months? How about what the tree's height was at 2.5 months? After completing this Concept, you'll be able to make these types of guesses by using linear interpolation and linear extrapolation.

Predicting with Linear Models

Numerical information appears in all areas of life. You can find it in newspapers, in magazines, in journals, on the television, or on the Internet. In the last Concept, you saw how to find the equation of a line of best fit. Using a line of best fit is a good method if the relationship between the dependent and independent variables is linear. Not all data fits a straight line, though. This Concept will show other methods to help estimate data values. These methods are useful in both linear and non-linear relationships.

Linear Interpolation

Linear interpolation is useful when looking for a value between given data points. It can be considered as “filling in the gaps” of a table of data.

The strategy for linear interpolation is to use a straight line to connect the known data points on either side of the unknown point. Linear interpolation is often not accurate for non-linear data. If the points in the data set change by a large amount, linear interpolation may not give a good estimate.

Linear Extrapolation

Linear extrapolation can help us estimate values that are either higher or lower than the values in the data set. Think of this as “the long-term estimate” of the data.

The strategy for linear extrapolation is to use a subset of the data instead of the entire data set. This is especially true for non-linear data you will encounter in later lessons. For this type of data, it is sometimes useful to extrapolate using the last two or three data points in order to estimate a value higher than the data range.

Collecting and Organizing Data

Data can be collected through various means, including surveys or experiments.

A **survey** is a data collection method used to gather information about individuals' opinions, beliefs, or habits.

The information collected by the U.S. Census Bureau or the Center for Disease Control are examples of data gathered using surveys. The U.S. Census Bureau collects information about many aspects of the U.S. population.

An **experiment** is a controlled test or investigation.

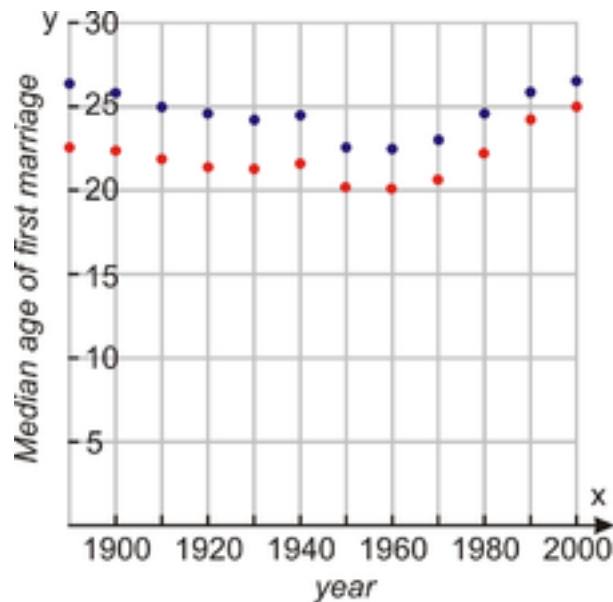
Let's say we are interested in how the median age for first marriages has changed during the 20th century. The U.S. Census provides the following information about the median age at first marriage for males and females. Below is the table of data and its corresponding scatter plot.



TABLE 5.6:

Year	Median Age of Males	Median Age of Females
1890	26.1	22.0
1900	25.9	21.9
1910	25.1	21.6
1920	24.6	21.2
1930	24.3	21.3
1940	24.3	21.5
1950	22.8	20.3
1960	22.8	20.3
1970	23.2	20.8
1980	24.7	22.0
1990	26.1	23.9
2000	26.8	25.1

Median Age of Males and Females at First Marriage by Year

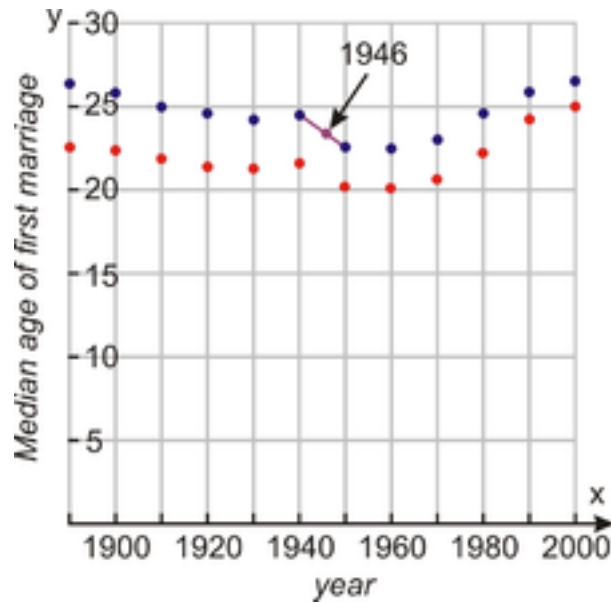


Example A

Estimate the median age for the first marriage of a male in the year 1946.

Solution:

We will first use the method of interpolation because there is a “gap” needing to be filled. 1946 is between 1940 and 1950, so these are the data points we will use.



By connecting the two points, an equation can be found.

Slope	$m = \frac{22.8 - 24.3}{1950 - 1940} = \frac{-1.5}{10} = -0.15$ $y = -0.15x + b$ $24.3 = -0.15(1940) + b$ $b = 315.3$
Equation	$y = -0.15x + 315.3$

To estimate the median age of marriage of males in the year 1946, substitute $x = 1946$ into the equation.

$$y = -0.15(1946) + 315.3 = 23.4 \text{ years old}$$

Example B

Estimate the median age for the first marriage of a female in the year 1968.

Solution:

Use the method of interpolation to create a line that approximates the values between 1960 and 1970, since 1968 is between those years. We will use the data points (1960, 20.3) and (1970, 20.8) as two points defining a line.

Slope	$m = \frac{20.8 - 20.3}{1970 - 1960} = \frac{.5}{10} = 0.05$ $y = 0.05x + b$ $20.3 = 0.05(1960) + b$ $b = -77.7$
Equation	$y = 0.05x - 77.7$

To estimate the median age of marriage of females in the year 1968, substitute $x = 1968$ into the equation.

$$y = 0.05(1968) - 77.7 = 20.7 \text{ years old}$$

Predicting Using an Equation

When linear interpolation and linear extrapolation do not produce accurate predictions, using the line of best fit (**linear regression**) may be the best choice. The “by hand” and calculator methods of determining the line of best fit were presented in the last Concept.

Example C

The world-record times for the women’s 100-meter race are given in the following table. Estimate the world-record time in the year 2010. Is this a good estimate?

TABLE 5.7:

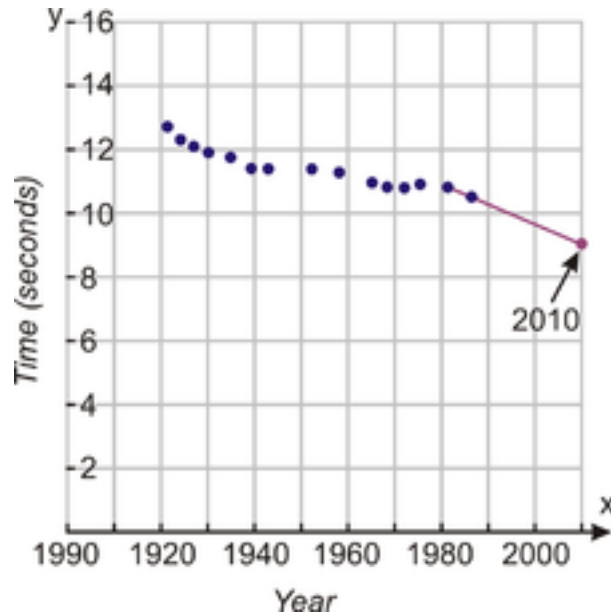
Winner	Ctry.	Year	Seconds	Winner	Ctry.	Year	Seconds
Mary Lines	UK	1922	12.8	Vera Krepkina	Sov.	1958	11.3
Leni Schmidt	Germ.	1925	12.4	Wyomia Tyus	USA	1964	11.2
Gertrud Glasitsch	Germ.	1927	12.1	Barbara Ferrell	USA	1968	11.1
Tollien Schuurman	Neth.	1930	12.0	Ellen Strophal	E. Germ.	1972	11.0
Helen Stephens	USA	1935	11.8	Inge Helten	W. Germ.	1975	11.0
Lulu Mae Hymes	USA	1939	11.5	Marlies Gohr	E. Germ.	1982	10.9
Fanny Blankers-Koen	Neth.	1943	11.5	Florence Griffith Joyner	USA	1988	10.5
Marjorie Jackson	Austr.	1952	11.4				

Solution:

Start by making a scatter plot of the data. Connect the last two points on the graph and find the equation of the line.

World Record Times for the Women’s 100-meter Race by Year

³Source: http://en.wikipedia.org/wiki/World_Record_progression_100_m_women.



$$\text{Slope} \quad m = \frac{10.5 - 10.9}{1988 - 1982} = \frac{-0.4}{6} = -0.067$$

$$y = -0.067x + b$$

$$10.5 = -0.067(1988) + b$$

$$b = 143.7$$

$$\text{Equation} \quad y = -0.067x + 143.7$$

The world record time in year 2010 is estimated to be: $y = -0.067(2010) + 143.7 = 9.03$ seconds.

How accurate is this estimate? It is likely that it's not very accurate because 2010 is a long time from 1988. This example demonstrates the weakness of linear extrapolation. Estimates given by linear extrapolation are never as good as using the equation from the line of best fit method. In this particular example, the last data point clearly does not fit in with the general trend of the data, so the slope of the extrapolation line is much steeper than it should be.

As a historical note, the last data point corresponds to the world record time for Florence Griffith Joyner in 1988. After her race, she was accused of using performance-enhancing drugs, but this fact was never proven. In addition, there is a question about the accuracy of the timing because some officials said that the tail wind was not accounted for in this race, even though all the other races of the day were impacted by a strong wind.

Video Review



MEDIA

Click image to the left for more content.


MEDIA

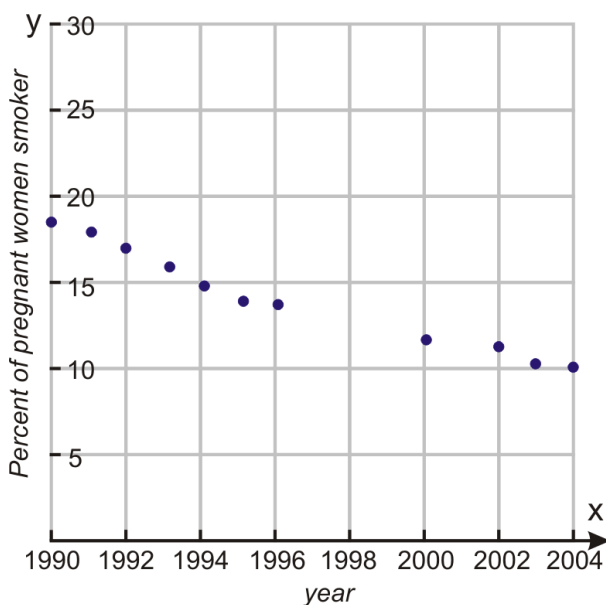
Click image to the left for more content.

Guided Practice

The Center for Disease Control (CDC) has the following information regarding the percentage of pregnant women smokers organized by year. Estimate the percentage of pregnant women that were smoking in the year 1998.

TABLE 5.8: Percent of Pregnant Women Smokers by Year

Year	Percent
1990	18.4
1991	17.7
1992	16.9
1993	15.8
1994	14.6
1995	13.9
1996	13.6
2000	12.2
2002	11.4
2003	10.4
2004	10.2

Percent of Pregnant Women Smokers by Year

Solution:

We want to use the information close to 1998 to **interpolate** the data. We do this by connecting the points on either side of 1998 with a straight line and find the equation of that line.

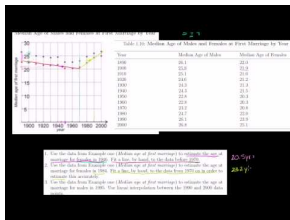
Slope	$m = \frac{12.2 - 13.6}{2000 - 1996} = \frac{-1.4}{4} = -0.35$ $y = -0.35x + b$ $12.2 = -0.35(2000) + b$ $b = 712.2$
Equation	$y = -0.35x + 712.2$

To estimate the percentage of pregnant women who smoked in the year 1998, substitute $x = 1998$ into the equation.

$$y = -0.35(1998) + 712.2 = 12.9\%$$

Practice

Sample explanations for some of the practice exercises below are available by viewing the following video. Note that there is not always a match between the number of the practice exercise in the video and the number of the practice exercise listed in the following exercise set. However, the practice exercise is the same in both. [CK-12 Basic Algebra: Predicting with Linear Models](#) (11:46)



MEDIA

Click image to the left for more content.

1. What does it mean to *interpolate the data*? In which cases would this method be useful?
2. How is interpolation different from extrapolation? In which cases would extrapolation be more beneficial?
3. What was the problem with using the interpolation method to come up with an equation for the women's world record times?
4. Use the **World Record Times** data and determine an equation for the line of best fit.
5. Use the **Median Age at First Marriage** data to estimate the age at marriage for females in 1946. Fit a line, by hand, to the data before 1970.
6. Use the **Median Age at First Marriage** data to estimate the age at marriage for females in 1984. Fit a line, by hand, to the data from 1970 on in order to estimate this accurately.
7. Use the **Median Age at First Marriage** data to estimate the age at marriage for males in 1995. Use linear interpolation between the 1990 and 2000 data points.
8. Use the data from **Pregnant Women and Smoking** to estimate the percent of pregnant smokers in 1997. Use linear interpolation between the 1996 and 2000 data points.
9. Use the data from **Pregnant Women and Smoking** to estimate the percent of pregnant smokers in 2006. Use linear extrapolation with the final two data points.
10. Use the **World Record Times** data to estimate the world record time for the female 100-meter race in 1920. Use linear extrapolation because the first two or three data points have a different slope than the rest of the data.
11. The table below shows the highest temperature vs. the hours of daylight for the 15th day of each month in the year 2006 in San Diego, California. Using linear interpolation, estimate the high temperature for a day with 13.2 hours of daylight.

TABLE 5.9:

Hours of daylight	High temperature (F)
10.25	60
11.0	62
12	62
13	66
13.8	68
14.3	73
14	86
13.4	75
12.4	71
11.4	66
10.5	73
10	61

12. Use the table above to estimate the high temperature for a day with 9 hours of daylight using linear extrapolation. Is the prediction accurate? Find the answer using the line of best fit.

5.12 Problem Solving with Linear Models

Here you'll use some of the linear modeling tools learned in previous Concepts to solve real-world problems.

What if you've plotted some data points, with the x -coordinates of the points representing the number of years a teacher has been teaching at a school and the y -coordinates representing his salary? Suppose that you've found the line of best fit to be $y = 1500x + 28,000$. If the teacher has been teaching at the school for 8 years, could you use the line of best fit to predict how much his salary will be after he's taught for 12 years? How would you do it? In this Concept, you'll learn how to answer real-world questions like these by using a linear model.

Guidance

The previous lessons have focused on writing equations and determining lines of best fit. When we fit a line to data using interpolation, extrapolation, or linear regression, it is called **linear modeling**.

A **model** is an equation that best describes the data graphed in the scatter plot.

Example A

Dana heard something very interesting at school. Her teacher told her that if you divide the circumference of a circle by its diameter you always get the same number. She tested this statement by measuring the circumference and diameter of several circular objects. The following table shows her results.

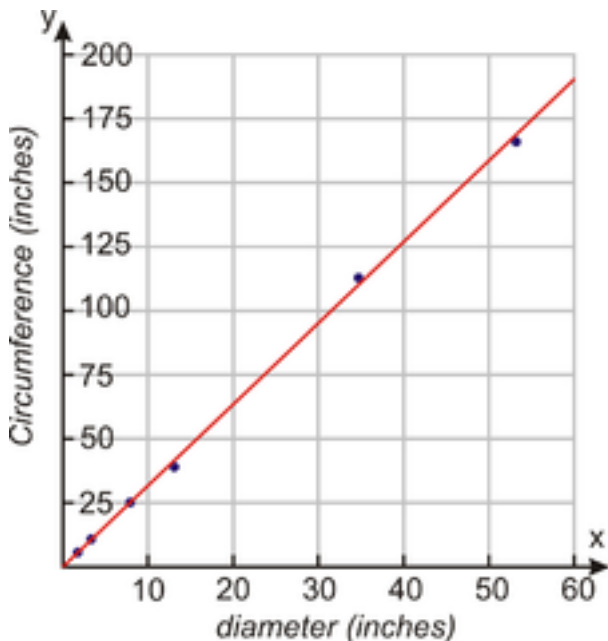
From this data, estimate the circumference of a circle whose diameter is 12 inches.

Solution:

Begin by creating a scatter plot and drawing the line of best fit.

TABLE 5.10: Diameter and Circumference of Various Objects

Object	Diameter (inches)	Circumference (inches)
Table	53	170
Soda can	2.25	7.1
Cocoa tin	4.2	12.6
Plate	8	25.5
Straw	0.25	1.2
Propane tank	13.3	39.6
Hula hoop	34.25	115



Find the equation of the line of best fit using points (0.25, 1.2) and (8, 25.5).

Slope	$m = \frac{25.5 - 1.2}{8 - 0.25} = \frac{24.3}{7.75} = 3.14$ $y = 3.14x + b$
Equation	$1.2 = 3.14(0.25) + b \Rightarrow b = 0.42$ $y = 3.14x + 0.42$

$$\text{Diameter} = 12 \text{ inches} \Rightarrow y = 3.14(12) + 0.42 = \underline{38.1 \text{ inches}}$$

In this problem, the slope = 3.14. This number should be very familiar to you—it is the number π rounded to the hundredths place. Theoretically, the circumference of a circle divided by its diameter is always the same and it equals 3.14 or π .

Example B

Using Dana’s data from Example A, estimate the circumference of a circle whose diameter is 25 inches.

Solution:

The equation $y = 3.14x + 0.42$ of the relationship between diameter and circumference from Example A applies here.

$$\text{Diameter} = 25 \text{ inches} \Rightarrow y = 3.14(25) + 0.42 = \underline{78.92 \text{ inches}}$$

A circle with a diameter of 25 inches will have a circumference that is approximately 78.92 inches.

Example C

Using Dana's data from Example A, estimate the circumference of a circle whose diameter is 60 inches.

Solution:

The equation $y = 3.14x + 0.42$ of the relationship between diameter and circumference from Example A applies here.

$$\text{Diameter} = 60 \text{ inches} \Rightarrow y = 3.14(60) + 0.42 = \underline{188.82 \text{ inches}}$$

A circle with a diameter of 60 inches will have a circumference that is approximately 188.82 inches.

Video Review**MEDIA**

Click image to the left for more content.

**MEDIA**

Click image to the left for more content.

Guided Practice

A cylinder is filled with water to a height of 73 centimeters. The water is drained through a hole in the bottom of the cylinder and measurements are taken at two-second intervals. The table below shows the height of the water level in the cylinder at different times.

TABLE 5.11: Water Level in Cylinder at Various Times

Time (seconds)	Water level (cm)
0.0	73
2.0	63.9
4.0	55.5
6.0	47.2
8.0	40.0
10.0	33.4
12.0	27.4
14.0	21.9
16.0	17.1
18.0	12.9
20.0	9.4
22.0	6.3

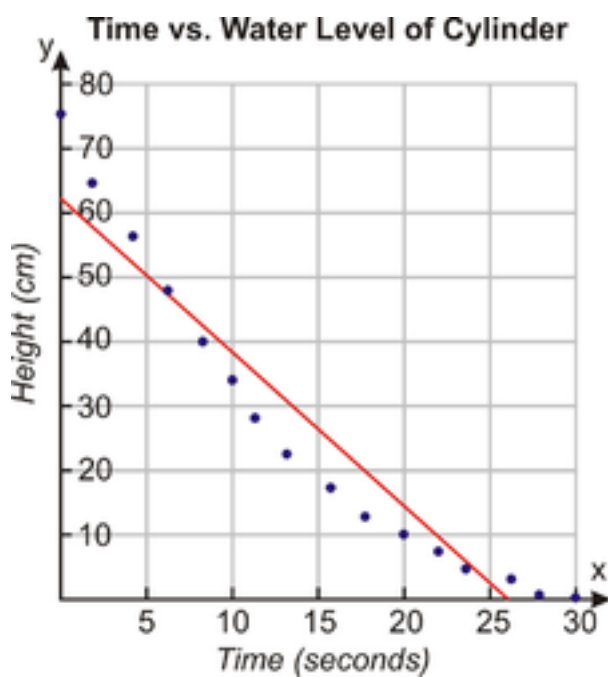
TABLE 5.11: (continued)

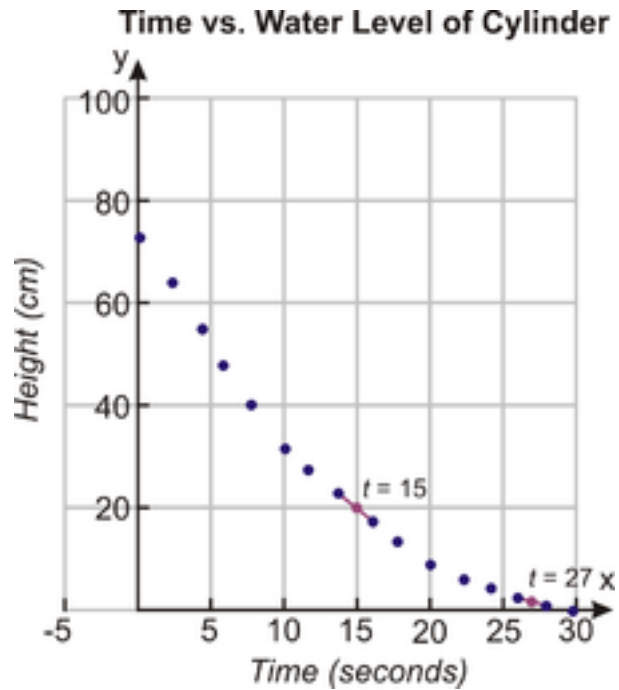
Time (seconds)	Water level (cm)
24.0	3.9
26.0	2.0
28.0	0.7
30.0	0.1

Find the water level at 15 seconds.

Solution:

Begin by graphing the scatter plot. As you can see below, a straight line does not fit the majority of this data. Therefore, there is no line of best fit. Instead, use interpolation.





To find the value at 15 seconds, connect points (14, 21.9) and (16, 17.1) and find the equation of the straight line.

$$m = \frac{17.1 - 21.9}{16 - 14} = \frac{-4.8}{2} = -2.4$$

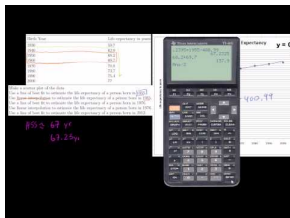
$$y = -2.4x + b \Rightarrow 21.9 = -2.4(14) + b \Rightarrow b = 55.5$$

Equation $y = -2.4x + 55.5$

Substitute $x = 15$ and obtain $y = -2.4(15) + 55.5 = 19.5 \text{ cm}$.

Practice

Sample explanations for some of the practice exercises below are available by viewing the following video. Note that there is not always a match between the number of the practice exercise in the video and the number of the practice exercise listed in the following exercise set. However, the practice exercise is the same in both. [CK-12 Basic Algebra: Using a Linear Model](#) (12:14)



MEDIA

Click image to the left for more content.

1. What is a mathematical model?
2. What is *linear modeling*? What are the options to determine a linear model?
3. Using the **Water Level** data, use interpolation to determine the height of the water at 17 seconds.

Use the Life Expectancy table below to answer the questions.

4. Make a scatter plot of the data.
5. Use a line of best fit to estimate the life expectancy of a person born in 1955.
6. Use linear interpolation to estimate the life expectancy of a person born in 1955.
7. Use a line of best fit to estimate the life expectancy of a person born in 1976.
8. Use linear interpolation to estimate the life expectancy of a person born in 1976.
9. Use a line of best fit to estimate the life expectancy of a person born in 2012.
10. Use linear extrapolation to estimate the life expectancy of a person born in 2012.
11. Which method gives better estimates for this data set? Why?

TABLE 5.12:

Birth Year	Life expectancy in years
1930	59.7
1940	62.9
1950	68.2
1960	69.7
1970	70.8
1980	73.7
1990	75.4
2000	77

The table below lists the high temperature for the first day of each month in 2006 in San Diego, California (Weather Underground). Use this table to answer the questions.

12. Draw a scatter plot of the data.
13. Use a line of best fit to estimate the temperature in the middle of the 4th month (month 4.5).
14. Use linear interpolation to estimate the temperature in the middle of the 4th month (month 4.5).
15. Use a line of best fit to estimate the temperature for month 13 (January 2007).
16. Use linear extrapolation to estimate the temperature for month 13 (January 2007).
17. Which method gives better estimates for this data set? Why?

TABLE 5.13:

Month number	Temperature (F)
1	63
2	66
3	61
4	64
5	71
6	78
7	88
8	78
9	81
10	75
11	68
12	69

Mixed Review

18. Simplify $6t(-2 + 7t) - t(4 + 3t)$.
19. Solve for y : $\frac{119}{8} = \frac{-10}{3}(y + \frac{7}{5}) - \frac{5}{2}$.
20. Determine the final cost. Original cost of jacket: \$45.00; 15% markup; and 8% sales tax.
21. Write as a fraction: 0.096.
22. Is this function an example of direct variation? $g(t) = -35t + 15$. Explain your answer.
23. The following data shows the number of youth-aged homicides at school during various years (source: http://nces.ed.gov/programs/crimeindicators/crimeindicators2009/tables/table_01_1.asp).

Year	1993	1995	1997	1999	2001	2003	2005	2007
	34	28	28	33	14	18	22	30

- a. Graph this data and connect the data points.
- b. What conclusions can you make regarding this data?
- c. There seems to be a large drop in school homicides between 1999 and 2001. What could have happened to cause such a large gap?
- d. Make a prediction about 2009 using this data.

5.13 Dimensional Analysis

Here you'll learn how to convert or cancel dimensions in order to solve real-world problems.

What if you went to the grocery store and bought 3 gallons of milk? Could you determine how many pints of milk you purchased? Or how about if you bought 16 pints of milk? How many gallons would this be? In this Concept, you'll learn to make conversions like these so that you can solve real-world problems.

Guidance

Real-world information is given in **dimensions**, or the units in which the value is measured. For example, the following are all examples of dimensions.

- Inches
- Feet
- Liters
- Micrograms
- Acres
- Hours
- Pounds
- Students

Analyzing dimensions can help you solve problems in travel, astronomy, physics, engineering, forensics, and quality. Solving problems by converting dimensions or canceling dimensions is the focus of this Concept.



Consider the distance formula $distance = rate \cdot time$. This formula can be rewritten for $rate$. $rate = \frac{distance}{time}$. If $distance$ is measured in kilometers, and $time$ is measured in hours, the rate would have the dimensions $\frac{kilometers}{hours}$.

You can treat dimensions as variables. Identical units can divide out, or cancel. For example, $\frac{kilometers}{hour} \cdot hour \rightarrow kilometers$.

Sometimes the units will not divide out. In this case, a **conversion factor** is needed.

Example A

Convert $\frac{35 \text{ kilometers}}{\text{hour}}$ to meters.

Solution:

Since *kilometers* \neq *meters*, you need to **convert** kilometers to meters to get the answer. You know there are 1,000 meters in a kilometer. Therefore, you will need to multiply the original dimension by this factor.

$$\frac{35 \text{ kilometers}}{\text{hour}} \cdot \frac{1000 \text{ meters}}{1 \text{ kilometer}} \rightarrow \frac{35 \cancel{\text{kilometers}}}{\text{hour}} \cdot \frac{1000 \text{ meters}}{1 \cancel{\text{kilometer}}} = \frac{35(1000)\text{meters}}{\text{hour}}$$

$$\frac{35 \cancel{\text{kilometers}}}{\text{hour}} = \frac{35,000 \text{ meters}}{\text{hour}}$$

The process of using units or dimensions to help solve a problem is called **dimensional analysis**. It is very useful in chemistry and travel, as shown in the examples below.

Example B

How many seconds are in a month?

Solution: This situation can be solved easily using multiplication. However, the process you use when multiplying the values together is an example of dimensional analysis.

Begin with what you know:

- 60 seconds in one minute
- 60 minutes in one hour
- 24 hours in one day
- Approximately 30 days in one month



Now write the expression to convert the seconds in one minute to one month.

$$\frac{60 \text{ seconds}}{1 \text{ minute}} \cdot \frac{60 \text{ minutes}}{1 \text{ hour}} \cdot \frac{24 \text{ hours}}{1 \text{ day}} \cdot \frac{30 \text{ days}}{1 \text{ month}}$$

Identical units cross-cancel.

$$\frac{60 \text{ seconds}}{1 \cancel{\text{minute}}} \cdot \frac{60 \cancel{\text{minutes}}}{1 \cancel{\text{hour}}} \cdot \frac{24 \cancel{\text{hours}}}{1 \cancel{\text{day}}} \cdot \frac{30 \cancel{\text{days}}}{1 \text{ month}}$$

Multiply the fractions together.

$$\frac{60 \cdot 60 \cdot 24 \cdot 30 \text{ seconds}}{1 \cdot 1 \cdot 1 \cdot 1 \text{ month}} = 2,592,000 \frac{\text{seconds}}{\text{month}}$$

Example C

How many grams are in 5 pounds?

Solution: Begin by writing all the conversions you know related to this situation.

$$\begin{aligned} 1 \text{ gram} &\approx 0.0353 \text{ ounces} \\ 16 \text{ ounces} &= 1 \text{ pound} \end{aligned}$$

Write your dimensional analysis.

$$5 \text{ pounds} \cdot \frac{16 \text{ ounces}}{1 \text{ pound}} \cdot \frac{1 \text{ gram}}{0.0353 \text{ ounce}}$$

Cross-cancel identical units and multiply.

$$5 \text{ pounds} \cdot \frac{16 \text{ ounces}}{1 \text{ pound}} \cdot \frac{1 \text{ gram}}{0.0353 \text{ ounce}} = 2226.29 \text{ grams}$$

A long list of conversion factors can be found at this [website](#).

Video Review



MEDIA

Click image to the left for more content.



MEDIA

Click image to the left for more content.

Guided Practice

You are traveling in Europe and want to know how fast to drive to maximize fuel efficiency. The optimal driving speed for fuel efficiency is 55 miles per hour. How fast would that be in kilometers per hour?

Solution:

Since 1 mile is approximately 1.6 kilometers:

$$\frac{55 \text{ miles}}{\text{hour}} \cdot \frac{1.6 \text{ kilometers}}{1 \text{ mile}} \rightarrow \frac{55 \cancel{\text{miles}}}{\text{hour}} \cdot \frac{1.6 \text{ kilometers}}{1 \cancel{\text{mile}}} \rightarrow \frac{88 \text{ kilometers}}{\text{hour}}$$

The optimal speed for fuel efficiency is 88 kilometers per hour.

Practice

1. *True or false?* Dimensional analysis is the study of space and time.
2. By using dimensional analysis, what happens to identical units that appear diagonally in the multiplication of fractions?
3. How many feet are in a mile?
4. How many inches are in a mile?
5. How many seconds are in a day?
6. How many seconds are in a year?
7. How many feet are in a furlong?
8. How many inches are in 100 yards (one football field)?
9. How many centimeters are in 5 inches?
10. How many meters are between first and second base (90 feet)?
11. How many meters are in 16 yards?
12. How many cups are in 6 liters?
13. How many cubic inches make up one ounce?
14. How many milliliters make up 8 ounces?
15. How many grams are in 100 pounds?
16. An allergy pill contains 25 mg of Diphenhydramine. If 1 *gram* = 15.432 *grains*, how many grains of this medication are in the allergy pill?
17. A healthy individual's heart beats about 68 times per minute. How many beats per hour is this?
18. You live 6.2 miles from the grocery store. How many fathoms is this? (6 *feet* = 1 *fathom*)
19. The cost of gas in England is 96.4 *pound sterling/liter*. How much is this in *U.S. dollars/gallon*? (3.875 *litres* = 1 *gallon* and 1.47 *US\$* = 1 *pound sterling*)
20. Light travels $\frac{186,000 \text{ miles}}{\text{second}}$. How long is one light year?
21. Another way to describe light years is in *astronomical units*. If 1 *light year* = 63,240 *AU* (*astronomical units*), how far in *AUs* is Alpha Centauri, which is 4.32 light years from the Earth?
22. How many square feet is 16 acres?
23. A person weighs 264 pounds. How many kilograms is this weight?
24. A car is traveling 65 *miles/hour* and crosses into Canada. What is this speed in *km/hr*?
25. A large soda cup holds 32 ounces. What is this capacity in cubic inches?
26. A space shuttle travels 28,000 mph. What is this distance in *feet/second*?
27. How many hours are in a fortnight (two weeks)?
28. How many fortnights (two-week periods) are in 2 years?
29. A semi truck weighs 32,000 pounds empty. How many tons is this weight?
30. Which has the greatest volume: a 2-liter bottle of soda, one gallon of water, or 10 pints of human blood?

Mixed Review

31. Solve for x : $-2x + 8 = 8(1 - 4x)$.
32. Simplify: $3 - 2(5 - 8h) + 13h \cdot 3$.
33. Find the difference: $-26.375 - (-14\frac{1}{8})$.
34. Find the product: $-2\frac{3}{7} \cdot \frac{9}{10}$.
35. Simplify: $\sqrt{80}$.

36. Is $5.\bar{5}$ an irrational number? Explain your answer.

Use the relation given for the following questions: $\{(0, 8), (1, 4), (2, 2), (3, 1), (4, \frac{1}{2}), (5, \frac{1}{4})\}$.

37. State the domain.
38. State the range.
39. Is this relation a function? Explain your answer.
40. What seems to be the pattern in this relation?

Summary

This chapter begins by talking about how to write a linear equation when given the slope and a point and when given two points. It then covers the various forms of a linear equation, including slope-intercept form, point-slope form, and standard form, and it discusses how to solve real-world problems using linear models. Next, equations of parallel lines and perpendicular lines are examined, and families of lines are introduced. Instruction is then given on fitting lines to data and using linear models to predict, and the chapter concludes by outlining the problem-solving strategies of using a linear model and dimensional analysis.

Writing Linear Equations Review

Find the equation of the line in slope-intercept form using the given information.

1. $(3, 4)$ with $slope = \frac{2}{3}$
2. $slope = -5$, y -intercept = 9
3. $slope = -1$ containing $(6, 0)$
4. containing $(3.5, 1)$ and $(9, 6)$
5. $slope = 3$, y -intercept = -1
6. $slope = \frac{-1}{3}$ containing $(-3, -4)$
7. containing $(0, 0)$ and $(9, -8)$
8. $slope = \frac{5}{3}$, y -intercept = 6
9. containing $(5, 2)$ and $(-6, -3)$
10. $slope = 3$ and $f(6) = 1$
11. $f(2) = -5$ and $f(-6) = 3$
12. $slope = \frac{3}{8}$ and $f(1) = 1$

Find an equation of the line in point-slope form using the given information.

13. $slope = m$ containing (x_1, y_1)
14. $slope = \frac{1}{2}$ containing $(-7, 5)$
15. $slope = 2$ containing $(7, 0)$

Graph the following equations.

16. $y + 3 = -(x - 2)$
17. $y - 7 = \frac{-2}{3}(x + 5)$
18. $y + 1.5 = \frac{3}{2}(x + 4)$

Find the equation of the line represented by the function below in point-slope form.

19. $f(1) = -3$ and $f(6) = 0$
20. $f(9) = 2$ and $f(9) = -5$
21. $f(2) = 0$ and $slope = \frac{8}{3}$

Write the standard form of the equation of each line.

23. $y - 3 = \frac{-1}{4}(x + 4)$
24. $y = \frac{2}{7}(x - 21)$
25. $-3x - 25 = 5y$

Write the standard form of the line for each equation using the given information.

25. containing $(0, -4)$ and $(-1, 5)$
26. $slope = \frac{4}{3}$ containing $(3, 2)$
27. $slope = 5$ containing $(5, 0)$
28. Find the slope and y -intercept of $7x + 5y = 16$.
29. Find the slope and y -intercept of $7x - 7y = -14$.
30. Are $\frac{1}{2}x + \frac{1}{2}y = 5$ and $2x + 2y = 3$ parallel, perpendicular, or neither?
31. Are $x = 4$ and $y = -2$ parallel, perpendicular, or neither?
32. Are $2x + 8y = 26$ and $x + 4y = 13$ parallel, perpendicular, or neither?
33. Write an equation for the line perpendicular to $y = 3x + 4$ containing $(-5, 1)$.
34. Write an equation for the line parallel to $y = x + 5$ containing $(-4, -4)$.
35. Write an equation for the line perpendicular to $9x + 5y = 25$ containing $(-4, 4)$.
36. Write an equation for the line parallel to $y = 5$ containing $(-7, 16)$.
37. Write an equation for the line parallel to $x = 0$ containing $(4, 6)$.
38. Write an equation for the line perpendicular to $y = -2$ containing $(10, 10)$.
39. An Internet café charges \$6.00 to use 65 minutes of their Wifi. It charges \$8.25 to use 100 minutes. Suppose the relationship is linear.
 1. Write an equation to model this data in point-slope form.
 2. What is the price to acquire the IP address?
 3. How much does the café charge per minute?
40. A tomato plant grows $\frac{1}{2}$ inch per week. The plant was 5 inches tall when planted.
 - a. Write an equation in slope-intercept form to represent this situation.
 - b. How many weeks will it take the plant to reach 18 inches tall?
41. Joshua bought a television and paid 6% sales tax. He then bought an albino snake and paid 4.5% sales tax. His combined purchases totaled \$679.25.
 - a. Write an equation to represent Joshua's purchases.
 - b. Graph all the possible solutions to this situation.
 - c. Give three examples that would be solutions to this equation.
42. Comfy Horse Restaurant began with a 5-gallon bucket of dishwashing detergent. Each day $\frac{1}{4}$ gallon is used.
 - a. Write an equation to represent this situation in slope-intercept form.
 - b. How long will it take to empty the bucket?
43. The data below shows the divorce rate per 1,000 people in the state of Wyoming for various years (source: Nation Masters).
 - a. Graph the data in a scatter plot.
 - b. Fit a line to the data by hand.
 - c. Find the line of best fit by hand.
 - d. Using your model, what do you predict the divorce rate is in the state of Wyoming in the year 2011?

- e. Repeat this process using your graphing calculator. How close was your line to the one the calculator provided?

Year	2000	2001	2002	2003	2004	2005	2006	2007
Rate (per 1,000 people)	5.8	5.8	5.4	5.4	5.3	5.4	5.3	5.0

44. The table below shows the percentage of voter turnout at presidential elections for various years (source The American Presidency Project).

Year	1828	1844	1884	1908	1932	1956	1972	1988	2004
% of Voter Turnout	57.6	78.9	77.5	65.4	56.9	60.6	55.21	50.15	55.27

- (a) Draw a scatter plot of this data.
 (b) Use the linear regression feature on your calculator to determine a line of best fit and draw it on your graph.
 (c) Use the line of best fit to predict the voter turnout for the 2008 election.
 (d) What are some outliers to this data? What could be a cause for these outliers?

45. The data below shows the bacteria population in a Petri dish after h hours.

h hours	0	1	2	3	4	5	6
Bacteria present	100	200	400	800	1600	3200	6400

- (a) Use the method of interpolation to find the number of bacteria present after 4.25 hours.
 (b) Use the method of extrapolation to find the number of bacteria present after 10 hours.
 (c) Could this data be best modeled with a linear equation? Explain your answer.

46. How many seconds are in 3 months?
 47. How many inches are in a kilometer?
 48. How many cubic inches are in a gallon of milk?
 49. How many meters are in 100 acres?
 50. How many fathoms is 616 feet?

Writing Linear Equations Test

- Write $y = \frac{-3}{2}x + 4$ in standard form.
- Write an equation in slope-intercept form for a line perpendicular to $y = \frac{1}{3}x + 6$ containing $(1, 2)$.
- Write an equation in point-slope form for a line containing $(5, 3)$ and $(-6, 0.5)$.
- What is the speed of a car travelling 80 miles/hour in feet/second?
- How many kilometers are in a marathon (26.2 miles)?
- Lucas bought a 5-gallon container of paint. He plans to use $\frac{2}{3}$ gallon per room.
 - Write an equation to represent this situation.
 - How many rooms can Lucas paint before the container is empty?

7. Are these two lines parallel, perpendicular, or neither? Explain your answer by showing your work: $y = 3x - 1$ and $-x + 3y = 6$.
8. The table below gives the gross public debt of the U.S. Treasury for the years 2004–2007.
- 9.

Year	2004	2005	2006	2007
Debt (in billions \$)	7,596.1	8,170.4	8,680.2	9,229.2

1. Make a scatter plot of the data.
 2. Use the method of extrapolation to determine the gross public debt for 2009.
 3. Find a linear regression line using a graphing calculator.
 4. Use the equation found in (c) to determine the gross public debt for 2009.
 5. Which answer seems more accurate, the linear model or the extrapolation?
9. What is the process used to interpolate data?
10. Use the table below to answer the following questions.
- 11.

Hours (h)	0	1	2	3	4
Percentage of mineral remaining	100	50	25	12.5	6.25

1. Draw a scatter plot to represent the data.
2. Would a linear regression line be the best way to represent the data?
3. Use the method of interpolation to find the percentage of mineral remaining when $h = 2.75$.

Texas Instruments Resources

In the CK-12 Texas Instruments Algebra I FlexBook, there are graphing calculator activities designed to supplement the objectives for some of the lessons in this chapter. See <http://www.ck12.org/flexr/chapter/9615>.

CHAPTER

6

Linear Inequalities and Absolute Value

Chapter Outline

- 6.1 INEQUALITY EXPRESSIONS
 - 6.2 INEQUALITIES WITH ADDITION AND SUBTRACTION
 - 6.3 INEQUALITIES WITH MULTIPLICATION AND DIVISION
 - 6.4 MULTI-STEP INEQUALITIES
 - 6.5 COMPOUND INEQUALITIES
 - 6.6 APPLICATIONS WITH INEQUALITIES
 - 6.7 ABSOLUTE VALUE
 - 6.8 ABSOLUTE VALUE EQUATIONS
 - 6.9 GRAPHS OF ABSOLUTE VALUE EQUATIONS
 - 6.10 ABSOLUTE VALUE INEQUALITIES
 - 6.11 LINEAR INEQUALITIES IN TWO VARIABLES
 - 6.12 THEORETICAL AND EXPERIMENTAL PROBABILITY
-

Introduction

This chapter moves beyond equations to the study of inequalities. Many situations have more than one correct answer. A police officer can issue a ticket for any speed exceeding the limit. A rider for the bumper boats must be less than 48 inches tall. Both these situations have many possible answers.



6.1 Inequality Expressions

Here you'll learn how to express inequalities in various forms, as well as how to graph inequalities on a number line.

Suppose you're having a party, and you know that the number of people attending will be greater than or equal to 25. How would you write this inequality? If you had to graph the solutions to this inequality on a number line, could you do it? After completing this Concept, you'll not only be able to express inequalities such as this one with a graph, but you'll also be able to look at a graph and determine what inequality it represents.

Guidance

Verbs that translate into inequalities are:

$>$ "greater than"

\geq "greater than or equal to"

$<$ "less than"

\leq "less than or equal to"

\neq "not equal to"

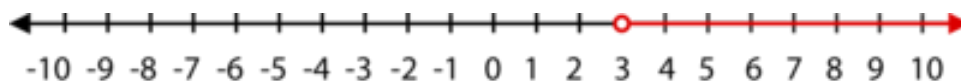
Definition: An **algebraic inequality** is a mathematical sentence connecting an expression to a value, a variable, or another expression with an inequality sign.

Solutions to one-variable inequalities can be graphed on a number line or in a coordinate plane.

Example A

Graph the solutions to $t > 3$ on a number line.

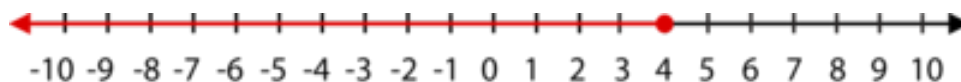
Solution: The inequality is asking for all real numbers larger than 3.



You can also write inequalities given a number line of solutions.

Example B

Write the inequality pictured below.



Solution: The value of four is colored in, meaning that four is a solution to the inequality. The red arrow indicates values less than four. Therefore, the inequality is:

$$x \leq 4$$

Inequalities that “include” the value are shown as \leq or \geq . The line underneath the inequality stands for “or equal to.” We show this relationship by coloring in the circle above this value on the number line, as in the previous example. For inequalities without the “or equal to,” the circle above the value on the number line remains unfilled.

Four Ways to Express Solutions to Inequalities

1. Inequality notation: The answer is expressed as an algebraic inequality, such as $d \leq \frac{1}{2}$.
2. Set notation: The inequality is rewritten using set notation brackets $\{ \}$. For example, $\{d | d \leq \frac{1}{2}\}$ is read, “The set of all values of d , such that d is a real number less than or equal to one-half.”
3. Interval notation: This notation uses brackets to denote the range of values in an inequality.
 1. Square or “closed” brackets $[]$ indicate that the number is **included** in the solution
 2. Round or “open” brackets $()$ indicate that the number is **not included** in the solution.

Interval notation also uses the concept of infinity ∞ and negative infinity $-\infty$. For example, for all values of d that are less than or equal to $\frac{1}{2}$, you could use set notation as follows: $(-\infty, \frac{1}{2}]$.

4. As a graphed sentence on a number line.

Example C

Describe the set of numbers contained by the given set notation for the following:

- a) $(8, 24)$
- b) $[3, 12)$

Solution:

$(8, 24)$ states that the solution is all numbers between 8 and 24 but **does not include** the numbers 8 and 24.

$[3, 12)$ states that the solution is all numbers between 3 and 12, **including** 3 but **not including** 12.

Video Review



MEDIA

Click image to the left for more content.



MEDIA

Click image to the left for more content.

Guided Practice

Describe and graph the solution set expressed by $(\infty, 3.25)$.

Solution:

The solution set contains all numbers less than 3.25, not including 3.25.

The graph on the number line is:



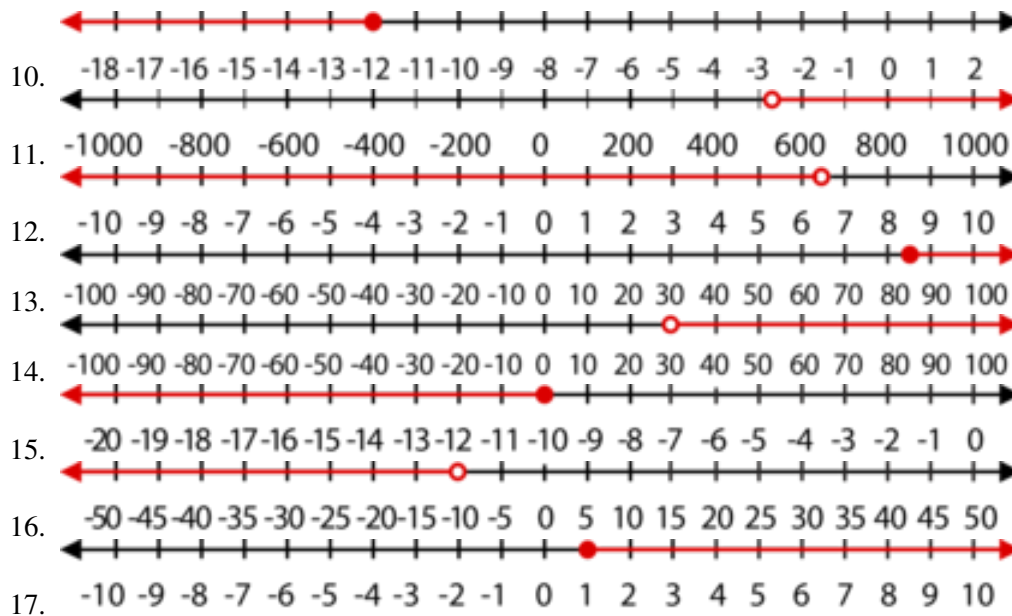
Practice

1. What are the four methods of writing the solution to an inequality?

Graph the solutions to the following inequalities using a number line.

2. $x < -3$
3. $x \geq 6$
4. $x > 0$
5. $x \leq 8$
6. $x < -35$
7. $x > -17$
8. $x \geq 20$
9. $x \leq 3$

Write the inequality that is represented by each graph.



6.2 Inequalities with Addition and Subtraction

Here you'll learn how to use addition and subtraction to find the solutions to one-step inequalities.

Suppose your favorite baseball team had w wins last year, and this year it vows to win 10 more games. It also promises that the number of its wins this year will be greater than or equal 85. Could you determine how many wins the team had last year? In this Concept, you'll learn to solve inequalities such as the one representing this scenario by using addition and subtraction.

Guidance

Inequalities Using Addition or Subtraction

To solve inequalities, you need some properties.

Addition Property of Inequality: For all real numbers a , b , and c :

If $x < a$, then $x + b < a + b$.

If $x < a$, then $x - c < a - c$.

The two properties above are also true for \leq or \geq .

Because subtraction can also be thought of as “**add the opposite,**” these properties also work for subtraction situations.

Just like one-step equations, the goal is to **isolate the variable**, meaning to get the variable alone on one side of the inequality symbol. To do this, you will cancel the operations using inverses.

Example A

Solve for x : $x - 3 < 10$.

Solution: To isolate the variable x , you must cancel “subtract 3” using its inverse operation, addition.

$$\begin{aligned}x - 3 + 3 &< 10 + 3 \\x &< 13\end{aligned}$$

Now, check your answer. Choose a number less than 13 and substitute it into your original inequality. If you choose 0, and substitute it you get:

$$0 - 3 < 10 = -3 < 10$$

What happens at 13? What happens with numbers greater than 13?

Example B

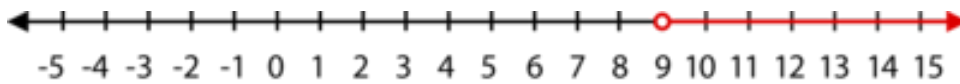
Solve for x : $x + 4 > 13$

Solution:

Subtract 4 from both sides of the inequality.
Simplify.

$$\begin{aligned}x + 4 &> 13 \\x + 4 - 4 &> 13 - 4 \\x &> 9\end{aligned}$$

The solution is shown below in a graph:

**Example C**

Solve for x : $x + \frac{2}{3} \geq -\frac{1}{3}$.

Solution:

Subtract $\frac{2}{3}$ from both sides of the inequality.
Simplify.

$$\begin{aligned}x + \frac{2}{3} &\geq -\frac{1}{3} \\x + \frac{2}{3} - \frac{2}{3} &\geq -\frac{1}{3} - \frac{2}{3} \\x &\geq -1\end{aligned}$$

**Video Review****MEDIA**

Click image to the left for more content.

**MEDIA**

Click image to the left for more content.

Guided Practice

Solve for y : $5.6 > y - 3.4$.

Solution:

Add 3.3 to both sides of the inequality.

Simplify.

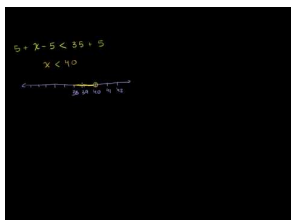
$$5.6 > y - 3.3$$

$$5.6 + 3.3 > y - 3.3 + 3.3$$

$$8.9 > y$$

**Practice**

Sample explanations for some of the practice exercises below are available by viewing the following video. Note that there is not always a match between the number of the practice exercise in the video and the number of the practice exercise listed in the following exercise set. However, the practice exercise is the same in both. [CK-12 Basic Algebra: Inequalities Using Addition and Subtraction](#) (7:48)

**MEDIA**

Click image to the left for more content.

Solve each inequality and graph the solution on a number line.

1. $x - 1 > -10$
2. $x - 1 \leq -5$
3. $-20 + a \geq 14$
4. $x + 2 < 7$
5. $x + 8 \leq -7$
6. $5 + t \geq \frac{3}{4}$
7. $x - 5 < 35$
8. $15 + g \geq -60$
9. $x - 2 \leq 1$
10. $x - 8 > -20$
11. $11 + q > 13$
12. $x + 65 < 100$
13. $x - 32 \leq 0$
14. $x + 68 \geq 75$
15. $16 + y \leq 0$

Mixed Review

16. Write an equation containing $(3, -6)$ and $(-2, -2)$.
17. Simplify: $|2 - 11 \times 3| + 1$.
18. Graph $y = -5$ on a coordinate plane.
19. y varies directly as x . When $x = -1$, $y = \frac{4}{5}$. Find y when $x = \frac{16}{3}$.
20. Rewrite in slope-intercept form: $-2x + 7y = 63$.

6.3 Inequalities with Multiplication and Division

Here you'll learn how to use multiplication and division to find the solutions to one-step inequalities.

What if the distance in miles of a bowling alley from your house is $\frac{1}{5}$ of the distance of a roller-skating rink from your house? The distance of the roller-skating rink is represented by r , and you know that the bowling alley is less than or equal to 6 miles from your house. How far is the roller-skating rink from your house? After completing this Concept, you'll be able to solve inequalities like the one representing this scenario by using multiplication and division.

Watch This

Multimedia Link: For help with solving inequalities involving multiplication and division, visit Khan Academy's website: <http://khanexercis.es.appspot.com/video?v=PNXozoJWsWc>.

Guidance

Equations are mathematical sentences in which the two sides have the same “weight.” By adding, subtracting, multiplying, or dividing the same value to both sides of the equation, the balance stays in check. However, inequalities begin off-balance. When you perform inverse operations, the inequality will remain off-balance. This is true with inequalities involving both multiplication and division.

Before we can begin to solve inequalities involving multiplication or division, you need to know two properties: the Multiplication Property of Inequality and the Division Property of Inequality.

Multiplication Property of Inequality: For all real positive numbers a , b , and c :

If $x < a$, then $x(c) < a(c)$.

If $x > a$, then $x(c) > a(c)$.

Division Property of Inequality: For all real positive numbers a , b , and c :

If $x < a$, then $x \div (c) < a \div (c)$.

If $x > a$, then $x \div (c) > a \div (c)$.

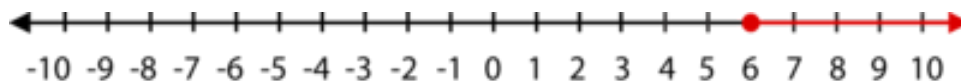
Example A

Consider the inequality $2x \geq 12$. To find the solutions to this inequality, we must isolate the variable x by using the inverse operation of “multiply by 2,” which is dividing by 2.

$$\begin{aligned} 2x &\geq 12 \\ \frac{2x}{2} &\geq \frac{12}{2} \\ x &\geq 6 \end{aligned}$$

This solution can be expressed in four ways. One way is already written: $x \geq 6$. Below are the three remaining ways to express this solution:

- $\{x|x \geq 6\}$
- $[6, \infty)$
- Using a number line:



Example B

Solve for y : $\frac{y}{5} \leq 3$. Express the solution using all four methods.

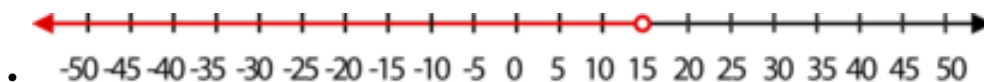
Solution: The inequality above is read, “ y divided by 5 is less than or equal to 3.” To isolate the variable y , you must cancel division using its inverse operation, multiplication.

$$\begin{aligned} \frac{y}{5} \cdot \frac{5}{1} &\leq 3 \cdot \frac{5}{1} \\ y &\leq 15 \end{aligned}$$

One method of writing the solution is $y \leq 15$.

The other three are:

- $(-\infty, 15]$
- $\{y|y \leq 15\}$



Multiplying and Dividing an Inequality by a Negative Number

Notice that the two properties in this Concept focused on c being only positive. This is because those particular properties of multiplication and division do not apply when the number being multiplied (or divided) is negative.

Think of it this way. When you multiply a value by -1 , the number you get is the negative of the original.

$$6(-1) = -6$$

Multiplying each side of a sentence by -1 results in the opposite of both values.

$$\begin{aligned} 5x(-1) &= 4(-1) \\ -5x &= -4 \end{aligned}$$

When multiplying by a negative, you are doing the “opposite” of everything in the sentence, including the verb.

$$\begin{aligned} x &> 4 \\ x(-1) &> 4(-1) \\ -x &< -4 \end{aligned}$$

This concept is summarized below.

Multiplication/Division Rule of Inequality: For any real number a , and any **negative** number c ,

If $x < a$, then $x \cdot c > a \cdot c$

If $x < a$, then $\frac{x}{c} > \frac{a}{c}$

As with the other properties of inequalities, these also hold true for \leq or \geq .

Example C

Solve for r : $-3r < 9$.

Solution: To isolate the variable r , we must cancel “multiply by -3 ” using its inverse operation, dividing by -3 .

$$\frac{-3r}{-3} < \frac{9}{-3}$$

Since you are dividing by -3 , everything becomes opposite, including the inequality sign.

$$r > -3$$

Example D

Solve for p : $12p < -30$.

Solution: To isolate the variable p , we must cancel “multiply by 12 ” using its inverse operation, dividing by 12 .

$$\frac{12p}{12} < \frac{-30}{12}$$

Because 12 is **not** negative, you do **not** switch the inequality sign.

$$p < \frac{-5}{2}$$

In set notation, the solution would be: $(-\infty, \frac{-5}{2})$.

Video Review



MEDIA

Click image to the left for more content.



MEDIA

Click image to the left for more content.

Guided Practice

Solve for m : $-\frac{m}{3} < 2.4$.

Solution:

To isolate the variable m , we must cancel “divide by 3” using its inverse operation, multiplying by 3. We must also cancel out the negative, so we would multiply by -1. Multiplying by 3 and -1 means multiplying by -3.

$$-3 \cdot -\frac{m}{3} < -3 \cdot 2.4$$

Because -3 is negative, you need to switch the inequality sign.

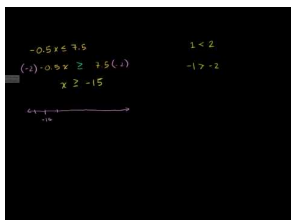
$$m > -7.2$$

In set notation, the solution would be: $(-7.2, \infty)$.

This means that m must be greater than -7.2, but not equal to it.

Practice

Sample explanations for some of the practice exercises below are available by viewing the following video. Note that there is not always a match between the number of the practice exercise in the video and the number of the practice exercise listed in the following exercise set. However, the practice exercise is the same in both. [CK-12 Basic Algebra: Inequalities Using Multiplication and Division \(10:27\)](#)



MEDIA

Click image to the left for more content.

- In which cases do you change the inequality sign?

Solve each inequality. Give the solution using inequality notation and with a solution graph.

- $3x \leq 6$
- $\frac{x}{5} > -\frac{3}{10}$
- $-10x > 250$
- $\frac{x}{-7} \geq -5$
- $9x > -\frac{3}{4}$
- $\frac{x}{-15} \leq 5$
- $620x > 2400$
- $\frac{x}{20} \geq -\frac{7}{40}$
- $-0.5x \leq 7.5$
- $75x \geq 125$

12. $\frac{x}{-3} > -\frac{10}{9}$
13. $\frac{k}{-14} \leq 1$
14. $\frac{x}{-15} < 8$
15. $\frac{x}{2} > 40$
16. $\frac{x}{-3} \leq -12$
17. $\frac{x}{25} < \frac{3}{2}$
18. $\frac{x}{-7} \geq 9$
19. $4x < 24$
20. $238 < 14d$
21. $-19m \leq -285$
22. $-9x \geq -\frac{3}{5}$
23. $-5x \leq 21$

Mixed Review

24. After 3 dozen cookies, Anna has fewer than 24 to make.
 1. Write an inequality to represent this situation. Let $c =$ the number of cookies Anna had to make.
 2. Write the solutions in set notation.

25. Tracey's checking account balance is \$31.85. He needs to deposit enough money to pay his satellite T.V. bill, which is \$97.12.
 1. Write an inequality to represent this situation.
 2. Write the solutions as an algebraic sentence.

26. Solve for v : $v = -|2 - (-19) + 6|$.
27. A piggy bank is filled with dimes and quarters. The total amount of money is \$26.00.
 1. Graph all the combinations that make this statement true.
 2. If \$13.50 is in quarters, how many dimes must be in the piggy bank?

6.4 Multi-Step Inequalities

Here you'll learn how to use the distributive, addition, subtraction, multiplication, and division properties to find the solutions to multi-step inequalities.

Suppose that you know that 10 less than 3 times the number of coins in your piggy bank is greater than 200. If the number of coins in your piggy bank is represented by c , how would you go about finding the value of this variable? In this Concept, you'll learn how to solve multi-step inequalities such as the one representing this scenario by using the distributive, addition, subtraction, multiplication, and division properties.

Guidance

The previous two Concepts focused on one-step inequalities. Inequalities, like equations, can require several steps to isolate the variable. These inequalities are called **multi-step inequalities**. With the exception of the Multiplication/Division Property of Inequality, the process of solving multi-step inequalities is identical to solving multi-step equations.

Procedure to Solve an Inequality:

1. Remove any parentheses by using the Distributive Property.
2. Simplify each side of the inequality by combining like terms.
3. Isolate the ax term. Use the Addition/Subtraction Property of Inequality to get the variable on one side of the inequality sign and the numerical values on the other.
4. Isolate the variable. Use the Multiplication/Division Property of Inequality to get the variable alone on one side of the inequality.
 - a. Remember to reverse the inequality sign if you are multiplying or dividing by a negative number.
5. Check your solution.

Example A

Solve for w : $6x - 5 < 10$.

Solution: Begin by using the checklist above.

1. Parentheses? No
2. Like terms on the same side of inequality? No
3. Isolate the ax term using the Addition Property.

$$6x - 5 + 5 < 10 + 5$$

Simplify.

$$6x < 15$$

4. Isolate the variable using the Multiplication or Division Property.

$$\frac{6x}{6} < \frac{15}{6} = x < \frac{5}{2}$$

5. Check your solution. Choose a number less than 2.5, say 0, and check using the original inequality.

$$\begin{aligned} 6(0) - 5 &< 10? \\ -5 &< 10 \end{aligned}$$

Yes, the answer checks. $x < 2.5$

Example B

Solve for x : $-9x < -5x - 15$.

Solution: Begin by using the checklist above.

1. Parentheses? No
2. Like terms on the same side of inequality? No
3. Isolate the ax term using the Addition Property.

$$-9x + 5x < -5x + 5x - 15$$

Simplify.

$$-4x < -15$$

4. Isolate the variable using the Multiplication or Division Property.

$$\frac{-4x}{-4} < \frac{-15}{-4}$$

Because the number you are dividing by is negative, you must reverse the inequality sign.

$$x > \frac{15}{4} \rightarrow x > 3\frac{3}{4}$$

5. Check your solution by choosing a number larger than 3.75, such as 10.

$$\begin{aligned} -9(10) &< -5(10) - 15? \\ \checkmark -90 &< -65 \end{aligned}$$

Identifying the Number of Solutions to an Inequality

Inequalities can have infinitely many solutions, no solutions, or a finite set of solutions. Most of the inequalities you have solved to this point have an infinite number of solutions. By solving inequalities and using the context of a problem, you can determine the number of solutions an inequality may have.

Example C

Find the solutions to $x - 5 > x + 6$.

Solution: Begin by isolating the variable using the Addition Property of Inequality.

$$x - x - 5 > x - x + 6$$

Simplify.

$$-5 > 6$$

This is an untrue inequality. Negative five is never greater than six. Therefore, the inequality $x - 5 > x + 6$ has no solutions.

Example D

Previously we looked at the following sentence: “The speed limit is 65 miles per hour.” Use inequalities and set notation to describe the set of possible speeds at which a car could drive under the speed limit.

Solution:

The speed at which you drive cannot be negative, which means $0 \leq s$, and it must be less than 65 miles per hour, so $s < 65$. Combining these we get $0 \leq s < 65$. Therefore, the set of possibilities using interval notation is $[0, 65)$.

This solution set has infinitely many solutions, since there are infinitely many real numbers between 0 and 65.

Video Review

MEDIA

Click image to the left for more content.



MEDIA

Click image to the left for more content.

Guided Practice

Solve for x : $4x - 2(3x - 9) \leq -4(2x - 9)$.

Solution: Begin by using the previous checklist.

1. Parentheses? Yes. Use the Distributive Property to clear the parentheses.

$$4x + (-2)(3x) + (-2)(-9) \leq -4(2x) + (-4)(-9)$$

Simplify.

$$4x - 6x + 18 \leq -8x + 36$$

2. Like terms on the same side of inequality? Yes. Combine these.

$$-2x + 18 \leq -8x + 36$$

3. Isolate the ax term using the Addition Property.

$$-2x + 8x + 18 \leq -8x + 8x + 36$$

Simplify.

$$6x + 18 \leq 36$$

$$6x + 18 - 18 \leq 36 - 18$$

$$6x \leq 18$$

4. Isolate the variable using the Multiplication or Division Property.

$$\frac{6x}{6} \leq \frac{18}{6} \rightarrow x \leq 3$$

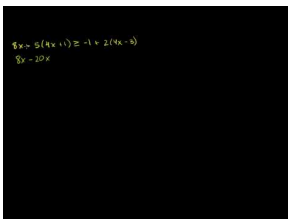
5. Check your solution by choosing a number less than 3, such as -5 .

$$4(-5) - 2(3 \cdot -5 - 9) \leq -4(2 \cdot -5 - 9)$$

$$\checkmark 28 < 76$$

Practice

Sample explanations for some of the practice exercises below are available by viewing the following video. Note that there is not always a match between the number of the practice exercise in the video and the number of the practice exercise listed in the following exercise set. However, the practice exercise is the same in both. [CK-12 Basic Algebra: Multi-Step Inequalities \(8:02\)](#)



MEDIA

Click image to the left for more content.

In 1 – 15, solve each of the inequalities and graph the solution set.

1. $6x - 5 < 10$
2. $-9x < -5x - 15$
3. $-\frac{9x}{5} \leq 24$
4. $\frac{9x}{5} - 7 \geq -3x + 12$
5. $\frac{5x-1}{4} > -2(x+5)$
6. $4x + 3 < -1$
7. $2x < 7x - 36$
8. $5x > 8x + 27$
9. $5 - x < 9 + x$
10. $4 - 6x \leq 2(2x + 3)$
11. $5(4x + 3) \geq 9(x - 2) - x$
12. $2(2x - 1) + 3 < 5(x + 3) - 2x$
13. $8x - 5(4x + 1) \geq -1 + 2(4x - 3)$
14. $2(7x - 2) - 3(x + 2) < 4x - (3x + 4)$
15. $\frac{2}{3}x - \frac{1}{2}(4x - 1) \geq x + 2(x - 3)$

Mixed Review

16. Solve: $10 \geq -5f$.
17. Graph $y = -7$ on a coordinate plane.
18. Classify $\sqrt{5}$ using the real number hierarchy.
19. What are some problem-solving methods you have learned so far in this textbook? List one example for each method.
20. A circle has an area of $A = \pi r^2$. What is the radius of a circle with area of $196\pi \text{ in}^2$?
21. Solve for a : $\frac{6}{a} = \frac{-22}{a+4}$.

6.5 Compound Inequalities

Here you'll learn how to find the solution to a compound inequality and graph it, as well as how to use a graphing calculator to solve the inequality.

What if you spent 2 more hours doing your homework this week than you spent last week? If the number of hours that you spent last week is represented by h , and you spent between 6 and 9 hours this week, how many hours did you spend doing your homework last week? In this Concept, you'll learn how to solve inequalities such as the one representing this scenario and how to graph the solution. You'll also learn how to use a graphing calculator to find the solution.

Guidance

Inequalities that relate to the same topic can be written as a **compound inequality**. A compound inequality involves the connecting words “**and**” and “**or**.”

The word **and** in mathematics means the **intersection** between the sets.

“What the sets have in common.”

The word **or** in mathematics means the **union** of the sets.

“Combining both sets into one large set.”

Inequalities Involving “And”

Consider, for example, the speed limit situation from the previous Concept. Using interval notation, the solutions to this situation can be written as $[0, 65]$. As an inequality, what is being said is this:

The speed must be at least 0 mph and at most 65 mph.

Using inequalities to represent “at least” and “at most,” the following sentences are written:

$$s \geq 0 \text{ and } s \leq 65$$

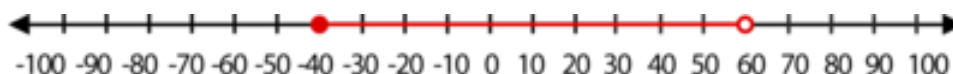
This is an example of a compound inequality. It can be shortened by writing:

$$0 \leq s \leq 65$$

Example A

Graph the solutions to $-40 \leq y < 60$.

Solution: Color in a circle above -40 to represent “less than or equal to.” Draw an uncolored circle above 60 . The variable is placed between these two values, so the solutions occur between these two numbers.



Inequalities Involving “Or”

A restaurant offers discounts to children 3 years or younger or to adults over 65. Write an inequality for the possible ages eligible to receive the discount.

Begin by writing an inequality to represent each piece. “3 years or younger” means you must be born but must not have celebrated your fourth birthday.

$$0 \leq a < 4$$

“Adults over 65” implies $a > 65$.

The word **or** between the phrases allows you to graph all the possibilities on one number line.

Solving “And” Compound Inequalities

When we solve compound inequalities, we separate the inequalities and solve each of them separately. Then, we combine the solutions at the end.

Example B

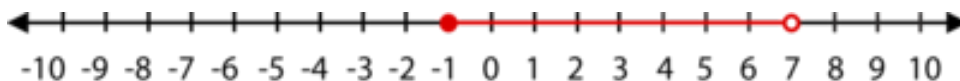
Solve for x and graph your solution: $3x - 5 < x + 9 \leq 5x + 13$.

Solution:

To solve $3x - 5 < x + 9 \leq 5x + 13$, begin by separating the inequalities.

$$\begin{array}{l} 3x - 5 < x + 9 \\ 2x < 14 \\ x < 7 \end{array} \qquad \text{and} \qquad \begin{array}{l} x + 9 \leq 5x + 13 \\ -4 \leq 4x \\ -1 \leq x \text{ or } x \geq -1 \end{array}$$

The answers are $x < 7$ and $x \geq -1$ and can be written as $-1 \leq x < 7$. You graph the solutions that satisfy both inequalities.



Solving “Or” Compound Inequalities

To solve an “or” compound inequality, separate the individual inequalities. Solve each separately. Then combine the solutions to finish the problem.

Example C

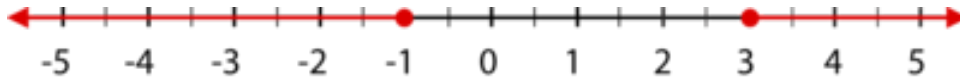
Solve for x and graph the solution: $9 - 2x \leq 3$ or $3x + 10 \leq 6 - x$.

Solution:

To solve $9 - 2x \leq 3$ or $3x + 10 \leq 6 - x$, begin by separating the inequalities.

$$\begin{array}{l} 9 - 2x \leq 3 \\ -2x \leq -6 \\ x \geq 3 \end{array} \qquad \text{or} \qquad \begin{array}{l} 3x + 10 \leq 6 - x \\ 4x \leq -4 \\ x \leq -1 \end{array}$$

The answers are $x \geq 3$ or $x \leq -1$.



Using a Graphing Calculator to Solve Compound Inequalities

As you have seen in previous Concepts, graphing calculators can be used to solve many complex algebraic sentences.

Example D

Solve $7x - 2 < 10x + 1 < 9x + 5$ using a graphing calculator.

Solution:

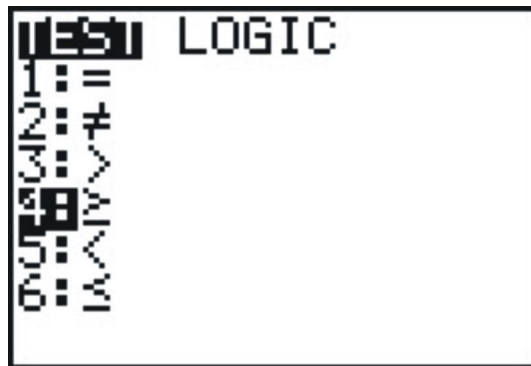
This is a compound inequality: $7x - 2 < 10x + 1$ and $10x + 1 < 9x + 5$.

To enter a compound inequality:

Press the **[Y=]** button.

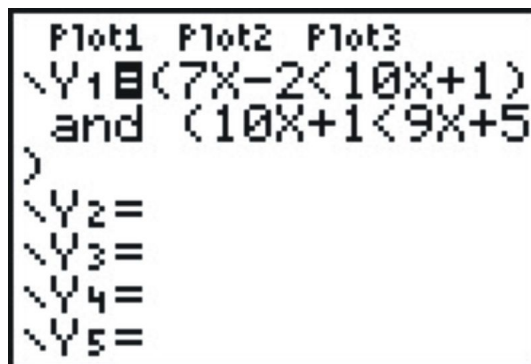
The inequality symbols are found by pressing **[TEST]** **[2nd]** **[MATH]**

Enter the inequality as:



$$Y_1 = (7x - 2 < 10x + 1) \text{ AND } (10x + 1 < 9x + 5)$$

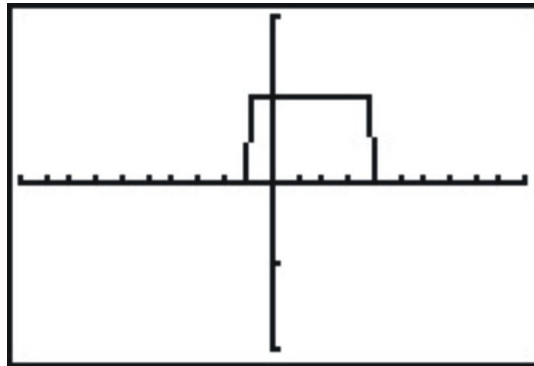
To enter the **[AND]** symbol, press **[TEST]**. Choose **[LOGIC]** on the top row and then select option 1.



The resulting graph is as shown below.

The solutions are the values of x for which $y = 1$.

In this case, $-1 < x < 4$.



Video Review



MEDIA

Click image to the left for more content.



MEDIA

Click image to the left for more content.

Guided Practice

Graph the solution set for $-1 + b > 4$ or $2b + 7 \leq 11$.

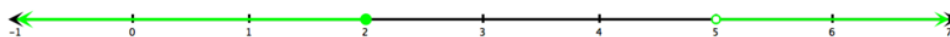
Solution:

Start by solving for b for each inequality.

Start with the inequalities.
Simplify by adding opposites.
Divide if necessary.

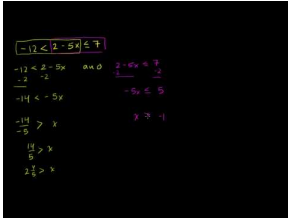
$$\begin{aligned} -1 + b &> 4 \\ b &> 5 \end{aligned}$$

$$\begin{aligned} 2b + 7 &\leq 11 \\ 2b &\leq 4 \\ b &\leq 2 \end{aligned}$$



Practice

Sample explanations for some of the practice exercises below are available by viewing the following video. Note that there is not always a match between the number of the practice exercise in the video and the number of the practice exercise listed in the following exercise set. However, the practice exercise is the same in both. [CK-12 Basic Algebra:Compound Inequalities \(11:45\)](#)

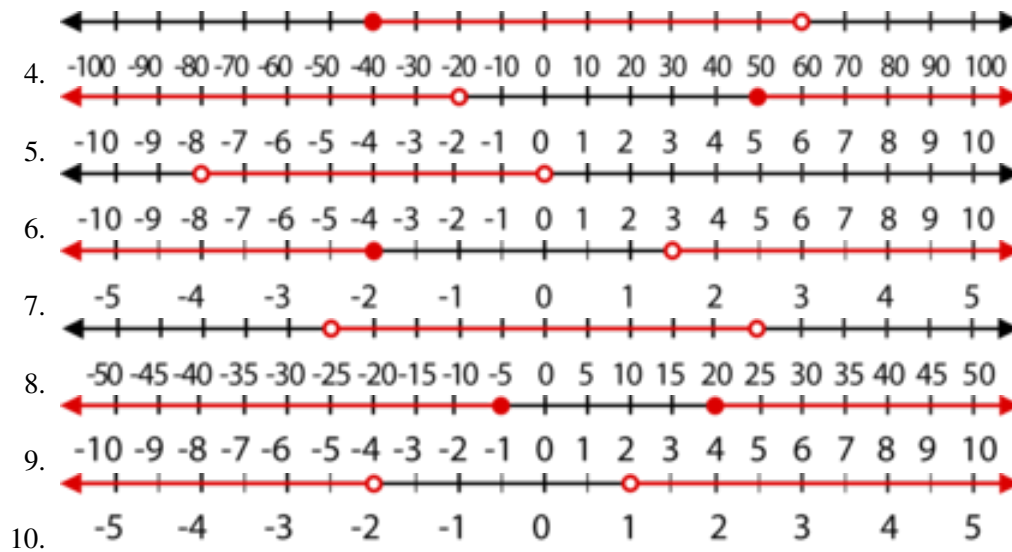


MEDIA

Click image to the left for more content.

1. Describe the solution set to a compound inequality joined by the word “and.”
2. How would your answer to question #1 change if the joining word was “or.”
3. Write the process used to solve a compound inequality.

Write the compound inequalities represented by the following graphs.



Graph each compound inequality on a number line.

11. $-4 \leq x \leq 6$
12. $x < 0$ or $x > 2$
13. $x \geq -8$ or $x \leq -20$
14. $-15 < x \leq 85$

In 15 – 30, solve the following compound inequalities and graph the solution on a number line.

15. $-5 \leq x - 4 \leq 13$
16. $-2 < 4x - 5 \leq 11$
17. $\frac{x-2}{6} \leq 2x - 4$ or $\frac{x-2}{6} > x + 5$
18. $1 \leq 3x + 4 \leq 4$
19. $-12 \leq 2 - 5x \leq 7$

20. $\frac{3}{4} \leq 2x + 9 \leq \frac{3}{2}$
21. $-2 < \frac{2x-1}{3} < -1$
22. $5x + 2(x-3) \geq 2$
23. $3x + 2 \leq 10$ or $3x + 2 \geq 15$
24. $4x - 1 \geq 7$ or $\frac{9x}{2} < 3$
25. $3 - x < -4$ or $3 - x > 10$
26. $\frac{2x+3}{4} < 2$ or $-\frac{x}{5} + 3\frac{2}{5}$
27. $2x - 7 \leq -3$ or $2x - 3 > 11$
28. $-6d > 48$ or $10 + d > 11$
29. $6 + b < 8$ or $b + 6 \geq 6$
30. $4x + 3 \leq 9$ or $-5x + 4 \leq -12$

6.6 Applications with Inequalities

Here you'll learn how to use inequalities to solve real-world problems.

Suppose that a company's budget requires it to spend at least \$20,000 but no more than \$30,000 on training for its employees. The cost of training is the combination of a flat fee of \$5,000 plus \$500 per employee. If the company has m employees, how much is it required to spend per employee? In this Concept, you'll learn how to solve real-world problems such as this one by using inequalities.

Guidance

As you saw with equations, inequalities are also useful for solving real-world problems. In this Concept, you will see some examples of how to set up and solve real-world problems.

Example A

In order to get a bonus this month, Leon must sell at least 120 newspaper subscriptions. He sold 85 subscriptions in the first three weeks of the month. How many subscriptions must Leon sell in the last week of the month?

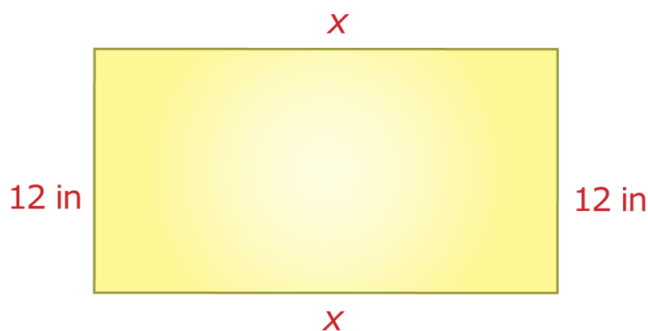
Solution: The number of subscriptions Leon needs is "at least" 120. Choose a variable, such as n , to represent the varying quantity—the number of subscriptions. The inequality that represents the situation is $n + 85 \geq 120$.

Solve by isolating the variable n : $n \geq 35$.

Leon must sell 35 or more subscriptions to receive his bonus.

Example B

The width of a rectangle is 12 inches. What must the length be if the perimeter is at least 180 inches? (Note: Diagram not drawn to scale.)



Solution: The perimeter is the sum of all the sides.

$$12 + 12 + x + x \geq 180$$

Simplify and solve for the variable x :

$$\begin{aligned}
 12 + 12 + x + x &\geq 180 \rightarrow 24 + 2x \geq 180 \\
 2x &\geq 156 \\
 x &\geq 78
 \end{aligned}$$

The length of the rectangle must be 78 inches or greater.

Example C

The speed of a golf ball in the air is given by the formula $v = -32t + 80$, where t is the time since the ball was hit. When is the ball traveling between 20 ft/sec and 30 ft/sec inclusive?



Solution: We want to find the times when the ball is traveling between 20 ft/sec and 30 ft/sec inclusive. Begin by writing the inequality to represent the unknown values, $20 \leq v \leq 30$.

Replace the velocity formula, $v = -32t + 80$, with the minimum and maximum values.

$$20 \leq -32t + 80 \leq 30$$

Separate the compound inequality and solve each separate inequality.

$$\begin{array}{ccc}
 20 \leq -32t + 80 & & -32t + 80 \leq 30 \\
 32t \leq 60 & \text{and} & 50 \leq 32t \\
 t \leq 1.875 & & 1.56 \leq t
 \end{array}$$

$1.56 \leq t \leq 1.875$. Between 1.56 and 1.875 seconds, the ball is traveling between 20 ft/sec and 30 ft/sec.

Inequalities can also be combined with dimensional analysis.

Video Review




MEDIA
Click image to the left for more content.



MEDIA
Click image to the left for more content.

Guided Practice

William's pick-up truck gets between 18 and 22 miles per gallon of gasoline. His gas tank can hold 15 gallons of gasoline. If he drives at an average speed of 40 miles per hour, how much driving time does he get on a full tank of gas?



Solution: Use dimensional analysis to get from time per tank to miles per gallon.

$$\frac{t \text{ hour}}{1 \text{ tank}} \times \frac{1 \text{ tank}}{15 \text{ gallons}} \times \frac{40 \text{ miles}}{1 \text{ hour}} = \frac{40t \text{ miles}}{15 \text{ gallon}}$$

Since the truck gets between 18 to 22 miles/gallon, you can write a compound inequality.

$$18 \leq \frac{40t}{15} \leq 22$$

Separate the compound inequality and solve each inequality separately.

$$\begin{array}{l} 18 \leq \frac{40t}{15} \\ 270 \leq 40t \\ 6.75 \leq t \end{array} \qquad \text{and} \qquad \begin{array}{l} \frac{40t}{15} \leq 22 \\ 40t \leq 330 \\ t \leq 8.25 \end{array}$$

Andrew can drive between 6.75 and 8.25 hours on a full tank of gas.

Practice

For problems 1-5, write the inequality given by the statement. Choose an appropriate letter to describe the unknown quantity.

1. You must be at least 48 inches tall to ride the “Thunderbolt” Rollercoaster.
 2. You must be younger than 3 years old to get free admission at the San Diego Zoo.
 3. Charlie needs more than \$1,800 to purchase a car.
 4. Cheryl can have no more than six pets at her house.
 5. The shelter can house no more than 16 rabbits.
-
6. The width of a rectangle is 16 inches. Its area is greater than 180 square inches.
 1. Write an inequality to represent this situation.
 2. Graph the possible lengths of the rectangle.
 7. Ninety percent of some number is at most 45.
 1. Write an inequality to represent the situation.
 2. Write the solutions as an algebraic sentence.
 8. Doubling Martha’s jam recipe yields at least 22 pints.
 1. Write an inequality to represent the situation.
 2. Write the solutions using interval notation.

For problems 9-15, write the inequality and use it solve the problem.

9. At the San Diego Zoo, you can either pay \$22.75 for the entrance fee or \$71 for the yearly pass, which entitles you to unlimited admission. At most, how many times can you enter the zoo for the \$22.75 entrance fee before spending more than the cost of a yearly membership?
10. Proteek’s scores for four tests were 82, 95, 86, and 88. What will he have to score on his last test to average at least 90 for the term?
11. Raul is buying ties and he wants to spend \$200 or less on his purchase. The ties he likes the best cost \$50. How many ties could he purchase?
12. Virena’s Scout Troop is trying to raise at least \$650 this spring. How many boxes of cookies must they sell at \$4.50 per box in order to reach their goal?
13. Using the golf ball example, find the times in which the velocity of the ball is between 50 ft/sec and 60 ft/sec .
14. Using the pick-up truck example, suppose William’s truck has a dirty air filter, causing the fuel economy to be between 16 and 18 miles per gallon. How many hours can William drive on a full tank of gas using this information?
15. To get a grade of B in her Algebra class, Stacey must have an average grade greater than or equal to 80 and less than 90. She received the grades of 92, 78, and 85 on her first three tests. Between which scores must her grade fall on her last test if she is to receive a grade of B for the class?

Mixed Review

16. Solve the inequality and write its solution in interval notation: $\frac{x+3}{2} < -4$.
17. Graph $2x - 2y = 6$ using its intercepts.
18. Identify the slope and y -intercept of $y + 1 = \frac{2}{5}(x - 5)$.
19. A yardstick casts a one-foot shadow. What is the length of the shadow of a 16-foot tree?
20. George rents videos through a mail-order company. He can get 16 movies each month for \$16.99. Sheri rents videos through instant watch. She pays \$1.99 per movie. When will George pay less than Sheri?
21. Evaluate: $-2\frac{1}{5} \div 1\frac{3}{4}$.
22. Find a line parallel to $y = 5x - 2$ containing $(1, 1)$.

6.7 Absolute Value

Here you'll review the meaning of absolute value and learn how to find the distance between two numbers on a number line.

What if two people stood back-to-back and then walked in opposite directions? The first person walked 2 miles, while the second person walked 5 miles. How far apart would they be? Could you use a number line to represent this scenario? In this Concept, you'll review the meaning of absolute value and learn to find the distance between two numbers on a number line so that you can solve problems such as this one.

Guidance

The absolute value of a number is the distance from zero on a number line. The numbers 4 and -4 are each four units away from zero on a number line. So, $|4| = 4$ and $|-4| = 4$.

Below is a more formal definition of absolute value.

For any real number x ,

$$|x| = x \text{ for all } x \geq 0$$

$$|x| = -x \text{ (read the opposite of } x) \text{ for all } x < 0$$

The second part of this definition states that the absolute value of a negative number is its opposite (a positive number).

Example A

Evaluate $|-120|$.

Solution:

The absolute value of a negative number is its inverse, or opposite. Therefore, $|-120| = -(-120) = 120$.

Distance on the Number Line

Because the absolute value is always positive, it can be used to find the distance between two values on a number line.

The distance between two values x and y on a number line is found by:

$$\text{distance} = |x - y| \text{ or } |y - x|$$

Example B

Find the distance between -5 and 8 .

Solution:

Use the definition of distance. Let $x = -5$ and $y = 8$.

$$\text{distance} = |-5 - 8| = |-13|$$

The absolute value of -13 is 13 , so -5 and 8 are 13 units apart.

Check on the graph below that the length of the line between the points -5 and 8 is 13 units long:



Example C

Find the distance between -12 and 3 .

Solution:

Use the definition of distance. Let $x = 3$ and $y = -12$.

$$\text{distance} = |3 - (-12)| = |3 + 12| = |15| = 15$$

The absolute value of 15 is 15 , so 3 and -12 are 15 units apart.

Video Review



MEDIA

Click image to the left for more content.



MEDIA

Click image to the left for more content.

Guided Practice

Find the distance between 8 and -1 .

Solution:

We use the distance formula. Let $x = 8$ and $y = -1$.

$$\text{distance} = |8 - (-1)| = |8 + 1| = |9| = 9$$

Notice that if we let $x = -1$ and $y = 8$, we get:

$$\text{distance} = |-1 - 8| = |-9| = 9$$

So, it does not matter which number we pick for x and y . We will get the same answer.

Practice

Evaluate the absolute value.

1. $|250|$
2. $|-12|$
3. $|\frac{-2}{5}|$
4. $|\frac{1}{10}|$

Find the distance between the points.

5. 12 and -11
6. 5 and 22
7. -9 and -18
8. -2 and 3
9. $\frac{2}{3}$ and -11
10. -10.5 and -9.75
11. 36 and 14

Mixed Review

12. Solve: $6t - 14 < 2t + 7$.
13. The speed limit of a semi-truck on the highway is between 45 mph and 65 mph.
 1. Write this situation as a compound inequality
 2. Graph the solutions on a number line.
14. Lloyd can only afford transportation costs of less than \$276 per month. His monthly car payment is \$181 and he sets aside \$25 per month for oil changes and other maintenance costs. How much can he afford for gas?
15. Simplify $\sqrt{12} \times \sqrt{3}$.
16. A hush puppy recipe calls for 3.4 ounces of flour for one batch of 8 hush puppies. You need to make 56 hush puppies. How much flour do you need?
17. What is the additive inverse of 124?
18. What is the multiplicative inverse of 14?
19. Define the *Addition Property of Equality*.

6.8 Absolute Value Equations

Here you'll learn how to find the solutions to absolute value equations.

Suppose that a movie director has been told by a film studio that the length of the movie he's making must not differ from 120 minutes by more than 10 minutes. What would be the longest and shortest acceptable movies he could make? What absolute value equation could you set up to find out? In this Concept, you'll learn to solve problems like this one by setting up and finding the solutions to absolute value equations.

Guidance

Absolute value situations can also involve unknown variables. For example, suppose the distance from zero is 16. What two points can this represent?

Begin by writing an absolute value sentence to represent this situation.

$$16 = |n|, \text{ where } n = \text{the missing value}$$

Which two numbers are 16 units from zero?

$$n = 16 \text{ or } n = -16$$

Absolute value situations can also involve distances from points other than zero. We treat such cases as compound inequalities, separating the two independent equations and solving separately.

Example A

Solve for x : $|x - 4| = 5$.

Solution: This equation looks like the distance definition:

$$\text{distance} = |x - y| \text{ or } |y - x|$$

The distance is 5, and the value of y is 4. We are looking for two values that are five units away from four on a number line.

Visually, we can see the answers are -1 and 9 .

Algebraically, we separate the two absolute value equations and solve.

$$x - 4 = 5 \text{ and } x - 4 = -(5)$$

By solving each, the solutions become:

$$x = 9 \text{ and } x = -1$$

Example B

Solve $|2x - 7| = -6$.

Solution:

Begin by separating this into its separate equations.

$$2x - 7 = -6 \text{ and } 2x - 7 = -(-6) = 6$$

Solve each equation independently.

$$\begin{aligned} 2x - 7 &= 6 \\ 2x - 7 + 7 &= 6 + 7 \\ 2x &= 13 \\ x &= \frac{13}{2} \end{aligned}$$

$$\begin{aligned} 2x - 7 &= -6 \\ 2x - 7 + 7 &= -6 + 7 \\ 2x &= 1 \\ x &= \frac{1}{2} \end{aligned}$$

Example C

A company packs coffee beans in airtight bags. Each bag should weigh 16 ounces but it is hard to fill each bag to the exact weight. After being filled, each bag is weighed and if it is more than 0.25 ounces overweight or underweight, it is emptied and repacked. What are the lightest and heaviest acceptable bags?



FIGURE 6.1

Solution:

The varying quantity is the weight of the bag of coffee beans. Choosing a letter to represent this quantity and writing an absolute value equation yields:

$$|w - 16| = 0.25$$

Separate and solve.

$$\begin{aligned} w - 16 &= 0.25 \\ w &= 16.25 \end{aligned}$$

$$\begin{aligned} w - 16 &= -0.25 \\ w &= 15.75 \end{aligned}$$

The lightest bag acceptable is 15.75 ounces and the heaviest bag accepted is 16.25 ounces.

Video Review



MEDIA

Click image to the left for more content.



MEDIA

Click image to the left for more content.

Guided Practice

Solve for n : $|-3n + 5| = 18$.

Solution:

$|-3n + 5| = 17$ means that $-3n + 5 = 17$ or $-3n + 5 = -17$.

Solving each one separately, we get:

$$\begin{aligned} -3n + 5 &= 17 \\ 2x - 7 + 7 &= 6 + 7 \\ 2x &= 13 \\ x &= \frac{13}{2} \end{aligned}$$

$$\begin{aligned} -3n + 5 &= -17 \\ 2x - 7 + 7 &= -6 + 7 \\ 2x &= 1 \\ x &= \frac{1}{2} \end{aligned}$$

Practice

In 1 – 11, solve the absolute value equations and interpret the results by graphing the solutions on a number line.

1. $|7u| = 77$

2. $|x - 5| = 10$
 3. $|5r - 6| = 9$
 4. $1 = \frac{|6+5z|}{5}$
 5. $|8x| = 32$
 6. $|\frac{m}{8}| = 1$
 7. $|x + 2| = 6$
 8. $|5x - 2| = 3$
 9. $51 = |1 - 5b|$
 10. $8 = 3 + |10y + 5|$
 11. $|4x - 1| = 19$
 12. $8|x + 6| = -48$
13. A company manufactures rulers. Their 12-inch rulers pass quality control if they're within $\frac{1}{32}$ inches of the ideal length. What is the longest and shortest ruler that can leave the factory?

Mixed Review

14. A map has a scale of $2 \text{ inch} = 125 \text{ miles}$. How far apart would two cities be on the map if the actual distance is 945 miles?
15. Determine the domain and range: $\{(-9, 0), (-6, 0), (-4, 0), (0, 0), (3, 0), (5, 0)\}$.
16. Is the relation in question #15 a function? Explain your reasoning.
17. Consider the problem $3(2x - 7) = 100$. Lei says the first step to solving this equation is to use the Distributive Property to cancel the parentheses. Hough says the first step to solving this equation is to divide by 3. Who is right? Explain your answer.
18. Graph $4x + y = 6$ using its intercepts.
19. Write $\frac{3}{30}$ as a percent. Round to the nearest hundredth.
20. Simplify $-5\frac{2}{3} \div \frac{71}{8}$.

6.9 Graphs of Absolute Value Equations

Here you'll learn how to make a table of values for an absolute value equation so that you can graph the solutions to the equation.

Suppose you're keeping a math journal and you want to explain how to graph the solutions to an absolute value equation. How would you describe the process? What steps would be involved? In this Concept, you'll learn how to create a table of values for an absolute value equation so that you can graph its solutions. With this knowledge, you can fill your math journal with useful information!

Guidance

Absolute value equations can be graphed in a way that is similar to graphing linear equations. By making a table of values, you can get a clear picture of what an absolute value equation will look like.

Example A

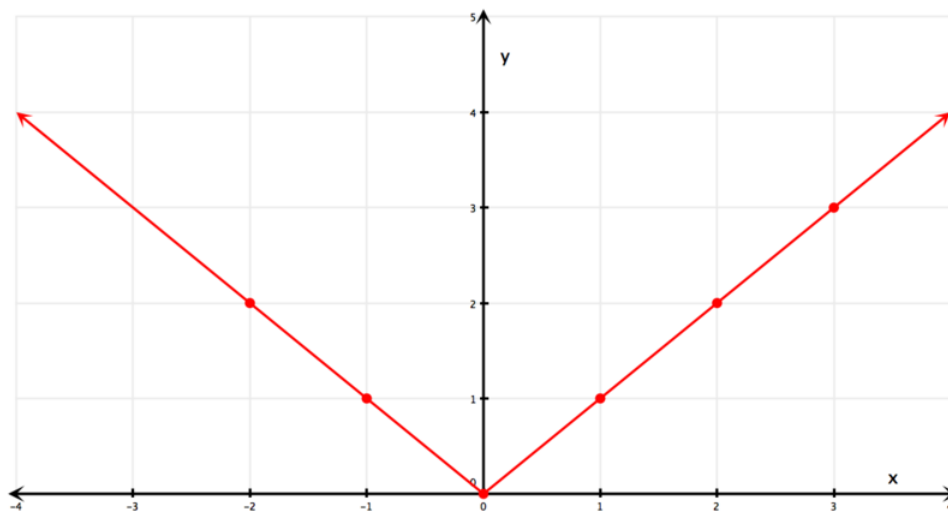
Graph the solutions to $y = |x|$.

Solution:

Make a table of values and graph the coordinate pairs.

TABLE 6.1:

x	$y = x $
-2	$ -2 = 2$
-1	$ -1 = 1$
0	$ 0 = 0$
1	$ 1 = 1$
2	$ 2 = 2$
3	$ 3 = 3$



The Shape of an Absolute Value Graph

Every absolute value graph will make a “V”-shaped figure. It consists of two pieces: one with a negative slope and one with a positive slope. The point of their intersection is called the **vertex**. An absolute value graph is **symmetrical**, meaning it can be folded in half on its **line of symmetry**. The function $y = |x|$ is the parent function, or most basic function, of absolute value functions.

Example B

Graph the solutions to $y = |x - 1|$.

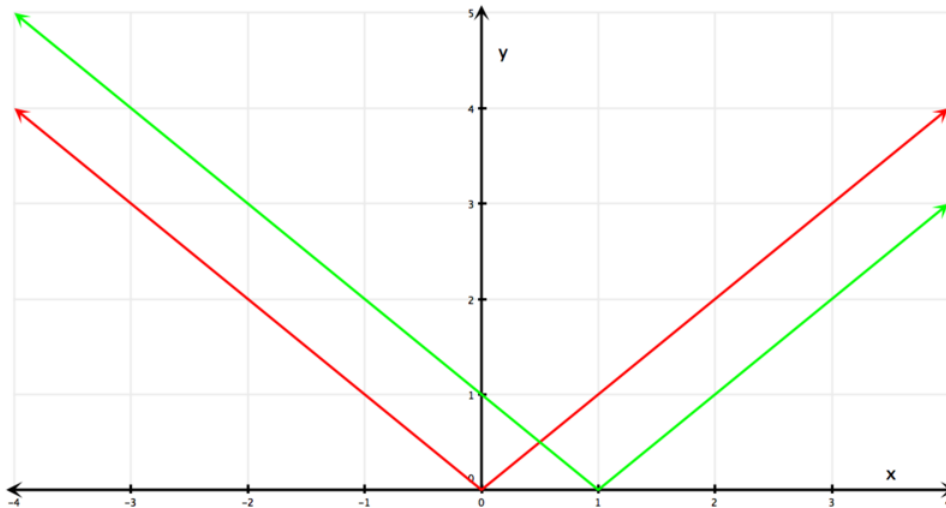
Solution:

Make a table of values and plot the ordered pairs.

TABLE 6.2:

x	$y = x - 1 $
-2	$ -2 - 1 = 3$
-1	$ -1 - 1 = 2$
0	$ 0 - 1 = 1$
1	$ 1 - 1 = 0$
2	$ 2 - 1 = 1$
3	$ 3 - 1 = 2$

The graph of this function is seen below in green, graphed with the parent function in red.



Notice that the green function is just the parent function shifted over. The vertex is shifted over 1 unit to the right. This is because when $x = 1$, $|x - 1| = 0$ since $|1 - 1| = 0$. The vertex will always be where the value inside the absolute value is zero.

Graphing by Finding the Vertex

Absolute value equations can always be graphed by making a table of values. However, you can use the vertex and symmetry to help shorten the graphing process.

Step 1: Find the vertex by determining which value of x makes the distance zero.

Step 2: Using this value as the center of the x -values, choose several values greater than this value and several values less than this value.

Example C

Graph $y = |x + 2| + 3$.

Solution:

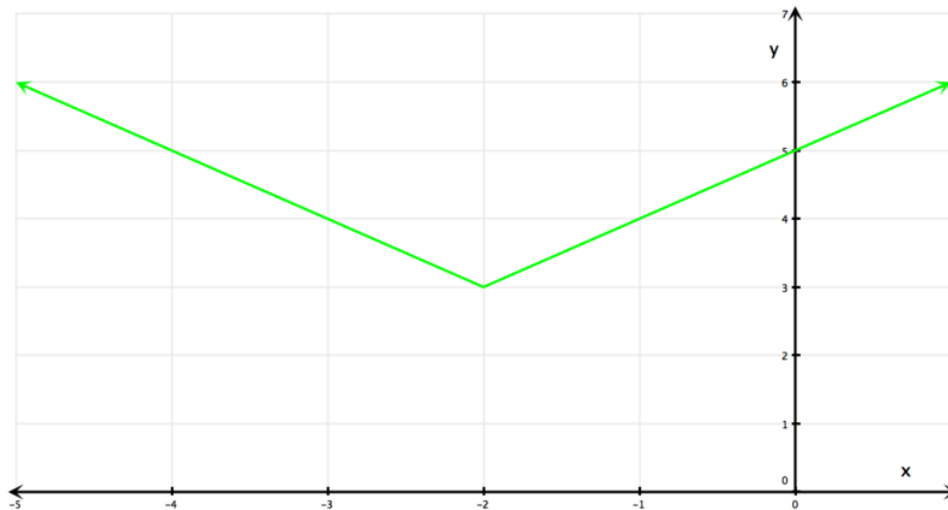
Start by considering where the vertex would be by solving for when the absolute value equals zero:

$$0 = |x + 2| \Rightarrow x = -2$$

The vertex is at $x = -2$. Choose some points on either side of that to make a table of values.

TABLE 6.3:

x	$y = x + 2 + 3$
-4	$ -4 + 2 + 3 = 5$
-3	$ -3 + 2 + 3 = 4$
-2	$ -2 + 2 + 3 = 3$
-1	$ -1 + 2 + 3 = 4$
0	$ 0 + 2 + 3 = 5$

**Video Review****MEDIA**

Click image to the left for more content.

**MEDIA**

Click image to the left for more content.

Guided Practice

Graph $y = |x + 5|$.

Solution:

Determine which x -value equals a distance of zero.

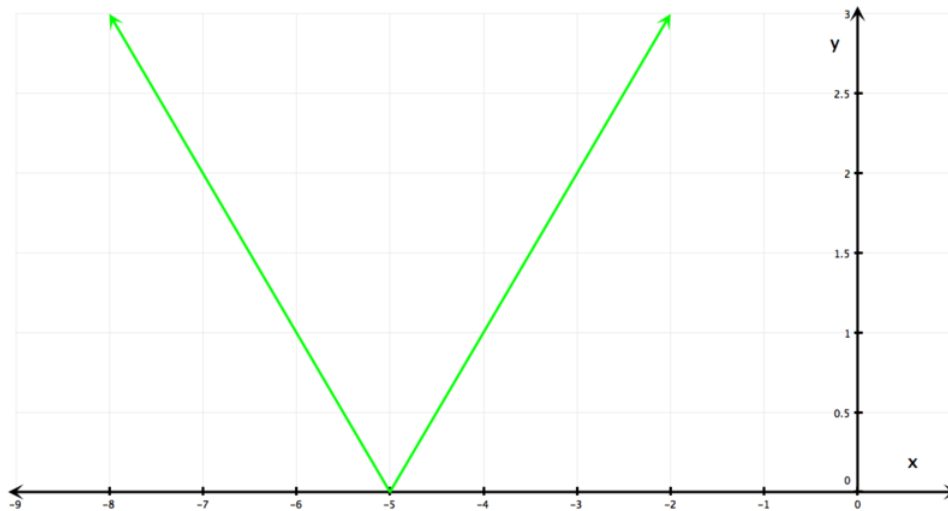
$$\begin{aligned} 0 &= |x + 5| \\ x &= -5 \end{aligned}$$

Therefore, $(-5, 0)$ is the vertex of the graph and represents the center of the table of values.

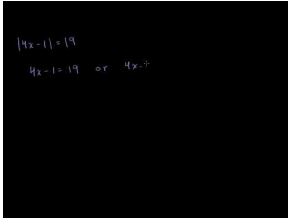
Create the table and plot the ordered pairs.

TABLE 6.4:

x	$y = x + 5 $
-7	$ -7 + 5 = 2$
-6	$ -6 + 5 = 1$
-5	$ -5 + 5 = 0$
-4	$ -4 + 5 = 1$
-3	$ -3 + 5 = 2$

**Practice**

Sample explanations for some of the practice exercises below are available by viewing the following video. Note that there is not always a match between the number of the practice exercise in the video and the number of the practice exercise listed in the following exercise set. However, the practice exercise is the same in both. [CK-12 Basic Algebra: Absolute Value Equations \(10:41\)](#)



MEDIA

Click image to the left for more content.

In 1 – 11, graph the function.

1. $y = |x + 3|$
2. $y = |x - 6|$
3. $y = |4x + 2|$
4. $y = \left| \frac{x}{3} - 4 \right|$
5. $|x - 4| = y$
6. $-|x - 2| = y$
7. $y = |x| - 2$
8. $y = |x| + 3$
9. $y = \frac{1}{2}|x|$
10. $y = 4|x| - 2$
11. $y = \left| \frac{1}{2}x \right| + 6$

Mixed Review

12. Graph the following inequality on a number line: $-2 \leq w < 6$.
13. Is $n = 4.175$ a solution to $|n - 3| > 12$?
14. Graph the function $g(x) = \frac{7}{2}x - 8$.
15. Explain the pattern: 24, 19, 14, 9,....
16. Simplify $(-3) \left(\frac{(29)(2) - 8}{-10} \right)$.

6.10 Absolute Value Inequalities

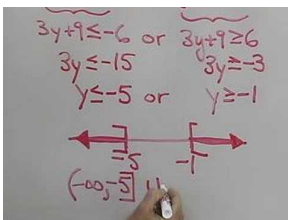
Here you'll learn about absolute value inequalities and how to find their solutions.

Suppose the perimeter of a square garden is currently $4l$ meters, where l is the length of one of its sides, and that you want to change the perimeter to 32 meters. However, you don't want to change the perimeter by more than 8 meters. What must the length of one of its sides currently be? In this Concept, you'll learn how to solve absolute value inequalities that represent scenarios such as this one.

Watch This

For assistance with graphing absolute value inequalities, visit this YouTube video:

[Algebra - Inequalities with Absolute Value](#)



MEDIA

Click image to the left for more content.

Or you can also visit this link on TheMathPage: <http://www.themathpage.com/alg/absolute-value.htm>.

Guidance

An absolute value inequality is a combination of two concepts: absolute values and linear inequalities. Therefore, to solve an absolute value inequality, you must use the problem-solving methods of each concept.

- To solve an absolute value equation, use the definition.
 - If $d = |x - a|$, then $x - a = d$ OR $x - a = -d$.
- To solve a linear inequality, use the information learned in the previous Concepts.
 - Remember, when dividing by a negative, the inequality symbol must be reversed!

Let's begin by looking at an example.

Example A

$$|x| \leq 3$$

Since $|x|$ represents the distance from zero, the solutions to this inequality are those numbers whose distance from zero is less than or equal to 3. The following graph shows this solution:



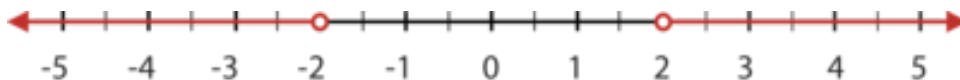
Notice that this is also the graph for the compound inequality $-3 \leq x \leq 3$.

Below is a second example.

Example B

$$|x| > 2$$

Since the absolute value of x represents the distance from zero, the solutions to this inequality are those numbers whose distances from zero are more than 2. The following graph shows this solution.



In general, the solutions to absolute value inequalities take two forms:

1. If $|x| < a$, then $x < a$ or $x > -a$.
2. If $|x| > a$, then $x > a$ or $x < -a$.

Example C

Solve $|x + 5| > 7$.

Solution:

This equation fits situation 2. Therefore, $x + 5 > 7$ OR $x + 5 < -7$.

Solve each inequality separately.

$$\begin{aligned} x + 5 &> 7 \\ x &> 2 \end{aligned}$$

$$\begin{aligned} x + 5 &< -7 \\ x &< -12 \end{aligned}$$

The solutions are all values greater than two or less than -12 .

Video Review



MEDIA

Click image to the left for more content.



MEDIA

Click image to the left for more content.

Guided Practice

The velocity of an object is given by the formula $v = 25t - 80$, where the time is expressed in seconds and the velocity is expressed in feet per second. Find the times when the velocity is greater than or equal to 60 feet per second.

Solution:

We want to find the times when the velocity is greater than or equal to 60 feet per second. Using the formula for velocity, $v = 25t - 80$, and substituting the appropriate values, we obtain the absolute value inequality $|25t - 80| \geq 60$.

This is an example like case 2. Separate and solve.

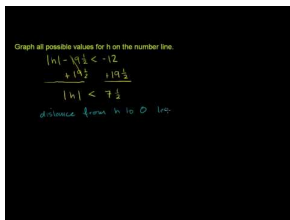
$$25t - 80 \geq 60 \text{ or } 25t - 80 \leq -60$$

$$25t \geq 140 \text{ or } 25t \leq 20$$

$$t \geq 5.6 \text{ or } t \leq 0.8$$

Practice

Sample explanations for some of the practice exercises below are available by viewing the following video. Note that there is not always a match between the number of the practice exercise in the video and the number of the practice exercise listed in the following exercise set. However, the practice exercise is the same in both. [CK-12 Basic Algebra: Absolute Value Inequalities \(3:26\)](#)



MEDIA

Click image to the left for more content.

1. You are asked to solve $|a + 1| \leq 4$. What two inequalities does this separate into?

In 2 – 21, solve the inequality and show the solution graph.

2. $|x| \leq 6$
3. $4 \leq |a + 4|$
4. $|x| > 3.5$
5. $6 > |10b + 6|$
6. $|x| < 12$
7. $\left| \frac{w}{10} \right| < 2$
8. $\left| \frac{x}{5} \right| \leq 6$
9. $|7x| \geq 21$
10. $|6c + 5| < 47$
11. $|x - 5| > 8$
12. $|x + 7| < 3$
13. $\left| x - \frac{3}{4} \right| \leq \frac{1}{2}$
14. $|2x - 5| \geq 13$
15. $|5x + 3| < 7$
16. $\left| \frac{x}{3} - 4 \right| \leq 2$
17. $\left| \frac{2x}{7} + 9 \right| > \frac{5}{7}$
18. $|-6t + 3| + 9 \geq 18$

19. $|9p + 5| > 23$
20. $|-2s - 4| \leq 6$
21. $\frac{|10m - 5|}{8} > 5$
22. A three-month-old baby boy weighs an average of 13 pounds. He is considered healthy if he is 2.5 pounds more or less than the average weight. Find the weight range that is considered healthy for three-month-old boys.

Mixed Review

23. Graph $y = 3|x - 3|$.
24. Graph $y = \frac{5}{4}x - 2$.
25. What is 14.75% of 29?
26. A shirt was sold for \$31.99 after a 15% markup. What was the original price?
27. Using the formula to convert Celsius to Fahrenheit found in a previous Concept, determine the Fahrenheit equivalent to 16°C .
28. Charlene has 18 more apples than Raul. Raul has 36 apples. Write an equation to represent this situation and determine how many apples Charlene has.
29. Suppose you flip a coin. What are the possible outcomes?
30. How many degrees are in a circle?

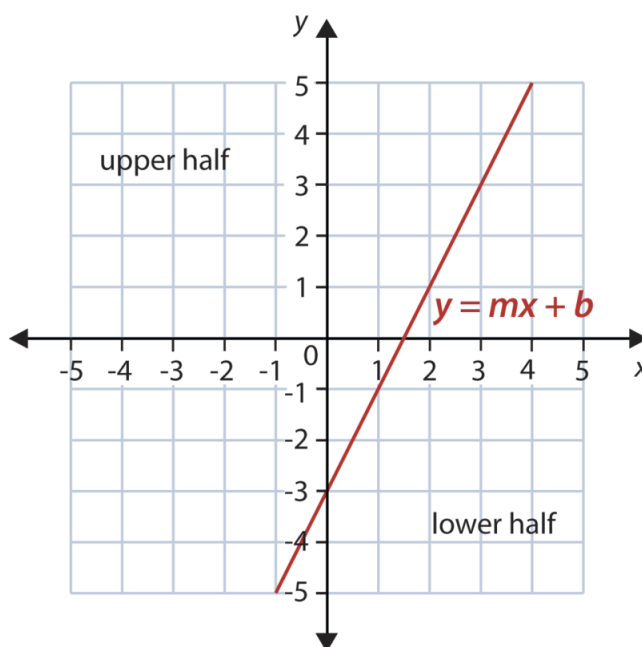
6.11 Linear Inequalities in Two Variables

Here you'll learn how to graph a linear inequality on a coordinate plane when the inequality has two variables.

Did you know that in European hockey leagues, a player gets 2 points for a goal and 1 point for an assist? Suppose a player's contract stipulates that he receives a bonus if he gets more than 100 points. What linear inequality could you write to represent this situation? How would you graph this inequality? In this Concept, you'll learn to graph linear inequalities in two variables so that you can properly analyze scenarios such as this one.

Guidance

When a linear equation is graphed in a coordinate plane, the line splits the plane into two pieces. Each piece is called a **half plane**. The diagram below shows how the half planes are formed when graphing a linear equation.

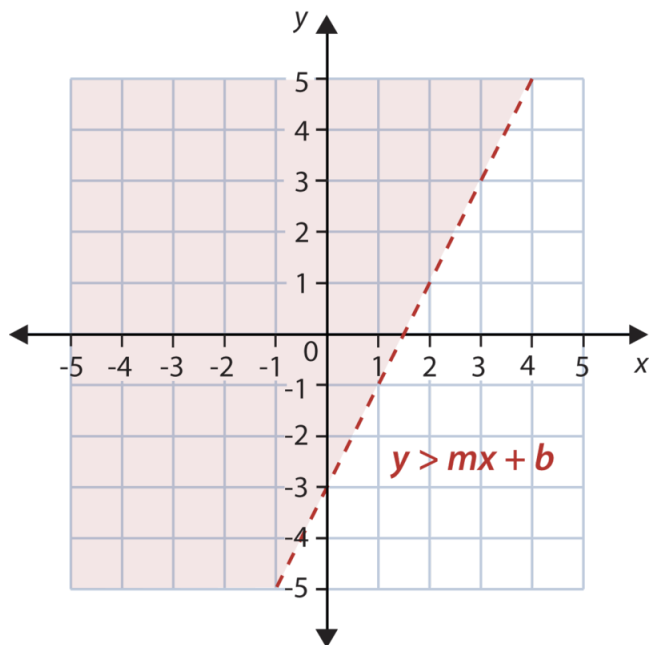


A linear inequality in two variables can also be graphed. Instead of graphing only the **boundary line** ($y = mx + b$), you must also include all the other ordered pairs that could be solutions to the inequality. This is called the **solution set** and is shown by shading, or coloring, the half plane that includes the appropriate solutions.

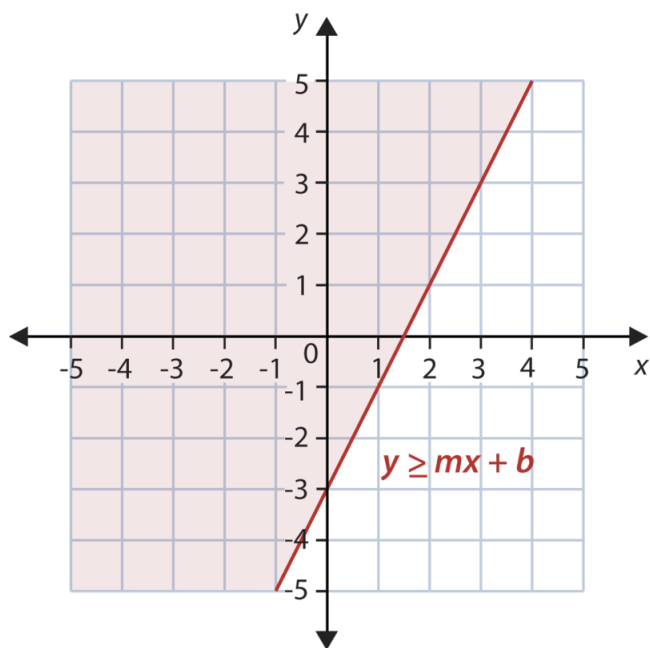
When graphing inequalities in two variables, you must remember when the value is included (\leq or \geq) or not included ($<$ or $>$). To represent these inequalities on a coordinate plane, instead of shaded or unshaded circles, we use solid and dashed lines. We can tell which half of the plane the solution is by looking at the inequality sign.

- $>$ The solution is the half plane above the line.
- \geq The solution is the half plane above the line and also all the points on the line.
- $<$ The solution is the half plane below the line.
- \leq The solution is the half plane below the line and also all the points on the line.

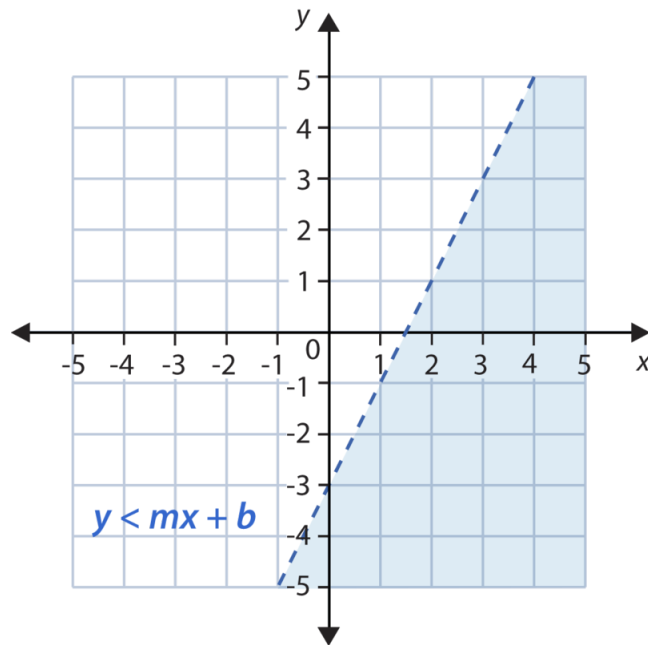
The solution of $y > mx + b$ is the half plane above the line. The dashed line shows that the points on the line are not part of the solution.



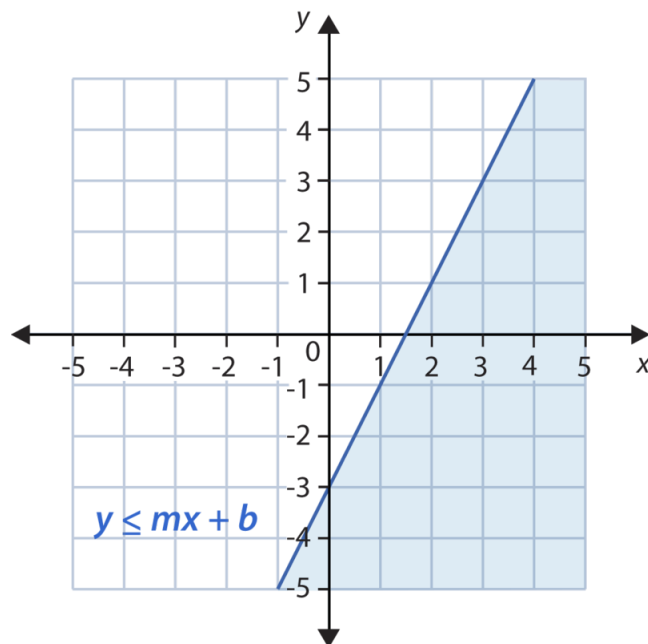
The solution of $y \geq mx + b$ is the half plane above the line and all the points on the line.



The solution of $y < mx + b$ is the half plane below the line.



The solution of $y \leq mx + b$ is the half plane below the line and all the points on the line.



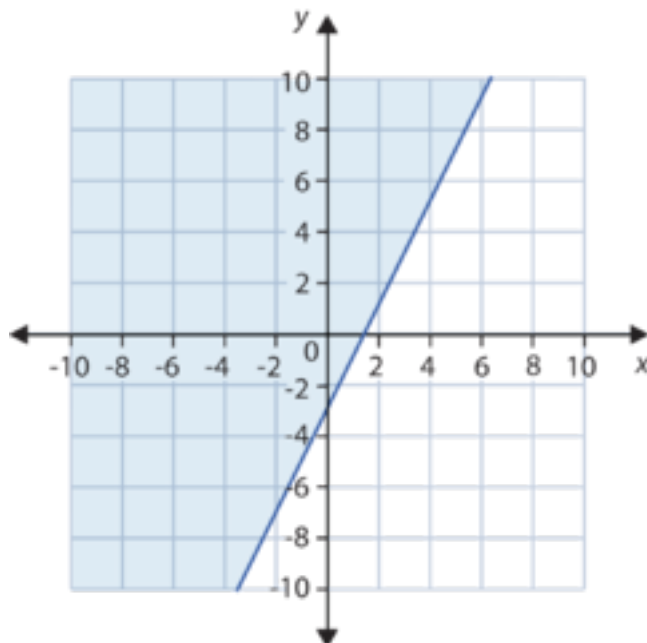
Example A

Graph the inequality $y \geq 2x - 3$.

Solution:

This inequality is in slope-intercept form. Begin by graphing the line. Then determine the half plane to color.

- The inequality is \geq , so the line is solid.
- According to the inequality, you should shade the half plane above the boundary line.



In general, the process used to graph a linear inequality in two variables is:

Step 1: Graph the equation using the most appropriate method.

- Slope-intercept form uses the y -intercept and slope to find the line.
- Standard form uses the intercepts to graph the line.
- Point-slope uses a point and the slope to graph the line.

Step 2: If the equal sign is not included, draw a dashed line. Draw a solid line if the equal sign is included.

Step 3: Shade the half plane above the line if the inequality is “greater than.” Shade the half plane under the line if the inequality is “less than.”

Example B

Julian has a job as an appliance salesman. He earns a commission of \$60 for each washing machine he sells and \$130 for each refrigerator he sells. How many washing machines and refrigerators must Julian sell to make \$1,000 or more in commission?

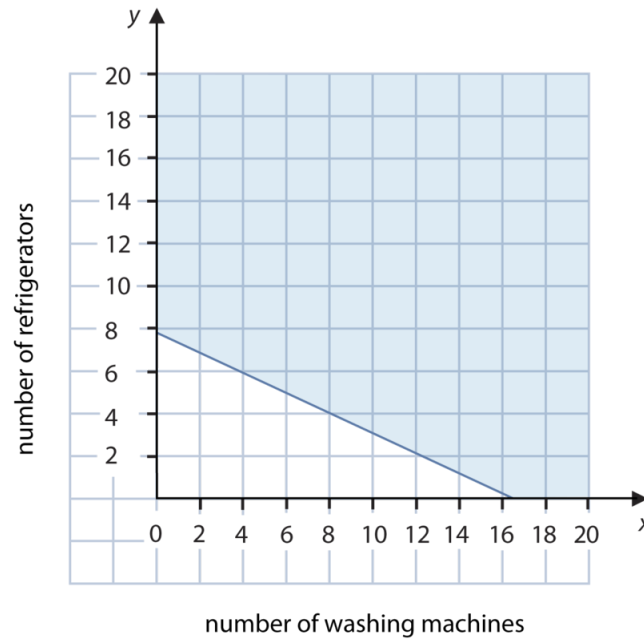
Solution:

Determine the appropriate variables for the unknown quantities. Let x = number of washing machines Julian sells and let y = number of refrigerators Julian sells.

Now translate the situation into an inequality. $60x + 130y \geq 1,000$.

Graph the standard form inequality using its intercepts. When $x = 0, y = 7.692$. When $y = 0, x = 16.667$. The line will be solid.

We want the ordered pairs that are solutions to Julian making more than \$1,000, so we shade the half plane above the boundary line.



Graphing Horizontal and Vertical Linear Inequalities

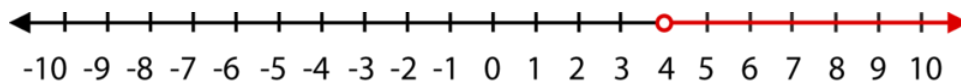
Linear inequalities in one variable can also be graphed in the coordinate plane. They take the form of horizontal and vertical lines; however, the process is identical to graphing **oblique**, or slanted, lines.

Example C

Graph the inequality $x > 4$ on: 1) a number line and 2) the coordinate plane.

Solution:

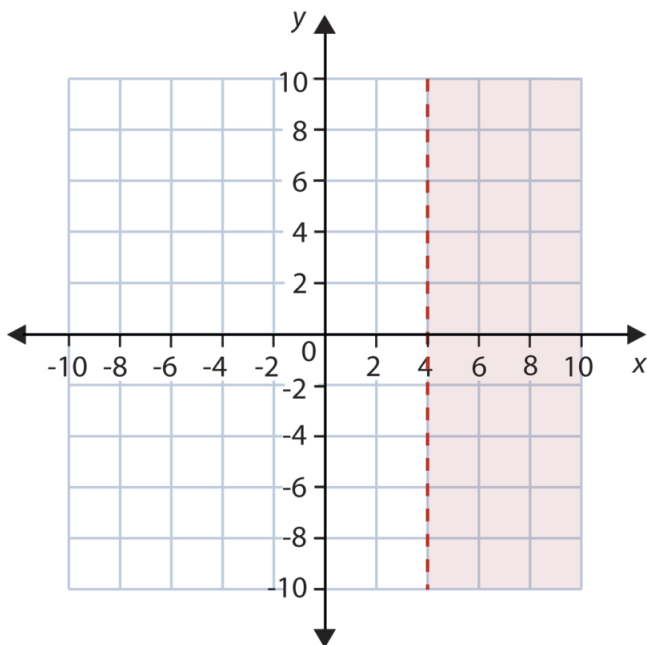
Remember what the solution to $x > 4$ looks like on a number line.



The solution to this inequality is the set of all real numbers x that are larger than four but not including four.

On a coordinate plane, the line $x = 4$ is a vertical line four units to the right of the origin. The inequality **does not equal** four, so the vertical line is dashed. This shows the reader that the ordered pairs on the vertical line $x = 4$ are not solutions to the inequality.

The inequality is looking for all x -coordinates larger than four. We then color the half plane to the right, symbolizing $x > 4$.



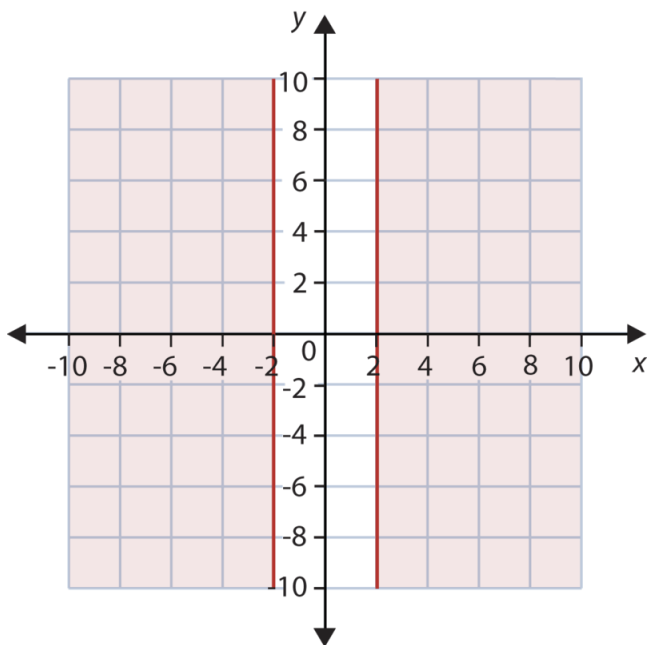
Graphing absolute value inequalities can also be done in the coordinate plane. To graph the inequality $|x| \geq 2$, we can recall a previous Concept and rewrite the absolute value inequality.

$$x \leq -2 \text{ or } x \geq 2$$

Then graph each inequality on a coordinate plane.

In other words, the solution is all the coordinate points for which the value of x is smaller than or equal to -2 and greater than or equal to 2 . The solution is represented by the plane to the left of the vertical line $x = -2$ and the plane to the right of line $x = 2$.

Both vertical lines are solid because points on the line are included in the solution.



Video Review



MEDIA

Click image to the left for more content.



MEDIA

Click image to the left for more content.

Guided Practice

A pound of coffee blend is made by mixing two types of coffee beans. One type costs \$9.00 per pound and another type costs \$7.00 per pound. Find all the possible mixtures of weights of the two different coffee beans for which the blend costs \$8.50 per pound or less.

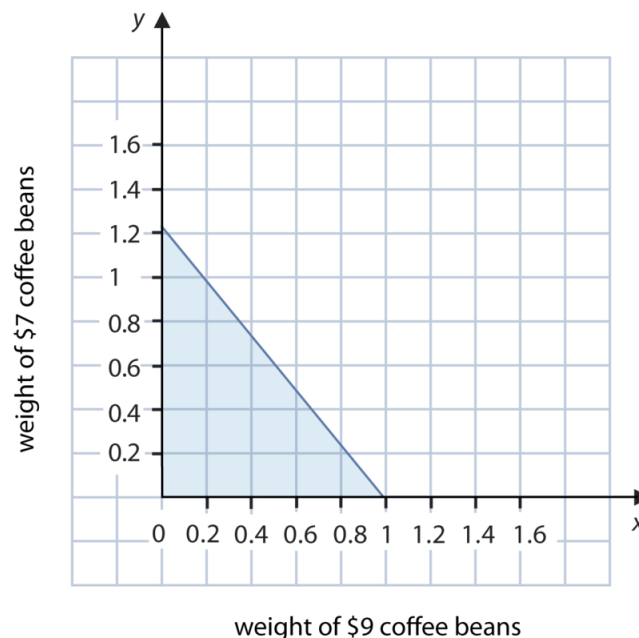
Solution:

Begin by determining the appropriate letters to represent the varying quantities.

Let x = weight of \$9.00 per pound coffee beans in pounds and let y = weight of \$7.00 per pound coffee beans in pounds.

Translate the information into an inequality. $9x + 7y \leq 8.50$.

Because the inequality is in standard form, it will be easier to graph using its intercepts.



When $x = 0, y = 1.21$. When $y = 0, x = 0.944$.


Graph the inequality. The line will be solid. We shade below the line.

We graphed only the first quadrant of the coordinate plane because neither bag should have a negative weight.

The blue-shaded region tells you all the possibilities of the two bean mixtures that will give a total less than or equal to \$8.50.

Practice

Sample explanations for some of the practice exercises below are available by viewing the following video. Note that there is not always a match between the number of the practice exercise in the video and the number of the practice exercise listed in the following exercise set. However, the practice exercise is the same in both. [CK-12 Basic Algebra: Graphing Inequalities \(8:03\)](#)



MEDIA

Click image to the left for more content.

1. Define *half plane*.
2. In which cases would the boundary line be represented by a dashed line when graphing an inequality?
3. In which cases would the boundary line be represented by a solid line when graphing an inequality?
4. What is a method to help you determine which half plane to color when graphing an inequality?

In 5 – 26, graph each inequality in a coordinate plane.

5. $x < 20$
6. $y \geq -5$
7. $y \leq 6$
8. $|x| > 10$
9. $|y| \leq 7$
10. $y \leq 4x + 3$
11. $y > -\frac{x}{2} - 6$
12. $y \leq -\frac{1}{2}x + 5$
13. $3x - 4y \geq 12$
14. $x + 7y < 5$
15. $y < -4x + 4$
16. $y > \frac{7}{2}x + 3$
17. $6x + 5y > 1$
18. $6x - 5y \leq 15$
19. $2x - y < 5$
20. $y + 5 \leq -4x + 10$
21. $x - \frac{1}{2}y \geq 5$
22. $y + 4 \leq -\frac{x}{3} + 5$
23. $5x - 2y > 4$
24. $30x + 5y < 100$
25. $y \geq -x$
26. $6x - y < 4$

27. Lili can make yarn ankle bracelets and wrist bracelets. She has 600 yards of yarn available. It takes 6 yards to make one wrist bracelet and 8 yards to make one ankle bracelet. Find all the possible combinations of ankle bracelets and wrist bracelets she can make without going over her available yarn.
28. An ounce of gold costs \$670 and an ounce of silver costs \$13. Find all possible weights of silver and gold that make an alloy (combination of metals) that costs less than \$600 per ounce.
29. A phone company charges 50 cents per minute during the daytime and 10 cents per minute at night. How many daytime minutes and nighttime minutes would you have to use to pay more than \$20.00 over a 24-hour period?
30. Jesu has \$30 to spend on food for a class barbeque. Hot dogs cost \$0.75 each (including the bun) and burgers cost \$1.25 (including bun and salad). Plot a graph that shows all the combinations of hot dogs and burgers he could buy for the barbecue, spending less than \$30.00.
31. At the local grocery store, strawberries cost \$3.00 per pound and bananas cost \$1.00 per pound. If I have \$10 to spend between strawberries and bananas, draw a graph to show what combinations of each I can buy and spend at most \$10.

6.12 Theoretical and Experimental Probability

Here you'll learn about theoretical and experimental probability, including how to describe sample spaces and how to conduct probability simulations.

Suppose the numbers 0 through 9 were each written on a piece of paper and placed in a bag. If one of the pieces of paper were chosen at random, what is the theoretical probability that it would be an even number? If this experiment were repeated 10 times, and an even number were chosen 6 times, what would be the experimental probability of choosing an even number? In this Concept, you'll learn all about theoretical and experimental probability, including sample spaces and probability simulations, so that you can answer questions like these.

Guidance

So far in this text, you have solved problems dealing with definite situations. In the next several lessons, we will begin to look at a branch of mathematics that deals with **possible situations**. The study of probability involves applying formulas to determine the percentage chance of an event occurring.

Almost all companies use some form of probability. Automotive companies want to determine the likelihood of their new vehicle being a big seller. Cereal manufacturers want to know the probability that their cereal will sell more than the competition. Pharmaceutical corporations need to know the likelihood of a new drug harming those who take it. Even politicians want to know the probability of receiving enough votes to win the election.



FIGURE 6.2

Probabilities can start with an **experiment**. As you learned in a previous concept, an experiment is a controlled study. For example, suppose you want to know if the **probability** of getting tails when flipping a coin is actually $\frac{1}{2}$. By randomly grabbing a penny and making a tally chart of heads and tails, you are performing an experiment.

The set of all possible outcomes is called the **sample space** of the experiment.

The sample space for tossing a coin is $\{heads, tails\}$.

Example A

List the sample space for rolling a die.

Solution:

A die is a six-sided figure with dots representing the numbers one through six. So the sample space is all the possible outcomes (i.e., what numbers could possibly be rolled).

$$S = \{1, 2, 3, 4, 5, 6, \}$$

Once you have determined the number of items in the sample space, you can compute the probability of a particular **event**.

Any one possible outcome of the experiment is called an **event**.

Theoretical probability is a **ratio** expressing the ways to be successful to the total events in an experiment. A shorter way to write this is:

$$\text{Probability (success)} = \frac{\text{number of ways to get success}}{\text{total number of possible outcomes}}$$

Probabilities are expressed three ways:

- As a fraction
- As a percent
- As a decimal

Suppose you wanted to know the probability of getting a head or a tail when flipping a coin.

There would be **two** ways of obtaining a success and **two** possible outcomes.

$$P(\text{success}) = \frac{2}{2} = 1$$

This is a very important concept of probability.

The sum of the individual event probabilities is **100%**, or **1**.

Example B

Determine the theoretical probability of rolling a five on a die.

Solution: There are six events in the sample space. There is one way to roll a five.

$$P(\text{rolling a 5}) = \frac{1}{6} \approx 16.67\%$$

Conducting an Experiment

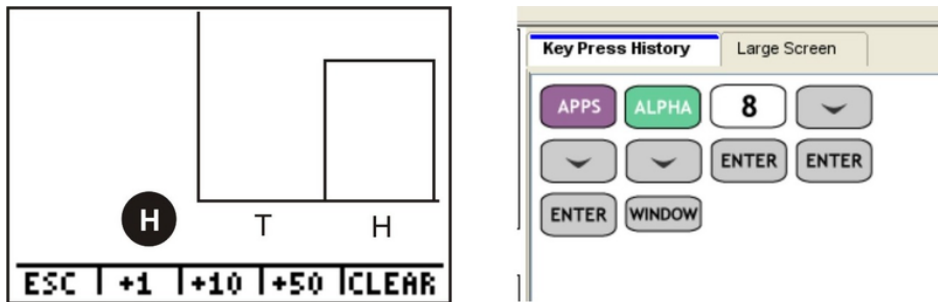
Conducting an experiment for probability purposes is also called *probability simulation*. Suppose you wanted to conduct the coin experiment in the Concept's opener. By grabbing a random coin, flipping it, and recording what comes up is a probability simulation. You can also simulate an experiment using a graphing calculator application.

Performing an Experiment Using the TI-84 Graphing Calculator

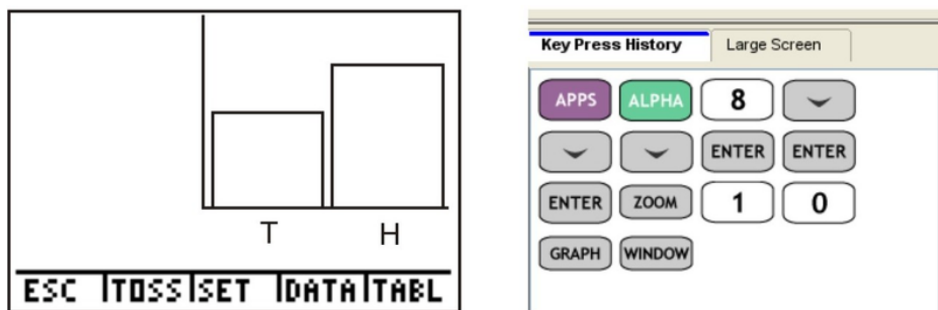
There is an application on the TI calculators called the coin toss. Among others (including the dice roll, spinners, and picking random numbers), the coin toss is an excellent application for when you want to find the probabilities for a coin tossed more than four times or more than one coin being tossed multiple times.



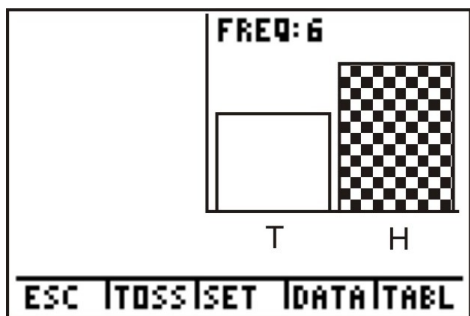
Let's say you want to see one coin being tossed one time. Here is what the calculator will show and the key strokes to get to this toss.



Let's say you want to see one coin being tossed ten times. Here is what the calculator will show and the key strokes to get to this sequence. Try it on your own.



We can actually see how many heads and tails occurred in the tossing of the 10 coins. If you click on the right arrow (>) the frequency label will show you how many of the tosses came up heads.



Using this information, you can determine the **experimental probability** of tossing a coin and seeing a tail on its landing.

The **experimental probability** is the ratio of the proposed outcome to the number of experiment trials.

$$P(\text{success}) = \frac{\text{number of times the event occurred}}{\text{total number of trials of experiment}}$$

Example C

Compare the theoretical probability of flipping a tail on a coin to the experimental probability of flipping a tail.

Solution:

There are two events in the sample space. There is one way to flip a tail.

$$P(\text{flipping a tail}) = \frac{1}{2}$$

The coin toss simulation the calculator performed stated there were six tails out of ten tosses.

$$P(\text{flipping a tail}) = \frac{6}{10}$$

The experimental probability (60%) in this case is greater than the theoretical probability (50%).

Finding Odds For and Against

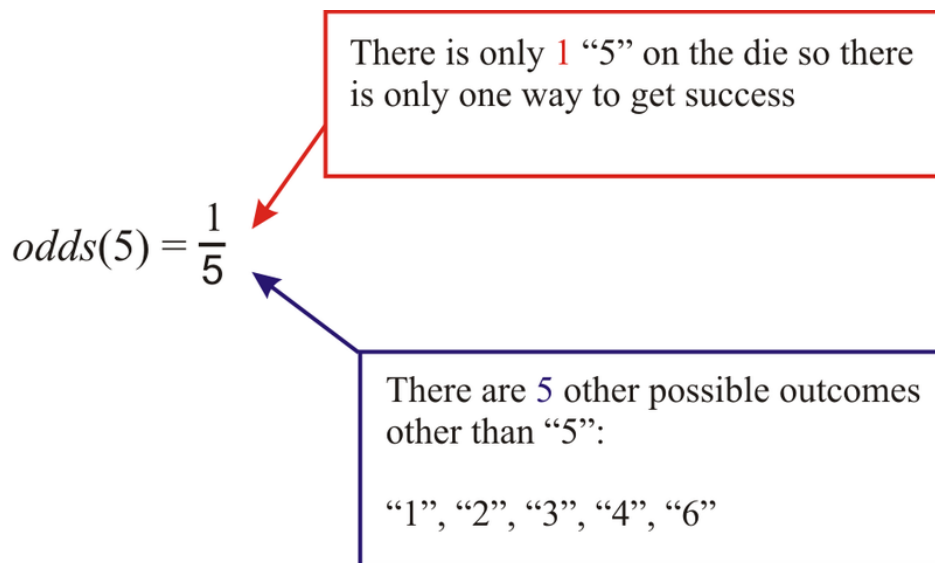
Odds are similar to probability with the exception of the ratio's denominator.

The **odds in favor** of an event is the ratio of the number of successful events to the number of non-successful events.

$$\text{Odds (success)} = \frac{\text{number of ways to get success}}{\text{number of ways to not get success}}$$

Example D

Suppose we were interested in the odds of rolling a 5 on a die.



What if we were interested in determining the odds against rolling a 5 on a die. There are five outcomes other than a “5” and one outcome of a “5.”

$$\text{Odds against rolling a 5} = \frac{5}{1}$$

Video Review



MEDIA

Click image to the left for more content.



MEDIA

Click image to the left for more content.

Guided Practice

Find the odds against rolling a number larger than 2 on a standard die.

Solution:

There are four outcomes on a standard die larger than 2 : {3,4,5,6}.

$$\text{Odds against rolling } > 2 = \frac{2}{4}$$

Notice the “odds against” ratio is the **reciprocal** of the “odds in favor” ratio.

Practice

1. Define *experimental probability*.
2. How is experimental probability different from theoretical probability?
3. Complete the table below, converting between probability values.

TABLE 6.5:

Fraction	Decimal	Percent
	0.015	98%
$\frac{1}{16}$		
$\frac{2}{3}$		62%
	0.73	

Use the “SPINNER” application in the Probability Simulator for the following questions. Set the spinner to five pieces.

4. What is the sample space?
5. Find the theoretical probability, $P(\text{spinning a } 4)$.
6. Conduct an experiment by spinning the spinner 15 times and recording each number the spinner lands on.
7. What is the experimental probability, $P(\text{spinning a } 4)$?
8. Give an event with a 0% probability.

In 9 – 18, use a standard 52-card deck to answer the questions.

9. How many values are in the sample space? What could be an easy way to list all these values?
10. Determine $P(\text{King})$.
11. What are the odds against drawing a face card?
12. What are the odds in favor of drawing a six?
13. Determine $P(\text{Diamond})$.
14. Determine $P(\text{Nine of Clubs})$.
15. Determine $P(\text{King or } 8 \text{ of Hearts})$.
16. What are the odds against drawing a spade?
17. What are the odds against drawing a red card?
18. Give an event with 100% probability.
19. Jorge says there is a 60% chance of rain tomorrow. Is this a strong likelihood? Explain your reasoning.
20. What is the probability there will be a hurricane in your area tomorrow? Why did you choose this percentage?

Consider flipping two coins at the same time.

21. Write the sample space.
22. What is the probability of flipping one head and one tail?
23. What is $P(\text{both heads})$?
24. Give an event with 100% probability.
25. Conduct the experiment 20 times. Find the experimental probability for flipping both heads. Is this different from the theoretical probability?

Mixed Review

- Graph the inequality on a coordinate plane: $-2 \leq w < 6$.
- Solve and graph the solutions using a number line: $|n - 3| > 12$.

Summary

This chapter begins by talking about inequalities and how to solve them by using addition, subtraction, multiplication, and division. Multi-step and compound inequalities are covered, as are real-world inequalities. In addition, linear inequalities in two variables are discussed. The chapter then moves on to absolute values, giving instruction on how to solve and graph absolute value equations and inequalities. Finally, the chapter wraps up by exploring theoretical and experimental probability.

Linear Inequalities and Absolute Value; An Introduction to Probability Review

Vocabulary – In 1 – 12, define the term.

- Algebraic inequality
- Interval notation
- Intersection of sets
- Union of sets
- Absolute value
- Compound inequality
- Boundary line
- Half plane
- Solution set
- Probability
- Theoretical probability
- Experimental probability
- Find the distance between 16 and 104 on a number line.
- Shanna needed less than one dozen eggs to bake a cake. Write this situation as an inequality and graph the appropriate solutions on a number line.
- Yemi can walk no more than 8 dogs at once. Write this situation as an inequality and graph the appropriate solutions on a number line.

In 16 – 35, solve each inequality. Graph the solutions on a number line.

- $y + 7 \geq 36$
- $16x < 1$
- $y - 64 < -64$
- $5 > \frac{t}{3}$
- $0 \leq 6 - k$
- $-\frac{3}{4}g \leq 12$
- $10 \geq \frac{q}{-3}$
- $-14 + m > 7$
- $4 \geq d + 11$
- $t - 9 \leq -100$
- $\frac{v}{7} < -2$
- $4x \geq -4$ and $\frac{x}{5} < 0$
- $n - 1 < -5$ or $\frac{n}{3} \geq -1$
- $\frac{n}{2} > -2$ and $-5n > -20$

30. $-35 + 3x > 5(x - 5)$
31. $x + 6 - 11x \geq -2(3 + 5x) + 12(x + 12)$
32. $-64 < 8(6 + 2k)$
33. $0 > 2(x + 4)$
34. $-4(2n - 7) \leq 37 - 5n$
35. $6b + 14 \leq -8(-5b - 6)$
36. How many solutions does the inequality $6b + 14 \leq -8(-5b - 6)$ have?
37. How many solutions does the inequality $6x + 11 < 3(2x - 5)$ have?
38. Terry wants to rent a car. The company he's chosen charges \$25 a day and \$0.15 per mile. If he rents it for one day, how many miles would he have to drive to pay at least \$108?
39. Quality control can accept a part if it falls within ± 0.015 cm of the target length. The target length of the part is 15 cm. What is the range of values quality control can accept?
40. Strawberries cost \$1.67 per pound and blueberries cost \$1.89 per pound. Graph the possibilities that Shawna can buy with no more than \$12.00.

Solve each absolute value equation.

41. $24 = |8z|$
42. $|\frac{u}{4}| = -1.5$
43. $1 = |4r - 7| - 2$
44. $|-9 + x| = 7$

Graph each inequality or equation.

45. $y = |x| - 2$
46. $y = -|x + 4|$
47. $y = |x + 1| + 1$
48. $y \geq -x + 3$
49. $y < -3x + 7$
50. $3x + y \leq -4$
51. $y > \frac{-1}{4}x + 6$
52. $8x - 3y \leq -12$
53. $x < -3$
54. $y > -5$
55. $-2 < x \leq 5$
56. $0 \leq y \leq 3$
57. $|x| > 4$
58. $|y| \leq -2$

A spinner is divided into eight equally spaced sections, numbered 1 through 8. Use this information to answer the following questions.

59. Write the sample space for this experiment.
60. What is the theoretical probability of the spinner landing on 7?
61. Give the probability that the spinner lands on an even number.
62. What are the odds for landing on a multiple of 2?
63. What are the odds against landing on a prime number?
64. Use the TI Probability Simulator application "Spinner." Create an identical spinner. Perform the experiment 15 times. What is the experimental probability of landing on a 3?
65. What is the probability of the spinner landing on a number greater than 5?
66. Give an event with a 100% probability.
67. Give an event with a 50% probability.

Linear Inequalities and Absolute Value; An Introduction to Probability Test

1. Consider a standard 52-card deck. Determine:
 1. $P(\text{red } 4)$
 2. $P(\text{purple Ace})$
 3. $P(\text{number card})$
2. Solve $-7 \leq y + 7 < 5$.
3. Find the distance between -1.5 and 9 .
4. Solve $23 = |8 - 7r| + 3$.
5. Solve $|-7c| \geq 49$.
6. Graph $x - 2y \leq 10$.
7. Graph $y > -\frac{3}{5}x + 4$.
8. Graph $y = -|x - 3|$.
9. A bag contains 2 red socks, 3 blue socks, and 4 black socks.
 1. If you choose one sock at a time, write the sample space.
 2. Find $P(\text{blue sock})$.
 3. Find the odds against drawing a black sock.
 4. Find the odds for drawing a red sock.

Solve each inequality.

10. $2(6 + 7r) > -12 + 8r$
11. $-56 \leq 8 + 8(7x + 6)$

Texas Instruments Resources

In the CK-12 Texas Instruments Algebra I FlexBook, there are graphing calculator activities designed to supplement the objectives for some of the lessons in this chapter. See <http://www.ck12.org/flexr/chapter/9616>.

Systems of Equations and Inequalities

Chapter Outline

- 7.1 GRAPHS OF LINEAR SYSTEMS
 - 7.2 SYSTEMS USING SUBSTITUTION
 - 7.3 MIXTURE PROBLEMS
 - 7.4 LINEAR SYSTEMS WITH ADDITION OR SUBTRACTION
 - 7.5 LINEAR SYSTEMS WITH MULTIPLICATION
 - 7.6 CONSISTENT AND INCONSISTENT LINEAR SYSTEMS
 - 7.7 LINEAR PROGRAMMING
 - 7.8 PROBABILITY AND PERMUTATIONS
 - 7.9 PROBABILITY AND COMBINATIONS
-

Introduction

James is trying to expand his pastry business to include cupcakes and personal cakes. He has a limited amount of manpower to decorate the new items and a limited amount of material to make the new cakes. In this chapter, you will learn how to solve this type of situation.



Every equation and inequality you have studied thus far is an example of a **system**. A system is a set of equations or inequalities with the same variables. This chapter focuses on the methods used to solve a system, such as graphing, substitution, and elimination. You will combine your knowledge of graphing inequalities to solve a system of inequalities.

7.1 Graphs of Linear Systems

Here you'll learn how to use a graph to solve a system of linear equations.

Suppose that on a test there are multiple choice questions and fill-in-the-blank questions. Julia answered 8 multiple choice questions and 3 fill-in-the-blank questions correctly, while Jason answered 6 multiple choice questions and 5 fill-in-the-blank questions correctly. If Julia got a total of 14 points and Jason got 16 points, how many points is each type of question worth? Could you use a graph to solve the system of linear equations representing this scenario. In this Concept, you'll learn to solve linear systems by graphing so that you can answer questions like this.

Guidance

In a previous concept, you learned that the intersection of two sets is joined by the word “and.” This word also joins two or more equations or inequalities. A set of algebraic sentences joined by the word “and” is called a **system**.

The **solution(s)** to a system is the set of ordered pairs that is in common to each algebraic sentence.

Example A

Determine which of the points $(1, 3)$, $(0, 2)$, and $(2, 7)$ is a solution to the following system of equations.
$$\begin{cases} y = 4x - 1 \\ y = 2x + 3 \end{cases}$$

Solution: A solution to a system is an ordered pair that is a solution to all the algebraic sentences. To determine if a particular ordered pair is a solution, substitute the coordinates for the variables x and y in each sentence and check.

Check $(1, 3)$:
$$\begin{cases} 3 = 4(1) - 1; 3 = 3. \text{ Yes, this ordered pairs checks.} \\ 3 = 2(1) + 3; 3 = 5. \text{ No, this ordered pair does not check.} \end{cases}$$

Check $(0, 2)$:
$$\begin{cases} 2 = 4(0) - 1; 2 = -1. \text{ No, this ordered pair does not check.} \\ 2 = 2(0) + 3; 2 = 3. \text{ No, this ordered pair does not check.} \end{cases}$$

Check $(2, 7)$:
$$\begin{cases} 7 = 4(2) - 1; 7 = 7. \text{ Yes, this ordered pairs checks.} \\ 7 = 2(2) + 3; 7 = 7. \text{ Yes, this ordered pairs checks.} \end{cases}$$

Because the coordinate $(2, 7)$ works in both equations simultaneously, it is a solution to the system.

To determine the coordinate that is in common to each sentence in the system, each equation can be graphed. The point at which the lines **intersect** represents the solution to the system. The solution can be written two ways:

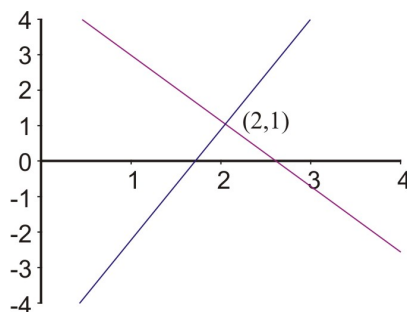
- As an ordered pair, such as $(2, 7)$
- By writing the value of each variable, such as $x = 2, y = 7$.

Example B

Find the solution to the system.

$$\begin{cases} y = 3x - 5 \\ y = -2x + 5 \end{cases}$$

Solution: By graphing each equation and finding the point of intersection, you find the solution to the system. Each equation is written in slope-intercept form and can be graphed using the methods learned previously. The lines appear to intersect at the ordered pair (2, 1). Is this the solution to the system?



$$\begin{cases} 1 = 3(2) - 5; & 1 = 1 \\ 1 = -2(2) + 5; & 1 = 1 \end{cases}$$

The coordinates check in both sentences. Therefore, (2, 1) is a solution to the system $\begin{cases} y = 3x - 5 \\ y = -2x + 5 \end{cases}$.

The greatest strength of the graphing method is that it offers a very visual representation of a system of equations and its solution. You can see, however, that determining a solution from a graph would require very careful graphing of the lines and is really practical only when you are certain that the solution gives integer values for x and y . In most cases, this method can offer only approximate solutions to systems of equations. For exact solutions, other methods are necessary.

Solving Systems Using a Graphing Calculator

A graphing calculator can be used to find or check solutions to a system of equations. To solve a system graphically, you must graph the two lines on the same coordinate axes and find the point of intersection. You can use a graphing calculator to graph the lines as an alternative to graphing the equations by hand.

Example C

Using the system from the above example, $\begin{cases} y = 3x - 5 \\ y = -2x + 5 \end{cases}$, we will use a graphing calculator to find the approximate solutions to the system.

```

Plot1 Plot2 Plot3
\Y1=3X-5
\Y2=-2X+5
\Y3=
\Y4=
\Y5=
\Y6=
\Y7=

```

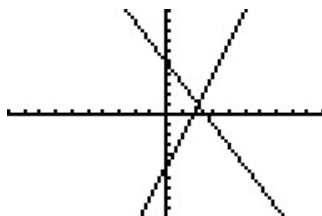
Begin by entering the equations into the $Y =$ menu of the calculator.

You already know the solution to the system is (2, 1). The window needs to be adjusted so an accurate picture is seen. Change your window to the **default window**.

```

WINDOW
Xmin=-10
Xmax=10
Xscl=1
Ymin=-10
Ymax=10
Yscl=1
Xres=█
    
```

See the graphs by pressing the **GRAPH** button.

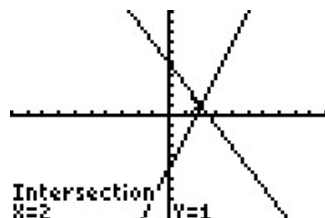


The solution to a system is the intersection of the equations. To find the intersection using a graphing calculator, locate the **Calculate** menu by pressing 2^{nd} and **TRACE**. Choose option #5 – **INTERSECTION**.

```

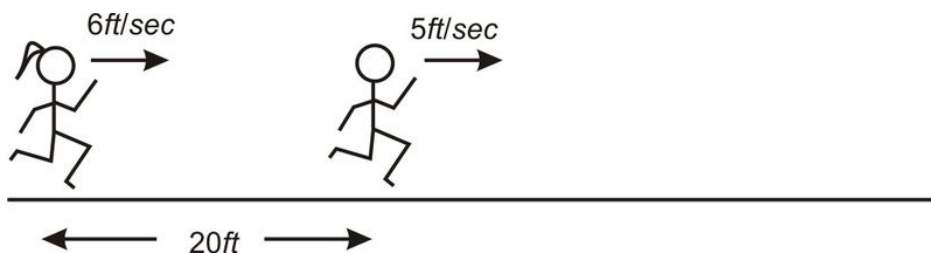
2nd:CALC
1:value
2:zero
3:minimum
4:maximum
5:intersect
6:dy/dx
7:∫f(x)dx
    
```

The calculator will ask you “**First Curve?**” Hit **ENTER**. The calculator will automatically jump to the other curve and ask you “**Second Curve?**” Hit **ENTER**. The calculator will ask, “**Guess?**” Hit **ENTER**. The intersection will appear at the bottom of the screen.



Example D

Peter and Nadia like to race each other. Peter can run at a speed of 5 feet per second and Nadia can run at a speed of 6 feet per second. To be a good sport, Nadia likes to give Peter a head start of 20 feet. How long does Nadia take to catch up with Peter? At what distance from the start does Nadia catch up with Peter?



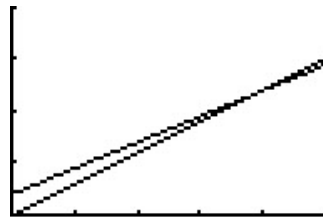
Solution: Begin by translating each runner's situation into an algebraic sentence using $distance = rate \times time$.

Peter: $d = 5t + 20$

Nadia: $d = 6t$

The question asks when Nadia catches Peter. The solution is the point of intersection of the two lines. Graph each equation and find the intersection.

```
WINDOW
Xmin=0
Xmax=25
Xscl=5
Ymin=0
Ymax=200
Yscl=50
Xres=1
```



The two lines cross at the coordinate $t = 20$, $d = 120$. This means after 20 seconds Nadia will catch Peter. At this time, they will be at a distance of 120 feet. Any time after 20 seconds Nadia will be farther from the starting line than Peter.

Video Review



MEDIA

Click image to the left for more content.



MEDIA

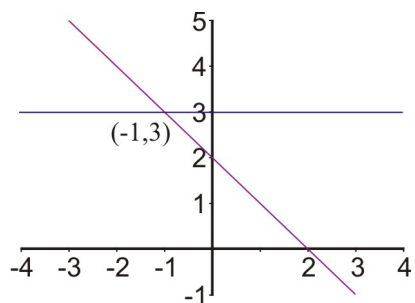
Click image to the left for more content.

Guided Practice

Solve the system $\begin{cases} x + y = 2 \\ y = 3 \end{cases}$.

Solution: The first equation is written in standard form. Using its intercepts will be the easiest way to graph this line.

The second equation is a horizontal line three units up from the origin.



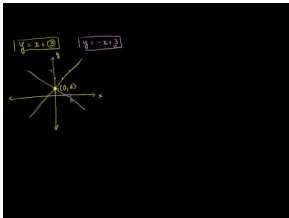
The lines appear to intersect at $(-1, 3)$.

$$\begin{cases} -1 + 3 = 2; 2 = 2 \\ 3 = 3 \end{cases}$$

The coordinates are a solution to each sentence and are a solution to the system.

Practice

Sample explanations for some of the practice exercises below are available by viewing the following video. Note that there is not always a match between the number of the practice exercise in the video and the number of the practice exercise listed in the following exercise set. However, the practice exercise is the same in both. [CK-12 Basic Algebra: Solving Linear Systems by Graphing \(8:30\)](#)



MEDIA

Click image to the left for more content.

1. Define a *system*.
2. What is the solution to a system?
3. Explain the process of solving a system by graphing.
4. What is one problem with using a graph to solve a system?
5. What are the two main ways to write the solution to a system of equations?
6. Suppose Horatio says the solution to a system is $(4, -6)$. What does this mean visually?
7. Where is the “**Intersection**” command located on your graphing calculator? What does it do?
8. In the race example, who is farther from the starting line at 19.99 seconds? At 20.002 seconds?

Determine which ordered pair satisfies the system of linear equations.

9. $\begin{cases} y = 3x - 2 \\ y = -x \end{cases}$; $(1, 4)$, $(2, 9)$, $(\frac{1}{2}, -\frac{1}{2})$
10. $\begin{cases} y = 2x - 3 \\ y = x + 5 \end{cases}$; $(8, 13)$, $(-7, 6)$, $(0, 4)$
11. $\begin{cases} 2x + y = 8 \\ 5x + 2y = 10 \end{cases}$; $(-9, 1)$, $(-6, 20)$, $(14, 2)$

$$12. \begin{cases} 3x + 2y = 6 \\ y = \frac{x}{2} - 3 \end{cases} ; (3, -\frac{3}{2}), (-4, 3), (\frac{1}{2}, 4)$$

In 13 – 22, solve the following systems by graphing.

13.

$$\begin{aligned} y &= x + 3 \\ y &= -x + 3 \end{aligned}$$

14.

$$\begin{aligned} y &= 3x - 6 \\ y &= -x + 6 \end{aligned}$$

15.

$$\begin{aligned} 2x &= 4 \\ y &= -3 \end{aligned}$$

16.

$$\begin{aligned} y &= -x + 5 \\ -x + y &= 1 \end{aligned}$$

17.

$$\begin{aligned} x + 2y &= 8 \\ 5x + 2y &= 0 \end{aligned}$$

18.

$$\begin{aligned} 3x + 2y &= 12 \\ 4x - y &= 5 \end{aligned}$$

19.

$$\begin{aligned} 5x + 2y &= -4 \\ x - y &= 2 \end{aligned}$$

20.

$$\begin{aligned} 2x + 4 &= 3y \\ x - 2y + 4 &= 0 \end{aligned}$$

21.

$$\begin{aligned} y &= \frac{x}{2} - 3 \\ 2x - 5y &= 5 \end{aligned}$$

22.

$$\begin{aligned} y &= 4 \\ x &= 8 - 3y \end{aligned}$$

23. Mary's car is 10 years old and has a problem. The repair man indicates that it will cost her \$1200.00 to repair her car. She can purchase a different, more efficient car for \$4,500.00. Her present car averages about \$2,000.00 per year for gas while the new car would average about \$1,500.00 per year. Find the number of years for which the total cost of repairs would equal the total cost of replacement.
24. Juan is considering two cell phone plans. The first company charges \$120.00 for the phone and \$30 per month for the calling plan that Juan wants. The second company charges \$40.00 for the same phone, but charges \$45 per month for the calling plan that Juan wants. After how many months would the total cost of the two plans be the same?
25. A tortoise and hare decide to race 30 feet. The hare, being much faster, decided to give the tortoise a head start of 20 feet. The tortoise runs at 0.5 feet/sec and the hare runs at 5.5 feet per second. How long will it be until the hare catches the tortoise?

7.2 Systems Using Substitution

Here you'll learn to use substitution to solve a system of linear equations.

Suppose that at a bakery, bagels are sold for one price, and muffins are sold for another price. 4 bagels and 2 muffins cost \$11, while 3 bagels and 3 muffins cost \$12. How much are bagels and muffins? Could you set up a system of equations to solve for the prices? Do you think you could solve this system by substitution? After completing this Concept, you'll be able to use substitution to solve systems of linear equations so that you can handle scenarios like this.

Guidance

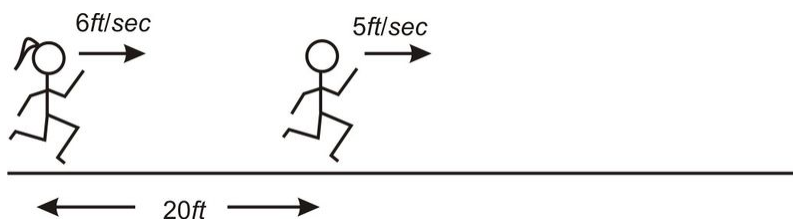
While the graphical approach to solving systems is helpful, it may not always provide exact answers. Therefore, we will learn a second method to solving systems. This method uses the **Substitution Property of Equality**.

Substitution Property of Equality: If $y = \text{an algebraic expression}$, then the algebraic expression can be substituted for any y in an equation or an inequality.

Consider the racing example from the previous Concept.

Example A

Peter and Nadia like to race each other. Peter can run at a speed of 5 feet per second and Nadia can run at a speed of 6 feet per second. To be a good sport, Nadia likes to give Peter a head start of 20 feet. How long does Nadia take to catch up with Peter? At what distance from the start does Nadia catch up with Peter?



The two racers' information was translated into two equations.

$$\text{Peter: } d = 5t + 20$$

$$\text{Nadia: } d = 6t$$

We want to know when the two racers will be the same distance from the start. This means we can set the two equations equal to each other.

$$5t + 20 = 6t$$

Now solve for t .

$$5t - 5t + 20 = 6t - 5t$$

$$20 = 1t$$

After 20 seconds, Nadia will catch Peter.

Now we need to determine how far from the distance the two runners are. You already know $20 = t$, so we will substitute to determine the distance. Using *either equation*, substitute the known value for t and find d .

$$d = 5(20) + 20 \rightarrow 120$$

When Nadia catches Peter, the runners are 120 feet from the starting line.

The **substitution method** is useful when one equation of the system is of the form $y = \text{algebraic expression}$ or $x = \text{algebraic expression}$.

Example B

Find the solution to the system $\begin{cases} y = 3x - 5 \\ y = -2x + 5 \end{cases}$ using substitution.

Solution: Each equation is equal to the variable y , therefore the two algebraic expressions must equal each other.

$$3x - 5 = -2x + 5$$

Solve for x .

$$\begin{aligned} 3x - 5 + 5 &= -2x + 5 + 5 \\ 3x + 2x &= -2x + 2x + 10 \\ 5x &= 10 \\ x &= 2 \end{aligned}$$

The x -coordinate of the intersection of the two lines is 2. Now you must find the y -coordinate using *either of the two equations*.

$$y = -2(2) + 5 = 1$$

The solution to the system is $x = 2$, $y = 1$ or $(2, 1)$.

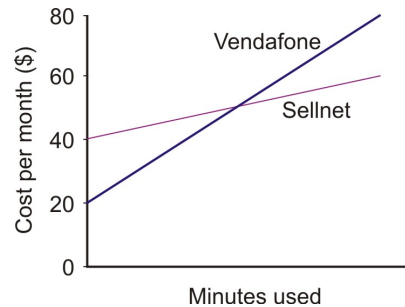
Solving Real-World Systems by Substitution

Example C

Anne is trying to choose between two phone plans. Vendaphone's plan costs \$20 per month, with calls costing an additional 25 cents per minute. Sellnet's plan charges \$40 per month, but calls cost only 8 cents per minute. Which should she choose?

Solution: Anne's choice will depend upon how many minutes of calls she expects to use each month. We start by writing two equations for the cost in dollars in terms of the minutes used. Since the number of minutes is the independent variable, it will be our x . Cost is dependent on minutes. The *cost per month* is the *dependent* variable and will be assigned y .

$$\begin{array}{ll} \text{For Vendafone} & y = 0.25x + 20 \\ \text{For Sellnet} & y = 0.08x + 40 \end{array}$$



By graphing two equations, we can see that at some point the two plans will charge the same amount, represented by the intersection of the two lines. Before this point, Sellnet's plan is more expensive. After the intersection, Sellnet's plan is cheaper.

Use substitution to find the point that the two plans are the same. Each algebraic expression is equal to y , so they must equal each other.

$$0.25x + 20 = 0.08x + 40$$

$$0.25x = 0.08x + 20$$

$$0.17x = 20$$

$$x = 117.65 \text{ minutes}$$

Subtract 20 from both sides.

Subtract $0.08x$ from both sides.

Divide both sides by 0.17.

Rounded to two decimal places.

We can now use our sketch, plus this information, to provide an answer. If Anne will use 117 minutes or fewer every month, she should choose Vendafone. If she plans on using 118 or more minutes, she should choose Sellnet.

Video Review



MEDIA

Click image to the left for more content.



MEDIA

Click image to the left for more content.

Guided Practice

Solve the system $\begin{cases} x + y = 2 \\ y = 3 \end{cases}$.

Solution: The second equation is solved for the variable x . Therefore, we can substitute the value “3” for any y in the system.

$$x + y = 2 \rightarrow x + 3 = 2$$

Now solve the equation for x :

$$\begin{aligned} x + 3 - 3 &= 2 - 3 \\ x &= -1 \end{aligned}$$


The x -coordinate of the intersection of these two equations is -1 . Now we must find the y -coordinate using substitution.

$$\begin{aligned} x + y &= 2 \rightarrow (-1) + y = 2 \\ -1 + 1 + y &= 2 + 1 \\ y &= 3 \end{aligned}$$

As seen in the previous Concept, the solution to the system is $(-1, 3)$.

Practice

Sample explanations for some of the practice exercises below are available by viewing the following video. Note that there is not always a match between the number of the practice exercise in the video and the number of the practice exercise listed in the following exercise set. However, the practice exercise is the same in both. [CK-12 Basic Algebra: Solving Linear Systems by Substitution](#) (9:21)



MEDIA

Click image to the left for more content.

1. Explain the process of solving a system using the Substitution Property.
2. Which systems are easier to solve using substitution?

Solve the following systems. Remember to find the value for both variables!

3.
$$\begin{cases} y = -3 \\ 6x - 2y = 0 \end{cases}$$
4.
$$\begin{cases} -3 - 3y = 6 \\ y = -3x + 4 \end{cases}$$
5.
$$\begin{cases} y = 3x + 16 \\ y = x + 8 \end{cases}$$

6.
$$\begin{cases} y = -6x - 3 \\ y = 3 \end{cases}$$

7.
$$\begin{cases} y = -2x + 5 \\ y = -1 - 8x \end{cases}$$

8.
$$\begin{cases} y = 6 + x \\ y = -2x - 15 \end{cases}$$

9.
$$\begin{cases} y = -2 \\ y = 5x - 17 \end{cases}$$

10.
$$\begin{cases} x + y = 5 \\ 3x + y = 15 \end{cases}$$

11.
$$\begin{cases} 12y - 3x = -1 \\ x - 4y = 1 \end{cases}$$

12.

$$x + 2y = 9$$

$$3x + 5y = 20$$

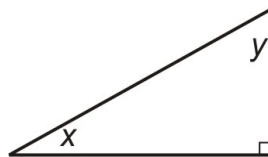
13.

$$x - 3y = 10$$

$$2x + y = 13$$

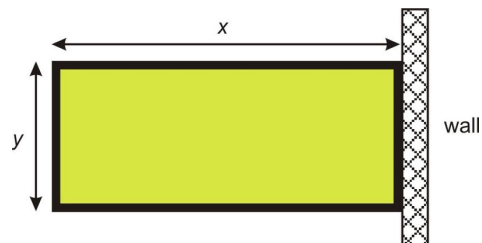
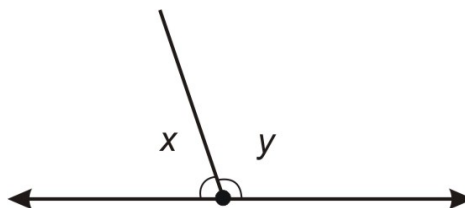
14. Solve the system $\begin{cases} y = \frac{1}{4}x - 14 \\ y = \frac{19}{8}x + 7 \end{cases}$ by graphing and substitution. Which method do you prefer? Why?

15. Of the two non-right angles in a right triangle, one measures twice that of the other. What are the angles?



16. The sum of two numbers is 70. They differ by 11. What are the numbers?

17. A rectangular field is enclosed by a fence on three sides and a wall on the fourth side. The total length of the fence is 320 yards. If the field has a total perimeter of 400 yards, what are the dimensions of the field?

18. A ray cuts a line forming two angles. The difference between the two angles is 18° . What does each angle measure?

Mixed Review

19. Solve for h : $25 \geq |2h + 5|$.
20. Subtract: $\frac{4}{3} - \frac{1}{2}$.
21. You write the letters to ILLINOIS on separate pieces of paper and place them into a hat.
 - a. Find $P(\text{drawing an } I)$.
 - b. Find the odds of drawing an L .
22. Graph $x < 2$ on a number line and on a Cartesian plane.
23. Give an example of an ordered pair in quadrant II.
24. The data below show the average life expectancy in the United States for various years.
 - a. Use the method of interpolation to find the average life expectancy in 1943.
 - b. Use the method of extrapolation to find the average life expectancy in 2000.
 - c. Find an equation for the line of best fit. How do the predictions of this model compare to your answers in questions a) and b)?

TABLE 7.1: U. S. Life Expectancy at Birth

Birth Year	Female	Male	Combined
1940	65.2	60.8	62.9
1950	71.1	65.6	68.2
1960	73.1	66.6	69.7
1970	74.7	67.1	70.8
1975	76.6	68.6	72.6
1980	77.5	70.0	73.7
1985	78.2	71.2	74.7
1990	78.8	71.8	75.4
1995	78.9	72.5	75.8
1998	79.4	73.9	76.7

7.3 Mixture Problems

Here you'll learn the steps needed to solve problems involving mixtures.

What if you had two types of grape drink: one with 5% real fruit juice and another with 10% real fruit juice? Suppose you wanted a gallon of grape drink with 6% real fruit juice. How much of the 5% drink and how much of the 10% drink should you mix together to produce it? In this Concept, you'll learn how to solve mixture problems like this one.

Guidance

Systems of equations arise in chemistry when mixing chemicals in solutions and can even be seen in things like mixing nuts and raisins or examining the change in your pocket!

By rearranging one sentence in an equation into $y = \text{algebraic expression}$ or $x = \text{algebraic expression}$, you can use the Substitution Method to solve the system.



Image courtesy of Kevin@flickr.com/creativecommons

Example A

Nadia empties her purse and finds that it contains only nickels and dimes. If she has a total of 7 coins and they have a combined value of 55 cents, how many of each coin does she have?

Solution: Begin by choosing appropriate variables for the unknown quantities. Let $n = \text{the number of nickels}$ and $d = \text{the number of dimes}$.

There are seven coins in Nadia's purse: $n + d = 7$.

The total is 55 cents: $0.05n + 0.10d = 0.55$.

The system is:
$$\begin{cases} n + d = 7 \\ 0.05n + 0.10d = 0.55 \end{cases}$$

We can quickly rearrange the first equation to isolate d , the number of dimes: $d = 7 - n$.

Using the Substitution Property, every d can be replaced with the expression $7 - n$.

$$\begin{array}{rcl}
 & 0.05n + 0.10(7 - n) = 0.55 & \\
 \text{Now solve for } n : & 0.05n + 0.70 - 0.10n = 0.55 & \text{Distributive Property} \\
 & -0.05n + 0.70 = 0.55 & \text{Add like terms.} \\
 & -0.05n = -0.15 & \text{Subtract 0.70.} \\
 & n = 3 & \text{Divide by } -0.05.
 \end{array}$$

Nadia has 3 nickels. There are seven coins in the purse; three are nickels, so four must be dimes.

Check to make sure this combination is 55 cents: $0.05(3) + 0.10(4) = 0.15 + 0.40 = 0.55$.

Example B

A chemist has two containers, Mixture A and Mixture B. Mixture A has a 60% copper sulfate concentration. Mixture B has a 5% copper sulfate concentration. The chemist needs to have a mixture equaling 500 mL with a 15% concentration. How much of each mixture does the chemist need?



Flickr.com/creativecommons

Solution: Although not explicitly stated, there are two equations involved in this situation.

- Begin by stating the variables. Let $A = \text{mixture A}$ and $B = \text{mixture B}$.
- The total mixture needs to have 500 mL of liquid.

Equation 1 (how much total liquid): $A + B = 500$.

- The total amount of copper sulfate needs to be 15% of the total amount of solution (500 mL). $0.15 \cdot 500 = 75 \text{ ounces}$

Equation 2 (how much copper sulfate the chemist needs): $0.60A + 0.05B = 75$

$$\begin{cases} A + B = 500 \\ 0.60A + 0.05B = 75 \end{cases}$$

By rewriting equation 1, the Substitution Property can be used: $A = 500 - B$.

Substitute the expression $500 - B$ for the variable A in the second equation.

$$0.60(500 - B) + 0.05B = 75$$

Solve for B .

$$\begin{array}{rcl} 300 - 0.60B + 0.05B = 75 & & \text{Distributive Property} \\ 300 - 0.55B = 75 & & \text{Add like terms.} \\ -0.55B = -225 & & \text{Subtract 300.} \\ B \approx 409 \text{ mL} & & \end{array}$$

The chemist needs approximately 409 mL of mixture B . To find the amount of mixture A , use the first equation:
 $A + 409 = 500$

$$A = 91 \text{ mL}$$

The chemist needs 91 milliliters of mixture A and 409 milliliters of mixture B to get a 500 mL solution with a 15% copper sulfate concentration.

Example C

A coffee company makes a product which is a mixture of two coffees, using a coffee that costs \$10.20 per pound and another coffee that costs \$6.80 per pound. In order to make 20 pounds of a mixture that costs \$8.50 per pound, how much of each type of coffee should it use?

Solution:

Let m be the amount of the \$10.20 coffee, and let n be the amount needed of the \$6.80 coffee. Since we want 20 pounds of coffee that costs \$8.50 per pound, the total cost for all 20 pounds is $20 \cdot \$8.50 = \170 . The cost for the 20 pounds of mixture is equal to the cost of each type of coffee added together: $10.20 \cdot m + 6.8 \cdot n = 170$.

Also, the amount of each type of coffee added together equals 20 pounds: $m + n = 20$.

$$\text{The system is: } \begin{cases} m + n = 20 \\ 10.20 \cdot m + 6.8 \cdot n = 170 \end{cases}$$

We can isolate one variable and use substitution to solve the system:

$$m = 20 - n$$

$$\begin{array}{rcl} & 10.20(20 - n) + 6.8n = 170 & \\ \text{Now solve for } n: & 204 - 10.20n + 6.8n = 170 & \text{Distributive Property} \\ & 204 - 3.4n = 170 & \text{Add like terms.} \\ & -3.4n = -34 & \text{Subtract 204.} \\ & n = 10 & \text{Divide by } -3.4. \end{array}$$

Since $n = 10$, we can plug that into $m + n = 20$.

$$m + 10 = 20 \Rightarrow m = 10.$$

The coffee company needs to use 10 pounds of each type of coffee in order to have a 20 pound mixture that costs \$8.50 per pound.

Video Review



MEDIA

Click image to the left for more content.



MEDIA

Click image to the left for more content.

Guided Practice

A light green latex paint that is 20% yellow paint is combined with a darker green latex paint that is 45% yellow paint. How many gallons of each paint must be used to create 15 gallons of a green paint that is 25% yellow paint?

Solution:

Let x be the number of gallons of the 20% yellow paint and let y be the number of gallons of the 40% yellow paint. This means that we want those two numbers to add up to 15: $x + y = 15$

Now if we want 15 gallons of 25% yellow paint, that means we want $0.25 \cdot 15 = 3.75$ gallons of pure yellow pigment. The expression $0.20 \cdot x$ represents the amount of pure yellow pigment in the x gallons of 20% yellow paint. The expression $0.45 \cdot y$ represents the amount of pure yellow pigment in the y gallons of 45% yellow paint. Combining the last two adds up to the 3.75 gallons of pure pigment in the final mixture:

$$0.20x + 0.40y = 3.75$$

$$\text{The system is: } \begin{cases} x + y = 15 \\ 0.20x + 0.45y = 3.75 \end{cases}$$

We can isolate one variable and use substitution to solve the system:

$$x = 15 - y$$

$$0.20(15 - y) + 0.45y = 3.75$$

$$\text{Now solve for } x: \quad 3 - 0.20y + 0.45y = 3.75 \quad \text{Distributive Property}$$

$$3 + 0.2y = 3.75 \quad \text{Add like terms.}$$

$$0.25y = 0.75 \quad \text{Subtract 3.}$$

$$y = 3 \quad \text{Divide by 0.25.}$$

Now we can plug in $y = 3$ into $x + y = 15$:

$$x + y = 15 \Rightarrow x + 3 = 15 \Rightarrow x = 12.$$

This means 12 gallons of 20% yellow paint should be mixed with 3 gallons of 45% yellow paint in order to get 15 gallons of 25% yellow paint.

Practice

1. I have \$15.00 and wish to buy five pounds of mixed nuts for a party. Peanuts cost \$2.20 per pound. Cashews cost \$4.70 per pound. How many pounds of each should I buy?
2. A chemistry experiment calls for one liter of sulfuric acid at a 15% concentration, but the supply room only stocks sulfuric acid in concentrations of 10% and 35%. How many liters of each should be mixed to give the acid needed for the experiment?
3. Bachellet wants to know the density of her bracelet, which is a mix of gold and silver. Density is total mass divided by total volume. The density of gold is 19.3 g/cc and the density of silver is 10.5 g/cc. The jeweler told her that the volume of silver used was 10 cc and the volume of gold used was 20 cc. Find the combined density of her bracelet.
4. Jeffrey wants to make jam. He needs a combination of raspberries and blackberries totaling six pounds. He can afford \$11.60. How many pounds of each berry should he buy?
5. A farmer has fertilizer in 5% and 15% solutions. How much of each type should he mix to obtain 100 liters of fertilizer in a 12% solution?

Mixed Review

6. The area of a square is 96 *inches*². Find the length of a square exactly.
7. The volume of a sphere is $V = \frac{4}{3}\pi r^3$, where $r = \text{radius}$. Find the volume of a sphere with a diameter of 11 centimeters.
8. Find:
 - a. the additive inverse of 7.6
 - b. the multiplicative inverse of 7.6.
9. Solve for x : $\frac{1.5}{x} = 6$.
10. The temperature in Fahrenheit can be approximated by crickets using the rule “Count the number of cricket chirps in 15 seconds and add 40.”
 - a. What is the domain of this function?
 - b. What is the range?
 - c. Would you expect to hear any crickets at 32°F? Explain your answer.
 - d. How many chirps would you hear if the temperature were 57°C?
11. Is 4.5 a solution to $45 - 6x \leq 18$?
12. Graph $y = |x| - 5$.
13. Solve. Write the solution using interval notation and graph the solution on a number line: $-9 \geq \frac{c}{-4}$.
14. The area of a rectangle is 1,440 square centimeters. Its length is ten times more than its width. What are the dimensions of the rectangle?
15. Suppose $f(x) = 8x^2 - 10$. Find $f(-6)$.
16. Torrey is making candles from beeswax. Each taper candle needs 86 square inches and each pillar candle needs 264 square inches. Torrey has a total of 16 square feet of beeswax. Graph all the possible combinations of taper and pillar candles Torrey could make (Hint: *one square foot = 144 square inches*).

7.4 Linear Systems with Addition or Subtraction

Here you'll learn how to use the elimination method in cases of simple addition or subtraction to solve systems of linear equations.

Suppose two extended families went to an amusement park, where adult tickets and children's tickets have different prices. If the first family had 5 adults and 8 children and paid a total of \$124, and the second family had 5 adults and 12 children and paid \$156, how much did each type of ticket cost? Could you write a system of equations representing this situation? If you wanted to solve the system by elimination, how would you go about doing it? In this Concept, you'll learn how to use elimination to solve a system of linear equations similar to the one representing this scenario by addition or subtraction.

Watch This

Multimedia Link: For help with solving systems by elimination, visit this site: http://www.teachertube.com/viewVideo.php?title=Solving_System_of_Equations_using_Elimination&video_id=10148 Teacher Tube video.

Guidance

As you noticed in the previous Concept, solving a system algebraically will give you the most accurate answer and in some cases, it is easier than graphing. However, you also noticed that it took some work in several cases to rewrite one equation **before** you could use the Substitution Property. There is another method used to solve systems algebraically: the **elimination method**.

The purpose of the **elimination method** to solve a system is to cancel, or eliminate, a variable by either adding or subtracting the two equations. This method works well if both equations are in standard form.

Example A

If one apple plus one banana costs \$1.25 and one apple plus two bananas costs \$2.00, how much does it cost for one banana? One apple?

Solution: Begin by defining the variables of the situation. Let $a =$ the number of apples and $b =$ the number of bananas. By translating each purchase into an equation, you get the following system:

$$\begin{cases} a + b = 1.25 \\ a + 2b = 2.00 \end{cases}$$

You could rewrite the first equation and use the Substitution Property here, but because both equations are in standard form, you can also use the elimination method.

Notice that each equation has the value $1a$. If you were to subtract these equations, what would happen?

$$\begin{array}{r}
 a + b = 1.25 \\
 -(a + 2b = 2.00) \\
 \hline
 -b = -0.75 \\
 b = 0.75
 \end{array}$$

Therefore, one banana costs \$0.75, or 75 cents. By subtracting the two equations, we were able to **eliminate** a variable and solve for the one remaining.

How much is one apple? Use the first equation and the Substitution Property.

$$\begin{array}{l}
 a + 0.75 = 1.25 \\
 a = 0.50 \rightarrow \text{one apple costs 50 cents}
 \end{array}$$

Example B

$$\text{Solve the system } \begin{cases} 3x + 2y = 11 \\ 5x - 2y = 13 \end{cases} .$$

Solution: These equations would take much more work to rewrite in slope-intercept form to graph, or to use the Substitution Property. This tells us to try to eliminate a variable. The coefficients of the x -variables have nothing in common, so adding will not cancel the x -variable.

Looking at the y -variable, you can see the coefficients are 2 and -2 . By adding these together, you get zero. Add these two equations and see what happens.

$$\begin{array}{r}
 3x + 2y = 11 \\
 + (5x - 2y) = 13 \\
 \hline
 8x + 0y = 24
 \end{array}$$

The resulting equation is $8x = 24$. Solving for x , you get $x = 3$. To find the y -coordinate, choose *either equation*, and substitute the number 3 for the variable x .

$$\begin{array}{l}
 3(3) + 2y = 11 \\
 9 + 2y = 11 \\
 2y = 2 \\
 y = 1
 \end{array}$$

The point of intersection of these two equations is (3, 1).



Dagwood21/www.flickr.com/creativecommons

Example C

Andrew is paddling his canoe down a fast-moving river. Paddling downstream he travels at 7 miles per hour, relative to the river bank. Paddling upstream, he moves slower, traveling at 1.5 miles per hour. If he paddles equally hard in both directions, calculate, in miles per hour, the speed of the river and the speed Andrew would travel in calm water.

Solution: We have two unknowns to solve for, so we will call the speed that Andrew paddles at x , and the speed of the river y . When traveling downstream, Andrew's speed is boosted by the river current, so his total speed is the canoe speed plus the speed of the river ($x + y$). Upstream, his speed is hindered by the speed of the river. His speed upstream is ($x - y$).

Downstream Equation	$x + y = 7$
Upstream Equation	$x - y = 1.5$

Notice y and $-y$ are additive inverses. If you add them together, their sum equals zero. Therefore, by adding the two equations together, the variable y will cancel, leaving you to solve for the remaining variable, x .

$$\begin{array}{r}
 x + y = 7 \\
 + (x - y) = 1.5 \\
 \hline
 2x + 0y = 8.5 \\
 2x = 8.5
 \end{array}$$

Therefore, $x = 4.25$; Andrew is paddling 4.25 miles/hour. To find the speed of the river, substitute your known value into either equation and solve.

$$\begin{array}{r}
 4.25 - y = 1.5 \\
 -y = -2.75 \\
 y = 2.75
 \end{array}$$

The stream's current is moving at a rate of 2.75 miles/hour.

Video Review



MEDIA

 Click image to the left for more content.



MEDIA

 Click image to the left for more content.

Guided Practice

Solve the system $\begin{cases} 5s + 2t = 6 \\ 9s + 2t = 22 \end{cases}$.

Solution:

Since these equations are both written in standard form, and both have the term $2t$ in them, we will use elimination by subtracting. This will cause the t terms to cancel out and we will be left with one variable, s , which we can then isolate.

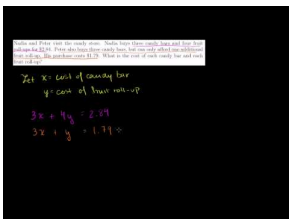
$$\begin{array}{r} 5s + 2t = 6 \\ - (9s + 2t = 22) \\ \hline -4s + 0t = -16 \\ -4s = -16 \\ s = 4 \end{array}$$

$$\begin{array}{r} 5(4) + 2t = 6 \\ 20 + 2t = 6 \\ 2t = -14 \\ t = -7 \end{array}$$

The solution is $(4, -7)$.

Practice

Sample explanations for some of the practice exercises below are available by viewing the following video. Note that there is not always a match between the number of the practice exercise in the video and the number of the practice exercise listed in the following exercise set. However, the practice exercise is the same in both. [CK-12 Basic Algebra: Solving Linear Systems by Elimination](#) (12:44)



MEDIA

 Click image to the left for more content.

1. What is the purpose of the elimination method to solve a system? When is this method appropriate?

In 2 – 10, solve each system using elimination.

2.
$$\begin{cases} 2x + y = -17 \\ 8x - 3y = -19 \end{cases}$$

3.
$$\begin{cases} x + 4y = -9 \\ -2x - 5y = 12 \end{cases}$$

4.
$$\begin{cases} -2x - 5y = -10 \\ x + 4y = 8 \end{cases}$$

5.
$$\begin{cases} x - 3y = -10 \\ -8x + 5y = -15 \end{cases}$$

6.
$$\begin{cases} -x - 6y = -18 \\ x - 6y = -6 \end{cases}$$

7.
$$\begin{cases} 5x - 3y = -14 \\ x - 3y = 2 \end{cases}$$

8.

$$3x + 4y = 2.5$$

$$5x - 4y = 25.5$$

9.

$$5x + 7y = -31$$

$$5x - 9y = 17$$

10.

$$3y - 4x = -33$$

$$5x - 3y = 40.5$$

11. Nadia and Peter visit the candy store. Nadia buys three candy bars and four fruit roll-ups for \$2.84. Peter also buys three candy bars, but he can afford only one fruit roll-up. His purchase costs \$1.79. What is the cost of each candy bar and each fruit roll-up?
12. A small plane flies from Los Angeles to Denver with a tail wind (the wind blows in the same direction as the plane), and an air-traffic controller reads its ground-speed (speed measured relative to the ground) at 275 miles per hour. Another identical plane moving in the opposite direction has a ground-speed of 227 miles per hour. Assuming both planes are flying with identical air-speeds, calculate the speed of the wind.
13. An airport taxi firm charges a pick-up fee, plus an additional per-mile fee for any rides taken. If a 12-mile journey costs \$14.29 and a 17-mile journey costs \$19.91, calculate:
- the pick-up fee

- b. the per-mile rate
 - c. the cost of a seven-mile trip
14. Calls from a call-box are charged per minute at one rate for the first five minutes, and then at a different rate for each additional minute. If a seven-minute call costs \$4.25 and a 12-minute call costs \$5.50, find each rate.
 15. A plumber and a builder were employed to fit a new bath, each working a different number of hours. The plumber earns \$35 per hour, and the builder earns \$28 per hour. Together they were paid \$330.75, but the plumber earned \$106.75 more than the builder. How many hours did each work?
 16. Paul has a part-time job selling computers at a local electronics store. He earns a fixed hourly wage, but he can earn a bonus by selling warranties for the computers he sells. He works 20 hours per week. In his first week, he sold eight warranties and earned \$220. In his second week, he managed to sell 13 warranties and earned \$280. What is Paul's hourly rate, and how much extra does he get for selling each warranty?

Mixed Review

17. Baxter the golden retriever is lying in the sun. He casts a shadow of 3 feet. The doghouse he is next to is 3 feet tall and casts an 8-foot shadow. What is Baxter's height?
18. A botanist watched the growth of a lily. At 3 weeks, the lily was 4 inches tall. Four weeks later, the lily was 21 inches tall. Assuming this relationship is linear:
 - a. Write an equation to show the growth pattern of this plant.
 - b. How tall was the lily at the 5.5-week mark?
 - c. Is there a restriction on how high the plant will grow? Does your equation show this?
19. The "Wave" is an exciting pastime at football games. To prepare, students in a math class took the data in the table below.
 - a. Find a linear regression equation for this data. Use this model to estimate the number of seconds it will take for 18 students to complete a round of the wave.
 - b. Use the method of interpolation to determine the amount of time it would take 18 students to complete the wave.

s (number of students in wave)	4	8	12	16	20	24	28	30
t (time in seconds to complete on full round)	2	3.2	4	5.6	7	7.9	8.6	9.1

7.5 Linear Systems with Multiplication

Here you'll learn how to multiply by scalars in order to use elimination to solve systems of linear equations.

Suppose that you want to buy some guppies and rainbowfish for your aquarium. If you buy 10 guppies and 15 rainbowfish, it will cost you \$90, and if you buy 15 guppies and 10 rainbowfish, it will cost you \$85. How much do guppies and rainbowfish each cost? Can you set up a system of equations to find out? How would you go about solving it? In this Concept, you'll learn about solving systems of linear equations by multiplication so that you can find the solution to this type of problem.

Guidance

The previous Concepts have provided three methods to solve systems: graphing, substitution, and elimination through addition and subtraction. As stated in each Concept, these methods have strengths and weaknesses. Below is a summary.

Graphing

- ✓ A good technique to visualize the equations and when both equations are in slope-intercept form.
- Solving a system by graphing is often imprecise and will not provide exact solutions.

Substitution

- ✓ Works particularly well when one equation is in standard form and the second equation is in slope-intercept form.
- ✓ Gives exact answers.
- Can be difficult to use substitution when both equations are in standard form.

Elimination by Addition or Subtraction

- ✓ Works well when both equations are in standard form **and** the coefficients of one variable are additive inverses.
- ✓ Answers will be exact.
- Can be difficult to use if one equation is in standard form and the other is in slope-intercept form.
- Addition or subtraction does not work if the coefficients of one variable are not additive inverses.

Although elimination by only addition and subtraction does not work without additive inverses, you can use the Multiplication Property of Equality and the Distributive Property to create additive inverses.

Multiplication Property and Distributive Property:

If $ax + by = c$, then $m(ax + by) = m(c)$ and $m(ax + by) = m(c) \rightarrow (am)x + (bm)y = mc$

While this definition box may seem complicated, it really states that you can multiply the entire equation by a particular value and then use the Distributive Property to simplify. The value you are multiplying by is called a **scalar**.

Example A

Solve the system $\begin{cases} 7x + 4y = 12 \\ 5x - 2y = 11 \end{cases}$.

Solution: Neither variable has additive inverse coefficients. Therefore, simply adding or subtracting the two equations will not cancel either variable. However, there is a relationship between the coefficients of the y -variable.

$$4 \text{ is the additive inverse of } -2 \times (2)$$

By multiplying the second equation by the scalar 2, you will create additive inverses of y . You can then add the equations.

$$\begin{cases} 7x + 4y = 12 \\ 2(5x - 2y = 11) \end{cases} \rightarrow \begin{cases} 7x + 4y = 12 \\ 10x - 4y = 22 \end{cases}$$

Add the two equations.

$$17x = 34$$

Divide by 17.

$$x = 2$$

To find the y -value, use the Substitution Property in either equation.

$$7(2) + 4y = 12$$

$$14 + 4y = 12$$

$$4y = -2$$

$$y = -\frac{1}{2}$$

The solution to this system is $(2, -\frac{1}{2})$.

Example B

$$\text{Solve the system } \begin{cases} 3x + 4y = -25 \\ 2x - 3y = 6 \end{cases} .$$

Solution:

Not only does neither variable have additive inverse coefficients, but there also isn't a relationship between the coefficients of either variable. In other words, the coefficients of each variable do not share any common factors. Therefore, we can try to eliminate either variable first. We will show how to solve this problem by eliminating x .

In order to make x have the same coefficient in each equation, we must multiply one equation by the coefficient of x in the other equation. We need to multiply the first equation by 2 and the second equation by 3. If we make one of those numbers negative, we can easily eliminate x . It does not matter which one we make negative:

$$\begin{cases} 2(3x + 4y = -25) \\ -3(2x - 3y = 6) \end{cases} \rightarrow \begin{cases} 6x + 8y = -50 \\ -6x + 9y = -18 \end{cases}$$

Add the two equations.

$$17y = 68$$

Divide by 17.

$$y = -4$$

To find the x -value, use the Substitution Property in either equation.

$$\begin{aligned} 2x - 3(-4) &= 6 \\ 2x + 12 &= 6 \\ 2x &= -6 \\ x &= -3 \end{aligned}$$

The solution to this system is $(-3, -4)$.

Example C

Andrew and Anne both use the I-Haul truck rental company to move their belongings from home to the dorm rooms on the University of Chicago campus. I-Haul has a charge per day and an additional charge per mile. Andrew travels from San Diego, California, a distance of 2,060 miles in five days. Anne travels 880 miles from Norfolk, Virginia, and it takes her three days. If Anne pays \$840 and Andrew pays \$1,845.00, what does I-Haul charge:

a) per day?

b) per mile traveled?

Solution: Begin by writing a system of linear equations: one to represent Anne and the second to represent Andrew. Let x = amount charged per day and y = amount charged per mile.

$$\begin{cases} 3x + 880y = 840 \\ 5x + 2060y = 1845 \end{cases}$$

There are no relationships seen between the coefficients of the variables. Instead of multiplying one equation by a scalar, we must multiply both equations by the **least common multiple**.

The **least common multiple** is the smallest value that is divisible by two or more quantities **without a remainder**.

Suppose we wanted to eliminate the variable x because the numbers are smaller to work with. The coefficients of x must be additive inverses of the **least common multiple**.

$$LCM \text{ of } 3 \text{ and } 5 = 15$$

$$\begin{cases} -5(3x + 880y = 840) \\ 3(5x + 2060y = 1845) \end{cases} \rightarrow \begin{cases} -15x - 4400y = -4200 \\ 15x + 6180y = 5535 \end{cases}$$

Adding the two equations yields:

$$1780y = 1335$$

Divide by 1780 :

$$y = 0.75$$

The company charges \$0.75 per mile.

To find the amount charged per day, use the Substitution Property and either equation.

$$\begin{aligned}
 5x + 2060(0.75) &= 1845 \\
 5x + 1545 &= 1845 \\
 5x + 1545 - 1545 &= 1845 - 1545 \\
 5x &= 300 \\
 x &= 60
 \end{aligned}$$

I-Haul charges \$60.00 per day and \$0.75 per mile.

Video Review



MEDIA

Click image to the left for more content.



MEDIA

Click image to the left for more content.

Guided Practice

Solve the system $\begin{cases} 4x + 7y = 6 \\ 6x + 5y = 20 \end{cases}$.

Solution:

Neither x nor y have additive inverse coefficients, but the x -variables do share a common factor of 2. Thus we can most easily eliminate x .

In order to make x have the same coefficient in each equation, we must multiply one equation by the factor not shared in the coefficient of x in the other equation. We need to multiply the first equation by 3 and the second equation by 2, making one of them negative as well:

$$\begin{cases} 3(4x + 7y = 6) \\ -2(6x + 5y = 20) \end{cases} \rightarrow \begin{cases} 12x + 21y = 18 \\ -12x - 10y = -40 \end{cases}$$

Add the two equations.

Divide by 11.

$$11y = -22$$

$$y = -2$$


To find the x -value, use the Substitution Property in either equation.

$$\begin{aligned}
 4x + 7(2) &= 6 \\
 4x + 14 &= 6 \\
 4x &= -8 \\
 x &= -2
 \end{aligned}$$

The solution to this system is $(-2, -2)$.

Practice

Sample explanations for some of the practice exercises below are available by viewing the following video. Note that there is not always a match between the number of the practice exercise in the video and the number of the practice exercise listed in the following exercise set. However, the practice exercise is the same in both. [CK-12 Basic Algebra: Solving Linear Systems by Multiplication](#) (12:00)



MEDIA

Click image to the left for more content.

Find the least common multiple of the values given.

1. 5 and 7
2. -11 and 6
3. 15 and 8
4. 7 and 12
5. 2 and 17
6. -3 and 6
7. 6 and $\frac{1}{3}$
8. 3 and 111
9. 9 and 14
10. 5 and -5

List the scalar needed to create the additive inverse.

11. ____ multiply by 6 to create additive inverse of 12.
12. ____ multiply by 5 to create additive inverse of 35.
13. ____ multiply by -10 to create additive inverse of 80.
14. ____ multiply by -7 to create additive inverse of 63.
15. What could you multiply 11 by to create the additive inverse of 121?
16. What scalar could you multiply 4 by to create the additive inverse of -16?

Solve the following systems using multiplication.

17.

$$\begin{aligned}
 5x - 10y &= 15 \\
 3x - 2y &= 3
 \end{aligned}$$

18.

$$\begin{aligned}5x - y &= 10 \\ 3x - 2y &= -1\end{aligned}$$

19.

$$\begin{aligned}5x + 7y &= 15 \\ 7x - 3y &= 5\end{aligned}$$

20.

$$\begin{aligned}9x + 5y &= 9 \\ 12x + 8y &= 12.8\end{aligned}$$

21.

$$\begin{aligned}4x - 3y &= 1 \\ 3x - 4y &= 4\end{aligned}$$

22.

$$\begin{aligned}7x - 3y &= -3 \\ 6x + 4y &= 3\end{aligned}$$

In 23 – 28, solve the systems using any method.

23.

$$\begin{aligned}x &= 3y \\ x - 2y &= -3\end{aligned}$$

24.

$$\begin{aligned}y &= 3x + 2 \\ y &= -2x + 7\end{aligned}$$

25.

$$\begin{aligned}5x - 5y &= 5 \\ 5x + 5y &= 35\end{aligned}$$

26.

$$\begin{aligned}y &= -3x - 3 \\ 3x - 2y + 12 &= 0\end{aligned}$$

27.

$$\begin{aligned}3x - 4y &= 3 \\ 4y + 5x &= 10\end{aligned}$$

28.

$$9x - 2y = -4$$

$$2x - 6y = 1$$

29. Supplementary angles are two angles whose sum is 180° . Angles A and B are supplementary angles. The measure of angle A is 18° less than twice the measure of angle B . Find the measure of each angle.
30. A 150-yard pipe is cut to provide drainage for two fields. If the length of one piece is three yards less than twice the length of the second piece, what are the lengths of the two pieces?
31. Mr. Stein invested a total of \$100,00 in two companies for a year. Company A's stock showed a 13% annual gain, while Company B showed a 3% loss for the year. Mr. Stein made an overall 8% return on his investment over the year. How much money did he invest in each company?
32. A baker sells plain cakes for \$7 or decorated cakes for \$11. On a busy Saturday, the baker started with 120 cakes, and sold all but three. His takings for the day were \$991. How many plain cakes did he sell that day, and how many were decorated before they were sold?
33. Twice John's age plus five times Claire's age is 204. Nine times John's age minus three times Claire's age is also 204. How old are John and Claire?

Quick Quiz

1. Is $(-3, -5)$ a solution to the system $\begin{cases} -3y = 3x + 6 \\ y = -3x + 4 \end{cases}$?
2. Solve the system: $\begin{cases} y = 6x + 17 \\ y = 7x + 20 \end{cases}$.
3. Joann and Phyllis each improved their flower gardens by planting daisies and carnations. Joann bought 10 daisies and 4 carnations and paid \$52.66. Phyllis bought 3 daisies and 6 carnations and paid \$43.11 How much is each daisy? How much is each carnation?
4. Terry's Rental charges \$49 per day and \$0.15 per mile to rent a car. Hurry-It-Up charges a flat fee of \$84 per day to rent a car. Write these two companies' charges in equation form and use the system to determine at what mileage the two companies will charge the same for a one-day rental.

7.6 Consistent and Inconsistent Linear Systems

Here you'll learn to decide if a system of linear equations is consistent, inconsistent, or consistent-dependent.

In Economics, a line representing supply and a line representing demand are often graphed on the same coordinate plane, and the lines intersect at one point. How many solutions does this system of linear equations have? Is the system consistent, inconsistent, or consistent dependent? After completing this Concept, you'll be able to identify how many solutions a system of equations has and classify the system accordingly.

Guidance

Solutions to a system can have several forms:

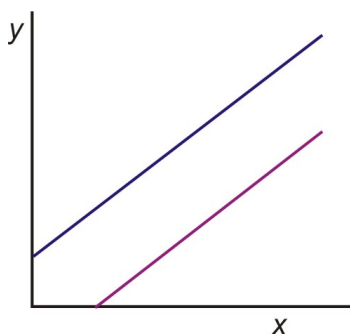
- One solution
- Two or more solutions
- No solutions
- An infinite number of solutions

Inconsistent Systems

This Concept will focus on the last two situations: systems with no solutions or systems with an infinite amount of solutions.

A system with parallel lines will have **no solutions**.

Remember that parallel lines have the same slope. When graphed, the lines will have the same steepness with different y -intercepts. Therefore, parallel lines will never intersect, so they have no solution.



Example A

Algebraically, a system with no solutions looks like this when solved.

$$\begin{cases} 4y = 5 - 3x \\ 6x + 8y = 7 \end{cases}$$

The first equation in this system is “almost” solved for y . Substitution would be appropriate to solve this system.

$$\begin{cases} 4y = 5 - 3x \\ 6x + 8y = 7 \end{cases} \rightarrow \begin{cases} y = \frac{5}{4} - \frac{3}{4}x \\ 6x + 8y = 7 \end{cases}$$

Using the Substitution Property, replace the y -variable in the second equation with its algebraic expression in equation #1.

$$\begin{array}{l} \text{Apply the Distributive Property.} \\ \text{Add like terms.} \end{array} \qquad \begin{array}{l} 6x + 8\left(\frac{5}{4} - \frac{3}{4}x\right) = 7 \\ 6x + 10 - 6x = 7 \\ 10 = 7 \end{array}$$

You have solved the equation correctly, yet the answer does not make sense.

When solving a system of parallel lines, the final equation will be untrue.

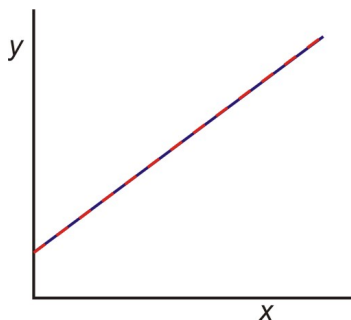
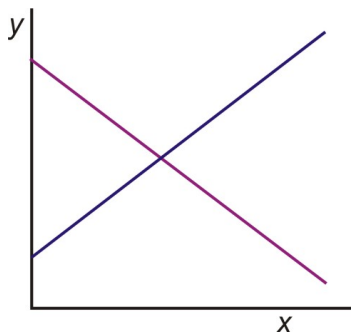
Because $10 \neq 7$ and you have done your math correctly, you can say this system has “no solutions.”

A system with no solutions is called an **inconsistent system**.

Consistent Systems

Consistent systems, on the other hand, have at least one solution. This means there is at least one intersection of the lines. There are three cases for consistent systems:

- One intersection, as is commonly practiced in linear system Concepts
- Two or more intersections, as you will see when a quadratic equation intersects a linear equation
- Infinitely many intersections, as with **coincident lines**



Coincident lines are lines with the same slope and y -intercept. The lines completely overlap.

When solving a consistent system involving coincident lines, the solution has the following result.

$$\begin{cases} x + y = 3 \\ 3x + 3y = 9 \end{cases}$$

Multiply the first equation by -3 : $\begin{cases} -3(x + y = 3) \\ 3x + 3y = 9 \end{cases} \rightarrow \begin{cases} -3x - 3y = -9 \\ 3x + 3y = 9 \end{cases}$

Add the equations together.

$$0 = 0$$

There are no variables left and you KNOW you did the math correctly. However, this is a true statement.

When solving a system of coincident lines, the resulting equation will be without variables and the statement will be **true**. You can conclude the system has an **infinite number of solutions**. This is called a **consistent-dependent system**.

Example B

Identify the system as consistent, inconsistent, or consistent-dependent.

$$3x - 2y = 4$$

$$9x - 6y = 1$$

Solution: Because both equations are in standard form, elimination is the best method to solve this system.

Multiply the first equation by 3.

$$3(3x - 2y = 4)$$

$$9x - 6y = 12$$

$$\Rightarrow$$

$$9x - 6y = 1$$

$$9x - 6y = 1$$

Subtract the two equations.

$$9x - 6y = 12$$

$$\underline{9x - 6y = 1}$$

$$0 = 11 \quad \text{This Statement is not true.}$$

This is an untrue statement; therefore, you can conclude:

1. These lines are parallel.
2. The system has no solution.
3. The system is inconsistent.

Example C

Two movie rental stores are in competition. Movie House charges an annual membership of \$30 and charges \$3 per movie rental. Flicks for Cheap charges an annual membership of \$15 and charges \$3 per movie rental. After how many movie rentals would Movie House become the better option?

Solution: It should already be clear to see that Movie House will never become the better option, since its membership is more expensive and it charges the same amount per movie as Flicks for Cheap.

The lines that describe each option have different y -intercepts, namely 30 for Movie House and 15 for Flicks for Cheap. They have the same slope, three dollars per movie. This means that the lines are parallel and the system is inconsistent.

Let's see how this works algebraically.

Define the variables: Let $x = \text{number of movies rented}$ and $y = \text{total rental cost}$

$$\begin{cases} y = 30 + 3x \\ y = 15 + 3x \end{cases}$$

Because both equations are in slope-intercept form, solve this system by substituting the second equation into the first equation.

$$15 + 3x = 30 + 3x \Rightarrow 15 = 30$$

This statement is always false. Therefore, the system is **inconsistent** with no solutions.

Video Review

MEDIA

Click image to the left for more content.



MEDIA

Click image to the left for more content.

Guided Practice

Determine whether the following system of linear equations has zero, one, or infinitely many solutions:

$$\begin{cases} 2y + 6x = 20 \\ y = -3x + 7 \end{cases}$$

What kind of system is this?

Solution:

It is easier to compare equations when they are in the same form. We will rewrite the first equation in slope-intercept form.


$$2y + 6x = 20 \Rightarrow y + 3x = 10 \Rightarrow y = -3x + 10$$

Since the two equations have the same slope, but different y -intercepts, they are different but parallel lines. Parallel lines never intersect, so they have no solutions.

Since the lines are parallel, it is an inconsistent system.

Practice

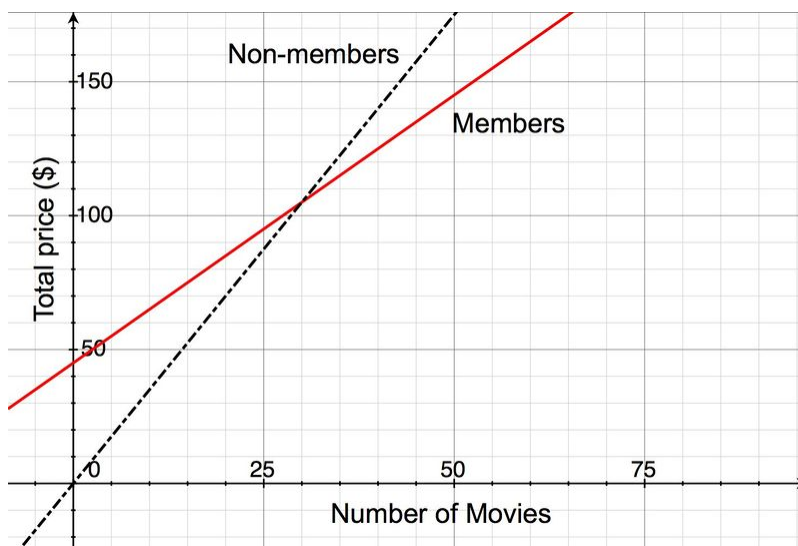
Sample explanations for some of the practice exercises below are available by viewing the following video. Note that there is not always a match between the number of the practice exercise in the video and the number of the practice exercise listed in the following exercise set. However, the practice exercise is the same in both. [CK-12 Basic Algebra: Special Types of Linear Systems](#) (15:18)



MEDIA

Click image to the left for more content.

1. Define an *inconsistent system*. What is true about these systems?
2. What are the three types of consistent systems?
3. You graph a system and see only one line. What can you conclude?
4. You graph a system and see the lines have an intersection point. What can you conclude?
5. The lines you graphed appear parallel. How can you verify the system will have no solution?
6. You graph a system and obtain the following graph. Is the system consistent or inconsistent? How many solutions does the system have?



In 7 – 24, find the solution of each system of equations using the method of your choice. Please state whether the system is inconsistent, consistent, or consistent-dependent.

7.

$$\begin{aligned}3x - 4y &= 13 \\ y &= -3x - 7\end{aligned}$$

8.

$$\begin{aligned}4x + y &= 3 \\ 12x + 3y &= 9\end{aligned}$$

9.

$$\begin{aligned}10x - 3y &= 3 \\ 2x + y &= 9\end{aligned}$$

10.

$$\begin{aligned}2x - 5y &= 2 \\ 4x + y &= 5\end{aligned}$$

11.

$$\begin{aligned}\frac{3x}{5} + y &= 3 \\ 1.2x + 2y &= 6\end{aligned}$$

12.

$$\begin{aligned}3x - 4y &= 13 \\ y &= -3x - 7\end{aligned}$$

13.

$$\begin{aligned}3x - 3y &= 3 \\ x - y &= 1\end{aligned}$$

14.

$$\begin{aligned}0.5x - y &= 30 \\ 0.5x - y &= -30\end{aligned}$$

15.

$$\begin{aligned}4x - 2y &= -2 \\ 3x + 2y &= -12\end{aligned}$$

16.

$$\begin{aligned}3x + 2y &= 4 \\ -2x + 2y &= 24\end{aligned}$$

17.

$$\begin{aligned}5x - 2y &= 3 \\2x - 3y &= 10\end{aligned}$$

18.

$$\begin{aligned}3x - 4y &= 13 \\y &= -3x - y\end{aligned}$$

19.

$$\begin{aligned}5x - 4y &= 1 \\-10x + 8y &= -30\end{aligned}$$

20.

$$\begin{aligned}4x + 5y &= 0 \\3x &= 6y + 4.5\end{aligned}$$

21.

$$\begin{aligned}-2y + 4x &= 8 \\y - 2x &= -4\end{aligned}$$

22.

$$\begin{aligned}x - \frac{y}{2} &= \frac{3}{2} \\3x + y &= 6\end{aligned}$$

23.

$$\begin{aligned}0.05x + 0.25y &= 6 \\x + y &= 24\end{aligned}$$

24.

$$\begin{aligned}x + \frac{2y}{3} &= 6 \\3x + 2y &= 2\end{aligned}$$

25. Peter buys two apples and three bananas for \$4. Nadia buys four apples and six bananas for \$8 from the same store. How much does one banana and one apple cost?
26. A movie rental store, CineStar, offers customers two choices. Customers can pay a yearly membership of \$45 and then rent each movie for \$2, or they can choose not to pay the membership fee and rent each movie for \$3.50. How many movies would you have to rent before membership becomes the cheaper option?
27. A movie house charges \$4.50 for children and \$8.00 for adults. On a certain day, 1200 people enter the movie house and \$8,375 is collected. How many children and how many adults attended?
28. Andrew placed two orders with an internet clothing store. The first order was for 13 ties and four pairs of suspenders, and it totaled \$487. The second order was for six ties and two pairs of suspenders, and it totaled \$232. The bill does not list the per-item price but all ties have the same price and all suspenders have the same price. What is the cost of one tie and of one pair of suspenders?
29. An airplane took four hours to fly 2400 miles in the direction of the jet-stream. The return trip against the jet-stream took five hours. What were the airplane's speed in still air and the jet-stream's speed?

30. Nadia told Peter that she went to the farmer's market, that she bought two apples and one banana, and that it cost her \$2.50. She thought that Peter might like some fruit so she went back to the seller and bought four more apples and two more bananas. Peter thanked Nadia, but he told her that he did not like bananas, so he would pay her for only four apples. Nadia told him that the second time she paid \$6.00 for the fruit. Please help Peter figure out how much to pay Nadia for four apples.

Mixed Review

31. A football stadium sells regular and box seating. There are twelve times as many regular seats as there are box seats. The total capacity of the stadium is 10,413. How many box seats are in the stadium? How many regular seats?
32. Find an equation for the line perpendicular to $y = -\frac{3}{5}x - 8.5$ containing the point (2, 7).
33. Rewrite in standard form: $y = \frac{1}{6}x - 4$.
34. Find the sum: $7\frac{2}{3} + \frac{4}{5}$.
35. Divide: $\frac{7}{8} \div -\frac{2}{3}$.
36. Is the product of two rational numbers always a rational number? Explain your answer.

7.7 Linear Programming

Here you'll learn to solve linear inequality problems using linear programming.

Suppose a craftsman can make bracelets and necklaces. A bracelet requires 10 beads and takes 10 minutes to make, while a necklace requires 20 beads and takes 40 minutes to make. The craftsman has 1000 beads to work with, and he has 1600 minutes in which to work. If a bracelet costs \$5 and a necklace costs \$7.50, what is the maximum revenue that the craftsman can take in? How do you know? In this Concept, you'll use systems of linear inequalities and linear programming to solve problems such as this one.

Guidance

Systems of Linear Inequalities

This lesson moves on to the concept of systems of linear inequalities. In previous Concepts, you learned how to graph a linear inequality in two variables.

Step 1: Graph the equation using the most appropriate method.

- Slope-intercept form uses the y -intercept and slope to find the line.
- Standard form uses the intercepts to graph the line.
- Point-slope uses a point and the slope to graph the line.

Step 2: If the equal sign is not included draw a dashed line. Draw a solid line if the equal sign is included.

Step 3: Shade the half plane above the line if the inequality is "greater than." Shade the half plane under the line if the inequality is "less than."

In this Concept, we will learn how to graph two or more linear inequalities on the same coordinate plane. The inequalities are graphed separately on the same graph and **the solution for the system of inequalities** is the common shaded region between all the inequalities in the system.

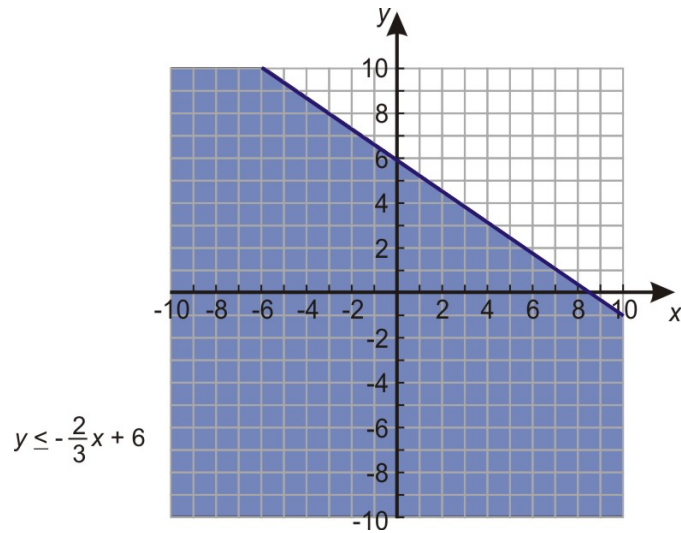
The common shaded region of the system of inequalities is called the **feasible region**.

Example A

$$\text{Solve the system of inequalities } \begin{cases} 2x + 3y \leq 18 \\ x - 4y \leq 12 \end{cases} .$$

Solution:

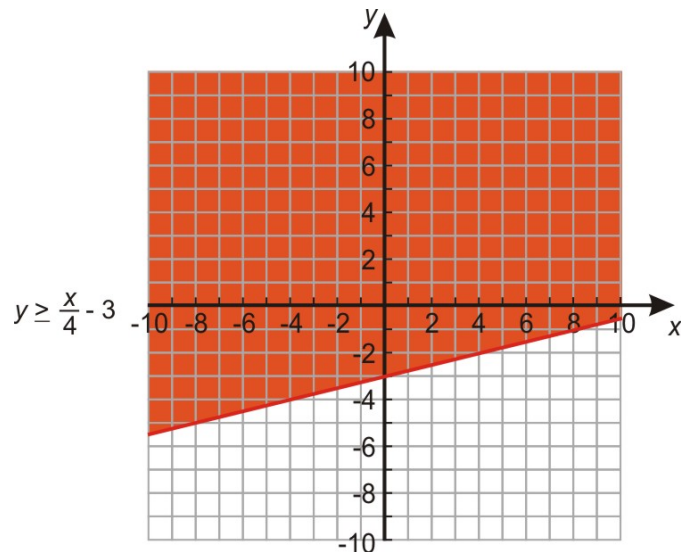
The first equation is written in standard form and can be graphed using its intercepts. The line is solid because the equal sign is included in the inequality. Since the inequality is less than or equal to, shade the half plane below the line.



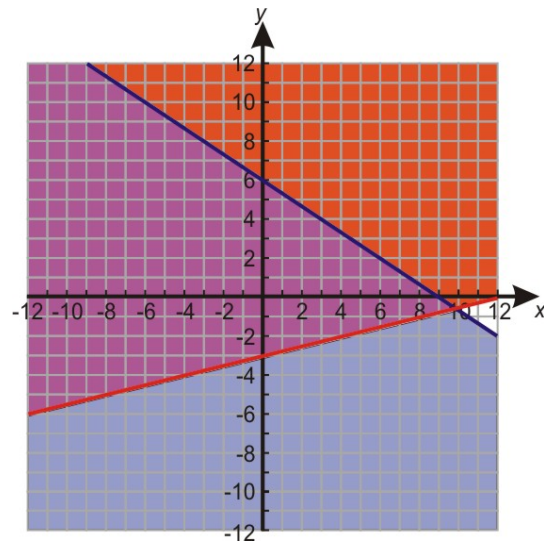
The second equation is a little tricky. Rewrite this in slope-intercept form to graph.

$$-4y \leq -x + 12 \quad \Rightarrow \quad y \geq \frac{x}{4} - 3$$

The division by -4 causes the inequality to reverse. The line is solid again because the equal sign is included in the inequality. Shade the half plane above the boundary line because y is **greater** than or equal.



When we combine the graphs, we see that the blue and red shaded regions overlap. This overlap is where both inequalities work. Thus the purple region denotes the solution of the system, the **feasible region**.



The kind of solution displayed in this example is called **unbounded**, because it continues forever in at least one direction (in this case, forever upward and to the left).

Bounded regions occur when more than two inequalities are graphed on the same coordinate plane, as you will see in Example C.

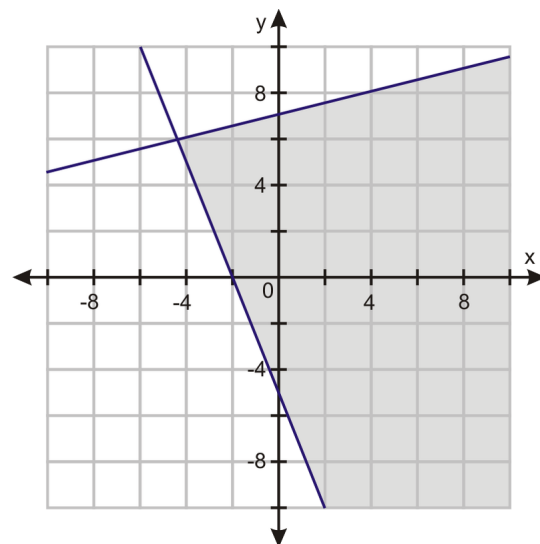
Writing Systems of Linear Inequalities

In some cases, you are given the feasible region and asked to write the system of inequalities. To do this, you work in reverse order of graphing.

- Write the equation for the boundary line.
- Determine whether the sign should include “or equal to.”
- Determine which half plane is shaded.
- Repeat for each boundary line in the feasible region.

Example B

Write the system of inequalities shown below.



Solution:

There are two boundary lines, so there are two inequalities. Write each one in slope-intercept form.

$$y \leq \frac{1}{4}x + 7$$

$$y \geq -\frac{5}{2}x - 5$$

Linear Programming – Real-World Systems of Linear Inequalities

Entire careers are devoted to using systems of inequalities to ensure a company is making the most profit by producing the right combination of items or is spending the least amount of money to make certain items. **Linear programming** is the mathematical process of analyzing a system of inequalities to make the best decisions given the constraints of the situation.

Constraints are the particular restrictions of a situation due to time, money, or materials.

The goal is to locate the feasible region of the system and use it to answer a profitability, or **optimization**, question.

Theorem: The maximum or minimum values of an optimization equation occur at the vertices of the feasible region – at the points where the boundary lines intersect.

This theorem provides an important piece of information. While the individual colors of the inequalities will overlap, providing an infinite number of possible combinations, only the vertices will provide the maximum (or minimum) solutions to the optimization equation.

Let's go back to the situation presented in the opener for this series of Concepts.

Example C

James is trying to expand his pastry business to include cupcakes and personal cakes. He has 40 hours available to decorate the new items and can use no more than 22 pounds of cake mix. Each personal cake requires 2 pounds of cake mix and 2 hours to decorate. Each cupcake order requires one pound of cake mix and 4 hours to decorate. If he can sell each personal cake for \$14.99 and each cupcake order for \$16.99, how many personal cakes and cupcake orders should James make to make the most revenue?

There are four inequalities in this situation. First, state the variables. Let $p =$ *the number of personal cakes* and $c =$ *the number of cupcake orders*.

Translate this into a system of inequalities.

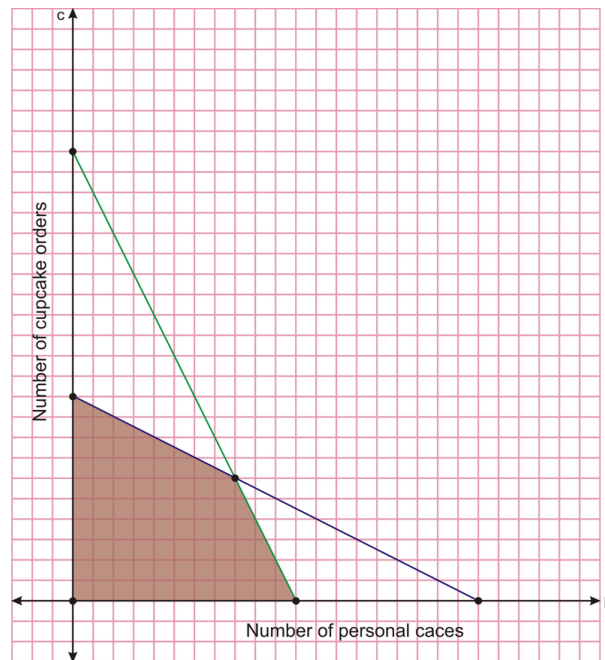
$2p + 1c \leq 22$ – This is the amount of available cake mix.

$2p + 4c \leq 40$ – This is the available time to decorate.

$p \geq 0$ – You cannot make negative personal cakes.

$c \geq 0$ – You cannot make negative cupcake orders.

Now graph each inequality and determine the feasible region.



The feasible region has four vertices: $\{(0, 0), (0, 10), (11, 0), (8, 6)\}$. According to our theorem, the optimization answer will **only occur** at one of these vertices.

Write the optimization equation. How much of each type of order should James make to bring in the most revenue?

$$14.99p + 16.99c = \text{maximum revenue}$$

Substitute each ordered pair to determine which makes the most money.

$$(0, 0) \rightarrow \$0.00$$

$$(0, 10) \rightarrow 14.99(0) + 16.99(10) = \$169.90$$

$$(11, 0) \rightarrow 14.99(11) + 16.99(0) = \$164.89$$

$$(8, 6) \rightarrow 14.99(8) + 16.99(6) = \$221.86$$

To make the most revenue, James should make 8 personal cakes and 6 cupcake orders.

For more help with applying systems of linear inequalities, watch this video by http://www.phschool.com/atschool/academy123/english/academy123_content/wl-book-demo/ph-240s.html - PH School.

Video Review



MEDIA

Click image to the left for more content.


MEDIA

Click image to the left for more content.

Guided Practice

Find the solution set to the following system.

$$y > 3x - 4$$

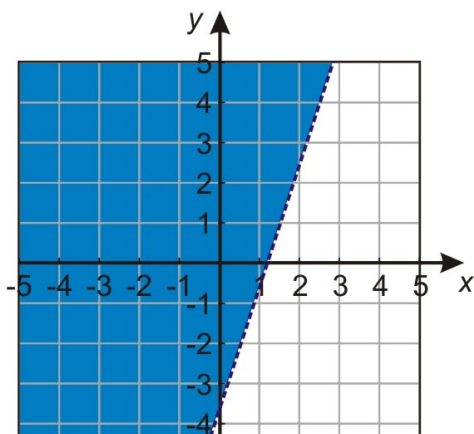
$$y < -\frac{9}{4}x + 2$$

$$x \geq 0$$

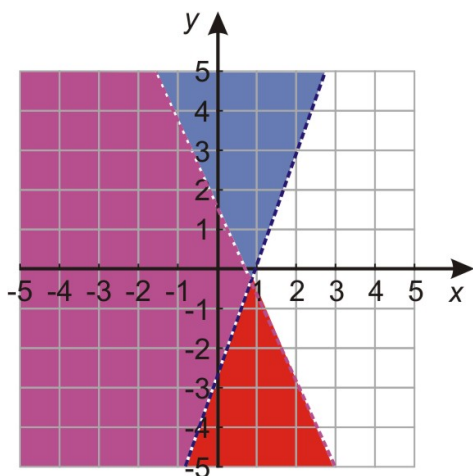
$$y \geq 0$$

Solution:

Graph each line and shade appropriately.

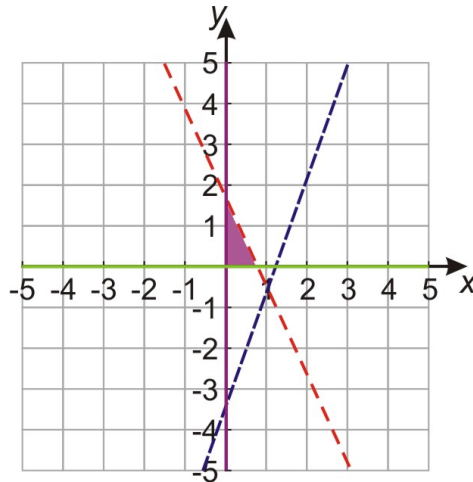


$$y > 3x - 4$$



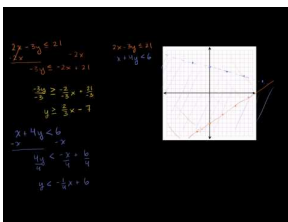
$$y < -\frac{9}{4}x + 2$$

Finally, we graph $x \geq 0$ and $y \geq 0$, and the intersecting region is shown in the following figure.



Practice

Sample explanations for some of the practice exercises below are available by viewing the following video. Note that there is not always a match between the number of the practice exercise in the video and the number of the practice exercise listed in the following exercise set. However, the practice exercise is the same in both. [CK-12 Basic Algebra: Systems of Linear Inequalities \(8:52\)](#)



MEDIA

Click image to the left for more content.

1. What is *linear programming*?
2. What is the *feasible region* of a system of inequalities?
3. How do constraints affect the feasible region?
4. What is an optimization equation? What is its purpose?
5. You have graphed a feasible region. Where are the maximum (or minimum) points of the optimization equation located?

Find the solution region of the following systems of inequalities.

6.

$$\begin{aligned} 4y - 5x &< 8 \\ -5x &\geq 16 - 8y \end{aligned}$$

7.

$$\begin{aligned} 5x - y &\geq 5 \\ 2y - x &\geq -10 \end{aligned}$$

8.

$$\begin{aligned} 2x - 3y &\leq 21 \\ x + 4y &\leq 6 \\ 3x + y &\geq -4 \end{aligned}$$

9. $\begin{cases} y \geq \frac{1}{4}x - 3 \\ y < \frac{13}{8}x + 8 \end{cases}$

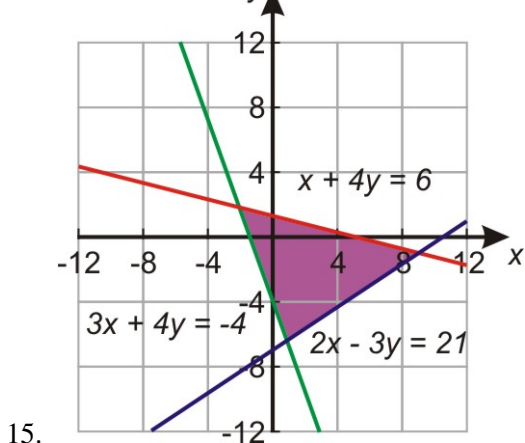
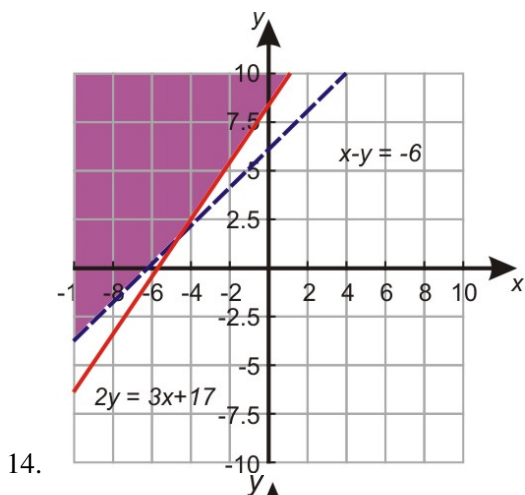
10. $\begin{cases} y \leq \frac{3}{4}x - 5 \\ y \geq -2x + 2 \end{cases}$

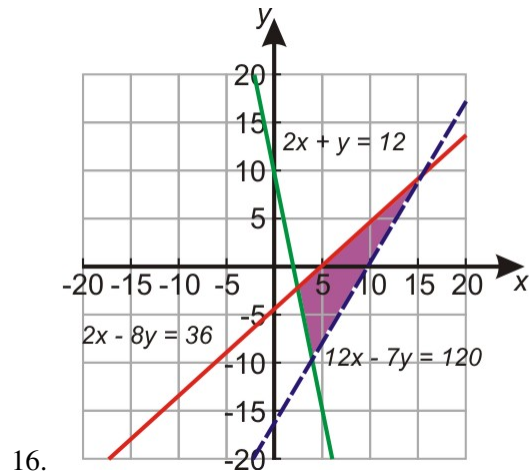
11. $\begin{cases} y > -x + 1 \\ y > \frac{1}{4}x + 6 \end{cases}$

12. $\begin{cases} y > -\frac{1}{2}x + 4 \\ x < -4 \end{cases}$

13. $\begin{cases} y \leq 6 \\ y > \frac{1}{4}x + 6 \end{cases}$

Write the system of inequalities for each feasible region pictured below.





Given the following constraints, find the maximum and minimum values for:

17.

$$\begin{aligned} z &= -x + 5y \\ x + 3y &\leq 0 \\ x - y &\geq 0 \\ 3x - 7y &\leq 16 \end{aligned}$$

18. Find the maximum and minimum value of $z = 2x + 5y$ given the constraints.

$$\begin{aligned} 2x - y &\leq 12 \\ 4x + 3y &\geq 0 \\ x - y &\leq 6 \end{aligned}$$

19. In Andrew's Furniture Shop, he assembles both bookcases and TV cabinets. Each type of furniture takes him about the same time to assemble. He figures he has time to make at most 18 pieces of furniture by this Saturday. The materials for each bookcase cost him \$20.00 and the materials for each TV stand cost him \$45.00. He has \$600.00 to spend on materials. Andrew makes a profit of \$60.00 on each bookcase and a profit of \$100.00 for each TV stand. Find how many of each piece of furniture Andrew should make so that he maximizes his profit.
20. You have \$10,000 to invest, and three different funds from which to choose. The municipal bond fund has a 5% return, the local bank's CDs have a 7% return, and a high-risk account has an expected 10% return. To minimize risk, you decide not to invest any more than \$1,000 in the high-risk account. For tax reasons, you need to invest at least three times as much in the municipal bonds as in the bank CDs. Assuming the year-end yields are as expected, what are the optimal investment amounts?

Mixed Review

21. Solve by elimination:
$$\begin{cases} 12x + 8y = 24 \\ -6x + 3y = 9 \end{cases}$$

22. Solve $36 = |5t - 6|$.

23. Determine the intercepts of $y = -\frac{5}{6}x - 3$.

24. Jerry's aunt repairs upholstery. For three hours' worth of work, she charges \$145. For nine hours of work, she charges \$355. Assuming this relationship is linear, write the equation for this line in point-slope form. How much would Jerry's aunt charge for 1.25 hours worth of work?

25. Translate into an algebraic sentence: "Yoder is four years younger than Kate. Kate is six years younger than Dylan. Dylan is 20." How old is each person?

7.8 Probability and Permutations

Here you'll learn how to find the number of permutations in a given situation and how to use this number in calculations of probability.

Suppose there are 15 people in a meeting, and one person will be the facilitator, while another person will be the scribe. In how many different ways can the facilitator and the scribe be chosen? What formula do you think you can use to answer this question? If the facilitator and the scribe were chosen at random, could you determine the probability of any particular pair of people? In this Concept, you'll learn to work with permutations and probability so that you can handle scenarios like this one.

Guidance

Congratulations! You have won a free trip to Europe. On your trip you have the opportunity to visit 6 different cities. You are responsible for planning your European vacation. How many different ways can you schedule your trip? The answer may surprise you!



This is an example of a **permutation**.

A **permutation** is an arrangement of objects in a specific order. It is the product of the counting numbers 1 through n .

$$n! = n(n-1)(n-2) \cdot \dots \cdot 1$$

How many ways can you visit the European cities? There are 6 choices for the first stop. Once you have visited this city, you cannot return so there are 5 choices for the second stop, and so on.

$$\underline{6} \cdot \underline{5} \cdot \underline{4} \cdot \underline{3} \cdot \underline{2} \cdot \underline{1} = 720$$

There are 720 different ways to plan your European vacation!

A permutation of *n* objects arranged *kat a time* is expressed as ${}_n P_k$.

$${}_n P_k = \frac{n!}{(n-k)!}$$

Example A

Evaluate ${}_6 P_3$.

Solution:

This equation asks, “How many ways can 6 objects be chosen 3 at a time?”

There are 6 ways to choose the first object, 5 ways to choose the second object, and 4 ways to choose the third object.

$$\underline{6} \cdot \underline{5} \cdot \underline{4} = 120$$

There are 120 different ways 6 objects can be chosen 3 at a time.

Example A can also be written using the formula for permutations: ${}_6 P_3 = \frac{6!}{(6-3)!} = \frac{6!}{3!} = 6 \cdot 5 \cdot 4 = 120$.

Permutations and Graphing Calculators

Most graphing calculators have the ability to calculate a permutation.

Example B

Evaluate ${}_6 P_3$ using a graphing calculator.

Solution:

Type the first value of the permutation, the n . Choose the [MATH] button, directly below the [ALPHA] key. Move the cursor once to the left to see this screen:

```
MATH NUM CPX 1:1
1:rand
2:nPr
3:nCr
4:!
5:randInt(
6:randNorm(
7:randBin(
```

Option #2 is the permutation option. Press [ENTER] and then the second value of the permutation, the value of k . Press [ENTER] to evaluate.

```
6 nPr 3      120
█
```

Permutations and Probability

Example C

The letters of the word HOSPITAL are arranged at random. How many different arrangements can be made? What is the probability that the last letter is a vowel?

There are eight ways to choose the first letter, seven ways to choose the second, and so on. The total number of arrangements is $8! = 40,320$.

There are three vowels in HOSPITAL; therefore, there are three possibilities for the last letter. Once this letter is chosen, there are seven choices for the first letter, six for the second, and so on.

$$\underline{7} \cdot \underline{6} \cdot \underline{5} \cdot \underline{4} \cdot \underline{3} \cdot \underline{2} \cdot \underline{1} \cdot \underline{3} = 15,120$$

Probability, as you learned in a previous Concept, has the formula:

$$\text{Probability (success)} = \frac{\text{number of ways to get success}}{\text{total number of possible outcomes}}$$

There are 15,120 ways to get a vowel as the last letter; there are 40,320 total combinations.

$$P(\text{last letter is a vowel}) = \frac{15,120}{40,320} = \frac{3}{8}$$

Video Review

MEDIA

Click image to the left for more content.



MEDIA

Click image to the left for more content.

Guided Practice

1. You have 8 different colors of nail polish. How many ways can you paint each of your 5 finger nails on one hand a different color?
2. Suppose 1 of your nail colors is purple. What is the probability that your thumb will be painted purple?

Solution:

1. There are 8 colors to paint, but you will only use 5 of them to paint your nails, which are in a particular order. This can be represented as ${}_8P_5$. It can be calculated by considering that there are 8 choices for the first nail, 7 choices for the second nail, and so on:

$${}_8P_5 = 8 \cdot 7 \cdot 6 \cdot 5 \cdot 4 = 6,720$$

2. The number of ways to paint your 5 nails different colors, where the thumb is purple, is calculated as:

$$1 \cdot 7 \cdot 6 \cdot 5 \cdot 4 = 840$$

Practice

1. Define *permutation*.

In 2 – 19, evaluate each permutation.

2. $7!$
3. $10!$
4. $1!$
5. $5!$
6. $9!$
7. $3!$
8. $4! + 4!$
9. $16! - 5!$
10. $\frac{98!}{96!}$
11. $\frac{11!}{7!}$
12. $\frac{301!}{300!}$
13. $\frac{8!}{3!}$
14. $2! + 9!$
15. ${}_{11}P_2$
16. ${}_5P_5$
17. ${}_5P_3$
18. ${}_{15}P_{10}$
19. ${}_{60}P_{59}$
20. How many ways can 14 books be organized on a shelf?
21. How many ways are there to choose 10 objects, four at a time?
22. How many ways are there to choose 21 objects, 13 at a time?
23. A running track has eight lanes. In how many ways can 8 athletes be arranged to start a race?
24. Twelve horses run a race.
 - a. How many ways can first and second places be won?
 - b. How many ways can all the horses finish the race?
25. Six actors are waiting to audition. How many ways can the director choose the audition schedule?
26. Jerry, Kerry, Larry, and Mary are waiting at a bus stop. What is the probability that Mary will get on the bus first?
27. How many permutations are there of the letters in the word “HEART”?
28. How many permutations are there of the letters in the word “AMAZING”?
29. Suppose I am planning to get a three-scoop ice cream cone with chocolate, vanilla, and Superman. How many ice cream cones are possible? If I ask the server to “surprise me,” what is the probability that the Superman scoop will be on top?
30. What is the probability that you choose two cards (without replacement) from a standard 52-card deck and both cards are jacks?
31. The Super Bowl Committee has applications from 9 towns to host the next two Super Bowls. How many ways can they select the host if:
 - a. The town cannot host a Super Bowl two consecutive years?
 - b. The town can host a Super Bowl two consecutive years?

Mixed Review

32. Graph the solution to the following system:

$$2x - 3y > -9$$

$$y < 1$$

33. Convert 24 *meters/minute* to *feet/second*.

34. Solve for t : $|t - 6| \leq -14$.

35. Find the distance between 6.15 and -9.86 .

36. Which of the following vertices provides the minimum cost according to the equation $12x + 20y = \text{cost}$:
(3, 6), (9, 0), (6, 2), (0, 11)?

7.9 Probability and Combinations

Here you'll learn how to find the number of combinations in a given situation and how to use this number in calculations of probability.

Suppose you're at the local animal shelter, and you want to adopt two dogs. If there are 45 dogs from which to choose, how many different pairs of dogs could you adopt? What formula do you think you could use to calculate this number? If the dogs were chosen at random, would it be possible for you to find the probability of adopting a particular pair? In this Concept, you'll learn about combinations and probability so you can answer these types of questions when they come up.

Guidance

When the order of objects is not important and/or the objects are replaced, **combinations** are formed.

A **combination** is an arrangement of objects in no particular order.

Consider a sandwich with salami, ham, and turkey. The order in which we place the deli meat does not matter, as long as it's on the sandwich.

There is only one way to stack the meat on the sandwich if the order does not matter. However, if the order mattered, there are 3 choices for the first meat, 2 for the second, and one for the last choice: $\underline{3} \cdot \underline{2} \cdot \underline{1} = 6$.



Combination \neq Permutation

A combination of *n* objects chosen *kat a time* is expressed as ${}_n C_k$.

$${}_n C_k = \frac{n!}{k!(n-k)!} = \binom{n}{k}$$

This is read “*n* choose *k*.”

Example A

How many ways can 8 students be chosen from a class of 21?

Solution:

It does not matter how the eight students are chosen. Use the formula for combinations rather than permutations.

$$= \frac{21!}{8!(21-8)!} = 203,490$$

There are 203,490 different ways to choose eight students from 21.

Combinations on a Graphing Calculator

Just like permutations, most graphing calculators have the capability to calculate combinations. On the TI calculators, use these directions.

- Enter the n , or the total to choose from.
- Choose the [MATH] button, directly below the [ALPHA] key. Move the cursor once to the left to see this screen:

```
MATH NUM CPX 1234
1:rand
2:nPr
3:nCr
4:!
5:randInt(
6:randNorm(
7:randBin(
```

- Choose option #3, nCr . Type in the k value, the amount you want to choose.

Example B

Calculate $\binom{100}{4}$ using a graphing calculator.

Solution:

```
100 nCr 4
3921225
```

Probability and Combinations

Combinations are used in probability when there is a replacement of objects or the order does not matter.

Example C

Suppose you have ten marbles: four blue and six red. You choose three marbles without looking. What is the probability that all three marbles are blue?

$$\text{Probability (success)} = \frac{\text{number of ways to get success}}{\text{total number of possible outcomes}}$$

There are ${}_4C_3$ ways to choose the blue marbles. There are ${}_{10}C_3$ total combinations.

$$P(\text{all 3 marbles are blue}) = \frac{\binom{4}{3}}{\binom{10}{3}} = \frac{4}{120} = \frac{1}{30}$$

There is approximately a 3.33% chance that all three marbles drawn are blue.

Video Review



MEDIA

Click image to the left for more content.



MEDIA

Click image to the left for more content.

Guided Practice

The Senate is made up of 100 people, two per state.

1. How many different four-person committees are possible?
2. What is the probability that the committee will only have members from two states?

Solution:

1. This question does not care how the committee members are chosen; we will use the formula for combinations.

$$\binom{100}{4} = \frac{100!}{4!(100-4)!} = 3,921,225 \text{ ways}$$

That is a lot of possibilities!

2. If there are only members from two states, that means two are from one state and two are from another. This problem is simply about how many ways you can choose 2 states out of 50 states.

$$\binom{50}{2} = \frac{50!}{2!(50-2)!} = 1,225 \text{ ways}$$

$$P(\text{only two states represented}) = \frac{1225}{3,921,225} = 0.00031$$

The probability that only two states will be represented on the committee is 0.031%, which is a very small chance!

Practice

1. What is a *combination*? How is it different from a permutation?
2. How many ways can you choose k objects from n possibilities?
3. Why is ${}_3C_9$ impossible to evaluate?
4. In $4 - 19$, evaluate the combination.
5. $\binom{12}{2}$
6. $\binom{8}{5}$

7. $\binom{5}{1}$
8. $\binom{3}{0}$
9. $\binom{9}{9}$
10. $\binom{9}{4}$
11. $\binom{20}{10}$
12. $\binom{19}{18}$
13. $\binom{20}{14}$
14. $\binom{13}{9}$
15. 7C_3
16. ${}^{11}C_5$
17. 5C_4
18. ${}^{13}C_9$
19. ${}^{20}C_5$
20. ${}^{15}C_{15}$
21. Your backpack contains 6 books. You select two at random. How many different pairs of books could you select?
22. Seven people go out for dinner. In how many ways can 4 order steak, 2 order vegan, and 1 order seafood?
23. A pizza parlor has 10 toppings to choose from. How many four-topping pizzas can be created?
24. Gooies Ice Cream Parlor offers 28 different ice creams. How many two-scooped cones are possible, given that order does not matter?
25. A college football team plays 14 games. In how many ways can the season end with 8 wins, 4 losses, and 2 ties?
26. Using the marble situation from the Concept, determine the probability that the three marbles chosen are all red?
27. Using the marble situation from the Concept, determine the probability that two marbles are red and the third is blue.
28. Using the Senate situation from the Concept, how many two-person committees can be made using Senators?
29. Your English exam has seven essays and you must answer four. How many combinations can be made?
30. A sociology test has 15 true/false questions. In how many ways can you answer 11 correctly?
31. Seven people are applying for two vacant school board positions; four are women, and three are men. In how many ways can these vacancies be filled ...
 - a. With any two applicants?
 - b. With only women?
 - c. With one man and one woman?

Mixed Review

31. How many ways can 15 paintings be lined along a wall?
32. Your calculator gives an “Overload” error when trying to simplify $\frac{300!}{296!}$. What can you do to help evaluate this fraction?
33. Consider a standard six-sided die. What is the probability that the number rolled will be a multiple of 2?
34. Solve the following system: The sum of two numbers is 70.6 and their product is 1,055.65. Find the two numbers.

Summary

This chapter discusses linear systems of equations and the methods used to solve them, including graphing, substitution, addition, subtraction, and multiplication. Mixture problems are covered in detail, and a distinction is made

between consistent and inconsistent linear systems. In addition, instruction is given on linear inequalities and linear programming, and the chapter concludes by talking about probability, permutations, and combinations.

Systems of Equations and Inequalities; Counting Methods Review

- Match the following terms to their definitions.
 - System – Restrictions imposed by time, materials, or money
 - Feasible Region – A system with an infinite number of solutions
 - Inconsistent System – An arrangement of objects when order matters
 - Constraints – A method used by businesses to determine the most profit or least cost given constraints
 - Consistent-dependent system – An arrangement of objects in which order does not matter
 - Permutation – Two or more algebraic sentences joined by the word and
 - Combination – A system with no solutions
 - Linear programming – A solution set to a system of inequalities
- Where are the solutions to a system located?
- Suppose one equation of a system is in slope-intercept form and the other is in standard form. Which method presented in this chapter would be the most effective to solve this system? Why?
- Is $(-3, -8)$ a solution to $\begin{cases} 7x - 4y = 11 \\ x + 2y = -19 \end{cases}$?
- Is $(-1, 0)$ a solution to $\begin{cases} y = 0 \\ 8x + 7y = 8 \end{cases}$?

Solve the following systems by graphing.

- $\begin{cases} y = -2 \\ y = -6x + 1 \end{cases}$
- $\begin{cases} y = 3 - \frac{1}{3}x \\ x + 3y = 4 \end{cases}$
- $\begin{cases} y = \frac{1}{2}x - 6 \\ 4y = 2x - 24 \end{cases}$
- $\begin{cases} y = -\frac{4}{5}x + 7 \\ y = \frac{2}{5}x + 1 \end{cases}$
- $\begin{cases} x = 2 \\ y = 4 \\ y = \frac{1}{2}x + 3 \end{cases}$

Solve the following systems by substitution.

- $\begin{cases} y = 2x - 7 \\ y + 7 = 4x \end{cases}$
- $\begin{cases} y = -3x + 22 \\ y = -2x + 16 \end{cases}$
- $\begin{cases} y = 3 - \frac{1}{3}x \\ x + 3y = 4 \end{cases}$

$$14. \begin{cases} 2x + y = -10 \\ y = x + 14 \end{cases}$$

$$15. \begin{cases} y + 19 = -7x \\ y = -2x - 9 \end{cases}$$

$$16. \begin{cases} y = 0 \\ 5x = 15 \end{cases}$$

$$17. \begin{cases} y = 3 - \frac{1}{3}x \\ x + 3y = 4 \end{cases}$$

$$18. \begin{cases} 7x + 3y = 3 \\ y = 8 \end{cases}$$

Solve the following systems using elimination.

$$19. \begin{cases} 2x + 4y = -14 \\ -2x + 4y = 8 \end{cases}$$

$$20. \begin{cases} 6x - 9y = 27 \\ 6x - 8y = 24 \end{cases}$$

$$21. \begin{cases} 3x - 2y = 0 \\ 2y - 3x = 0 \end{cases}$$

$$22. \begin{cases} 4x + 3y = 2 \\ -8x + 3y = 14 \end{cases}$$

$$23. \begin{cases} -8x + 8y = 8 \\ 6x + y = 1 \end{cases}$$

$$24. \begin{cases} 7x - 4y = 11 \\ x + 2y = -19 \end{cases}$$

$$25. \begin{cases} y = -2x - 1 \\ 4x + 6y = 10 \end{cases}$$

$$26. \begin{cases} x - 6y = 20 \\ 2y - 3x = -12 \end{cases}$$

$$27. \begin{cases} -4x + 4y = 0 \\ 8x - 8y = 0 \end{cases}$$

$$28. \begin{cases} -9x + 6y = -27 \\ -3x + 2y = -9 \end{cases}$$

Graph the solution set to each system of inequalities.

$$29. \begin{cases} y > -\frac{3}{5}x - 5 \\ y \geq -2x + 2 \end{cases}$$

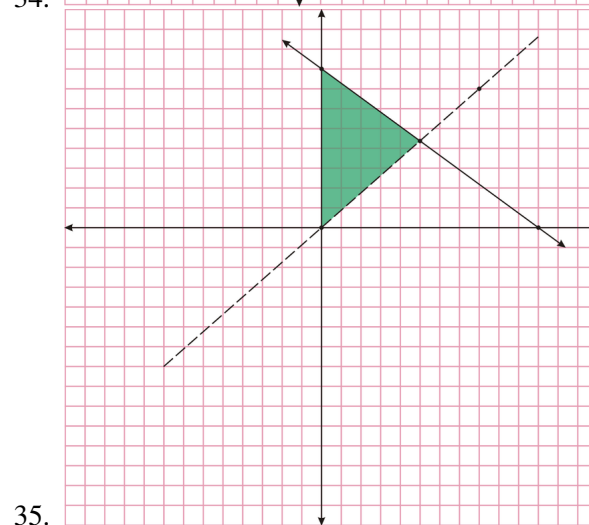
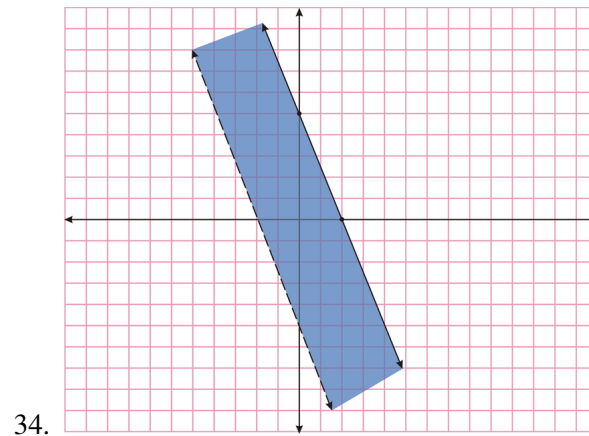
$$30. \begin{cases} y > \frac{13}{8}x + 8 \\ y \geq \frac{1}{4}x - 3 \end{cases}$$

$$31. \begin{cases} y \leq \frac{3}{5}x - 5 \\ y \geq -2x + 8 \end{cases}$$

$$32. \begin{cases} y \leq -\frac{7}{5}x - 3 \\ y \geq \frac{4}{5}x + 4 \end{cases}$$

$$33. \begin{cases} x < 5 \\ y \geq \frac{9}{5}x \end{cases} -2$$

Write a system of inequalities for the regions below.



36. Yolanda is looking for a new cell phone plan. Plan A charges \$39.99 monthly for talking and \$0.08 per text. Plan B charges \$69.99 per month for an “everything” plan.
- At how many texts will these two plans charge the same?
 - What advice would you give Yolanda?
37. The difference of two numbers is -21.3 . Their product is -72.9 . What are the numbers?
38. Yummy Pie Company sells two kinds of pies: apple and blueberry. Nine apple pies and 6 blueberry pies cost \$126.00. 12 apples pies and 12 blueberry pies cost \$204.00. What is the cost of one apple pie and 2 blueberry pies?
39. A jet traveled 784 miles. The trip took seven hours, traveling with the wind. The trip back took 14 hours, against the wind. Find the speed of the jet and the wind speed.
40. A canoe traveling downstream takes one hour to travel 7 miles. On the return trip, traveling against current, the same trip took 10.5 hours. What is the speed of the canoe? What is the speed of the river?
41. The yearly musical production is selling two types of tickets: adult and student. On Saturday, 120 student tickets and 45 adult tickets were sold, bringing in \$1,102.50 in revenue. On Sunday, 35 student tickets and 80 adult tickets were sold, bringing in \$890.00 in revenue. How much was each type of ticket?
42. Rihanna makes two types of jewelry: bracelets and necklaces. Each bracelet requires 36 beads and takes 1 hour to make. Each necklace requires 80 beads and takes 3 hours to make. Rihanna only has 600 beads and 20 hours of time. 1. Write the constraints of this situation as a system of inequalities. 2. Graph the feasible

- region and locate its vertices. 3. Rihanna makes \$8.00 in profit per bracelet and \$7.00 in profit per necklace. How many of each should she make to maximize her profit?
43. A farmer plans to plant two type of crops: soybeans and wheat. He has 65 acres of available land. He wants to plant twice as much soybeans as wheat. Wheat costs \$30 per acre and soybeans cost \$30 per acre. 1. Write the constraints as a system of inequalities. 2. Graph the feasible region and locate its vertices. 3. How many acres of each crop should the farmer plant in order to minimize cost?
 44. How many ways can you organize 10 items on a shelf?
 45. Evaluate $5!$
 46. Simplify $\frac{100!}{97!}$.
 47. How many ways can a football team of 9 be arranged if the kicker must be in the middle?
 48. How many one-person committees can be formed from a total team of 15?
 49. How many three-person committees can be formed from a total team of 15?
 50. There are six relay teams running a race. How many different combinations of first and second place are there?
 51. How many ways can all six relay teams finish the race?
 52. Evaluate $\binom{14}{12}$.
 53. Evaluate $\binom{8}{8}$ and explain its meaning.
 54. A baked potato bar has 9 different choices. How many potatoes can be made with four toppings?
 55. A bag contains six green marbles and five white marbles. Suppose you choose two without looking. What is the probability that both marbles will be green?
 56. A principal wants to make a committee of four teachers and six students. If there are 22 teachers and 200 students, how many different committees can be formed?

Systems of Equations and Inequalities; Counting Methods Test

1. *True or false?* A shorter way to write a permutation is $\binom{n}{k}$.
2. Is $(-17, 17)$ a solution to $\begin{cases} y = \frac{1}{17}x + 18 \\ y = -\frac{21}{17}x - 4 \end{cases}$?
3. What is the primary difference between a combination and a permutation?
4. An airplane is traveling a distance of 1,150 miles. Traveling against the wind, the trip takes 12.5 hours. Traveling with the wind, the same trip takes 11 hours. What is the speed of the plane? What is the speed of the wind?
5. A solution set to a system of inequalities has two dashed boundary lines. What can you conclude about the coordinates on the boundaries?
6. What does k have to be to create a dependent-consistent system? $\begin{cases} 5x + 2y = 20 \\ 15x + ky = 60 \end{cases}$
7. Joy Lynn makes two different types of spring flower arrangements. The Mother's Day arrangement has 8 roses and 6 lilies. The Graduation arrangement has 4 roses and 12 lilies. Joy Lynn can use no more than 120 roses and 162 lilies. If each Mother's Day arrangement costs \$32.99 and each Graduation arrangement costs \$27.99, how many of each type of arrangement should Joy Lynn make to make the most revenue?
8. Solve the system $\begin{cases} -6x + y = -1 \\ -7x - 2y = 2 \end{cases}$.
9. Solve the system $\begin{cases} y = 0 \\ 8x + 7y = 8 \end{cases}$.
10. Solve $\begin{cases} y = x + 8 \\ y = 3x + 16 \end{cases}$.
11. How many solutions does the following system have? $\begin{cases} y = -2x - 2 \\ y = -2x + 17 \end{cases}$
12. The letters to the word VIOLENT are placed into a bag.

- a. How many different ways can all the letters be pulled from the bag?
 - b. What is the probability that the last letter will be a consonant?
13. Suppose an ice cream shop has 12 different topping choices for an ice cream sundae. How many ways can you choose 5 of the 12 toppings?
14. A saleswoman must visit 13 cities exactly once without repeating. In how many ways can this be done?

Texas Instruments Resources

In the CK-12 Texas Instruments Algebra I FlexBook, there are graphing calculator activities designed to supplement the objectives for some of the lessons in this chapter. See <http://www.ck12.org/flexr/chapter/9617>.

CHAPTER 8 Exponents and Exponential Functions

Chapter Outline

- 8.1 EXPONENTIAL PROPERTIES INVOLVING PRODUCTS
- 8.2 EXPONENTIAL PROPERTIES INVOLVING QUOTIENTS
- 8.3 NEGATIVE EXPONENTS
- 8.4 FRACTIONAL EXPONENTS
- 8.5 SCIENTIFIC NOTATION
- 8.6 SCIENTIFIC NOTATION WITH A CALCULATOR
- 8.7 EXPONENTIAL GROWTH
- 8.8 EXPONENTIAL DECAY
- 8.9 GEOMETRIC SEQUENCES AND EXPONENTIAL FUNCTIONS
- 8.10 APPLICATIONS OF EXPONENTIAL FUNCTIONS

Introduction

Exponential functions occur in daily situations; money in a bank account, population growth, the decay of carbon-14 in living organisms, and even a bouncing ball. Exponential equations involve **exponents**, or the concept of repeated multiplication. This chapter focuses on combining expressions using the properties of exponents. The latter part of this chapter focuses on creating exponential equations and using the models to predict.



8.1 Exponential Properties Involving Products

Here you'll learn how to simplify exponential expressions with the exponential properties involving products.

What if you rolled a die and got an integer between 1 to 6? Try multiplying the square of the integer by the cube of the integer. Now take the square of the result. If the original integer were represented by the variable x , what would you have after you performed these operations? How would you find the exponent in your answer? In this Concept, you'll learn how to simplify exponential expressions by using the exponential properties involving products so that you can correctly solve this type of problem.

Exponential Properties Involving Products

In this Concept, you will be learning what an exponent is and about the properties and rules of exponents. You will also learn how to use exponents in problem solving.

Definition: An **exponent** is a power of a number that shows how many times that number is multiplied by itself.

An example would be 2^3 . You would multiply 2 by itself 3 times: $2 \times 2 \times 2$. The number 2 is the **base** and the number 3 is the **exponent**. The value 2^3 is called the **power**.

Example A

Write in exponential form: $\alpha \times \alpha \times \alpha \times \alpha$.

Solution: You must count the number of times the base, α , is being multiplied by itself. It's being multiplied four times so the solution is α^4 .

Note: There are specific rules you must remember when taking powers of negative numbers.

$$\begin{aligned}(\text{negative number}) \times (\text{positive number}) &= \text{negative number} \\ (\text{negative number}) \times (\text{negative number}) &= \text{positive number}\end{aligned}$$

For **even powers** of negative numbers, the answer will always be positive. Pairs can be made with each number and the negatives will be cancelled out.

$$(-2)^4 = (-2)(-2)(-2)(-2) = (-2)(-2) \cdot (-2)(-2) = +16$$

For **odd powers** of negative numbers, the answer is always negative. Pairs can be made but there will still be one negative number unpaired, making the answer negative.

$$(-2)^5 = (-2)(-2)(-2)(-2)(-2) = (-2)(-2) \cdot (-2)(-2) \cdot (-2) = -32$$

When we multiply the same numbers, each with different powers, it is easier to combine them before solving. This is why we use the **Product of Powers Property**.

Product of Powers Property: For all real numbers χ , $\chi^n \cdot \chi^m = \chi^{n+m}$.

Example B

Multiply $\chi^4 \cdot \chi^5$.

Solution: $\chi^4 \cdot \chi^5 = \chi^{4+5} = \chi^9$

Note that when you use the product rule you DO NOT MULTIPLY BASES.

Example C

$$2^2 \cdot 2^3 \neq 4^5$$

Another note is that this rule APPLIES ONLY TO TERMS THAT HAVE THE SAME BASE.

The Power of a Product

$$(x^4)^3 = x^4 \cdot x^4 \cdot x^4 \quad \text{3 factors of } x \text{ to the power 4.}$$

$$\underbrace{(x \cdot x \cdot x \cdot x)}_{x^4} \cdot \underbrace{(x \cdot x \cdot x \cdot x)}_{x^4} \cdot \underbrace{(x \cdot x \cdot x \cdot x)}_{x^4} = \underbrace{(x \cdot x \cdot x \cdot x \cdot x \cdot x \cdot x \cdot x \cdot x \cdot x \cdot x \cdot x)}_{x^{12}}$$

This situation is summarized below.

Power of a Product Property: For all real numbers χ :

$$(\chi^n)^m = \chi^{n \cdot m}$$

The Power of a Product Property is similar to the Distributive Property. Everything inside the parentheses must be taken to the power outside. For example, $(x^2y)^4 = (x^2)^4 \cdot (y)^4 = x^8y^4$. Watch how it works the long way.

$$\underbrace{(x \cdot x \cdot y)}_{x^2y} \cdot \underbrace{(x \cdot x \cdot y)}_{x^2y} \cdot \underbrace{(x \cdot x \cdot y)}_{x^2y} \cdot \underbrace{(x \cdot x \cdot y)}_{x^2y} = \underbrace{(x \cdot x \cdot x \cdot x \cdot x \cdot x \cdot x \cdot x \cdot y \cdot y \cdot y \cdot y)}_{x^8y^4}$$

The Power of a Product Property does not work if you have a sum or difference inside the parenthesis. For example, $(\chi + \gamma)^2 \neq \chi^2 + \gamma^2$. Because it is an addition equation, it should look like $(\chi + \gamma)(\chi + \gamma)$.

Example D

Simplify $(\chi^2)^3$.

Solution: $(\chi^2)^3 = \chi^{2 \cdot 3} = \chi^6$

Video Review**MEDIA**

Click image to the left for more content.



MEDIA

Click image to the left for more content.

Guided Practice

1. Show that $2^2 \cdot 3^3 \neq 6^5$.
2. Simplify $(x^3 \cdot x^4)^2$.

Solutions:

1. Evaluate each side separately, to show that they are not equal:

$$2^2 \cdot 3^3 = (2 \cdot 2) \cdot (3 \cdot 3 \cdot 3) = 4 \cdot 27 = 108$$

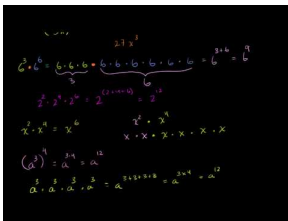
$$6^5 = 6 \cdot 6 \cdot 6 \cdot 6 \cdot 6 = 7776$$

Since $108 \neq 7776$, this means that $2^2 \cdot 3^3 \neq 6^5$.

$$2. (x^3 \cdot x^4)^2 = (x^{3+4})^2 = (x^7)^2 = x^{7 \cdot 2} = x^{14}$$

Practice

Sample explanations for some of the practice exercises below are available by viewing the following video. Note that there is not always a match between the number of the practice exercise in the video and the number of the practice exercise listed in the following exercise set. However, the practice exercise is the same in both. [CK-12 Basic Algebra: Exponent Properties Involving Products \(14:00\)](#)



MEDIA

Click image to the left for more content.

1. Consider a^5 . a. What is the base? b. What is the exponent? c. What is the power? d. How can this power be written using repeated multiplication?

Determine whether the answer will be positive or negative. You do **not** have to provide the answer.

2. $-(3^4)$
3. -8^2
4. $10 \times (-4)^3$
5. What is the difference between -5^2 and $(-5)^2$?

Write in exponential notation.

6. $2 \cdot 2$
7. $(-3)(-3)(-3)$
8. $y \cdot y \cdot y \cdot y \cdot y$
9. $(3a)(3a)(3a)(3a)$
10. $4 \cdot 4 \cdot 4 \cdot 4 \cdot 4$
11. $3x \cdot 3x \cdot 3x$
12. $(-2a)(-2a)(-2a)(-2a)$
13. $6 \cdot 6 \cdot 6 \cdot x \cdot x \cdot y \cdot y \cdot y \cdot y$

Find each number.

14. 1^{10}
15. 0^3
16. 7^3
17. -6^2
18. 5^4
19. $3^4 \cdot 3^7$
20. $2^6 \cdot 2$
21. $(4^2)^3$
22. $(-2)^6$
23. $(0.1)^5$
24. $(-0.6)^3$

Multiply and simplify.

25. $6^3 \cdot 6^6$
26. $2^2 \cdot 2^4 \cdot 2^6$
27. $3^2 \cdot 4^3$
28. $x^2 \cdot x^4$
29. $x^2 \cdot x^7$
30. $(y^3)^5$
31. $(-2y^4)(-3y)$
32. $(4a^2)(-3a)(-5a^4)$

Simplify.

33. $(a^3)^4$
34. $(xy)^2$
35. $(3a^2b^3)^4$
36. $(-2xy^4z^2)^5$
37. $(3x^2y^3) \cdot (4xy^2)$
38. $(4xyz) \cdot (x^2y^3) \cdot (2yz^4)$
39. $(2a^3b^3)^2$
40. $(-8x)^3(5x)^2$
41. $(4a^2)(-2a^3)^4$
42. $(12xy)(12xy)^2$
43. $(2xy^2)(-x^2y)^2(3x^2y^2)$

Mixed Review

44. How many ways can you choose a 4-person committee from seven people?
45. Three canoes cross a finish line to earn medals. Is this an example of a permutation or a combination? How many ways are possible?
46. Find the slope between $(-9, 11)$ and $(18, 6)$.
47. Name the number set(s) to which $\sqrt{36}$ belongs.
48. Simplify $\sqrt{74x^2}$.
49. 78 is 10% of what number?
50. Write the equation for the line containing $(5, 3)$ and $(3, 1)$.

8.2 Exponential Properties Involving Quotients

Here you'll learn how to use the quotient rule and how to work with powers of quotients.

Suppose you wanted to know the volume of a cube and the area of one of its bases. If the length of one of its edges was s , what would be the volume of the cube? What would be its base area? Knowing that you could find the height of the cube by dividing its volume by its base area, what expression could you write to represent this quotient? In this Concept, you'll learn about exponential properties involving quotients so that you can perform division problems such as this one.

Guidance

In this Concept, you will learn how to simplify quotients of numbers and variables.

Quotient of Powers Property: For all real numbers χ , $\frac{\chi^n}{\chi^m} = \chi^{n-m}$.

When dividing expressions with the same base, keep the base and subtract the exponent in the denominator (bottom) from the exponent in the numerator (top). When we have problems with different bases, we apply the rule separately for each base.

Example A

Simplify $\frac{x^7}{x^4}$.

Solution: To simplify $\frac{x^7}{x^4}$, repeated multiplication can be used.

$$\frac{x^7}{x^4} = \frac{\cancel{x} \cdot \cancel{x} \cdot \cancel{x} \cdot \cancel{x} \cdot x \cdot x \cdot x}{\cancel{x} \cdot \cancel{x} \cdot \cancel{x} \cdot \cancel{x}} = \frac{x \cdot x \cdot x}{1} = x^3$$

$$\frac{x^5 y^3}{x^3 y^2} = \frac{\cancel{x} \cdot \cancel{x} \cdot \cancel{x} \cdot x \cdot x}{\cancel{x} \cdot \cancel{x} \cdot \cancel{x}} \cdot \frac{\cancel{y} \cdot \cancel{y} \cdot y}{\cancel{y} \cdot \cancel{y}} = \frac{x \cdot x}{1} \cdot \frac{y}{1} = x^2 y \text{ OR } \frac{x^5 y^3}{x^3 y^2} = x^{5-3} \cdot y^{3-2} = x^2 y$$

Example B

Simplify each of the following expressions using the **quotient rule**.

(a) $\frac{x^{10}}{x^5}$

(b) $\frac{x^5 \gamma^4}{x^3 \gamma^2}$

Solution:

(a) $\frac{x^{10}}{x^5} = \chi^{10-5} = \chi^5$

(b) $\frac{x^5 \gamma^4}{x^3 \gamma^2} = \chi^{5-3} \cdot \gamma^{4-2} = \chi^2 \gamma^2$

Power of a Quotient Property: $\left(\frac{\chi^n}{\gamma^m}\right)^p = \frac{\chi^{n \cdot p}}{\gamma^{m \cdot p}}$

The power inside the parenthesis for the numerator and the denominator multiplies with the power outside the parenthesis. The situation below shows why this property is true.

Example CSimplify $\left(\frac{x^3}{y^2}\right)^4$.

$$\left(\frac{x^3}{y^2}\right)^4 = \left(\frac{x^3}{y^2}\right) \cdot \left(\frac{x^3}{y^2}\right) \cdot \left(\frac{x^3}{y^2}\right) \cdot \left(\frac{x^3}{y^2}\right) = \frac{(x \cdot x \cdot x) \cdot (x \cdot x \cdot x) \cdot (x \cdot x \cdot x) \cdot (x \cdot x \cdot x)}{(y \cdot y) \cdot (y \cdot y) \cdot (y \cdot y) \cdot (y \cdot y)} = \frac{x^{12}}{y^8}$$

Video Review**MEDIA**

Click image to the left for more content.

**MEDIA**

Click image to the left for more content.

Guided Practice

Simplify the following expression.

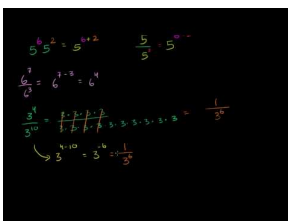
$$\left(\frac{x^{10}}{y^5}\right)^3$$

Solution:

$$\left(\frac{x^{10}}{y^5}\right)^3 = \frac{x^{10 \cdot 3}}{y^{5 \cdot 3}} = \frac{x^{30}}{y^{15}}$$

Practice

Sample explanations for some of the practice exercises below are available by viewing the following video. Note that there is not always a match between the number of the practice exercise in the video and the number of the practice exercise listed in the following exercise set. However, the practice exercise is the same in both. [CK-12 Basic Algebra: Exponent Properties Involving Quotients \(9:22\)](#)

**MEDIA**

Click image to the left for more content.

Evaluate the following expressions.

1. $\frac{5^6}{5^2}$
2. $\frac{6^7}{6^3}$
3. $\frac{3^{10}}{3^4}$
4. $\left(\frac{2^2}{3^3}\right)^3$

Simplify the following expressions.

5. $\frac{a^3}{a^2}$
6. $\frac{x^9}{x^5}$
7. $\frac{x^{10}}{x^5}$
8. $\frac{a^6}{a}$
9. $\frac{a^5b^4}{a^3b^2}$
10. $\frac{4^5}{4^2}$
11. $\frac{5^3}{5^7}$
12. $\left(\frac{3^4}{5^2}\right)^2$
13. $\left(\frac{a^3b^4}{a^2b}\right)^3$
14. $\frac{x^6y^5}{x^2y^3}$
15. $\frac{6x^2y^3}{2xy^2}$
16. $\left(\frac{2a^3b^3}{8a^7b}\right)^2$
17. $(x^2)^2 \cdot \frac{x^6}{x^4}$
18. $\left(\frac{16a^2}{4b^5}\right)^3 \cdot \frac{b^2}{a^{16}}$
19. $\frac{6a^3}{2a^2}$
20. $\frac{15x^5}{5x}$
21. $\left(\frac{18a^{10}}{15a^4}\right)^4$
22. $\frac{25yx^6}{20y^3x^2}$
23. $\left(\frac{x^6y^2}{x^4y^4}\right)^3$
24. $\left(\frac{6a^2}{4b^4}\right)^2 \cdot \frac{5b}{3a}$
25. $\frac{(3ab)^2(4a^3b^4)^3}{(6a^2b)^4}$
26. $\frac{(2a^2bc^2)(6abc^3)}{4ab^2c}$

Mixed Review

27. Evaluate $x|z| - |z|$ when $x = 8$ and $z = -4$.
28. Graph the solution set to the system $\begin{cases} y < -x - 2 \\ y \geq -6x + 3 \end{cases}$.
29. Evaluate $\binom{8}{4}$.
30. Make up a situation that can be solved by $4!$.
31. Write the following as an algebraic sentence: *A number cubed is 8.*

8.3 Negative Exponents

Here you'll learn how to use zero and negative exponents to simplify expressions.

All the students in a class were randomly given an expression, and they were asked to make pairs, with one boy and one girl per pair. The students were asked to divide the boy's expression by the girl's expression. Bill and Jenna paired up, with Bill having $10x^4$ and Jenna having $5x^5$. Also, Tim and Meg paired up, with Tim having $7y^3$, and Meg having $14y^3$. What is Bill and Jenna's quotient? How about Tim and Meg's quotient? In this Concept, you'll learn about zero and negative exponents so that you can perform division problems like these.

Watch This

Multimedia Link: For help with these types of exponents, watch this http://www.phschool.com/atschool/academy123/english/academy123_content/wl-book-demo/ph-241s.html - PH School video or visit the <http://www.mathsisfun.com/algebra/negative-exponents.html> - mathisfun website.

Guidance

In the previous Concepts, we have dealt with powers that are positive whole numbers. In this Concept, you will learn how to solve expressions when the exponent is zero or a negative number.

Exponents of Zero: For all real numbers χ , $\chi \neq 0$, $\chi^0 = 1$.

Example A

Simplify $\frac{\chi^4}{\chi^4}$.

Solution:

$\frac{\chi^4}{\chi^4} = \chi^{4-4} = \chi^0 = 1$. This example is simplified using the Quotient of Powers Property.

Simplifying Expressions with Negative Exponents

The next objective is **negative exponents**. When we use the quotient rule and we subtract a greater number from a smaller number, the answer will become negative. The variable and the power will be moved to the denominator of a fraction. You will learn how to write this in an expression.

Example B

Simplify $\frac{x^4}{x^6}$.

Solution:

$\frac{x^4}{x^6} = x^{4-6} = x^{-2} = \frac{1}{x^2}$. Another way to look at this is $\frac{\chi\chi\chi\chi}{\chi\chi\chi\chi\chi\chi}$. The four χ s on top will cancel out with four χ s on the bottom. This will leave two χ s remaining on the bottom, which makes your answer look like $\frac{1}{\chi^2}$.

Negative Power Rule for Exponents: $\frac{1}{\chi^n} = \chi^{-n}$ where $\chi \neq 0$.

Example C

Rewrite using only positive exponents: $x^{-6}y^{-2}$.

Solution:

$x^{-6}y^{-2} = \frac{1}{x^6} \cdot \frac{1}{y^2} = \frac{1}{x^6y^2}$. The negative power rule for exponents is applied to both variables separately in this example.

Example D

Write the following expressions without fractions.

(a) $\frac{2}{x^2}$

(b) $\frac{x^2}{y^3}$

Solution:

(a) $\frac{2}{x^2} = 2x^{-2}$

(b) $\frac{x^2}{y^3} = x^2y^{-3}$

Notice in part (a), the number 2 is in the numerator. This number is multiplied with x^{-2} . It could also look like $2 \cdot \frac{1}{x^2}$ to be better understood.

Video Review

MEDIA

Click image to the left for more content.



MEDIA

Click image to the left for more content.

Guided Practice

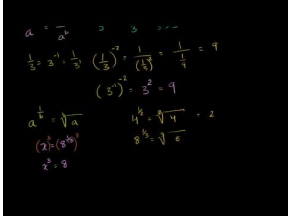
Simplify $\left(\frac{x^2y^{-3}}{x^5y^2}\right)^2$, giving the answer with only positive exponents.

Solution:

$$\left(\frac{x^2y^{-3}}{x^5y^2}\right)^2 = (x^2x^{-5}y^{-3}y^{-2})^2 = (x^{2-5}y^{-3-2})^2 = (x^{-3}y^{-5})^2 = (x^{-3})^2(y^{-5})^2 = x^{(-3)(2)}y^{(-5)(2)} = x^{-6}y^{-10} = \frac{1}{x^6y^{10}}$$

Practice

Sample explanations for some of the practice exercises below are available by viewing the following video. Note that there is not always a match between the number of the practice exercise in the video and the number of the practice exercise listed in the following exercise set. However, the practice exercise is the same in both. [CK-12 Basic Algebra:Zero, Negative,andFractional Exponents \(14:04\)](#)



MEDIA

Click image to the left for more content.

Simplify the following expressions. Be sure the final answer includes only positive exponents.

1. $x^{-1} \cdot y^2$
2. x^{-4}
3. $\frac{x^{-3}}{x^{-7}}$
4. $\frac{1}{x}$
5. $\frac{2}{x^2}$
6. $\frac{x^2}{y^3}$
7. $\frac{3}{xy}$
8. $3x^{-3}$
9. $a^2b^{-3}c^{-1}$
10. $4x^{-1}y^3$
11. $\frac{2x^{-2}}{y^{-3}}$
12. $\left(\frac{a}{b}\right)^{-2}$
13. $(3a^{-2}b^2c^3)^3$
14. $x^{-3} \cdot x^3$

Simplify the following expressions without any fractions in the answer.

15. $\frac{a^{-3}(a^5)}{a^{-6}}$
16. $\frac{5x^6y^2}{x^8y}$
17. $\frac{(4ab^6)^3}{(ab)^5}$

Evaluate the following expressions to a single number.

18. 3^{-2}
19. $(6.2)^0$
20. $8^{-4} \cdot 8^6$

In 21 – 23, evaluate the expression for $x = 2$, $y = -1$, and $z = 3$.

21. $2x^2 - 3y^3 + 4z$
22. $(x^2 - y^2)^2$
23. $\left(\frac{3x^2y^5}{4z}\right)^{-2}$

24. Evaluate $x^2 4x^3 y^4 4y^2$ if $x = 2$ and $y = -1$.
25. Evaluate $a^4(b^2)^3 + 2ab$ if $a = -2$ and $b = 1$.
26. Evaluate $5x^2 - 2y^3 + 3z$ if $x = 3$, $y = 2$, and $z = 4$.
27. Evaluate $\left(\frac{a^2}{b^3}\right)^{-2}$ if $a = 5$ and $b = 3$.
28. Evaluate $3 \cdot 5^5 - 10 \cdot 5 + 1$.
29. Evaluate $\frac{2 \cdot 4^2 - 3 \cdot 5^2}{3^2}$.
30. Evaluate $\left(\frac{3^3}{2^2}\right)^{-2} \cdot \frac{3}{4}$.

8.4 Fractional Exponents

Here you'll learn how to use fractional exponents instead of roots when writing expressions.

Suppose you want to find the cube root of a number, but your calculator only allows you to find square roots. However, it does allow you to find a number raised to any power, including non-integer powers. What would you do? Is there a way that you could rewrite the cube root of a number with a fractional exponent so that you could use your calculator to find the answer? In this Concept, you'll learn how to rewrite roots as fractional exponents so that you won't need to rely on your calculator's root button.

Guidance

The next objective is to be able to use fractions as exponents in an expression.

Roots as Fractional Exponents: $\sqrt[m]{a^n} = a^{\frac{n}{m}}$.

Example A

$$\sqrt{a} = a^{\frac{1}{2}}, \sqrt[3]{a} = a^{\frac{1}{3}}, \sqrt[5]{a^2} = (a^2)^{\frac{1}{5}} = a^{\frac{2}{5}}$$

Example B

Simplify the following expressions.

(a) $\sqrt[3]{x}$

(b) $\sqrt[4]{x^3}$

Solution:

(a) $x^{\frac{1}{3}}$

(b) $x^{\frac{3}{4}}$

Evaluating Expressions with Exponents

It is important when evaluating expressions that you remember the Order of Operations. Evaluate what is inside the parentheses, then evaluate the exponents, then perform multiplication/division from left to right, and then perform addition/subtraction from left to right.

Example C

Evaluate the following expression.

$$3 \cdot 5^2 - 9^{1/2} \cdot 5 + 1$$

Solution:

$$3 \cdot 5^2 - 9^{1/2} \cdot 5 + 1 = 3 \cdot 25 - \sqrt{9} \cdot 5 + 1 = 75 - 3 \cdot 50 + 1 = 75 - 150 + 1 = -74$$

Video Review



MEDIA
Click image to the left for more content.



MEDIA
Click image to the left for more content.

Guided Practice

Simplify $\left(\frac{3^2 \cdot 36^{3/2}}{2^3}\right)^{2/5}$.**Solution:**We start by simplifying using the fact that $36^{3/2} = (36^{1/2})^3$.

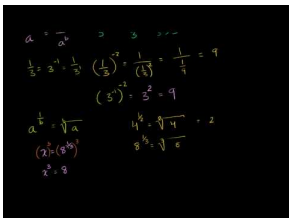
$$\left(\frac{3^2 \cdot 36^{3/2}}{2^3}\right)^{2/5} = \left(\frac{3^2 \cdot (36^{1/2})^3}{2^3}\right)^{2/5} = \left(\frac{3^2 \cdot (\sqrt{36})^3}{2^3}\right)^{2/5} = \left(\frac{3^2 \cdot 6^3}{2^3}\right)^{2/5}$$

Next we rearrange knowing that 6 and 2 have a common factor, 2.

$$\left(\frac{3^2 \cdot 6^3}{2^3}\right)^{2/5} = \left(3^2 \cdot \left(\frac{6}{2}\right)^3\right)^{2/5} = (3^2 \cdot 3^3)^{2/5} = (3^5)^{2/5} = 3^{5 \cdot 2/5} = 3^2 = 9$$

Practice

Sample explanations for some of the practice exercises below are available by viewing the following video. Note that there is not always a match between the number of the practice exercise in the video and the number of the practice exercise listed in the following exercise set. However, the practice exercise is the same in both. [CK-12 Basic Algebra:Zero, Negative,andFractional Exponents](#) (14:04)



MEDIA
Click image to the left for more content.

Simplify the following expressions. Be sure the final answer includes only positive exponents.

- $\left(a^{\frac{1}{3}}\right)^2$
- $\frac{a^{\frac{5}{2}}}{a^{\frac{1}{2}}}$

3. $\left(\frac{x^2}{y^3}\right)^{\frac{1}{3}}$
4. $\frac{x^{-3}y^{-5}}{z^{-7}}$
5. $(x^{\frac{1}{2}}y^{-\frac{2}{3}})(x^2y^{\frac{1}{3}})$

Simplify the following expressions without any fractions in the answer.

6. $\left(\frac{3x}{y^{\frac{1}{3}}}\right)^3$
7. $\frac{4a^2b^3}{2a^5b}$
8. $\left(\frac{x}{3y^2}\right)^3 \cdot \frac{x^2y}{4}$
9. $\left(\frac{ab^{-2}}{b^3}\right)^2$
10. $\frac{x^{-3}y^2}{x^2y^{-2}}$
11. $\frac{3x^2y^{\frac{3}{2}}}{xy^{\frac{1}{2}}}$
12. $\frac{(3x^3)(4x^4)}{(2y)^2}$
13. $\frac{a^{-2}b^{-3}}{c^{-1}}$
14. $\frac{x^{\frac{1}{2}}y^{\frac{5}{2}}}{x^{\frac{3}{2}}y^{\frac{3}{2}}}$

Evaluate the following expressions to a single number.

15. $(16^{\frac{1}{2}})^3$
16. 5^0
17. 7^2
18. $\left(\frac{2}{3}\right)^3$
19. 3^{-3}
20. $16^{\frac{1}{2}}$
21. $8^{\frac{-1}{3}}$

Mixed Review

22. A quiz has ten questions: 7 true/false and 3 multiple choice. The multiple choice questions each have four options. How many ways can the test be answered?
23. Simplify $3a^4b^4 \cdot a^{-3}b^{-4}$.
24. Simplify $(x^4y^2 \cdot xy^0)^5$.
25. Simplify $\frac{v^2}{-vu^{-2} \cdot u^{-1}v^4}$.
26. Solve for n : $-6(4n + 3) = n + 32$.

8.5 Scientific Notation

Here you'll learn how to use scientific notation to rewrite very large or very small numbers as the product of a decimal and 10 raised to a specific power.

Did you know that the average distance of the Earth from the Sun is about 92,000,000 miles? This is a big number! Do you think that there is any way to write it more compactly? In this Concept, you'll learn all about using scientific notation so that you can express very large or very small numbers as the product of a decimal and 10 to a certain power. This way, you'll be able to express numbers such as 92,000,000 miles much more succinctly.

Guidance

Sometimes in mathematics numbers are huge. They are so huge that we use what is called scientific notation. It is easier to work with such numbers when we shorten their decimal places and multiply them by 10 to a specific power. In this Concept, you will learn how to express numbers using scientific notation.

Definition: A number is expressed in *scientific notation* when it is in the form

$$N \times 10^n$$

where $1 \leq N < 10$ and n is an integer.

For example, 2.35×10^{37} is a number expressed in scientific notation. Notice there is only one number in front of the decimal place.

Since the scientific notation uses powers of ten, we want to be comfortable expressing different powers of ten.

Powers of 10:

$$100,000 = 10^5$$

$$10,000 = 10^4$$

$$1,000 = 10^3$$

$$100 = 10^2$$

$$10 = 10^1$$

Using Scientific Notation for Large Numbers

If we divide 643,297 by 100,000 we get 6.43297. If we multiply 6.43297 by 100,000, we get back to our original number, 643,297. But we have just seen that 100,000 is the same as 10^5 , so if we multiply 6.43297 by 10^5 , we should also get our original number, 643,297, as well. In other words $6.43297 \times 10^5 = 643,297$. Because there are five zeros, the decimal moves over five places.

Example A

Look at the following examples:

$$2.08 \times 10^4 = 20,800$$

$$2.08 \times 10^3 = 2,080$$

$$2.08 \times 10^2 = 208$$

$$2.08 \times 10^1 = 20.8$$

$$2.08 \times 10^0 = 2.08$$

The power tells how many decimal places to move; positive powers mean the decimal moves to the right. A positive 4 means the decimal moves four positions to the right.

Example B

Write in scientific notation.

653,937,000

Solution:

$$653,937,000 = 6.53937000 \times 100,000,000 = 6.53937 \times 10^8$$

Oftentimes, we do not keep more than a few decimal places when using scientific notation, and we round the number to the nearest whole number, tenth, or hundredth depending on what the directions say. Rounding Example A could look like 6.5×10^8 .

Using Scientific Notation for Small Numbers

We've seen that scientific notation is useful when dealing with large numbers. It is also good to use when dealing with extremely small numbers.

Example C

Look at the following examples:

$$2.08 \times 10^{-1} = 0.208$$

$$2.08 \times 10^{-2} = 0.0208$$

$$2.08 \times 10^{-3} = 0.00208$$

$$2.08 \times 10^{-4} = 0.000208$$

Video Review



MEDIA

Click image to the left for more content.



MEDIA

Click image to the left for more content.

Guided Practice


The time taken for a light beam to cross a football pitch is 0.0000004 seconds. Write in scientific notation.

Solution:

$$0.0000004 = 4 \times 0.0000001 = 4 \times \frac{1}{10,000,000} = 4 \times \frac{1}{10^7} = 4 \times 10^{-7}$$

Practice

Sample explanations for some of the practice exercises below are available by viewing the following video. Note that there is not always a match between the number of the practice exercise in the video and the number of the practice exercise listed in the following exercise set. However, the practice exercise is the same in both. [CK-12 Basic Algebra:Scientific Notation \(14:26\)](#)



MEDIA

Click image to the left for more content.

Write the numerical value of the following expressions.

1. 3.102×10^2
2. 7.4×10^4
3. 1.75×10^{-3}
4. 2.9×10^{-5}
5. 9.99×10^{-9}

Write the following numbers in scientific notation.

6. 120,000
7. 1,765,244
8. 63
9. 9,654
10. 653,937,000
11. 1,000,000,006
12. 12
13. 0.00281
14. 0.000000027
15. 0.003
16. 0.000056
17. 0.00005007
18. 0.00000000000954

Quick Quiz

1. Simplify: $\frac{(2x^{-4}y^3)^{-3} \cdot x^{-3}y^{-2}}{-2x^0y^2}$.
2. The formula $A = 1,500(1.0025)^t$ gives the total amount of money in a bank account with a balance of \$1,500.00, earning 0.25% interest, compounded annually. How much money would be in the account five years in the past?
3. *True or false?* $\left(\frac{5}{4}\right)^{-3} = -\frac{125}{64}$

8.6 Scientific Notation with a Calculator

Here you'll learn how to use a calculator to simplify expressions in scientific notation.

Did you know that there are about 7 billion people living on the Earth? Also, did you know that each person is made up of about 100 trillion cells? To find the total number of cells making up all the people on Earth, you would have to multiply these two numbers together, but without a calculator, that might be difficult. In this Concept, you'll learn how to evaluate expressions using scientific notation with a calculator so that you can perform multiplication problems such as this one.

Guidance

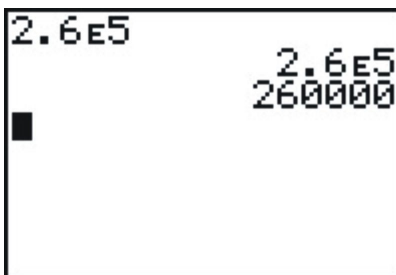
Scientific and graphing calculators make scientific notation easier. To compute scientific notation, use the **[EE]** button. This is **[2nd] [,]** on some TI models or **[10^x]**, which is **[2nd] [log]**.

Example A

Evaluate 2.6×10^5 using a scientific calculator.

Solution:

To enter 2.6×10^5 , enter 2.6 **[EE]** 5.



When you hit **[ENTER]** the calculator displays $2.6E5$ if it's set in **Scientific** mode OR it displays 260,000 if it's set in **Normal** mode.

Evaluating Expressions Using Scientific Notation

We can use scientific notations in expressions, equations and operations. Scientific notation makes it easier to multiply two large numbers together, or divide a decimal by another decimal. This is because when evaluating expressions with scientific notation, you can keep the powers of 10 together and deal with them separately.

Example B

Simplify $(3.2 \times 10^6) \cdot (8.7 \times 10^{11})$.

Solution:

Start by evaluating by hand, and then check on your calculator:

$$(3.2 \times 10^6) \cdot (8.7 \times 10^{11}) = 3.2 \times 8.7 \cdot 10^6 \times 10^{11} = 27.84 \times 10^{17} = 2.784 \times 10^1 \times 10^{17} = 2.784 \times 10^{18}$$

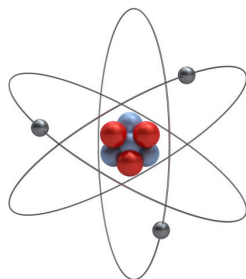
It is necessary to keep one number before the decimal point, to be in correct scientific notation. In order to do that, we had to use the fact that $27.84 = 2.784 \times 10^1$ so we could simplify the expression fully.



In this case, the power is so large that the answer shows up in scientific notation. It does not matter if the calculator is set to show numbers in scientific notation or normally.

Example C

The mass of a single lithium atom is approximately one percent of one millionth of one billionth of one billionth of one kilogram. Express this mass in scientific notation.



Solution:

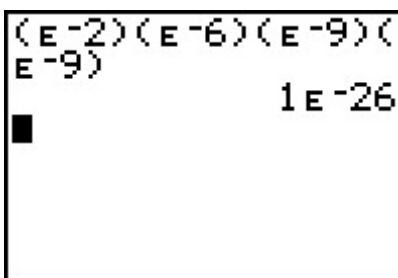
We know that percent means we divide by 100, and so our calculation for the mass (in kg) is: $\frac{1}{100} \times \frac{1}{1,000,000} \times \frac{1}{1,000,000,000} \times \frac{1}{1,000,000,000} = 10^{-2} \times 10^{-6} \times 10^{-9} \times 10^{-9}$

Next, we use the product of powers rule we learned in a previous Concept.

$$10^{-2} \times 10^{-6} \times 10^{-9} \times 10^{-9} = 10^{((-2)+(-6)+(-9)+(-9))} = 10^{-26} \text{ kg.}$$

The mass of one lithium atom is approximately $1 \times 10^{-26} \text{ kg}$.

Check the answer on your calculator:



Video Review



MEDIA

Click image to the left for more content.



MEDIA

Click image to the left for more content.

Guided Practice

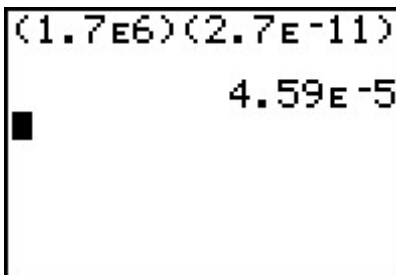
Evaluate the following expressions by hand and check your answer using a scientific calculator.

(a) $(1.7 \times 10^6) \cdot (2.7 \times 10^{-11})$

(b) $(1.03 \times 10^8) \div (-3.25 \times 10^{-5})$

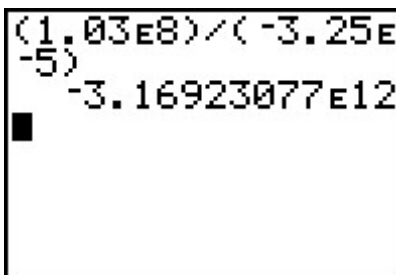
Solution:

(a) $(1.7 \times 10^6) \cdot (2.7 \times 10^{-11}) = 1.7 \times 2.7 \cdot 10^6 \times 10^{-11} = 4.59 \times 10^{-5}$



(b)

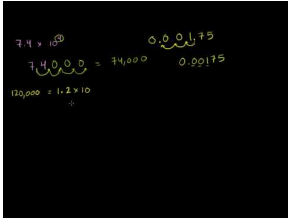
$$\begin{aligned} (1.03 \times 10^8) \div (-3.25 \times 10^{-5}) &= \frac{1.03 \times 10^8}{-3.25 \times 10^{-5}} = \frac{1.03}{-3.25} \times \frac{10^8}{10^{-5}} \\ &= -0.317 \times 10^{8-(-5)} = -0.317 \times 10^{13} = -3.17 \times 10^{12} \end{aligned}$$



You must remember to keep the powers of ten together, and have 1 number before the decimal.

Practice

Sample explanations for some of the practice exercises below are available by viewing the following video. Note that there is not always a match between the number of the practice exercise in the video and the number of the practice exercise listed in the following exercise set. However, the practice exercise is the same in both. [CK-12 Basic Algebra:Scientific Notation \(14:26\)](#)



MEDIA

Click image to the left for more content.

Evaluate the following expressions by hand and check your answers using a graphing calculator.

- $(3.2 \times 10^6) \cdot (8.7 \times 10^{11})$
- $(5.2 \times 10^{-4}) \cdot (3.8 \times 10^{-19})$
- $(1.7 \times 10^6) \cdot (2.7 \times 10^{-11})$
- $(3.2 \times 10^6) \div (8.7 \times 10^{11})$
- $(5.2 \times 10^{-4}) \div (3.8 \times 10^{-19})$
- $(1.7 \times 10^6) \div (2.7 \times 10^{-11})$
- $(4.7 \times 10^3) \cdot (2.35 \times 10^{-27})$
- $(1.05 \times 10^{-16}) \cdot (7.003 \times 10^{21})$
- $(2.09 \times 10^5) \div (5.006 \times 10^{-3})$
- $(9.01 \times 10^{22}) \div (2.6 \times 10^{33})$

Mixed Review

- 14 milliliters of a 40% sugar solution was mixed with 4 milliliters of pure water. What is the concentration of the mixture?
- Solve the system
$$\begin{cases} 6x + 3y + 18 \\ -15 = 11y - 5x \end{cases}$$
.
- Graph the function by creating a table: $f(x) = 2x^2$. Use the following values for x : $-5 \leq x \leq 5$.
- Simplify $\frac{5a^6b^2c^{-6}}{a^{11}b}$. Your answer should have only positive exponents.
- Each year Americans produce about 230 million tons of trash (Source: <http://www.learner.org/interactives/garbage/solidwaste.html>). There are 307,006,550 people in the United States. How much trash is produced per person per year?
- The volume of a 3-dimensional box is given by the formula: $V = l(w)(h)$, where $l = \text{length}$, $w = \text{width}$, and $h = \text{height}$ of the box. The box holds 312 cubic inches and has a length of 12 inches and a width of 8 inches. How tall is the box?

8.7 Exponential Growth

Here you'll learn about functions that grow exponentially.

Suppose that 1000 people visited an online auction website during its first month in existence and that the total number of visitors to the auction site is tripling every month. Could you write a function to represent this situation? How many total visitors will the auction site have had after 9 months? In this Concept, you'll learn about exponential growth and how to evaluate exponential growth functions so that you can handle situations such as this one.

Guidance

In previous Concepts, we have seen the variable as the base. In exponential functions, the exponent is the variable and the base is a constant.

General Form of an Exponential Function: $y = a(b)^x$, where $a = \text{initial value}$ and

$$b = \text{growth factor}$$

In exponential growth situations, the growth factor must be greater than one.

$$b > 1$$

Example A

A colony of bacteria has a population of 3,000 at noon on Sunday. During the next week, the colony's population doubles every day. What is the population of the bacteria colony at noon on Saturday?



Solution: Make a table of values and calculate the population each day.

TABLE 8.1:

Day	0 (Sun)	1 (Mon)	2 (Tues)	3 (Wed)	4 (Thurs)	5 (Fri)	6 (Sat)
Population (thousands)	3	6	12	24	48	96	192

To get the population of bacteria for the next day we multiply the current day's population by 2 because it doubles every day. If we define x as the number of days since Sunday at noon, then we can write the following: $P = 3 \cdot 2^x$. This is a formula that we can use to calculate the population on any day. For instance, the population on Saturday at noon will be $P = 3 \cdot 2^6 = 3 \cdot 64 = 192$ thousand bacteria. We use $x = 6$, since Saturday at noon is six days after Sunday at noon.

Graphing Exponential Functions

Graphs of exponential growth functions show you how quickly the values of the functions get very large.

Example B

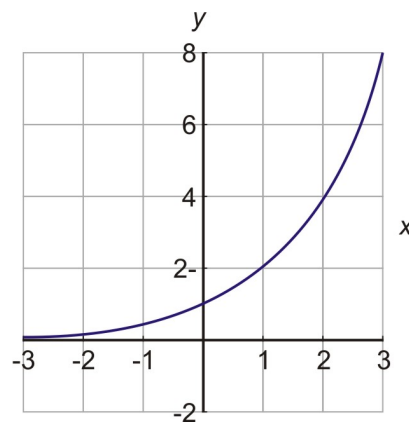
Graph the equation using a table of values: $y = 2^x$.

Solution: Make a table of values that includes both negative and positive values of x . Substitute these values for x to get the value for the y variable.

TABLE 8.2:

x	y
-3	$\frac{1}{8}$
-2	$\frac{1}{4}$
-1	$\frac{1}{2}$
0	1
1	2
2	4
3	8

Plot the points on the coordinate axes to get the graph below. Exponential functions always have this basic shape: They start very small and then once they start growing, they grow faster and faster, and soon they become huge.



Example C

In the last example, we produced a graph for $y = 2^x$. Compare that graph with the graph of $y = 3 \cdot 2^x$.

Solution:

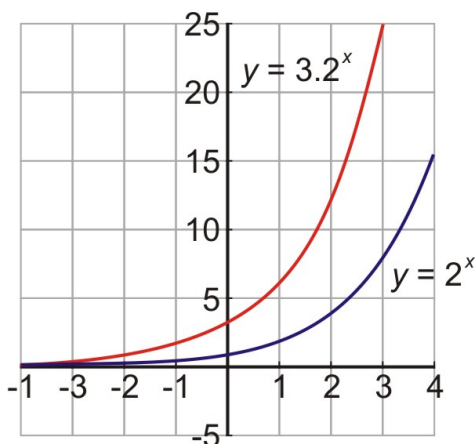
TABLE 8.3:

x	y
-2	$3 \cdot 2^{-2} = 3 \cdot \frac{1}{2^2} = \frac{3}{4}$

TABLE 8.3: (continued)

x	y
-1	$3 \cdot 2^{-1} = 3 \cdot \frac{1}{2} = \frac{3}{2}$
0	$3 \cdot 2^0 = 3$
1	$3 \cdot 2^1 = 6$
2	$3 \cdot 2^2 = 3 \cdot 4 = 12$
3	$3 \cdot 2^3 = 3 \cdot 8 = 24$

We can see that the function $y = 3 \cdot 2^x$ is bigger than the function $y = 2^x$. In both functions, the value of y doubles every time x increases by one. However, $y = 3 \cdot 2^x$ starts with a value of 3, while $y = 2^x$ starts with a value of 1, so it makes sense that $y = 3 \cdot 2^x$ would be bigger.



The shape of the exponential graph changes if the constants change. The curve can become steeper or shallower.

Video Review



MEDIA

Click image to the left for more content.



MEDIA

Click image to the left for more content.

Guided Practice

A population of 500 *E. Coli* organisms doubles every fifteen minutes. Write a function expressing the population size as a function of hours.

Solution:

Since there are four 15 minute periods in an hour, this means the population will double 4 times in an hour. Doubling twice is the same thing as quadrupling since:

$$1 \cdot 2 \cdot 2 = 1 \cdot 2^2 = 1 \cdot 4 = 4.$$

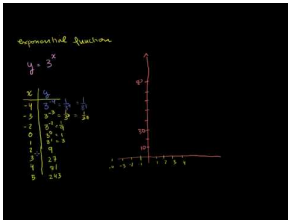
This means that doubling 4 times can be calculated as $2^4 = 16$. So the population is 16 times as big every hour. With an initial population size of 500, the function is:

$$f(x) = 500 \cdot 8^x$$

where x is in hours and $f(x)$ is the number of organisms after x hours.

Practice

Sample explanations for some of the practice exercises below are available by viewing the following video. Note that there is not always a match between the number of the practice exercise in the video and the number of the practice exercise listed in the following exercise set. However, the practice exercise is the same in both. [CK-12 Basic Algebra: Exponential Growth Functions \(7:41\)](#)



MEDIA

Click image to the left for more content.

1. What is the general form for an exponential equation? What do the variables represent?
2. How is an exponential growth equation different from a linear equation?
3. What is true about the growth factor of an exponential equation?
4. *True or false?* An exponential growth function has the following form: $f(x) = a(b)^x$, where $a > 1$ and $b < 1$?
5. What is the y -intercept of all exponential growth functions?

Graph the following exponential functions by making a table of values.

6. $y = 3^x$
7. $y = 2^x$
8. $y = 5 \cdot 3^x$
9. $y = \frac{1}{2} \cdot 4^x$
10. $f(x) = \frac{1}{3} \cdot 7^x$
11. $f(x) = 2 \cdot 3^x$
12. $y = 40 \cdot 4^x$
13. $y = 3 \cdot 10^x$

Solve the following problems involving exponential growth.

14. A chain letter is sent out to 10 people telling everyone to make 10 copies of the letter and send each one to a new person. Assume that everyone who receives the letter sends it to 10 new people and that it takes a week for each cycle. How many people receive the letter in the sixth week?
15. Nadia received \$200 for her 10th birthday. If she saves it in a bank with a 7.5% interest rate compounded yearly, how much money will she have in the bank by her 21st birthday?

Mixed Review

16. Suppose a letter is randomly chosen from the alphabet. What is the probability the letter chosen is M , K , or L ?
17. Evaluate $t^4 \cdot t^{\frac{1}{2}}$ when $t = 9$.
18. Simplify $28 - (x - 16)$.
19. Graph $y - 1 = \frac{1}{3}(x + 6)$.

8.8 Exponential Decay

Here you'll learn what is meant by exponential decay and how to evaluate exponential decay functions.

Suppose the amount of a radioactive substance is cut in half every 25 years. If there was originally 500 grams of the substance, could you write a function representing the amount of the substance after x years? How much of the substance would there be after 100 years? Will the amount of the substance ever reach 0 grams? After completing this Concept, you'll be able to answer questions like these regarding exponential decay.

Guidance

In the last Concept, we learned how to solve expressions that modeled exponential growth. In this Concept, we will be learning about exponential decay functions.

General Form of an Exponential Function: $y = a(b)^x$, where $a = \text{initial value}$ and

$$b = \text{growth factor}$$

In exponential decay situations, the growth factor must be a fraction between zero and one.

$$0 < b < 1$$

Example A

For her fifth birthday, Nadia's grandmother gave her a full bag of candy. Nadia counted her candy and found out that there were 160 pieces in the bag. Nadia loves candy, so she ate half the bag on the first day. Her mother told her that if she continues to eat at that rate, it will be gone the next day and she will not have any more until her next birthday. Nadia devised a clever plan. She will always eat half of the candy that is left in the bag each day. She thinks that she will get candy every day and her candy will never run out. How much candy does Nadia have at the end of the week? Would the candy really last forever?



Solution: Make a table of values for this problem.

TABLE 8.4:

Day	0	1	2	3	4	5	6	7
# of Candies	160	80	40	20	10	5	2.5	1.25

You can see that if Nadia eats half the candies each day, then by the end of the week she has only 1.25 candies left in her bag.

Write an equation for this exponential function. Nadia began with 160 pieces of candy. In order to get the amount of candy left at the end of each day, we keep multiplying by $\frac{1}{2}$. Because it is an exponential function, the equation is:

$$y = 160 \cdot \left(\frac{1}{2}\right)^x$$

Graphing Exponential Decay Functions

Example B

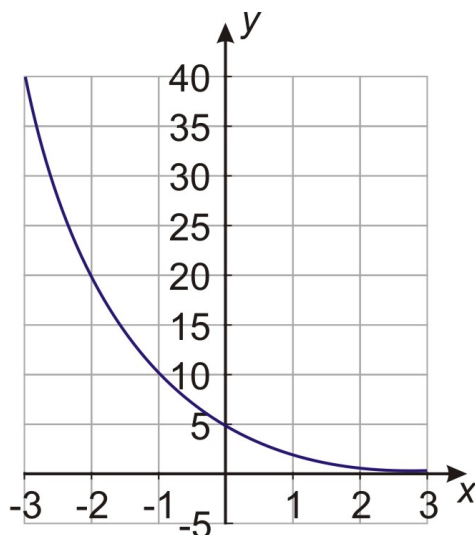
Graph the exponential function $y = 5 \cdot \left(\frac{1}{2}\right)^x$.

Solution: Start by making a table of values. Remember when you have a number to the negative power, you are simply taking the reciprocal of that number and taking it to the positive power. Example: $\left(\frac{1}{2}\right)^{-2} = \left(\frac{2}{1}\right)^2 = 2^2$.

TABLE 8.5:

x	$y = 5 \cdot \left(\frac{1}{2}\right)^x$
-3	$y = 5 \left(\frac{1}{2}\right)^{-3} = 40$
-2	$y = 5 \left(\frac{1}{2}\right)^{-2} = 20$
-1	$y = 5 \left(\frac{1}{2}\right)^{-1} = 10$
0	$y = 5 \left(\frac{1}{2}\right)^0 = 5$
1	$y = 5 \left(\frac{1}{2}\right)^1 = \frac{5}{2}$
2	$y = 5 \left(\frac{1}{2}\right)^2 = \frac{5}{4}$

Now graph the function.



Using the Property of Negative Exponents, the equation can also be written as $5 \cdot 2^{-x}$.

Example C

Graph the functions $y = 4^x$ and $y = 4^{-x}$ on the same coordinate axes.

Solution:

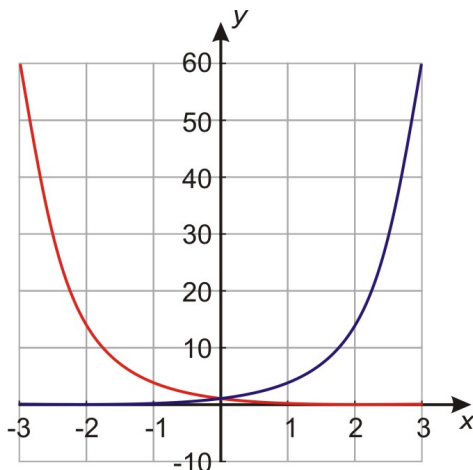
Here is the table of values and the graph of the two functions.

Looking at the values in the table, we see that the two functions are “reverse images” of each other in the sense that the values for the two functions are reciprocals.

TABLE 8.6:

x	$y = 4^x$	$y = 4^{-x}$
-3	$y = 4^{-3} = \frac{1}{64}$	$y = 4^{-(-3)} = 64$
-2	$y = 4^{-2} = \frac{1}{16}$	$y = 4^{-(-2)} = 16$
-1	$y = 4^{-1} = \frac{1}{4}$	$y = 4^{-(-1)} = 4$
0	$y = 4^0 = 1$	$y = 4^{-(0)} = 1$
1	$y = 4^1 = 4$	$y = 4^{-(1)} = \frac{1}{4}$
2	$y = 4^2 = 16$	$y = 4^{-(2)} = \frac{1}{16}$
3	$y = 4^3 = 64$	$y = 4^{-(3)} = \frac{1}{64}$

Here is the graph of the two functions. Notice that these two functions are mirror images if the mirror is placed vertically on the y -axis.



Video Review



MEDIA

Click image to the left for more content.



MEDIA

Click image to the left for more content.

Guided Practice

If a person takes 125 milligrams of a drug, and after the full dose is absorbed into the bloodstream, there is only 70% left after every hour, write a function that gives the concentration left in the bloodstream after t hours. What is the concentration of the drug in the bloodstream after 3 hours?

Solution:

This will be a decay function in the form $f(t) = a \cdot b^t$. We know the initial value is 125 milligrams. After one hour we multiply that by 0.70 to find 70% of 125. After the second hour, we multiply by 0.7 again and so on:

The initial dose.	$125 = 125$
After one hour.	$125 \cdot 0.7 = 87.5$
After two hours.	$125 \cdot 0.7 \cdot 0.7 = 125 \cdot 0.7^2 = 61.25$
After three hours.	$125 \cdot 0.7 \cdot 0.7 \cdot 0.7 = 125 \cdot 0.7^3 = 42.875$

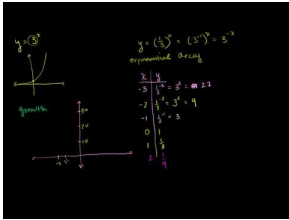
Since we multiply by 0.7 to find the 70% that is left after each hour, the decay factor is 0.7. The function will be:

$$f(t) = 125(0.7)^t.$$

We also found that after three hours the amount of the drug in the bloodstream will be 42.875 milligrams.

Practice

Sample explanations for some of the practice exercises below are available by viewing the following video. Note that there is not always a match between the number of the practice exercise in the video and the number of the practice exercise listed in the following exercise set. However, the practice exercise is the same in both. [CK-12 Basic Algebra: Exponential Decay Functions \(10:51\)](#)



MEDIA

Click image to the left for more content.

1. Define *exponential decay*.
2. What is true about “*b*” in an exponential decay function?
3. Suppose $f(x) = a(b)^x$. What is $f(0)$? What does this mean in terms of the *y*-intercept of an exponential function?

Graph the following exponential decay functions.

4. $y = \frac{1}{5}^x$
5. $y = 4 \cdot \left(\frac{2}{3}\right)^x$
6. $y = 3^{-x}$
7. $y = \frac{3}{4} \cdot 6^{-x}$

8. The percentage of light visible at d meters is given by the function $V(d) = 0.70^d$.
 - a. What is the growth factor?
 - b. What is the initial value?
 - c. Find the percentage of light visible at 65 meters.
9. A person is infected by a certain bacterial infection. When he goes to the doctor, the population of bacteria is 2 million. The doctor prescribes an antibiotic that reduces the bacteria population to $\frac{1}{4}$ of its size each day.
 - a. Draw a graph of the size of the bacteria population against time in days.
 - b. Find the formula that gives the size of the bacteria population in terms of time.
 - c. Find the size of the bacteria population ten days after the drug was first taken.
 - d. Find the size of the bacteria population after two weeks (14 days).

Mixed Review

10. The population of Kindly, USA is increasing at a rate of 2.14% each year. The population in the year 2010 is 14,578.
 - a. Write an equation to model this situation.
 - b. What would the population of Kindly be in the year 2015?
 - c. When will the population be 45,000?
11. The volume of a sphere is given by the formula $v = \frac{4}{3}\pi r^3$. Find the volume of a sphere with a diameter of 11 inches.

12. Simplify $\frac{6x^2}{14y^3} \cdot \frac{7y}{x^8} \cdot x^0y$.
13. Simplify $3(x^2y^3x)^2$.
14. Rewrite in standard form: $y - 16 + x = -4x + 6y + 1$.

8.9 Geometric Sequences and Exponential Functions

Here you'll learn about exponential functions and geometric sequences and how to make predictions based on these sequences.


Suppose that you own a house and that a termite problem has forced you to call the exterminator. The exterminator asks you about the problem, and you say, "Each day for the past week I counted the number of termites, and there were 5, 10, 20, 40, 80, 160, and 320, respectively." How many termites would you expect to count next? In this Concept, you'll learn about geometric sequences and how they relate to exponential functions so that you can make predictions such as the one asked for here.

Guidance

Which would you prefer: being given one million dollars, or one penny the first day, double that penny the next day, and then double the previous day's pennies and so on for a month?

At first glance you would think that a million dollars would be more. However, let's use geometric sequences before we decide to see how the pennies add up. You start with a penny the first day and keep doubling each day until the end of the month (30 days).

1 st Day	1 penny = 2^0
2 nd Day	2 pennies = 2^1
3 rd Day	4 pennies = 2^2
4 th Day	8 pennies = 2^3
30 th Day	= 2^{29}



$2^{29} = 536,870,912$ pennies or \$5,368,709.12, which is well over five times greater than \$1,000,000.00.

Geometric Sequence: a sequence of numbers in which each number in the sequence is found by multiplying the previous number by a fixed amount called the common ratio.

n^{th} term in a geometric sequence: $a_n = a_1 r^{n-1}$ (a_1 = first term, r = common ratio)

The Common Ratio of a Geometric Sequence

The common ratio, r , in any geometric sequence can be found by dividing any term by the preceding term. If we know the common ratio in a sequence then we can find any term in the sequence.

Example A

Find the eighth term in the geometric sequence.

1, 2, 4,...

Solution:

First we need to find the common ratio: $r = \frac{2}{1} = 2$.

The eighth term is given by the formula $2 = 1 \cdot 2^7 = 128$.

In other words, to get the eighth term we started with the first term, which is 1, and multiplied by two seven times.

Graphing Geometric Sequences

Exponential graphs and geometric sequence graphs look very much alike. Exponential graphs are continuous, however, and the sequence graphs are discrete with distinct points (1st term and 2nd term, etc).

Example B

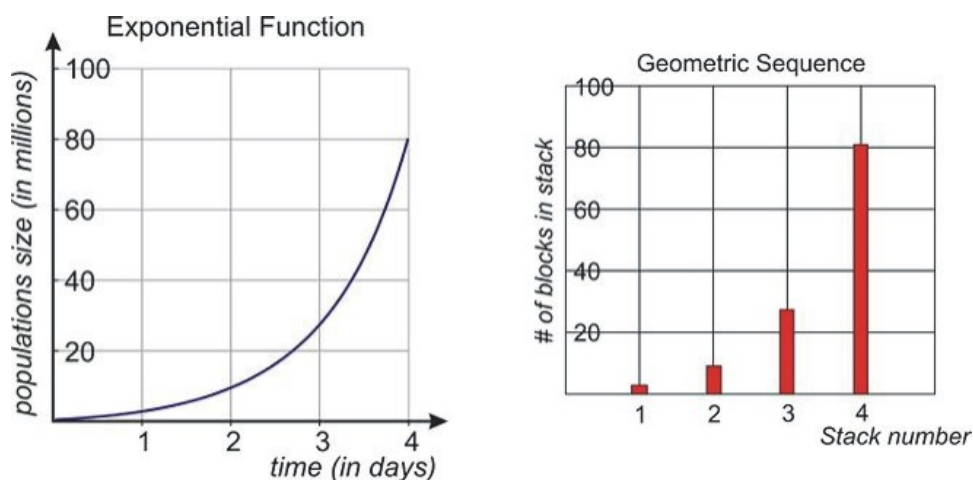
A population of bacteria in a Petri dish increases by a factor of three every 24 hours. The starting population is 1 million bacteria. This means that on the first day the population increases to 3 million, on the second day to 9 million, and so on.

Solution:

The population of bacteria is continuous. Even though we measured the population only every 24 hours, we know that it does not get from 1 million to 3 million all at once. Rather, the population changes bit by bit over the 24 hours. In other words, the bacteria are always there, and you can, if you so wish, find out what the population is at any time during a 24-hour period.

When we graph an exponential function, we draw the graph with a solid curve to show the function has values at any time during the day. On the other hand, when we graph a geometric sequence, we draw discrete points to show the sequence has values only at those points but not in-between.

Here are graphs for the two examples previously given:

**Example C**

A courtier presented the Indian king with a beautiful, hand-made chessboard. The king asked what he would like in return for his gift and the courtier surprised the king by asking for one grain of rice on the first square, two grains

on the second, four grains on the third, etc. The king readily agreed and asked for the rice to be brought (from Meadows et al. 1972, p.29 via Porritt 2005). How many grains of rice does the king have to put on the last square?



Solution:

A chessboard is an 8×8 square grid, so it contains a total of 64 squares.

The courtier asked for one grain of rice on the first square, 2 grains of rice on the second square, 4 grains of rice on the third square and so on. We can write this as a geometric sequence.

1, 2, 4,...

The numbers double each time, so the common ratio is $r = 2$.

The problem asks how many grains of rice the king needs to put on the last square. What we need to find is the 64^{th} term in the sequence. This means multiplying the starting term, 1, by the common ratio 64 times in a row. Let's use the formula.

$a_n = a_1 r^{n-1}$, where a_n is the n^{th} term, a_1 is the first term and r is the common ratio.

$a_{64} = 1 \cdot 2^{63} = 9,223,372,036,854,775,808$ grains of rice.

Video Review



MEDIA

Click image to the left for more content.



MEDIA

Click image to the left for more content.

Guided Practice

Find the next number in the geometric sequence: 0.01, 0.06, 0.36, 2.16, 12.96, ...

Solution:

The common ratio is:

$$\frac{0.06}{0.01} = 6.$$

Since the first value in the sequence is 0.01, the geometric sequence is

$$a_n = 0.01(6)^{n-1}$$

and since we are looking for the 6th term

$$a_6 = 0.01(6)^{6-1} = 0.01(6)^5 = 77.76.$$

The next number in the sequence is 77.76.

Practice

Sample explanations for some of the practice exercises below are available by viewing the following video. Note that there is not always a match between the number of the practice exercise in the video and the number of the practice exercise listed in the following exercise set. However, the practice exercise is the same in both. [CK-12 Basic Algebra: Geometric Sequences](#) (10:45)



MEDIA

Click image to the left for more content.

1. Define a *geometric sequence*.
2. Using the chessboard example, how many grains of rice should be placed on the:
 - a. Fourth square?
 - b. Tenth square?
 - c. Twenty-fifth square?
 - d. 60th square?
3. Is the following an example of a geometric sequence? Explain your answer. $-1, 1, -1, 1, -1, \dots$
4. Use the Petri dish example from the Concept. At what time are 25,000 bacteria in the dish?

Determine the constant ratio, r , for each geometric sequence.

5. 8, 6, ...
6. 2, 4, 8, 16, ...
7. $9, 3, \frac{1}{3}, \frac{1}{9}, \dots$
8. 2, -8, 32, -128

Determine the first five terms of each geometric sequence.

9. $a_1 = 2, r = 3$
10. $a_1 = 90, r = -\frac{1}{3}$
11. $a_1 = 6, r = -2$

Find the missing terms in each geometric sequence.

12. 3, _____, 48, 192, _____
 13. 81, _____, _____, _____, 1
 14. $\frac{9}{4}$, _____, _____, $\frac{2}{3}$, _____

Find the indicated term of each geometric sequence.

15. $a_1 = 4, r = 2$ Find a_6 .
 16. $a_1 = -7, r = -\frac{3}{4}$ Find a_4 .
 17. $a_1 = -10, r = -3$ Find a_{10} .
18. A ball is tossed from a height of four feet. Each bounce is 80% as high as the previous bounce.
- Write an equation to represent the situation.
 - How high is the ball after the fifth bounce?
19. An ant walks past several stacks of Lego blocks. There is one block in the first stack, three blocks in the second stack, and nine blocks in the third stack. In fact, in each successive stack there are triple the number of blocks there were in the previous stack.
- How many blocks are in the eighth stack?
 - When is the stack 343 blocks high?
20. A super-ball has a 75% rebound ratio. When you drop it from a height of 20 feet, it bounces and bounces and bounces...
- How high does the ball bounce after it strikes the ground for the third time?
 - How high does the ball bounce after it strikes the ground for the seventeenth time?
21. Anne goes bungee jumping off a bridge above water. On the initial jump, the bungee cord stretches by 120 feet. On the next bounce, the stretch is 60% of the original jump and each additional bounce stretches the rope by 60% of the previous stretch.
- What will the rope stretch be on the third bounce?
 - What will the rope stretch be on the 12th bounce?
22. A virus population doubles every 30 minutes. It begins with a population of 30.
- How many viral cells will be present after 5 hours?
 - When will it reach 1,000,000 cells? Round to the nearest half-hour.

Mixed Review

23. Translate into an algebraic sentence: *A number squared is less than 15 more than twice that number.*
 24. Give the slope and y -intercept of $y = \frac{2}{3}x - 7$.
 25. Evaluate $10!$.
 26. Convert 6 miles to yards.
 27. Simplify $\frac{5y^2 - 3y^2}{4y^{11}}$.
 28. Simplify $3x^2 \cdot x^6 + 4x^3x^5$.
 29. Evaluate $\left(\frac{27}{64}\right)^{-\frac{1}{3}}$.

8.10 Applications of Exponential Functions

Here you'll learn how to applications involving exponents and exponential functions.

Have you ever heard of the Consumer Price Index? It measures the price level of certain goods and services in order to measure inflation. Suppose the Consumer Price Index is currently at 226 and is increasing at a rate of 3% per year. What will it be in 10 years? What exponential function could you set up to answer this question? In this Concept, you'll learn to solve real-world problems like this one by using everything that was presented in the previous Concepts.

Watch This

Multimedia Link: To learn more about how to use the correct exponential function, visit the <http://regentsprep.org/REgents/math/ALGEBRA/AE7/ExpDecayL.htm> - algebra lesson page by RegentsPrep.

Guidance

We have to deal with problem solving in many real-world situations. Therefore, it is important to know the steps you must take when problem solving.

Example A

Suppose \$4000 is invested at a 6% interest rate compounded annually. How much money will there be in the bank at the end of five years? At the end of 20 years?

Solution:

Read the problem and summarize the information.

\$4000 is invested at a 6% interest rate compounded annually. We want to know how much money we will have after five years.

- Assign variables. Let $x = \text{time in years}$ and $y = \text{amount of money in investment account}$.
- We start with \$4000 and each year we apply a 6% interest rate on the amount in the bank.
- The pattern is that each year we multiply the previous amount by a factor of $100\% + 6\% = 106\% = 1.06$.
- Complete a table of values.

TABLE 8.7:

Time (years)	0	1	2	3	4	5
Investment Amount (\$)	4000	4240	4494.40	4764.06	5049.91	5352.90

Using the table, we see that at the end of five years we have \$5352.90 in the investment account.

In the case of five years, we don't need an equation to solve the problem. However, if we want the amount at the end of 20 years, it becomes too difficult to constantly multiply. We can use a formula instead.

Since we take the original investment and keep multiplying by the same factor of 1.06, this means we can use

exponential notation.

$$y = 4000 \cdot (1.06)^x$$

To find the amount after five years we use $x = 5$ in the equation.

$$y = 4000 \cdot (1.06)^5 = \$5352.90$$

To find the amount after 20 years we use $x = 20$ in the equation.

$$y = 4000 \cdot (1.06)^{20} = \$12,828.54$$

To check our answers we can plug in some low values of x to see if they match the values in the table:

$x = 0$	$4000 \cdot (1.06)^0 = 4000$
$x = 1$	$4000 \cdot (1.06)^1 = 4240$
$x = 2$	$4000 \cdot (1.06)^2 = 4494.40$

The answers make sense because after the first year, the amount goes up by \$240 (6% of \$4000). The amount of increase gets larger each year and that makes sense because the interest is 6% of an amount that is larger and larger every year.

Example B

The cost of a new car is \$32,000. It depreciates at a rate of 15% per year. This means that it loses 15% of its value each year.

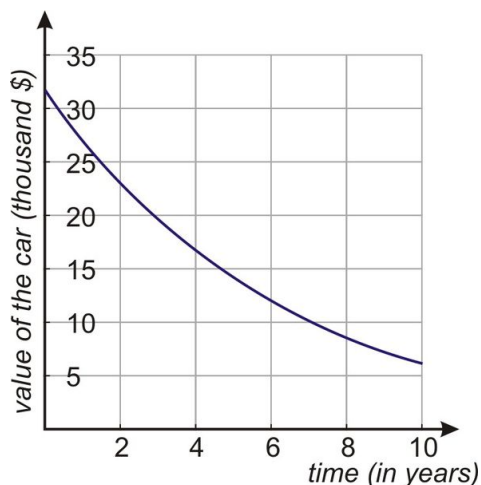
- Draw a graph of the car's value against time in years.
- Find the formula that gives the value of the car in terms of time.
- Find the value of the car when it is four years old.

Solution:

This is an example of an exponential decay function. Start by making a table of values. To fill in the values we start with 32,000 when $t = 0$. Then we multiply the value of the car by 85% for each passing year. (Since the car loses 15% of its value, it keeps 85% of its value). Remember $85\% = 0.85$.

TABLE 8.8:

Time	Value (Thousands)
0	32
1	27.2
2	23.1
3	19.7
4	16.7
5	14.2



The general formula is $y = a(b)^x$.

In this case: y is the value of the car, x is the time in years, $a = 32,000$ is the starting amount in thousands, and $b = 0.85$ since we multiply the value in any year by this factor to get the value of the car in the following year. The formula for this problem is $y = 32,000(0.85)^x$.

Finally, to find the value of the car when it is four years old, we use $x = 4$ in the formula. Remember the value is in thousands.

$$y = 32,000(0.85)^4 = 16,704.$$

Example C

The half-life of the prescription medication Amiodarone is 25 days. Suppose a patient has a single dose of 12 mg of this drug in her system.

1. How much Amiodarone will be in the patient's system after four half-life periods?
2. When will she have less than 3 mg of the drug in her system?

Solution:

1. Four half life periods means the drug reduces by half 4 times:

$$\left(\frac{1}{2}\right)^4 = \frac{1}{2^4} = \frac{1}{16}$$

Since the patient started with 12 mg, $12 \cdot \frac{1}{16} = \frac{3 \cdot 4}{4 \cdot 4} = \frac{3}{4}$.

There will be $\frac{3}{4}$ mg of Amiodarone left in the patient's system after 4 half lives.

2. 3 is half of 6, which is half of 12. So 12 mg will be reduced to 3 mg after two half lives. Thus, after 50 days, the patient will have less than 3 mg of Amiodarone in his or her system.

Video Review



MEDIA

Click image to the left for more content.



MEDIA

Click image to the left for more content.

Guided Practice

The population of a town is estimated to increase by 15% per year. The population today is 20,000. Make a graph of the population function and find out what the population will be ten years from now.



Solution: The population is growing at a rate of 15% each year. When something grows at a percent, this is a clue to use **exponential functions**.

Remember, the general form of an exponential function is $y = a(b)^x$, where a is the beginning value and b is the total growth rate. The beginning value is 20,000. Therefore, $a = 20,000$.

The population is keeping the original number of people and adding 15% more each year.

$$100\% + 15\% = 115\% = 1.15$$

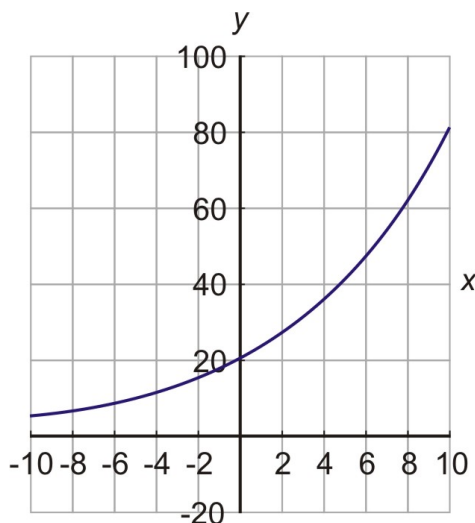
Therefore, the population is growing at a rate of 115% each year. Thus, $b = 1.15$.

The function to represent this situation is $y = 20,000 (1.15)^x$.

Now make a table of values and graph the function.

TABLE 8.9:

x	$y = 20 \cdot (1.15)^x$
-10	4.9
-5	9.9
0	20
5	40.2
10	80.9

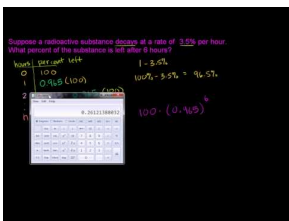


Notice that we used negative values of x in our table. Does it make sense to think of negative time? In this case $x = -5$ represents what the population was five years ago, so it can be useful information.

The question asked in the problem was “What will be the population of the town ten years from now?” To find the population exactly, we use $x = 10$ in the formula. We find $y = 20,000 \cdot (1.15)^{10} = 80,912$.

Practice

Sample explanations for some of the practice exercises below are available by viewing the following video. Note that there is not always a match between the number of the practice exercise in the video and the number of the practice exercise listed in the following exercise set. However, the practice exercise is the same in both. [CK-12 Basic Algebra: Word Problem Solving \(7:21\)](#)



MEDIA

Click image to the left for more content.

Apply the problem-solving techniques described in this section to solve the following problems.

- Half-life** Suppose a radioactive substance decays at a rate of 3.5% per hour. What percent of the substance is left after six hours?
- Population decrease** In 1990, a rural area had 1200 bird species. If species of birds are becoming extinct at the rate of 1.5% per decade (10 years), how many bird species will there be left in the year 2020?
- Growth** Nadia owns a chain of fast food restaurants that operated 200 stores in 1999. If the rate of increase is 8% annually, how many stores did the restaurant operate in 2007?
- Investment** Peter invests \$360 in an account that pays 7.25% compounded annually. What is the total amount in the account after 12 years?
- Solve the following problems.
- The population of a town in 2007 is 113,505 and is increasing at a rate of 1.2% per year. What will the population be in 2012?
- A set of bacteria begins with 20 and doubles every 2 hours. How many bacteria would be present 15 hours after the experiment began?

8. The cost of manufactured goods is rising at the rate of inflation, or at about 2.3%. Suppose an item costs \$12 today. How much will it cost five years from now due to inflation?

Solve the following application problems.

8. The cost of a new ATV (all-terrain vehicle) is \$7200. It depreciates at 18% per year.
- Draw the graph of the vehicle's value against time in years.
 - Find the formula that gives the value of the ATV in terms of time.
 - Find the value of the ATV when it is ten years old.
9. Michigan's population is declining at a rate of 0.5% per year. In 2004, the state had a population of 10,112,620.
- Write a function to express this situation.
 - If this rate continues, what will the population be in 2012?
 - When will the population of Michigan reach 9,900,000?
 - What was the population in the year 2000, according to this model?
10. A certain radioactive substance has a half-life of 27 years. An organism contains 35 grams of this substance on day zero.
- Draw the graph of the amount remaining. Use these values for x : $x = 0, 27, 54, 81, 108, 135$.
 - Find the function that describes the amount of this substance remaining after x days.
 - Find the amount of radioactive substance after 92 days.

Summary

This chapter begins by talking about exponential properties involving products and quotients. It also discusses zero and negative exponents, as well as fractional exponents. Next, scientific notation is covered, and evaluating scientific notation with a calculator is outlined in detail. Instruction is then given on exponential growth and decay, and geometric sequences and exponential functions are highlighted. Finally, the chapter concludes by giving examples of how to solve real-world problems.

Exponents and Exponential Functions Review

Define the following words.

- Exponent
- Geometric Sequence

Use the product properties to simplify the following expressions.

- $5 \cdot 5 \cdot 5 \cdot 5$
- $(3x^2y^3) \cdot (4xy^2)$
- $a^3 \cdot a^5 \cdot a^6$
- $(\gamma^3)^5$
- $(x \cdot x^3 \cdot x^5)^{10}$
- $(2a^3b^3)^2$

Use the quotient properties to simplify the following expressions.

9. $\frac{c^5}{c^3}$
10. $\frac{a^6}{a}$
11. $\frac{a^5b^4}{a^3b^2}$
12. $\frac{x^4y^5z^2}{x^3y^2z}$

Simplify the following expressions.

13. $\frac{6^5}{6^5}$
14. $\frac{7^2}{7^5}$
15. $\frac{7^3}{7^6}$
16. $\frac{2}{x^3}$
17. $\sqrt[4]{\alpha^3}$
18. $\left(a^{\frac{1}{3}}\right)^2$
19. $\left(\frac{x^2}{y^3}\right)^{\frac{1}{3}}$

Write the following in scientific notation.

20. 557,000
21. 600,000
22. 20
23. 0.04
24. 0.0417
25. 0.0000301
26. The distance from the Earth to the moon: 384,403 km
27. The distance from Earth to Jupiter: 483,780,000 miles
28. According to the CDC, the appropriate level of lead in drinking water should not exceed 15 parts per billion (EPA's Lead Copper Rule).

Write the following in standard notation.

29. 3.53×10^3
30. 89×10^5
31. 2.12×10^6
32. 5.4×10^1
33. 7.9×10^{-3}
34. 4.69×10^{-2}
35. 1.8×10^{-5}
36. 8.41×10^{-3}

Make a graph of the following exponential growth/decay functions.

37. $y = 3 \cdot (6)^x$
38. $y = 2 \cdot \left(\frac{1}{3}\right)^x$
39. Marissa was given 120 pieces of candy for Christmas. She ate one-fourth of them each day. Make a graph to find out in how many days Marissa will run out of candy.
40. Jacoby is given \$1500 for his graduation. He wants to invest it. The bank gives a 12% investment rate each year. Make a graph to find out how much money Jacoby will have in the bank after six years.

Determine what the common ratio is for the following geometric sequences and finish each sequence.

41. 1, 3, __, __, 81
42. __, 5, __, 125, 625
43. 7, __, 343, 2401, __
44. 5, 1.5, __, 0.135, __
45. The population of ants in Ben's room increases three times daily. He starts with only two ants. Make a geometric graph to determine how many ants will be in Ben's room at the end of a 30-day month if he does not take care of the problem.

Exponents and Exponential Functions Test

Simplify the following expressions.

1. $x^3 \cdot x^4 \cdot x^5$
2. $(a^3)^7$
3. $(y^2z^4)^7$
4. $\frac{a^3}{a^5}$
5. $\frac{x^3y^2}{x^6y^4}$
6. $\left(\frac{3x^8y^2}{9x^6y^5}\right)^3$
7. $\frac{3^4}{3^4}$
8. $\frac{2}{x^3}$
9. $\sqrt[3]{5^6}$

Complete the following story problems.

10. The intensity of a guitar amp is 0.00002. Write this in scientific notation.
11. Cole loves turkey hunting. He already has two after the first day of hunting season. If this number doubles each day, how many turkeys will Cole have after 11 days? Make a table for the geometric sequence.
12. The population of a town increases by 20% each year. It first started with 89 people. What will the population of the town be after 15 years?
13. A radioactive substance decays 2.5% every hour. What percent of the substance will be left after nine hours?
14. After an exterminator comes to a house to exterminate cockroaches, the bugs leave the house at a rate of 16% an hour. How long will it take 55 cockroaches to leave the house after the exterminator comes?

Texas Instruments Resources

In the CK-12 Texas Instruments Algebra I FlexBook, there are graphing calculator activities designed to supplement the objectives for some of the lessons in this chapter. See <http://www.ck12.org/flexr/chapter/9618>.

CHAPTER 9 Polynomials and Factoring

Chapter Outline

- 9.1 POLYNOMIALS IN STANDARD FORM
- 9.2 ADDITION AND SUBTRACTION OF POLYNOMIALS
- 9.3 MULTIPLICATION OF MONOMIALS BY POLYNOMIALS
- 9.4 MULTIPLICATION OF POLYNOMIALS BY BINOMIALS
- 9.5 SPECIAL PRODUCTS OF POLYNOMIALS
- 9.6 MONOMIAL FACTORS OF POLYNOMIALS
- 9.7 ZERO PRODUCT PRINCIPLE
- 9.8 FACTORIZATION OF QUADRATIC EXPRESSIONS
- 9.9 FACTOR POLYNOMIALS USING SPECIAL PRODUCTS
- 9.10 FACTORING BY GROUPING
- 9.11 FACTORING COMPLETELY
- 9.12 PROBABILITY OF COMPOUND EVENTS

Introduction

This chapter will present a new type of function: the **polynomial**. Chances are, polynomials will be new to you. However, polynomials are used in many careers and real life situations - to model the population of a city over a century, to predict the price of gasoline, and to predict the volume of a solid. This chapter will also present basic **factoring** - breaking a polynomial into its linear factors. This will help you solve many quadratic equations found in Chapter 10.



9.1 Polynomials in Standard Form

Here you'll learn how to classify and simplify polynomials, as well as how to rewrite polynomials in standard form.

Suppose that two square plots of land both have a side length of x feet. For one of the plots of land, the length is increased by 2 feet, and the width is decreased by 3 feet. For the other plot of land, the length is increased by 3 feet, and the width is decreased by 4 feet. What is the difference in the resulting areas of the plots? Could you rewrite the expression representing the difference in standard form? In this Concept, you'll learn how to classify, simplify, and rewrite polynomials in standard form so that you can produce expressions such as the one asked for here.

Guidance

So far we have discussed linear functions and exponential functions. This Concept introduces polynomial functions.

Definition: A **polynomial** is an expression made with constants, variables, and *positive integer* exponents of the variables.

An example of a polynomial is: $4x^3 + 2x^2 - 3x + 1$. There are four terms: $4x^3$, $2x^2$, $3x$, and 1. The numbers appearing in each term in front of the variable are called the **coefficients**. 4, 2, and 3 are coefficients because those numbers are in front of a variable. The number appearing all by itself without a variable is called a **constant**. 1 is the constant because it is by itself.

Example A

Identify the following expressions as polynomials or non-polynomials.

(a) $5x^2 - 2x$

(b) $3x^2 - 2x^{-2}$

(c) $x\sqrt{x} - 1$

(d) $\frac{5}{x^3+1}$

(e) $4x^{\frac{1}{3}}$

(f) $4xy^2 - 2x^2y - 3 + y^3 - 3x^3$

Solution:

(a) $5x^2 - 2x$ This *is* a polynomial.

(b) $3x^2 - 2x^{-2}$ This is *not* a polynomial because it has a negative exponent.

(c) $x\sqrt{x} - 1$ This is *not* a polynomial because it has a square root.

(d) $\frac{5}{x^3+1}$ This is *not* a polynomial because the power of x appears in the denominator.

(e) $4x^{\frac{1}{3}}$ This is *not* a polynomial because it has a fractional exponent.

(f) $4xy^2 - 2x^y - 3 + y^3 - 3x^3$ This *is* a polynomial.

Classifying Polynomials by Degree

The **degree** of a polynomial is the largest exponent of a single term.

- $4x^3$ has a degree of 3 and is called a **cubic term** or 3^{rd} **order term**.

- $2x^2$ has a degree of 2 and is called a **quadratic term** or 2^{nd} **order term**.
- $-3x$ has a degree of 1 and is called a **linear term** or 1^{st} **order term**.
- 1 has a degree of 0 because there is no variable.

Polynomials can have more than one variable. Here is another example of a polynomial: $t^4 - 6s^3t^2 - 12st + 4s^4 - 5$. This is a polynomial because all exponents on the variables are positive integers. This polynomial has five terms.

Note: *The degree of a term is the sum of the powers on each variable in the term.*

t^4 has a degree of 4, so it's a 4^{th} order term.

$-6s^3t^2$ has a degree of 5, so it's a 5^{th} order term.

$-12st$ has a degree of 2, so it's a 2^{nd} order term.

$4s^4$ has a degree of 4, so it's a 4^{th} order term.

-5 is a constant, so its degree is 0.

Since the highest degree of a term in this polynomial is 5, this is a polynomial of degree 5 or a 5^{th} order polynomial.

Example B

Identify the coefficient on each term, the degree of each term, and the degree of the polynomial.

$$x^4 - 3x^3y^2 + 8x - 12$$

Solution: The coefficients of each term in order are 1, -3 , and 8, and the constant is -12 .

The degrees of each term are 4, 5, 1, and 0. Therefore, the degree of the polynomial is 5.

A **monomial** is a one-termed polynomial. It can be a constant, a variable, or a variable with a coefficient. Examples of monomials are the following: b^2 ; 6; $-2ab^2$; $\frac{1}{4}x^2$

Rewriting Polynomials in Standard Form

Often, we arrange the terms in a polynomial in **standard form** in which the term with the highest degree is first and is followed by the other terms in order of decreasing powers. The first term of a polynomial in this form is called the *leading term*, and the coefficient in this term is called the *leading coefficient*.

Example C

Rearrange the terms in the following polynomials so that they are in standard form. Indicate the leading term and leading coefficient of each polynomial.

(a) $7 - 3x^3 + 4x$

(b) $ab - a^3 + 2b$

Solution:

(a) $7 - 3x^3 + 4x$ is rearranged as $-3x^3 + 4x + 7$. The leading term is $-3x^3$ and the leading coefficient is -3 .

(b) $ab - a^3 + 2b$ is rearranged as $-a^3 + ab + 2b$. The leading term is $-a^3$ and the leading coefficient is -1 .

Simplifying Polynomials

A polynomial is simplified if it has no terms that are alike. **Like terms** are terms in the polynomial that have the same variable(s) with the same exponents, but they can have different coefficients.

$2x^2y$ and $5x^2y$ are like terms.

$6x^2y$ and $6xy^2$ are not like terms.

If we have a polynomial that has like terms, we simplify by combining them.

$$x^2 + \frac{6xy}{\nearrow} - \frac{4xy}{\nwarrow} + y^2$$

Like terms

This polynomial is simplified by combining the like terms: $6xy - 4xy = 2xy$. We write the simplified polynomial as $x^2 + 2xy + y^2$.

Example D

Simplify by collecting and combining like terms.

$$a^3b^3 - 5ab^4 + 2a^3b - a^3b^3 + 3ab^4 - a^2b$$

Solution: Use the Commutative Property of Addition to reorganize like terms and then simplify.

$$\begin{aligned} &= (a^3b^3 - a^3b^3) + (-5ab^4 + 3ab^4) + 2a^3b - a^2b \\ &= 0 - 2ab^4 + 2a^3b - a^2b \\ &= -2ab^4 + 2a^3b - a^2b \end{aligned}$$

Video Review



MEDIA

Click image to the left for more content.



MEDIA

Click image to the left for more content.

Guided Practice

Simplify and rewrite the following polynomial in standard form. State the degree of the polynomial.

$$16x^2y^3 - 3xy^5 - 2x^3y^2 + 2xy - 7x^2y^3 + 2x^3y^2$$

Solution:

Start by simplifying by combining like terms:

$$16x^2y^3 - 3xy^5 - 2x^3y^2 + 2xy - 7x^2y^3 + 2x^3y^2 = (16x^2y^3 - 7x^2y^3) - 3xy^5 + (-2x^3y^2 + 2x^3y^2) + 2xy = 9x^2y^3 - 3xy^5 + 2xy$$

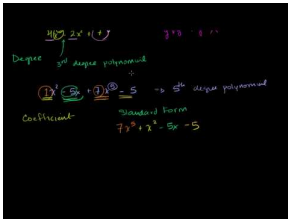
In order to rewrite in standard form, we need to determine the degree of each term. The first term has a degree of $2 + 3 = 5$, the second term has a degree of $1 + 5 = 6$, and the last term has a degree of $1 + 1 = 2$. We will rewrite the terms in order from largest degree to smallest degree:

$$-3xy^5 + 9x^2y^3 + 2xy$$

The degree of a polynomial is the largest degree of all the terms. In this case that is 6.

Practice

Sample explanations for some of the practice exercises below are available by viewing the following video. Note that there is not always a match between the number of the practice exercise in the video and the number of the practice exercise listed in the following exercise set. However, the practice exercise is the same in both. [CK-12 Basic Algebra: Addition and Subtraction of Polynomials](#) (15:59)



MEDIA

Click image to the left for more content.

Define the following key terms.

1. Polynomial
2. Monomial
3. Degree
4. Leading coefficient

For each of the following expressions, decide whether it is a polynomial. Explain your answer.

5. $x^2 + 3x^{\frac{1}{2}}$
6. $\frac{1}{3}x^2y - 9y^2$
7. $3x^{-3}$
8. $\frac{2}{3}t^2 - \frac{1}{t^2}$

Express each polynomial in standard form. Give the degree of each polynomial.

9. $3 - 2x$
10. $8x^4 - x + 5x^2 + 11x^4 - 10$
11. $8 - 4x + 3x^3$
12. $-16 + 5f^8 - 7f^3$
13. $-5 + 2x - 5x^2 + 8x^3$
14. $x^2 - 9x^4 + 12$

Mixed Review

15. Solve by graphing $\begin{cases} y = \frac{1}{3}x - 4 \\ y = -4x + 10 \end{cases}$.
16. Solve for u : $12 = -\frac{4}{u}$.
17. Graph $y = |x - 4| + 3$ on a coordinate plane.
- State its domain and range.
 - How has this graph been shifted from the parent function $f(x) = |x|$?
18. Two dice are rolled. The sum of the values are recorded.
- Define the sample space.
 - What is the probability the sum of the dice is nine?
19. Consider the equation $y = 6500(0.8)^x$.
- Sketch the graph of this function.
 - Is this exponential growth or decay?
 - What is the initial value?
 - What is its domain and range?
 - What is the value when $x = 9.5$?
20. Write an equation for the line that is perpendicular to $y = -5$ and contains the ordered pair $(6, -5)$.

9.2 Addition and Subtraction of Polynomials

Here you'll learn how to find the sum and the difference of two polynomials.

Suppose that two cars are having a race. The distance traveled by one car after t seconds is $10t^2 + 50t$ meters, while the distance traveled by the other car after t seconds is $15t^2 + 40t$ meters. How far would the two cars be apart after t seconds? What would you have to do to find the answer to this question? In this Concept, you'll learn how to add and subtract polynomials so that you can solve problems like this one.

Guidance

To add or subtract polynomials, you have to group the like terms together and combine them to simplify.

Example A

Add and simplify $3x^2 - 4x + 7$ and $2x^3 - 4x^2 - 6x + 5$.

Solution: Add $3x^2 - 4x + 7$ and $2x^3 - 4x^2 - 6x + 5$.

$$\begin{aligned}(3x^2 - 4x + 7) + (2x^3 - 4x^2 - 6x + 5) &= 2x^3 + (3x^2 - 4x^2) + (-4x - 6x) + (7 + 5) \\ &= 2x^3 - x^2 - 10x + 12\end{aligned}$$

Example B

Subtract $5b^2 - 2a^2$ from $4a^2 - 8ab - 9b^2$.

Solution:

$$\begin{aligned}(4a^2 - 8ab - 9b^2) - (5b^2 - 2a^2) &= [(4a^2 - (-2a^2))] + (-9b^2 - 5b^2) - 8ab \\ &= 6a^2 - 14b^2 - 8ab\end{aligned}$$

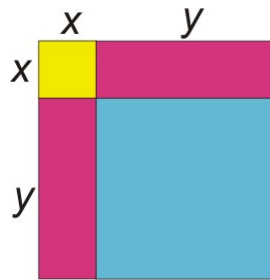
Solving Real-World Problems Using Addition or Subtraction of Polynomials

Polynomials are useful for finding the areas of geometric objects. In the following examples, you will see this usefulness in action.

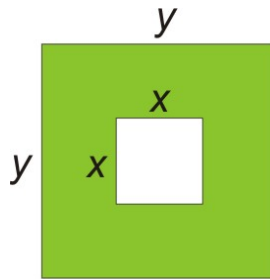
Example C

Write a polynomial that represents the area of each figure shown.

(a)



(b)



Solution: The blue square has the following area: $y \cdot y = y^2$.

The yellow square has the following area: $x \cdot x = x^2$.

The pink rectangles each have the following area: $x \cdot y = xy$.

$$\begin{aligned} \text{Test area} &= y^2 + x^2 + xy + xy \\ &= y^2 + x^2 + 2xy \end{aligned}$$

To find the area of the green region we find the area of the big square and subtract the area of the little square.

The big square has an area of $y \cdot y = y^2$.

The little square has an area of $x \cdot x = x^2$.

Area of the green region $= y^2 - x^2$

Video Review



MEDIA

Click image to the left for more content.



MEDIA

Click image to the left for more content.

Guided Practice

Subtract $4t^2 + 7t^3 - 3t - 5$ from $6t + 3 - 5t^3 + 9t^2$.

Solution:

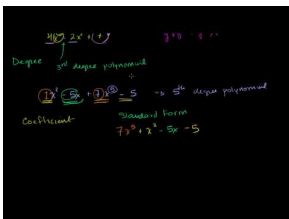
When subtracting polynomials, we have to remember to subtract each term. If the term is already negative, subtracting a negative term is the same thing as adding:

$$\begin{aligned} 6t + 3 - 5t^3 + 9t^2 - (4t^2 + 7t^3 - 3t - 5) &= \\ 6t + 3 - 5t^3 + 9t^2 - (4t^2) - (7t^3) - (-3t) - (-5) &= \\ 6t + 3 - 5t^3 + 9t^2 - 4t^2 - 7t^3 + 3t + 5 &= \\ (6t + 3t) + (3 + 5) + (-5t^3 - 7t^3) + (9t^2 - 4t^2) &= \\ 9t + 8 - 12t^3 + 5t^2 &= \\ -12t^3 + 5t^2 + 9t + 8 & \end{aligned}$$

The final answer is in standard form.

Practice

Sample explanations for some of the practice exercises below are available by viewing the following video. Note that there is not always a match between the number of the practice exercise in the video and the number of the practice exercise listed in the following exercise set. However, the practice exercise is the same in both. [CK-12 Basic Algebra: Addition and Subtraction of Polynomials](#) (15:59)



MEDIA

Click image to the left for more content.

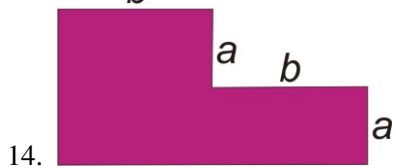
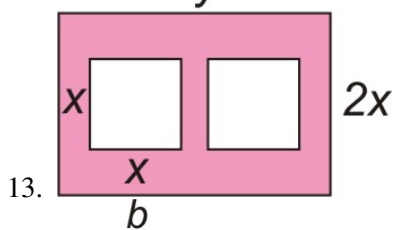
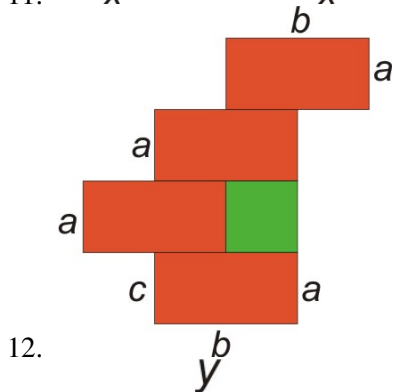
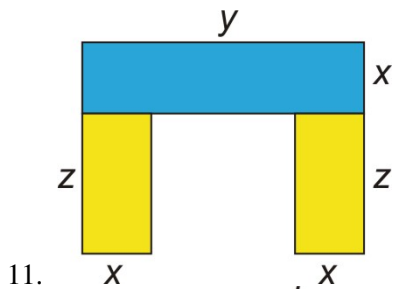
Add and simplify.

- $(x + 8) + (-3x - 5)$
- $(8r^4 - 6r^2 - 3r + 9) + (3r^3 + 5r^2 + 12r - 9)$
- $(-2x^2 + 4x - 12) + (7x + x^2)$
- $(2a^2b - 2a + 9) + (5a^2b - 4b + 5)$
- $(6.9a^2 - 2.3b^2 + 2ab) + (3.1a - 2.5b^2 + b)$

Subtract and simplify.

- $(-t + 15t^2) - (5t^2 + 2t - 9)$
- $(-y^2 + 4y - 5) - (5y^2 + 2y + 7)$
- $(-h^7 + 2h^5 + 13h^3 + 4h^2 - h - 1) - (-3h^5 + 20h^3 - 3h^2 + 8h - 4)$
- $(-5m^2 - m) - (3m^2 + 4m - 5)$
- $(2a^2b - 3ab^2 + 5a^2b^2) - (2a^2b^2 + 4a^2b - 5b^2)$

Find the area of the following figures.



9.3 Multiplication of Monomials by Polynomials

Here you'll learn how to multiply monomials by polynomials.

Did you know that the formula for the volume of a pyramid is $V = \frac{1}{3}Bh$, where B is the area of the base of the pyramid and h is the pyramid's height? What if the area of the base of a pyramid were $x^2 + 6x + 8$ and the height were $9x$? What would the volume of the pyramid be? In this Concept, you'll learn how to multiply a polynomial by a monomial so that you can answer questions such as this.

Guidance

When multiplying polynomials together, we must remember the exponent rules we learned in previous Concepts, such as the Product Rule. This rule says that if we multiply expressions that have the same base, we just add the exponents and keep the base unchanged. If the expressions we are multiplying have coefficients and more than one variable, we multiply the coefficients just as we would any numbers. We also apply the product rule on each variable separately.

Example A

Multiply $(2x^2y^3) \times (3x^2y)$.

Solution:

$$(2x^2y^3) \times (3x^2y) = (2 \cdot 3) \times (x^2 \cdot x^2) \times (y^3 \cdot y) = 6x^4y^4$$

Multiplying a Polynomial by a Monomial

This is the simplest of polynomial multiplications. Problems are like the one above.

Example B

Multiply the following monomials.

(a) $(2x^2)(5x^3)$

(c) $(3xy^5)(-6x^4y^2)$

(d) $(-12a^2b^3c^4)(-3a^2b^2)$

Solutions:

(a) $(2x^2)(5x^3) = (2 \cdot 5) \cdot (x^2 \cdot x^3) = 10x^{2+3} = 10x^5$

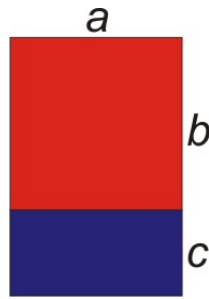
(c) $(3xy^5)(-6x^4y^2) = -18x^{1+4}y^{5+2} = -18x^5y^7$

(d) $(-12a^2b^3c^4)(-3a^2b^2) = 36a^{2+2}b^{3+2}c^4 = 36a^4b^5c^4$

To multiply monomials, we use the **Distributive Property**.

Distributive Property: For any expressions a , b , and c , $a(b + c) = ab + ac$.

This property can be used for numbers as well as variables. This property is best illustrated by an area problem. We can find the area of the big rectangle in two ways.



One way is to use the formula for the area of a rectangle.

$$\begin{aligned} \text{Area of the big rectangle} &= \text{Length} \times \text{Width} \\ \text{Length} &= a, \text{ Width} = b + c \\ \text{Area} &= a \times (b + c) \end{aligned}$$

The area of the big rectangle can also be found by adding the areas of the two smaller rectangles.

$$\begin{aligned} \text{Area of red rectangle} &= ab \\ \text{Area of blue rectangle} &= ac \\ \text{Area of big rectangle} &= ab + ac \end{aligned}$$

This means that $a(b + c) = ab + ac$.

In general, if we have a number or variable in front of a parenthesis, this means that each term in the parenthesis is multiplied by the expression in front of the parenthesis.

$a(b + c + d + e + f + \dots) = ab + ac + ad + ae + af + \dots$ The “...” means “and so on.”

Example C

Multiply $2x^3y(-3x^4y^2 + 2x^3y - 10x^2 + 7x + 9)$.

Solution:

$$\begin{aligned} &2x^3y(-3x^4y^2 + 2x^3y - 10x^2 + 7x + 9) \\ &= (2x^3y)(-3x^4y^2) + (2x^3y)(2x^3y) + (2x^3y)(-10x^2) + (2x^3y)(7x) + (2x^3y)(9) \\ &= -6x^7y^3 + 4x^6y^2 - 20x^5y + 14x^4y + 18x^3y \end{aligned}$$

Video Review



MEDIA

Click image to the left for more content.


MEDIA

Click image to the left for more content.

Guided Practice

Multiply $-2a^2b^4(3ab^2 + 7a^3b - 9a + 3)$.

Solution:

Multiply the monomial by each term inside the parenthesis:

$$\begin{aligned} & -2a^2b^4(3ab^2 + 7a^3b - 9a + 3) \\ & = (-2a^2b^4)(3ab^2) + (-2a^2b^4)(7a^3b) + (-2a^2b^4)(-9a) + (-2a^2b^4)(3) \\ & = -6a^3b^6 - 14a^5b^5 + 18a^5b^4 - 6a^2b^4 \end{aligned}$$

Practice

Multiply the following monomials.

- $(2x)(-7x)$
- $4(-6a)$
- $(-5a^2b)(-12a^3b^3)$
- $(-5x)(5y)$
- $y(xy^4)$
- $(3xy^2z^2)(15x^2yz^3)$

Multiply and simplify.

- $x^8(xy^3 + 3x)$
- $2x(4x - 5)$
- $6ab(-10a^2b^3 + c^5)$
- $9x^3(3x^2 - 2x + 7)$
- $-3a^2b(9a^2 - 4b^2)$

Mixed Review

- Give an example of a fourth degree trinomial in the variable n .
- Find the next four terms of the sequence $1, \frac{3}{2}, \frac{9}{4}, \frac{28}{8}, \dots$
- Reece reads three books per week.
 - Make a table of values for weeks zero through six.
 - Fit a model to this data.
 - When will Reece have read 63 books?
- Write 0.062% as a decimal.
- Evaluate $ab(a + \frac{b}{4})$ when $a = 4$ and $b = -3$.
- Solve for s : $3s(3 + 6s) + 6(5 + 3s) = 21s$.

9.4 Multiplication of Polynomials by Binomials

Here you'll learn how to multiply a polynomial by a binomial.

Suppose a factory needs to increase the number of units it outputs. Currently it has w workers, and on average, each worker outputs u units. If it increases the number of workers by 100 and makes changes to its processes so that each worker outputs 20 more units on average, how many total units will it output? What would you have to do to find the answer? After completing this Concept, you'll be able to multiply a polynomial by a binomial so that you can perform the operation required here.

Guidance

A binomial is a polynomial with two terms. The Distributive Property also applies for multiplying binomials. Let's think of the first parentheses as one term. The Distributive Property says that the term in front of the parentheses multiplies with each term inside the parentheses separately. Then, we add the results of the products.

$$(a + b)(c + d) = (a + b) \cdot c + (a + b) \cdot d \text{ Let's rewrite this answer as } c \cdot (a + b) + d \cdot (a + b).$$

We see that we can apply the Distributive Property on each of the parentheses in turn.

$$c \cdot (a + b) + d \cdot (a + b) = c \cdot a + c \cdot b + d \cdot a + d \cdot b \text{ (or } ca + cb + da + db)$$

What you should notice is that when multiplying any two polynomials, **every term in one polynomial is multiplied by every term in the other polynomial.**

Example A

Multiply and simplify $(2x + 1)(x + 3)$.

Solution: We must multiply each term in the first polynomial with each term in the second polynomial. First, multiply the first term in the first parentheses by all the terms in the second parentheses.

$$(2x + 1)(x + 3) = (2x)(x) + (2x)(3) + \dots$$

Now we multiply the second term in the first parentheses by all terms in the second parentheses and add them to the previous terms.

$$(2x + 1)(x + 3) = (2x)(x) + (2x)(3) + (1)(x) + (1)(3)$$

Now we can simplify.

$$\begin{aligned} (2x)(x) + (2x)(3) + (1)(x) + (1)(3) &= 2x^2 + 6x + x + 3 \\ &= 2x^2 + 7x + 3 \end{aligned}$$

Example B

Multiply and simplify $(4x - 5)(x^2 + x - 20)$.

Solution:

Multiply the first term in the binomial by each term in the polynomial, and then multiply the second term in the monomial by each term in the polynomial:

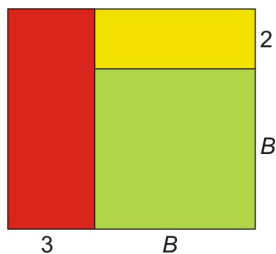
$$\begin{aligned}(4x)(x^2) + (4x)(x) + (4x)(-20) + (-5)(x^2) + (-5)(x) + (-5)(-20) &= 4x^3 + 4x^2 - 80x - 5x^2 - 5x + 100 \\ &= 4x^3 - x^2 - 85x + 100\end{aligned}$$

Solving Real-World Problems Using Multiplication of Polynomials

We can use multiplication to find the area and volume of geometric shapes. Look at these examples.

Example C

Find the area of the following figure.



Solution: We use the formula for the area of a rectangle: Area = length · width. For the big rectangle:

$$\text{Length} = B + 3, \text{ Width} = B + 2$$

$$\begin{aligned}\text{Area} &= (B + 3)(B + 2) \\ &= B^2 + 2B + 3B + 6 \\ &= B^2 + 5B + 6\end{aligned}$$

Video Review

MEDIA

Click image to the left for more content.

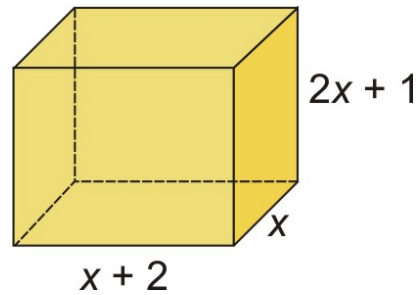


MEDIA

Click image to the left for more content.

Guided Practice

Find the volume of the following figure.

**Solution:**

The volume of this shape = (area of the base) · (height).

$$\begin{aligned}\text{Area of the base} &= x(x + 2) \\ &= x^2 + 2x\end{aligned}$$

$$\text{Volume} = (\text{area of base}) \times \text{height}$$


$$\text{Volume} = (x^2 + 2x)(2x + 1)$$

Now, multiply the two binomials together.

$$\begin{aligned}\text{Volume} &= (x^2 + 2x)(2x + 1) \\ &= x^2 \cdot 2x + x^2 \cdot 1 + 2x \cdot 2x + 2x \cdot 1 \\ &= 2x^3 + x^2 + 2x^2 + 2x \\ &= 2x^3 + 3x^2 + 2x\end{aligned}$$

Practice

Sample explanations for some of the practice exercises below are available by viewing the following video. Note that there is not always a match between the number of the practice exercise in the video and the number of the practice exercise listed in the following exercise set. However, the practice exercise is the same in both. [CK-12 Basic Algebra: Multiplication of Polynomials](#) (9:49)

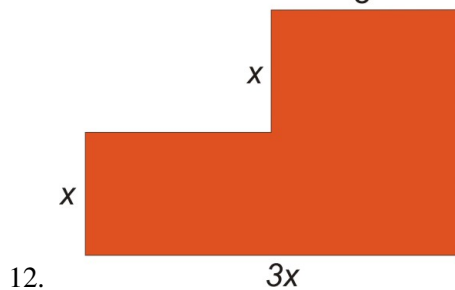
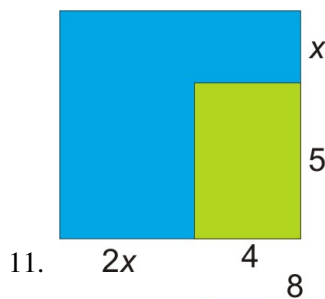
**MEDIA**

Click image to the left for more content.

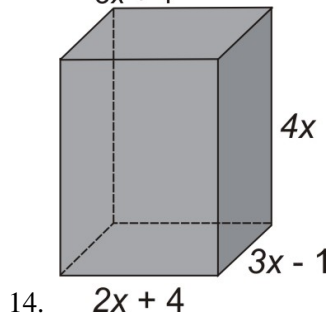
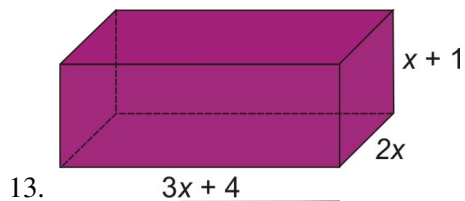
Multiply and simplify.

1. $(x-2)(x+3)$
2. $(a+2)(2a)(a-3)$
3. $(-4xy)(2x^4yz^3 - y^4z^9)$
4. $(x-3)(x+2)$
5. $(a^2+2)(3a^2-4)$
6. $(7x-2)(9x-5)$
7. $(2x-1)(2x^2-x+3)$
8. $(3x+2)(9x^2-6x+4)$
9. $(a^2+2a-3)(a^2-3a+4)$
10. $(3m+1)(m-4)(m+5)$

Find the areas of the following figures.



Find the volumes of the following figures.



Mixed Review

15. Simplify $5x(3x+5) + 11(-7-x)$.

16. Cal High School has grades nine through twelve. Of the school's student population, $\frac{1}{4}$ are freshmen, $\frac{2}{5}$ are sophomores, $\frac{1}{6}$ are juniors, and 130 are seniors. To the nearest whole person, how many students are in the sophomore class?
17. Kerrie is working at a toy store and must organize 12 bears on a shelf. In how many ways can this be done?
18. Find the slope between $(\frac{3}{4}, 1)$ and $(\frac{3}{4}, -16)$.
19. If 1 lb = 454 grams, how many kilograms does a 260-pound person weigh?
20. Solve for v : $|16 - v| = 3$.
21. Is $y = x^4 + 3x^2 + 2$ a function? Use the definition of a function to explain.

9.5 Special Products of Polynomials

Here you'll learn how to find special products of two binomials.

Suppose that the entrance to a dog house is a square, with a height of x inches and a width of x inches. Because your puppy has grown, you need to increase both the height and the width by 4 inches. What would be the area of the resulting entrance to the dog house? If the height had been increased by 4 inches while the width had been decreased by 4 inches, what would the area have been then? In this Concept, you'll learn about special products of polynomials so that you'll know what to do in situations like these.

Guidance

When we multiply two linear (degree of 1) binomials, we create a quadratic (degree of 2) polynomial with four terms. The middle terms are like terms so we can combine them and simplify to get a quadratic or 2nd degree **trinomial** (polynomial with three terms). In this Concept, we will talk about some special products of binomials.

Finding the Square of a Binomial

A special binomial product is the **square of a binomial**. Consider the following multiplication: $(x + 4)(x + 4)$. We are multiplying the same expression by itself, which means that we are squaring the expression. This means that:

$$\begin{aligned}(x + 4)(x + 4) &= (x + 4)^2 \\ (x + 4)(x + 4) &= x^2 + 4x + 4x + 16 = x^2 + 8x + 16\end{aligned}$$

This follows the general pattern of the following rule.

Square of a Binomial: $(a + b)^2 = a^2 + 2ab + b^2$, and $(a - b)^2 = a^2 - 2ab + b^2$

Stay aware of the common mistake $(a + b)^2 = a^2 + b^2$. To see why $(a + b)^2 \neq a^2 + b^2$, try substituting numbers for a and b into the equation (for example, $a = 4$ and $b = 3$), and you will see that it is *not* a true statement. The middle term, $2ab$, is needed to make the equation work.

Example A

Simplify by multiplying: $(x + 10)^2$.

Solution: Use the square of a binomial formula, substituting $a = x$ and $b = 10$

$$\begin{aligned}(a + b)^2 &= a^2 + 2ab + b^2 \\ (x + 10)^2 &= (x)^2 + 2(x)(10) + (10)^2 = x^2 + 20x + 100\end{aligned}$$

Finding the Product of Binomials Using Sum and Difference Patterns

Another special binomial product is the product of a sum and a difference of terms. For example, let's multiply the following binomials.

$$\begin{aligned}(x + 4)(x - 4) &= x^2 - 4x + 4x - 16 \\ &= x^2 - 16\end{aligned}$$

Notice that the middle terms are opposites of each other, so they cancel out when we collect like terms. This always happens when we multiply a sum and difference of the same terms.

$$\begin{aligned}(a+b)(a-b) &= a^2 - ab + ab - b^2 \\ &= a^2 - b^2\end{aligned}$$

When multiplying a sum and difference of the same two terms, the middle terms cancel out. We get the square of the first term minus the square of the second term. You should remember this formula.

Sum and Difference Formula: $(a+b)(a-b) = a^2 - b^2$

Example B

Multiply the following binomials and simplify.

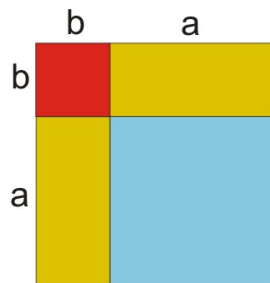
$$(5x+9)(5x-9)$$

Solution: Use the above formula, with $a = 5x$ and $b = 9$. Multiply.

$$(5x+9)(5x-9) = (5x)^2 - (9)^2 = 25x^2 - 81$$

Solving Real-World Problems Using Special Products of Polynomials

Let's now see how special products of polynomials apply to geometry problems and to mental arithmetic. Look at the following example.



Example C

Find the area of the square.

Solution: *The area of the square = side \times side.*

$$\begin{aligned}\text{Area} &= (a+b)(a+b) \\ &= a^2 + 2ab + b^2\end{aligned}$$

Notice that this gives a visual explanation of the square of binomials product.

Area of big square : $(a+b)^2 = \text{Area of blue square} = a^2 + 2(\text{area of yellow}) = 2ab + \text{area of red square} = b^2$

The next example shows how to use the special products in doing fast mental calculations.

Example D

Find the products of the following numbers without using a calculator.

(a) 43×57

(b) 45^2

Solution: The key to these mental “tricks” is to rewrite each number as a sum or difference of numbers you know how to square easily.

(a) Rewrite $43 = (50 - 7)$ and $57 = (50 + 7)$.

Then $43 \times 57 = (50 - 7)(50 + 7) = (50)^2 - (7)^2 = 2500 - 49 = 2,451$.

(b) $45^2 = (40 + 5)^2 = (40)^2 + 2(40)(5) + (5)^2 = 1600 + 400 + 25 = 2,025$

Video Review**MEDIA**

Click image to the left for more content.

**MEDIA**

Click image to the left for more content.

Guided Practice

Multiply $(2x + 3y)(2x - 3y)$.

Solution:

In order to get the hang of the patterns involved in *special products*, apply the distributive property to see what will happen:

$$\begin{aligned} (2x + 3y)(2x - 3y) &= \\ 2x(2x - 3y) + 3y(2x - 3y) &= \\ 2x(2x) + 2x(-3y) + 3y(2x) + 3y(-3y) &= \\ 4x^2 - 6xy + 6xy - 9y^2 &= \\ 4x^2 - 9y^2 & \end{aligned}$$

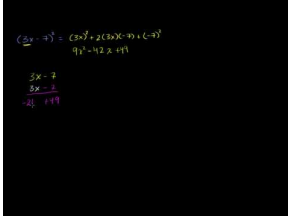
Notice how the two **middle terms** canceled each other out. This always happens, which is where we get the sum and difference product. Compare the answer above to that from using the sum and difference product:

$$(a + b)(a - b) = a^2 - b^2 \Rightarrow (2x + 3y)(2x - 3y) = (2x)^2 - (3y)^2 = 2^2x^2 - 3^2y^2 = 4x^2 - 9y^2$$

The two answers are the same. You can use the sum and difference product as a shortcut, so you don't always have to go through the whole process of multiplying out using the distributive property.

Practice

Sample explanations for some of the practice exercises below are available by viewing the following video. Note that there is not always a match between the number of the practice exercise in the video and the number of the practice exercise listed in the following exercise set. However, the practice exercise is the same in both. [CK-12 Basic Algebra: Special Products of Binomials \(10:36\)](#)



MEDIA

Click image to the left for more content.

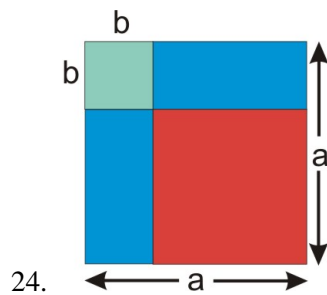
Use the special product for squaring binomials to multiply these expressions.

1. $(x+9)^2$
2. $(x-1)^2$
3. $(2y+6)^2$
4. $(3x-7)^2$
5. $(7c+8)^2$
6. $(9a^2+6)^2$
7. $(b^2-1)^2$
8. $(m^3+4)^2$
9. $(\frac{1}{4}t+2)^2$
10. $(6k-3)^2$
11. $(a^3-7)^2$
12. $(4x^2+y^2)^2$
13. $(8x-3)^2$

Use the special product of a sum and difference to multiply these expressions.

14. $(2x-1)(2x+1)$
15. $(2x-3)(2x+3)$
16. $(4+6x)(4-6x)$
17. $(6+2r)(6-2r)$
18. $(-2t+7)(2t+7)$
19. $(8z-8)(8z+8)$
20. $(3x^2+2)(3x^2-2)$
21. $(x-12)(x+12)$
22. $(5a-2b)(5a+2b)$
23. $(ab-1)(ab+1)$

Find the area of the orange square in the following figure. It is the lower right shaded box.



Multiply the following numbers using the special products.

25. 45×55

26. 97×83

27. 19^2

28. 56^2

29. 876×824

30. 1002×998

31. 36×44

9.6 Monomial Factors of Polynomials

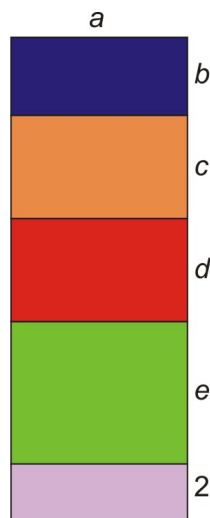
Here you'll learn how to identify the greatest common factor for the terms in a polynomial so that you can simplify by factoring.

Suppose that the height of a golf ball above the ground is represented by the expression $-2x^2 + 20x$, where x is the horizontal displacement of the ball. What is the greatest common factor of the terms in this expression? Could you use the greatest common factor to factor the expression? In this Concept, you'll learn how to find monomial factors of polynomials like the one representing the height of the golf ball in this example.

Guidance

We have been multiplying polynomials by using the Distributive Property, where all the terms in one polynomial must be multiplied by all terms in the other polynomial. In this Concept, you will start learning how to do this process using a different method called **factoring**.

Factoring: Take the factors that are common to all the terms in a polynomial. Then multiply the common factors by a parenthetical expression containing all the terms that are left over when you divide out the common factors.



Let's look at the areas of the rectangles again: $Area = length \times width$. The total area of the figure on the right can be found in two ways.

Method 1: Find the areas of all the small rectangles and add them.

$$\text{Blue rectangle} = ab$$

$$\text{Orange rectangle} = ac$$

$$\text{Red rectangle} = ad$$

$$\text{Green rectangle} = ae$$

$$\text{Purple rectangle} = 2a$$

$$\text{Total area} = ab + ac + ad + ae + 2a$$

Method 2: Find the area of the big rectangle all at once.

$$\text{Length} = a$$

$$\text{Width} = b + c + d + e + 2$$

$$\text{Area} = a(b + c + d + e + 2)$$

The answers are the same no matter which method you use:

$$ab + ac + ad + ae + 2a = a(b + c + d + e + 2)$$

Finding the Greatest Common Monomial Factor

Once we get a polynomial in factored form, it is easier to solve the polynomial equation. But first, we need to learn how to factor. Factoring can take several steps because we want to factor completely until we cannot factor any more.

A **common factor** can be a number, a variable, or a combination of numbers and variables that appear in **every term** of the polynomial.

When a common factor is factored from a polynomial, you divide each term by the common factor. What is left over remains in parentheses.

Example A

Factor:

1. $15x - 25$
2. $3a + 9b + 6$

Solution:

1. We see that the factor of 5 divides evenly from all terms.

$$15x - 25 = 5(3x - 5)$$

2. We see that the factor of 3 divides evenly from all terms.

$$3a + 9b + 6 = 3(a + 3b + 2)$$

Now we will use examples where different powers can be factored and there is more than one common factor.

Example B

Find the greatest common factor.

$$a^3 - 3a^2 + 4a$$

Solution:

Notice that the factor a appears in all terms of $a^3 - 3a^2 + 4a$ but each term has a different power of a . The common factor is the lowest power that appears in the expression. In this case the factor is a .

Let's rewrite: $a^3 - 3a^2 + 4a = a(a^2) + a(-3a) + a(4)$

Factor a to get $a(a^2 - 3a + 4)$.

Example C

Find the greatest common factor.

$$5x^3y - 15x^2y^2 + 25xy^3$$

Solution:

The common factor is $5xy$.

When we factor $5xy$, we obtain $5xy(x^2 - 3xy + 5y^2)$.

Video Review**MEDIA**

Click image to the left for more content.

**MEDIA**

Click image to the left for more content.

Guided Practice

Find the greatest common factor.

$$16x^2y^3z^2 + 4x^3yz + 8x^2y^4z^5$$

Solution:

First, look at the coefficients to see if they share any common factors. They do: 4.

Next, look for the lowest power of each variable, because that is the most you can factor out. The lowest power of x is x^2 . The lowest powers of y and z are to the first power.

This means we can factor out $4x^2yz$. Now, we have to determine what is left in each term after we factor out $4x^2yz$:

$$16x^2y^3z^2 + 4x^3yz + 8x^2y^4z^5 = 4x^2yz(4y^2z + x + 2y^3z^4)$$

Practice

Sample explanations for some of the practice exercises below are available by viewing the following video. Note that there is not always a match between the number of the practice exercise in the video and the number of the practice exercise listed in the following exercise set. However, the practice exercise is the same in both. [CK-12 Basic Algebra: Polynomial Equations in Factored Form \(9:29\)](#)

MEDIA

Click image to the left for more content.

Factor the common factor from the following polynomials.

1. $36a^2 + 9a^3 - 6a^7$
2. $yx^3y^2 + 12x + 16y$
3. $3x^3 - 21x$
4. $5x^6 + 15x^4$
5. $4x^3 + 10x^2 - 2x$
6. $-10x^6 + 12x^5 - 4x^4$
7. $12xy + 24xy^2 + 36xy^3$
8. $5a^3 - 7a$
9. $45y^{12} + 30y^{10}$
10. $16xy^2z + 4x^3y$

Mixed Review

11. Rewrite in standard form: $-4x + 11x^4 - 6x^7 + 1 - 3x^2$. State the polynomial's degree and leading coefficient.
12. Simplify $(9a^2 - 8a + 11a^3) - (3a^2 + 14a^5 - 12a) + (9 - 3a^5 - 13a)$.
13. Multiply $\frac{1}{3}a^3$ by $(36a^4 + 6)$.
14. Melissa made a trail mix by combining x ounces of a 40% cashew mixture with y ounces of a 30% cashew mixture. The result is 12 ounces of cashews.
 - a. Write the equation to represent this situation.
 - b. Graph using its intercepts.
 - c. Give three possible combinations to make this sentence true.
15. Explain how to use mental math to simplify $8(12.99)$.

9.7 Zero Product Principle

Here you'll find the solutions to polynomial equations by using the Zero Product Principle.

What if you knew that the area of a chalkboard was 48 square feet, and you also knew that the area in square feet could be represented by the expression $x^2 + 2x$? Suppose you wrote an equation, moved all the terms to one side, and factored. How could you find the value of x ? In this Concept, you'll learn to solve polynomial equations like this one by using the Zero Product Principle.

Watch This

Multimedia Link: For further explanation of the Zero Product Property, watch this: [CK-12 Basic Algebra:Zero Product Property](#)



MEDIA

Click image to the left for more content.

- YouTube video.

Guidance

Polynomials can be written in **expanded form** or in **factored form**. Expanded form means that you have sums and differences of different terms:

$$6x^4 + 7x^3 - 26x^2 - 17x + 30$$

Notice that the degree of the polynomial is four.

The **factored form** of a polynomial means it is written as a product of its factors.

The factors are also polynomials, usually of lower degree. Here is the same polynomial in factored form.

$$(x - 1)(x + 2)(2x - 3)(3x + 5)$$

Suppose we want to know where the polynomial $6x^4 + 7x^3 - 26x^2 - 17x + 30$ equals zero. It is quite difficult to solve this using the methods we already know. However, we can use the Zero Product Property to help.

Zero Product Property: The only way a product is zero is if one or both of the terms are zero.

By setting the factored form of the polynomial equal to zero and using this property, we can easily solve the original polynomial.

Example ASolve for x :

$$(x - 1)(x + 2)(2x - 3)(3x + 5) = 0$$

Solution: According to the property, for the original polynomial to equal zero, we have to set each term equal to zero and solve.

$$(x - 1) = 0 \rightarrow x = 1$$

$$(x + 2) = 0 \rightarrow x = -2$$

$$(2x - 3) = 0 \rightarrow x = \frac{3}{2}$$

$$(3x + 5) = 0 \rightarrow x = -\frac{5}{3}$$

The solutions to $6x^4 + 7x^3 - 26x^2 - 17x + 30 = 0$ are the following: $x = -2, -\frac{5}{3}, 1, \frac{3}{2}$.

Example BSolve $(x - 9)(3x + 4) = 0$.

Solution: Separate the factors using the Zero Product Property: $(x - 9)(3x + 4) = 0$.

$$x - 9 = 0$$

$$x = 9$$

or

$$3x + 4 = 0$$

$$3x = -4$$

$$x = \frac{-4}{3}$$

Solving Simple Polynomial Equations by Factoring

We already saw how we can use the Zero Product Property to solve polynomials in factored form. Here you will learn how to solve polynomials in expanded form. These are the steps for this process.

Step 1: Rewrite the equation in standard form such that: Polynomial expression = 0.

Step 2: Factor the polynomial completely.

Step 3: Use the zero-product rule to set **each factor equal to zero**.

Step 4: Solve each equation from step 3.

Step 5: Check your answers by substituting your solutions into the original equation.

Example C

Solve the following polynomial equation:

$$10x^3 - 5x^2 = 0.$$

Solution:

First, factor by removing the greatest common factor. Since both terms have at least $5x^2$ as a factor, we will remove that.

$$10x^3 - 5x^2 = 0$$

$$5x^2(2x - 1) = 0$$

Separate each factor and set equal to zero:

$$5x^2 = 0 \qquad \text{or} \qquad 2x - 1 = 0$$

$$x^2 = 0 \qquad \qquad \qquad 2x = 1$$

$$x = 0 \qquad \qquad \qquad x = \frac{1}{2}$$

Video Review



MEDIA

Click image to the left for more content.



MEDIA

Click image to the left for more content.

Guided Practice

Solve the following polynomial equation.

$$x^2 - 2x = 0$$

Solution: $x^2 - 2x = 0$

Rewrite: This is not necessary since the equation is in the correct form.

Factor: The common factor is x , so this factors as: $x(x - 2) = 0$.

Set each factor equal to zero.

$$x = 0 \qquad \text{or} \qquad x - 2 = 0$$

Solve:

$x = 0$

or

$x = 2$

Check: Substitute each solution back into the original equation.

$x = 0$

$(0)^2 - 2(0) = 0$

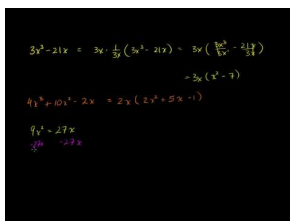
$x = 2$

$(2)^2 - 2(2) = 0$

Answer $x = 0, x = 2$

Practice

Sample explanations for some of the practice exercises below are available by viewing the following video. Note that there is not always a match between the number of the practice exercise in the video and the number of the practice exercise listed in the following exercise set. However, the practice exercise is the same in both. [CK-12 Basic Algebra: Polynomial Equations in Factored Form \(9:29\)](#)



MEDIA

Click image to the left for more content.

1. What is the Zero Product Property? How does this simplify solving complex polynomials?

Why can't the Zero Product Property be used to solve the following polynomials?

2. $(x - 2)(x) = 2$
3. $(x + 6) + (3x - 1) = 0$
4. $(x^{-3})(x + 7) = 0$
5. $(x + 9) - (6x - 1) = 4$
6. $(x^4)(x^2 - 1) = 0$

Solve the following polynomial equations.

7. $x(x + 12) = 0$
8. $(2x + 3)(5x - 4) = 0$
9. $(2x + 1)(2x - 1) = 0$
10. $24x^2 - 4x = 0$
11. $60m = 45m^2$
12. $(x - 5)(2x + 7)(3x - 4) = 0$
13. $2x(x + 9)(7x - 20) = 0$
14. $18y - 3y^2 = 0$
15. $9x^2 = 27x$
16. $4a^2 + a = 0$
17. $b^2 - \frac{5}{3b} = 0$

9.8 Factorization of Quadratic Expressions

Here you'll learn to determine what the factors of a quadratic expression are.

Suppose your height above sea level in feet when traveling over a hill can be represented by the expression $-x^2 + 16x + 63$, where x is the horizontal distance traveled. If you wanted to factor this expression, could you do it? What would be the steps that you would follow? After completing this Concept, you'll know what to do in order to factor an expression such as this one.

Guidance

In this Concept, we will learn how to factor quadratic polynomials for different values of a , b , and c . In the last Concept, we factored common monomials, so you already know how to factor quadratic polynomials where $c = 0$.

Factoring Quadratic Expressions in Standard Form

Quadratic polynomials are polynomials of degree 2. The standard form of a quadratic polynomial is $ax^2 + bx + c$, where a , b , and c are real numbers.

Example A

Factor $x^2 + 5x + 6$.

Solution: We are looking for an answer that is the product of the two binomials in parentheses: $(x + \underline{\quad})(x + \underline{\quad})$.

To fill in the blanks, we want two numbers m and n that multiply to 6 and add to 5. A good strategy is to list the possible ways we can multiply two numbers to give us 6 and then see which of these pairs of numbers add to 5. The number six can be written as the product of:

$$\begin{array}{l} 6 = 1 \times 6 \quad \text{and} \quad 1 + 6 = 7 \\ 6 = 2 \times 3 \quad \text{and} \quad 2 + 3 = 5 \end{array}$$

So the answer is $(x + 2)(x + 3)$.

We can check to see if this is correct by multiplying $(x + 2)(x + 3)$.

x is multiplied by x and $3 = x^2 + 3x$.

2 is multiplied by x and $3 = 2x + 6$.

Combine the like terms: $x^2 + 5x + 6$.

Example B

Factor $x^2 - 6x + 8$.

Solution: We are looking for an answer that is the product of the two binomials in parentheses: $(x + \underline{\quad})(x + \underline{\quad})$.

The number 8 can be written as the product of the following numbers.

$8 = 1 \cdot 8$ and $1 + 8 = 9$ Notice that these are two different choices.

$$\begin{array}{lll} 8 = (-1)(-8) & \text{and} & -1 + (-8) = -9 \\ 8 = 2 \times 4 & \text{and} & 2 + 4 = 6 \end{array}$$

And

$8 = (-2) \cdot (-4)$ and $-2 + (-4) = -6 \leftarrow$ This is the correct choice.

The answer is $(x - 2)(x - 4)$.

Example C

Factor $x^2 + 2x - 15$.

Solution: We are looking for an answer that is the product of the two binomials in parentheses: $(x \pm \text{_____})(x \pm \text{_____})$.

In this case, we must take the negative sign into account. The number -15 can be written as the product of the following numbers.

$-15 = -1 \cdot 15$ and $-1 + 15 = 14$ Notice that these are two different choices.

And also,

$-15 = 1 \cdot (-15)$ and $1 + (-15) = -14$ Notice that these are two different choices.

$-15 = (-3) \times 5$ and $(-3) + 5 = 2$ This is the correct choice.

$-15 = 3 \times (-5)$ and $3 + (-5) = -2$

The answer is $(x - 3)(x + 5)$.

To Summarize:

A quadratic of the form $x^2 + bx + c$ factors as a product of two binomials: $(x + m)(x + n)$.

- If b and c are positive then both m and n are positive.
 - Example: $x^2 + 8x + 12$ factors as $(x + 6)(x + 2)$.
- If b is negative and c is positive then both m and n are negative.
 - Example: $x^2 - 6x + 8$ factors as $(x - 2)(x - 4)$.
- If c is negative then either m is positive and n is negative or vice-versa.
 - Example: $x^2 + 2x - 15$ factors as $(x + 5)(x - 3)$.
 - Example: $x^2 + 34x - 35$ factors as $(x + 35)(x - 1)$.
- If $a = -1$, factor a common factor of -1 from each term in the trinomial and then factor as usual. The answer will have the form $-(x + m)(x + n)$.
 - Example: $-x^2 + x + 6$ factors as $-(x - 3)(x + 2)$.

Video Review



MEDIA

 Click image to the left for more content.



MEDIA

 Click image to the left for more content.

Guided Practice

Factor $-x^2 + x + 6$.

Solution: First factor the common factor of -1 from each term in the trinomial. Factoring -1 changes the signs of each term in the expression.

$$-x^2 + x + 6 = -(x^2 - x - 6)$$

We are looking for an answer that is the product of the two binomials in parentheses: $(x \pm \text{_____})(x \pm \text{_____})$.

Now our job is to factor $x^2 - x - 6$.

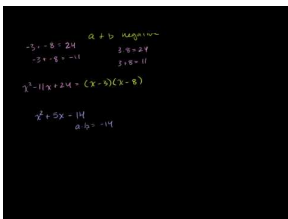
The number -6 can be written as the product of the following numbers.

$$\begin{array}{llll} -6 = (-1) \times 6 & \text{and} & (-1) + 6 = 5 \\ -6 = 1 \times (-6) & \text{and} & 1 + (-6) = -5 \\ -6 = (-2) \times 3 & \text{and} & (-2) + 3 = 1 \\ -6 = 2 \times (-3) & \text{and} & 2 + (-3) = -1 & \text{This is the correct choice.} \end{array}$$

The answer is $-(x - 3)(x + 2)$.

Practice

Sample explanations for some of the practice exercises below are available by viewing the following video. Note that there is not always a match between the number of the practice exercise in the video and the number of the practice exercise listed in the following exercise set. However, the practice exercise is the same in both. [CK-12 Basic Algebra: Factoring Quadratic Equations](#) (16:30)



MEDIA

 Click image to the left for more content.

Factor the following quadratic polynomials.

1. $x^2 + 10x + 9$
2. $x^2 + 15x + 50$
3. $x^2 + 10x + 21$
4. $x^2 + 16x + 48$
5. $x^2 - 11x + 24$
6. $x^2 - 13x + 42$
7. $x^2 - 14x + 33$
8. $x^2 - 9x + 20$
9. $x^2 + 5x - 14$
10. $x^2 + 6x - 27$
11. $x^2 + 7x - 78$
12. $x^2 + 4x - 32$
13. $x^2 - 12x - 45$
14. $x^2 - 5x - 50$
15. $x^2 - 3x - 40$
16. $x^2 - x - 56$
17. $-x^2 - 2x - 1$
18. $-x^2 - 5x + 24$
19. $-x^2 + 18x - 72$
20. $-x^2 + 25x - 150$
21. $x^2 + 21x + 108$
22. $-x^2 + 11x - 30$
23. $x^2 + 12x - 64$
24. $x^2 - 17x - 60$

Mixed Review

25. Evaluate $f(2)$ when $f(x) = \frac{1}{2}x^2 - 6x + 4$.
26. The Nebraska Department of Roads collected the following data regarding mobile phone distractions in traffic crashes by teen drivers.
 1. Plot the data as a scatter plot.
 2. Fit a line to this data.
 3. Predict the number of teenage traffic accidents attributable to cell phones in the year 2012.

TABLE 9.1:

Year (y)	Total (n)
2002	41
2003	43
2004	47
2005	38
2006	36
2007	40
2008	42
2009	42

27. Simplify $\sqrt{405}$.
28. Graph the following on a number line: $-\pi$, $\sqrt{2}$, $\frac{5}{3}$, $-\frac{3}{10}$, $\sqrt{16}$.

29. What is the multiplicative inverse of $\frac{9}{4}$?

Quick Quiz

1. Name the following polynomial. State its degree and leading coefficient: $6x^2y^4z + 6x^6 - 2y^5 + 11xyz^4$.
2. Simplify $(a^2b^2c + 11abc^5) + (4abc^5 - 3a^2b^2c + 9abc)$.
3. A rectangular solid has dimensions $(a + 2)$ by $(a + 4)$ by $(3a)$. Find its volume.
4. Simplify $-3hjk^3(h^2j^4k + 6hk^2)$.
5. Find the solutions to $(x - 3)(x + 4)(2x - 1) = 0$.
6. Multiply $(a - 9b)(a + 9b)$.

9.9 Factor Polynomials Using Special Products

Here you'll learn how to factor quadratic polynomials by using special products.

What if the area of a square playground were 10,000 square feet? Instead of taking the square root of the area to find the length of one of the playground's sides, you could set up the equation $s^2 = 10,000$, subtract 10,000 from both sides to get $s^2 - 10,000 = 0$, and solve for s by factoring $s^2 - 10,000$ on the left side of the equation. But how would you factor this? After completing this Concept, you'll know how to factor expressions like this one by using special products.

Guidance

When we learned how to multiply binomials, we talked about two special products: the Sum and Difference Formula and the Square of a Binomial Formula. In this Concept, we will learn how to recognize and factor these special products.

Factoring the Difference of Two Squares

We use the Sum and Difference Formula to factor a difference of two squares. A difference of two squares can be a quadratic polynomial in this form: $a^2 - b^2$. Both terms in the polynomial are perfect squares. In a case like this, the polynomial factors into the sum and difference of the square root of each term.

$$a^2 - b^2 = (a + b)(a - b)$$

In these problems, the key is figuring out what the a and b terms are. Let's do some examples of this type.

Example A

Factor the difference of squares.

(a) $x^2 - 9$

(b) $x^2y^2 - 1$

Solution:

(a) Rewrite $x^2 - 9$ as $x^2 - 3^2$. Now it is obvious that it is a difference of squares.

We substitute the values of a and b in the Sum and Difference Formula:

$$(x + 3)(x - 3)$$

The answer is $x^2 - 9 = (x + 3)(x - 3)$.

(b) Rewrite $x^2y^2 - 1$ as $(xy)^2 - 1^2$. This factors as $(xy + 1)(xy - 1)$.

Factoring Perfect Square Trinomials

A **perfect square trinomial** has the form:

$$a^2 + 2ab + b^2 \quad \text{or} \quad a^2 - 2ab + b^2$$

The **factored form** of a perfect square trinomial has the form:

$$(a + b)^2 \text{ if } a^2 + 2(ab) + b^2$$

And

$$(a - b)^2 \text{ if } a^2 - 2(ab) + b^2$$

In these problems, the key is figuring out what the a and b terms are. Let's do some examples of this type.

Example B

Factor $x^2 + 8x + 16$.

Solution:

Check that the first term and the last term are perfect squares.

$$x^2 + 8x + 16 \quad \text{as} \quad x^2 + 8x + 4^2.$$

Check that the middle term is twice the product of the square roots of the first and the last terms. This is true also since we can rewrite them.

$$x^2 + 8x + 16 \quad \text{as} \quad x^2 + 2 \cdot 4 \cdot x + 4^2$$

This means we can factor $x^2 + 8x + 16$ as $(x + 4)^2$.

Example C

Factor $x^2 - 4x + 4$.

Solution:

Rewrite $x^2 - 4x + 4$ as $x^2 + 2 \cdot (-2) \cdot x + (-2)^2$.

We notice that this is a perfect square trinomial and we can factor it as $(x - 2)^2$.

Solving Polynomial Equations Involving Special Products

We have learned how to factor quadratic polynomials that are helpful in solving polynomial equations like $ax^2 + bx + c = 0$. Remember that to solve polynomials in expanded form, we use the following steps:

Step 1: Rewrite the equation in standard form such that: Polynomial expression = 0.

Step 2: Factor the polynomial completely.

Step 3: Use the Zero Product Property to set **each factor equal to zero**.

Step 4: Solve each equation from step 3.

Step 5: Check your answers by substituting your solutions into the original equation.

Video Review



MEDIA

 Click image to the left for more content.



MEDIA

 Click image to the left for more content.

Guided Practice

Solve the following polynomial equations.

$$x^2 + 7x + 6 = 0$$

Solution: No need to rewrite because it is already in the correct form.

Factor: We write 6 as a product of the following numbers:

$$\begin{array}{ccc}
 6 = 6 \times 1 & \text{and} & 6 + 1 = 7 \\
 x^2 + 7x + 6 = 0 & \text{factors as} & (x + 1)(x + 6) = 0
 \end{array}$$

Set each factor equal to zero:

$$x + 1 = 0 \quad \text{or} \quad x + 6 = 0$$

Solve:

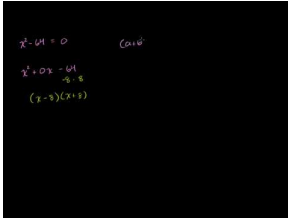
$$x = -1 \quad \text{or} \quad x = -6$$

Check: Substitute each solution back into the original equation.

$$\begin{array}{l}
 (-1)^2 + 7(-1) + 6 = 1 + (-7) + 6 = 0 \\
 (-6)^2 + 7(-6) + 6 = 36 + (-42) + 6 = 0
 \end{array}$$

Practice

Sample explanations for some of the practice exercises below are available by viewing the following video. Note that there is not always a match between the number of the practice exercise in the video and the number of the practice exercise listed in the following exercise set. However, the practice exercise is the same in both. [CK-12 Basic Algebra: Factoring Special Products](#) (10:08)



MEDIA

Click image to the left for more content.

Factor the following perfect square trinomials.

1. $x^2 + 8x + 16$
2. $x^2 - 18x + 81$
3. $-x^2 + 24x - 144$
4. $x^2 + 14x + 49$
5. $4x^2 - 4x + 1$
6. $25x^2 + 60x + 36$
7. $4x^2 - 12xy + 9y^2$
8. $x^4 + 22x^2 + 121$

Factor the following differences of squares.

9. $x^2 - 4$
10. $x^2 - 36$
11. $-x^2 + 100$
12. $x^2 - 400$
13. $9x^2 - 4$
14. $25x^2 - 49$
15. $-36x^2 + 25$
16. $16x^2 - 81y^2$

Solve the following quadratic equations using factoring.

17. $x^2 - 11x + 30 = 0$
18. $x^2 + 4x = 21$
19. $x^2 + 49 = 14x$
20. $x^2 - 64 = 0$
21. $x^2 - 24x + 144 = 0$
22. $4x^2 - 25 = 0$
23. $x^2 + 26x = -169$
24. $-x^2 - 16x - 60 = 0$

Mixed Review

25. Find the value for k that creates an infinite number of solutions to the system $\begin{cases} 3x + 7y = 1 \\ kx - 14y = -2 \end{cases}$.
26. A restaurant has two kinds of rice, three choices of mein, and four kinds of sauce. How many plate combinations can be created if you choose one of each?
27. Graph $y - 5 = \frac{1}{3}(x + 4)$. Identify its slope.
28. \$600 was deposited into an account earning 8% interest compounded annually.
 - a. Write the exponential model to represent this situation.
 - b. How much money will be in the account after six years?

29. Divide: $4\frac{8}{9} \div -3\frac{1}{5}$.
30. Identify an integer that is even and not a natural number.

9.10 Factoring by Grouping

Here you'll learn how to use grouping in order to factor quadratics when the leading coefficient is not one.

Suppose you belong to your school's math club, and you're having a discussion with your fellow members about how to factor the polynomial $5x^2 + 17x + 6$. Someone has suggested factoring by grouping. Do you think that this is a possibility? If so, how could it be done? In this Concept, you'll learn how to factor polynomial expressions by grouping when the leading coefficient isn't 1. Your fellow math club members will be impressed when you explain to them the procedure for using grouping to factor an expression like the one given.

Guidance

It may be possible to factor a polynomial containing four or more terms by factoring common monomials from groups of terms. This method is called **factoring by grouping**. The following example illustrates how this process works.

Example A

Factor $2x + 2y + ax + ay$.

Solution: There isn't a common factor for all four terms in this example. However, there is a factor of 2 that is common to the first two terms and there is a factor of a that is common to the last two terms. Factor 2 from the first two terms and factor a from the last two terms.

$$2x + 2y + ax + ay = 2(x + y) + a(x + y)$$

Now we notice that the binomial $(x + y)$ is common to both terms. We factor the common binomial and get:

$$(x + y)(2 + a)$$

Our polynomial is now factored completely.

We know how to factor quadratic trinomials $(ax^2 + bx + c)$ where $a = 1$ using methods we have previously learned. To factor a quadratic polynomial where $a \neq 1$, we follow the following steps.

1. We find the product ac .
2. We look for two numbers that multiply to give ac and add to give b .
3. We rewrite the middle term using the two numbers we just found.
4. We factor the expression by grouping.

Let's apply this method to the following examples.

Example B

Factor $3x^2 + 8x + 4$ by grouping.

Solution: Follow the steps outlined above.

$$ac = 3 \cdot 4 = 12$$

The number 12 can be written as a product of two numbers in any of these ways:

$$\begin{array}{lll} 12 = 1 \times 12 & \text{and} & 1 + 12 = 13 \\ 12 = 2 \times 6 & \text{and} & 2 + 6 = 8 \quad \text{This is the correct choice.} \end{array}$$

Rewrite the middle term as: $8x = 2x + 6x$, so the problem becomes the following.

$$3x^2 + 8x + 4 = 3x^2 + 2x + 6x + 4$$

Factor an x from the first two terms and 2 from the last two terms.

$$x(3x + 2) + 2(3x + 2)$$

Now factor the common binomial $(3x + 2)$.

$$(3x + 2)(x + 2)$$

Our answer is $(3x + 2)(x + 2)$.

In this example, all the coefficients are positive. What happens if the b is negative?

Example C

Factor $6x^2 - 11x + 4$ by grouping.

Solution: $ac = 6 \cdot 4 = 24$

The number 24 can be written as a product of two numbers in any of these ways.

$$\begin{array}{lll} 24 = 1 \times 24 & \text{and} & 1 + 24 = 25 \\ 24 = (-1) \times (-24) & \text{and} & (-1) + (-24) = -25 \\ 24 = 2 \times 12 & \text{and} & 2 + 12 = 14 \\ 24 = (-2) \times (-12) & \text{and} & (-2) + (-12) = -14 \\ 24 = 3 \times 8 & \text{and} & 3 + 8 = 11 \\ 24 = (-3) \times (-8) & \text{and} & (-3) + (-8) = -11 \quad \text{This is the correct choice.} \end{array}$$

Rewrite the middle term as $-11x = -3x - 8x$, so the problem becomes:

$$6x^2 - 11x + 4 = 6x^2 - 3x - 8x + 4$$

Factor by grouping. Factor a $3x$ from the first two terms and factor -4 from the last two terms.

$$3x(2x - 1) - 4(2x - 1)$$

Now factor the common binomial $(2x - 1)$.

Our answer is $(2x - 1)(3x - 4)$.

Video Review



MEDIA

Click image to the left for more content.



MEDIA

Click image to the left for more content.

Guided Practice

Factor $10x^2 - 43x + 28$.

Solution:

First, find $a \cdot c$: $10 \cdot 28 = 280$. Since $b = -43$, the factors of 280 need to add up to -43 , so consider pairs of negative factors of 280. There will be a lot of pairs of factors, and you could list them all in order until you find the correct pair, as in Examples B and C. Or, use some number sense to help make the search shorter. Start with -1 as a factor:

$$280 = -1 \cdot -280 \text{ and } -1 + -280 = -281$$

Since -281 is much more negative than -43 , you need to have a pair of factors where one is not so negative. Try:

$$280 = -7 \cdot -40 \text{ and } -7 + -40 = -47$$

This is close! Since it is still too negative, you need a factor that is less negative than -40 , and one that is slightly more negative than -7 . Try:

$$280 = -8 \cdot -35 \text{ and } -8 + -35 = -43$$

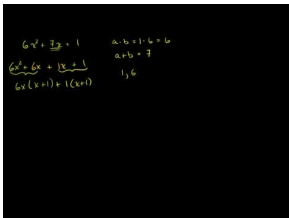
This works! So, -8 and -35 are the factors needed. Rewrite the middle term as $-43x = -35x - 8x$ and factor by grouping:

$$10x^2 - 43x + 28 = 10x^2 - 35x + -8x + 28 = 5x(2x - 7) - 4(2x - 7) = (5x - 4)(2x - 7)$$

Practice

Sample explanations for some of the practice exercises below are available by viewing the following video. Note that there is not always a match between the number of the practice exercise in the video and the number of the

practice exercise listed in the following exercise set. However, the practice exercise is the same in both. [CK-12 Basic Algebra: Factor by Grouping and Factoring Completely \(13:57\)](#)



MEDIA

Click image to the left for more content.

Factor by grouping.

1. $6x^2 - 9x + 10x - 15$
2. $5x^2 - 35x + x - 7$
3. $9x^2 - 9x - x + 1$
4. $4x^2 + 32x - 5x - 40$
5. $12x^3 - 14x^2 + 42x - 49$
6. $4x^2 + 25x - 21$
7. $24b^3 + 32b^2 - 3b - 4$
8. $2m^3 + 3m^2 + 4m + 6$
9. $6x^2 + 7x + 1$
10. $4x^2 + 8x - 5$
11. $5a^3 - 5a^2 + 7a - 7$
12. $3x^2 + 16x + 21$
13. $4xy + 32x + 20y + 160$
14. $10ab + 40a + 6b + 24$
15. $9mn + 12m + 3n + 4$
16. $4jk - 8j^2 + 5k - 10j$
17. $24ab + 64a - 21b - 56$

9.11 Factoring Completely

Here you'll learn how to apply all the skills you have acquired so far in order to completely factor an expression.

Suppose that the area of a poster hanging on your wall is 1000 square inches and that the height is 15 more inches than the width. How would you go about finding the height and width of the poster? What equation would you set up? How could you use factoring to solve the equation? In this Concept, you'll learn how to factor an expression completely in order to solve real-world problems such as this one.

Guidance

We say that a polynomial is **factored completely** when we factor as much as we can and we are unable to factor any more. Here are some suggestions that you should follow to make sure that you factor completely.

- ✓ Factor all common monomials first.
- ✓ Identify special products such as the difference of squares or the square of a binomial. Factor according to their formulas.
- ✓ If there are no special products, factor using the methods we learned in the previous Concepts.
- ✓ Look at each factor and see if any of these can be factored further.

Example A

Factor the following polynomials completely.

(a) $2x^2 - 8$

(b) $x^3 + 6x^2 + 9x$

Solution:

(a) Look for the common monomial factor: $2x^2 - 8 = 2(x^2 - 4)$. Recognize $x^2 - 4$ as a difference of squares. We factor as follows: $2(x^2 - 4) = 2(x + 2)(x - 2)$. If we look at each factor we see that we can't factor anything else. The answer is $2(x + 2)(x - 2)$.

(b) Recognize this as a perfect square and factor as $x(x + 3)^2$. If we look at each factor we see that we can't factor anything else. The answer is $x(x + 3)^2$.

Factoring Common Binomials

The first step in the factoring process is often factoring the common monomials from a polynomial. Sometimes polynomials have common terms that are binomials. For example, consider the following expression:

$$x(3x + 2) - 5(3x + 2)$$

You can see that the term $(3x + 2)$ appears in both terms of the polynomial. This common term can be factored by writing it in front of a set of parentheses. Inside the parentheses, we write all the terms that are left over when we divide them by the common factor.

$$(3x + 2)(x - 5)$$

This expression is now completely factored. Let's look at some more examples.

Example B

Factor $3x(x - 1) + 4(x - 1)$.

Solution: $3x(x - 1) + 4(x - 1)$ has a common binomial of $(x - 1)$.

When we factor the common binomial, we get $(x - 1)(3x + 4)$.

Solving Real-World Problems Using Polynomial Equations

Now that we know most of the factoring strategies for quadratic polynomials, we can see how these methods apply to solving real-world problems.

Example C

The product of two positive numbers is 60. Find the two numbers if one of the numbers is 4 more than the other.

Solution: $x =$ one of the numbers and $x + 4$ equals the other number. The product of these two numbers equals 60. We can write the equation as follows:

$$x(x + 4) = 60$$

Write the polynomial in standard form.

$$x^2 + 4x = 60$$

$$x^2 + 4x - 60 = 0$$

Factor: $-60 = 6 \times (-10)$ and $6 + (-10) = -4$

$-60 = -6 \times 10$ and $-6 + 10 = 4$ This is the correct choice.

The expression factors as $(x + 10)(x - 6) = 0$.

Solve:

$$x + 10 = 0$$

or

$$x = -10$$

$$x - 6 = 0$$

$$x = 6$$

Since we are looking for positive numbers, the answer must be positive.

$x = 6$ for one number, and $x + 4 = 10$ for the other number.

Check: $6 \cdot 10 = 60$ so the answer checks.

Video Review



MEDIA

 Click image to the left for more content.



MEDIA

 Click image to the left for more content.

Guided Practice

Factor completely: $24x^3 - 28x^2 + 8x$.

Solution:

First, notice that each term has $4x$ as a factor. Start by factoring out $4x$:

$$24x^3 - 28x^2 + 8x = 4x(6x^2 - 7x + 2)$$

Next, factor the trinomial in the parenthesis. Since $a \neq 1$ find $a \cdot c$: $6 \cdot 2 = 12$. Find the factors of 12 that add up to -7 . Since 12 is positive and -7 is negative, the two factors should be negative:

$12 = -1 \cdot -12$	<i>and</i>	$-1 + -12 = -13$
$12 = -2 \cdot -6$	<i>and</i>	$-2 + -6 = -8$
$12 = -3 \cdot -4$	<i>and</i>	$-3 + -4 = -7$

Rewrite the trinomial using $-7x = -3x - 4x$, and then factor by grouping:

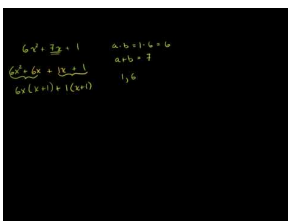
$$6x^2 - 7x + 2 = 6x^2 - 3x - 4x + 2 = 3x(2x - 1) - 2(2x - 1) = (3x - 2)(2x - 1)$$

The final factored answer is:

$$4x(3x - 2)(2x - 1)$$

Practice

Sample explanations for some of the practice exercises below are available by viewing the following video. Note that there is not always a match between the number of the practice exercise in the video and the number of the practice exercise listed in the following exercise set. However, the practice exercise is the same in both. [CK-12 Basic Algebra: Factor by Grouping and Factoring Completely \(13:57\)](#)



MEDIA

 Click image to the left for more content.

Factor completely.

1. $2x^2 + 16x + 30$
2. $12c^2 - 75$
3. $-x^3 + 17x^2 - 70x$
4. $6x^2 - 600$
5. $-5t^2 - 20t - 20$
6. $6x^2 + 18x - 24$
7. $-n^2 + 10n - 21$
8. $2a^2 - 14a - 16$
9. $2x^2 - 512$
10. $12x^3 + 12x^2 + 3x$

Solve the following application problems.

11. One leg of a right triangle is seven feet longer than the other leg. The hypotenuse is 13 feet. Find the dimensions of the right triangle.
12. A rectangle has sides of $x + 2$ and $x - 1$. What value of x gives an area of 108?
13. The product of two positive numbers is 120. Find the two numbers if one number is seven more than the other.
14. Framing Warehouse offers a picture-framing service. The cost for framing a picture is made up of two parts. The cost of glass is \$1 per square foot. The cost of the frame is \$2 per linear foot. If the frame is a square, what size picture can you get framed for \$20.00?

Mixed Review

15. The area of a square varies directly with its side length.
 - a. Write the general variation equation to model this sentence.
 - b. If the area is 16 square feet when the side length is 4 feet, find the area when $s = 1.5$ feet.
16. The **surface area** is the total amount of surface of a three-dimensional figure. The formula for the surface area of a cylinder is $SA = 2\pi r^2 + 2\pi rh$, where $r = \text{radius}$ and $h = \text{height of the cylinder}$. Determine the surface area of a soup can with a radius of 2 inches and a height of 5.5 inches.
17. Factor $25g^2 - 36$. Solve this polynomial when it equals zero.
18. What is the greatest common factor of $343r^3t$, $21t^4$, and $63rt^5$?
19. Discounts to the hockey game are given to groups with more than 12 people.
 - a. Graph this solution on a number line.
 - b. What is the domain of this situation?
 - c. Will a church group with 12 members receive a discount?

9.12 Probability of Compound Events

Here you'll learn how to calculate the probability of two or more events occurring.

Suppose you're playing a card game, and you need to draw two aces to win. There are 20 cards left in the deck, and one of the aces has already been drawn. What is the probability that you win the game? How would you go about calculating this probability? Are drawing your first card and drawing your second card independent or dependent events? In this Concept, you'll learn the definitions of independent and dependent events and how to calculate the probability of compound events like this one.

Guidance

We begin this Concept with a reminder of probability.

The **experimental probability** is the ratio of the proposed outcome to the number of experimental trials.

$$P(\text{success}) = \frac{\text{number of times the event occurred}}{\text{total number of trials of experiment}}$$

Probability can be expressed as a percentage, a fraction, a decimal, or a ratio.

This Concept will focus on **compound events** and the formulas used to determine the probabilities of such events.

Compound events are two simple events taken together, usually expressed as A and B .

Independent and Dependent Events

Example A

Suppose you flip a coin and roll a die at the same time. What is the probability you will flip a head **and** roll a four?

Solution:

These events are **independent**. Independent events occur when the outcome of one event does not affect the outcome of the second event. Rolling a four has no effect on tossing a head.

To find the probability of two **independent events**, multiply the probability of the first event by the probability of the second event.

$$P(A \text{ and } B) = P(A) \cdot P(B)$$

Solution:

$$\begin{aligned} P(\text{tossing a head}) &= \frac{1}{2} \\ P(\text{rolling a 4}) &= \frac{1}{6} \\ P(\text{tossing a head AND rolling a 4}) &= \frac{1}{2} \times \frac{1}{6} = \frac{1}{12} \end{aligned}$$

When events depend upon each other, they are called **dependent events**. Suppose you randomly draw a card from a standard deck and then randomly draw a second card **without replacing the first**. The second probability is now different from the first.

To find the probability of two **dependent events**, multiply the probability of the first event by the probability of the second event, *after the first event occurs*.

$$P(A \text{ and } B) = P(A) \cdot P(B \text{ following } A)$$

Example B

Two cards are chosen from a deck of cards. What is the probability that they both will be face cards?

Solution: Let $A = 1st \text{ Face card chosen}$ and $B = 2nd \text{ Face card chosen}$. The total number of face cards in the deck is $4 \times 3 = 12$.

$$P(A) = \frac{12}{52}$$

$$P(B) = \frac{11}{51}, \text{ remember, one card has been removed.}$$

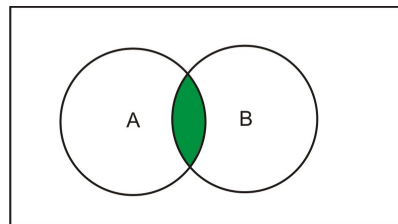
$$P(A \text{ AND } B) = \frac{12}{52} \times \frac{11}{51} \text{ or } P(A \cap B) = \frac{12}{52} \times \frac{11}{51} = \frac{33}{663}$$

$$P(A \cap B) = \frac{11}{221}$$

Mutually Exclusive Events

Events that **cannot happen at the same time** are called **mutually exclusive** events. For example, a number cannot be both even and odd or you cannot have picked a single card from a deck of cards that is both a ten and a jack. **Mutually inclusive** events, however, can occur at the same time. For example a number can be both less than 5 and even or you can pick a card from a deck of cards that can be a club and a ten.

When finding the probability of events occurring at the same time, there is a concept known as the “double counting” feature. It happens when the intersection is counted twice.



A AND B

$A \cap B$

In mutually exclusive events, $P(A \cap B) = \phi$, because they cannot happen at the same time.

To find the probability of either mutually exclusive event A or B occurring, use the following formula:

To find the probability of one or the other mutually exclusive or inclusive event, add the individual probabilities and subtract the probability they occur at the same time.

$$P(A \text{ or } B) = P(A) + P(B) - P(A \cap B)$$

Example C

Two cards are drawn from a deck of cards. Let:

A : 1st card is a club

B : 1st card is a 7

C : 2nd card is a heart

Find the following probabilities:

(a) $P(A \text{ or } B)$

(b) $P(B \text{ or } A)$

(c) $P(A \text{ and } C)$

Solution:

(a)

$$P(A \text{ or } B) = \frac{13}{52} + \frac{4}{52} - \frac{1}{52}$$

$$P(A \text{ or } B) = \frac{16}{52}$$

$$P(A \text{ or } B) = \frac{4}{13}$$

(b)

$$P(B \text{ or } A) = \frac{4}{52} + \frac{13}{52} - \frac{1}{52}$$

$$P(B \text{ or } A) = \frac{16}{52}$$

$$P(B \text{ or } A) = \frac{4}{13}$$

(c)

$$P(A \text{ and } C) = \frac{13}{52} \times \frac{13}{51}$$

$$P(A \text{ and } C) = \frac{169}{2652}$$

Video Review

MEDIA

Click image to the left for more content.



MEDIA

Click image to the left for more content.

Guided Practice

A bowl contains 12 red marbles, 5 blue marbles and 13 yellow marbles. Find the probability of drawing a blue marble and then drawing a yellow marble.

Solution:

Let $A = \text{blue marble chosen 1st}$ and $B = \text{yellow marble chosen 2nd}$. The total number of marbles in the bowl is $12 + 5 + 13 = 30$.

$$P(A) = \frac{5}{30}$$

$$P(B) = \frac{13}{29} \text{ Remember, one marble has been removed.}$$

$$P(A \text{ AND } B) = \frac{5}{30} \times \frac{13}{29} \text{ or } P(A \cap B) = \frac{5}{30} \times \frac{13}{29} = \frac{65}{870}$$

$$P(A \cap B) = \frac{13}{174}$$

Practice

1. Define *independent events*.

Are the following events independent or dependent?

2. Rolling a die and spinning a spinner
3. Choosing a book from the shelf and then choosing another book without replacing the first
4. Tossing a coin six times and then tossing it again
5. Choosing a card from a deck, replacing it, and choosing another card
6. If a die is tossed twice, what is the probability of rolling a 4 followed by a 5?
7. Define *mutually exclusive*.

Are these events mutually exclusive or mutually inclusive?

8. Rolling an even and an odd number on one die.
9. Rolling an even number and a multiple of three on one die.
10. Randomly drawing one card and getting a result of a jack and a heart.
11. Randomly drawing one card and getting a result of a black and a diamond.
12. Choosing an orange and a fruit from a basket.
13. Choosing a vowel and a consonant from a Scrabble bag.

14. Two cards are drawn from a deck of cards. Determine the probability of each of the following events:
- $P(\text{heart or club})$
 - $P(\text{heart and club})$
 - $P(\text{red or heart})$
 - $P(\text{jack or heart})$
 - $P(\text{red or ten})$
 - $P(\text{red queen or black jack})$
15. A box contains 5 purple and 8 yellow marbles. What is the probability of successfully drawing, in order, a purple marble and then a yellow marble? *{Hint: In order means they are not replaced.}*
16. A bag contains 4 yellow, 5 red, and 6 blue marbles. What is the probability of drawing, in order, 2 red, 1 blue, and 2 yellow marbles?
17. A card is chosen at random. What is the probability that the card is black and is a 7?

Mixed Review

18. A circle is inscribed within a square, meaning the circle's diameter is equal to the square's side length. The length of the square is 16 centimeters. Suppose you randomly threw a dart at the figure. What is the probability the dart will land in the square, but not in the circle?
19. Why is $7 - 14x^4 + 7xy^5 - 1x^{-1} = 8x^2y^3$ not considered a polynomial?
20. Factor $72b^5m^3w^9 - 6(bm)^2w^6$.
21. Simplify $2^5 - 7^3a^3b^7 + 3^5a^3b^7 - 2^3$.
22. Bleach breaks down cotton at a rate of 0.125% with each application. A shirt is 100% cotton.
- Write the equation to represent the percentage of cotton remaining after w washes.
 - What percentage remains after 11 washes?
 - After how many washes will 75% be remaining?
23. Evaluate $\frac{(100 \div 4 \times 2 - 49)^2}{9 - 2 \times 3 + 2^2}$.

Summary

This chapter first deals with polynomials. It starts by talking about how to classify, simplify, and rewrite polynomials in standard form, and it then moves on to discuss the adding and subtracting of polynomials. Next, instruction is given on multiplying a polynomial by a monomial, multiplying a polynomial by a binomial, and finding special products of polynomials. The chapter then provides a great deal of information on factors and factoring, including monomial factors of polynomials, factorization of quadratic expressions, using special products to factor, factoring by grouping, and factoring completely. Solving polynomial equations using the Zero Product Principle is also touched upon. Finally, the probability of compound events is introduced.

Polynomials and Factoring; More on Probability Review

Define the following words:

- Polynomial
- Monomial
- Trinomial
- Binomial

5. Coefficient
6. Independent events
7. Factors
8. Factoring
9. Greatest common factor
10. Constant
11. Mutually exclusive
12. Dependent events

Identify the coefficients, constants, and the polynomial degrees in each of the following polynomials.

13. $x^5 - 3x^3 + 4x^2 - 5x + 7$
14. $x^4 - 3x^3y^2 + 8x - 12$

Rewrite the following in standard form.

15. $-4b + 4 + b^2$
16. $3x^2 + 5x^4 - 2x + 9$

Add or subtract the following polynomials and simplify.

17. Add $x^2 - 2xy + y^2$ and $2y^2 - 4x^2$ and $10xy + y^3$.
18. Subtract $x^3 - 3x^2 + 8x + 12$ from $4x^2 + 5x - 9$.
19. Add $2x^3 + 3x^2y + 2y$ and $x^3 - 2x^2y + 3y$

Multiply and simplify the following polynomials.

20. $(-3y^4)(2y^2)$
21. $-7a^2bc^3(5a^2 - 3b^2 - 9c^2)$
22. $-7y(4y^2 - 2y + 1)$
23. $(3x^2 + 2x - 5)(2x - 3)$
24. $(x^2 - 9)(4x^4 + 5x^2 - 2)$
25. $(2x^3 + 7)(2x^3 - 7)$

Square the binomials and simplify.

26. $(x^2 + 4)^2$
27. $(5x - 2y)^2$
28. $(13x^2 + 2y)$

Solve the following polynomial equations.

29. $4x(x + 6)(4x - 9) = 0$
30. $x(5x - 4) = 0$

Factor out the greatest common factor of each expression

31. $-12n + 28n + 4$
32. $45x^{10} + 45x^7 + 18x^4$
33. $-16y^5 - 8y^5x^2 + 40y^6x^3$
34. $15u^4 - 10u^6 - 10u^3v$

35. $-6a^9 + 20a^4b + 10a^3$

36. $12x + 27y^2 - 27x^6$

Factor the difference of squares.

37. $x^2 - 100$

38. $x^2 - 1$

39. $16x^2 - 25$

40. $4x^2 - 81$

Factor the following expressions completely.

41. $5n^2 + 25n$

42. $7r^2 + 37r + 36$

43. $4v^2 + 36v$

44. $336xy - 288x^2 + 294y - 252x$

45. $10xy - 25x + 8y - 20$

Complete the following problems.

46. One leg of a right triangle is 3 feet longer than the other leg. The hypotenuse is 15 feet. Find the dimensions of the right triangle.
47. A rectangle has sides of $x + 5$ and $x - 3$. What value of x gives an area of 48?
48. Are these two events mutually exclusive, mutually inclusive, or neither? "Choosing the sports section from a newspaper" and "choosing the times list for a movie theater"
49. You spin a spinner with seven equal sections numbered one through seven **and** roll a six-sided cube. What is the probability that you roll a five on both the cube and the spinner?
50. You spin a spinner with seven equal sections numbered one through seven **and** roll a six-sided cube. Are these events mutually exclusive?
51. You spin a spinner with seven equal sections numbered one through seven **and** roll a six-sided cube. Are these events independent?
52. You spin a spinner with seven equal sections numbered one through seven **and** roll a six-sided cube. What is the probability you spin a 3, 4, or 5 on the spinner **or** roll a 2 on the cube?

Polynomials and Factoring; More on Probability Test

Simplify the following expressions.

1. $(4x^2 + 5x + 1) - (2x^2 - x - 3)$

2. $(2x + 5) - (x^2 + 3x - 4)$

3. $(b + 4c) + (6b + 2c + 3d)$

4. $(5x^2 + 3x + 3) + (3x^2 - 6x + 4)$

5. $(3x + 4)(x - 5)$

6. $(9x^2 + 2)(x - 3)$

7. $(4x + 3)(8x^2 + 2x + 7)$

Factor the following expressions.

8. $27x^2 - 18x + 3$

9. $9n^2 - 100$

10. $648x^2 - 32$
11. $81p^2 - 90p + 25$
12. $6x^2 - 35x + 49$

Solve the following problems.

13. A rectangle has sides of $x + 7$ and $x - 5$. What value of x gives an area of 63?
14. The product of two positive numbers is 50. Find the two numbers if one of the numbers is 6 more than the other.
15. Give an example of two independent events. Determine the probability of each event. Use it to find:
 - a. $P(A \cup B)$
 - b. $P(A \cap B)$

16. The probability it will rain on any given day in Seattle is 45%. Find the probability that:
 - a. It will rain three days in a row.
 - b. It will rain one day, not the next, and rain again on the third day.

Texas Instruments Resources

In the CK-12 Texas Instruments Algebra I FlexBook, there are graphing calculator activities designed to supplement the objectives for some of the lessons in this chapter. See <http://www.ck12.org/flexr/chapter/9619>.

Quadratic Equations and Functions

Chapter Outline

- 10.1 QUADRATIC FUNCTIONS AND THEIR GRAPHS
 - 10.2 VERTICAL SHIFTS OF QUADRATIC FUNCTIONS
 - 10.3 USE GRAPHS TO SOLVE QUADRATIC EQUATIONS
 - 10.4 USE SQUARE ROOTS TO SOLVE QUADRATIC EQUATIONS
 - 10.5 COMPLETING THE SQUARE
 - 10.6 VERTEX FORM OF A QUADRATIC EQUATION
 - 10.7 QUADRATIC FORMULA
 - 10.8 COMPARING METHODS FOR SOLVING QUADRATICS
 - 10.9 SOLUTIONS USING THE DISCRIMINANT
 - 10.10 LINEAR, EXPONENTIAL, AND QUADRATIC MODELS
 - 10.11 APPLICATIONS OF FUNCTION MODELS
-

Introduction

As you saw in Chapter 8, algebraic functions not only produce straight lines but curved ones too. A special type of curved function is called a parabola. Perhaps you have seen the shape of a parabola before:

- The shape of the water from a drinking fountain
- The path a football takes when thrown
- The shape of an exploding firework
- The shape of a satellite dish
- The path a diver takes into the water
- The shape of a mirror in a car's headlamp

Many real life situations model a quadratic equation. This chapter will explore the graph of a quadratic equation and how to solve such equations using various methods.



10.1 Quadratic Functions and Their Graphs

Here you'll learn about the characteristics of a parabola, including its range and domain.

Suppose $p(m) = \frac{1}{12}m^2 - m + 5$ represents the price of a gallon of gas as a function of the month of the year. Are you able to graph this function? What shape does the graph of the function make? What are the domain and range of the function? What is the vertex of the graph? In this Concept, you'll learn about quadratic functions and their graphs so that you can answer questions like these.

Graphs of Quadratic Functions

Previous Concepts introduced the concept of factoring quadratic trinomials of the form $0 = ax^2 + bx + c$. This is also called the **standard form for a quadratic equation**. The most basic quadratic equation is $y = x^2$. The word quadratic comes from the Latin word *quadrare*, meaning “to square.” By creating a table of values and graphing the ordered pairs, you find that a quadratic equation makes a U-shaped figure called a **parabola**.

Example A

Graph the most basic quadratic equation, $y = x^2$, using the following table of its values:

TABLE 10.1:

x	y
-2	4
-1	1
0	0
1	1
2	4

Solution:

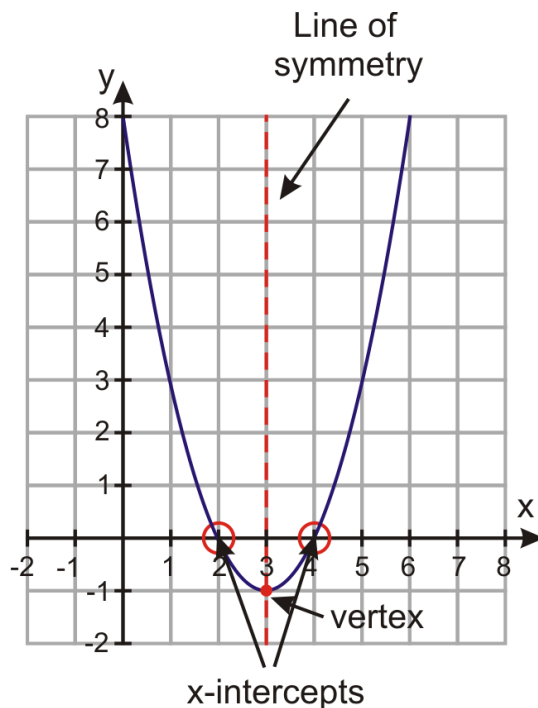
By graphing the points in the table, you can see that the shape is approximately like the graph below. This shape is called a **parabola**.



The Anatomy of a Parabola

A parabola can be divided in half by a vertical line. Because of this, parabolas have **symmetry**. The vertical line dividing the parabola into two equal portions is called the **line of symmetry**. All parabolas have a **vertex**, the ordered pair that represents the bottom (or the top) of the curve.

The vertex of a parabola is the ordered pair (h, k) .



Because the line of symmetry is a vertical line, its equation has the form $x = h$, where $h =$ the x -coordinate of the vertex.

As with linear equations, the x -intercepts of a quadratic function are where the graph intersects the x -axis. The y -value is zero at the x -intercepts.

An equation of the form $y = ax^2$ forms a parabola.

If a is positive, the parabola will open **upward**. The vertex will be a **minimum**.

If a is negative, the parabola will open **downward**. The vertex will be a **maximum**.

The variable a in the equation above is called the **leading coefficient** of the quadratic equation. Not only will it tell you if the parabola opens up or down, but it will also tell you the width.

If $a > 1$ or $a < -1$, the parabola will be **narrow** about the line of symmetry.

If $-1 < a < 1$, the parabola will be **wide** about the line of symmetry.

Example B

Find the x -intercepts of the quadratic function $y = x^2 + 5x - 6$.

Solution:

To find the x -intercepts, set y equal to zero and solve for x by factoring.

$$0 = x^2 + 5x - 6 = x^2 + -1x + 6x - 6 = x(x - 1) + 6(x - 1) = (x + 6)(x - 1)$$

This means that

$$0 = x + 6 \Rightarrow x = -6 \text{ or } 0 = x - 1 \Rightarrow x = 1.$$

Thus the x -intercepts are -6 and 1.

Finding the Vertex of a Quadratic Equation in Standard Form

The x -coordinate of the vertex of $0 = ax^2 + bx + c$ is $x = -\frac{b}{2a}$.

Example C

Determine the direction, shape and vertex of the parabola formed by $y = -\frac{1}{2}x^2$.

Solution:

The value of a in the quadratic equation is $-\frac{1}{2}$.

- Because a is negative, the parabola opens downward.
- Because a is between -1 and 1 , the parabola is wide about its line of symmetry.
- Because there is no b term, $b = 0$. Substituting this into the equation for the x -coordinate of the vertex, $x = -\frac{b}{2a} = -\frac{0}{2a} = 0$. (Note: It does not matter what a equals; since $b = 0$, the fraction equals zero.) To find the y -coordinate, substitute the x -coordinate into the equation:

$$y = -\frac{1}{2}x^2 = -\frac{1}{2} \cdot 0^2 = 0$$

The vertex is $(0, 0)$.

Domain and Range

Several times throughout this textbook, you have experienced the terms **domain** and **range**. Remember:

- Domain is the set of all inputs (x -coordinates).
- Range is the set of all outputs (y -coordinates).

The domain of every quadratic equation is all real numbers (\mathbb{R}). The range of a parabola depends upon whether the parabola opens up or down.

If a is positive, the range will be $y \geq k$.

If a is negative, the range will be $y \leq k$, where $k =$ the y -coordinate of the vertex.

Example D

Find the range of the quadratic function $y = -2x^2 + 16x + 5$.

Solution:

To find the range, we must find the y -value of the vertex. Using the formula given above, we can find the x -value of the vertex, and use that to find the y -value of the vertex.

Since the x -value of the vertex is $x = -\frac{b}{2a}$, we get $x = -\frac{16}{2 \cdot -2} = 4$.

Now, substitute 4 into the function:

$$y = -2x^2 + 16x + 5 = -2(4)^2 + 16(4) + 5 = -2(16) + 24 + 5 = -32 + 29 = -3$$

The y -value of the vertex is -3, and since $a = -2$, the parabola is facing down, so -3 is the highest possible value for the range.

Thus, the range is $y \leq -3$.

Video Review



MEDIA

Click image to the left for more content.



MEDIA

Click image to the left for more content.

Guided Practice

Determine the direction, vertex and range of $y = 7x^2 + 14x - 9$.

Solution:

Since $a = 7$ is positive, the direction of the parabola is upward. Now we find the vertex:

$$x = -\frac{b}{2a} = -\frac{14}{2 \cdot 7} = -\frac{14}{14} = -1.$$

Now, substitute $x = -1$ into the quadratic function:

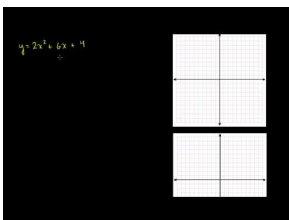
$$y = 7x^2 + 14x - 9 = 7(-1)^2 + 14(-1) - 9 = 7(1) - 14 - 9 = 7 - 23 = -16.$$

Thus, the vertex is $(-1, -16)$.

Since the parabola faces up, and the y -value of the vertex is -16 , the range is $y \geq -16$.

Practice

Sample explanations for some of the practice exercises below are available by viewing the following video. Note that there is not always a match between the number of the practice exercise in the video and the number of the practice exercise listed in the following exercise set. However, the practice exercise is the same in both. [CK-12 Basic Algebra: Graphs of Quadratic Functions](#) (16:05)



MEDIA

Click image to the left for more content.

1. Define the following terms in your own words.

1. Vertex
2. Line of symmetry
3. Parabola
4. Minimum

5. Maximum

2. Without graphing, how can you tell if $y = ax^2 + bx + c$ opens up or down?

Graph the following equations by making a table. Let $-3 \leq x \leq 3$. Determine the range of each equation.

3. $y = 2x^2$
4. $y = -x^2$
5. $y = x^2 - 2x + 3$
6. $y = 2x^2 + 4x + 1$
7. $y = -x^2 + 3$
8. $y = x^2 - 8x + 3$
9. $y = x^2 - 4$

Does the graph of the parabola open up or down?

10. $y = -2x^2 - 2x - 3$
11. $y = 3x^2$
12. $y = 16 - 4x^2$

Find the x -coordinate of the vertex of the following equations.

13. $x^2 - 14x + 45 = 0$
14. $8x^2 - 16x - 42 = 0$
15. $4x^2 + 16x + 12 = 0$
16. $x^2 + 2x - 15 = 0$

Graph the following functions by making a table of values. Use the vertex and x -intercepts to help you pick values for the table.

17. $y = 4x^2 - 4$
18. $y = -x^2 + x + 12$
19. $y = 2x^2 + 10x + 8$
20. $y = \frac{1}{2}x^2 - 2x$
21. $y = x - 2x^2$
22. $y = 4x^2 - 8x + 4$

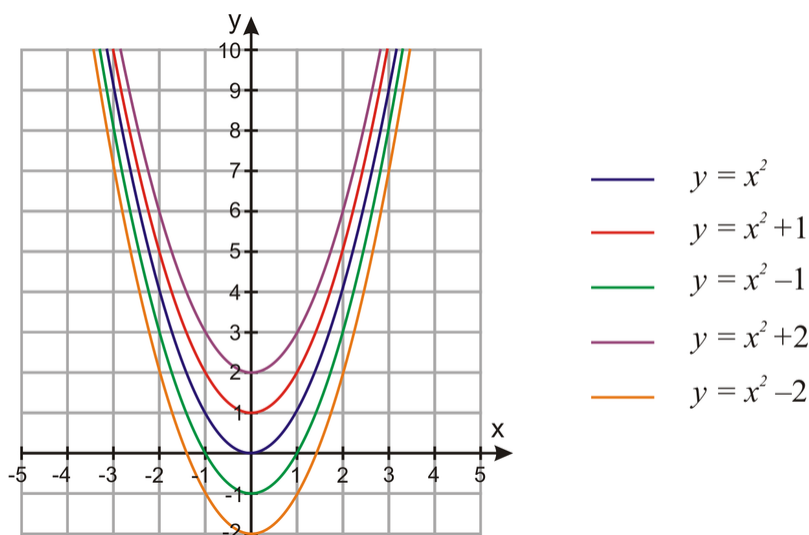
10.2 Vertical Shifts of Quadratic Functions

Here you'll learn about vertical shifts and their effects on the anatomy of a parabola.

Suppose the marketing department of a company is designing a new logo that includes a parabola. They've drawn the logo on a piece of graph paper, but they've decided that they want to change the position of the parabola by moving it 3 units down. If the original equation of the parabola was $y = 2x^2$, what would be the new equation of the parabola after they perform the vertical shift? How do you know? In this Concept, you'll learn about vertical shifts of quadratic functions so that you can analyze a situation like this one.

Guidance

Compare the five parabolas. What do you notice?



The five different parabolas are congruent with different y -intercepts. Each parabola has an equation of the form $y = ax^2 + c$, where $a = 1$ and $c = y$ -intercept. In general, the value of c will tell you where the parabola will intersect the y -axis.

The equation $y = ax^2 + c$ is a parabola with a y -intercept of $(0, c)$.

The vertical movement along a parabola's line of symmetry is called a **vertical shift**.

Example A

Determine the direction, shape, and y -intercept of the parabola formed by $y = \frac{3}{2}x^2 - 4$.

Solution: The value of a in the quadratic equation is $\frac{3}{2}$.

- Because a is positive, the parabola opens upward.
- Because a is greater than 1, the parabola is narrow about its line of symmetry.
- The value of c is -4 , so the y -intercept is $(0, -4)$.

Projectiles are often described by quadratic equations. When an object is dropped from a tall building or cliff, it does not travel at a constant speed. The longer it travels, the faster it goes. Galileo described this relationship between

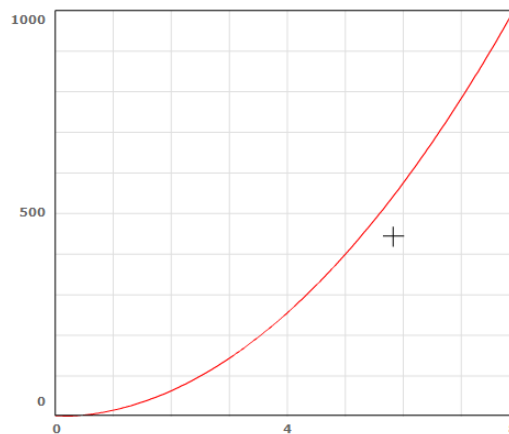
distance fallen and time. It is known as his kinematical law. It states the “distance traveled varies directly with the square of time.” As an algebraic equation, this law is:

$$d = 16t^2$$

Use this information to graph the distance an object travels during the first six seconds.

TABLE 10.2:

t	d
0	0
1	16
2	64
3	144
4	256
5	400
6	576



The parabola opens upward, and its vertex is located at the origin. Since $a > 1$, the graph is narrow about its line of symmetry. However, because the values of the dependent variable, d , are very large, the graph is misleading.

Example B

Anne is playing golf. On the fourth tee, she hits a slow shot down the level fairway. The ball follows a parabolic path described by the equation, $y = x - 0.04x^2$, where x = distance in feet from the tee and y = height of the golf ball, in feet.

Describe the shape of this parabola. What is its y -intercept?

Solution: The value of a in the quadratic equation is -0.04 .

- Because a is negative, the parabola opens downward.
- Because a is between -1 and 1 , the parabola is wide about its line of symmetry.
- The value of c is 0 , so the y -intercept is $(0, 0)$.

The distance it takes a car to stop (in feet) given its speed (in miles per hour) is given by the function $d(s) = \frac{1}{20}s^2 + s$. This equation is in standard form: $f(x) = ax^2 + bx + c$, where $a = \frac{1}{20}$, $b = 1$, and $c = 0$.

Graph the function by making a table of speed values.

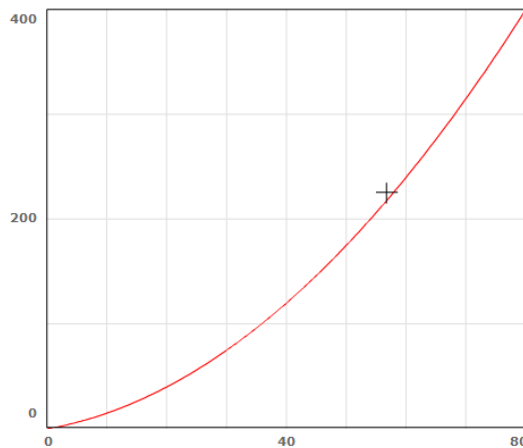


TABLE 10.3:

s	d
0	0
10	15
20	40
30	75
40	120
50	175
60	240

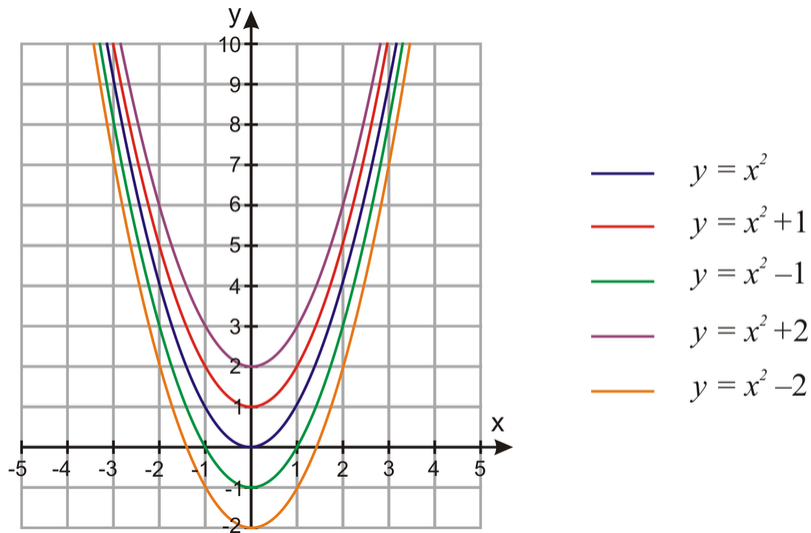
- The parabola opens upward with a vertex at $(0, 0)$.
- The line of symmetry is $x = 0$.
- The parabola is wide about its line of symmetry.

Using the function to find the stopping distance of a car travelling 65 miles per hour yields:

$$d(65) = \frac{1}{20}(65)^2 + 65 = 276.25 \text{ feet}$$

The Affect of Vertical Shifting on the x -Intercepts

Consider the graphs of quadratic functions in the beginning of this Concept:



The graph of $y = x^2 + 2$ has no x -intercepts; as we shift it down 1, it still has no x -intercepts. However, shifting down to $y = x^2$, this parabola has one x -intercept, at the vertex. Notice that shifting down one more to $y = x^2 - 1$, there are two x -intercepts.

Example C

Find the x -intercepts of $y = x^2 - 1$ by factoring.

Solution:

We can see that the x -intercepts are -1 and 1 from the graph above. Use this to check your factoring.

To factor $y = x^2 - 1$, notice that it fits the pattern $y = a^2 - b^2 = (a - b)(a + b)$. Thus:

$$y = x^2 - 1 = (x - 1)(x + 1).$$

Since $y = 0$ at the x -intercepts, solve:

$$0 = y = (x - 1)(x + 1) \Rightarrow (x - 1) = 0 \text{ or } (x + 1) = 0 \Rightarrow x = 1 \text{ or } x = -1.$$

So, the x -intercepts are -1 and 1.

Video Review



MEDIA

Click image to the left for more content.



MEDIA

Click image to the left for more content.

Guided Practice

Determine the direction, shape, y-intercept, and x-intercepts of $y = -x^2 - 3x + 18$.

Solution:

Since $a = -1$, the direction is down. The shape is neither wide nor narrow about the axis of symmetry. The y-intercept can be found by substituting in $x = 0$:

$$y = -x^2 - 3x + 18 = -(0)^2 - 3(0) + 18 = 18$$

So the y-intercept is $(0, 18)$. Notice 18 is also the value of c . This is always true for quadratic functions.

To find the x-intercepts, factor:

$$y = -x^2 - 3x + 18 = -[x^2 + 3x - 18] = -[x^2 - 3x + 6x - 18] = -[x(x - 3) + 6(x - 3)] = -[(x + 6)(x - 3)]$$

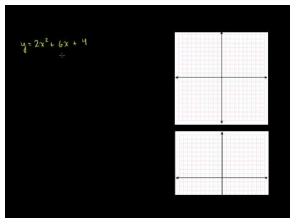
This means that $y = 0$ when

$$x + 6 = 0 \text{ or } x - 3 = 0 \Rightarrow x = -6 \text{ or } x = 3.$$

Thus, the x-intercepts are -6 and 3.

Practice

Sample explanations for some of the practice exercises below are available by viewing the following video. Note that there is not always a match between the number of the practice exercise in the video and the number of the practice exercise listed in the following exercise set. However, the practice exercise is the same in both. [CK-12 Basic Algebra: Graphs of Quadratic Functions](#) (16:05)

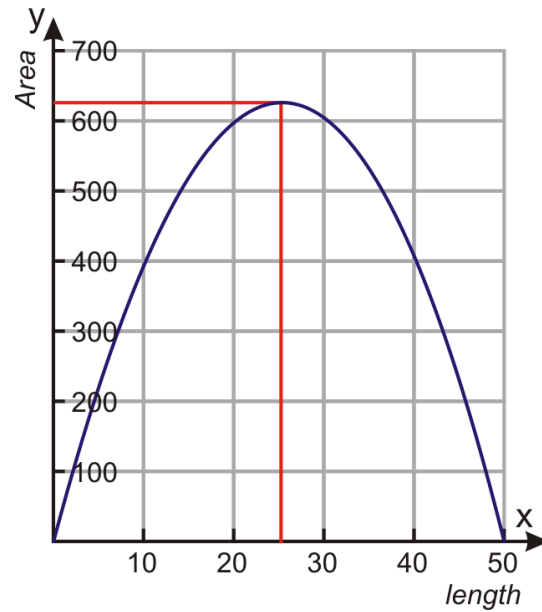


MEDIA

Click image to the left for more content.

1. Using the parabola below, identify the following:

- Vertex
- y-intercept
- x-intercepts
- Domain
- Range
- Line of symmetry
- Is a positive or negative?
- Is $a - 1 < a < 1$ or $a < -1$ or $a > 1$?



2. Use the stopping distance function from the Concept to find:
 - a. $d(45)$
 - b. What speed has a stopping distance of about 96 feet?
3. Using Galileo's Law from the Concept, find:
 - a. The distance an object has fallen at 3.5 seconds
 - b. The total distance the object has fallen in 3.5 seconds

Which has a more positive y -intercept?

4. $y = x^2$ or $y = 4x^2$
5. $y = 2x^2 + 4$ or $y = \frac{1}{2}x^2 + 4$
6. $y = -2x^2 - 2$ or $y = -x^2 - 2$

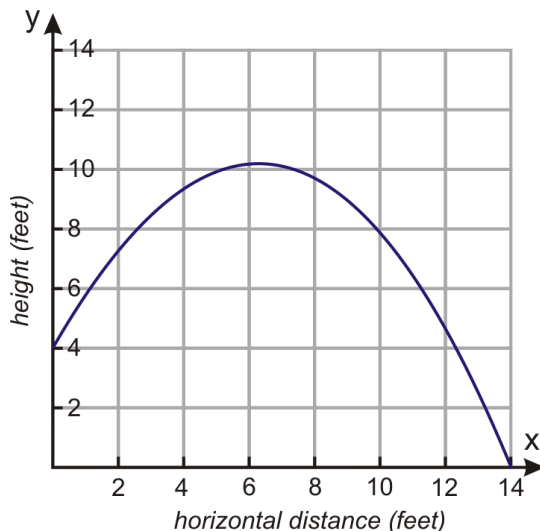
Identify the vertex and y -intercept. Is the vertex a maximum or a minimum?

7. $y = x^2 - 2x - 8$
8. $y = -x^2 + 10x - 21$
9. $y = 2x^2 + 6x + 4$

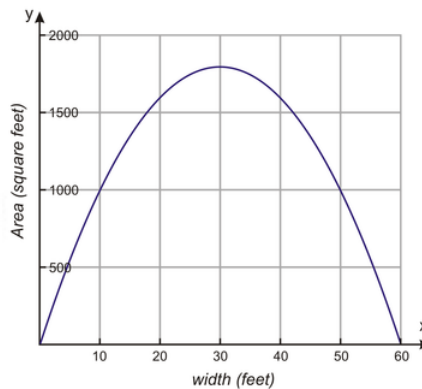
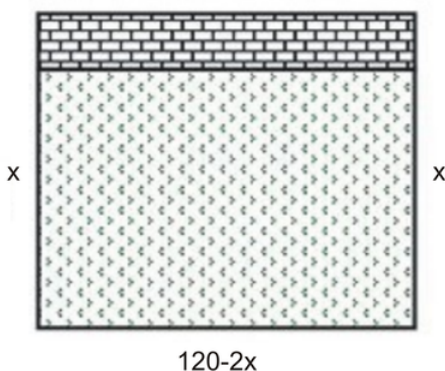
Which equation has a larger vertex?

10. $y = x^2$ or $y = 4x^2$
11. $y = -2x^2$ or $y = -2x^2 - 2$
12. $y = 3x^2 - 3$ or $y = 3x^2 - 6$

13. Nadia is throwing a ball to Peter. Peter does not catch the ball and it hits the ground. The graph shows the path of the ball as it flies through the air. The equation that describes the path of the ball is $y = 4 + 2x - 0.16x^2$. Here, y is the height of the ball and x is the horizontal distance from Nadia. Both distances are measured in feet. How far from Nadia does the ball hit the ground? At what distance, x , from Nadia, does the ball attain its maximum height? What is the maximum height?



14. Peter wants to enclose a vegetable patch with 120 feet of fencing. He wants to put the vegetable patch against an existing wall, so he needs fence for only three of the sides. The equation for the area is given by $a = 120x - x^2$. From the graph, find what dimensions of the rectangle would give him the greatest area.



Mixed Review

15. Factor $6u^2v - 11u^2v^2 - 10u^2v^3$ using its GCF.
16. Factor into primes: $3x^2 + 11x + 10$.
17. Simplify $-\frac{1}{9}(63)\left(-\frac{3}{7}\right)$.
18. Solve for b : $|b + 2| = 9$.
19. Simplify $(4x^3y^2z)^3$.
20. What is the slope and y -intercept of $7x + 4y = 9$?

10.3 Use Graphs to Solve Quadratic Equations

Here you'll learn how to find the solutions to quadratic equations by using graphs.

Suppose a batter hits a baseball, and the height of the baseball above the ground can be modeled by the function $h(t) = -16t^2 + 50t + 2$. What is the maximum height that the baseball would attain? How long would it take for the baseball to hit the ground? In this Concept, you'll learn how to use graphs to solve quadratic equations so that you can solve real-world problems such as this one.

Guidance

Isaac Newton's theory for projectile motion is represented by the equation:

$$h(t) = -\frac{1}{2}(g)t^2 + v_0t + h_0$$

- t = time (usually in seconds)
- g = gravity due to acceleration; either 9.8 m/s or 32 ft/s
- v_0 = initial velocity
- h_0 = initial height of object

Example A

"A quarterback throws a football at an initial height of 5.5 feet with an initial velocity of 35 feet per second. Write an equation and describe the shape of the graph."

Solution: Substitute the appropriate information into the equation for projectile motion:

- $g = 32$ because the information is given in feet
- $v_0 = 35$
- $h_0 = 5.5$

The equation becomes $h(t) = -\frac{1}{2}(32)t^2 + 35t + 5.5 \rightarrow h(t) = -16t^2 + 35t + 5.5$.

Using the information from the previous Concept, we know:

- The value of a is negative, so the parabola opens downward.
- The vertex is a maximum point.
- The y -intercept is $(0, 5.5)$.
- The graph is narrow about its line of symmetry.

Solving a Quadratic Using a Graphing Calculator

Problems can be solved using graphs of equations. We can use a graphing calculator to make this easier.

Example B

At what time will the football in the previous example be 6 feet high?

Solution: Previous Concepts focused on how to solve systems by graphing. You can think of this situation as a system: $\begin{cases} y = -16t^2 + 35t + 5.5 \\ y = 6 \end{cases}$. You are looking for the appropriate x -coordinates that give a y -coordinate of 6 feet. Therefore, you are looking for the **intersection** of the two equations.

Begin by typing the equations into the [Y =] menu of your calculator. Adjust the window until you see the vertex, y -intercept, x -intercepts, and the horizontal line of 6 units.

```

P1ot1 P1ot2 P1ot3
\Y1 [-16X^2+35X+5.5.
5
\Y2 [6
\Y3 [=
\Y4 [=
\Y5 [=
\Y6 [=

```

```

WINDOW
Xmin=0
Xmax=3
Xscl=1
Ymin=0
Ymax=30
Yscl=2
Xres=1

```



By looking at the graph, you can see there are **two** points of intersection. Using graphing methods learned previously, find both points of intersection.

$(0.014, 6)$ and $(2.172, 6)$

At 0.014 seconds and again at 2.17 seconds, the football is six feet from the ground.

Using a Calculator to Find the Vertex

You can also use a graphing calculator to determine the **vertex** of the parabola. The vertex of this equation is a maximum point, so in the [CALCULATE] menu of the graphing option, look for [MAXIMUM].

```

[2nd][CALC]
1:value
2:zero
3:minimum
4:maximum
5:intersect
6:dy/dx
7:∫f(x)dx

```

Choose option #4. The calculator will ask you, “LEFT BOUND?” Move the cursor to the left of the vertex and hit [ENTER].

The calculator will ask, “RIGHT BOUND?” Move the cursor to the right of the vertex and hit [ENTER].

Hit [ENTER] to guess.

Example C

When will the football from Examples A and B reach its maximum height? When will it reach 25 feet high? When will the football hit the ground, assuming no one will catch it?

Solution:

Using the steps above, find the maximum. The maximum point on this parabola is (1.09, 24.64).

The vertex represents the maximum point of this quadratic equation. Since its height is 24.64 feet, we can safely say the football will **not** reach 25 feet.

We now want to know at what time the height is zero: $\begin{cases} y = -16t^2 + 35t + 5.5 \\ y = 0 \end{cases}$. By repeating the process above and finding the intersection of the two lines, the solution is (2.33, 0). At 2.33 seconds, the ball will hit the ground.

The point at which the ball reaches the ground ($y = 0$) represents the x -**intercept** of the graph.

Solutions of a Quadratic Equation:

The x -intercept of a quadratic equation is also called a **root**, **solution**, or **zero**. Quadratic equations have zero solutions when they never cross the x -axis, one solution when the vertex is the only point that intersects the x -axis, and two solutions, or two x -intercepts, in any other case.

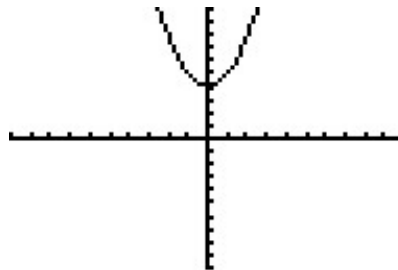
Example D

Determine the number of solutions to $y = x^2 + 4$.

Solution:

Graph this quadratic equation, either by hand or with a graphing calculator. Adjust the calculator's window to see both halves of the parabola, the vertex, the x -axis, and the y -intercept.

This parabola does not cross the x -axis. The solutions to a quadratic equation are also known as its x -**intercepts**. Therefore, this quadratic equation has **no real solutions**.

**Video Review**

MEDIA

Click image to the left for more content.



MEDIA

Click image to the left for more content.

Guided Practice

Andrew has 100 feet of fence to enclose a rectangular tomato patch. He wants to find the dimensions of the rectangle that encloses the most area.

Solution:

The perimeter of a rectangle is the sum of all four sides. Let $w = \text{width}$ and $l = \text{length}$. The perimeter of the tomato patch is $100 = l + l + w + w \rightarrow 100 = 2l + 2w$.

The area of a rectangle is found by the formula $A = l(w)$. We are looking for the intersection between the area and perimeter of the rectangular tomato patch. This is a system.

$$\begin{cases} 100 = 2l + 2w \\ A = l(w) \end{cases}$$

Before we can graph this system, we need to rewrite the first equation for either l or w . We will then use the Substitution Property.

$$100 = 2l + 2w \rightarrow 100 - 2l = 2w$$

$$\frac{100 - 2l}{2} = w \rightarrow 50 - l = w$$

Use the Substitution Property to replace the variable w in the second equation with the expression $50 - l$.

$$A = l(50 - l) = 50l - l^2$$

Graph this equation to visualize it.

```

WINDOW
Xmin=0
Xmax=60
Xscl=5
Ymin=-5
Ymax=650
Yscl=50
Xres=1


```



The parabola opens downward so the vertex is a maximum. The maximum value is $(25, 625)$. The length of the tomato patch should be 25 feet long to achieve a maximum area of 625 square feet.

Practice

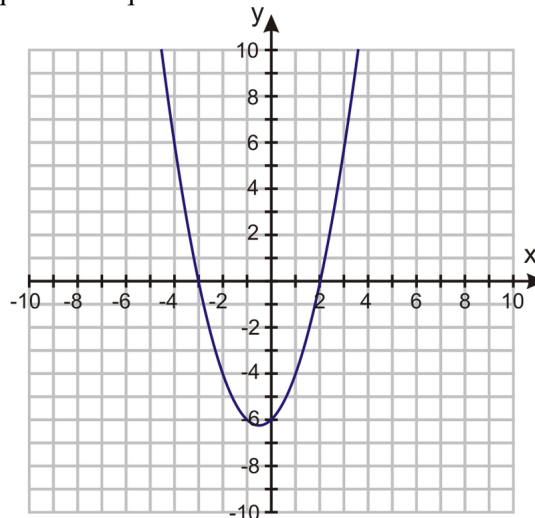
Sample explanations for some of the practice exercises below are available by viewing the following video. Note that there is not always a match between the number of the practice exercise in the video and the number of the practice exercise listed in the following exercise set. However, the practice exercise is the same in both. [CK-12 Basic Algebra:Solving Quadratic Equations by Graphing \(10:51\)](#)



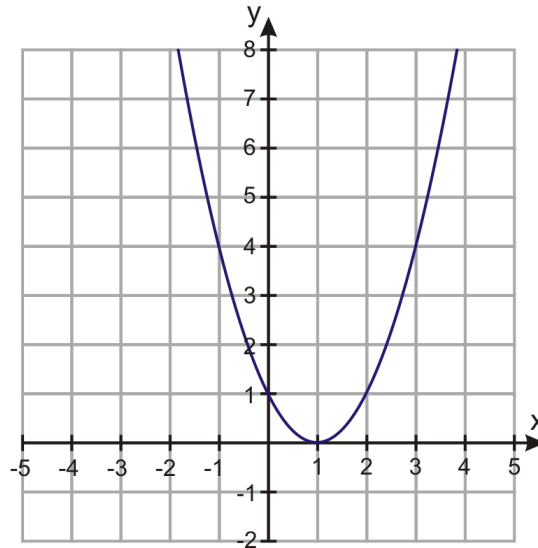
MEDIA

Click image to the left for more content.

- What are the alternate names for the solution to a parabola?
- Define the following variables in the function $h(t) = -\frac{1}{2}(g)t^2 + v_0t + h_0$.
 - h_0
 - t
 - v_0
 - g
 - $h(t)$
- A rocket is launched from a height of 3 meters with an initial velocity of 15 meters per second.
 - Model the situation with a quadratic equation.
 - What is the maximum height of the rocket? When will this occur?
 - What is the height of the rocket after four seconds? What does this mean?
 - When will the rocket hit the ground?
 - At what time will the rocket be 13 meters from the ground?
- How many solutions does the quadratic equation have?



5.



6.

7. $-x^2 + 3 = 0$
8. $2x^2 + 5x - 7 = 0$
9. $-x^2 + x - 3 = 0$

Find the zeros of the quadratic equations below. If necessary, round your answers to the nearest hundredth.

9. $y = -x^2 + 4x - 4$
10. $y = 3x^2 - 5x$
11. $x^2 + 3x + 6 = 0$
12. $-2x^2 + x + 4 = 0$
13. $x^2 - 9 = 0$
14. $x^2 + 6x + 9 = 0$
15. $10x^2 - 3x^2 = 0$
16. $\frac{1}{2}x^2 - 2x + 3 = 0$
17. $y = -3x^2 + 4x - 1$
18. $y = 9 - 4x^2$
19. $y = x^2 + 7x + 2$
20. $y = -x^2 - 10x - 25$
21. $y = 2x^2 - 3x$
22. $y = x^2 - 2x + 5$
23. Andrew is an avid archer. He launches an arrow that takes a parabolic path, modeled by the equation $y = -4.9t^2 + 48t$. Find how long it takes the arrow to come back to the ground.

For questions 24 – 26,

- (a) Find the roots of the quadratic polynomial.
- (b) Find the vertex of the quadratic polynomial.

24. $y = x^2 + 12x + 5$
25. $y = x^2 + 3x + 6$
26. $y = -x^2 - 3x + 9$
27. Sharon needs to create a fence for her new puppy. She purchased 40 feet of fencing to enclose three sides of a fence. What dimensions will produce the greatest area for her puppy to play?
28. An object is dropped from the top of a 100-foot-tall building.
 - a. Write an equation to model this situation.
 - b. What is the height of the object after 1 second?

- c. What is the maximum height of the object?
- d. At what time will the object be 50 feet from the ground?
- e. When will the object hit the ground?

Mixed Review

- 29. Factor $3r^2 - 4r + 1$.
- 30. Simplify $(2 + \sqrt{3})(4 + \sqrt{3})$.
- 31. Write the equation in slope-intercept form and identify the slope and y-intercept: $9 - 3x + 18y = 0$.
- 32. The half life of a particular substance is 16 days. An organism has 100% of the substance on day zero. What is the percentage remaining after 44 days?
- 33. Multiply and write your answer in scientific notation: $0.00000009865 \times 123564.21$.
- 34. A mixture of 12% chlorine is mixed with a second mixture containing 30% chlorine. How much of the 12% mixture is needed to mix with 80 mL to make a final solution of 150 mL with a 20% chlorine concentration?

10.4 Use Square Roots to Solve Quadratic Equations

Here you'll learn how to solve problems involving quadratic equations by using square roots.

What if a bird were flying through the air carrying a worm in its beak? All of the sudden, the worm slips from the bird's beak, and the poor bird no longer has his dinner! If the bird were flying at a height of 2000 feet, how long would it take the worm to hit the ground, assuming there were no air resistance? In this Concept, you'll learn to solve quadratic equations like the one representing this scenario by using square roots.

Guidance

Suppose you needed to find the value of x such that $x^2 = 81$. How could you solve this equation?

- Make a table of values.
- Graph this equation as a system.
- Cancel the square using its inverse operation.

The inverse of a square is a square root.

By applying the square root to each side of the equation, you get:

$$x = \pm \sqrt{81}$$

$$x = 9 \text{ or } x = -9$$

In general, the solution to a quadratic equation of the form $0 = ax^2 - c$ is:

$$x = \sqrt{\frac{c}{a}} \text{ or } x = -\sqrt{\frac{c}{a}}$$

Another way to write this is $x = \pm \sqrt{\frac{c}{a}}$.

Example A

Solve for x when $0 = 2x^2 - 18$.

Solution:

$$0 = 2x^2 - 18 \Rightarrow 18 = 2x^2 \Rightarrow 9 = x^2 \Rightarrow x = \pm 3.$$

This is the same result you would get if you use the formula above:

$$x = \pm \sqrt{\frac{c}{a}} = \pm \sqrt{\frac{18}{2}} = \pm \sqrt{9} = \pm 3.$$

Example B

Solve $(x - 4)^2 - 9 = 0$.

Solution:

Begin by adding 9 to each side of the equation.

$$(x - 4)^2 = 9$$

Cancel the square by taking the square root.

$$x - 4 = 3 \text{ or } x - 4 = -3$$

Solve both equations for x : $x = 7$ or $x = 1$

Real-World Problems Using Square Roots

In the previous Concept, you learned Newton's formula for projectile motion. Let's examine a situation in which there is no initial velocity. When a ball is dropped, there is no outward force placed on its path; therefore, there is no initial velocity.

Example C

A ball is dropped from a 40-foot building. When does the ball reach the ground?

Solution:

Using the equation from the previous Concept, $h(t) = -\frac{1}{2}(g)t^2 + v_0t + h_0$, and substituting the appropriate information, you get:

$$\begin{array}{l} \text{Simplify:} \\ \text{Solve for } x: \end{array} \quad \begin{array}{l} 0 = -\frac{1}{2}(32)t^2 + (0)t + 40 \\ 0 = -16t^2 + 40 \\ -40 = -16t^2 \\ 2.5 = t^2 \\ t \approx 1.58 \text{ and } t \approx -1.58 \end{array}$$

Because t is in seconds, it does not make much sense for the answer to be negative. So the ball will reach the ground at approximately 1.58 seconds.

Video Review**MEDIA**

Click image to the left for more content.



MEDIA

Click image to the left for more content.

Guided Practice

A rock is dropped from the top of a cliff and strikes the ground 7.2 seconds later. How high is the cliff in meters?

Solution:

Using Newton's formula, substitute the appropriate information.

$$0 = -\frac{1}{2}(9.8)(7.2)^2 + (0)(7.2) + h_0$$

Simplify:

$$0 = -254.016 + h_0$$

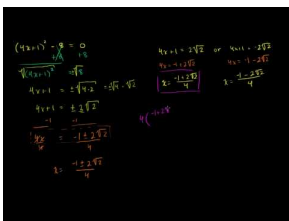
Solve for h_0 :

$$h_0 = 254.016$$

The cliff is approximately 254 meters tall.

Practice

Sample explanations for some of the practice exercises below are available by viewing the following video. Note that there is not always a match between the number of the practice exercise in the video and the number of the practice exercise listed in the following exercise set. However, the practice exercise is the same in both. [CK-12 Basic Algebra: Solving Quadratic Equations by Square Roots \(11:03\)](#)



MEDIA

Click image to the left for more content.

Solve each quadratic equation.

1. $x^2 = 196$
2. $x^2 - 1 = 0$
3. $x^2 - 100 = 0$
4. $x^2 + 16 = 0$
5. $9x^2 - 1 = 0$
6. $4x^2 - 49 = 0$
7. $64x^2 - 9 = 0$
8. $x^2 - 81 = 0$
9. $25x^2 - 36 = 0$
10. $x^2 + 9 = 0$
11. $x^2 - 16 = 0$
12. $x^2 - 36 = 0$

13. $16x^2 - 49 = 0$
14. $(x - 2)^2 = 1$
15. $(x + 5)^2 = 16$
16. $(2x - 1)^2 - 4 = 0$
17. $(3x + 4)^2 = 9$
18. $(x - 3)^2 + 25 = 0$
19. $x^2 - 6 = 0$
20. $x^2 - 20 = 0$
21. $3x^2 + 14 = 0$
22. $(x - 6)^2 = 5$
23. $(4x + 1)^2 - 8 = 0$
24. $(x + 10)^2 = 2$
25. $2(x + 3)^2 = 8$
26. How long does it take a ball to fall from a roof to the ground 25 feet below?
27. Susan drops her camera in the river from a bridge that is 400 feet high. How long is it before she hears the splash?
28. It takes a rock 5.3 seconds to splash in the water when it is dropped from the top of a cliff. How high is the cliff in meters?
29. Nisha drops a rock from the roof of a building 50 feet high. Ashaan drops a quarter from the top-story window, which is 40 feet high, exactly half a second after Nisha drops the rock. Which hits the ground first?
30. Victor drops an apple out of a window on the 10th floor, which is 120 feet above ground. One second later, Juan drops an orange out of a 6th-floor window, which is 72 feet above the ground. Which fruit reaches the ground first? What is the time difference between the fruits' arrival to the ground?

Mixed Review

31. Graph $y = 2x^2 + 6x + 4$. Identify the following:
 1. Vertex
 2. x -intercepts
 3. y -intercepts
 4. axis of symmetry
32. What is the difference between $y = x + 3$ and $y = x^2 + 3$?
33. Determine the domain and range of $y = -(x - 2)^2 + 7$.
34. The Glee Club is selling hot dogs and sodas for a fundraiser. On Friday the club sold 112 hot dogs and 70 sodas and made \$154.00. On Saturday the club sold 240 hot dogs and 120 sodas and made \$300.00. How much is each soda? Each hot dog?

10.5 Completing the Square

Here you'll learn how to find the solutions to quadratic equations by completing the square.

What if for homework you were given a perfect square trinomial to factor, which you wrote in your notebook. However, you accidentally dropped your notebook in a mud puddle, and the last term in the trinomial became obscured. All you can currently see are the first two terms, $x^2 + 16x$. How would you go about finding the third term? Once you found the third term, if you factored the trinomial and set it equal to 0, what would be the solution(s) to the equation? In this Concept, you'll learn how to complete the square to solve quadratic equations like this one.

Try This

Multimedia Link: Visit the <http://www.mathsisfun.com/algebra/completing-square.html> - mathisfun webpage for more explanation on completing the square.

Guidance

Completing the square is a method used to create a **perfect square trinomial**, as you learned in the previous Concept.

A **perfect square trinomial** has the form $a^2 + 2(ab) + b^2$, which factors into $(a + b)^2$.

Example A

Find the missing value to create a perfect square trinomial: $x^2 + 8x + ?$.

Solution:

The value of a is x . To find b , use the definition of the middle term of the perfect square trinomial.

$$\begin{array}{l} a \text{ is } x, \\ \text{Solve for } b : \end{array} \quad \begin{array}{l} 2(ab) = 8x \\ 2(xb) = 8x \\ \frac{2xb}{2x} = \frac{8x}{2x} \rightarrow b = 4 \end{array}$$

To complete the square you need the value of b^2 .

$$b^2 = 4^2 = 16$$

The missing value is 16. The perfect square trinomial we are looking for is $x^2 + 8x + 16$.

To complete the square, the equation must be in the form: $y = x^2 + \left(\frac{1}{2}b\right)x + b^2$.

Looking at the above example, $\frac{1}{2}(8) = 4$ and $4^2 = 16$.

Example B

Find the missing value to complete the square of $x^2 + 22x + ?$. Then factor.

Solution:

Use the definition of the middle term to complete the square.

$$\frac{1}{2}(b) = \frac{1}{2}(22) = 11$$

Therefore, $11^2 = 121$ and the perfect square trinomial is $x^2 + 22x + 121$. Rewriting in its factored form, the equation becomes $(x + 11)^2$.

Solve Using Completing the Square

Once you have completed the square, you can solve using the method learned in the last Concept.

Example C

Solve $x^2 + 22x + 121 = 0$.

Solution: By completing the square and factoring, the equation becomes:

Solve by taking the square root:	$(x + 11)^2 = 0$
Separate into two equations:	$x + 11 = \pm 0$
Solve for x :	$x + 11 = 0$ or $x + 11 = 0$
	$x = -11$

Example D

Solve $k^2 - 6k + 8 = 0$.

Solutions:

Using the definition to complete the square, $\frac{1}{2}(b) = \frac{1}{2}(-6) = -3$. Therefore, the last value of the perfect square trinomial is $(-3)^2 = 9$. The equation given is:

$$k^2 - 6k + 8 = 0, \text{ and } 8 \neq 9$$

In order to factor, complete the square by subtracting 8 and then adding 9 to each side:

$$k^2 - 6k = -8$$

Remember to use the Addition Property of Equality.

Factor the left side.	$k^2 - 6k + 9 = -8 + 9$
Solve using square roots.	$(k - 3)^2 = 1$
	$\sqrt{(k - 3)^2} = \pm \sqrt{1}$
	$k - 3 = 1$ or $k - 3 = -1$
	$k = 4$ or $k = 2$

Video Review



MEDIA

Click image to the left for more content.



MEDIA

Click image to the left for more content.

Guided Practice

Solve $x^2 + 10x + 9 = 0$.

Solutions:

First, find b :

$$\frac{1}{2}(b) = \frac{1}{2}(10) = 5$$

Therefore, the last value of the perfect square trinomial is $5^2 = 25$. The equation given is:

$$x^2 + 10x + 9 = 0, \text{ and } 9 \neq 25$$

In order to factor, we must turn the left side into a perfect square trinomial.

Subtract 9:

$$x^2 + 10x = -9$$

Complete the square: Remember to use the Addition Property of Equality.

Factor the left side.

Solve using square roots.

$$x^2 + 10x + 25 = -9 + 25$$

$$(x + 5)^2 = 16$$

$$\sqrt{(x + 5)^2} = \pm \sqrt{16}$$

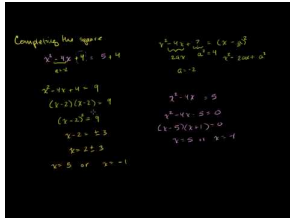
$$x + 5 = 4 \text{ or } x + 5 = -4$$

$$x = -1 \text{ or } x = -9$$

Practice

Sample explanations for some of the practice exercises below are available by viewing the following video. Note that there is not always a match between the number of the practice exercise in the video and the number of the

practice exercise listed in the following exercise set. However, the practice exercise is the same in both. [CK-12 Basic Algebra:Solving Quadratic Equations by Completing the Square](#) (14:06)



MEDIA

Click image to the left for more content.

1. What does it mean to “complete the square”?
2. Describe the process used to solve a quadratic equation by completing the square.

Complete the square for each expression.

3. $x^2 + 5x$
4. $x^2 - 2x$
5. $x^2 + 3x$
6. $x^2 - 4x$
7. $3x^2 + 18x$
8. $2x^2 - 22x$
9. $8x^2 - 10x$
10. $5x^2 + 12x$

Solve each quadratic equation by completing the square.

11. $x^2 - 4x = 5$
12. $x^2 - 5x = 10$
13. $x^2 + 10x + 15 = 0$
14. $x^2 + 15x + 20 = 0$
15. $2x^2 - 18x = 0$
16. $4x^2 + 5x = -1$
17. $10x^2 - 30x - 8 = 0$
18. $5x^2 + 15x - 40 = 0$

Mixed Review

19. A ball dropped from a height of four feet bounces 70% of its previous height. Write the first five terms of this sequence. How high will the ball reach on its 8th bounce?
20. Rewrite in standard form: $y = \frac{2}{7}x - 11$.
21. Graph $y = 5\left(\frac{1}{2}\right)^x$. Is this exponential growth or decay? What is the growth factor?
22. Solve for r : $|3r - 4| \leq 2$.
23. Solve for m : $-2m + 6 = -8(5m + 4)$.
24. Factor $4a^2 + 36a - 40$.

10.6 Vertex Form of a Quadratic Equation

Here you'll learn how to use the vertex form of a quadratic equation in order to find the vertex by completing the square.

Suppose a diver jumped into the ocean, and his path could be traced by the parabola $y = x^2 - 4x + 2$, with the value of y representing the diver's distance above or below the surface of the water in feet. How far below the surface of the water would the diver descend? In this Concept, you'll learn how to find the vertex of a parabola like the one representing the diver's path by completing the square.

Guidance

There are several ways to write an equation for a parabola:

- Standard form: $y = ax^2 + bx + c$
- Factored form: $y = (x + m)(x + n)$
- **Vertex form:** $y = a(x - h)^2 + k$

Vertex form of a quadratic equation: $y = a(x - h)^2 + k$, where $(h, k) = \text{vertex of the parabola}$ and $a = \text{leading coefficient}$

Example A

Determine the vertex of $y = -\frac{1}{2}(x - 4)^2 - 7$. Is this a minimum or a maximum point of the parabola?

Solution:

Using the definition of vertex form, $h = 4$ and $k = -7$.

- The vertex is $(4, -7)$.
- Because a is negative, the parabola opens downward.
- Therefore, the vertex $(4, -7)$ is a maximum point of the parabola.

Once you know the vertex, you can use symmetry to graph the parabola.

TABLE 10.4:

x	y
2	
3	
4	-7
5	
6	

Example B

Write the equation for a parabola with $a = 3$ and vertex $(-4, 5)$ in vertex form.

Solution:

Using the definition of vertex form, $y = a(x - h)^2 + k$, $h = -4$ and $k = 5$.

$$y = 3(x - (-4))^2 + 5$$

$$y = 3(x + 4)^2 + 5$$

Finding the Vertex by Completing the Square

Consider the quadratic equation $y = x^2 + 4x - 2$. What is its vertex? You could graph this using your calculator and determine the vertex or you could **complete the square**.

Example C

Find the vertex of $y = x^2 + 4x - 2$.

Solution:

Start by completing the square. Since $\frac{1}{2}b = \frac{1}{2}4 = 2$, $2^2 = 4$.

	$y = x^2 + 4x - 2$
Add 2 to each side	$y + 2 = x^2 + 4x$
Add 4 to each side	$y + 2 + 4 = x^2 + 4x + 4$
Factor the perfect square trinomial	$y + 6 = (x + 2)^2$
Subtract 6 from each side to get into vertex form	$y = (x + 2)^2 - 6$

The vertex is $(-2, -6)$.

Video Review**MEDIA**

Click image to the left for more content.

**MEDIA**

Click image to the left for more content.

Guided Practice

An arrow is shot straight up from a height of 2 meters with a velocity of 50 m/s. What is the maximum height that the arrow will reach and at what time will that happen?

Solution:

The maximum height is the vertex of the parabola, when the parabola faces down. Therefore, we need to rewrite the equation in vertex form.

We rewrite the equation in vertex form.

$$y = -4.9t^2 + 50t + 2$$

$$y - 2 = -4.9t^2 + 50t$$

$$y - 2 = -4.9(t^2 - 10.2t)$$

Complete the square inside the parentheses.

$$y - 2 - 4.9(5.1)^2 = -4.9(t^2 - 10.2t + (5.1)^2)$$

Add 129.45 to get into vertex form.

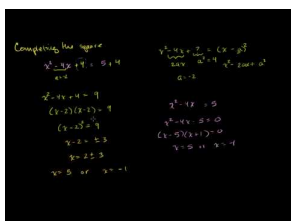
$$y - 129.45 = -4.9(t - 5.1)^2$$

$$y = -4.9(t - 5.1)^2 + 129.45$$

Since the y -value of the vertex is 129.45, then the maximum height is 129.45 meters.

Practice

Sample explanations for some of the practice exercises below are available by viewing the following video. Note that there is not always a match between the number of the practice exercise in the video and the number of the practice exercise listed in the following exercise set. However, the practice exercise is the same in both. [CK-12 Basic Algebra: Solving Quadratic Equations by Completing the Square](#) (14:06)

**MEDIA**

Click image to the left for more content.

1. Using the equation from the arrow in the Concept:
 - a. How high will an arrow be four seconds after being shot? After eight seconds?
 - b. At what time will the arrow hit the ground again?

Write the equation for the parabola with the given information.

2. $a = a$, vertex = (h, k)
3. $a = \frac{1}{3}$, vertex = $(1, 1)$
4. $a = -2$, vertex = $(-5, 0)$
5. Containing $(5, 2)$ and vertex $(1, -2)$
6. $a = 1$, vertex = $(-3, 6)$

Rewrite each quadratic function in vertex form.

7. $y = x^2 - 6x$
8. $y + 1 = -2x^2 - x$
9. $y = 9x^2 + 3x - 10$
10. $y = 32x^2 + 60x + 10$

For each parabola, find:

1. The vertex
 2. x -intercepts
 3. y -intercept
 4. If it opens up or down
 5. The graph the parabola
11. $y - 4 = x^2 + 8x$
 12. $y = -4x^2 + 20x - 24$
 13. $y = 3x^2 + 15x$
 14. $y + 6 = -x^2 + x$
 15. $x^2 - 10x + 25 = 9$
 16. $x^2 + 18x + 81 = 1$
 17. $4x^2 - 12x + 9 = 16$
 18. $x^2 + 14x + 49 = 3$
 19. $4x^2 - 20x + 25 = 9$
 20. $x^2 + 8x + 16 = 25$
 21. Sam throws an egg straight down from a height of 25 feet. The initial velocity of the egg is 16 ft/sec. How long does it take the egg to reach the ground?
 22. Amanda and Dolvin leave their house at the same time. Amanda walks south and Dolvin bikes east. Half an hour later they are 5.5 miles away from each other and Dolvin has covered three miles more than the distance that Amanda covered. How far did Amanda walk and how far did Dolvin bike?
 23. Two cars leave an intersection. One car travels north; the other travels east. When the car traveling north had gone 30 miles, the distance between the cars was 10 miles more than twice the distance traveled by the car heading east. Find the distance between the cars at that time.

Quick Quiz

1. Graph $y = -3x^2 - 12x - 13$ and identify:
 - a. The vertex
 - b. The axis of symmetry
 - c. The domain and range
 - d. The y -intercept
 - e. The x -intercepts estimated to the nearest tenth
2. Solve $y = x^2 + 9x + 20$ by graphing.
3. Solve for x : $74 = x^2 - 7$.
4. A baseball is thrown from an initial height of 5 feet with an initial velocity of 100 ft/sec.
 - a. What is the maximum height of the ball?
 - b. When will the ball reach the ground?
 - c. When is the ball 90 feet in the air?
5. Solve by completing the square: $v^2 - 20v + 25 = 6$

10.7 Quadratic Formula

Here you'll learn how to solve quadratic equations by using the quadratic formula.

What if you needed to solve the quadratic equation $x^2 + x - 5 = 0$ in order to determine the width of a rectangular map? You graphed the function $f(x) = x^2 + x - 5$, but from the graph you can only tell the approximate width, and you want a more precise answer. In this Concept, you'll learn to use the quadratic formula to solve quadratic equations like the one representing this situation so that you can get exact solutions to the equations.

Watch This

Multimedia Link For more examples of solving quadratic equations using the quadratic formula, see [KhanAcademyEquation Part 2](#) (9:14).

The image shows handwritten mathematical work on a black background. On the left, the general quadratic formula is written: $Ax^2 + Bx + C = 0$, $x = \frac{-B \pm \sqrt{B^2 - 4AC}}{2A}$. Below this, three specific equations are solved using the formula:

1. $-9x^2 - 9x + 6 = 0$ with $A = -9$, $B = -9$, $C = 6$. The discriminant is $(-9) \pm \sqrt{81 - 4(-9)(6)}$, leading to -18 .

2. $9x^2 - 9x + 6 = 0$ with $A = 9$, $B = -9$, $C = 6$. The discriminant is $9 \pm \sqrt{81 - 216}$, leading to -18 .

3. $9x^2 - 9x + 6 = 0$ with $A = 9$, $B = -9$, $C = 6$. The discriminant is $9 \pm \sqrt{81 - 216}$, leading to -18 .

MEDIA

Click image to the left for more content.

Figure 2 provides more examples of solving equations using the quadratic equation. This video is not necessarily different from the examples above, but it does help reinforce the procedure of using the quadratic formula to solve equations.

Guidance

Previous Concepts have presented three methods to solve a quadratic equation:

- By graphing to find the zeros;
- By solving using square roots; and
- By using completing the square to find the solutions

This Concept will present a fourth way to solve a quadratic equation: using the quadratic formula.

History of the Quadratic Formula

As early as 1200 BC, people were interested in solving quadratic equations. The Babylonians solved simultaneous equations involving quadratics. In 628 AD, Brahmagupta, an Indian mathematician, gave the first explicit formula to solve a quadratic equation. The quadratic formula was written as it is today by the Arabic mathematician Al-Khwarizmi. It is his name upon which the word “Algebra” is based.

The solution to any quadratic equation in standard form, $0 = ax^2 + bx + c$, is:

$$x = \frac{-b \pm \sqrt{b^2 - 4ac}}{2a}$$

Example A

Solve $x^2 + 10x + 9 = 0$ using the quadratic formula.

Solution:

We know from the last Concept the answers are $x = -1$ or $x = -9$.

By applying the quadratic formula and $a = 1$, $b = 10$, and $c = 9$, we get:

$$\begin{aligned} x &= \frac{-10 \pm \sqrt{(10)^2 - 4(1)(9)}}{2(1)} \\ x &= \frac{-10 \pm \sqrt{100 - 36}}{2} \\ x &= \frac{-10 \pm \sqrt{64}}{2} \\ x &= \frac{-10 \pm 8}{2} \\ x &= \frac{-10 + 8}{2} \text{ or } x = \frac{-10 - 8}{2} \\ x &= -1 \text{ or } x = -9 \end{aligned}$$

Example B

Solve $-4x^2 + x + 1 = 0$ using the quadratic formula.

Solution:

Quadratic formula:

$$x = \frac{-b \pm \sqrt{b^2 - 4ac}}{2a}$$

Plug in the values $a = -4$, $b = 1$, $c = 1$:

$$x = \frac{-1 \pm \sqrt{(1)^2 - 4(-4)(1)}}{2(-4)}$$

Simplify:

$$x = \frac{-1 \pm \sqrt{1 + 16}}{-8} = \frac{-1 \pm \sqrt{17}}{-8}$$

Separate the two options:

$$x = \frac{-1 + \sqrt{17}}{-8} \text{ and } x = \frac{-1 - \sqrt{17}}{-8}$$

Solve:

$$x \approx -.39 \text{ and } x \approx .64$$

Example C

Solve $8t^2 + 10t + 3 = 0$ using the quadratic formula.

Solution:

<p>Quadratic formula:</p> <p>Plug in the values $a = 8, b = 10, c = 3$:</p> <p>Simplify:</p> <p>Separate the two options:</p> <p>Separate the two options:</p> <p>Solve:</p>	$x = \frac{-b \pm \sqrt{b^2 - 4ac}}{2a}$ $x = \frac{-10 \pm \sqrt{(10)^2 - 4(8)(3)}}{2(8)}$ $x = \frac{-10 \pm \sqrt{100 + 96}}{16} = \frac{-10 \pm \sqrt{196}}{16}$ $x = \frac{-10 + \sqrt{196}}{16} \text{ and } x = \frac{-10 - \sqrt{196}}{16}$ $x = \frac{-10 + 14}{16} \text{ and } x = \frac{-10 - 14}{16}$ $x = \frac{1}{4} \text{ and } x = -\frac{3}{2}$
--	--

Video Review



MEDIA

Click image to the left for more content.



MEDIA

Click image to the left for more content.

Guided Practice

Solve $3k^2 + 11k = 4$ using the quadratic formula.

Solution:

First, we must make it so one side is equal to zero:

$$3k^2 + 11k = 4 \Rightarrow 3k^2 + 11k - 4 = 0$$

Now it is in the correct form for using the quadratic formula.

Quadratic formula:

$$x = \frac{-b \pm \sqrt{b^2 - 4ac}}{2a}$$

Plug in the values $a = 3, b = 11, c = -4$:

$$x = \frac{-11 \pm \sqrt{(11)^2 - 4(3)(-4)}}{2(3)}$$

Simplify:

$$x = \frac{-11 \pm \sqrt{121 + 48}}{6} = \frac{-11 \pm \sqrt{169}}{6}$$

Separate the two options:

$$x = \frac{-11 + \sqrt{169}}{6} \text{ and } x = \frac{-11 - \sqrt{169}}{6}$$

Separate the two options:

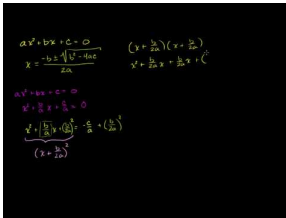
$$x = \frac{-11 + 13}{6} \text{ and } x = \frac{-11 - 13}{6}$$

Solve:

$$x = \frac{1}{3} \text{ and } x = -4$$

Practice


The following video will guide you through a proof of the quadratic formula. [CK-12 Basic Algebra:Proof of Quadratic Formula \(7:44\)](#)



MEDIA

Click image to the left for more content.

Sample explanations for some of the practice exercises below are available by viewing the following video. Note that there is not always a match between the number of the practice exercise in the video and the number of the practice exercise listed in the following exercise set. However, the practice exercise is the same in both. [CK-12 Basic Algebra:Using the QuadraticFormula \(16:32\)](#)



MEDIA

Click image to the left for more content.

1. What is the quadratic formula? When is the most appropriate situation to use this formula?
2. When was the first known solution of a quadratic equation recorded?

Solve the following quadratic equations using the quadratic formula.

3. $x^2 + 4x - 21 = 0$
4. $x^2 - 6x = 12$
5. $3x^2 - \frac{1}{2}x = \frac{3}{8}$
6. $2x^2 + x - 3 = 0$

7. $-x^2 - 7x + 12 = 0$
8. $-3x^2 + 5x = 0$
9. $4x^2 = 0$
10. $x^2 + 2x + 6 = 0$

Mixed Review

11. The theater has three types of seating: balcony, box, and floor. There are four times as many floor seats as balcony. There are 200 more box seats than balcony seats. The theater has a total of 1,100 seats. Determine the number of balcony, box, and floor seats in the theater.
12. Write an equation in slope-intercept form containing (10, 65) and (5, 30).
13. 120% of what number is 60?
14. Name the set(s) of numbers to which $\sqrt{16}$ belongs.
15. Divide: $6\frac{1}{7} \div -2\frac{3}{4}$.
16. The set is the number of books in a library. Which of the following is the most appropriate domain for this set: all real numbers; positive real numbers; integers; or whole numbers? Explain your reasoning.

10.8 Comparing Methods for Solving Quadratics

Here you'll learn how to choose between the different techniques for solving quadratic problems learned in previous Concepts.

Suppose you need to solve the quadratic equation $-16t^2 + 22t + 3 = 0$ in order to determine after how many seconds a pebble shot up into the air by a slingshot will hit the ground. How could you solve such an equation? Could you use graphing, factoring, taking the square root, completing the square, and/or the quadratic formula? How would you choose which method to use? After completing this Concept, you'll be able to choose the best method for solving a quadratic problem such as this one.

Guidance

Which Method to Use?

Usually you will not be told which method to use. You will have to make that decision yourself. However, here are some guidelines to which methods are better in different situations.

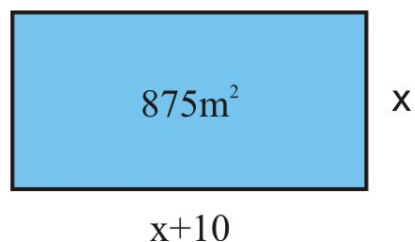
- **Graphing** – a good method to visualize the parabola and easily see the intersections. Not always precise.
- **Factoring** – best if the quadratic expression is easily factorable
- **Taking the square root** – is best used with the form $0 = ax^2 - c$
- **Completing the square** – can be used to solve any quadratic equation. It is a very important method for rewriting a quadratic function in vertex form.
- **Quadratic formula** – is the method that is used most often for solving a quadratic equation. If you are using factoring or the quadratic formula, make sure that the equation is in standard form.

Example A

The length of a rectangular pool is 10 meters more than its width. The area of the pool is 875 square meters. Find the dimensions of the pool.

Solution:

Begin by drawing a sketch. The formula for the area of a rectangle is $A = l(w)$.



$$A = (x + 10)(x)$$

$$875 = x^2 + 10x$$

Now solve for x using any method you prefer.

The result is $x = 25$. So, the length of the pool is 35 meters and the width is 25 meters.

In order to find the stopping distance s of a car with a constant deceleration a applied when at a speed u , this formula can be used: $s = \frac{u^2}{2a}$.

Example B

Find the maximum speed of a car if it must stop before 30 feet and if the constant deceleration is 20 feet per second squared.

Solution:

This problem can be solved by substituting, simplifying, and taking the square root:

Begin with the equation:	$s = \frac{u^2}{2a}$
Substitute in the values:	$30 = \frac{u^2}{2 \cdot 20}$
Simplify algebraically:	$1200 = u^2$
Take the square root of each side:	$u \approx \pm 34.64$

Since negative speed does not make sense, the maximum speed is 34.64 feet per second.

Example C

The product of two consecutive even integers is 288. Find the integers.

Solution:

Let the first integer be n . Then the next even integer is 2 larger: $n + 2$. Their product is:

$$n(n + 2) = 288 \Rightarrow n^2 + 2n - 288 = 0$$

This can be solved by factoring or using the quadratic equation. Either way, $n = 72$, and so the two numbers are 72 and 74.

Video Review



MEDIA

Click image to the left for more content.



MEDIA

Click image to the left for more content.

Guided Practice

The Bernoulli effect says that there is a relationship between the speed u and the pressure P of an air particle at a given height h :

$$\frac{u^2}{2} + P = h$$

Find the speed of an air particle at a height of 1000 meters with a pressure of 978.25 millibars.

Solution:

This problem can be solved by substituting, simplifying and taking the square root:

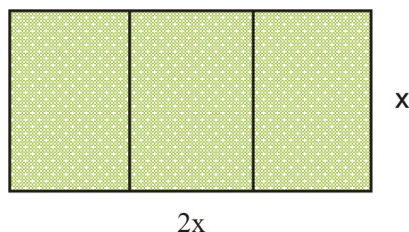
Begin with the equation:	$\frac{u^2}{2} + P = h$
Substitute in the values:	$\frac{u^2}{2} + 978.25 = 1000$
Simplify algebraically:	$u^2 = 43.5$
Take the square root of each side:	$u \approx \pm 6.6$

Negative speed does not make sense in this context, and so the speed is 6.6 meters per second.

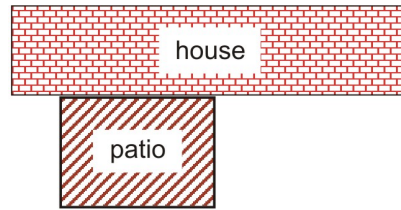
Practice

Solve the following quadratic equations using the method of your choice.

1. $x^2 - x = 6$
2. $x^2 - 12 = 0$
3. $-2x^2 + 5x - 3 = 0$
4. $x^2 + 7x - 18 = 0$
5. $3x^2 + 6x = -10$
6. $-4x^2 + 4000x = 0$
7. $-3x^2 + 12x + 1 = 0$
8. $x^2 + 6x + 9 = 0$
9. $81x^2 + 1 = 0$
10. $-4x^2 + 4x = 9$
11. $36x^2 - 21 = 0$
12. $x^2 + 2x - 3 = 0$
13. The product of two consecutive integers is 72. Find the two numbers.
14. The product of two consecutive odd integers is 11 less than 3 times their sum. Find the integers.
15. The length of a rectangle exceeds its width by 3 inches. The area of the rectangle is 70 square inches. Find its dimensions.
16. Suzie wants to build a garden that has three separate rectangular sections. She wants to fence around the whole garden and between each section as shown. The plot is twice as long as it is wide and the total area is 200 square feet. How much fencing does Suzie need?



17. Angel wants to cut off a square piece from the corner of a rectangular piece of plywood. The larger piece of wood is 4 feet \times 8 feet and the cut off part is $\frac{1}{3}$ of the total area of the plywood sheet. What is the length of the side of the square?



18. Mike wants to fence three sides of a rectangular patio that is adjacent to the back of his house. The area of the patio is 192 ft^2 and the length is 4 feet longer than the width. Find how much fencing Mike will need.

Mixed Review

19. A theater has three types of seating: balcony, box, and floor. There are four times as many floor seats as balcony. There are 200 more box seats than balcony seats. The theater has a total of 1,100 seats. Determine the number of balcony, box, and floor seats in the theater.
20. Write an equation in slope-intercept form containing (10, 65) and (5, 30).
21. 120% of what number is 60?
22. Name the set(s) of numbers to which $\sqrt{16}$ belongs.
23. Divide: $6\frac{1}{7} \div -2\frac{3}{4}$.
24. The set is the number of books in a library. Which of the following is the most appropriate domain for this set: all real numbers; positive real numbers; integers; or whole numbers? Explain your reasoning.

10.9 Solutions Using the Discriminant

Here you'll learn how to find the number of solutions to a quadratic equation by calculating the discriminant and how to use this information to solve problems.

Suppose that the balance of your checking account in dollars can be modeled by the function $B(t) = 0.001t^2 - t + 300$, where t is the number of days the checking account has been open. Will the balance of your checking account ever be \$100? In this Concept, you'll learn how to find the discriminant of a quadratic equation so that you can find the number of solutions to the equation and answer real-world questions such as this one.

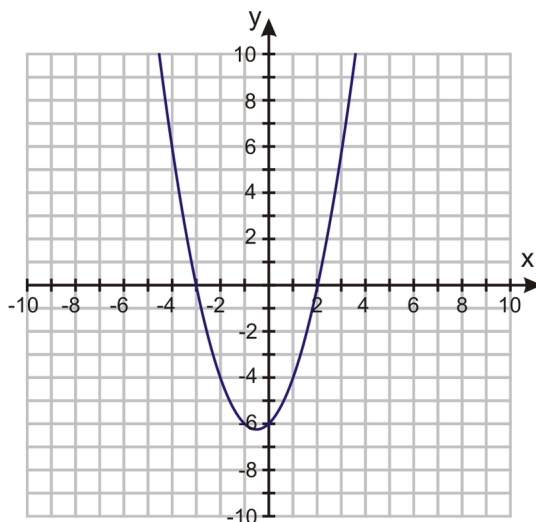
Watch This

Multimedia Link: This <http://sciencestage.com/v/20592/a-level-maths--roots-of-a-quadratic-equation--discriminant--examsolutions.html> - video, presented by Science Stage, helps further explain the discriminant using the Quadratic Formula.

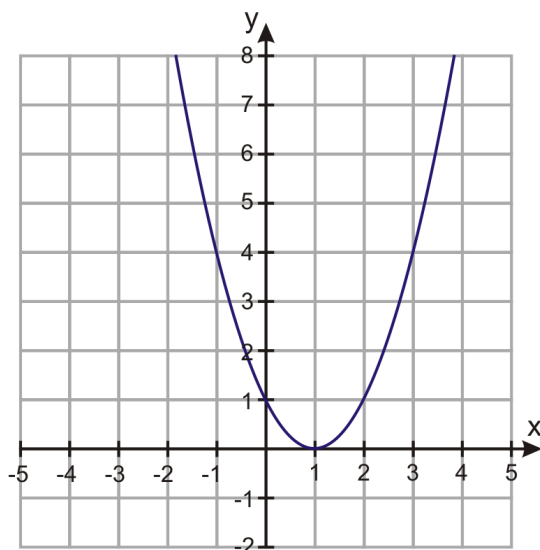
Guidance

You have seen parabolas that intersect the x -axis twice, once, or not at all. There is a relationship between the number of real x -intercepts and the quadratic formula.

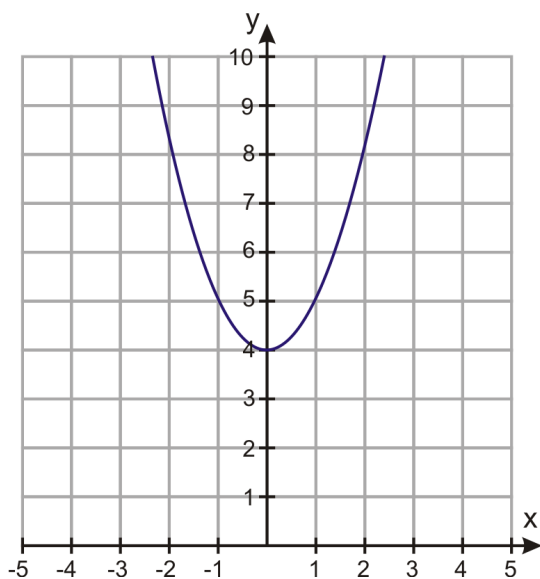
Case 1: The parabola has two x -intercepts. This situation has two possible solutions for x , because the value inside the square root is positive. Using the quadratic formula, the solutions are $x = \frac{-b + \sqrt{b^2 - 4ac}}{2a}$ and $x = \frac{-b - \sqrt{b^2 - 4ac}}{2a}$.



Case 2: The parabola has one x -intercept. This situation occurs when the vertex of the parabola just touches the x -axis. This is called a repeated root, or **double root**. The value inside the square root is zero. Using the quadratic formula, the solution is $x = \frac{-b}{2a}$.



Case 3: The parabola has no x -intercept. This situation occurs when the parabola does not cross the x -axis. The value inside the square root is negative, so there are no real roots. The solutions to this type of situation are **imaginary**, which you will learn more about in a later textbook.



The value inside the square root of the quadratic formula is called the **discriminant**. It is symbolized by D . It dictates the number of real solutions the quadratic equation has. This can be summarized with the Discriminant Theorem.

- If $D > 0$, the parabola will have two x -intercepts. The quadratic equation will have two real solutions.
- If $D = 0$, the parabola will have one x -intercept. The quadratic equation will have one real solution.
- If $D < 0$, the parabola will have no x -intercepts. The quadratic equation will have zero real solutions.

Example A

Determine the number of real solutions to $-3x^2 + 4x + 1 = 0$.

Solution: By finding the value of its discriminant, you can determine the number of x -intercepts the parabola has and thus the number of real solutions.

$$D = b^2 - 4(a)(c)$$

$$D = (4)^2 - 4(-3)(1)$$

$$D = 16 + 12 = 28$$

Because the discriminant is positive, the parabola has two real x -intercepts and thus two real solutions.

Example B

Determine the number of solutions to $-2x^2 + x = 4$.

Solution: Before we can find its discriminant, we must write the equation in standard form: $ax^2 + bx + c = 0$.

Subtract 4 from each side of the equation: $-2x^2 + x - 4 = 0$.

Find the discriminant:

$$D = (1)^2 - 4(-2)(-4)$$

$$D = 1 - 32 = -31$$

The value of the discriminant is negative; there are no real solutions to this quadratic equation. The parabola does not cross the x -axis.

Example C

Emma and Bradon own a factory that produces bike helmets. Their accountant says that their profit per year is given by the function $P = 0.003x^2 + 12x + 27,760$, where x represents the number of helmets produced. Their goal is to make a profit of \$40,000 this year. Is this possible?

Solution: The equation we are using is $40,000 = 0.003x^2 + 12x + 27,760$. By finding the value of its discriminant, you can determine if the profit is possible.

Begin by writing this equation in standard form:

$$0 = 0.003x^2 + 12x - 12,240$$

$$D = b^2 - 4(a)(c)$$

$$D = (12)^2 - 4(0.003)(-12,240)$$

$$D = 144 + 146.88 = 290.88$$

Because the discriminant is positive, the parabola has two real solutions. Yes, the profit of \$40,000 is possible.

Video Review



MEDIA

Click image to the left for more content.



MEDIA

 Click image to the left for more content.

Guided Practice

Determine the number of solutions for $x^2 - 2x + 1 = 0$.

Solution:

Substitute the values into the discriminant:

$$D = b^2 - 4(a)(c)$$

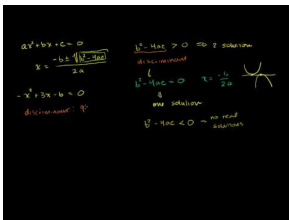
$$D = (-2)^2 - 4(1)(1)$$

$$D = 4 - 4 = 0$$

Because the discriminant is zero, the parabola has one real x -intercept and thus one real solution.

Practice

Sample explanations for some of the practice exercises below are available by viewing the following video. Note that there is not always a match between the number of the practice exercise in the video and the number of the practice exercise listed in the following exercise set. However, the practice exercise is the same in both. [CK-12 Basic Algebra: Discriminant of Quadratic Equations](#) (10:14)



MEDIA

 Click image to the left for more content.

1. What is a discriminant? What does it do?
2. What is the formula for the discriminant?
3. Can you find the discriminant of a linear equation? Explain your reasoning.
4. Suppose $D = 0$. Draw a sketch of this graph and determine the number of real solutions.
5. $D = -2.85$. Draw a possible sketch of this parabola. What is the number of real solutions to this quadratic equation.
6. $D > 0$. Draw a sketch of this parabola and determine the number of real solutions.

Find the discriminant of each quadratic equation.

7. $2x^2 - 4x + 5 = 0$
8. $x^2 - 5x = 8$

9. $4x^2 - 12x + 9 = 0$
10. $x^2 + 3x + 2 = 0$
11. $x^2 - 16x = 32$
12. $-5x^2 + 5x - 6 = 0$

Determine the nature of the solutions of each quadratic equation.

13. $-x^2 + 3x - 6 = 0$
14. $5x^2 = 6x$
15. $41x^2 - 31x - 52 = 0$
16. $x^2 - 8x + 16 = 0$
17. $-x^2 + 3x - 10 = 0$
18. $x^2 - 64 = 0$

A solution to a quadratic equation will be irrational if the discriminant is **not a perfect square**. If the discriminant is a perfect square, then the solutions will be rational numbers. Using the discriminant, determine whether the solutions will be rational or irrational.

19. $x^2 = -4x + 20$
20. $x^2 + 2x - 3 = 0$
21. $3x^2 - 11x = 10$
22. $\frac{1}{2}x^2 + 2x + \frac{2}{3} = 0$
23. $x^2 - 10x + 25 = 0$
24. $x^2 = 5x$
25. Marty is outside his apartment building. He needs to give Yolanda her cell phone but he does not have time to run upstairs to the third floor to give it to her. He throws it straight up with a vertical velocity of 55 feet/second. Will the phone reach her if she is 36 feet up? (Hint: The equation for the height is given by $y = -32t^2 + 55t + 4$.)
26. Bryson owns a business that manufactures and sells tires. The revenue from selling the tires in the month of July is given by the function $R = x(200 - 0.4x)$ where x is the number of tires sold. Can Bryson's business generate revenue of \$20,000 in the month of July?
27. Marcus kicks a football in order to score a field goal. The height of the ball is given by the equation $y = -\frac{32}{6400}x^2 + x$, where y is the height and x is the horizontal distance the ball travels. We want to know if Marcus kicked the ball hard enough to go over the goal post, which is 10 feet high.

Mixed Review

28. Factor $6x^2 - x - 12$.
29. Find the vertex of $y = -\frac{1}{4}x^2 - 3x - 12$ by completing the square.
30. Solve using the quadratic formula: $-4x^2 - 15 = -4x$.
31. How many centimeters are in four fathoms? (Hint: 1 *fathom* = 6 *feet*)
32. Graph the solution to $\begin{cases} 3x + 2y \leq -4 \\ x - y > -3 \end{cases}$.
33. How many ways can 3 toppings be chosen from 7 options?

10.10 Linear, Exponential, and Quadratic Models

Here you'll learn how to determine whether certain models fit data.

Suppose you recorded the high temperature for each day of the year. If you wanted to model this data with a function, how would you decide whether to use a linear model, exponential model, or quadratic model. Could your graphing calculator help you decide? If so, what buttons would you have to push on your calculator in order to get relevant information? In this Concept, you'll learn about using linear, exponential, and quadratic models for data sets such as the one described.

Guidance

So far in this text you have learned how to graph three very important types of equations.

- Linear equations in slope-intercept form: $y = mx + b$
- Exponential equations of the form: $y = a(b)^x$
- Quadratic equations in standard form: $y = ax^2 + bx + c$

In real-world applications, the function that describes some physical situation is not given. Finding the function is an important part of solving problems. For example, scientific data such as observations of planetary motion are often collected as a set of measurements given in a table. One job for a scientist is to figure out which function best fits the data. In this Concept, you will learn some methods that are used to identify which function describes the relationship between the dependent and independent variables in a problem.

Using Differences to Determine the Model

By finding the differences between the dependent values, we can determine the **degree** of the model for the data.

- If the first difference is the same value, the model will be **linear**.
- If the second difference is the same value, the model will be **quadratic**.
- If the number of times the difference has been taken exceeds five, the model may be exponential or some other special equation.

Example A

x	y	
-2	-4	} $-1 + 4 = 3$
-1	-1	
0	2	} $2 + 1 = 3$
1	5	
2	8	} $5 - 2 = 3$

The first difference is the same value (3). This data can be modeled using a **linear regression line**.

The equation to represent this data is $y = 3x + 2$.

When we look at the difference of the y -values, we must make sure that we examine entries for which the x -values increase by the same amount.

Example B

An example of a quadratic model would have the following look when taking the second differences.

x	$y = 2x^2 - 3x + 1$	difference of y -values	difference of differences
0	0	$0 - 1 = -1$	$3 + 1 = 4$ $7 - 3 = 4$ $11 - 7 = 4$ $15 - 11 = 4$ $19 - 15 = 4$
1	1	$3 - 0 = 3$	
2	3	$10 - 3 = 7$	
3	10	$21 - 10 = 11$	
4	21	$36 - 21 = 15$	
5	36	$55 - 36 = 19$	
6	55		

Using Ratios to Determine the Model

Finding the differences involves subtracting the dependent values leading to the degree of the model. By taking the **ratio** of the values, one can determine whether the model is exponential.

If the ratio of dependent values is the same, then the data is modeled by an **exponential** equation, as in the example below.

Example C

x	y	
0	4	} $\frac{12}{4} = 3$
1	12	
2	36	} $\frac{36}{12} = 3$
3	108	
4	324	} $\frac{108}{36} = 3$

Determine the Model Using a Graphing Calculator

To enter data into your graphing calculator, find the [STAT] button. Choose [EDIT].

```

2001 CALC TESTS
1:Edit...
2:SortA(
3:SortD(
4:ClrList
5:SetUpEditor
    
```

```

L1 | L2 | L3 | 1
-----
L1(1) =
    
```

- [L1] represents your independent variable, your x.
- [L2] represents your dependent variable, your y.

Enter the data into the appropriate list. Using the first set of data to illustrate yields:

```

L1 | L2 | L3 | 2
-2 | -4 | ---
-1 | -1 | ---
0 | 0 | ---
1 | 1 | ---
2 | 4 | ---
-----
L2(6) =
    
```

You already know this data is best modeled by a linear regression line. Using the [CALCULATE] menu of your calculator, find the linear regression line, *linreg*.

```

EDIT  [CALC]  TESTS
1:1-Var Stats
2:2-Var Stats
3:Med-Med
4:LinReg(ax+b)
5:QuadReg
6:CubicReg
7:QuartReg

LinReg
y=ax+b
a=2.6
b=1.6

```

Look at the screen above. This is where you can find the *quadratic regression line* [QUADREG], the *cubic regression line* [CUBICREG], and the exponential regression line, [EXPREG].

Video Review



MEDIA

Click image to the left for more content.



MEDIA

Click image to the left for more content.

Guided Practice

Determine whether the function in the given table is linear, quadratic or exponential.

x	y
0	5
1	10
3	20
4	25
6	35

Solution:

At first glance, this function might not look linear because the difference in the y -values is not always the same.

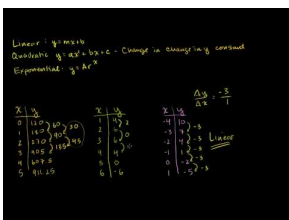
difference of x - values	x	y	difference of y - values
$1 - 0 = 1$ {	0	5	} $-1 + 4 = 3$
$3 - 1 = 2$ {	1	10	} $2 + 1 = 3$
$4 - 3 = 1$ {	3	20	} $5 - 2 = 3$
$6 - 4 = 2$ {	4	25	} $8 - 5 = 3$
	6	35	

However, we see that the difference in y -values is 5 when we increase the x -values by 1, and it is 10 when we increase the x -values by 2. This means that the difference in y -values is always 5 when we increase the x -values by 1. Therefore, the function is linear.

The equation is modeled by $y = 5x + 5$.

Practice

Sample explanations for some of the practice exercises below are available by viewing the following video. Note that there is not always a match between the number of the practice exercise in the video and the number of the practice exercise listed in the following exercise set. However, the practice exercise is the same in both. [CK-12 Basic Algebra: Linear, Quadratic, and Exponential Models \(8:15\)](#)



MEDIA

Click image to the left for more content.

1. The second set of differences have the same value. What can be concluded?
2. Suppose you find the differences five different times and still don't come to a common value. What can you safely assume?
3. Why would you test the ratio of differences?
4. If you had a cubic (3^{rd} -degree) function, what could you conclude about the differences?

Determine whether the data can be modeled by a linear equation, a quadratic equation, or neither.

5.

x	-4	-3	-2	-1	0	1
y	10	7	4	1	-2	-5

6.

x	-2	-1	0	1	2	3
y	4	3	2	3	6	11

7.

x	0	1	2	3	4	5
y	50	75	100	125	150	175

8.

x	-10	-5	0	5	10	15
y	10	2.5	0	2.5	10	22.5

9.

x	1	2	3	4	5	6
y	4	6	6	4	0	-6

10.

x	-3	-2	-1	0	1	2
y	-27	-8	-1	0	1	8

Can the following data be modeled with an exponential function?

11.

x	0	1	2	3	4	5
y	200	300	1800	8300	25,800	62,700

12.

x	0	1	2	3	4	5
y	120	180	270	405	607.5	911.25

13.

x	0	1	2	3	4	5
y	4000	2400	1440	864	518.4	311.04

Determine whether the data is best represented by a quadratic, linear, or exponential function. Find the function that best models the data.

14.

x	0	1	2	3	4
y	400	500	625	781.25	976.5625

15.

x	-9	-7	-5	-3	-1	1
y	-3	-2	-1	0	1	2

16.

x	-3	-2	-1	0	1	2	3
y	14	4	-2	-4	-2	4	14

17. As a ball bounces up and down, the maximum height it reaches continually decreases. The table below shows the height of the bounce with regard to time.
- Using a graphing calculator, create a scatter plot of this data.
 - Find the quadratic function of best fit.
 - Draw the quadratic function of best fit on top of the scatter plot.
 - Find the maximum height the ball reaches.
 - Predict how high the ball is at 2.5 seconds.

TABLE 10.5:

Time (seconds)	Height (inches)
2	2
2.2	16
2.4	24
2.6	33
2.8	38
3.0	42
3.2	36
3.4	30
3.6	28
3.8	14
4.0	6

18. A chemist has a 250-gram sample of a radioactive material. She records the amount remaining in the sample every day for a week and obtains the following data.
- Draw a scatter plot of the data.
 - Which function best suits the data: exponential, linear, or quadratic?
 - Find the function of best fit and draw it through the scatter plot.
 - Predict the amount of material present after 10 days.

TABLE 10.6:

Day	Weight(grams)
0	250
1	208
2	158
3	130
4	102
5	80
6	65
7	50

19. The following table show the pregnancy rate (per 1000) for U.S. women aged 15 – 19 (source: US Census Bureau). Make a scatter plot with the rate as the dependent variable and the number of years since 1990 as the independent variable. Find which model fits the data best. Use this model to predict the rate of teen pregnancy in the year 2010.

TABLE 10.7:

Year	Rate of Pregnancy (per 1000)
1990	116.9
1991	115.3
1992	111.0
1993	108.0
1994	104.6
1995	99.6
1996	95.6
1997	91.4
1998	88.7
1999	85.7
2000	83.6
2001	79.5
2002	75.4

Mixed Review

20. Cam bought a bag containing 16 cups of flour. He needs $2\frac{1}{2}$ cups for each loaf of bread. Write this as an equation in slope-intercept form. When will Cam run out of flour?
21. A basketball is shot from an initial height of 7 feet with an velocity of 10 ft/sec .
- Write an equation to model this situation.
 - What is the maximum height the ball reaches?
 - What is the y -intercept? What does it mean?
 - When will the ball hit the ground?
 - Using the discriminant, determine whether the ball will reach 11 feet. If so, how many times?
22. Graph $y = |x - 2| + 3$. Identify the domain and range of the graph.
23. Solve $6 \geq -5(c + 4) + 10$.
24. Is this relation a function? $\{(-6, 5), (-5, -3), (-2, -1), (0, -3), (2, 5)\}$. If so, identify its domain and range.
25. Name and describe five problem-solving strategies you have learned so far.

10.11 Applications of Function Models

Here you'll learn how to choose a function model when solving a problem.

Suppose a company has recorded the number of employees it has had at the beginning of each month that it has been in business. It wants to model this data with a function, but it is not sure which type of function to use. Could the company get a sense of what type of function to use by plotting the data points? If so, what would the data points have to look like for a linear model to be used? How about for an exponential model or a quadratic model? In this Concept, you'll learn to choose a function model for data sets like this one.

Guidance

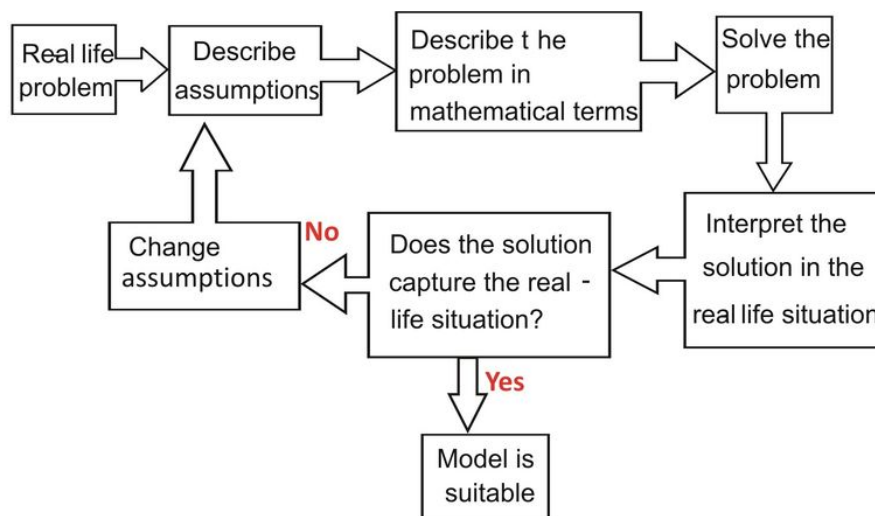
As you learn more and more mathematical methods and skills, it is important to think about the purpose of mathematics and how it works as part of a bigger picture. Mathematics is used to solve problems that often arise from real-life situations. **Mathematical modeling** is a process by which we start with a real-life situation and arrive at a quantitative solution.

Modeling involves creating a set of mathematical equations that describes a situation, solving those equations, and using them to understand the real-life problem.

Often the model needs to be adjusted because it does not describe the situation as well as we wish.

A mathematical model can be used to gain understanding of a real-life situation by learning how the system works, which variables are important in the system, and how they are related to each other. Models can also be used to predict and forecast what a system will do in the future or for different values of a parameter. Lastly, a model can be used to estimate quantities that are difficult to evaluate exactly.

Mathematical models are like other types of models. The goal is not to produce an exact copy of the “real” object but rather to give a representation of some aspect of the real thing. The modeling process can be summarized as a flow chart:



Notice that the modeling process is very similar to the problem-solving format we have been using throughout this book. One of the most difficult parts of the modeling process is determining which function best describes a situation. We often find that the function we choose is not appropriate. Then we must choose a different one.

Consider an experiment regarding the elasticity of a spring.

Example A

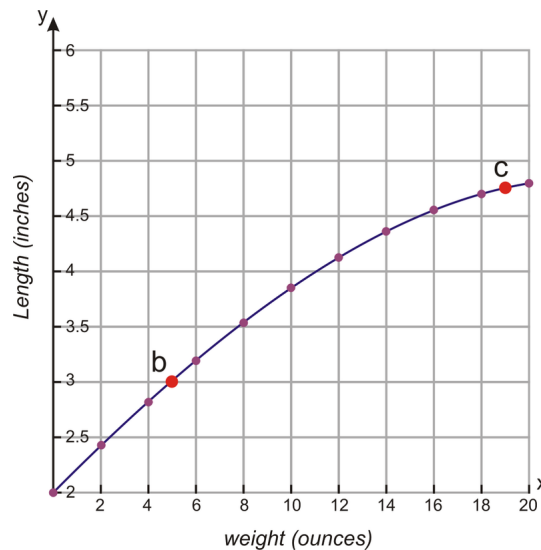
A spring is stretched as you attach more weight at its bottom. The following table shows the length of the spring in inches for different weights in ounces.

Weight (oz)	0	2	4	6	8	10	12	14	16	18	20
Length (in)	2	2.4	2.8	3.2	3.5	3.9	4.1	4.4	4.6	4.7	4.8

- Find the length of the spring as a function of the weight attached to it.
- Find the length of the spring when you attach 5 ounces.
- Find the length of the spring when you attach 19 ounces.

Solution:

Begin by graphing the data to get a visual of what the model may look like.



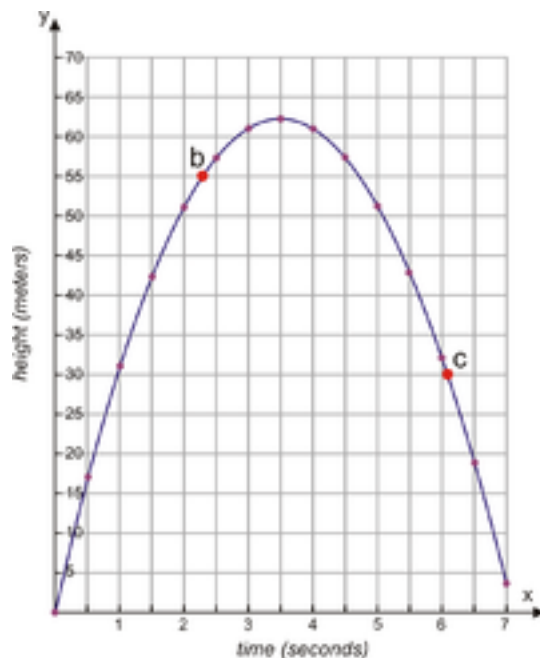
- This data clearly does not fit a linear equation. It has a distinct curve that will not be modeled well by a straight line.
- Nor does this graph seem to fit a parabolic shape; thus, it is not modeled by a quadratic equation.
- The curve does not fit the exponential curves studied in previous Concepts.
- By taking the third set of differences, the value is approximately equal. Use the methods learned in the previous Concept to find a cubic regression equation. Check by graphing to see if this model is a good fit.

Example B

A golf ball is hit down a straight fairway. The following table shows the height of the ball with respect to time. The ball is hit at an angle of 70° with the horizontal with a speed of 40 meters/sec.

Time (sec)	0	0.5	1.0	1.5	2.0	2.5	3.0	3.5	4.0	4.5	5.0	5.5	6.0	6.5	7.0
Height (meters)	0	17.2	31.5	42.9	51.6	57.7	61.2	62.3	61.0	57.2	51.0	42.6	31.9	19.0	4.1

- a) Find the height of the ball as a function of time.
 b) Find the height of the ball when $t = 2.4$ seconds.
 c) Find the height of the ball when $t = 6.2$ seconds.



Solution:

Begin by graphing the data to visualize the model.

This data fits a parabolic curve quite well. We can therefore conclude the best model for this data is a quadratic equation.

To solve part a), use a graphing calculator to determine the **quadratic regression line**.

$$y = -4.92x^2 + 34.7x + 1.2$$

b) The height of the ball when $t = 2.4$ seconds is:

$$y = -4.92(2.4)^2 + 34.7(2.4) + 1.2 = 56.1 \text{ meters}$$

c) The height of the ball when $t = 6.2$ seconds is

$$y = -4.92(6.2)^2 + 34.7(6.2) + 1.2 = 27.2 \text{ meters}$$

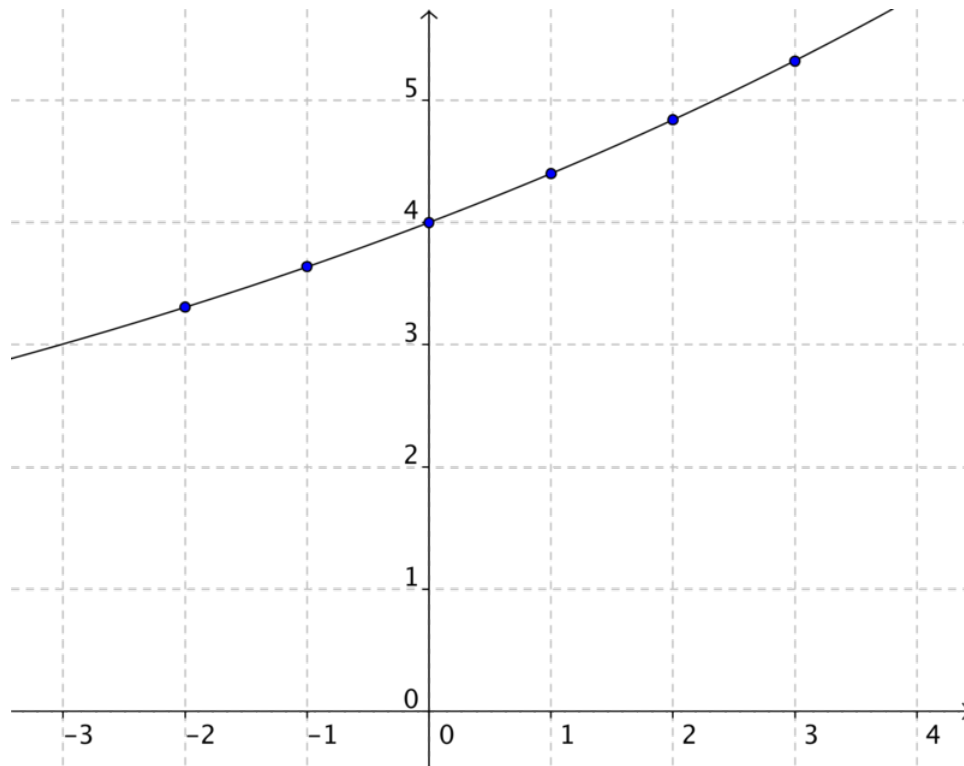
Example C

Find a model to fit the following table of values:

Dependent Variable	-2	-1	0	1	2	3
Independent Variable	3.31	3.64	4	4.4	4.84	5.324

Solution:

Start by graphing the points, to get a sense of the shape. This can help you rule out certain models, and lead you in the direction of which models might be a good fit.



The graph almost looks straight, but has a slight curve, so it can't be linear. It could be quadratic or cubic, but let's check if it's exponential:

Dependent Variable	-2	-1	0	1	2	3
Independent Variable	3.31	3.64	4	4.4	4.84	5.324
Ratio of Values		$\frac{3.64}{3.31} = 1.1$	$\frac{4}{3.64} = 1.1$	$\frac{4.4}{4} = 1.1$	$\frac{4.84}{4.4} = 1.1$	$\frac{5.324}{4.84} = 1.1$

Since the ratios are all the same and equal to 1.1, it is an exponential function with a growth factor of 1.1. Given the point (0,4), the initial value is 4. The function is:

$$f(x) = 4 \cdot 1.1^x.$$

Video Review**MEDIA**

Click image to the left for more content.



MEDIA
 Click image to the left for more content.

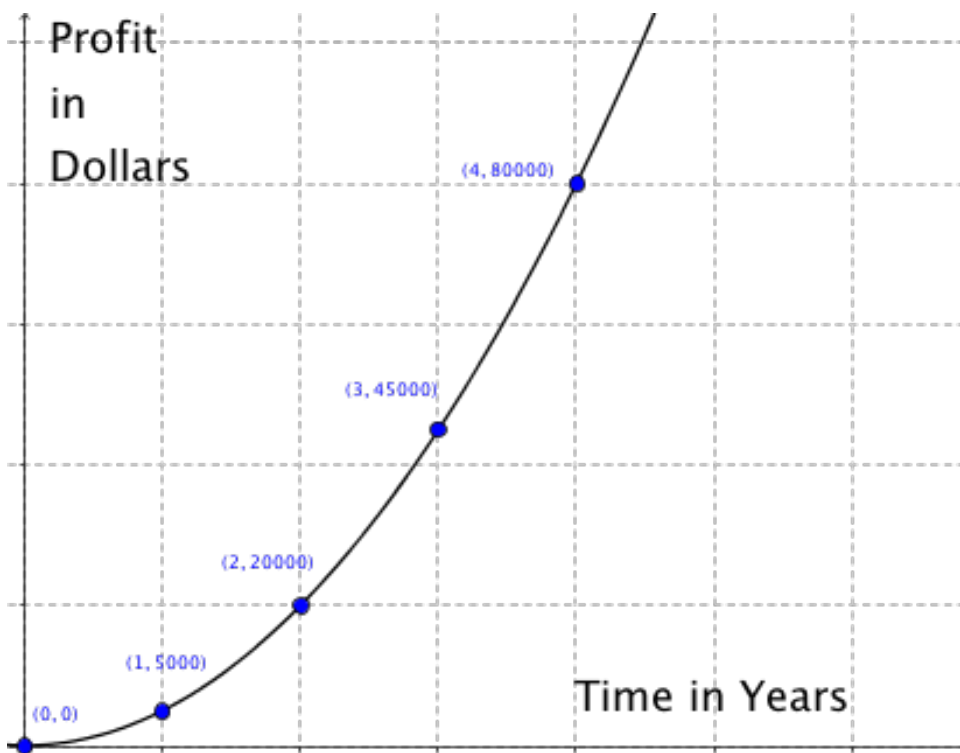
Guided Practice

The profits in dollars of a company are given in the table below. Find the model that describes the relationship to profit as a function of time in years:

Time in Years	0	1	2	3	4
Profit in Dollars	0	5000	20000	45000	80000

Solution:

Start by graphing the points, to get a sense of the shape.



This curve looks like it could be quadratic or exponential. If you check the ratios, you would see they are not the same. Checking the differences of differences yields:

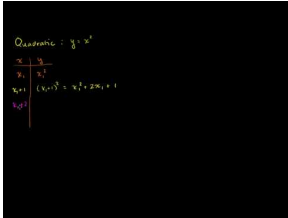
Time in Years	0	1	2	3	4
Profit in Dollars	0	5000	20000	45000	80000
Differences		$5000 - 0 = 5000$	$20000 - 5000 = 15000$	$45000 - 20000 = 25000$	$80000 - 45000 = 35000$
Differences of Differences		$15000 - 5000 = 10000$	$25000 - 15000 = 10000$	$35000 - 25000 = 10000$	

Since the differences of differences are the same, this is a quadratic model.

Practice

Sample explanations for some of the practice exercises below are available by viewing the following videos. Note that there is not always a match between the number of the practice exercise in the videos and the number of the practice exercise listed in the following exercise set. However, the practice exercise is the same in both.

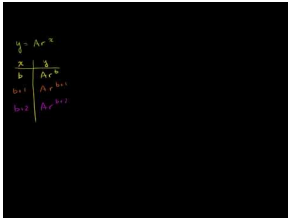
[CK-12 Basic Algebra:IdentifyingQuadratic Models \(8:05\)](#)



MEDIA

Click image to the left for more content.

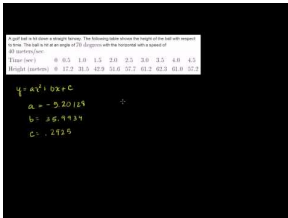
[CK-12 Basic Algebra:IdentifyingExponentialModels \(4:00\)](#)



MEDIA

Click image to the left for more content.

[CK-12 Basic Algebra:Quadratic Regression \(9:17\)](#)



MEDIA

Click image to the left for more content.

1. A thin cylinder is filled with water to a height of 50 centimeters. The cylinder has a hole at the bottom that is covered with a stopper. The stopper is released at time $t = 0$ seconds and allowed to empty. The following data shows the height of the water in the cylinder at different times.

Time (sec)	0	2	4	6	8	10	12	14	16	18	20	22	24
Height (cm)	50	42.5	35.7	29.5	23.8	18.8	14.3	10.5	7.2	4.6	2.5	1.1	0.2

- a. What seems to be the best model for this situation?
- b. Find the linear regression line and determine the height of the water at 4.2 seconds.
- c. Find a quadratic equation and determine the height of the water at 4.2 seconds.
- d. Find a cubic regression line and determine the height of the water at 4.2 seconds.
- e. Which of these seems to be the best fit?
- f. Using the function of best fit, find the height of the water when $t = 5$ seconds.
- g. Using the function of best fit, find the height of the water when $t = 13$ seconds.

2. A scientist counts 2,000 fish in a lake. The fish population increases at a rate of 1.5 fish per generation but the lake has space and food for only 2,000,000 fish. The following table gives the number of fish (in thousands) in each generation.

Generation	0	4	8	12	16	20	24	28
Number (thousands)	2	15	75	343	1139	1864	1990	1999

- Which function seems to best fit the data: linear, quadratic, or exponential?
 - Find the model for the function of best fit.
 - Find the number of fish as a function of generation.
 - Find the number of fish in generation 10.
 - Find the number of fish in generation 25.
3. Using the golf ball example, find the maximum height the ball reaches.
4. Using the golf ball example, evaluate the height of the ball at 5.2 seconds.

Mixed Review

- Evaluate $2 \div 6 \cdot 5 + 3^2 - 11 \cdot 9^{\frac{1}{2}}$.
- 60 shirts cost \$812.00 to screen print. 115 shirts cost \$1,126.00 to screen print. Assuming the relationship between the number of shirts and the total cost is linear, write an equation in point-slope form.
 - What is the start-up cost (the cost to set up the screen)?
 - What is the slope? What does it represent?
- Solve by graphing: $y = x^2 + 3x - 1$.
- Simplify $\frac{6}{\frac{7}{\frac{2}{3}}}$.
- Newton's Second Law states $F = m \cdot a$. Rewrite this equation to solve for m . Use it to determine the mass if the force is 300 Newtons and the acceleration is 70 m/sec .
- The area of a square game board is 256 square inches. What is the length of one side?
- Write as a percent: $\frac{3}{1000}$.

Summary

In this chapter, quadratic equations and functions are covered in detail. First, quadratic functions and their graphs are discussed, including vertical shifts of the graphs of quadratic functions and using graphs to solve quadratic equations. Next, other ways of solving quadratic equations are given, such as solving quadratic equations using square roots and completing the square to solve quadratic equations. Finding the vertex of a quadratic function by completing the square is also touched upon. The chapter then moves on to quadratic problems and the quadratic formula, and it talks about the discriminant. Finally, linear, exponential, and quadratic models are discussed, and advice is given on choosing a function model.

Quadratic Equations and Functions Review

Define each term.

- Vertex
- Standard form for a quadratic equation

3. Model
4. Discriminant

Graph each function. List the vertex (round to the nearest tenth, if possible) and the range of the function.

5. $y = x^2 - 6x + 11$
6. $y = -4x^2 + 16x - 19$
7. $y = -x^2 - 2x + 1$
8. $y = \frac{1}{2}x^2 + 8x + 6$
9. $y = x^2 + 4x$
10. $y = -\frac{1}{4}x^2 + 8x - 4$
11. $y = (x + 4)^2 + 3$
12. $y = -(x - 3)^2 - 6$
13. $y = (x - 2)^2 + 2$
14. $y = -(x + 5)^2 - 1$

Rewrite in standard form.

15. $x - 24 = -5x$
16. $5 + 4a = a^2$
17. $-6 - 18a^2 = -528$
18. $y = -(x + 4)^2 + 2$

Solve each equation by graphing.

19. $x^2 - 8x + 87 = 9$
20. $23x + x^2 - 104 = 4$
21. $13 + 26x = -x^2 + 11x$
22. $x^2 - 9x = 119$
23. $-32 + 6x^2 - 4x = 0$

Solve each equation by taking its square roots.

24. $x^2 = 225$
25. $x^2 - 2 = 79$
26. $x^2 + 100 = 200$
27. $8x^2 - 2 = 262$
28. $-6 - 4x^2 = -65$
29. $703 = 7x^2 + 3$
30. $10 + 6x^2 = 184$
31. $2 + 6x^2 = 152$

Solve each equation by completing the square and then taking its square roots.

32. $n^2 - 4n - 3 = 9$
33. $h^2 + 10h + 1 = 3$
34. $x^2 + 14x - 22 = 10$
35. $t^2 - 10t = -9$

Determine the maximum/minimum point by completing the square.

36. $x^2 - 20x + 28 = -8$

37. $a^2 + 2 - 63 = -5$

38. $x^2 + 6x - 33 = 4$

Solve each equation by using the Quadratic Formula.

39. $4x^2 - 3x = 45$

40. $-5x + 11x^2 = 15$

41. $-3r = 12r^2 - 3$

42. $2m^2 + 10m = 8$

43. $7c^2 + 14c - 28 = -7$

44. $3w^2 - 15 = -3w$

In 45-50, for each quadratic equation, determine:

(a) the discriminant

(b) the number of real solutions

(c) whether the real solutions are rational or irrational

45. $4x^2 - 4x + 1 = 0$

46. $2x^2 - x - 3 = 0$

47. $-2x^2 - x - 1 = -2$

48. $4x^2 - 8x + 4 = 0$

49. $-5x^2 + 10x - 5 = 0$

50. $4x^2 + 3x + 6 = 0$

51. Explain the difference between $y = x^2 + 4$ and $y = -x^2 + 4$.

52. Jorian wants to enclose his garden with fencing on all four sides. He has 225 feet of fencing. What dimensions would give him the largest area?

53. A ball is dropped off a cliff 70 meters high.

- Using Newton's equation, model this situation.
- What is the leading coefficient? What does this value tell you about the shape of the parabola?
- What is the maximum height of the ball?
- Where is the ball after 0.65 seconds?
- When will the ball reach the ground?

54. The following table shows the number of hours spent per person playing video games for various years in the United States.

x	1995	1996	1997	1998	1999	2000
y	24	25	37	43	61	70

- What seems to be the best function for this data?
- Find the best fit function.
- Using your equation, predict the number of hours someone will spend playing video games in 2012.
- Does this value seem possible? Explain your thoughts.

55. The table shows the amount of money spent (in billions of dollars) in the U.S. on books for various years.

x	1990	1991	1992	1993	1994	1995	1996	1997	1998
y	16.5	16.9	17.7	18.8	20.8	23.1	24.9	26.3	28.2

- Find a linear model for this data. Use it to predict the dollar amount spent in 2008.

- b. Find a quadratic model for this data. Use it to predict the dollar amount spent in 2008.
- c. Which model seems more accurate? Use the best model to predict the dollar amount spent in 2012.
- d. What could happen to change this value?

56. The data below shows the number of U.S. hospitals for various years.

x	1960	1965	1970	1980	1985	1990	1995	2000
y	6876	7123	7123	6965	6872	6649	6291	5810

- a. Find a quadratic regression line to fit this data.
- b. Use the model to determine the maximum number of hospitals.
- c. In which year was this?
- d. In what years were there approximately 7,000 hospitals?
- e. What seems to be the trend with this data?

57. A pendulum's distance is measured and recorded in the following table.

<i>swing</i>	1	2	3	4	5	6
<i>length</i>	25	16.25	10.563	6.866	4.463	2.901

- a. What seems to be the best model for this data?
- b. Find a quadratic regression line to fit this data. Approximate the length of the seventh swing.
- c. Find an exponential regression line to fit this data. Approximate the length of the seventh swing.

Quadratic Equations and Functions Test

1. *True or false?* The vertex determines the domain of a quadratic function.
2. Suppose the leading coefficient of a quadratic equation is $a = -\frac{1}{3}$. What can you conclude about the shape of the parabola?
3. Find the discriminant of the equation and determine the number of real solutions: $0 = -2x^2 + 3x - 2$.
4. A ball is thrown upward from a height of four feet with an initial velocity of 45 *feet/second*.
 - a. Using Newton's law, write the equation to model this situation.
 - b. What is the maximum height of the ball?
 - c. When will the ball reach 10 feet?
 - d. Will the ball ever reach 36.7 feet?
 - e. When will the ball hit the ground?

In 5–9, solve the equation using any method.

5. $2x^2 = 2x + 40$
6. $11j^2 = j + 24$
7. $g^2 = 1$
8. $11r^2 - 5 = -178$
9. $x^2 + 8x - 65 = -8$
10. What is the vertex of $y = -(x - 6)^2 + 5$? Does the parabola open up or down? Is the vertex a maximum or a minimum?
11. Graph $y = (x + 2)^2 - 3$.
12. Evaluate the discriminant. How many real solutions does the quadratic equation have? $-5x^2 - 6x = 1$
13. Suppose $D = -14$. What can you conclude about the solutions to the quadratic equation?
14. Rewrite in standard form: $y - 7 = -2(x + 1)^2$.

15. Graph and determine the function's range and vertex: $y = -x^2 + 2x - 2$.
16. Graph and determine the function's range and y -intercept: $y = \frac{1}{2}x^2 + 4x + 5$.
17. The following information was taken from *USA Today* regarding the number of cancer deaths for various years.

TABLE 10.8:

Year	Number of Deaths Per 100,000 men
1980	205.3
1985	212.6
1989	217.6
1993	212.1
1997	201.9

- 18.
19. Cancer Deaths of Men (
20. *Source: USA Today*
21.)
 1. Find a linear regression line to fit this data. Use it to predict the number of male deaths caused by cancer in 1999.
 2. Find a linear regression line to fit this data. Use it to predict the number of male deaths caused by cancer in 1999.
 3. Find an exponential regression line to fit this data. Use it to predict the number of male deaths caused by cancer in 1999.
 4. Which seems to be the best fit for this data?

Texas Instruments Resources

In the CK-12 Texas Instruments Algebra I FlexBook, there are graphing calculator activities designed to supplement the objectives for some of the lessons in this chapter. See <http://www.ck12.org/flexr/chapter/9620>.

Radicals and Geometry Connections

Chapter Outline

- 11.1 GRAPHS OF SQUARE ROOT FUNCTIONS
- 11.2 SIMPLIFICATION OF RADICAL EXPRESSIONS
- 11.3 ADDITION AND SUBTRACTION OF RADICALS
- 11.4 MULTIPLICATION AND DIVISION OF RADICALS
- 11.5 RADICAL EQUATIONS
- 11.6 PYTHAGOREAN THEOREM AND ITS CONVERSE
- 11.7 DISTANCE FORMULA
- 11.8 MIDPOINT FORMULA
- 11.9 MEASURES OF CENTRAL TENDENCY AND DISPERSION
- 11.10 STEM-AND-LEAF PLOTS
- 11.11 BOX-AND-WHISKER PLOTS

Introduction

Radicals in mathematics are important. By using radicals as inverse operations to exponents, you can solve almost any exponential equation. Radicals such as the square root have been used for thousands of years. Square roots are extremely useful in geometry when finding the hypotenuse of a right triangle or solving for the side length of a square.

In this chapter you will learn the basics of radicals and apply these basics to geometry concepts, such as Pythagorean's Theorem, the Distance Formula, and the Midpoint Formula. The last several Concepts of this chapter will discuss **data analysis**, a method used to analyze data by creating charts and graphs.



11.1 Graphs of Square Root Functions

Here you'll learn about square root functions and their graphs.

Suppose a clockmaker is trying to decide how large she should make the circular face of a clock. She knows that the radius of a circle as a function of its area is $r(a) = \frac{\sqrt{a}}{1.77}$. How would she graph this function? In what quadrant(s) would the graph be located? Could she use a graphing calculator to graph the function? In this Concept, you'll learn how to graph square root functions like the one in this problem.

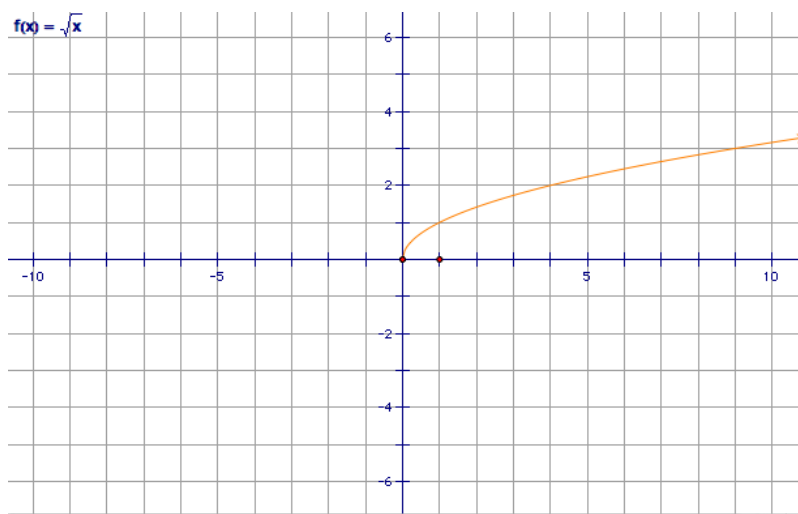
Guidance

You have used squared roots many times in this text: to simplify, to evaluate, and to solve. This Concept will focus on the graph of the square root function.

The square root function is defined by $f(x) = \sqrt{x-h} + k$, where $x-h \geq 0$ and (h,k) represents the origin of the curve.

Example A

The graph of the **parent function** $f(x) = \sqrt{x}$ is shown below. The function is not defined for negative values of x ; you cannot take the square root of a negative number and get a real value.



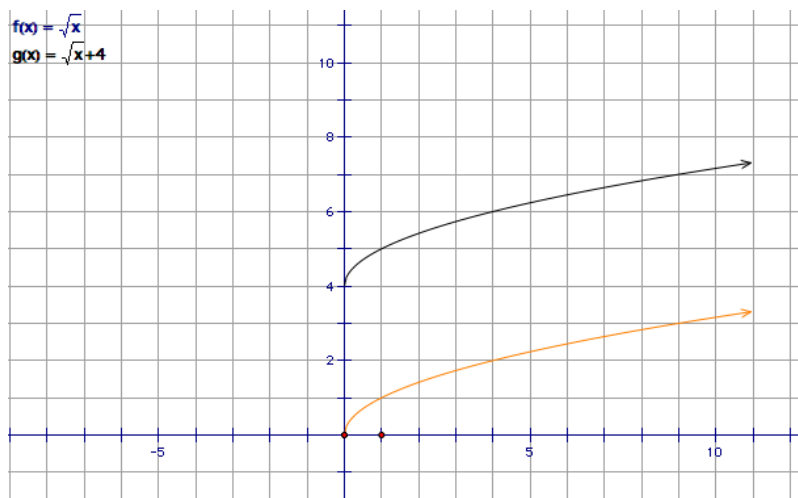
By shifting the square root function around the coordinate plane, you will change the origin of the curve.

Example B

Graph $f(x) = \sqrt{x} + 4$ and compare it to the parent function.

Solution:

This graph has been shifted vertically upward four units from the parent function, $f(x) = \sqrt{x}$. The graph is shown below.



Graphing Square Root Functions Using a Calculator

Graphing square root functions is similar to graphing linear, quadratic, or exponential functions.

Example C

Graph the parent function $f(x) = \sqrt{x}$ using the following steps.

```

Plot1 Plot2 Plot3
\Y1=√(X)
\Y2=
\Y3=
\Y4=
\Y5=
\Y6=
\Y7=

```

```

WINDOW
Xmin=0
Xmax=20
Xscl=1
Ymin=0
Ymax=10
Yscl=1
Xres=1

```



Video Review

**MEDIA**

Click image to the left for more content.

**MEDIA**

Click image to the left for more content.

Guided Practice

The aspect ratio of a wide-screen TV is 2.39:1. Graph the length of the diagonal of a screen as a function of the area of the screen. What is the diagonal of a screen with an area of 150 in^2 ?

Solution:

Since the diagonal of the screen is the hypotenuse of a right triangle whose legs are the width and height, we can find the ratio of the diagonal using the Pythagorean Theorem:

The Pythagorean Theorem:	$a^2 + b^2 = c^2$
Substitute in the values of the width and height:	$2.39^2 + 1^2 = c^2$
Simplify:	$6.71 \approx c^2$
Take the square root of each side:	$\sqrt{6.71} \approx \sqrt{c^2} \Rightarrow 2.59 \approx c$

The ratio of the width to the height of the screen is 2.39 to 1. This means that any multiple of those numbers could be the actual lengths. We can write an expression for the width, $2.39x$, and an expression for the height, $1x = x$. From these expressions, the area is:

$$A = w \cdot h = 2.39x \cdot x = 2.39x^2$$

We need a function where the area A is the input, and the diagonal length is the output. Since the ratio of the diagonal is 2.59, then it's length is $2.59x$.

If we create the function $f(x) = 2.59x$, this represents the diagonal of the screen as a function of x , which is the height of the screen. We simply need to use the equation for area, but solve for x :

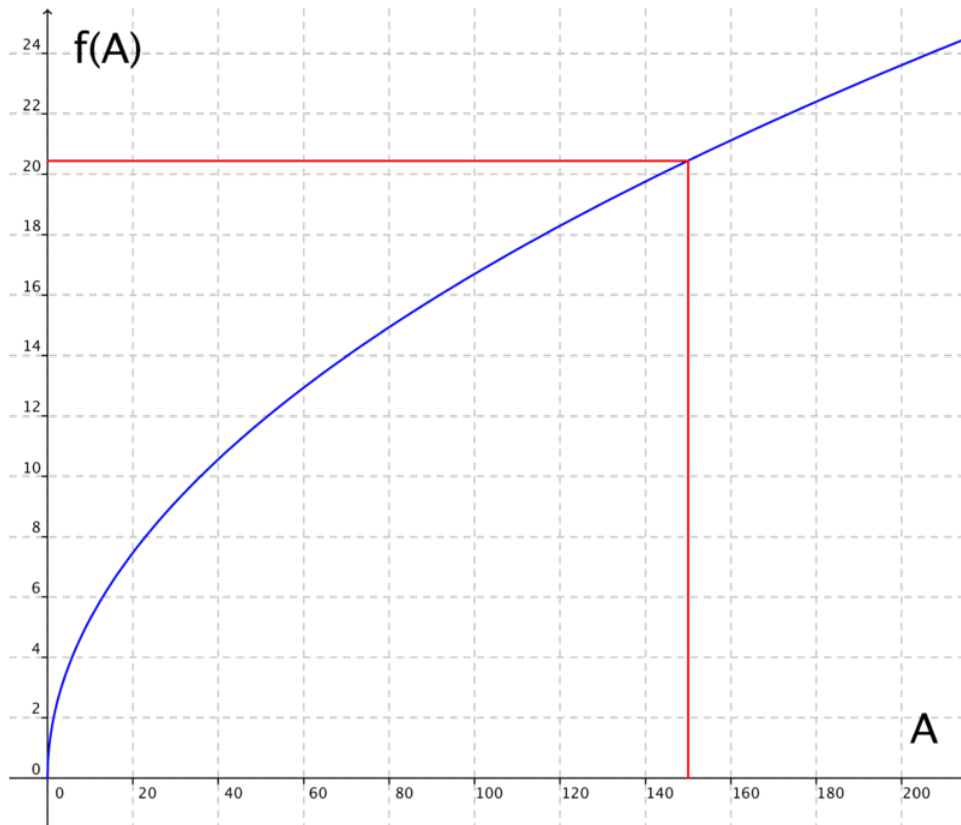
Start with the equation for the area.	$A = 2.39x^2$
Isolate x by dividing both sides by 2.39.	$\frac{A}{2.39} = x^2$
Take the square root of each side.	$\sqrt{\frac{A}{2.39}} = x$
Simplify by applying the square root to the top and bottom of the fraction.	$\frac{\sqrt{A}}{1.55} = x$

Now, substitute in $\frac{\sqrt{A}}{1.55} = x$ into $f(x) = 2.59x$:

$$f(A) = 2.59 \left(\frac{\sqrt{A}}{1.55} \right) = 1.67 \sqrt{A}.$$

This is a function that takes the input A , the area in square inches, and outputs $f(A)$, the length of the diagonal in inches.

Graph the function and use it to find the length of the diagonal when the area is 150 in^2 .



Find the value of the function when $A = 150$. It looks like the value of the function is between 20 and 21.

This is hard to see exactly from the graph. You can graph the function on your calculator and use the **TRACE** button to find the exact value. First, you must enter the function by pressing the **Y=** button, and then press **WINDOW** to set the range of X and the range of Y so that they include the point where $X = 150$.

```

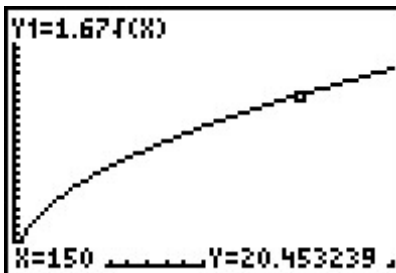
Plot1 Plot2 Plot3
Y1=1.67√(X)
Y2=
Y3=
Y4=
Y5=
Y6=
Y7=

```

```

WINDOW
Xmin=0
Xmax=200
Xscl=10
Ymin=0
Ymax=30
Yscl=1
Xres=1

```

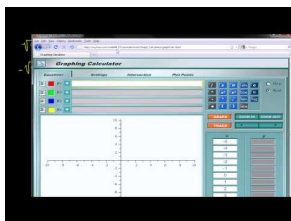


Looking at the TRACE from the graphing calculator, you can see that:

$$f(150) \approx 20.45.$$

Practice

Sample explanations for some of the practice exercises below are available by viewing the following video. Note that there is not always a match between the number of the practice exercise in the video and the number of the practice exercise listed in the following exercise set. However, the practice exercise is the same in both. [CK-12 Basic Algebra: Graphs of Square Root Functions](#) (15:01)



MEDIA

Click image to the left for more content.

1. In the definition of a square root function, why must $(x - h) \geq 0$?
2. What is the domain and range of the parent function $f(x) = \sqrt{x}$?

Identify the ordered pair of the origin of each square root function.

3. $f(x) = \sqrt{x-2}$
4. $g(x) = \sqrt{x+4} + 6$
5. $h(x) = \sqrt{x-1} - 1$
6. $y = \sqrt{x} + 3$
7. $f(x) = \sqrt{2x} + 4$

Graph the following functions on the same coordinate axes.

8. $y = \sqrt{x}$, $y = 2.5\sqrt{x}$, and $y = -2.5\sqrt{x}$

9. $y = \sqrt{x}$, $y = 0.3\sqrt{x}$, and $y = 0.6\sqrt{x}$
 10. $y = \sqrt{x}$, $y = \sqrt{x-5}$, and $y = \sqrt{x+5}$
 11. $y = \sqrt{x}$, $y = \sqrt{x+8}$, and $y = \sqrt{x-8}$

In 12-20, graph the function.

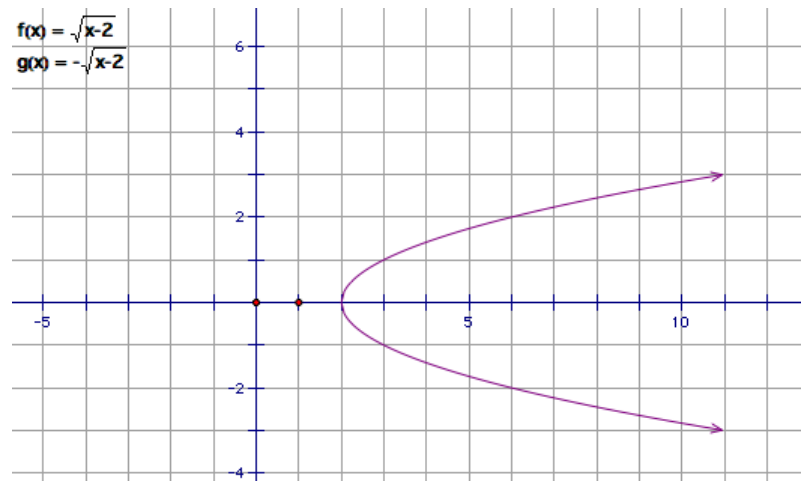
12. $y = \sqrt{2x-1}$
 13. $y = \sqrt{4x+4}$
 14. $y = \sqrt{5-x}$
 15. $y = 2\sqrt{x+5}$
 16. $y = 3 - \sqrt{x}$
 17. $y = 4 + 2\sqrt{x}$
 18. $y = 2\sqrt{2x+3} + 1$
 19. $y = 4 + 2\sqrt{2-x}$
 20. $y = \sqrt{x+1} - \sqrt{4x-5}$
 21. The length between any two consecutive bases of a baseball diamond is 90 feet. How much shorter is it for the catcher to walk along the diagonal from home plate to second base than the runner running from second to home?
 22. The units of acceleration of gravity are given in feet per second squared. It is $g = 32 \text{ ft/s}^2$ at sea level. Graph the period of a pendulum with respect to its length in feet. For what length in feet will the period of a pendulum be two seconds?
 23. The acceleration of gravity on the Moon is 1.6 m/s^2 . Graph the period of a pendulum on the Moon with respect to its length in meters. For what length, in meters, will the period of a pendulum be 10 seconds?
 24. The acceleration of gravity on Mars is 3.69 m/s^2 . Graph the period of a pendulum on Mars with respect to its length in meters. For what length, in meters, will the period of a pendulum be three seconds?
 25. The acceleration of gravity on the Earth depends on the latitude and altitude of a place. The value of g is slightly smaller for places closer to the Equator than for places closer to the Poles, and the value of g is slightly smaller for places at higher altitudes than it is for places at lower altitudes. In Helsinki, the value is $g = 9.819 \text{ m/s}^2$, in Los Angeles the value is $g = 9.796 \text{ m/s}^2$, and in Mexico City the value is $g = 9.779 \text{ m/s}^2$. Graph the period of a pendulum with respect to its length for all three cities on the same graph. Use the formula to find the length (in meters) of a pendulum with a period of 8 seconds for each of these cities.

Graph the following functions using a graphing calculator.

26. $y = \sqrt{3x-2}$
 27. $y = 4 + \sqrt{2-x}$
 28. $y = \sqrt{x^2-9}$
 29. $y = \sqrt{x} - \sqrt{x+2}$

Mixed Review

30. Solve $16 = 2x^2 - 3x + 4$.
 31. Write an equation for a line with a slope of 0.2 containing the point (1, 10).
 32. Are these lines parallel, perpendicular, or neither: $x + 5y = 16$ and $y = 5x - 3$?
 33. Which of the following vertices minimizes the expression $20x + 32y$?
 a. (50, 0)
 b. (0, 60)
 c. (15, 30)
 34. Is the following graph a function? Explain your reasoning.



35. Between which two consecutive integers is $\sqrt{205}$?

11.2 Simplification of Radical Expressions

Here you'll learn how to simplify radical expressions.

Suppose that a shoemaker has determined that the optimal weight in ounces of a pair of running shoes is $\sqrt[4]{20000}$. How many ounces would this be? Is there a way that you could rewrite this expression to make it easier to grasp? In this Concept, you'll learn how to simplify radical expressions like this one so that you can write them in multiple ways.

Guidance

Radicals are the roots of values. In fact, the word *radical* comes from the Latin word “radix,” meaning “root.” You are most comfortable with the square root symbol \sqrt{x} ; however, there are many more radical symbols.

A **radical** is a mathematical expression involving a root by means of a radical sign.

$$\begin{array}{lll} \sqrt[3]{y} = x & \text{because } x^3 = y & \sqrt[3]{27} = 3, \text{ because } 3^3 = 27 \\ \sqrt[4]{y} = x & \text{because } x^4 = y & \sqrt[4]{16} = 2 \text{ because } 2^4 = 16 \\ \sqrt[n]{y} = x & \text{because } x^n = y & \end{array}$$

Some roots do not have real values; in this case, they are called **undefined**.

Even roots of negative numbers are **undefined**.

$\sqrt[n]{x}$ is undefined when n is an even whole number and $x < 0$.

Example A

Evaluate the following radicals:

- $\sqrt[3]{64}$
- $\sqrt[4]{-81}$

Solution:

$$\sqrt[3]{64} = 4 \text{ because } 4^3 = 64$$

$\sqrt[4]{-81}$ is undefined because n is an even whole number and $-81 < 0$.

In a previous Concept, you learned how to evaluate rational exponents:

$$a^{\frac{x}{y}} \text{ where } x = \text{power and } y = \text{root}$$

This can be written in radical notation using the following property.

Rational Exponent Property: For integer values of x and whole values of y :

$$a^{\frac{x}{y}} = \sqrt[y]{a^x}$$

Example B

Rewrite $x^{\frac{5}{6}}$ using radical notation.

Solution:

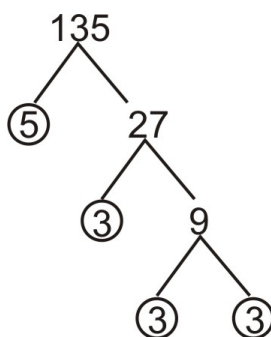
This is correctly read as the sixth root of x to the fifth power. Writing in radical notation, $x^{\frac{5}{6}} = \sqrt[6]{x^5}$, where $x^5 > 0$. You can also simplify other radicals, like cube roots and fourth roots.

Example C

Simplify $\sqrt[3]{135}$.

Solution:

Begin by finding the prime factorization of 135. This is easily done by using a factor tree.



$$\sqrt[3]{135} = \sqrt[3]{3 \cdot 3 \cdot 3 \cdot 5} = \sqrt[3]{3^3} \cdot \sqrt[3]{5}$$

$$3\sqrt[3]{5}$$

Video Review**MEDIA**

Click image to the left for more content.

**MEDIA**

Click image to the left for more content.

Guided Practice

Evaluate $\sqrt[4]{4^2}$.

Solution: This is read, “The fourth root of four to the second power.”

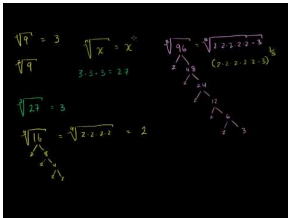
$$4^2 = 16$$

The fourth root of 16 is 2; therefore,

$$\sqrt[4]{4^2} = 2$$

Practice

Sample explanations for some of the practice exercises below are available by viewing the following videos. Note that there is not always a match between the number of the practice exercise in the videos and the number of the practice exercise listed in the following exercise set. However, the practice exercise is the same in both. [CK-12 Basic Algebra:RadicalExpressionswith HigherRoots](#) (8:46)



MEDIA

Click image to the left for more content.

- For which values of n is $\sqrt[n]{-16}$ undefined?

Evaluate each radical expression.

- $\sqrt{169}$
- $\sqrt[4]{81}$
- $\sqrt[3]{-125}$
- $\sqrt[5]{1024}$

Write each expression as a rational exponent.

- $\sqrt[3]{14}$
- $\sqrt[4]{zw}$
- \sqrt{a}
- $\sqrt[9]{y^3}$

Write the following expressions in simplest radical form.

- $\sqrt{24}$
- $\sqrt{300}$
- $\sqrt[5]{96}$
- $\sqrt{\frac{240}{567}}$
- $\sqrt[3]{500}$
- $\sqrt[6]{64x^8}$

11.3 Addition and Subtraction of Radicals

Here you'll learn how to add and subtract radicals in order to simplify expressions.

Suppose that you're taking a trip, and you'll be making two stops. This distance from your starting point to your first stop is $14\sqrt{2}$ miles, and the distance from your first stop to your second stop is $9\sqrt{2}$ miles. How far will you travel in total? What operation would you have to perform to find the answer to this question? In this Concept, you'll learn how to add and subtract radicals like the ones given here.

Guidance

To add or subtract radicals, they must have the same root and radicand.

$$a\sqrt[n]{x} + b\sqrt[n]{x} = (a + b)\sqrt[n]{x}$$

Example A

Add: $3\sqrt{5} + 6\sqrt{5}$.

Solution:

The value " $\sqrt{5}$ " is considered a *like term*. Using the rule above:

$$3\sqrt{5} + 6\sqrt{5} = (3 + 6)\sqrt{5} = 9\sqrt{5}$$

Example B

Simplify $2\sqrt[3]{13} + 6\sqrt[3]{12}$.

Solution:

The cube roots are not *like terms*, so there can be no further simplification.

In some cases, the radical may need to be reduced before addition/subtraction is possible.

Example C

Simplify $4\sqrt{3} + 2\sqrt{12}$.

Solution:

$\sqrt{12}$ simplifies to $2\sqrt{3}$.

$$\begin{aligned}4\sqrt{3} + 2\sqrt{12} &\rightarrow 4\sqrt{3} + 2(2\sqrt{3}) \\4\sqrt{3} + 4\sqrt{3} &= 8\sqrt{3}\end{aligned}$$

Video Review



MEDIA

 Click image to the left for more content.



MEDIA

 Click image to the left for more content.

Guided Practice

Add: $3\sqrt[3]{2} + 5\sqrt[3]{16}$.

Solution:

Begin by factoring the second radical. $3\sqrt[3]{2} + 5\sqrt[3]{16} = 3\sqrt[3]{2} + 5\sqrt[3]{2 \cdot 8} = 3\sqrt[3]{2} + 5\sqrt[3]{2 \cdot 2^3}$

Simplify the second radical using properties of roots.

$$= 3\sqrt[3]{2} + 5\sqrt[3]{2^3} \cdot \sqrt[3]{2} = 3\sqrt[3]{2} + 5 \cdot 2\sqrt[3]{2} = 3\sqrt[3]{2} + 10\sqrt[3]{2}$$

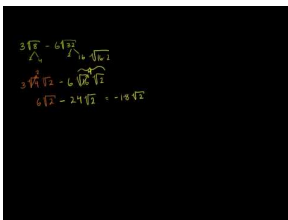
The terms are now alike and can be added.

$$= (3 + 10)\sqrt[3]{2} = 13\sqrt[3]{2}$$

Practice

Sample explanations for some of the practice exercises below are available by viewing the following videos. Note that there is not always a match between the number of the practice exercise in the videos and the number of the practice exercise listed in the following exercise set. However, the practice exercise is the same in both.

[CK-12 Basic Algebra: More Simplifying Radical Expressions \(7:57\)](#)



MEDIA

 Click image to the left for more content.

Write the following expressions in simplest radical form.

1. $\sqrt[3]{48a^3b^7}$

2. $\sqrt[3]{\frac{16x^5}{135y^4}}$

3. True or false? $\sqrt[7]{5} \cdot \sqrt[6]{6} = \sqrt[42]{30}$

Simplify the following expressions as much as possible.

4. $3\sqrt{8} - 6\sqrt{32}$

5. $\sqrt{180} + 6\sqrt{405}$

6. $\sqrt{6} - \sqrt{27} + 2\sqrt{54} + 3\sqrt{48}$

7. $\sqrt{8x^3} - 4x\sqrt{98x}$

8. $\sqrt{48a} + \sqrt{27a}$

9. $\sqrt[3]{4x^3} + x\sqrt[3]{256}$

Mixed Review

10. An item originally priced \$ c is marked down 15%. The new price is \$612.99. What is c ?
11. Solve $\frac{x+3}{6} = \frac{21}{x}$.
12. According to the Economic Policy Institute (EPI), minimum wage in 1989 was \$3.35 per hour. In 2009, it was \$7.25 per hour. What is the average rate of change?
13. What is the vertex of $y = 2(x + 1)^2 + 4$? Is this a minimum or a maximum?
14. Using the minimum wage data (adjusted for inflation) compiled from EPI, answer the following questions.
 - a. Graph the data as a scatter plot.
 - b. Which is the best model for this data: linear, quadratic, or exponential?
 - c. Find the model of best fit and use it to predict minimum wage adjusted for inflation for 1999.
 - d. According to EPI, the 1999 minimum wage adjusted for inflation was \$6.58. How close was your model?
 - e. Use interpolation to find the minimum wage in 1962.

TABLE 11.1:

Year	Minimum Wage Adj. for Inflation	Year	Minimum Wage Adj. for Inflation
1947	3.40	1952	5.36
1957	6.74	1960	6.40
1965	7.52	1970	7.81
1978	7.93	1981	7.52
1986	6.21	1990	6.00
1993	6.16	1997	6.81
2000	6.37	2004	5.80
2006	5.44	2008	6.48
2009	7.25		

11.4 Multiplication and Division of Radicals

Here you'll learn how to multiply and divide by radicals, as well as how to rationalize denominators.

What if you knew that the area of a rectangular mirror is $12\sqrt{6}$ square feet and that the width of the mirror is $2\sqrt{2}$ feet? Could you find the length of the mirror? What operation would you have to perform? If you knew the width and the length of the mirror, could you find its area? What operation would you perform in this case? In this Concept, you'll learn about multiplying and dividing radicals so that you can answer questions like these.

Guidance

To multiply radicands, the roots must be the same.

$$\sqrt[n]{a} \cdot \sqrt[n]{b} = \sqrt[n]{ab}$$

Example A

Simplify $\sqrt{3} \cdot \sqrt{12}$.

Solution:

$$\sqrt{3} \cdot \sqrt{12} = \sqrt{36} = 6$$

Dividing radicals is more complicated. A radical in the denominator of a fraction is not considered simplified by mathematicians. In order to simplify the fraction, you must **rationalize the denominator**.

To **rationalize the denominator** means to remove any radical signs from the denominator of the fraction using multiplication.

Remember:

$$\sqrt{a} \times \sqrt{a} = \sqrt{a^2} = a$$

Example B

Simplify $\frac{2}{\sqrt{3}}$.

Solution:

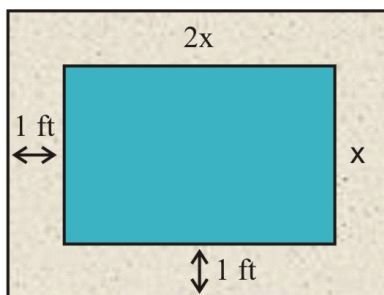
We must clear the denominator of its radical using the property above. **Remember**, what you do to one piece of a fraction, you must do to all pieces of the fraction.

$$\frac{2}{\sqrt{3}} \times \frac{\sqrt{3}}{\sqrt{3}} = \frac{2\sqrt{3}}{\sqrt{3^2}} = \frac{2\sqrt{3}}{3}$$

Real-World Radicals

Example C

A pool is twice as long as it is wide and is surrounded by a walkway of uniform width of 1 foot. The combined area of the pool and the walkway is 400 square-feet. Find the dimensions of the pool and the area of the pool.



Solution:

1. **Make a sketch.**
2. **Let x** = the width of the pool.
3. **Write an equation.** $\text{Area} = \text{length} \cdot \text{width}$

Combined length of pool and walkway = $2x + 2$

Combined width of pool and walkway = $x + 2$

$$\text{Area} = (2x + 2)(x + 2)$$

Since the combined area of the pool and walkway is 400 ft^2 , we can write the equation.

$$(2x + 2)(x + 2) = 400$$

4. Solve the equation:

Multiply in order to eliminate the parentheses.

Collect like terms.

Move all terms to one side of the equation.

Divide all terms by 2.

$$(2x + 2)(x + 2) = 400$$

$$2x^2 + 4x + 2x + 4 = 400$$

$$2x^2 + 6x + 4 = 400$$

$$2x^2 + 6x - 396 = 0$$

$$x^2 + 3x - 198 = 0$$

$$\begin{aligned} x &= \frac{-b \pm \sqrt{b^2 - 4ac}}{2a} \\ &= \frac{-3 \pm \sqrt{3^2 - 4(1)(-198)}}{2(1)} \\ &= \frac{-3 \pm \sqrt{801}}{2} \approx \frac{-3 \pm 28.3}{2} \end{aligned}$$

Use the quadratic formula. $x \approx 12.65$ or -15.65 feet

5. **We can disregard the negative solution** since it does not make sense in this context. Thus, we can check our answer of 12.65 by substituting the result into the area formula.

$$\text{Area} = [2(12.65) + 2](12.65 + 2) = 27.3 \cdot 14.65 \approx 400 \text{ ft}^2.$$

The answer checks out.

Video Review



MEDIA

Click image to the left for more content.



MEDIA

Click image to the left for more content.

Guided Practice

Simplify $\frac{7}{\sqrt[3]{5}}$.

Solution:

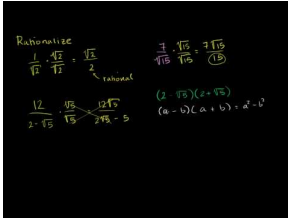
In this case, we need to make the number inside the cube root a perfect cube. We need to multiply the numerator and the denominator by $\sqrt[3]{5^2}$.

$$\frac{7}{\sqrt[3]{5}} \cdot \frac{\sqrt[3]{5^2}}{\sqrt[3]{5^2}} = \frac{7\sqrt[3]{25}}{\sqrt[3]{5^3}} = \frac{7\sqrt[3]{25}}{5}$$

Practice

Sample explanations for some of the practice exercises below are available by viewing the following videos. Note that there is not always a match between the number of the practice exercise in the videos and the number of the practice exercise listed in the following exercise set. However, the practice exercise is the same in both

[CK-12 Basic Algebra:Howto Rationalize a Denominator \(10:18\)](#)



MEDIA

Click image to the left for more content.

Multiply the following expressions.

- $\sqrt{6}(\sqrt{10} + \sqrt{8})$
- $(\sqrt{a} - \sqrt{b})(\sqrt{a} + \sqrt{b})$
- $(2\sqrt{x} + 5)(2\sqrt{x} + 5)$

Rationalize the denominator.

- $\frac{7}{\sqrt{15}}$
- $\frac{9}{\sqrt{10}}$
- $\frac{2x}{\sqrt{5x}}$
- $\frac{\sqrt{5}}{\sqrt{3y}}$
- The volume of a spherical balloon is 950cm^3 . Find the radius of the balloon. (Volume of a sphere = $\frac{4}{3}\pi R^3$)
- A rectangular picture is 9 inches wide and 12 inches long. The picture has a frame of uniform width. If the combined area of picture and frame is 180in^2 , what is the width of the frame?
- The volume of a soda can is 355cm^3 . The height of the can is four times the radius of the base. Find the radius of the base of the cylinder.

11.5 Radical Equations

Here you'll learn how to find the solutions to radical equations.

Suppose your teacher has instructed the members of your math class to work in pairs, and she has asked you to find the length of a line segment. You get $\sqrt{2x+6}$ units for the length, and your partner gets 10 units. You ask your teacher who is right, and she says both of you are right! Can you set up an equation and solve for x in this case? How would you do it? In this Concept, you'll learn to solve radical equations like the one you would set up here.

Guidance

Solving radical equations is no different from solving linear or quadratic equations. Before you can begin to solve a radical equation, you must know how to cancel the radical. To do that, you must know its **inverse**.

TABLE 11.2:

Original Operation	Inverse Operation
Cube Root	Cubing (to the third power)
Square Root	Squaring (to the second power)
Fourth Root	Fourth power
" n th" Root	" n th" power

To solve a radical equation, you apply the solving equation steps you learned in previous Concepts, including the inverse operations for roots.

Example A

Solve $\sqrt{2x-1} = 5$.

Solution:

The first operation that must be removed is the square root. Square both sides.

$$\begin{aligned} (\sqrt{2x-1})^2 &= 5^2 \\ 2x-1 &= 25 \\ 2x &= 26 \\ x &= 13 \end{aligned}$$

Remember to check your answer by substituting it into the original problem to see if it makes sense.

Extraneous Solutions

Not every solution of a radical equation will check in the original problem. This is called an **extraneous solution**. This means you can find a solution using algebra, but it will not work when checked. This is because of the rule in a previous Concept:

$\sqrt[n]{x}$ is undefined when n is an even whole number and $x < 0$,

or, in words, *even roots of negative numbers are undefined*.

Example B

Solve $\sqrt{x-3} - \sqrt{x} = 1$.

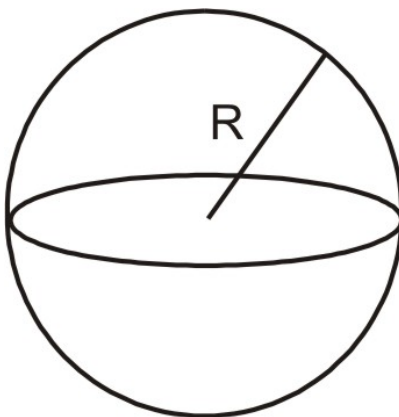
Solution:

Isolate one of the radical expressions.	$\sqrt{x-3} = \sqrt{x} + 1$
Square both sides.	$(\sqrt{x-3})^2 = (\sqrt{x} + 1)^2$
Remove parentheses.	$x - 3 = (\sqrt{x})^2 + 2\sqrt{x} + 1$
Simplify.	$x - 3 = x + 2\sqrt{x} + 1$
Now isolate the remaining radical.	$-4 = 2\sqrt{x}$
Divide all terms by 2.	$-2 = \sqrt{x}$
Square both sides.	$x = 4$

Check: $\sqrt{4-3} \stackrel{?}{=} \sqrt{4} + 1 \Rightarrow \sqrt{1} \stackrel{?}{=} 2 + 1 \Rightarrow 1 \neq 3$. The solution does not check out. The equation has no real solutions. Therefore, $x = 4$ is an extraneous solution.

Radical Equations in Real Life**Example C**

A sphere has a volume of 456 cm^3 . If the radius of the sphere is increased by 2 cm, what is the new volume of the sphere?



Solution:

1. **Define variables.** Let R = the radius of the sphere.
2. **Find an equation.** The volume of a sphere is given by the formula: $V = \frac{4}{3}\pi r^3$.

By substituting 456 for the volume variable, the equation becomes $456 = \frac{4}{3}\pi r^3$.

$$\begin{aligned} \text{Multiply by 3 :} & \quad 1368 = 4\pi r^3 \\ \text{Divide by } 4\pi : & \quad 108.92 = r^3 \\ \text{Take the cube root of each side:} & \quad r = \sqrt[3]{108.92} \Rightarrow r = 4.776 \text{ cm} \\ \text{The new radius is 2 centimeters more:} & \quad r = 6.776 \text{ cm} \\ \text{The new volume is :} & \quad V = \frac{4}{3}\pi(6.776)^3 = 1302.5 \text{ cm}^3 \end{aligned}$$

Check by substituting the values of the radii into the volume formula.

$$V = \frac{4}{3}\pi r^3 = \frac{4}{3}\pi(4.776)^3 = 456 \text{ cm}^3. \text{ The solution checks out.}$$

Video Review



MEDIA

Click image to the left for more content.



MEDIA

Click image to the left for more content.

Guided Practice

Solve $\sqrt{x+15} = \sqrt{3x-3}$.

Solution:

Begin by canceling the square roots by squaring both sides.

$$\left(\sqrt{x+15}\right)^2 = \left(\sqrt{3x-3}\right)^2$$

$$x+15 = 3x-3$$

$$\text{Isolate the } x \text{ - variable :} \quad 18 = 2x$$

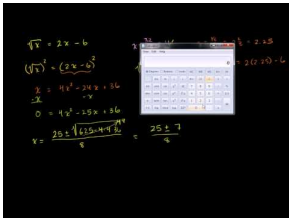
$$x = 9$$

Check the solution: $\sqrt{9+15} = \sqrt{3(9)-3} \rightarrow \sqrt{24} = \sqrt{24}$. The solution checks.

Practice

Sample explanations for some of the practice exercises below are available by viewing the following videos. Note that there is not always a match between the number of the practice exercise in the videos and the number of the

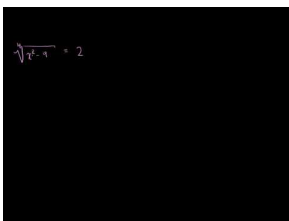
practice exercise listed in the following exercise set. However, the practice exercise is the same in both. [CK-12 Basic Algebra:Extraneous Solutions toRadicalEquations](#) (11:10)



MEDIA

Click image to the left for more content.

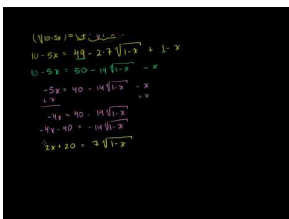
[CK-12 Basic Algebra:RadicalEquation Examples](#) (5:16)



MEDIA

Click image to the left for more content.

[CK-12 Basic Algebra:More Involved Radical Equation Example](#) (11:54)



MEDIA

Click image to the left for more content.

In 1-16, find the solution to each of the following radical equations. Identify extraneous solutions.

1. $\sqrt{x+2} - 2 = 0$
2. $\sqrt{3x-1} = 5$
3. $2\sqrt{4-3x} + 3 = 0$
4. $\sqrt[3]{x-3} = 1$
5. $\sqrt[4]{x^2-9} = 2$
6. $\sqrt[3]{-2-5x+3} = 0$
7. $\sqrt{x} = x - 6$
8. $\sqrt{x^2-5x-6} = 0$
9. $\sqrt{(x+1)(x-3)} = x$
10. $\sqrt{x+6} = x+4$
11. $\sqrt{x} = \sqrt{x-9} + 1$
12. $\sqrt{3x+4} = -6$
13. $\sqrt{10-5x} + \sqrt{1-x} = 7$
14. $\sqrt{2x-2} - 2\sqrt{x} + 2 = 0$
15. $\sqrt{2x+5} - 3\sqrt{2x-3} = \sqrt{2-x}$
16. $3\sqrt{x-9} = \sqrt{2x-14}$
17. The area of a triangle is 24 in^2 and the height of the triangle is twice as long as the base. What are the base and the height of the triangle?

18. The volume of a square pyramid is given by the formula $V = \frac{A(h)}{3}$, where $A = \text{area of the base}$ and $h = \text{height of the pyramid}$. The volume of a square pyramid is 1,600 cubic meters. If its height is 10 meters, find the area of its base.
19. The volume of a cylinder is 245 cm^3 and the height of the cylinder is one-third the diameter of the cylinder's base. The diameter of the cylinder is kept the same, but the height of the cylinder is increased by two centimeters. What is the volume of the new cylinder? (Volume = $\pi r^2 \cdot h$)
20. The height of a golf ball as it travels through the air is given by the equation $h = -16t^2 + 256$. Find the time when the ball is at a height of 120 feet.

Mixed Review

21. Joy sells two types of yarn: wool and synthetic. Wool is \$12 per skein and synthetic is \$9 per skein. If Joy sold 16 skeins of synthetic and collected a total of \$432, how many skeins of wool did she sell?
22. Solve $16 \geq |x - 4|$.
23. Graph the solution:
$$\begin{cases} y \leq 2x - 4 \\ y > -\frac{1}{4}x + 6 \end{cases}$$
.
24. You randomly point to a day in the month of February, 2011. What is the probability your finger lands on a Monday?
25. Carbon-14 has a half life of 5,730 years. Your dog dug a bone from your yard. It had 93% of its carbon-14 remaining. How old is the bone?
26. What is true about solutions to inconsistent systems?

11.6 Pythagorean Theorem and its Converse

Here you'll learn how to solve problems by using the Pythagorean Theorem and the converse of this theorem.

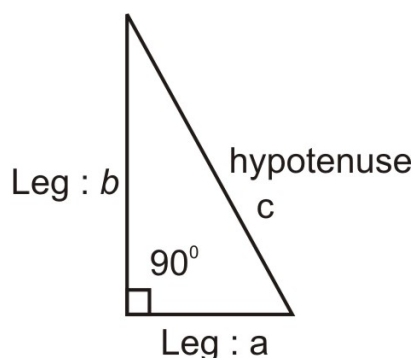
Suppose you're pitching a tent, and an 8-foot pole make a right angle with the ground. If a rope goes from the top of the pole to a point on the ground 12 feet away from the base of the pole, how long is the rope? How would you calculate its length? In this Concept, you'll learn about the Pythagorean Theorem and its converse so that you can solve real-world problems such as this one.

Try This

Multimedia Link: For an interactive version of Pythagorean's Theorem, use this Shockwave <http://www.pbs.org/wgbh/nova/proof/puzzle/theorem.html> - applet produced by NOVA and PBS.

Guidance

One of the most important theorems in history is Pythagorean's Theorem. Simply put, it states, "The sum of the square of each leg of a right triangle is equal to the square of the hypotenuse."



Let's review basic right triangle anatomy.

The two segments forming the right angle (90°) are called the *legs* of the right triangle. The segment opposite the right angle is called the *hypotenuse*.

So, the Pythagorean Theorem states, $(\text{leg}_1)^2 + (\text{leg}_2)^2 = (\text{hypotenuse})^2$:

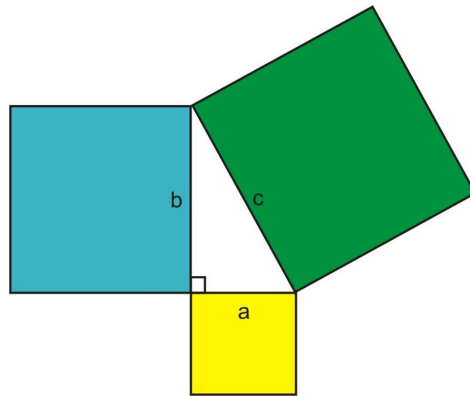
$$a^2 + b^2 = c^2$$

Or, to find the hypotenuse, $c = \sqrt{a^2 + b^2}$.

Notice this relationship is only true for **right triangles**. In later courses, you will learn how to determine relationships with non-right triangles.

Although we usually refer to the Pythagorean Theorem when determining side lengths of a right triangle, the theorem originally made a statement about areas. If we build squares on each side of a right triangle, the Pythagorean Theorem

says that the area of the square whose side is the hypotenuse is equal to the sum of the areas of the squares formed by the legs of the triangle.



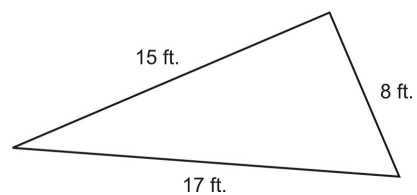
The Converse of Pythagorean's Theorem

The **Converse of the Pythagorean Theorem** is also true. That is, if the lengths of three sides of a triangle make the equation $a^2 + b^2 = c^2$ true, then they represent the sides of a right triangle.

With this converse, you can use the Pythagorean Theorem to prove that a triangle is a right triangle, even if you do not know any of the triangle's angle measurements.

Example A

Does the triangle below contain a right angle?



Solution: This triangle does not have any right angle marks or measured angles, so you cannot assume you know whether the triangle is acute, right, or obtuse just by looking at it. Take a moment to analyze the side lengths and see how they are related. Two of the sides, 15 and 17, are relatively close in length. The third side, 8, is about half the length of the two longer sides.

To see if the triangle might be right, try substituting the side lengths into the Pythagorean Theorem to see if they make the equation true. *The hypotenuse is always the longest side*, so 17 should be substituted for c . The other two values can represent a and b and the order is not important.

$$\begin{aligned} a^2 + b^2 &= c^2 \\ 8^2 + 15^2 &= 17^2 \\ 64 + 225 &= 289 \\ 289 &= 289 \end{aligned}$$

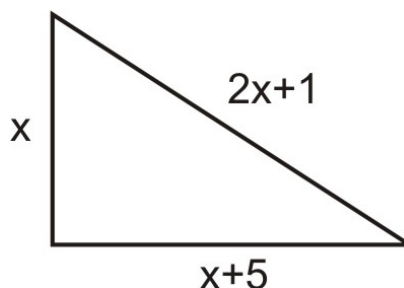
Since both sides of the equation are equal, these values satisfy the Pythagorean Theorem. Therefore, the triangle described in the problem is a right triangle.

Example B

One leg of a right triangle is 5 more than the other leg. The hypotenuse is one more than twice the size of the short leg. Find the dimensions of the triangle.

Solution:

Let x = length of the short leg. Then, $x + 5$ = length of the long leg and $2x + 1$ = length of the hypotenuse.



The sides of the triangle must satisfy the Pythagorean Theorem.

Eliminate the parentheses.

Move all terms to the right hand side of the equation.

Divide all terms by 2.

Solve using the quadratic formula.

$$x^2 + (x + 5)^2 = (2x + 1)^2$$

$$x^2 + x^2 + 10x + 25 = 4x^2 + 4x + 1$$

$$0 = 2x^2 - 6x - 24$$

$$0 = x^2 - 3x - 12$$

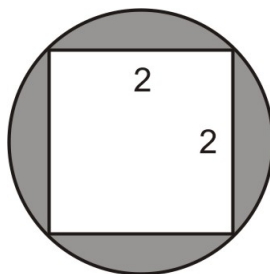
$$x = \frac{3 \pm \sqrt{9 + 48}}{2} = \frac{3 \pm \sqrt{57}}{2}$$

$$x \approx 5.27 \text{ or } x \approx -2.27$$

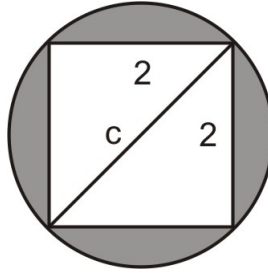
The negative solution does not make sense in the context of this problem. So, use $x = 5.27$ and we get short – leg = 5.27, long – leg = 10.27 and hypotenuse = 11.54.

Real-World Right Triangles**Example C**

Find the area of the shaded region in the following diagram.

**Solution:**

Draw the diagonal of the square on the figure.



Notice that the diagonal of the square is also the diameter of the circle.

Define variables. Let c = diameter of the circle.

Write the formula and solve.

$$2^2 + 2^2 = c^2$$

$$4 + 4 = c^2$$

$$c^2 = 8 \Rightarrow c = \sqrt{8} \Rightarrow c = 2\sqrt{2}$$

The diameter of the circle is $2\sqrt{2}$. Therefore, the radius is $r = \sqrt{2}$.

The area of a circle is $A = \pi r^2 = \pi (\sqrt{2})^2 = 2\pi$.

The area of the shaded region is, therefore, $2\pi - 4 \approx 2.28$.

Video Review



MEDIA

Click image to the left for more content.



MEDIA

Click image to the left for more content.

Guided Practice

Determine whether or not a triangle with sides of lengths 5, 6 and 8 forms a right triangle.

Solution:

Use the Converse of the Pythagorean Theorem:

Start with the Pythagorean equation.

$$a^2 + b^2 = c^2$$

Substitute in the values of the sides.

$$5^2 + 6^2 \stackrel{?}{=} 8^2$$

Simplify.

$$25 + 36 \stackrel{?}{=} 64$$


Check.

$$61 \neq 64$$

Since these lengths of sides do not satisfy the equation of the Pythagorean Theorem, the triangle is not a right triangle.

Practice

Sample explanations for some of the practice exercises below are available by viewing the following video. Note that there is not always a match between the number of the practice exercise in the video and the number of the practice exercise listed in the following exercise set. However, the practice exercise is the same in both. [CK-12 Basic Algebra:PythagoreanTheorem](#) (13:03)



MEDIA

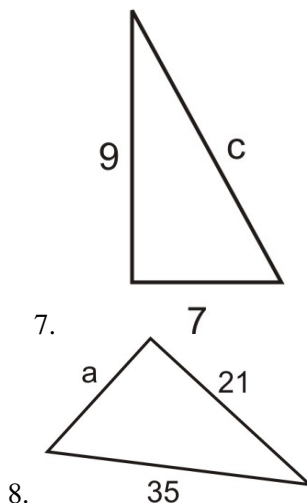
Click image to the left for more content.

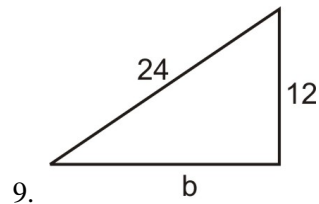
Verify that each triangle is a right triangle.

- $a = 12, b = 9, c = 15$
- $a = 6, b = 6, c = 6\sqrt{2}$
- $a = 8, b = 8\sqrt{3}, c = 16$

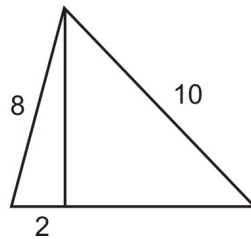
Find the missing length of each right triangle.

- $a = 12, b = 16, c = ?$
- $a = ?, b = 20, c = 30$
- $a = 4, b = ?, c = 11$

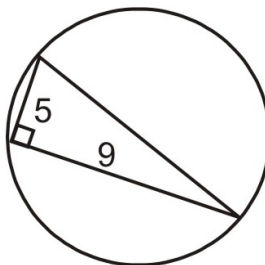




- 9.
- One leg of a right triangle is 4 feet less than the hypotenuse. The other leg is 12 feet. Find the lengths of the three sides of the triangle.
 - One leg of a right triangle is 3 more than twice the length of the other. The hypotenuse is 3 times the length of the short leg. Find the lengths of the three legs of the triangle.
 - A regulation baseball diamond is a square with 90 feet between bases. How far is second base from home plate?
 - Emanuel has a cardboard box that measures $20\text{ cm} \times 10\text{ cm} \times 8\text{ cm}$ (length \times width \times height). What is the length of the diagonal from a bottom corner to the opposite top corner?
 - Samuel places a ladder against his house. The base of the ladder is 6 feet from the house and the ladder is 10 feet long. How high above the ground does the ladder touch the wall of the house?
 - Find the area of the triangle by using the formula $A = \frac{1}{2}\text{base} \times \text{height}$.



- Instead of walking along the two sides of a rectangular field, Mario decided to cut across the diagonal. He saves a distance that is half of the long side of the field. Find the length of the long side of the field given that the short side is 123 feet.
- Marcus sails due north and Sandra sails due east from the same starting point. In two hours, Marcus's boat is 35 miles from the starting point and Sandra's boat is 28 miles from the starting point. How far are the boats from each other?
- Determine the area of the circle.



- In a right triangle, one leg is twice as long as the other and the perimeter is 28. What are the measures of the sides of the triangle?
- Maria has a rectangular cookie sheet that measures $10\text{ inches} \times 14\text{ inches}$. Find the length of the diagonal of the cookie sheet.
- Mike is loading a moving van by walking up a ramp. The ramp is 10 feet long and the bed of the van is 2.5 feet above the ground. How far does the ramp extend past the back of the van?

Quick Quiz

- Identify the origin of $h(x) = \sqrt{x-2} + 5$, and then graph the function.
- Simplify $\frac{6}{\sqrt{2}}$ by rationalizing the denominator.

3. Simplify: $\sqrt[4]{-32}$. If the answer is not possible, explain why.
4. What is an extraneous solution? In what situations do such solutions occur?
5. Can sides with lengths of 3, 4, and 6 form a right triangle?
6. Solve $5 = \sqrt[3]{y} + 6$.

11.7 Distance Formula

Here you'll learn how to find the distance between two points on a Cartesian plane.

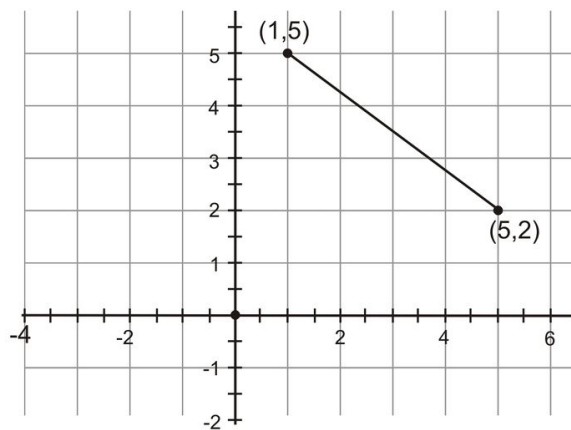
Suppose you and your friend were on a scavenger hunt. Starting out from the same place, you walked 5 blocks east and 3 blocks north. Your friend walked 7 blocks west and 2 blocks south. If each block were a tenth of a mile long, could you calculate how far apart you and your friend were? How would you do it? In this Concept, you'll learn how to use the distance formula to determine how far two points are from each other so that you can solve this type of problem.

Guidance

To understand the distance formula, we will first look at an example:

Example A

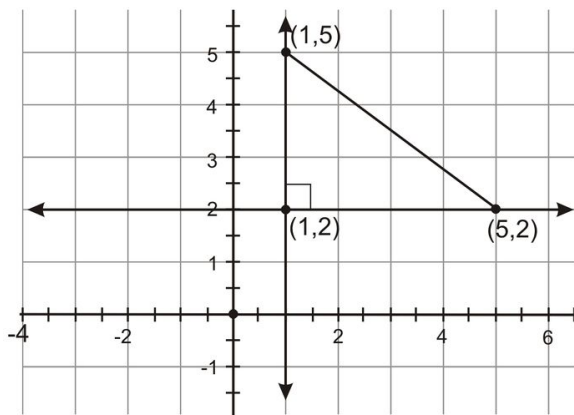
Find the length of the segment connecting $(1, 5)$ and $(5, 2)$.



Solution:

The question asks you to identify the length of the segment. Because the segment is not parallel to either axis, it is difficult to measure given the coordinate grid.

However, it is possible to think of this segment as the hypotenuse of a right triangle. Draw a vertical line and a horizontal line. Find the point of intersection. This point represents the third vertex in the right triangle.



You can easily count the lengths of the legs of this triangle on the grid. The vertical leg extends from $(1, 2)$ to $(1, 5)$, so it is $|5 - 2| = |3| = 3$ units long. The horizontal leg extends from $(1, 2)$ to $(5, 2)$, so it is $|5 - 1| = |4| = 4$ units long. Use the Pythagorean Theorem with these values for the lengths of each leg to find the length of the hypotenuse.

$$\begin{aligned} a^2 + b^2 &= c^2 \\ 3^2 + 4^2 &= c^2 \\ 9 + 16 &= c^2 \\ 25 &= c^2 \\ \sqrt{25} &= \sqrt{c^2} \\ 5 &= c \end{aligned}$$

The segment connecting $(1, 5)$ and $(5, 2)$ is 5 units long.

Mathematicians have simplified this process and created a formula that uses these steps to find the distance between any two points in the coordinate plane. If you use the distance formula, you don't have to draw the extra lines.

Distance formula: Given points (x_1, y_1) and (x_2, y_2) , the length of the segment connecting those two points is

$$d = \sqrt{(y_2 - y_1)^2 + (x_2 - x_1)^2}.$$

Example B

Find the distance between $(-3, 5)$ and $(4, -2)$.

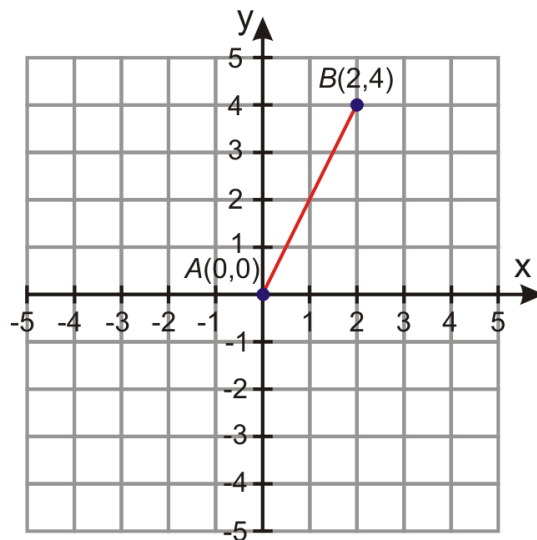
Solution:

Use the distance formula. Let $(x_1, y_1) = (-3, 5)$ and $(x_2, y_2) = (4, -2)$.

$$\begin{aligned} d &= \sqrt{(-2 - 5)^2 + (4 - (-3))^2} \rightarrow \sqrt{(-7)^2 + 7^2} \\ d &= \sqrt{98} = 7\sqrt{2} \text{ units} \end{aligned}$$

Example C

At 8 a.m. one day, Amir decides to walk in a straight line on the beach. After two hours of making no turns and traveling at a steady rate, Amir was two miles east and four miles north of his starting point. How far did Amir walk and what was his walking speed?

**Solution:**

Plot Amir's route on a coordinate graph. We can place his starting point at the origin, $A = (0, 0)$. Then, his ending point will be at the point $B = (2, 4)$. The distance can be found with the distance formula.

$$d = \sqrt{(4-0)^2 + (2-0)^2} = \sqrt{(4)^2 + (2)^2} = \sqrt{16+4} = \sqrt{20}$$

$$d = 4.47 \text{ miles.}$$

Since Amir walked 4.47 miles in 2 hours, his speed is:

$$\text{Speed} = \frac{4.47 \text{ miles}}{2 \text{ hours}} = 2.24 \text{ mi/h}$$

Video Review**MEDIA**

Click image to the left for more content.

**MEDIA**

Click image to the left for more content.

Guided Practice

Point A = (6, -4) and point B = (2, k). What is the value of k such that the distance between the two points is 5?

Solution:

Use the distance formula.

$$d = \sqrt{(y_1 - y_2)^2 + (x_1 - x_2)^2} \Rightarrow 5 = \sqrt{(4 - k)^2 + (6 - 2)^2}$$

Square both sides of the equation. $5^2 = \left[\sqrt{(4 - k)^2 + (6 - 2)^2} \right]^2$

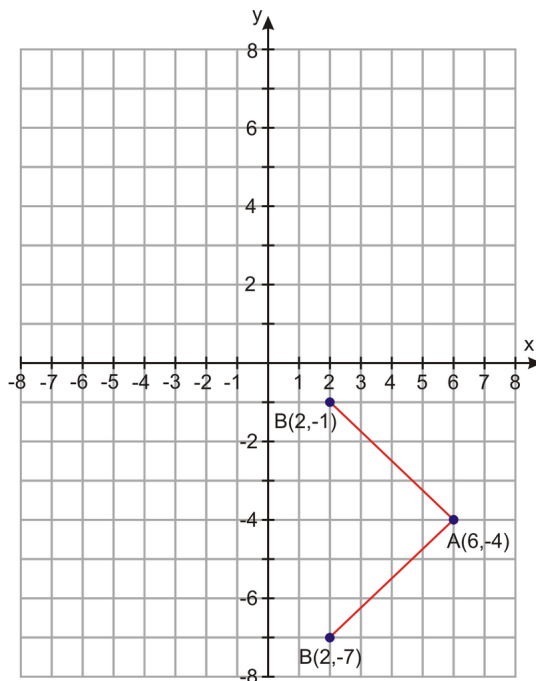
Simplify. $25 = (4 - k)^2 + 16$

Eliminate the parentheses. $0 = k^2 + 8k + 16 - 9$

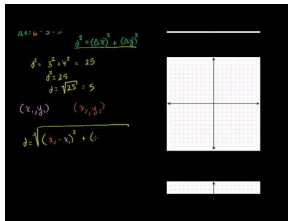
Simplify. $0 = k^2 + 8k + 7$

Find k using the quadratic formula. $k = \frac{-8 \pm \sqrt{64 - 28}}{2} = \frac{-8 \pm \sqrt{36}}{2} = \frac{-8 \pm 6}{2}$

$k = -7$ or $k = -1$. There are two possibilities for the value of k. Let's graph the points to get a visual representation of our results.

**Practice**


Sample explanations for some of the practice exercises below are available by viewing the following videos. Note that there is not always a match between the number of the practice exercise in the videos and the number of the practice exercise listed in the following exercise set. However, the practice exercise is the same in both. [CK-12 Basic Algebra: Distance Formula \(9:39\)](#)



MEDIA

Click image to the left for more content.

CK-12 Basic Algebra:PythagoreanTheorem3 (3:00)



MEDIA

Click image to the left for more content.

In 1–10, find the distance between the two points.

- (x_1, y_1) and (x_2, y_2)
- $(7, 7)$ and $(-7, 7)$
- $(-3, 6)$ and $(3, -6)$
- $(-3, -1)$ and $(-5, -8)$
- $(3, -4)$ and $(6, 0)$
- $(-1, 0)$ and $(4, 2)$
- $(-3, 2)$ and $(6, 2)$
- $(0.5, -2.5)$ and $(4, -4)$
- $(12, -10)$ and $(0, -6)$
- $(2.3, 4.5)$ and $(-3.4, -5.2)$
- Find all points having an x -coordinate of -4 and whose distance from point $(4, 2)$ is 10 .
- Find all points having a y -coordinate of 3 and whose distance from point $(-2, 5)$ is 8 .
- Michelle decides to ride her bike one day. First she rides her bike due south for 12 miles, and then the direction of the bike trail changes and she rides in the new direction for a while longer. When she stops, Michelle is 2 miles south and 10 miles west of her starting point. Find the total distance that Michelle covered from her starting point.

Mixed Review

- Solve $(x - 4)^2 = 121$.
- What is the GCF of $21ab^4$ and $15a^7b^2$?
- Evaluate ${}_{10}C_7$ and explain its meaning.
- Factor $6x^2 + 17x + 5$.
- Find the area of a rectangle with a length of $(16 + 2m)$ and a width of $(12 + 2m)$.
- Factor $x^2 - 81$.

11.8 Midpoint Formula

Here you'll learn how to find the halfway point between two coordinate pairs with the midpoint formula.

Suppose a coordinate plane were transposed over a subway map, and the blue line went in a straight line from the point $(-9, 8)$ to the point $(1, -4)$. If you got on the blue line at the beginning of the line and traveled halfway to the end of the line, what would be your coordinates? How would you calculate these coordinates? In this Concept, you'll learn how to use the midpoint formula to find the halfway point between any two coordinate pairs, such as the start point and end point of the blue line.

Guidance

Consider the following situation: You live in Des Moines, Iowa and your grandparents live in Houston, Texas. You plan to visit them for the summer and your parents agree to meet your grandparents halfway to exchange you. How do you find this location?

By meeting something “halfway,” you are finding the **midpoint** of the straight line connecting the two segments. In the above situation, the midpoint would be halfway between Des Moines and Houston.

The **midpoint** between two coordinate pairs represents the halfway point, or the **average**. It is the ordered pair (x_m, y_m) .

$$(x_m, y_m) = \left(\frac{x_1 + x_2}{2}, \frac{y_1 + y_2}{2} \right)$$

Example A

Des Moines, Iowa has the coordinates $(41.59, 93.62)$.

Houston, Texas has the coordinates $(29.76, 95.36)$.

Find the coordinates of the midpoint between these two cities.

Solution:

Decide which ordered pair will represent (x_1, y_1) and which will represent (x_2, y_2) .

$$(x_1, y_1) = (41.59, 93.62)$$

$$(x_2, y_2) = (29.76, 95.36)$$

Compute the midpoint using the formula $(x_m, y_m) = \left(\frac{x_1 + x_2}{2}, \frac{y_1 + y_2}{2} \right)$

$$(x_m, y_m) = \left(\frac{41.59 + 29.76}{2}, \frac{93.62 + 95.36}{2} \right)$$

$$(x_m, y_m) = (35.675, 94.49)$$

Using Google Maps, you can meet in the Ozark National Forest, halfway between the two cities.

Example B

A segment with endpoints $(9, -2)$ and (x_1, y_1) has a midpoint of $(2, -6)$. Find (x_1, y_1) .

Solution: Use the Midpoint Formula: $\frac{x_1+x_2}{2} = x_m$

$$2 = \frac{x_1 + 9}{2} \rightarrow 4 = x_1 + 9$$

$$x_1 = -5$$

Following the same procedure: $\frac{y_1+(-2)}{2} = -6 \rightarrow y_1 + (-2) = -12$

$$y_1 = -10$$

$$(x_1, y_1) = (-5, -10)$$

Example C

Find the values of x and y that make $(9.5, 6)$ the midpoint of $(3, 5)$ and (x, y) .

Solution:

Start with the formula, and solve for the variables:

The midpoint formula:

$$(x_m, y_m) = \left(\frac{x_1 + x_2}{2}, \frac{y_1 + y_2}{2} \right)$$

Substitute in the given values and variables:

$$(9.5, 6) = \left(\frac{3 + x}{2}, \frac{5 + y}{2} \right)$$

This can be re-written as two equations:

	$9.5 = \frac{3 + x}{2}$	$6 = \frac{5 + y}{2}$
Multiply each side by 2:	$19 = 3 + x$	$12 = 5 + y$
Isolate the variables:	$16 = x$	$7 = y$

Video Review

MEDIA

Click image to the left for more content.



Multimedia

MEDIA

Click image to the left for more content.

Guided Practice

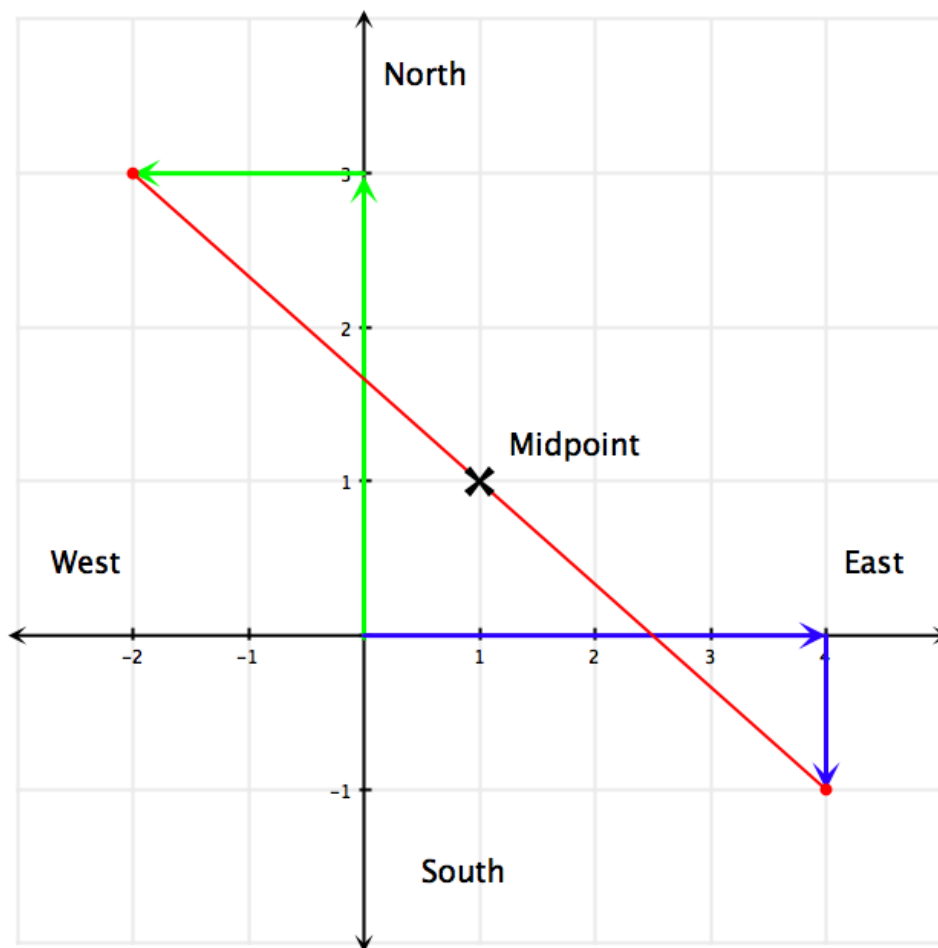
On a hike, you and your friend decide to take different routes, but then meet up for lunch. You hike 3 miles north and 2 miles west. Starting from the same point, your friend hikes 4 miles east and 1 mile south. From these points, you each walk towards each other, meeting halfway for lunch. Where would your lunchtime meeting place be in reference to your starting point?

Solution:

Think of the starting point as the origin of a Cartesian coordinate system. If you walk north 3 miles, that is walking straight up the graph 3 units. Walking west 2 miles is the same as walking left 2 units on the graph. Then you have arrived at the point $(-2, 3)$. For your friend, east is to the right (positive) and south is down (negative), so he/she arrives at $(4, -1)$. Now you need to find the midpoint:

$$(x_m, y_m) = \left(\frac{-2+4}{2}, \frac{3+(-1)}{2} \right) = \left(\frac{2}{2}, \frac{2}{2} \right) = (1, 1)$$

Your lunch time meeting place would be 1 mile north and 1 mile east of your starting point.



Practice

In 1–10, find the midpoint of the line segment joining the two points.

1. (x_1, y_1) and (x_2, y_2)
2. $(7, 7)$ and $(-7, 7)$
3. $(-3, 6)$ and $(3, -6)$
4. $(-3, -1)$ and $(-5, -8)$
5. $(3, -4)$ and $(6, 1)$
6. $(2, -3)$ and $(2, 4)$
7. $(4, -5)$ and $(8, 2)$
8. $(1.8, -3.4)$ and $(-0.4, 1.4)$
9. $(5, -1)$ and $(-4, 0)$
10. $(10, 2)$ and $(2, -4)$
11. An endpoint of a line segment is $(4, 5)$ and the midpoint of the line segment is $(3, -2)$. Find the other endpoint.
12. An endpoint of a line segment is $(-10, -2)$ and the midpoint of the line segment is $(0, 4)$. Find the other endpoint.
13. Shawn lives six blocks west and ten blocks north of the center of town. Kenya lives fourteen blocks east and two blocks north of the center of town.
 - a. How far apart are these two girls “as the crow flies”?
 - b. Where is the halfway point between their houses?

Mixed Review

14. A population increases by 1.2% annually. The current population is 121,000.
 - a. What will the population be in 13 years?
 - b. Assuming this rate continues, when will the population reach 200,000?
15. Write $1.29651843 \cdot 10^5$ in standard form.
16. Is $4, 2, 1, \frac{1}{2}, \frac{1}{6}, \frac{1}{8}, \dots$ an example of a geometric sequence? Explain your answer.
17. Simplify $6x^3(4xy^2 + y^3z)$.
18. Suppose $0 = (x - 2)(x + 1)(x - 3)$. What are the x -intercepts?
19. Simplify $\sqrt{300}$.

11.9 Measures of Central Tendency and Dispersion

Here you'll learn how to analyze real-world data by calculating measures of central tendency and dispersion.

Suppose the heights in inches of the students in your class are as follows: 58, 58, 59, 60, 62, 64, 64, 65, 66, 66, 66, 66, 68, 68, 69, 70, 71, 72, 72, 74, 75, 77. What would be the mean of this data? How about the median and mode? Would you be able to calculate the variance for this data? How about the standard deviation? After completing this Concept, you'll be able to calculate measures of central tendency and dispersion like these.

Watch This

Multimedia Link: Watch this http://www.teachertube.com/viewVideo.php?video_id=53143&title=How_to_Calculate_the_Standard_Deviation_of_a_Sample - Teacher Tube video for more help with standard deviation and variance.

Guidance

The majority of this textbook centers upon **two-variable data**, data with an input and an output. This is also known as **bivariate data**. There are many types of situations in which only one set of data is given. This data is known as **univariate data**. Unlike data you have seen before, no rule can be written relating univariate data. Instead, other methods are used to analyze the data. Three such methods are the **measures of central tendency**.

Measures of central tendency are the center values of a data set.

- Mean is the average of all the data. Its symbol is \bar{x} .
- Mode is the data value appearing most often in the data set.
- Median is the middle value of the data set, arranged in ascending order.

Example A

Mrs. Kramer collected the scores from her students test and obtained the following data:

90, 76, 53, 78, 88, 80, 81, 91, 99, 68, 62, 78, 67, 82, 88, 89, 78, 72, 77, 96, 93, 88, 88

Find the mean, median, mode, and range of this data.

Solution:

- To find the mean, add all the values and divide by the number of values you added.

$$\text{mean} = 80.96$$

- To find the mode, look for the value(s) repeating the most.

$$\text{mode} = 88$$

- To find the median, organize the data from least to greatest. Then find the middle value.

53, 62, 62, 67, 68, 72, 76, 77, 78, 78, 78, 78, 80, 81, 82, 88, 88, 88, 88, 89, 90, 91, 93, 96, 99

$$\text{median} = 81$$

- To find the range, subtract the highest value and the lowest value.

$$\text{range} = 99 - 53 = 46$$

When a data set has two modes, it is **bimodal**.

If the data does not have a “middle value,” the **median** is the average of the two middle values. This occurs when data sets have an even number of entries.

Which Measure Is Best?

While the mean, mode, and median represent centers of data, one is usually more beneficial than another when describing a particular data set.

For example, if the data has a wide **range**, the median is a better choice to describe the center than the mean.

- The income of a population is described using the **median**, because there are very low and very high incomes in one given region.

If the data were categorical, meaning it can be separated into different categories, the **mode** may be a better choice.

- If a sandwich shop sold ten different sandwiches, the mode would be useful to describe the favorite sandwich.

Measures of Dispersion

In statistics, measures of **dispersion** describe how spread apart the data is from the measure of center. There are three main types of dispersion:

- Range - the difference between the highest and lowest values in the data.
- Standard deviation - the square root of the variance.
- Variance - the mean of the squares of the distance **each data item** (x_i) is from the mean.

$$\sigma^2 = \frac{(x_1 - \bar{x})^2 + (x_2 - \bar{x})^2 + \dots + (x_n - \bar{x})^2}{n}$$

The symbol for variance is σ^2 .

Example B

Find the variance for the following data: 11, 13, 14, 15, 19, 22, 24, 26.

Solution: First find the mean (\bar{x}).

$$\bar{x} = \frac{11 + 13 + 14 + 15 + 19 + 22 + 24 + 26}{8} = 18$$

It's easier to create a table of the differences and their squares.

TABLE 11.3:

x_i	$x_i - \bar{x}$	$(x_i - \bar{x})^2$
11	-7	49
13	-5	25
14	-4	16
15	-3	9
19	1	1
22	4	16
24	6	36
26	8	64

Compute the variance: $\frac{49+25+16+9+1+16+36+64}{8} = 27$.

The variance is a measure of the dispersion and its value is lower for tightly grouped data than for widely spread data. In the example above, the variance is 27. What does it mean to say that tightly grouped data will have a low variance? You can probably already imagine that the size of the variance also depends on the size of the data itself. Below we see ways that mathematicians have tried to standardize the variance.

The Standard Deviation

Standard deviation measures how closely the data clusters around the mean. It is the square root of the variance. Its symbol is σ .

$$\sigma = \sqrt{\sigma^2} = \sqrt{\frac{(x_1 - \bar{x})^2 + (x_2 - \bar{x})^2 + \dots + (x_n - \bar{x})^2}{n}}$$

Example C

Calculate the standard deviation of the previous data set.

Solution:

The standard deviation is the square root of the variance.

$$\sigma^2 = 27 \text{ so } \sigma = 5.196$$

Video Review



MEDIA

Click image to the left for more content.



MEDIA

Click image to the left for more content.

Guided Practice

Find the mean, median, mode, range, variance, and standard deviation of the data set below.

TABLE 11.4:

Address	Sale Price
518 CLEVELAND AVE	\$117,424
1808 MARKESE AVE	\$128,000
1770 WHITE AVE	\$132,485
1459 LINCOLN AVE	\$77,900
1462 ANNE AVE	\$60,000
2414 DIX HWY	\$250,000
1523 ANNE AVE	\$110,205
1763 MARKESE AVE	\$70,000
1460 CLEVELAND AVE	\$111,710
1478 MILL ST	\$102,646

Solution:

$$\text{mean} = \$116,037$$

$$\text{median} = \frac{110,205 + 111,710}{2} = \$110,957.50$$

$$\text{mode} = \text{none}$$

$$\text{range} = \$190,000$$

Use a table to find variance.

TABLE 11.5:

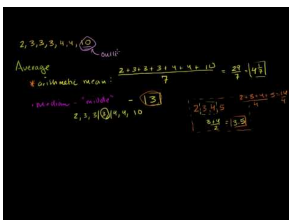
x_i	$x_i - \bar{x}$	$(x_i - \bar{x})^2$
117,424	1387	1,923,769
128,000	11,963	143,113,369
132,485	16,448	270,536,704
77,900	-38,137	1,454,430,769
60,000	-56,037	3,140,145,369
250,000	133,963	1.7946×10^{10}
110,205	-5832	34,012,224
70,000	-46,037	2,119,405,369
111,710	-4327	18,722,929
102,646	-13,391	179,318,881

$$\text{variance} = 2,530,769,498$$

$$\text{standard deviation} = 50,306.754$$

Practice

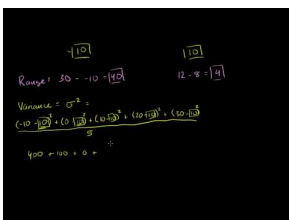
Sample explanations for some of the practice exercises below are available by viewing the following videos. Note that there is not always a match between the number of the practice exercise in the videos and the number of the practice exercise listed in the following exercise set. However, the practice exercise is the same in both. [CK-12 Basic Algebra:Average or Central Tendency: Arithmetic Mean, Median, and Mode \(9:01\)](#)



MEDIA

Click image to the left for more content.

[CK-12 Basic Algebra:Range, Variance, and Standard Deviation as Measures of Dispersion \(12:34\)](#)



MEDIA

Click image to the left for more content.

1. Define *measures of central tendency*. What are the three listed in this Concept?
2. Define *median*. Explain its difference from the mean. In which situations is the median more effective to describe the center of the data?
3. What is bimodal? Give an example of a set of data that is bimodal.
4. What are the three measures of *dispersion* described in this Concept? Which is the easiest to compute?
5. Give the formula for *variance* and define its variables.
6. Why may variance be difficult to use as a measure of spread? Use the housing example to help you explain.
7. Describe *standard variation*.
8. Explain why the standard deviation of 2, 2, 2, 2, 2, 2, and 2 is zero.
9. Find the mean, median, and range of the salaries given below.

TABLE 11.6:

Professional Realm	Annual income
Farming, Fishing, and Forestry	\$19,630
Sales and Related	\$28,920
Architecture and Engineering	\$56,330
Healthcare Practitioners	\$49,930
Legal	\$69,030
Teaching & Education	\$39,130
Construction	\$35,460
Professional Baseball Player*	\$2,476,590

(Source: Bureau of Labor Statistics, except (*) - The Baseball Players' Association (playbpa.com)).

Find the mean, median, mode, and range of the following data sets.

10. 11, 16, 9, 15, 5, 18
11. 53, 32, 49, 24, 62
12. 11, 9, 19, 9, 19, 9, 13, 11
13. 3, 2, 6, 9, 0, 1, 6, 6, 3, 2, 3, 5
14. 2, 17, 1, -3, 12, 8, 12, 16
15. 11, 21, 6, 17, 9.
16. 223, 121, 227, 433, 122, 193, 397, 276, 303, 199, 197, 265, 366, 401, 222

Find the mean, median, and standard deviation of the following numbers. Which, of the mean and median, will give the best *average*?

17. 15, 19, 15, 16, 11, 11, 18, 21, 165, 9, 11, 20, 16, 8, 17, 10, 12, 11, 16, 14
18. 11, 12, 14, 14, 14, 14, 19
19. 11, 12, 14, 16, 17, 17, 18
20. 6, 7, 9, 10, 13
21. 121, 122, 193, 197, 199, 222, 223, 227, 265, 276, 303, 366, 397, 401, 433
22. If each score on an algebra test is increased by seven points, how would this affect the:
 - a. Mean?
 - b. Median?
 - c. Mode?
 - d. Range?
 - e. Standard deviation?
23. If each score of a golfer was multiplied by two, how would this affect the:
 - a. Mean?
 - b. Median?
 - c. Mode?
 - d. Range?
24. Henry has the following World History scores: 88, 76, 97, 84. What would Henry need to score on his fifth test to have an average of 86?
25. Explain why it is not possible for Henry to have an average of 93 after his fifth score.
26. The mean of nine numbers is 105. What is the sum of the numbers?
27. A bowler has the following scores: 163, 187, 194, 188, 205, 196. Find the bowler's average.
28. Golf scores for a nine-hole course for five different players were: 38, 45, 58, 38, 36.
 - a. Find the mean golf score.
 - b. Find the standard deviation to the nearest hundredth.
 - c. Does the mean represent the most accurate center of tendency? Explain.
29. Ten house sales in Encinitas, California are shown in the table below. Find the mean, median, and standard deviation for the sale prices. Explain, using the data, why the **median house price** is most often used as a measure of the house prices in an area.

TABLE 11.7:

Address	Sale Price	Date Of Sale
643 3RD ST	\$1,137,000	6/5/2007
911 CORNISH DR	\$879,000	6/5/2007
911 ARDEN DR	\$950,000	6/13/2007

TABLE 11.7: (continued)

Address	Sale Price	Date Of Sale
715 S VULCAN AVE	\$875,000	4/30/2007
510 4TH ST	\$1,499,000	4/26/2007
415 ARDEN DR	\$875,000	5/11/2007
226 5TH ST	\$4,000,000	5/3/2007
710 3RD ST	\$975,000	3/13/2007
68 LA VETA AVE	\$796,793	2/8/2007
207 WEST D ST	\$2,100,000	3/15/2007

30. Determine which statistical measure (mean, median, or mode) would be most appropriate for the following.
- The life expectancy of store-bought goldfish.
 - The age in years of the audience for a kids' TV program.
 - The weight of potato sacks that a store labels as "5-pound bag."
31. James and John both own fields in which they plant cabbages. James plants cabbages by hand, while John uses a machine to carefully control the distance between the cabbages. The diameters of each grower's cabbages are measured, and the results are shown in the table. John claims his method of machine planting is better. James insists it is better to plant by hand. Use the data to provide a reason to justify **both sides** of the argument.

TABLE 11.8:

	James	John
Mean Diameter (inches)	7.10	6.85
Standard Deviation (inches)	2.75	0.60

32. Two bus companies run services between Los Angeles and San Francisco. The mean journey times and standard deviations in those times are given below. If Samantha needs to travel between the cities, which company should she choose if:
- She needs to catch a plane in San Francisco.
 - She travels weekly to visit friends who live in San Francisco and wishes to minimize the time she spends on a bus over the entire year.

TABLE 11.9:

	Inter-Cal Express	Fast-dog Travel
Mean Time (hours)	9.5	8.75
Standard Deviation (hours)	0.25	2.5

Mixed Review

33. A square garden has dimensions of 20 yards by 20 yards. How much shorter is it to cut across the diagonal than to walk around two joining sides?
34. Rewrite in standard form: $y = \frac{1}{6}x - 5$.
35. Solve for m : $-2 = \sqrt[4]{x+7}$.
36. A sail has a vertical length of 15 feet and a horizontal length of 8 feet. To the nearest foot, how long is the diagonal?
37. Rationalize the denominator: $\frac{2}{\sqrt{2}}$.

11.10 Stem-and-Leaf Plots

Here you'll learn how to visualize the spread of data by making stem-and-leaf plots, as well as histograms.

Suppose that your physical education teacher asked each of the members of your gym class to do as many pull-ups as possible. If you recorded the number of pull-ups completed by each person, would you be able to represent this data with a stem-and-leaf plot? How about with a histogram? In this Concept, you'll learn how to create these two types of graphs so that you can analyze and interpret data.

Guidance

Understanding data is a very important mathematical ability. You must know how to use data and interpret the results to make informed decisions about politics, food, and income. This Concept will show two ways to graph data:

- as a stem-and-leaf plot and
- as a histogram

A **stem-and-leaf plot** is an organization of numerical data into categories based on place value. The stem-and-leaf plot is a graph that is similar to a histogram but it displays more information. For a stem-and-leaf plot, each number will be divided into two parts using place value.

The **stem** is the left-hand column and will contain the digits in the largest place. The right-hand column will be the **leaf** and it will contain the digits in the smallest place.

Example A

In a recent study of male students at a local high school, students were asked how much money they spend socially on prom night. The following numbers represent the amount of dollars of a random selection of 40 male students.

25	60	120	64	65	28	110	60
70	34	35	70	58	100	55	95
55	95	93	50	75	35	40	75
90	40	50	80	85	50	80	47
50	80	90	42	49	84	35	70

Represent this data in a stem-and-leaf plot.

Solution:

The stems will be arranged vertically in ascending order (smallest to largest) and each leaf will be written to the right of its stem horizontally in order from least to greatest.

TABLE 11.10:

Stem	Leaf
2	5, 8
3	4, 5, 5, 5

TABLE 11.10: (continued)

Stem	Leaf
4	0, 0, 2, 7, 9
5	0, 0, 0, 0, 5, 5, 8
6	0, 0, 4, 5
7	0, 0, 0, 5, 5
8	0, 0, 0, 4, 5
9	0, 0, 3, 5, 5
10	0
11	0
12	0

This stem-and-leaf plot can be interpreted very easily. By looking at stem 6, you see that 4 males spent 60 'some dollars' on prom night. By counting the number of leaves, you know that 40 males responded to the question concerning how much money they spent on prom night. The smallest and largest data values are known by looking at the first and last stem-and-leaf. The stem-and-leaf is a 'quick look' chart that can quickly provide information from the data. This also serves as an easy method for sorting numbers manually.

Interpreting and Creating Histograms

Suppose you took a survey of 20 algebra students, asking their number of siblings. You would probably get a variety of answers. Some students would have no siblings while others would have several. The results may look like this.

1, 4, 2, 1, 0, 2, 1, 0, 1, 2, 1, 0, 0, 2, 2, 3, 1, 1, 3, 6

We could organize this many ways. The first way might just be to create an ordered list, relisting all numbers in order, starting with the smallest.

0, 0, 0, 0, 1, 1, 1, 1, 1, 1, 1, 2, 2, 2, 2, 2, 3, 3, 4, 6

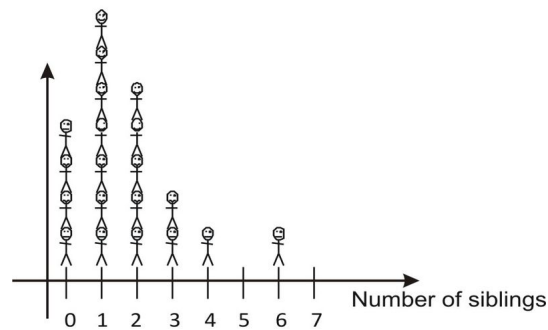
Another way to list the results is in a table.

TABLE 11.11:

Number of Siblings	Number of Matching Students
0	4
1	7
2	5
3	2
4	1
5	0
6	1

A table showing the number of times a particular category appears in a data set is a **frequency distribution**.

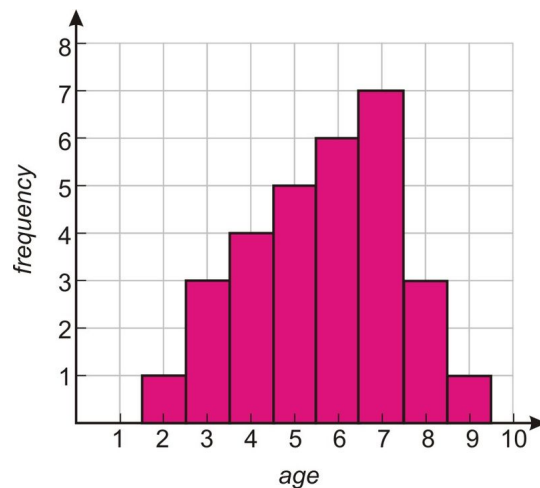
You could also make a visual representation of the data by making categories for the number of siblings on the x -axis and stacking representations of each student above the category marker. We could use crosses, stick-men or even photographs of the students to show how many students are in each category.



This graph is called a **histogram**.

A **histogram** is a bar chart that describes a frequency distribution.

The horizontal axis of the histogram is separated into equal intervals. The vertical bars represent how many items are in each interval.



Example B

Jim collected data at a local fair. The above histogram relates the number of children of particular ages who visited the face-painting booth. What can you conclude using this histogram?

Solution:

- You can find the sum of the heights of each bar to determine how many children visited the face painting booth.

$$1 + 3 + 4 + 5 + 6 + 7 + 3 + 1 = 30 \text{ children}$$

- The tallest bar is at age seven. There were more seven-year olds than any other age group.
- There is no bar at one or ten. This means zero ten-year-olds and zero one-year-olds had their faces painted.

Creating Histograms Using a Graphing Calculator

Drawing a histogram is quite similar to drawing a scatter plot. Instead of graphing two lists, L_1 and L_2 , you will graph only one list, L_1 .

Example C

The following unordered data represents the ages of passengers on a train carriage. Make a histogram of the data on a graphing calculator.

35, 42, 38, 57, 2, 24, 27, 36, 45, 60, 38, 40, 40, 44, 1, 44, 48, 84, 38, 20, 4,
2, 48, 58, 3, 20, 6, 40, 22, 26, 17, 18, 40, 51, 62, 31, 27, 48, 35, 27, 37, 58, 21.

Solution:

Begin by entering the data into [LIST 1] of the [STAT] menu.

L1	L2	L3	1
48			
35			
27			
37			
58			
24			

L1(43) = 21			

Choose [2^{nd}] and [$Y =$] to enter into the [STATPLOT] menu.

```

2nd Plot2 Plot3
Off Off
Type: L1 L2 L3
      [ ] [ ] [ ]
Xlist: L1
Freq: 1

```

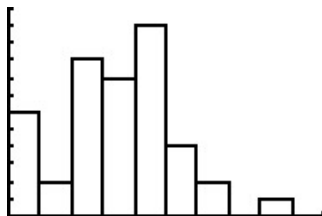
Press [WINDOW] and ensure that **Xmin** and **Xmax** allow for all data points to be shown. The **Xscl** value determines the bin width.

```

WINDOW
Xmin=0
Xmax=100
Xscl=10
Ymin=0
Ymax=12
Yscl=1
Xres=█

```

Press [GRAPH] to display the histogram.

**Video Review**



MEDIA

Click image to the left for more content.



MEDIA

Click image to the left for more content.

Guided Practice

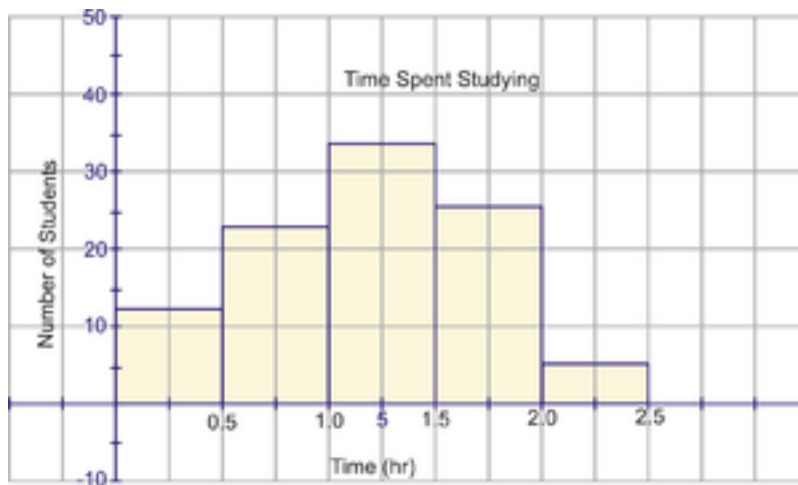
Example: Studies (and logic) show that the more homework you do the better your grade in a course will be. In a study conducted at a local school, students in grade 10 were asked to check off what box represented the average amount of time they spent on homework each night. The following results were recorded:

TABLE 11.12:

Time Spent on Homework (Hours)	Tally	Frequency (# of students)
[0 – 0.5)		12
[0.5 – 1.0)		23
[1.0 – 1.5)		34
[1.5 – 2.0)		26
[2.0 – 2.5)		5
2.5+		0

Convert this data into a histogram.

Solution:



Practice

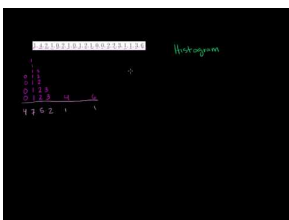
Sample explanations for some of the practice exercises below are available by viewing the following videos. Note that there is not always a match between the number of the practice exercise in the videos and the number of the practice exercise listed in the following exercise set. However, the practice exercise is the same in both. [CK-12 Basic Algebra:Stem-and-Leaf Plots \(6:45\)](#)



MEDIA

Click image to the left for more content.

[CK-12 Basic Algebra:Histograms \(6:08\)](#)



MEDIA

Click image to the left for more content.

1. What is the *stem* in a stem-and-leaf plot? What is a *leaf*? What is an advantage to using a stem-and-leaf plot?
2. Describe a *histogram*. What is an advantage of using a histogram?
3. For each of the following examples, describe why you would likely use a histogram.
 - a. Frequency of the favorite drinks for the first 100 people to enter the school dance
 - b. Frequency of the average time it takes the people in your class to finish a math assignment
 - c. Frequency of the average distance people park their cars away from the mall in order to walk a little more
4. Prepare a histogram using the following scores from a recent science test. Offer four conclusions you can make about this histogram? Include mean, median, mode, range, etc.

TABLE 11.13:

Score (%)	Tally	Frequency
50-60		4
60-70	/	6
70-80	/	11
80-90	/	8
90-100		4

5. A research firm has just developed a streak-free glass cleaner. The product is sold at a number of local chain stores and its sales are being closely monitored. At the end of one year, the sales of the product are released. The company is planning on starting up an advertisement campaign to promote the product. The data is found

in the chart below.

266	94	204	164	219	163
87	248	137	193	144	89
175	164	118	248	159	123
220	141	122	143	250	168
100	217	165	226	138	131

- Display the sales of the product before the ad campaign in a stem-and-leaf plot.
 - How many chain stores were involved in selling the streak-free glass cleaner?
 - In stem 1, what does the number 11 represent? What does the number 8 represent?
 - What percentage of stores sold less than 175 bottles of streak-free glass cleaner?
6. Using the following data, answer the questions that follow. Data: 607.4, 886.0, 822.2, 755.7, 900.6, 770.9, 780.8, 760.1, 936.9, 962.9, 859.9, 848.3, 898.7, 670.9, 946.7, 817.8, 868.1, 887.1, 881.3, 744.6, 984.9, 941.5, 851.8, 905.4, 810.6, 765.3, 881.9, 851.6, 815.7, 989.7, 723.4, 869.3, 951.0, 794.7, 807.6, 841.3, 741.5, 822.2, 966.2, 950.1
- A. Create a stem-and-leaf plot. Round each data point to the nearest tens place. Use the hundreds digit as the stem and the tens place as the leaf.
- What is the mean of the data?
 - What is the mode of the data?
 - What is the median of the data?
- B. Make a frequency table for the data. Use a bin width of 50. C. Plot the data as a histogram with a bin width of:
- 50
 - 100
7. The women from the senior citizen's complex bowl every day of the month. Lizzie had never bowled before and was enjoying this newfound pastime. She decided to keep track of her best score of the day for the month of September. Here are the scores that she recorded:

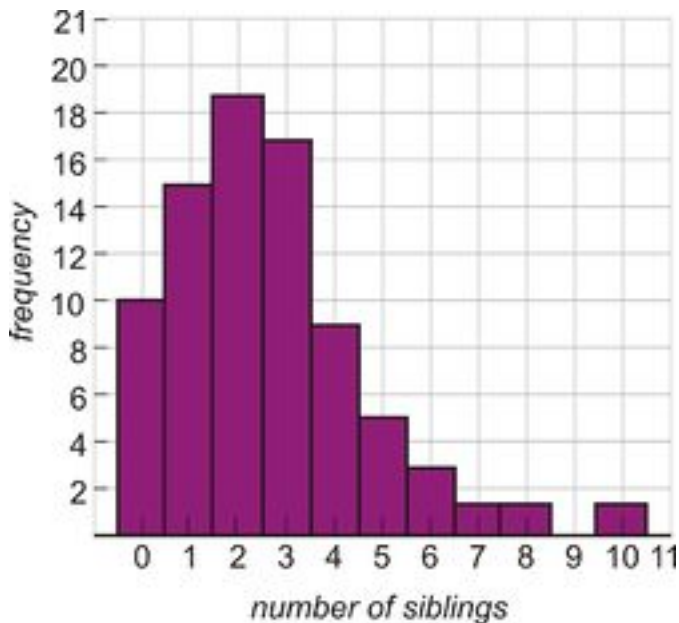
77	80	82	68	65	59	61
57	50	62	61	70	69	64
67	70	62	65	65	73	76
87	80	82	83	79	79	77
80	71					

In order for Lizzie to see how well she is doing, create a stem-and-leaf plot of her scores.

- It is your job to entertain your younger sibling every Saturday morning. You decide to take the youngster to the community pool to swim. Since swimming is a new thing to do, your little buddy isn't too sure about the water and is a bit scared of the new adventure. You decide to keep a record of the length of time he stays in the water each morning. You recorded the following times (in minutes): 12, 13, 21, 27, 33, 34, 35, 37, 40, 40, 41. Create a stem-and-leaf plot to represent this data. List two conclusions you can make from this graph.
- The following stem-and-leaf plot shows data collected for the speed of 40 cars in a 35 mph limit zone in Culver City, California.
 - Find the mean, median, and mode speed.
 - Complete a frequency table, starting at 25 mph with a bin width of 5 mph.
 - Use the table to construct a histogram with the intervals from your frequency table.

2	6	7	8	8	9																	
3	0	0	1	1	1	2	2	2	2	3	3	4	5	5	5	6	6	7	7	9	9	9
4	0	2	1	1	2	4	4	5	6	8	9											
5	0	7																				

10. The following histogram displays the results of a larger-scale survey of the number of siblings. Use it to find:



- a. The median of the data
- b. The mean of the data
- c. The mode of the data
- d. The number of people who have an odd number of siblings
- e. The percentage of the people surveyed who have four or more siblings

11. Use the stem-and-leaf plot to devise a situation that follows the data.

6	0
7	5
8	8 2
9	

12. An oil company claims that its premium-grade gasoline contains an additive that significantly increases gas mileage. To prove their claim, the company selected 15 drivers and first filled each of their cars with 45 L of regular gasoline and asked them to record their mileage. The company then filled each of the cars with 45 L of premium gasoline and again asked them to record their mileage. The results below show the number of kilometers each car traveled.

TABLE 11.14:

640	570	660	580	610
540	555	588	615	570
550	590	585	587	591

TABLE 11.15:

659	619	639	629	664
635	709	637	633	618
694	638	689	589	500

Display each set of data to explain whether or not the claim made by the oil company is true or false.

Mixed Review

- How many ways can a nine-person soccer team line up for a picture if the goalie is to be in the center?
- Graph $8x + 5y = 40$ using its intercepts.
- Simplify $\left(\frac{7y^{-3}z^2}{4y^4z^{-6}}\right)^{-2}$.
- Rewrite in standard form: $y = -3(x - 1)^2 + 4$.
- Graph $f(x) = \frac{-x+2}{2}$.
- A ball is dropped from a height of 10 meters. When will it reach the ground?
- Solve the following system: $\begin{cases} 3x + 4y = 9 \\ 9x + 12y = 27 \end{cases}$.

11.11 Box-and-Whisker Plots

Here you'll learn how to visualize data by using box-and-whisker plots.

Suppose that in the first 20 screenings of a movie, the number of paying customers at a theater were as follows: 16, 34, 22, 19, 59, 33, 60, 45, 50, 27, 75, 38, 49, 52, 20, 40, 13, 15, 26, 21. Could you analyze this data with a box-and-whisker plot? If so, what would you need to do first? In this Concept, you'll learn how to use box-and-whisker plots to analyze data sets like this one.

Guidance

A **box-and-whisker plot** is another type of graph used to display data. It shows how the data are dispersed around a median, but it does not show specific values in the data. It does not show a distribution in as much detail as does a stem-and-leaf plot or a histogram.

A **box-and-whisker plot** is a graph based upon medians. It shows the minimum value, the lower median, the median, the upper median, and the maximum value of a data set. It is also known as a **box plot**.

This type of graph is often used when the number of data values is large or when two or more data sets are being compared.

Example A

You have a summer job working at Paddy's Pond. Your job is to measure as many salmon as possible and record the results. Here are the lengths (in inches) of the first 15 fish you found: 13, 14, 6, 9, 10, 21, 17, 15, 15, 7, 10, 13, 13, 8, 11

Create a box-and-whisker plot.

Solution:

Since a box-and-whisker plot is based on medians, the first step is to organize the data in order from smallest to largest.

$$6, 7, 8, 9, 10, 10, 11, \boxed{13}, 13, 13, 14, 15, 15, 17, 21$$

Step 1: Find the median: $median = 13$.

Step 2: Find the lower median.

The lower median is the median of the lower half of the data. It is also called the **lower quartile** or Q_1 .

$$6, 7, 8, \boxed{9}, 10, 10, 11$$
$$Q_1 = 9$$

Step 3: Find the upper median.

The upper median is the median of the upper half of the data. It is also called the **upper quartile** or Q_2 .

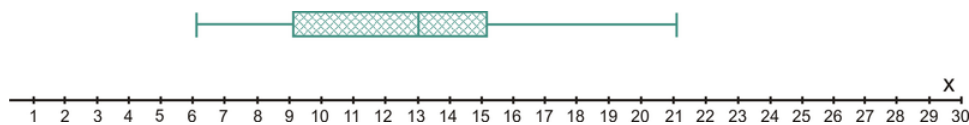
13, 13, 14, 15, 15, 17, 21

$$Q_3 = 15$$

Step 4: Draw the box plot. The numbers needed to construct a box-and-whisker plot are called the **five-number summary**.

The **five-number summary** are: the minimum value, Q_1 , the median, Q_2 , and the maximum value.

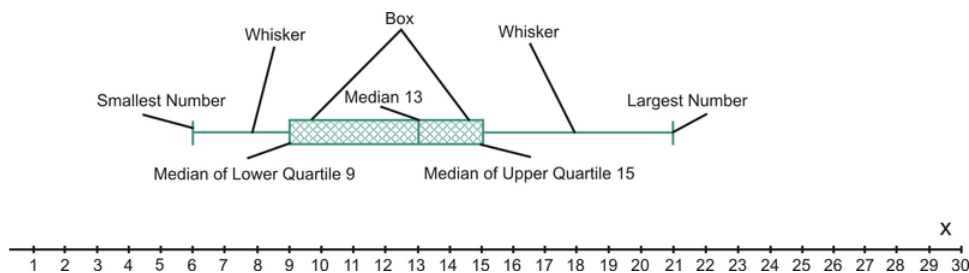
Minimum = 6; $Q_1 = 9$; median = 13; $Q_3 = 15$; maximum = 21



The three medians divide the data into four equal parts. In other words:

- One-quarter of the data values are located between 6 and 9.
- One-quarter of the data values are located between 9 and 13.
- One-quarter of the data values are located between 13 and 15.
- One-quarter of the data values are located between 15 and 21.

From its whiskers, any outliers (unusual data values that can be either low or high) can be easily seen on a box-and-whisker plot. An outlier would create a whisker that would be very long.



Each whisker contains 25% of the data and the remaining 50% of the data is contained within the box. It is easy to see the range of the values as well as how these values are distributed around the middle value. The smaller the box, the more consistent the data values are with the median of the data.

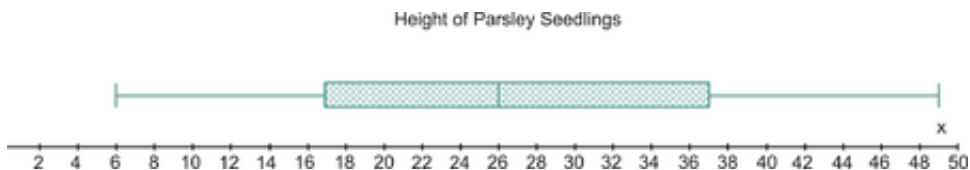
Example B

After one month of growing, the heights of 24 parsley seed plants were measured and recorded. The measurements (in inches) are given here: 6, 22, 11, 25, 16, 26, 28, 37, 37, 38, 33, 40, 34, 39, 23, 11, 48, 49, 8, 26, 18, 17, 27, 14.

Construct a box-and-whisker plot to represent the data.

Solution:

To begin, organize your data in ascending order. There is an even number of data values so the median will be the mean of the two middle values. $Med = \frac{26+26}{2} = 26$. The median of the lower quartile is the number between the 6th and 7th positions, which is the average of 16 and 17, or 16.5. The median of the upper quartile is also the number between the 6th and 7th positions, which is the average of 37 and 37, or 37. The smallest number is 6, and the largest number is 49.



Creating Box-and-Whisker Plots Using a Graphing Calculator

The TI-83 can also be used to create a box-and-whisker plot. The five-number summary values can be determined by using the trace function of the calculator.

Example C

'Make a histogram of the data from the previous example on your calculator.

Solution:

Enter the data into [L₁].

L1	L2	L3	1
6	-----	-----	
8			
11			
11			
12			
14			
16			
L1(1)=6			

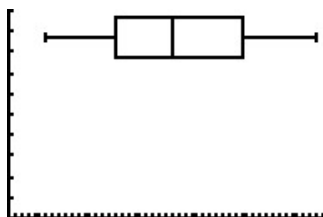
Change the [STATPLOT] to a box plot instead of a histogram.

```

1:Plot1 Plot2 Plot3
2:Off Off
Type: [Histogram] [Box Plot] [Normal]
Xlist:L1
Freq:1
    
```

```

5:STAT PLOTS
1:Plot1...On
   L1 1
2:Plot2...Off
   L3 L4
3:Plot3...Off
   L1 L2
4:PlotsOff
    
```



Box-and-whisker plots are useful when comparing multiple sets of data. The graphs are plotted, one above the other, to visualize the median comparisons.

Video Review



MEDIA

Click image to the left for more content.



MEDIA

Click image to the left for more content.

Guided Practice

Using the data from the previous Concept, determine whether the additive improved the gas mileage.

TABLE 11.16:

540	550	555	570	570
580	585	587	588	590
591	610	615	640	660

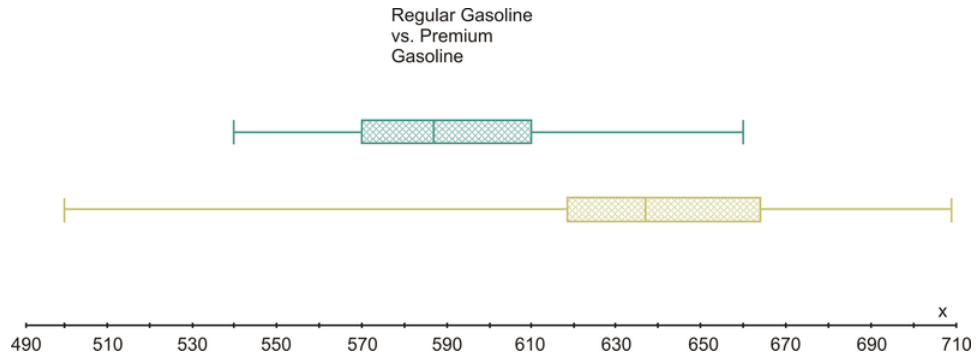
TABLE 11.17:

500	589	618	619	629
633	635	637	638	639
659	664	689	694	709

Solution:

TABLE 11.18:

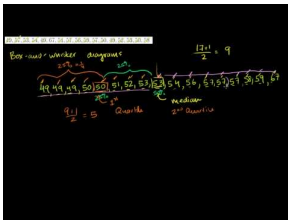
	Regular Gasoline	Premium Gasoline
Smallest #	540	500
Q_1	570	619
Median	587	637
Q_3	610	664
Largest #	660	709



From the above box-and-whisker plots, where the blue one represents the regular gasoline and the yellow one the premium gasoline, it is safe to say that the additive in the premium gasoline definitely increases the mileage. However, the value of 500 seems to be an outlier.

Practice

Sample explanations for some of the practice exercises below are available by viewing the following video. Note that there is not always a match between the number of the practice exercise in the video and the number of the practice exercise listed in the following exercise set. However, the practice exercise is the same in both. [CK-12 Basic Algebra:Box-and-WhiskerPlots](#) (13:14)



MEDIA

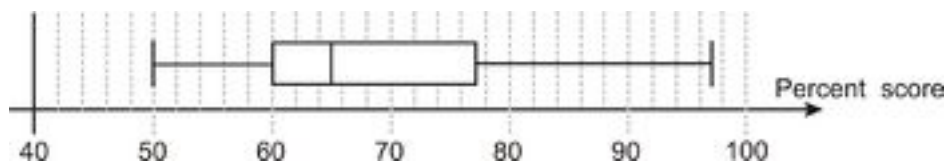
Click image to the left for more content.

1. Describe a five-number summary.
2. What is the purpose of a box-and-whisker plot? When it is useful?
3. What are some disadvantages to representing data with a box-and-whisker plot?
4. The following is the data that represents the amount of money that males spent on prom night.

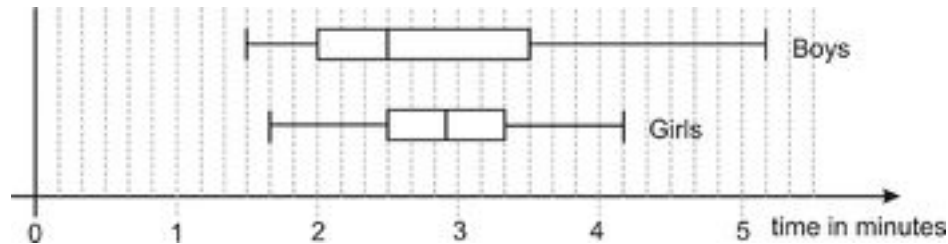
25	60	120	64	65	28	110	60
70	34	35	70	58	100	55	95
55	95	93	50	75	35	40	75
90	40	50	80	85	50	80	47
50	80	90	42	49	84	35	70

Construct a box-and-whisker graph to represent the data.

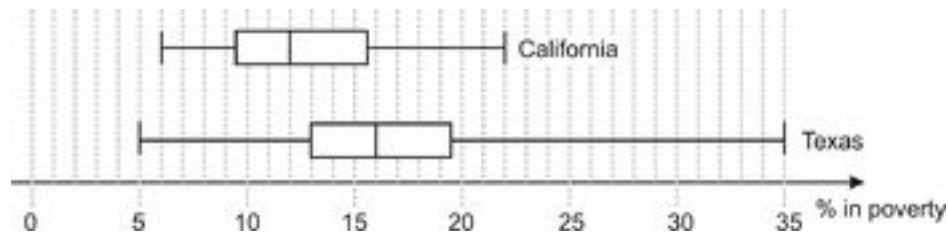
5. Forty students took a college algebra entrance test and the results are summarized in the box-and-whisker plot below. How many students would be allowed to enroll in the class if the pass mark were set at:
 - a. 65 %
 - b. 60 %



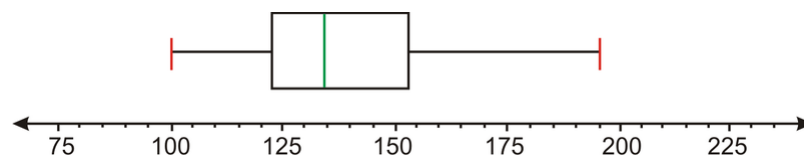
6. Harika is rolling three dice and adding the scores together. She records the total score for 50 rolls, and the scores she gets are shown below. Display the data in a box-and-whisker plot, and find both the range and the inter-quartile range. 9, 10, 12, 13, 10, 14, 8, 10, 12, 6, 8, 11, 12, 12, 9, 11, 10, 15, 10, 8, 8, 12, 10, 14, 10, 9, 7, 5, 11, 15, 8, 9, 17, 12, 12, 13, 7, 14, 6, 17, 11, 15, 10, 13, 9, 7, 12, 13, 10, 12
7. The box-and-whisker plots below represent the times taken by a school class to complete a 150-yard obstacle course. The times have been separated into boys and girls. The boys and the girls both think that they did best. Determine the five-number summary for both the boys and the girls and give a convincing argument for each of them.



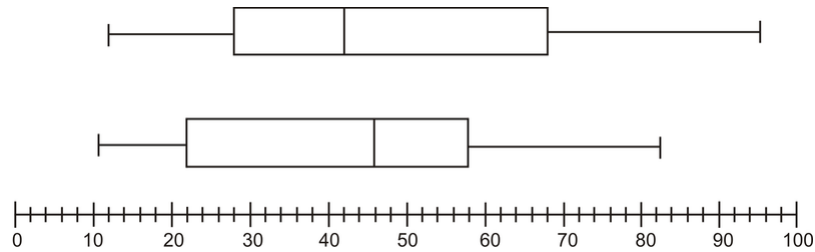
8. Draw a box-and-whisker plot for the following unordered data. 49, 57, 53, 54, 49, 67, 51, 57, 56, 59, 57, 50, 49, 52, 53, 50, 58
9. A simulation of a large number of runs of rolling three dice and adding the numbers results in the following five-number summary: 3, 8, 10.5, 13, 18. Make a box-and-whisker plot for the data.
10. The box-and-whisker plots below represent the percentage of people living below the poverty line by county in both Texas and California. Determine the five-number summary for each state, and comment on the spread of each distribution.



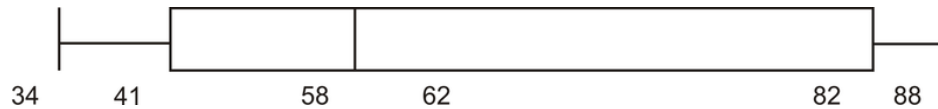
11. The five-number summary for the **average** daily temperature in Atlantic City, NJ (given in Fahrenheit) is 31, 39, 52, 68, 76. Draw the box-and-whisker plot for this data and use it to determine which of the following would be considered an **outlier** if it were included in the data.
- January's record-high temperature of 78°
 - January's record-low temperature of -8°
 - April's record-high temperature of 94°
 - The all-time record high of 106°
12. In 1887, Albert Michelson and Edward Morley conducted an experiment to determine the speed of light. The data for the first ten runs (five results in each run) is given below. Each value represents how many kilometers per second over 299,000 km/sec were measured. Create a box-and-whisker plot of the data. Be sure to identify outliers and plot them as such. 900, 840, 880, 880, 800, 860, 720, 720, 620, 860, 970, 950, 890, 810, 810, 820, 800, 770, 850, 740, 900, 1070, 930, 850, 950, 980, 980, 880, 960, 940, 960, 940, 880, 800, 850, 880, 760, 740, 750, 760, 890, 840, 780, 810, 760, 810, 790, 810, 820, 850
13. Using the following box-and-whisker plot, list three pieces of information you can determine from the graph.



14. In a recent survey done at a high school cafeteria, a random selection of males and females were asked how much money they spent each month on school lunches. The following box-and-whisker plots compare the responses of males to those of females. The lower one is the response by males.



- How much money did the middle 50% of each gender spend on school lunches each month?
 - What is the significance of the value of \$42 for females and \$46 for males?
 - What conclusions can be drawn from the above plots? Explain.
15. *Multiple Choice.* The following box-and-whisker plot shows final grades last semester. How would you best describe a typical grade in that course?



- A. Students typically got between 82 and 88. B. Students typically got between 41 and 82. C. Students typically got around 62. D. Students typically got between 58 and 82.

Mixed Review

- Find the mean, median, mode, and range for the following salaries in an office building: 63,450; 45,502; 63,450; 51,769; 63,450; 35,120; 45,502; 63,450; 31,100; 42,216; 49,108; 63,450; 37,904
- Graph $g(x) = 2\sqrt{x-1} - 3$.
- Translate into an algebraic sentence: *The square root of a number plus six is less than 18.*
- Solve for y : $6(y-11) + 9 = \frac{1}{3}(27+3y) - 16$.
- A fundraiser is selling two types of items: pizzas and cookie dough. The club earns \$5 for each pizza sold and \$4 for each container of cookie dough. They want to earn more than \$550.
 - Write this situation as an inequality.
 - Give four combinations that will make this sentence true.
- Find the equation for a line parallel to $x + 2y = 10$ containing the point (2, 1).

Summary

This chapter begins by talking about radicals, including graphing square root functions, simplifying radical expressions, adding and subtracting radicals, multiplying and dividing radicals, and solving radical equations. Next, the Pythagorean Theorem and its converse are discussed, as are the distance formula and the midpoint formula. Finally, the chapter concludes by covering central tendency and dispersion, and it provides instruction on analyzing data with stem-and-leaf plots, histograms, and box-and-whisker plots.

Radicals and Geometry Connections; Data Analysis Review

Explain the shift of each function from the parent function $f(x) = \sqrt{x}$.

1. $f(x) = \sqrt{x+7}$
2. $f(x) = \sqrt{x+3}$
3. $g(x) = -\sqrt{x}$
4. $y = 3 + \sqrt{x-1}$

Graph the following square root functions. Identify the domain and range of each.

5. $f(x) = \sqrt{x-2} + 5$
6. $g(x) = -\sqrt{x+1}$
7. $f(x) = \sqrt{2x-2}$

Simplify the following, if possible. Write your answer in its simplest form.

8. $\sqrt{\frac{3}{7}} \times \sqrt{\frac{14}{27}}$
9. $\sqrt{5} \cdot \sqrt{7}$
10. $\sqrt{11} \times \sqrt[3]{11}$
11. $\frac{\sqrt{18}}{\sqrt{2}}$
12. $8\sqrt[3]{4} + 11\sqrt[3]{4}$
13. $5\sqrt{80} - 12\sqrt{5}$
14. $\sqrt{10} + \sqrt{2}$
15. $\sqrt{24} - \sqrt{6}$
16. $\sqrt[3]{27} + \sqrt[4]{81}$
17. $4\sqrt{3} \cdot 2\sqrt{6}$
18. $\sqrt[3]{3} \times \sqrt{7}$
19. $6\sqrt{72}$
20. $7\sqrt{\left(\frac{40}{49}\right)}$
21. $\frac{5}{\sqrt{75}}$
22. $\frac{\sqrt{45}}{\sqrt{5}}$
23. $\frac{3}{\sqrt[3]{3}}$
24. $8\sqrt{10} - 3\sqrt{40}$
25. $\sqrt{27} + \sqrt{3}$

Solve each equation. If the answer is extraneous, say so.

26. $8 = \sqrt[3]{2k}$
27. $x = \sqrt{7x}$
28. $\sqrt{2+2m} = \sqrt{4-m}$
29. $\sqrt[4]{35-2x} = -1$
30. $14 = 6 + \sqrt{10-6x}$
31. $4 + \sqrt{\frac{n}{3}} = 5$
32. $\sqrt{-9-2x} = \sqrt{-1-x}$

33. $-2 = \sqrt[3]{t-6}$
34. $5\sqrt{10} = 6\sqrt{w}$
35. $\sqrt{x^2+3x} = 2$
36. $\sqrt[4]{t} = 5$
37. A leg of a right triangle is 11. The triangle's hypotenuse is 32. What is the length of the other leg?
38. Can 9, 12, 15 be sides of a right triangle?
39. Two legs of a right triangle have lengths of 16 and 24. What is the length of the hypotenuse?
40. Can 20, 21, and 29 be the lengths of the sides of a right triangle?

Find the distance between the two points. Then find the midpoint.

41. (0, 2) and (-5, 4)
42. (7, -3) and (4, -3)
43. (4, 6) and (-3, 0)
44. (8, -3) and (-7, -6)
45. (-8, -7) and (6, 5)
46. (-6, 6) and (0, 8)
47. (2, 6) is six units away from a second point. Find the two possibilities for this ordered pair.
48. (9, 0) is five units away from a second point. Find the two possibilities for this ordered pair.
49. The midpoint of a segment is (7.5, 1.5). Point A is (-5, -6). Find the other endpoint of the segment.
50. Maggie started at the center of town and drove nine miles west and five miles north. From this location, she drove 16 miles east and 12 miles south. What is the distance from this position from the center of town? What is the midpoint?
51. The surface area of a cube is given by the formula $SA = 6s^2$. The surface area is 337.50 square inches. What is the side length of the cube?
52. The diagonal of a sail is 24 feet long. The vertical length is 16 feet. If the area is found by $\frac{1}{2}(\text{length})(\text{height})$, determine the area of the sail.
53. A student earned the following test scores: 63, 65, 80, 84, 73. What would the next test score have to be in order to have an average of 70?
54. Find the mean, median, mode, and range of the data set. 11, 12, 11, 11, 11, 13, 13, 12, 12, 11, 12, 13, 13, 12, 13, 11, 12, 12, 13
55. A study shows the average teacher earns \$45,000 annually. Most teachers do not earn close to this amount.
 - a. Which central tendency was most likely used to describe this situation?
 - b. Which measure of central tendency should be used to describe this situation?
56. Mrs. Kramer's Algebra I class took a test on factoring. She recorded the scores as follows: 55, 57, 62, 64, 66, 68, 68, 68, 69, 72, 75, 77, 78, 79, 79, 82, 83, 85, 88, 90, 90, 90, 90, 92, 94, 95, 97, 99
 - a. Construct a histogram using intervals of ten, starting with 50–59.
 - b. What is the mode? What can you conclude from this graph?
57. Ten waitresses counted their tip money as follows: \$32, \$58, \$17, \$27, \$69, \$73, \$42, \$38, \$24, and \$52. Display this information in a stem-and-leaf plot.
58. Eleven people were asked how many miles they live from their place of work. Their responses were: 5.2, 18.7, 8.7, 9.1, 2.3, 2.3, 5.4, 22.8, 15.2, 7.8, 9.9. Display this data as a box-and-whisker plot.
59. What is one disadvantage of a box-and-whisker plot?
60. Fifteen students were randomly selected and asked, "How many times have you checked Facebook today?" Their responses were: 4, 23, 62, 15, 18, 11, 13, 2, 8, 7, 12, 9, 14, 12, 20. Display this information as a box-and-whisker plot and interpret its results.
61. What effect does an outlier have on the look of a box-and-whisker plot?
62. *Multiple Choice.* The median always represents which of the following? A. The upper quartile B. The lower quartile C. The mean of the data D. The 50% percentile

Radicals and Geometry Connections; Data Analysis Test

- Describe each type of visual display presented in this chapter. State one advantage and one disadvantage for each type of visual display.
- Graph $f(x) = 7 + \sqrt{x-4}$. State its domain and range. What is the ordered pair of the origin?
- True or false?* The upper quartile is the mean of the upper half of the data.
- What is the domain restriction of $y = \sqrt[4]{x}$?
- Solve $-6 = 2\sqrt[3]{c+5}$.
- Simplify $\frac{4}{\sqrt{48}}$.
- Simplify and reduce: $\sqrt[3]{3} \times \sqrt[3]{81}$.
- A square baking dish is 8 inches by 8 inches. What is the length of the diagonal? What is the area of a piece cut from corner to opposite corner?
- The following data consists of the weights, in pounds, of 24 high school students: 195, 206, 100, 98, 150, 210, 195, 106, 195, 108, 180, 212, 104, 195, 100, 216, 99, 206, 116, 142, 100, 135, 98, 160.
 - Display this information in a box plot, a stem-and-leaf plot, and a histogram with a bin width of 10.
 - Which graph seems to be the best method to display this data?
 - Are there any outliers?
 - List three conclusions you can make about this data.
- Find the distance between (5, -9) and (-6, -2).
- The coordinates of Portland, Oregon are (43.665, 70.269). The coordinates of Miami, Florida are (25.79, 80.224).
 - Find the distance between these two cities.
 - What are the coordinates of the town that represents the halfway mark?
- The Beaufort Wind Scale is used by coastal observers to estimate the wind speed. It is given by the formula $s^2 = 3.5B^3$, where $s =$ the wind speed (in knots) and $B =$ the Beaufort value.
 - Find the Beaufort value for a 26-knot wind.
 - What is the wind speed of a severe storm with a gale wind of 50 knots?
- Find the two possibilities for a coordinate ten units away from (2, 2).
- Use the following data obtained from the American Veterinary Medical Association. It states the number of households per 1,000 with particular exotic animals.
 - Find the mean, median, mode, range, and standard deviation.
 - Are there any outliers? What effect does this have on the mean and range?

TABLE 11.19:

	Households (in 1,000)
Fish	9,036
Ferrets	505
Rabbits	1,870
Hamsters	826
Guinea Pigs	628
Gerbils	187
Other Rodents	452
Turtles	1,106
Snakes	390
Lizards	719

Texas Instruments Resources

In the CK-12 Texas Instruments Algebra I FlexBook, there are graphing calculator activities designed to supplement the objectives for some of the lessons in this chapter. See <http://www.ck12.org/flexr/chapter/9621>.

Rational Equations and Functions

Chapter Outline

- 12.1 INVERSE VARIATION MODELS
 - 12.2 GRAPHS OF RATIONAL FUNCTIONS
 - 12.3 DIVISION OF POLYNOMIALS
 - 12.4 EXCLUDED VALUES FOR RATIONAL EXPRESSIONS
 - 12.5 MULTIPLICATION OF RATIONAL EXPRESSIONS
 - 12.6 DIVISION OF RATIONAL EXPRESSIONS
 - 12.7 ADDITION AND SUBTRACTION OF RATIONAL EXPRESSIONS
 - 12.8 RATIONAL EQUATIONS USING PROPORTIONS
 - 12.9 CLEARING DENOMINATORS IN RATIONAL EQUATIONS
 - 12.10 SURVEYS AND SAMPLES
-

Introduction

The final chapter of this text introduces the concept of **rational functions**; that is, equations in which the variable appears in the denominator of a fraction. A common rational function is the **inverse variation model**, similar to the direct variation model you studied in a Concept in chapter 4. We finish the chapter with solving rational equations and using graphical representations to display data.

12.1 Inverse Variation Models

Here you'll learn to use inverse variation to find solutions to problems.

Suppose a greeting card company has found that the number of greeting cards it sells is inversely proportional to the price of each card. If it sells 500 cards per month when the price of each card is \$2, how many cards would it sell per month if the price of each card were \$3? How would you go about calculating this number? In this Concept, you'll learn about inverse variation models so that you can solve problems like this one.

Guidance

In a previous Concept, you learned how to write direct variation models. In direct variation, the variables changed in the same way and the graph contained the origin. But what happens when the variables change in different ways? Consider the following situation.

A group of friends rent a beach house and decide to split the cost of the rent and food. Four friends pay \$170 each. Five friends pay \$162 each. Six friends pay \$157. If nine people were to share the expense, how much would each pay?

Let's look at this in a table.

TABLE 12.1:

n (number of friends)	t (share of expense)
4	170
5	162
6	157
9	???

As the number of friends gets larger, the cost per person gets smaller. This is an example of **inverse variation**.

An **inverse variation** function has the form $f(x) = \frac{k}{x}$, where k is called the constant of variation and must be a counting number and $x \neq 0$.

To show an inverse variation relationship, use either of the phrases:

- *Is inversely proportional to*
- *Varies inversely as*

Example A

Find the constant of variation of the beach house situation.

Solution:

Use the inverse variation equation to find k , the constant of variation.

Solve for k :

$$y = \frac{k}{x}$$

$$170 = \frac{k}{4}$$

$$170 \times 4 = \frac{k}{4} \times 4$$

$$k = 680$$

You can use this information to determine the amount of expense per person if nine people split the cost.

$$y = \frac{680}{x}$$

$$y = \frac{680}{9} = 75.56$$

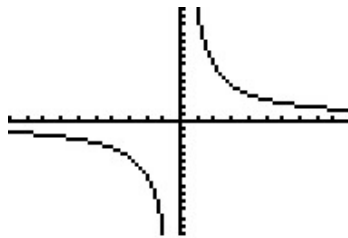
If nine people split the expense, each would pay \$75.56.

Using a graphing calculator, look at a graph of this situation.

```

WINDOW
Xmin=-10
Xmax=10
Xscl=1
Ymin=-700
Ymax=700
Yscl=50
Xres=■

```



The graph of an inverse variation function $f(x) = \frac{k}{x}$ is a **hyperbola**. It has two branches in opposite quadrants.

If $k > 0$, the branches are in quadrants I and III.

If $k < 0$, the branches are in quadrants II and IV.

The graph appears to not cross the axes. In fact, this is true of any inverse variation equation of the form $y = \frac{k}{x}$. These lines are called **asymptotes**. Because of this, an inverse variation function has a special domain and range.

$$\text{Domain : } x \neq 0$$

$$\text{Range : } y \neq 0$$

You will investigate these excluded values in later Concepts of this chapter.

Example B

The *frequency*, f , of sound varies inversely with wavelength, λ . A sound signal that has a wavelength of 34 meters has a frequency of 10 hertz. What frequency does a sound signal of 120 meters have?

Solution:

Use the inverse variation equation to find k , the constant of variation.

$$f = \frac{k}{\lambda}$$

$$10 = \frac{k}{34}$$

Solve for k :

$$10 \times 34 = \frac{k}{34} \times 34$$

$$k = 340$$

Use k to answer the question:

$$f = \frac{340}{120} = 2.83 \text{ hertz}$$

Example C

Determine which of the following is an example of inverse variation:

- A student spends \$4 a day for snacks at school. The total amount she spends each week depends on the number of days school was in session.
- A school has \$200 to spend on prizes for an event. The number of prizes that can be bought depends on the price of each prize.

Solution:

a. The student can attend school 1-5 days a week, since school is never in session for more than 5 days a week. If school is in session 1 day, she spends \$4. If school is in session 2 days, she spends \$8. The amount of money she spends is increasing as the number of days increases. This is not an inverse variation function. Another way to think of this problem is to see that there is a constant rate involved: the student spends \$4 per day on snacks. This would be a linear function, with a slope of 4. This is not an example of inverse variation.

b. The number of prizes that can be bought is determined by *dividing* by the cost of each prize. If each prize costs \$10, then $\frac{200}{10} = 20$ prizes can be bought. If each prize costs \$20 then $\frac{200}{20} = 10$ prizes can be bought. As the cost of the prizes increases, the number of prizes that can be bought decreases. The function is $f(x) = \frac{200}{x}$, where x is the price of the prizes and $f(x)$ represents the number of prizes that can be bought. This fits the definition of inverse variation.

Video Review**MEDIA**

Click image to the left for more content.



MEDIA

Click image to the left for more content.

Guided Practice

If $f(x)$ varies inversely with x and $f(12) = 5$, find $f(20)$.

Solution:

Since all functions of inverse variation look like:

$$f(x) = \frac{k}{x}$$

simply substitute in x and $f(x)$ and solve for k .

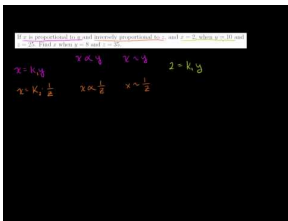
$$\begin{aligned} f(12) &= \frac{k}{12} \\ 5 &= \frac{k}{12} \\ 60 &= k \end{aligned}$$

Now, use the function to find $f(20)$:

$$\begin{aligned} f(20) &= \frac{60}{20} \\ f(20) &= 3 \end{aligned}$$

Practice

Sample explanations for some of the practice exercises below are available by viewing the following video. Note that there is not always a match between the number of the practice exercise in the video and the number of the practice exercise listed in the following exercise set. However, the practice exercise is the same in both. [CK-12 Basic Algebra:Proportionality \(17:03\)](#)



MEDIA

Click image to the left for more content.

1. Define *inverse variation*.
2. Explain three main differences between direct variation and inverse variation.

Read each statement and decide if the relationship is *direct*, *inverse*, or *neither*.

3. The weight of a book _____ as the number of pages it contains.

4. The temperature outside _____ as the time of day.
5. The amount of prize money you receive from winning the lottery _____ as the number of people who split the ticket cost.
6. The cost of a ferry ride _____ as the number of times you ride.
7. The area of a square _____ as the length of its side.
8. The height from the ground _____ as the number of seconds you have been on a roller coaster.
9. The time it takes to wash a car _____ as the number of people helping.
10. The number of tiles it takes to tile a floor _____ as the size of each tile.

Graph each inverse equation. State the domain and range.

11. $y = \frac{3}{x}$
12. $y = \frac{1}{x^2}$
13. $f(x) = -\frac{4}{x}$
14. $y = \frac{10}{x}$
15. $h(x) = -\frac{1}{x}$
16. $y = \frac{1}{4x}$
17. $g(x) = -\frac{2}{x^2}$
18. $y = \frac{4}{x^2}$
19. $y = \frac{5}{6x}$

In 20–25, model each situation with an inverse variation equation, finding k . Then answer the question.

20. y varies inversely as x . If $y = 24$ when $x = 3$, find y when $x = -1.5$.
21. d varies inversely as the cube of t . If $d = -23.5$ when $t = 3$, find d when $x = \frac{1}{4}$.
22. If z is inversely proportional to w and $z = 81$ when $w = 9$, find w when $z = 24$.
23. If y is inversely proportional to x and $y = 2$ when $x = 8$, find y when $x = 12$.
24. If a is inversely proportional to the square root of b , and $a = 32$ when $b = 9$, find b when $a = 6$.
25. If w is inversely proportional to the square of u and $w = 4$ when $u = 2$, find w when $u = 8$.
26. The law of the fulcrum states the distance from the fulcrum varies inversely as the weight of the object. Joey and Josh are on a seesaw. If Joey weighs 40 pounds and sits six feet from the fulcrum, how far would Josh have to sit to balance the seesaw? (Josh weighs 65 pounds.)
27. The intensity of light is inversely proportional to the square of the distance between the light source and the object being illuminated. A light meter that is 10 meters from a light source registers 35 lux. What intensity would it register 25 meters from the light source?
28. Ohm's Law states that current flowing in a wire is inversely proportional to the resistance of the wire. If the current is 2.5 amperes when the resistance is 20 ohms, find the resistance when the current is 5 amperes.
29. The number of tiles it takes to tile a bathroom floor varies inversely as the square of the side of the tile. If it takes 112 six-inch tiles to cover a floor, how many eight-inch tiles are needed?

Mixed Review

30. Solve and graph the solutions on a number line: $16 \geq -3x + 5$.
31. Graph on a coordinate plane: $x = \frac{7}{14}$.
32. Simplify $\sqrt[3]{320}$.
33. State the Commutative Property of Multiplication.
34. Draw the real number hierarchy and provide an example for each category.
35. Find 17.5% of 96.

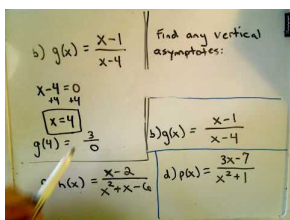
12.2 Graphs of Rational Functions

Here you'll learn about the attributes of rational functions and their graphs.

Suppose Susan and Victor both graph the function $y = \frac{8}{5-x}$ on their graphing calculators. Susan says that the graph looks incorrect because there should be a hole in the graph at $x = 5$. Victor says that the graph looks fine and that the graphing calculator would never make a mistake. Who do you think is right? Why do you think this? In this Concept, you'll learn about the graphs of rational functions and their attributes so that you can settle arguments like this one.

Watch This

Multimedia Link: For further explanation about asymptotes, read through this [PowerPoint presentation](#) presented by North Virginia Community College or watch this: [CK-12 Basic Algebra: Finding Vertical Asymptotes of Rational Functions](#)



MEDIA

Click image to the left for more content.

- YouTube video.

Guidance

In the previous Concept, you learned the basics of graphing an inverse variation function. The **hyperbola** forms two **branches** in opposite quadrants. The axes are **asymptotes** to the graph. This Concept will compare graphs of inverse variation functions. You will also learn how to graph other rational equations.

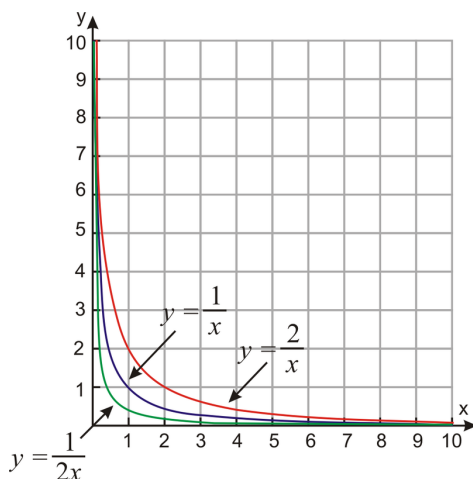
Example A

Graph the function $f(x) = \frac{k}{x}$ for the following values of k :

$$k = -2, -1, -\frac{1}{2}, 1, 2, 4$$

Solution:

The graphs for the values $k = 1$, $k = 2$, and $k = \left(\frac{1}{2}\right)$ in Quadrant I are shown. Try your hand at filling in Quadrant III for these graphs as well as graphing the other values.



Remember, as mentioned in the previous Concept, if k is positive, then the branches of the hyperbola are located in quadrants I and III. If k is negative, the branches are located in quadrants II and IV. Also notice how the hyperbola changes as k gets larger.

Rational Functions

A **rational function** is a ratio of two polynomials (a polynomial divided by another polynomial). The formal definition is:

$$f(x) = \frac{g(x)}{h(x)}, \text{ where } h(x) \neq 0$$

An **asymptote** is a value for which the equation or function is undefined. Asymptotes can be vertical, horizontal, or oblique. This text will focus on vertical asymptotes; other math courses will also show you how to find horizontal and oblique asymptotes. A function is undefined when the denominator of a fraction is zero. To find the asymptotes, find where the denominator of the rational function is zero. These are called **points of discontinuity** of the function.

The formal definition for asymptote is as follows.

An **asymptote** is a straight line to which, as the distance from the origin gets larger, a curve gets closer and closer but never intersects.

Example B

Find the points of discontinuity and the asymptote for the function $y = \frac{6}{x-5}$.

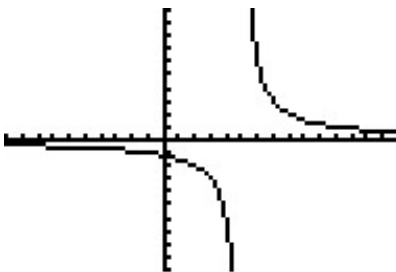
Solution:

Find the value of x for which the denominator of the rational function is zero.

$$0 = x - 5 \rightarrow x = 5$$

The point at which $x = 5$ is a point of discontinuity. Therefore, the asymptote has the equation $x = 5$.

Look at the graph of the function. There is a clear separation of the branches at the vertical line five units to the right of the origin.



The domain is “all real numbers except five” or symbolically written, $x \neq 5$.

Horizontal Asymptotes

Rational functions can also have horizontal asymptotes. The equation of a horizontal asymptote is $y = c$, where c represents the vertical shift of the rational function.

Example C

Identify the vertical and horizontal asymptotes of $f(x) = \frac{3}{(x-4)(x+8)} - 5$.

Solution: The vertical asymptotes occur where the denominator is equal to zero.

$$x - 4 = 0 \rightarrow x = 4$$

$$x + 8 = 0 \rightarrow x = -8$$

The vertical asymptotes are $x = 4$ and $x = -8$.

The rational function has been shifted down five units: $f(x) = \frac{3}{(x-4)(x+8)} - 5$.

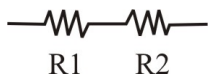
Therefore, the horizontal asymptote is $y = -5$.

Real-World Rational Functions

Electrical circuits are commonplace in everyday life. For instance, they are present in all electrical appliances in your home. The figure below shows an example of a simple electrical circuit. It consists of a battery that provides a voltage (V , measured in Volts), a resistor (R , measured in ohms, Ω) that resists the flow of electricity, and an ammeter that measures the current (I , measured in amperes, A) in the circuit. Your light bulb, toaster, and hairdryer are all basically simple resistors. In addition, resistors are used in an electrical circuit to control the amount of current flowing through a circuit and to regulate voltage levels. One important reason to do this is to prevent sensitive electrical components from burning out due to too much current or too high a voltage level. Resistors can be arranged in series or in parallel.

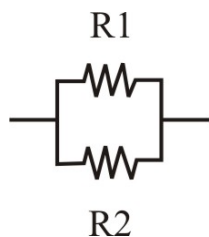
For resistors placed in a series, the total resistance is just the sum of the resistances of the individual resistors.

$$R_{tot} = R_1 + R_2$$



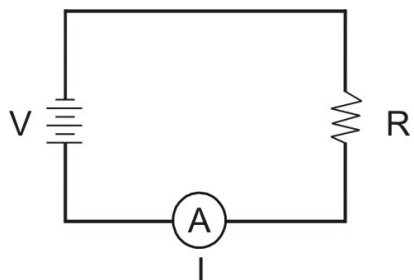
For resistors placed in parallel, the reciprocal of the total resistance is the sum of the reciprocals of the resistances of the individual resistors.

$$\frac{1}{R_c} = \frac{1}{R_1} + \frac{1}{R_2}$$



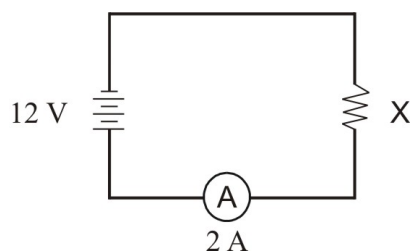
Ohm's Law gives a relationship between current, voltage, and resistance. It states that:

$$I = \frac{V}{R}$$



Example D

Find the value of x marked in the diagram.



Solution:

Using Ohm's Law, $I = \frac{V}{R}$, and substituting the appropriate information yields:

$$2 = \frac{12}{R}$$

Using the cross multiplication of a proportion yields:

$$2R = 12 \rightarrow R = 6 \Omega$$

Video Review



MEDIA

 Click image to the left for more content.



MEDIA

 Click image to the left for more content.

Guided Practice

Determine the asymptotes of $t(x) = \frac{2}{(x-2)(x+3)}$.

Solution:

Using the Zero Product Property, there are two cases for asymptotes, where each set of parentheses equals zero.

$$x - 2 = 0 \rightarrow x = 2$$

$$x + 3 = 0 \rightarrow x = -3$$

The two asymptotes for this function are $x = 2$ and $x = -3$.

Check your solution by graphing the function.

The domain of the rational function above has two points of discontinuity. Therefore, its domain cannot include the numbers 2 or -3 . The following is the *domain*: $x \neq 2, x \neq -3$.

Practice

1. What is a rational function?
2. Define *asymptote*. How does an asymptote relate algebraically to a rational equation?
3. Which asymptotes are described in this Concept? What is the general equation for these asymptotes?

Identify the vertical and horizontal asymptotes of each rational function.

4. $y = \frac{4}{x+2}$

5. $f(x) = \frac{5}{2x-6} + 3$

6. $y = \frac{10}{x}$

7. $g(x) = \frac{4}{4x^2+1} - 2$

8. $h(x) = \frac{2}{x^2-9}$

9. $y = \frac{1}{x^2+4x+3} + \frac{1}{2}$

10. $y = \frac{3}{x^2-4} - 8$

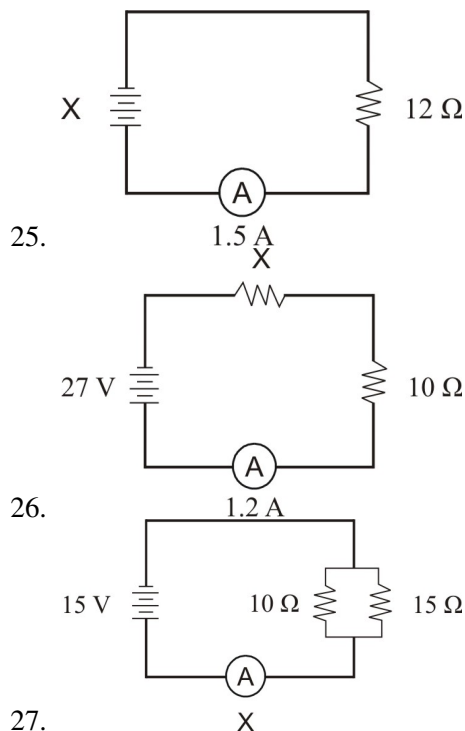
11. $f(x) = \frac{-3}{x^2-2x-8}$

Graph each rational function. Show the vertical asymptote and horizontal asymptote as a dotted line.

12. $y = -\frac{6}{x}$

13. $y = \frac{x}{2-x^2} - 3$
14. $f(x) = \frac{3}{x^2}$
15. $g(x) = \frac{1}{x-1} + 5$
16. $y = \frac{2}{x+2} - 6$
17. $f(x) = \frac{-1}{x^2+2}$
18. $h(x) = \frac{4}{x^2+9}$
19. $y = \frac{-2}{x^2+1}$
20. $j(x) = \frac{1}{x^2-1} + 1$
21. $y = \frac{2}{x^2-9}$
22. $f(x) = \frac{8}{x^2-16}$
23. $g(x) = \frac{3}{x^2-4x+4}$
24. $h(x) = \frac{1}{x^2-x-6} - 2$

Find the quantity labeled x in the following circuit.



Mixed Review

28. A building 350 feet tall casts a shadow $\frac{1}{2}$ mile long. How long is the shadow of a person five feet tall?
29. State the Cross Product Property.
30. Find the slope between $(1, 1)$ and $(-4, 5)$.
31. The amount of refund from soda cans in Michigan is directly proportional to the number of returned cans. If you earn a \$12.00 refund for 120 cans, how much do you get per can?
32. You put the letters from VACATION into a hat. If you reach in randomly, what is the probability you will pick the letter A?
33. Give an example of a sixth-degree binomial.

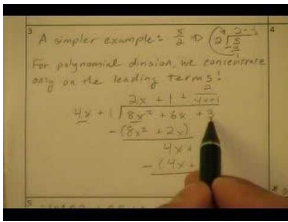
12.3 Division of Polynomials

Here you'll learn how to perform division problems involving polynomials.

Suppose that you know that the area of a rectangular mural in square feet is represented by the polynomial $x^2 + 2x - 24$ and that the length of the mural in feet is represented by the binomial $x + 6$. How would you calculate the width of the mural? Would it also be a binomial? In this Concept, you'll learn about dividing polynomials so that you can perform division problems like the one necessary here.

Watch This

Multimedia Link: For more help with using long division to simplify rational expressions, visit this <http://www.urplemath.com/modules/polydiv2.htm> - website or watch this: [CK-12 Basic Algebra:6 7Polynomial longdivision with Mr. Nystrom](#)



MEDIA

Click image to the left for more content.

- YouTube video.

Guidance

We will begin with a property that is the converse of the Adding Fractions Property presented in previous Concepts.

For all real numbers a , b , and c , and $c \neq 0$, $\frac{a+b}{c} = \frac{a}{c} + \frac{b}{c}$.

This property allows you to separate the numerator into its individual fractions. This property is used when dividing a polynomial by a monomial.

Example A

Simplify $\frac{8x^2 - 4x + 16}{2}$.

Solution:

Using the property above, separate the polynomial into its individual fractions.

Reduce.

$$\frac{8x^2}{2} - \frac{4x}{2} + \frac{16}{2}$$

$$4x^2 - 2x + 8$$

Example B

Simplify $\frac{-3m^2-18m+6}{9m}$.

Solution:

Separate the trinomial into its individual fractions and reduce.

$$\begin{aligned} &-\frac{3m^2}{9m} - \frac{18m}{9m} + \frac{6}{9m} \\ &-\frac{m}{3} - 2 + \frac{2}{3m} \end{aligned}$$

Polynomials can also be divided by binomials. However, instead of separating into its individual fractions, we use a process called long division.

Example C

Simplify $\frac{x^2+4x+5}{x+3}$.

Solution:

When we perform division, the expression in the numerator is called the **dividend** and the expression in the denominator is called the **divisor**.

To start the division we rewrite the problem in the following form.

$$x + 3 \overline{) x^2 + 4x + 5}$$

Start by dividing the first term in the dividend by the first term in the divisor $\frac{x^2}{x} = x$. Place the answer on the line above the x term.

$$x + 3 \overline{) x^2 + 4x + 5} \quad \begin{array}{c} x \\ \hline \end{array}$$

Next, multiply the x term in the answer by each of the $x + 3$ terms in the divisor and place the result under the dividend, matching like terms.

$$x + 3 \overline{) x^2 + 4x + 5}$$

$$x(x + 3) = x^2 + 3x$$

Now subtract $x^2 + 3x$ from $x^2 + 4x + 5$. It is useful to change the signs of the terms of $x^2 + 3x$ to $-x^2 - 3x$ and add like terms vertically.

$$\begin{array}{r}
 x \\
 x + 3 \overline{) x^2 + 4x + 5} \\
 \underline{-x^2 - 3x} \\
 x
 \end{array}$$

Now, bring down 5, the next term in the dividend.

$$\begin{array}{r}
 x \\
 x + 3 \overline{) x^2 + 4x + 5} \\
 \underline{-x^2 - 3x} \\
 x + 5
 \end{array}$$

Repeat the process. First divide the first term of $x + 5$ by the first term of the divisor $\left(\frac{x}{x}\right) = 1$. Place this answer on the line above the constant term of the dividend.

$$\begin{array}{r}
 x + 1 \\
 x + 3 \overline{) x^2 + 4x + 5} \\
 \underline{-x^2 - 3x} \\
 x + 5
 \end{array}$$

Multiply 1 by the divisor $x + 3$ and write the answer below $x + 5$, matching like terms.

$$\begin{array}{r}
 x + 1 \\
 x + 3 \overline{) x^2 + 4x + 5} \\
 \underline{-x^2 - 3x} \\
 x + 5
 \end{array}$$

Subtract $x + 3$ from $x + 5$ by changing the signs of $x + 3$ to $-x - 3$ and adding like terms.

$$\begin{array}{r}
 x + 1 \quad \text{quotient} \\
 x + 3 \overline{) x^2 + 4x + 5} \\
 \underline{-x^2 - 3x} \\
 x + 5 \\
 \underline{-x - 3} \\
 2 \quad \text{remainder}
 \end{array}$$

Since there are no more terms from the dividend to bring down, we are done.

The answer is $x + 1$ with a remainder of 2.

Video Review



MEDIA

Click image to the left for more content.



MEDIA

Click image to the left for more content.

Guided Practice

Divide $9x^2 - 16$ by $3x + 4$.

Solution:

You are being asked to simplify:

$$\frac{9x^2 - 16}{3x + 4}$$

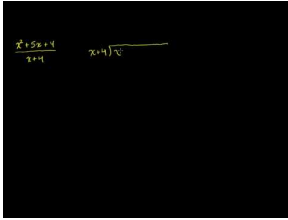
You could use long division to find the answer. You can also use patterns of polynomials to simplify and cancel.

Recall that $a^2 - b^2 = (a + b)(a - b)$. Use this pattern to solve this problem since $9x^2 - 16 = (3x)^2 - 4^2$:

$$\begin{aligned} \frac{9x^2 - 16}{3x + 4} &= \frac{(3x)^2 - 4^2}{3x + 4} \\ &= \frac{(3x - 4)(3x + 4)}{3x + 4} \\ &= 3x - 4 \end{aligned}$$

Practice

Sample explanations for some of the practice exercises below are available by viewing the following video. Note that there is not always a match between the number of the practice exercise in the video and the number of the practice exercise listed in the following exercise set. However, the practice exercise is the same in both. [CK-12 Basic Algebra: Polynomial Division \(12:09\)](#)



MEDIA

Click image to the left for more content.

Divide the following polynomials.

1. $\frac{2x+4}{2}$
2. $\frac{x-4}{x}$
3. $\frac{5x-35}{5x}$
4. $\frac{x^2+2x-5}{x}$
5. $\frac{4x^2+12x-36}{-4x}$
6. $\frac{2x^2+10x+7}{2x^2}$
7. $\frac{x^3-x}{-2x^2}$
8. $\frac{5x^4-9}{3x}$
9. $\frac{x^3-12x^2+3x-4}{12x^2}$
10. $\frac{3-6x+x^3}{-9x^3}$
11. $\frac{x^2+3x+6}{x+1}$
12. $\frac{x^2-9x+6}{x-1}$
13. $\frac{x^2+5x+4}{x+4}$
14. $\frac{x^2-10x+25}{x-5}$
15. $\frac{x^2-20x+12}{x-3}$
16. $\frac{3x^2-x+5}{x-2}$
17. $\frac{9x^2+2x-8}{x+4}$
18. $\frac{3x^2-4}{3x+1}$
19. $\frac{5x^2+2x-9}{2x-1}$
20. $\frac{x^2-6x-12}{5x+4}$
21. $\frac{x^4-2x}{8x+24}$
22. $\frac{x^3+1}{4x-1}$

Mixed Review

23. Boyle's Law states that the pressure of a compressed gas varies inversely as its pressure. If the pressure of a 200-pound gas is 16.75 psi, find the pressure if the amount of gas is 60 pounds.
24. Is $5x^3 + x^2 - x^{-1} + 8$ an example of a polynomial? Explain your answer.
25. Find the slope of the line perpendicular to $y = -\frac{3}{4}x + 5$.
26. How many two-person teams can be made from a group of nine individuals?
27. Solve for m : $-4 = \frac{\sqrt{m-3}}{-2}$.

12.4 Excluded Values for Rational Expressions

Here you'll learn how to find the excluded values for a rational expression and how to simplify the expression.

Did you know that Pluto is no longer considered a planet? Even so, we can still calculate the distance between it and the Sun. All we would have to know is the force of attraction between Pluto and the Sun, the masses of the two objects, and the value of the gravitation constant. In this Concept, you'll learn how to simplify rational expressions, including real-life expressions such as the one we would encounter here.

Guidance

You have gained experience working with rational functions so far. In this Concept, you will continue simplifying rational expressions by factoring.

To **simplify** a rational expression means to reduce the fraction into its lowest terms.

To do this, you will need to remember a property about multiplication.

For all real values a and b , and $b \neq 0$, $\frac{ab}{b} = a$.

Example A

Simplify $\frac{x^2-2x+1}{8x-8}$.

Solution: Factor both pieces of the rational expression and reduce.

$$\begin{aligned}\frac{x^2 - 2x + 1}{8x - 8} &\rightarrow \frac{(x - 1)(x - 1)}{8(x - 1)} \\ \frac{x^2 - 2x + 1}{8x - 8} &= \frac{x - 1}{8}\end{aligned}$$

Finding Excluded Values of Rational Expressions

As stated in a previous Concept, excluded values are also called **points of discontinuity**. These are the values that make the denominator equal to zero and are not part of the domain.

Example B

Find the excluded values of $\frac{2x+1}{x^2-x-6}$.

Solution: Factor the denominator of the rational expression.

$$\frac{2x + 1}{x^2 - x - 6} = \frac{2x + 1}{(x + 2)(x - 3)}$$

Find the value that makes each factor equal zero.

$$x = -2, x = 3$$

These are excluded values of the domain of the rational expression.

Real-Life Rational Expressions

The gravitational force between two objects is given by the formula $F = \frac{G(m_1m_2)}{d^2}$. The gravitation constant is given by $G = 6.67 \times 10^{-11} (N \cdot m^2/kg^2)$. The force of attraction between the Earth and the Moon is $F = 2.0 \times 10^{20} N$ (with masses of $m_1 = 5.97 \times 10^{24} kg$ for the Earth and $m_2 = 7.36 \times 10^{22} kg$ for the Moon).

Example C

What is the distance between the Earth and the Moon?

Solution:

Let's start with the Law of Gravitation formula. $F = G \frac{m_1m_2}{d^2}$

Now plug in the known values. $2.0 \times 10^{20} N = 6.67 \times 10^{-11} \frac{N \cdot m^2}{kg^2} \cdot \frac{(5.97 \times 10^{24} kg)(7.36 \times 10^{22} kg)}{d^2}$

Multiply the masses together. $2.0 \times 10^{20} N = 6.67 \times 10^{-11} \frac{N \cdot m^2}{kg^2} \cdot \frac{4.39 \times 10^{47} kg^2}{d^2}$

Cancel the kg^2 units. $2.0 \times 10^{20} N = 6.67 \times 10^{-11} \frac{N \cdot m^2}{\cancel{kg^2}} \cdot \frac{4.39 \times 10^{47} \cancel{kg^2}}{d^2}$

Multiply the numbers in the numerator. $2.0 \times 10^{20} N \frac{2.93 \times 10^{37}}{d^2} N \cdot m^2$

Multiply both sides by d^2 . $2.0 \times 10^{20} N \cdot d^2 = \frac{2.93 \times 10^{37}}{d^2} \cdot d^2 \cdot N \cdot m^2$

Cancel common factors. $2.0 \times 10^{20} N \cdot d^2 = \frac{2.93 \times 10^{37}}{\cancel{d^2}} \cdot \cancel{d^2} \cdot N \cdot m^2$

Simplify. $2.0 \times 10^{20} N \cdot d^2 = 2.93 \times 10^{37} N \cdot m^2$

Divide both sides by $2.0 \times 10^{20} N$. $d^2 = \frac{2.93 \times 10^{37} N \cdot m^2}{2.0 \times 10^{20} N}$

Simplify. $d^2 = 1.465 \times 10^{17} m^2$

Take the square root of both sides. $d = 3.84 \times 10^8 m$

Video Review



MEDIA

Click image to the left for more content.



MEDIA

Click image to the left for more content.

Guided Practice

Find the excluded values by simplifying $\frac{4x-2}{2x^2+x-1}$.

Solution:

Both the numerator and denominator can be factored using methods learned in previous Concepts.

$$\frac{4x-2}{2x^2+x-1} \rightarrow \frac{2(2x-1)}{(2x-1)(x+1)}$$

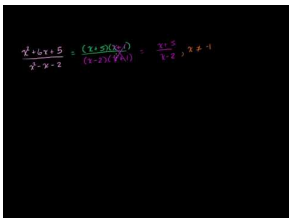
The expression $(2x-1)$ appears in both the numerator and denominator and can be canceled. The expression becomes:

$$\frac{4x-2}{2x^2+x-1} = \frac{2}{x+1}$$

Since $x+1=0 \Rightarrow x=-1$, then $x=-1$ is an excluded value.

Practice

Sample explanations for some of the practice exercises below are available by viewing the following video. Note that there is not always a match between the number of the practice exercise in the video and the number of the practice exercise listed in the following exercise set. However, the practice exercise is the same in both. [CK-12 Basic Algebra: Simplifying Rational Expressions \(15:22\)](#)



MEDIA

Click image to the left for more content.

Reduce each fraction to lowest terms.

1. $\frac{4}{2x-8}$
2. $\frac{x^2+2x}{x^2+2x}$
3. $\frac{9x+3}{12x+4}$
4. $\frac{6x^2+2x}{x^2-2}$
5. $\frac{x^2-9}{5x+15}$
6. $\frac{x^2-9}{5x+15}$
7. $\frac{x^2+6x+8}{x^2+4x}$

8. $\frac{2x^2+10x}{x^2+10x+25}$
9. $\frac{x^2+6x+5}{x^2-x-2}$
10. $\frac{x^2-16}{x^2+2x-8}$
11. $\frac{3x^2+3x-18}{2x^2+5x-3}$
12. $\frac{x^3+x^2-20x}{6x^2+6x-120}$

Find the excluded values for each rational expression.

13. $\frac{2}{x}$
14. $\frac{4}{x+2}$
15. $\frac{2x-1}{(x-1)^2}$
16. $\frac{3x+1}{x^2-4}$
17. $\frac{x^2}{x^2+9}$
18. $\frac{2x^2+3x-1}{x^2-3x-28}$
19. $\frac{5x^3-4}{x^2+3x}$
20. $\frac{9}{x^3+11x^2+30x}$
21. $\frac{4x-1}{x^2+3x-5}$
22. $\frac{5x+11}{3x^2-2x-4}$
23. $\frac{x^2-1}{2x^3+x+3}$
24. $\frac{12}{x^2+6x+1}$
25. In an electrical circuit with resistors placed in parallel, the reciprocal of the total resistance is equal to the sum of the reciprocals of each resistance: $\frac{1}{R_c} = \frac{1}{R_1} + \frac{1}{R_2}$. If $R_1 = 25\Omega$ and the total resistance is $R_c = 10\Omega$, what is the resistance R_2 ?
26. Suppose that two objects attract each other with a gravitational force of 20 Newtons. If the distance between the two objects is doubled, what is the new force of attraction between the two objects?
27. Suppose that two objects attract each other with a gravitational force of 36 Newtons. If the mass of both objects was doubled, and if the distance between the objects was doubled, then what would be the new force of attraction between the two objects?
28. A sphere with radius r has a volume of $\frac{4}{3}\pi r^3$ and a surface area of $4\pi r^2$. Find the ratio of the surface area to the volume of the sphere.
29. The side of a cube is increased by a factor of two. Find the ratio of the old volume to the new volume.
30. The radius of a sphere is decreased by four units. Find the ratio of the old volume to the new volume.

Mixed Review

31. Name $4p^6 + 7p^3 - 9$.
32. Simplify $(4b^2 + b + 7b^3) + (5b^2 - 6b^4 + b^3)$. Write the answer in standard form.
33. State the Zero Product Property.
34. Why can't the Zero Product Property be used in this situation: $(5x + 1)(x - 4) = 2$?
35. Shelly earns \$4.85 an hour plus \$15 in tips. Graph her possible total earnings for one day of work.
36. Multiply and simplify: $(-4x^2 + 8x - 1)(-7x^2 + 6x + 8)$.
37. A rectangle's perimeter is 65 yards. The length is 7 more yards than its width. What dimensions would give the largest area?

12.5 Multiplication of Rational Expressions

Here you'll learn how to find the product of two rational expressions.

Suppose you were playing a game on your cell phone in which you were randomly given two rational expressions and were asked to identify the product of the two expressions. If one of the expressions were $\frac{x^2+3x+2}{x-9}$ and the other expression were $\frac{x^2-10x+9}{x^2-4}$, would you be able to multiply them together? Could the product be simplified? In this Concept, you'll learn about the multiplication of rational expressions such as these.

Guidance

Because a rational expression is really a fraction, two (or more) rational expressions can be combined through multiplication and/or division in the same manner as numerical fractions. A reminder of how to multiply fractions is below.

For any rational expressions $a \neq 0, b \neq 0, c \neq 0, d \neq 0$,

$$\begin{aligned} \frac{a}{b} \cdot \frac{c}{d} &= \frac{ac}{bd} \\ \frac{a}{b} \div \frac{c}{d} &\rightarrow \frac{a}{b} \cdot \frac{d}{c} = \frac{ad}{bc} \end{aligned}$$

Example A

Multiply the following: $\frac{a}{16b^8} \cdot \frac{4b^3}{5a^2}$.

Solution:

$$\frac{a}{16b^8} \cdot \frac{4b^3}{5a^2} \rightarrow \frac{4ab^3}{80a^2b^8}$$

Simplify exponents using methods learned in previous Concepts.

$$\frac{4ab^3}{80a^2b^8} = \frac{1}{20ab^5}$$

Example B

Simplify $9c^2 \cdot \frac{4y^2}{21c^4}$.

Solution:

$$\begin{aligned}
 9c^2 \cdot \frac{4y^2}{21c^4} &\rightarrow \frac{9c^2}{1} \cdot \frac{4y^2}{21c^4} \\
 \frac{9c^2}{1} \cdot \frac{4y^2}{21c^4} &= \frac{36c^2y^2}{21c^4} \\
 \frac{36c^2y^2}{21c^4} &= \frac{12y^2}{7c^2}
 \end{aligned}$$

Multiplying Rational Expressions Involving Polynomials

When rational expressions become complex, it is usually easier to factor and reduce them **before** attempting to multiply the expressions.

Example C

Multiply $\frac{4x+12}{3x^2} \cdot \frac{x}{x^2-9}$.

Solution:

Factor all pieces of these rational expressions and reduce before multiplying.

$$\begin{aligned}
 \frac{4x+12}{3x^2} \cdot \frac{x}{x^2-9} &\rightarrow \frac{4(x+3)}{3x^2} \cdot \frac{x}{(x+3)(x-3)} \\
 \frac{\cancel{4(x+3)}}{3x^{\cancel{2}}} \cdot \frac{\cancel{x}}{\cancel{(x+3)}(x-3)} & \\
 \frac{4}{3x} \cdot \frac{1}{x-3} &\rightarrow \frac{4}{3x^2-9x}
 \end{aligned}$$

Video Review



MEDIA

Click image to the left for more content.



MEDIA

Click image to the left for more content.

Guided Practice

Multiply $\frac{12x^2-x-6}{x^2-1} \cdot \frac{x^2+7x+6}{4x^2-27x+18}$.

Solution: Factor all pieces, reduce, and then multiply.

$$\begin{aligned} \frac{12x^2 - x - 6}{x^2 - 1} \cdot \frac{x^2 + 7x + 6}{4x^2 - 27x + 18} &\rightarrow \frac{(3x+2)(4x-3)}{(x+1)(x-1)} \cdot \frac{(x+1)(x+6)}{(4x-3)(x-6)} \\ \frac{(3x+2)\cancel{(4x-3)}}{(x+1)\cancel{(x-1)}} \cdot \frac{\cancel{(x+1)}(x+6)}{\cancel{(4x-3)}(x-6)} &\rightarrow \frac{(3x+2)(x+6)}{(x-1)(x-6)} \\ \frac{12x^2 - x - 6}{x^2 - 1} \cdot \frac{x^2 + 7x + 6}{4x^2 - 27x + 18} &= \frac{3x^2 + 20x + 12}{x^2 - 7x + 6} \end{aligned}$$

Practice

Sample explanations for some of the practice exercises below are available by viewing the following video. Note that there is not always a match between the number of the practice exercise in the video and the number of the practice exercise listed in the following exercise set. However, the practice exercise is the same in both. [CK-12 Basic Algebra: Multiplying and Dividing Rational Expressions](#) (9:19)



MEDIA

Click image to the left for more content.

In 1–10, perform the indicated operation and reduce the answer to lowest terms

- $\frac{x^3}{2y^3} \cdot \frac{2y^2}{x}$
- $\frac{2x}{y^2} \cdot \frac{4y}{5x}$
- $2xy \cdot \frac{2y^2}{x^3}$
- $\frac{4y^2-1}{y^2-9} \cdot \frac{y-3}{2y-1}$
- $\frac{6ab}{a^2} \cdot \frac{a^3b}{3b^2}$
- $\frac{33a^2}{-5} \cdot \frac{20}{11a^3}$
- $\frac{2x^2+2x-24}{x^2+3x} \cdot \frac{x^2+x-6}{x+4}$
- $\frac{x}{x-5} \cdot \frac{x^2-8x+15}{x^2-3x}$
- $\frac{5x^2+16x+3}{36x^2-25} \cdot (6x^2+5x)$
- $\frac{x^2+7x+10}{x^2-9} \cdot \frac{x^2-3x}{3x^2+4x-4}$

Mixed Review

- The time it takes to reach a destination varies inversely as the speed in which you travel. It takes 3.6 hours to reach your destination traveling 65 miles per hour. How long would it take to reach your destination traveling 78 miles per hour?
- A local nursery makes two types of fall arrangements. One arrangement uses eight mums and five black-eyed susans. The other arrangement uses six mums and 9 black-eyed susans. The nursery can use no more than 144 mums and 135 black-eyed susans. The first arrangement sells for \$49.99 and the second arrangement sells for 38.95. How many of each type should be sold to maximize revenue?
- Solve for r and graph the solution on a number line: $-24 \geq |2r + 3|$.
- What is true of any line parallel to $5x + 9y = -36$?

15. Solve for d : $3 + 5d = -d - (3x - 3)$.
16. Graph and determine the domain and range: $y - 9 = -x^2 - 5x$.
17. Rewrite in vertex form by completing the square. Identify the vertex: $y^2 - 16y + 3 = 4$.

12.6 Division of Rational Expressions

Here you'll learn how to find the quotient of two rational expressions.

Suppose that the distance traveled by a hot air balloon in miles can be represented by $8x^3 - 8x$, while the speed of the hot air balloon in miles per hour can be represented by $x^2 + x$. Would you be able to find the time it took for the hot air balloon to cover the distance given? Could you evaluate the expression that you found for $x = 2$? In this Concept, you'll learn about the division of rational expressions so that you can solve problems like this one.

Guidance

Dividing Rational Expressions Involving Polynomials

Division of rational expressions works in the same manner as multiplication. A reminder of how to divide fractions is below.

For any rational expressions $a \neq 0, b \neq 0, c \neq 0, d \neq 0$,

$$\frac{a}{b} \div \frac{c}{d} \rightarrow \frac{a}{b} \cdot \frac{d}{c} = \frac{ad}{bc}$$

Example A

Simplify $\frac{9x^2-4}{2x-2} \div \frac{21x^2-2x-8}{1}$.

Solution:

$$\frac{9x^2-4}{2x-2} \div \frac{21x^2-2x-8}{1} \rightarrow \frac{9x^2-4}{2x-2} \cdot \frac{1}{21x^2-2x-8}$$

Repeat the process for multiplying rational expressions.

$$\begin{aligned} \frac{9x^2-4}{2x-2} \cdot \frac{1}{21x^2-2x-8} &\rightarrow \frac{(3x-2)(3x-2)}{2(x-1)} \cdot \frac{1}{(3x-2)(7x+4)} \\ \frac{9x^2-4}{2x-2} \div \frac{21x^2-2x-8}{1} &= \frac{3x-2}{14x^2-6x-8} \end{aligned}$$

Example B

Simplify $\frac{x^2+3x-10}{5x+15} \div \frac{x-2}{x^2+2x-3}$.

Solution:

$$\frac{x^2+3x-10}{5x+15} \div \frac{x-2}{x^2+2x-3} \rightarrow \frac{x^2+3x-10}{5x+15} \cdot \frac{x^2+2x-3}{x-2}$$

Repeat the process for multiplying rational expressions.

$$\begin{aligned} \frac{x^2 + 3x - 10}{5x + 15} \cdot \frac{x^2 + 2x - 3}{x - 2} &\rightarrow \frac{(x+5)(x-2)}{5(x+3)} \cdot \frac{x-2}{(x+3)(x-1)} \\ \frac{(x+5)\cancel{(x-2)}}{5(x+3)} \cdot \frac{\cancel{x-2}}{(x+3)(x-1)} &= \frac{x+5}{5} \cdot \frac{1}{(x-1)} = \frac{x+5}{5x-5} \\ \frac{x^2 + 3x - 10}{5x + 15} \div \frac{x-2}{x^2 + 2x - 3} &= \frac{x+5}{5x-5} \end{aligned}$$

Real-Life Application of Rational Functions

Example C

Suppose Marciel is training for a running race. Marciel's speed (in miles per hour) of his training run each morning is given by the function $x^3 - 9x$, where x is the number of bowls of cereal he had for breakfast ($1 \leq x \leq 6$). Marciel's training distance (in miles), if he eats x bowls of cereal, is $3x^2 - 9x$. What is the function for Marciel's time and how long does it take Marciel to do his training run if he eats five bowls of cereal on Tuesday morning?

Solution:

$$\begin{aligned} \text{time} &= \frac{\text{distance}}{\text{speed}} \\ \text{time} &= \frac{3x^2 - 9x}{x^3 - 9x} = \frac{3x(x-3)}{x(x^2-9)} = \frac{3x\cancel{(x-3)}}{x(x+3)\cancel{(x-3)}} \\ \text{time} &= \frac{3}{x+3} \\ \text{If } x &= 5, \text{ then} \\ \text{time} &= \frac{3}{5+3} = \frac{3}{8} \end{aligned}$$

Marciel will run for $\frac{3}{8}$ of an hour.

Video Review



MEDIA

Click image to the left for more content.



MEDIA

Click image to the left for more content.

Guided Practice

Simplify $\frac{1}{5x^2-30x+40} \div \frac{3x-6}{2x^2-8x}$.

Solution:

$$\begin{aligned} \frac{1}{5x^2-30x+40} \div \frac{3x-6}{2x^2-8x} &= \frac{1}{5x^2-30x+40} \cdot \frac{2x^2-8x}{3x-6} \\ &= \frac{1}{5(x-2)(x-4)} \cdot \frac{2x(x-4)}{3(x-2)} \\ &= \frac{1}{5(x-2)\cancel{(x-4)}} \cdot \frac{2x\cancel{(x-4)}}{3(x-2)} \\ &= \frac{2x}{5(x-2)^2} \end{aligned}$$

Practice

Sample explanations for some of the practice exercises below are available by viewing the following video. Note that there is not always a match between the number of the practice exercise in the video and the number of the practice exercise listed in the following exercise set. However, the practice exercise is the same in both. [CK-12 Basic Algebra: Multiplying and Dividing Rational Expressions \(9:19\)](#)



MEDIA

Click image to the left for more content.

In 1–10, perform the indicated operation and reduce the answer to lowest terms.

- $2xy \div \frac{2x^2}{y}$
- $\frac{x^2}{x-1} \div \frac{x}{x^2+x-2}$
- $\frac{a^2+2ab+b^2}{ab^2-a^2b} \div (a+b)$
- $\frac{3-x}{3x-5} \div \frac{x^2-9}{2x^2-8x-10}$
- $\frac{x^2-25}{x+3} \div (x-5)$
- $\frac{2x+1}{2x-1} \div \frac{4x^2-1}{1-2x}$
- $\frac{3x^2+5x-12}{x^2-9} \div \frac{3x-4}{3x+4}$
- $\frac{x^2+x-12}{x^2+4x+4} \div \frac{x-3}{x+2}$
- $\frac{x^4-16}{x^2-9} \div \frac{x^2+4}{x^2+6x+9}$
- $\frac{x^2+8x+16}{7x^2+9x+2} \div \frac{7x+2}{x^2+4x}$
- Maria's recipe asks for $2\frac{1}{2}$ times more flour than sugar. How many cups of flour should she mix in if she uses $3\frac{1}{3}$ cups of sugar?
- George drives from San Diego to Los Angeles. On the return trip, he increases his driving speed by 15 miles per hour. In terms of his initial speed, by what factor is the driving time decreased on the return trip?

13. Ohm's Law states that in an electrical circuit $I = \frac{V}{R_c}$. The total resistance for resistors placed in parallel is given by $\frac{1}{R_{tot}} = \frac{1}{R_1} + \frac{1}{R_2}$. Write the formula for the electric current in terms of the component resistances: R_1 and R_2 .

Quick Quiz

- h is inversely proportional to t . If $t = -0.05153$ when $h = -16$, find t when $h = 1.45$.
- Use $f(x) = \frac{-5}{x^2-25}$ for the following questions.
 - Find the excluded values.
 - Determine the vertical asymptotes.
 - Sketch a graph of this function.
 - Determine its domain and range.
- Simplify $\frac{8c^4+12c^2-22c+1}{4}$.
- Simplify $\frac{10a^2-30a}{a-3}$. What are its excluded values?
- Fill the blank with *directly*, *inversely*, or *neither*. "The amount of time it takes to mow the lawn varies _____ - _____ with the size of the lawn mower."

12.7 Addition and Subtraction of Rational Expressions

Here you'll learn how to determine the sum and the difference of two rational expressions and how to find LCMs.

Suppose that Jake can photocopy all the pages in a book in 3 hours, while Meredith can photocopy all the pages in the book in 2 hours. If Jake started at the beginning of the book and Meredith started at the end of the book and they worked together, how many hours would it take for them to photocopy all the pages? What equation could you set up to find this value? In this Concept, you'll learn about the addition and subtraction of rational expressions so that you can solve work problems such as this one.

Guidance

Like numerical fractions, rational expressions represent a part of a whole quantity. Remember when adding or subtracting fractions, the denominators must be the same. Once the denominators are identical, the numerators are combined by adding or subtracting like terms.

Example A

Simplify: $\frac{4x^2-3}{x+5} + \frac{2x^2-1}{x+5}$.

Solution: The denominators are identical; therefore we can add the like terms of the numerator to simplify.

$$\frac{4x^2-3}{x+5} + \frac{2x^2-1}{x+5} = \frac{6x^2-4}{x+5}$$

Not all denominators are the same however. In the case of **unlike denominators**, common denominators must be created through multiplication by finding the **least common multiple**.

The **least common multiple (LCM)** is the smallest number that is evenly divisible by every member of the set.

What is the least common multiple of 2, $4x$, and $6x^2$? The smallest number 2, 4, and 6 can divide into evenly is six. The largest exponent of x is 2. Therefore, the LCM of 2, $4x$, and $6x^2$ is $6x^2$.

Example B

Find the least common multiple of $2x^2 + 8x + 8$ and $x^3 - 4x^2 - 12x$.

Solution: Factor the polynomials completely.

$$\begin{aligned} 2x^2 + 8x + 8 &= 2(x^2 + 4x + 4) = 2(x+2)^2 \\ x^3 - 4x^2 - 12x &= x(x^2 - 4x - 12) = x(x-6)(x+2) \end{aligned}$$

The LCM is found by taking each factor to the highest power that it appears in either expression. $LCM = 2x(x+2)^2(x-6)$

Use this approach to add rational expressions with unlike denominators.

Example C

Simplify $\frac{2}{x+2} - \frac{3}{2x-5}$.

Solution:

The denominators cannot be factored any further, so the LCM is just the product of the separate denominators.

$$LCD = (x+2)(2x-5)$$

The first fraction needs to be multiplied by the factor $(2x-5)$ and the second fraction needs to be multiplied by the factor $(x+2)$.

$$\frac{2}{x+2} \cdot \frac{(2x-5)}{(2x-5)} - \frac{3}{2x-5} \cdot \frac{(x+2)}{(x+2)}$$

We combine the numerators and simplify.

$$\frac{2(2x-5) - 3(x+2)}{(x+2)(2x-5)} = \frac{4x - 10 - 3x - 6}{(x+2)(2x-5)}$$

Combine like terms in the numerator.

$$\frac{x - 16}{(x+2)(2x-5)}$$

Work Problems

These are problems where two objects work together to complete a job. Work problems often contain rational expressions. Typically we set up such problems by looking at the part of the task completed by each person or machine. The completed task is the sum of the parts of the tasks completed by each individual or each machine.

Part of task completed by first person + Part of task completed by second person = One completed task

To determine the part of the task completed by each person or machine, we use the following fact.

Part of the task completed = rate of work \times time spent on the task

In general, it is very useful to set up a table where we can list all the known and unknown variables for each person or machine and then combine the parts of the task completed by each person or machine at the end.

Example D

Mary can paint a house by herself in 12 hours. John can paint a house by himself in 16 hours. How long would it take them to paint the house if they worked together?

Solution:

Let $t =$ the time it takes Mary and John to paint the house together.

Since Mary takes 12 hours to paint the house by herself, in one hour she paints $\frac{1}{12}$ of the house.

Since John takes 16 hours to paint the house by himself, in one hour he paints $\frac{1}{16}$ of the house.

Mary and John work together for t hours to paint the house together. Using the formula:

Part of the task completed = rate of work \times time spent on the task

we can write that Mary completed $\frac{t}{12}$ of the house and John completed $\frac{t}{16}$ of the house in this time and summarize the data in the following table.

TABLE 12.2:

Painter	Rate of work (per hour)	Time worked	Part of Task
Mary	$\frac{1}{12}$	t	$\frac{t}{12}$
John	$\frac{1}{16}$	t	$\frac{t}{16}$

Using the formula:

Part of task completed by first person + Part of task completed by second person = One completed task

write an equation to model the situation,

$$\frac{t}{12} + \frac{t}{16} = 1.$$

Solve the equation by finding the least common multiple.

$$\begin{aligned} LCM &= 48 \\ 48 \cdot \frac{t}{12} + 48 \cdot \frac{t}{16} &= 48 \cdot 1 \\ 48^4 \cdot \frac{t}{12} + 48^3 \cdot \frac{t}{16} &= 48 \cdot 1 \\ 4t + 3t &= 48 \\ 7t = 48 &\Rightarrow t = \frac{48}{7} = 6.86 \text{ hours Answer} \end{aligned}$$

Video Review



MEDIA

Click image to the left for more content.



MEDIA

Click image to the left for more content.

Guided Practice

One pipe fills a pool 2 times faster than another pipe. Together, they fill the pool in 5 hours. How long does it take for the faster pipe to fill the pool?

Solution:

Let f be the time it takes for the faster pipe to fill the pool. Since the pipe is two times faster, the slower pipe takes twice as long. So the time it take the slower pipe to fill the pool is $2f$. After 5 hours, the faster pipe will fill up a certain proportion of the pool. That proportion is found by dividing 5 hours by the time it takes the faster pipe to fill the pool.

Proportion of the pool filled by the faster pipe:

$$\frac{5}{f}$$

Proportion of the pool filled by the slower pipe:

$$\frac{5}{2f}$$

Since together they fill the whole pool in 5 hours, we add the proportions together:

$$\text{Using the Work Problem formula.} \quad \frac{5}{f} + \frac{5}{2f} = 1$$

$$\text{Multiplying top and bottom of the first fraction by 2, to get common denominators.} \quad \frac{10}{2f} + \frac{5}{2f} = 1$$

$$\text{Adding.} \quad \frac{15}{2f} = 1$$

$$\text{Solving for the variable.} \quad 15 = 2f \Rightarrow 7.5 = f$$

It would take the faster pipe 7.5 hours to fill the whole pool by itself.

Practice

Perform the indicated operation and simplify. Leave the denominator in factored form.

1. $\frac{5}{24} - \frac{7}{24}$
2. $\frac{10}{21} + \frac{9}{35}$
3. $\frac{5}{2x+3} + \frac{3}{2x+3}$
4. $\frac{3x-1}{x+9} - \frac{4x+3}{x+9}$
5. $\frac{4x+7}{2x^2} - \frac{3x-4}{2x^2}$
6. $\frac{x^2}{x+5} - \frac{25}{x+5}$
7. $\frac{2x}{x-4} + \frac{x}{4-x}$
8. $\frac{10}{3x-1} - \frac{7}{1-3x}$
9. $\frac{5}{2x+3} - 3$
10. $\frac{5x+1}{x+4} + 2$
11. $\frac{1}{x} + \frac{2}{3x}$
12. $\frac{4}{5x^2} - \frac{2}{7x^3}$
13. $\frac{4x}{x+1} - \frac{2}{2(x+1)}$
14. $\frac{10}{x+5} + \frac{2}{x+2}$
15. $\frac{2x}{x-3} - \frac{3x}{x+4}$
16. $\frac{4x-3}{2x+1} + \frac{x+2}{x-9}$
17. $\frac{x^2}{x+4} - \frac{3x^2}{4x-1}$
18. $\frac{2}{5x+2} - \frac{x+1}{x^2}$
19. $\frac{x+4}{2x} + \frac{2}{9x}$
20. $\frac{5x+3}{x^2+x} + \frac{2x+1}{x}$

21. $\frac{4}{(x+1)(x-1)} - \frac{5}{(x+1)(x+2)}$
22. $\frac{2x}{(x+2)(3x-4)} + \frac{7x}{(3x-4)^2}$
23. $\frac{3x+5}{x(x-1)} - \frac{9x-1}{(x-1)^2}$
24. $\frac{1}{(x-2)(x-3)} + \frac{4}{(2x+5)(x-6)}$
25. $\frac{3x-2}{x-2} + \frac{1}{x^2-4x+4}$
26. $\frac{-x^2}{x^2-7x+6} + x - 4$
27. $\frac{2x}{x^2+10x+25} - \frac{3x}{2x^2+7x-15}$
28. $\frac{1}{x^2-9} + \frac{2}{x^2+5x+6}$
29. $\frac{-x+4}{2x^2-x-15} + \frac{x}{4x^2+8x-5}$
30. $\frac{4}{9x^2-49} - \frac{1}{3x^2+5x-28}$
31. One number is 5 less than another. The sum of their reciprocals is $\frac{13}{36}$. Find the two numbers.
32. One number is 8 times more than another. The difference in their reciprocals is $\frac{21}{20}$. Find the two numbers.
33. A pipe can fill a tank full of oil in 4 hours and another pipe can empty the tank in 8 hours. If the valves to both pipes are open, how long would it take to fill the tank?
34. Stefan and Misha are washing cars. Stefan could wash the cars by himself in 6 hours and Misha could wash the cars by himself in 5 hours. Stefan starts washing the cars by himself, but he needs to go to his football game after 2.5 hours. Misha continues the task. How long did it take Misha to finish washing the cars?
35. Amanda and her sister Chyna are shoveling snow to clear their driveway. Amanda can clear the snow by herself in three hours and Chyna can clear the snow by herself in four hours. After Amanda has been working by herself for one hour, Chyna joins her and they finish the job together. How long does it take to clear the snow from the driveway?
36. At a soda bottling plant, one bottling machine can fulfill the daily quota in ten hours and a second machine can fill the daily quota in 14 hours. The two machines started working together but after four hours the slower machine broke and the faster machine had to complete the job by itself. How many hours does the fast machine work by itself?

Mixed Review

37. Explain the difference between these two situations. Write an equation to model each situation. Assume the town started with 10,000 people. When will statement b become larger than statement a?
 - a. For the past seven years, the population grew by 500 people every year.
 - b. For the past seven years, the population grew by 5% every year.
38. Simplify. Your answer should have only positive exponents. $\frac{16x^2y^7}{-2x^8y} \cdot \frac{1}{2}x^{-10}$
39. Solve for j : $-12 = j^2 - 8j$. Which method did you use? Why did you choose this method?
40. Jimmy shot a basketball from a height of four feet with an upward velocity of 12 *feet/sec*.
 - a. Write an equation to model this situation.
 - b. Will Jimmy's ball make it to the ten-foot-tall hoop?
41. The distance you travel varies directly as the speed at which you drive. If you can drive 245 miles in five hours, how long will it take you to drive 90 miles?
42. Two cities are 3.78 centimeters apart on an atlas. The atlas has a scale of $\frac{1}{2}cm = 14 \text{ miles}$. What is the true distance between these cities?

12.8 Rational Equations Using Proportions

Here you'll learn how to use proportions to find the solutions to rational equations.

Suppose you were traveling on a paddle boat at a constant speed. In 6 minutes, you traveled x meters, and in 10 minutes, you traveled $x + 4$ meters. Could you find the value of x in this scenario? If so, how would you do it? After completing this Concept, you'll be able to solve rational equations using proportions so that you can handle this type of problem.

Solution of Rational Equations

You are now ready to solve rational equations! There are two main methods you will learn to solve rational equations:

- Cross products
- Lowest common denominators

In this Concept you will learn how to solve using cross products.

Solving a Rational Proportion

When two rational expressions are equal, a **proportion** is created and can be solved using its cross products.

Example A

For example, to solve $\frac{x}{5} = \frac{(x+1)}{2}$, cross multiply and the products are equal.

$$\frac{x}{5} = \frac{(x+1)}{2} \rightarrow 2(x) = 5(x+1)$$

Solve for x :

$$\begin{aligned} 2(x) &= 5(x+1) \rightarrow 2x = 5x + 5 \\ 2x - 5x &= 5x - 5x + 5 \\ -3x &= 5 \\ x &= -\frac{5}{3} \end{aligned}$$

Example B

Solve $\frac{2x}{x+4} = \frac{5}{x}$.

Solution:

$$\begin{aligned} \frac{2x}{x+4} &= \frac{5}{x} \rightarrow 2x^2 = 5(x+4) \\ 2x^2 &= 5(x+4) \rightarrow 2x^2 = 5x + 20 \\ 2x^2 - 5x - 20 &= 0 \end{aligned}$$

Notice that this equation has a degree of two; that is, it is a *quadratic equation*. We can solve it using the quadratic formula.

$$x = \frac{5 \pm \sqrt{185}}{4} \Rightarrow x \approx -2.15 \text{ or } x \approx 4.65$$

Example C

Solve $\frac{3x}{5x+2} = \frac{1}{x}$.

Solution:

Start by cross multiplying:

$$\frac{3x}{5x+2} = \frac{1}{x} \Rightarrow 3x^2 = 5x + 2 \Rightarrow 3x^2 - 5x - 2 = 0$$

Since this equation has a squared term as its highest power, it is a quadratic equation. We can solve this by using the quadratic formula, or by factoring.

1. Since there are no common factors, start by finding the product of the coefficient in front of the squared term and the constant:

$$3 \cdot -2 = -6$$

2. What factors of -6 add up to 5? That would be -6 and 1, since $-6+1=-5$.

3. Factor, beginning by breaking up the middle term, $-5x$, as above:

$$\begin{aligned} 0 &= 3x^2 - 5x - 2 = 3x^2 - 6x + 1x - 2 \\ &= 3x(x-2) + 1(x-2) = (3x+1)(x-2) \end{aligned}$$

4. Use the Zero Product Principle:

$$(3x+1)(x-2) = 0 \Rightarrow 3x+1 = 0 \text{ or } x-2 = 0 \Rightarrow x = -\frac{1}{3} \text{ or } x = 2$$

Video Review



MEDIA

Click image to the left for more content.



MEDIA

Click image to the left for more content.

Guided Practice

Solve $-\frac{x}{2} = \frac{3x-8}{x}$.

Solution:

Cross multiply: $-\frac{x}{2} = \frac{3x-8}{x} \Rightarrow x^2 = -2(3x-8)$

Set one side equal to zero to get a quadratic equation: $0 = x^2 + 2(3x-8)$

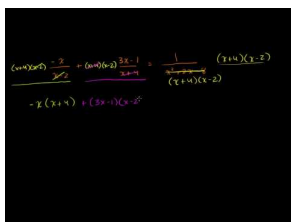
Simplify by distributing: $0 = x^2 + 6x - 16$

Factor by determining $-16 = 8 \cdot -2$ and $6 = 8 + (-2)$: $0 = x^2 - 2x + 8x - 16 = x(x-2) + 8(x-2) = (x+8)(x-2)$

Use the zero product principle: $0 = (x+8)(x-2) \Rightarrow x+8 = 0$ or $x-2 = 0 \Rightarrow x = -8$ or $x = 2$

Practice

Sample explanations for some of the practice exercises below are available by viewing the following videos. Note that there is not always a match between the number of the practice exercise in the videos and the number of the practice exercise listed in the following exercise set. However, the practice exercise is the same in both. [CK-12 Basic Algebra:SolvingRational Equations](#) (12:57)

**MEDIA**

Click image to the left for more content.

Solve the following equations.

- $\frac{2x+1}{4} = \frac{x-3}{10}$
- $\frac{4x}{x+2} = \frac{5}{9}$
- $\frac{5}{3x-4} = \frac{2}{x+1}$
- $\frac{7x}{x-5} = \frac{x+3}{x}$
- $\frac{2}{x+3} - \frac{1}{x+4} = 0$
- $\frac{3x^2+2x-1}{x^2-1} = -2$

Mixed Review

- Divide: $-2\frac{9}{10} \div -\frac{15}{8}$.
- Solve for g : $-1.5(-3\frac{4}{5} + g) = \frac{201}{20}$.
- Find the discriminant of $6x^2 + 3x + 4 = 0$ and determine the nature of the roots.
- Simplify $\frac{6b}{2b+2} + 3$.
- Simplify $\frac{8}{2x-4} - \frac{5x}{x-5}$.
- Divide: $(7x^2 + 16x - 10) \div (x + 3)$.
- Simplify $(n-1) * (3n+2)(n-4)$.

12.9 Clearing Denominators in Rational Equations

Here you'll learn how to clear denominators in order to solve rational equations.

Suppose that you had 24 quarts of juice to equally distribute to each member of your class. However, 10 members of your class were absent, so the amount of juice distributed to each person increased by $\frac{1}{5}$ of a quart. How many people are in your class? What equation could you set up to find the answer to this question? In this Concept, you'll learn how to solve rational equations by clearing denominators so that you can solve problems like this one.

Guidance

Solving by Clearing Denominators

When a rational equation has several terms, it may not be possible to use the method of cross products. A second method to solve rational equations is to **clear the fractions** by multiplying the entire equation by the least common multiple of the denominators.

Example A

Solve $5x - \frac{1}{x} = 4$.

Solution:

Start by clearing the denominators. In this case, there is only one denominator, x . This means that x is the LCM of all the denominators, since there is only one denominator. Simply multiply the whole equation by that denominator. Then solve for x using methods learned previously.

$$\begin{array}{l}
 5x - \frac{1}{x} = 4 \\
 \text{Clear the denominator.} \qquad 5x^2 - 1 = 4x \\
 \text{This is quadratic, so make one side equal to zero.} \qquad 5x^2 - 4x - 1 = 0 \\
 \text{Factor.} \qquad (5x + 1)(x - 1) = 0 \\
 \text{Use the Zero Product Property to solve for the variable.} \qquad x = -\frac{1}{5} \text{ or } x = 1
 \end{array}$$

Example B

Solve $\frac{3}{x+2} - \frac{4}{x-5} = \frac{2}{x^2-3x-10}$.

Solution:

Factor all denominators and find the least common multiple.

$$\begin{array}{l}
 \frac{3}{x+2} - \frac{4}{x-5} = \frac{2}{(x+2)(x-5)} \\
 LCM = (x+2)(x-5)
 \end{array}$$

Multiply all terms in the equation by the LCM and cancel the common terms.

$$(x+2)(x-5) \cdot \frac{3}{x+2} - (x+2)(x-5) \cdot \frac{4}{x-5} = (x+2)(x-5) \cdot \frac{2}{(x+2)(x-5)}$$

$$\cancel{(x+2)}(x-5) \cdot \frac{3}{\cancel{x+2}} - (x+2)\cancel{(x-5)} \cdot \frac{4}{\cancel{x-5}} = \cancel{(x+2)}\cancel{(x-5)} \cdot \frac{2}{\cancel{(x+2)}\cancel{(x-5)}}$$

Now solve and simplify.

$$3(x-5) - 4(x+2) = 2$$

$$3x - 15 - 4x - 8 = 2$$

$$x = -25 \text{ Answer}$$

Check your answer.

$$\frac{3}{x+2} - \frac{4}{x-5} = \frac{3}{-25+2} - \frac{4}{-25-5} = 0.003$$

$$\frac{2}{x^2 - 3x - 10} = \frac{2}{(-25)^2 - 3(-25) - 10} = 0.003$$

Example C

A group of friends decided to pool their money together and buy a birthday gift that cost \$200. Later 12 of the friends decided not to participate any more. This meant that each person paid \$15 more than the original share. How many people were in the group to start?

Solution:

Let x = the number of friends in the original group

TABLE 12.3:

	Number of People	Gift Price	Share Amount
Original group	x	200	$\frac{200}{x}$
Later group	$x - 12$	200	$\frac{200}{x-12}$

Since each person's share went up by \$15 after 12 people refused to pay, we write the equation:

$$\frac{200}{x-12} = \frac{200}{x} + 15$$

Solve by clearing the fractions. Don't forget to check!

$$\begin{aligned}
 LCM &= x(x-12) \\
 x(x-12) \cdot \frac{200}{x-12} &= x(x-12) \cdot \frac{200}{x} + x(x-12) \cdot 15 \\
 \cancel{x(x-12)} \cdot \frac{200}{\cancel{x-12}} &= \cancel{x}(x-12) \cdot \frac{200}{\cancel{x}} + x(x-12) \cdot 15 \\
 200x &= 200(x-12) + 15x(x-12) \\
 200x &= 200x - 2400 + 15x^2 - 180x \\
 0 &= 15x^2 - 180x - 2400 \\
 x &= 20, x = -8
 \end{aligned}$$

The answer is 20 people. We discard the negative solution since it does not make sense in the context of this problem.

Video Review



MEDIA

Click image to the left for more content.



MEDIA

Click image to the left for more content.

Guided Practice

Solve $\frac{1}{x-1} - \frac{1}{x+1} = \frac{1}{x}$.

Solution:

Since each denominator cannot be a multiple of another denominator, or in other words, the denominators do not share common factors, the *LCM* is the product of the 3 denominators:

$$LCM = (x-1)(x+1)(x).$$

$$\frac{1}{x-1} - \frac{1}{x+1} = \frac{1}{x}$$

Multiply by the *LCM*. $(x-1)(x+1)(x) \cdot \frac{1}{x-1} - (x-1)(x+1)(x) \cdot \frac{1}{x+1} = (x-1)(x+1)(x) \cdot \frac{1}{x}$

Simplify by cancelling. $(\cancel{x-1})(x+1)(x) \cdot \frac{1}{\cancel{x-1}} - (x-1)(\cancel{x+1})(x) \cdot \frac{1}{\cancel{x+1}} = (x-1)(x+1)(\cancel{x}) \cdot \frac{1}{\cancel{x}}$

$$(x+1)(x) - (x-1)(x) = (x-1)(x+1)$$

Simplify by distributing.

$$x^2 + x - x^2 + x = x^2 - 1$$

Simplify by combining like terms.

$$2x = x^2 - 1$$

Arrange so that one side is equal to zero.

$$0 = x^2 - 2x - 1$$

This quadratic equation cannot be factored, so use the quadratic formula to get:

$$x = 1 \pm \sqrt{2}.$$

Practice

Solve the following equations.

- $x + \frac{1}{x} = 2$
- $-3 + \frac{1}{x+1} = \frac{2}{x}$
- $\frac{1}{x} - \frac{x}{x-2} = 2$
- $\frac{3}{2x-1} + \frac{2}{x+4} = 2$
- $\frac{2x}{x-1} - \frac{x}{3x+4} = 3$
- $\frac{x+1}{x-1} + \frac{x-4}{x+4} = 3$
- $\frac{x}{x-2} + \frac{x}{x+3} = \frac{1}{x^2+x-6}$
- $\frac{2}{x^2+4x+3} = 2 + \frac{x-2}{x+3}$
- $\frac{1}{x+5} - \frac{1}{x-5} = \frac{1-x}{x+5}$
- $\frac{x}{x^2-36} + \frac{1}{x-6} = \frac{1}{x+6}$
- $\frac{2x}{3x+3} - \frac{1}{4x+4} = \frac{2}{x+1}$
- $\frac{-x}{x-2} + \frac{3x-1}{x+4} = \frac{1}{x^2+2x-8}$
- Juan jogs a certain distance and then walks a certain distance. When he jogs he averages seven miles per hour. When he walks, he averages 3.5 miles per hour. If he walks and jogs a total of six miles in a total of seven hours, how far does he jog and how far does he walk?
- A boat travels 60 miles downstream in the same time as it takes it to travel 40 miles upstream. The boat's speed in still water is 20 miles/hour. Find the speed of the current.
- Paul leaves San Diego driving at 50 miles/hour. Two hours later, his mother realizes that he forgot something and drives in the same direction at 70 miles/hour. How long does it take her to catch up to Paul?
- On a trip, an airplane flies at a steady speed against the wind. On the return trip the airplane flies with the wind. The airplane takes the same amount of time to fly 300 miles against the wind as it takes to fly 420 miles with the wind. The wind is blowing at 30 miles/hour. What is the speed of the airplane when there is no wind?
- A debt of \$420 is shared equally by a group of friends. When five of the friends decide not to pay, the share of the other friends goes up by \$25. How many friends were in the group originally?
- A non-profit organization collected \$2,250 in equal donations from their members to share the cost of improving a park. If there were thirty more members, then each member could contribute \$20 less. How many members does this organization have?

12.10 Surveys and Samples

Here you'll learn how to collect accurate data with surveys and samples.

What if you wanted to know the percentage of the people in your town who eat breakfast at least 5 times per week? Your town is too big to ask each person individually, so what would you do? How could you ensure that the information you find out is accurate? In this Concept, you'll learn about surveying and sampling so that you can handle situations like this in which it is impossible to interact with all of the members of a population.

Guidance

One of the most important applications of statistics is collecting information. Statistical studies are done for many purposes:

- To find out more about animal behaviors;
- To determine which presidential candidate is favored;
- To figure out what type of chip product is most popular;
- To determine the gas consumption of cars.

In most cases, it is not possible to survey everyone in a given population. So a **sample** is taken. It is essential that the sample is a **representative sample** of the population being studied. For example, if we are trying to determine the effect of a drug on teenage girls, it would make no sense to include males in our sample population, nor would it make sense to include women that are not teenagers.

The two types of sampling methods studied in this book are:

- Random Sampling
- Stratified Sampling

Random Samples

Random sampling is a method in which people are chosen “out of the blue.” In a true random sample, everyone in the population must have the same chance of being chosen. It is important that each person in the population has a chance of being picked.

Stratified Samples

Stratified sampling is a method actively seeking to poll people from many different backgrounds. The population is first divided into different categories (or **strata**) and the number of members in each category is determined.

Sample Size

In order to lessen the chance of a biased result, the sample size must be large enough. The larger the sample size is, the more precise the estimate is. However, the larger the sample size, the more expensive and time-consuming the statistical study becomes.

Example A

For a class assignment you have been asked to find if students in your school are planning to attend university after graduating high school. Students can respond with “yes,” “no,” or “undecided.” How will you choose those you wish to interview if you want your results to be reliable?

Solution:

The stratified sampling method would be the best option. By randomly picking a certain number of students in each grade, you will get the most accurate results.

Biased Samples

If the sample ends up with one or more sub-groups that are either over-represented or under-represented, then we say the sample is **biased**. We would not expect the results of a **biased sample** to represent the entire population, so it is important to avoid selecting a biased sample.

Some samples may deliberately seek a biased sample in order to obtain a particular viewpoint. For example, if a group of students were trying to petition the school to allow eating candy in the classroom, they might only survey students immediately before lunchtime when students are hungry. The practice of polling only those who you believe will support your cause is sometimes referred to as **cherry picking**.

Many surveys may have a **non-response bias**. In this case, a survey that is simply handed out gains few responses when compared to the number of surveys given out. People who are either too busy or simply not interested will be excluded from the results. Non-response bias may be reduced by conducting face-to-face interviews.

Self-selected respondents who tend to have stronger opinions on subjects than others and are more motivated to respond may also cause bias. For this reason *phone-in* and *online* polls also tend to be poor representations of the overall population. Even though it appears that both sides are responding, the poll may disproportionately represent extreme viewpoints from both sides, while ignoring more moderate opinions that may, in fact, be the majority view. Self-selected polls are generally regarded as unscientific.

Example B

Determine whether the following survey is biased. Explain your reasoning.

“Asking people shopping at a farmer’s market if they think locally grown fruit and vegetables are healthier than supermarket fruits and vegetables”

Solution:

This would be a biased sample because people shopping at a farmer’s market are generally interested in buying fresher fruits and vegetables than a regular supermarket provides. The study can be improved by interviewing an equal number of people coming out of a supermarket, or by interviewing people in a more neutral environment such as the post office.

Biased Questions

Although your sample may be a good representation of the population, the way questions are worded in the survey can still provoke a biased result. There are several ways to identify biased questions.

1. They may use polarizing language, words, and phrases that people associate with emotions.
 - a. How much of your time do you waste on TV every week?
2. They may refer to a majority or to a supposed authority.
 - a. Would you agree with the American Heart and Lung Association that smoking is bad for your health?
3. They may be phrased so as to suggest the person asking the question already knows the answer to be true, or to be false.
 - a. You wouldn’t want criminals free to roam the streets, would you?
4. They may be phrased in an ambiguous way (often with double negatives), which may confuse people.
 - a. Do you disagree with people who oppose the ban on smoking in public places?

Design and Conduct a Survey

The method in which you design and conduct the survey is crucial to its accuracy. Surveys are a set of questions in which the sample answers. The data is compiled to form results, or findings. When designing a survey, be aware of the following recommendations.

1. Determine the goal of your survey. What question do you want to answer?
2. Identify the sample population. Who will you interview?
3. Choose an interviewing method, face-to-face interview, phone interview, or self-administered paper survey or internet survey.
4. Conduct the interview and collect the information.
5. Analyze the results by making graphs and drawing conclusions.

Surveys can be conducted in several ways.

Face-to-face interviews

- ✓ Fewer misunderstood questions
- ✓ High response rate
- ✓ Additional information can be collected from respondents
 - Time-consuming
 - Expensive
 - Can be biased based upon the attitude or appearance of the surveyor

Self-administered surveys

- ✓ Respondent can complete on his or her free time
- ✓ Less expensive than face-to-face interviews
- ✓ Anonymity causes more honest results
 - Lower response rate

Example C

Martha wants to construct a survey that shows which sports students at her school like to play the most.

1. *List the goal of the survey.*
2. *What population sample should she interview?*
3. *How should she administer the survey?*
4. *Create a data collection sheet that she can use to record her results.*

Solution:

The goal of the survey is to find the answer to the question: “Which sports do students at Martha’s school like to play the most?”

1. A sample of the population would include a random sample of the student population in Martha’s school. A good strategy would be to randomly select students (using dice or a random number generator) as they walk into an all-school assembly.
2. Face-to-face interviews are a good choice in this case since the survey consists of only one question, which can be quickly answered and recorded.

- In order to collect the data to this simple survey, Martha can design a data collection sheet such as the one below:

Display, Analyze, and Interpret Survey Data

This textbook has shown you several ways to display data. These graphs are also useful when displaying survey results. Survey data can be displayed as:

- A bar graph
- A histogram
- A pie chart
- A tally sheet
- A box-and-whisker plot
- A stem-and-leaf plot

The method in which you choose to display your data will depend upon your survey results and to whom you plan to present the data.

Video Review



MEDIA

Click image to the left for more content.



MEDIA

Click image to the left for more content.

Guided Practice

Raoul wants to construct a survey that shows how many hours per week the average student at his school works.


- List the goal of the survey.
- What population sample will he interview?
- How would he administer the survey?

Solutions:

- The goal of the survey is to determine the number of hours the average student at Raoul's school works.
- The population to be surveyed is the student body.
- Care should be taken to randomly select students, so that variety of student life is represented. Surveying the football team only would not be a good representation of the whole student body. Students can be randomly surveyed, using dice or a random number generator, in a setting where all, or most, students will be, such as an assembly.

Practice

Sample explanations for some of the practice exercises below are available by viewing the following video. Note that there is not always a match between the number of the practice exercise in the video and the number of the practice exercise listed in the following exercise set. However, the practice exercise is the same in both. [CK-12 Basic Algebra: Surveys and Samples \(12:09\)](#)



MEDIA

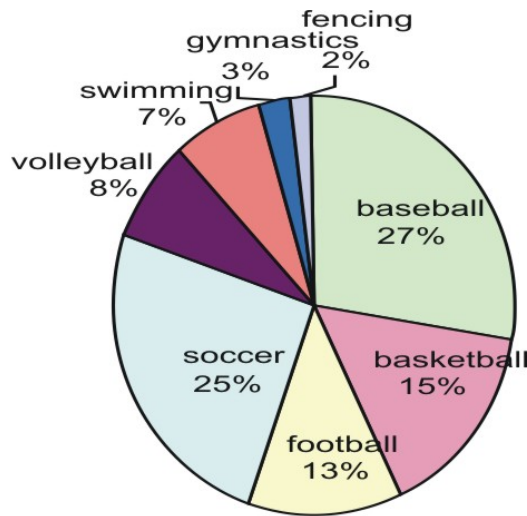
Click image to the left for more content.

1. Explain the most common types of sampling methods. If you needed to survey a city about a new road project, which sampling method would you choose? Explain.
2. What is a *biased survey*? How can bias be avoided?
3. How are surveys conducted, according to this text? List one advantage and one disadvantage of each? List one additional method that can be used to conduct surveys.
4. What are some keys to recognizing biased questions? What could you do if you were presented with a biased question?
5. For a class assignment, you have been asked to find out how students get to school. Do they take public transportation, drive themselves, have their parents drive them, use a carpool, or walk/bike. You decide to interview a sample of students. How will you choose those you wish to interview if you want your results to be reliable?
6. Comment on the way the following samples have been chosen. For the unsatisfactory cases, suggest a way to improve the sample choice.
 - a. You want to find whether wealthier people have more nutritious diets by interviewing people coming out of a five-star restaurant.
 - b. You want to find if a pedestrian crossing is needed at a certain intersection by interviewing people walking by that intersection.
 - c. You want to find out if women talk more than men by interviewing an equal number of men and women.
 - d. You want to find whether students in your school get too much homework by interviewing a stratified sample of students from each grade level.
 - e. You want to find out whether there should be more public busses running during rush hour by interviewing people getting off the bus.
 - f. You want to find out whether children should be allowed to listen to music while doing their homework by interviewing a stratified sample of male and female students in your school.
7. Raoul found that 30% of the students at his school are in 9th grade, 26% of the students are in the 10th grade, 24% of the students are in 11th grade, and 20% of the students are in the 12th grade. He surveyed a total of 60 students using these proportions as a guide for the number of students he interviewed from each grade. Raoul recorded the following data.

TABLE 12.4:

Grade Level	Record Number of Hours Worked	Total Number of Students
9 th grade	0, 5, 4, 0, 0, 10, 5, 6, 0, 0, 2, 4, 0, 8, 0, 5, 7, 0	18
10 th grade	6, 10, 12, 0, 10, 15, 0, 0, 8, 5, 0, 7, 10, 12, 0, 0	16
11 th grade	0, 12, 15, 18, 10, 0, 0, 20, 8, 15, 10, 15, 0, 5	14
12 th grade	22, 15, 12, 15, 10, 0, 18, 20, 10, 0, 12, 16	12

- (a) Construct a stem-and-leaf plot of the collected data.
 - (b) Construct a frequency table with a bin size of 5.
 - (c) Draw a histogram of the data.
 - (d) Find the five-number summary of the data and draw a box-and-whisker plot.
8. The following pie chart displays data from a survey asking students the type of sports they enjoyed playing most. Make five conclusions regarding the survey results.









9. Melissa conducted a survey to answer the question: “What sport do high school students like to watch on TV the most?” She collected the following information on her data collection sheet.

TABLE 12.5:

Sport	Tally	Count
Baseball		32

TABLE 12.5: (continued)

Sport	Tally	
Basketball		28
Football		24
Soccer		18
Gymnastics		19
Figure Skating		8
Hockey		18
		Total 147

1. Make a pie chart of the results showing the percentage of people in each category.
2. Make a bar-graph of the results.

10. Samuel conducted a survey to answer the following question: “What is the favorite kind of pie of the people living in my town?” By standing in front of his grocery store, he collected the following information on his data collection sheet:

TABLE 12.6:








Type of Pie	Tally	
Apple		37
Pumpkin		13
Lemon Meringue		7

TABLE 12.6: (continued)

Type of Pie	Tally	
Chocolate Mousse		23
Cherry		4
Chicken Pot Pie		31
Other		7
		Total 122

1. Make a pie chart of the results showing the percentage of people in each category.
2. Make a bar graph of the results.

11. Myra conducted a survey of people at her school to see “In which month does a person’s birthday fall?” She collected the following information in her data collection sheet:

TABLE 12.7:













Month	Tally	
January		16
February		13
March		12
April		11
May		13

TABLE 12.7: (continued)

Month	Tally	
June		12
July		9
August		7
September		9
October		8
November		13
December		13
		Total: 136

1. Make a pie chart of the results showing the percentage of people whose birthday falls in each month.
2. Make a bar graph of the results.

12. Nam-Ling conducted a survey that answers the question: “Which student would you vote for in your school’s elections?” She collected the following information:

TABLE 12.8:

















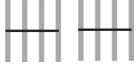


Candidate	9 th graders	10 th graders	11 th graders	12 th graders	Total
Susan Cho					19

TABLE 12.8: (continued)

Candidate	9 th graders	10 th graders	11 th graders	12 th graders	Total
Margarita Martinez					31
Steve Coogan					16
Solomon Duning					26
Juan Rios					28
Total	36	30	30	24	120

1. Make a pie chart of the results showing the percentage of people planning to vote for each candidate.
2. Make a bar graph of the results.

13. Graham conducted a survey to find how many hours of TV teenagers watch each week in the United States. He collaborated with three friends who lived in different parts of the U.S. and found the following information:

TABLE 12.9:

Part of the country	Number of hours of TV watched per week	Total number of teens
West Coast	10, 12, 8, 20, 6, 0, 15, 18, 12, 22, 9, 5, 16, 12, 10, 18, 10, 20, 24, 8	20
Mid West	20, 12, 24, 10, 8, 26, 34, 15, 18, 6, 22, 16, 10, 20, 15, 25, 32, 12, 18, 22	20
New England	16, 9, 12, 0, 6, 10, 15, 24, 20, 30, 15, 10, 12, 8, 28, 32, 24, 12, 10, 10	20
South	24, 22, 12, 32, 30, 20, 25, 15, 10, 14, 10, 12, 24, 28, 32, 38, 20, 25, 15, 12	20

14.
 1. Make a stem-and-leaf plot of the data.
 2. Decide on an appropriate bin size and construct a frequency table.
 3. Make a histogram of the results.
 4. Find the five-number summary of the data and construct a box-and-whisker plot.
14. "What do students in your high school like to spend their money on?"
 - a. Which categories would you include on your data collection sheet?
 - b. Design the data collection sheet that can be used to collect this information.
 - c. Conduct the survey. This activity is best done as a group with each person contributing at least 20 results.

- d. Make a pie chart of the results showing the percentage of people in each category.
e. Make a bar graph of the results.
15. “What is the height of students in your class?”
- Design the data collection sheet that can be used to collect this information.
 - Conduct the survey. This activity is best done as a group with each person contributing at least 20 results.
 - Make a stem-and-leaf plot of the data.
 - Decide on an appropriate bin size and construct a frequency table.
 - Make a histogram of the results.
 - Find the five-number summary of the data and construct a box-and-whisker plot.
16. “How much allowance money do students in your school get per week?”
- Design the data collection sheet that can be used to collect this information.
 - Conduct the survey. This activity is best done as a group with each person contributing at least 20 results.
 - Make a stem-and-leaf plot of the data.
 - Decide on an appropriate bin size and construct a frequency table.
 - Make a histogram of the results.
 - Find the five-number summary of the data and construct a box-and-whisker plot.
17. Are the following statements biased?
- You want to find out public opinion on whether teachers get paid a sufficient salary by interviewing the teachers in your school.
 - You want to find out if your school needs to improve its communications with parents by sending home a survey written in English.
18. “What time do students in your school get up in the morning during the school week?”
- Design the data collection sheet that can be used to collect this information.
 - Conduct the survey. This activity is best done as a group with each person contributing at least 20 results.
 - Make a stem-and-leaf plot of the data.
 - Decide on an appropriate bin size and construct a frequency table.
 - Make a histogram of the results.
 - Find the five-number summary of the data and construct a box-and-whisker plot.

Mixed Review

19. Write the equation containing (8, 1) and (4, -6) in point-slope form.
- What is the equation for the line perpendicular to this containing (0, 0)?
 - What is the equation for the line parallel to this containing (4, 0)?
20. Classify $\sqrt[3]{64}$ according to the real number hierarchy.
21. A ferry traveled to its destination, 22 miles across the harbor. On the first voyage, the ferry took 45 minutes. On the return trip, the ferry encountered a head wind and its trip took one hour, ten minutes. Find the speed of the ferry and the speed of the wind.
22. Solve for a : $\frac{6a}{a-1} = \frac{7}{a+7}$.
23. Simplify $\frac{7}{18x^2} \cdot \frac{9x}{14}$.
24. Use long division to simplify: $\frac{3w^3-6w^2-27w+54}{2w^2-4w-30}$.
25. A hot air balloon rises 16 meters every second.
- Is this an example of a linear function, a quadratic function, or an exponential function? Explain.
 - At four seconds the balloon is 68.5 meters from the ground. What was its beginning height?

Summary

This chapter begins by talking about inverse variation models, the graphs of rational functions, and the division of polynomials. It then moves on to discuss rational expressions in detail, including the multiplication, division, addition, and subtraction of rational expressions. Next, instruction is given on solving rational equations by using proportions and by clearing denominators. Finally, surveys and samples in statistics are highlighted.

Rational Equations and Functions; Statistics Review

Define the following terms used in this chapter.

1. Inverse variation
2. Asymptotes
3. Hyperbola
4. Points of discontinuity
5. Least common multiple
6. Random sampling
7. Stratified sampling
8. Biased
9. Cherry picking
10. What quadrants are the branches of a hyperbola located if $k < 0$?

Are the following examples of *direct variation* or *inverse variation*?

11. The number of slices n people get from sharing one pizza
12. The thickness of a phone book given n telephone numbers
13. The amount of coffee n people receive from a single pot
14. The total cost of pears given that nectarines cost \$0.99 per pound

For each variation equation:

1. Translate the sentence into an inverse variation equation.
 2. Find k , the constant of variation.
 3. Find the unknown value.
15. y varies inversely as x . When $x = 5, y = \frac{2}{15}$. Find y when $x = -\frac{1}{2}$.
 16. y is inversely proportional to the square root of y . When $x = 16, y = 0.5625$. Find y when $x = \frac{1}{8}$.
 17. Habitat for Humanity uses volunteers to build houses. The number of days it takes to build a house varies inversely as the number of volunteers. It takes eight days to build a house with twenty volunteers. How many days will it take sixteen volunteers to complete the same job?
 18. The Law of the Fulcrum states the distance you sit to balance a seesaw varies inversely as your weight. If Gary weighs 20.43 kg and sits 1.8 meters from the fulcrum, how far would Shelley sit, assuming she weighs 36.32 kilograms?

For each function:

1. Graph it on a Cartesian plane.
2. State its domain and range.
3. Determine any horizontal and/or vertical asymptotes the function may have.

19. $y = \frac{4}{x}$
20. $f(x) = \frac{2}{4-x}$
21. $g(x) = \frac{-1}{x+1}$
22. $y = \frac{6}{3x+1} - 2$
23. $f(x) = \frac{3}{x} - 5$

Perform the indicated operation.

24. $\frac{5a}{6} - \frac{5b}{4b}$
25. $\frac{3m}{4} + \frac{4m}{5}$
26. $\frac{3x}{2xy} + \frac{4}{3}$
27. $\frac{2}{5n-2} + \frac{2n}{2}$
28. $\frac{2x+1}{3x+9} - \frac{x+5}{3x+9}$
29. $\frac{5m+n}{30n^4} - \frac{4m+n}{30n^4}$
30. $\frac{r-6}{4r^2-12r+8} - \frac{r+6}{4r^2-12r+8}$
31. $\frac{2}{16x^3y^2} + \frac{x-2y}{16x^3y^2}$
32. $\frac{n-6}{n+2} + \frac{2n}{5}$
33. $\frac{8}{4} - \frac{x+5}{x+8}$
34. $\frac{3x}{2(x+1)} + \frac{6}{7x-6}$
35. $\frac{11}{8} \cdot \frac{20x^2}{2}$
36. $\frac{17r}{16} \cdot \frac{7r^4}{16}$
37. $\frac{15}{18} \cdot \frac{14}{17t}$
38. $\frac{2(b-11)}{14b} \cdot \frac{b+5}{(b+5)(b-11)}$
39. $\frac{17w^2}{w+4} \cdot \frac{18(w+4)}{17w^2(w-9)}$
40. $\frac{10s^3-30s^2}{30s^2-10s^3} \cdot \frac{s-3}{8}$
41. $\frac{1}{f-5} \div \frac{f+3}{f^2+6f+9}$
42. $\frac{(a+8)(a+3)}{4(a+3)} \div \frac{10a^2(a+10)}{4}$
43. $\frac{1}{(h-10)(h+7)} \div \frac{(h-4)}{4h(h-10)}$
44. $\frac{2(5x-8)}{4x^2(8-5x)} \div \frac{6}{4x^2}$
45. $\frac{2(q-7)}{40q(q+1)} \div \frac{1}{40q(q+1)}$

Solve each equation.

46. $\frac{3}{3x^2} = \frac{1}{x} + \frac{1}{3x^2}$
47. $\frac{2}{5x^2} = -\frac{12}{x-3}$
48. $\frac{7x}{x-6} = \frac{3}{4x+16}$
49. $\frac{4}{c-2} = \frac{3}{c+4}$
50. $\frac{d-4}{4d^2} = \frac{1}{4d^2} + \frac{1}{4d}$
51. $\frac{1}{2} = \frac{2z-12}{z} - \frac{z+1}{4z}$
52. $\frac{1}{n} = \frac{1}{n^2} + \frac{6}{n}$
53. $\frac{1}{2a} = \frac{1}{2a^2} + \frac{1}{a}$
54. $\frac{k+4}{k^2} = \frac{5k-30}{3k^2} + \frac{1}{3k^2}$
55. It takes Jayden seven hours to paint a room. Andie can do it in five hours. How long will it take to paint the room if Jayden and Andie work together?
56. Kiefer can mow the lawn in 4.5 hours. Brad can do it in two hours. How long will it take if they worked together?

57. Melissa can mop the floor in 1.75 hours. With Brad's help, it took only 50 minutes. How long would it take Brad to mop it alone?
58. Working together, it took Frankie and Ricky eight hours to frame a room. It would take Frankie fifteen hours doing it alone. How long would it take Ricky to do it alone?
59. A parallel circuit has $R_1 = 50\Omega$ and $R_t = 16\Omega$. Find R_2 .
60. A parallel circuit has $R_1 = 6\Omega$ and $R_2 = 9\Omega$. Find R_T .
61. A series circuit has $R_1 = 200\Omega$ and $R_t = 300\Omega$. Find R_2 .
62. A series circuit has $R_1 = 11\Omega$ and $R_2 = 25\Omega$. Find R_T .
63. Write the formula for the total resistance for a parallel circuit with three individual resistors.
64. What would be the bias in this situation? To determine the popularity of a new snack chip, a survey is conducted by asking 75 people walking down the chip aisle in a supermarket which chip they prefer.
65. Describe the steps necessary to design and conduct a survey.
66. You need to survey potential voters for an upcoming school board election. Design a survey with at least three questions you could ask. How will you plan to conduct the survey?
67. What is a *stratified sample*? Name one case where a stratified sample would be more beneficial.

Rational Equations and Functions; Statistics Test

1. *True or false?* A horizontal asymptote has the equation $y = c$ and represents where the denominator of the rational function is equal to zero.
2. A group of SADD members wants to find out about teenage drinking. The members conduct face-to-face interviews, wearing their SADD club shirts. What is a potential bias? How can this be modified to provide accurate results?
3. Name the four types of ways questions can be biased.
4. Which is the best way to show data comparing two categories?
5. Consider $f(x) = -\frac{4}{x}$. State its domain, range, asymptotes, and the locations of its branches.
6. h varies inversely as r . When $h = -2.25$, $r = 0.125$. Find h when $r = 12$.
7. Name two types of visual displays that could be used with a frequency distribution.
8. Tyler conducted a survey asking the number of pets his classmates owned and received the following results: 0, 2, 1, 4, 3, 2, 1, 0, 0, 0, 0, 1, 4, 3, 2, 3, 4, 3, 2, 1, 1, 1, 5, 7, 0, 1, 2, 3, 2, 1, 4, 3, 2, 1, 1, 0
 - a. Display this data with a frequency distribution chart.
 - b. Use it to make a histogram.
 - c. Find its five-number summary.
 - d. Draw a box-and-whisker plot.
 - e. Make at least two conclusions regarding Tyler's survey.
9. Find the excluded values, the domain, the range, and the asymptotes of:

$$f(x) = -\frac{9}{x^2 - 16} + 4.$$

Perform the indicated operation.

10. $\frac{4}{21r^4} + \frac{4r+5t}{21r^4}$
11. $\frac{a-v}{12a^3} - \frac{a+5v}{12a^3}$
12. $\frac{8}{g+8} + \frac{g-3}{g-5}$
13. $\frac{4t}{5t-8} + \frac{24}{12}$
14. $\frac{4}{5} \cdot \frac{80}{48m}$
15. $\frac{1}{d-8} \div \frac{d+7}{2d+14}$
16. $\frac{1}{u-3} \div \frac{u-4}{2u-6}$

Solve.

17. $\frac{7w}{w-7} = \frac{7w}{w+5}$

18. $\frac{p-6}{3p^2-6p} = \frac{7}{3}$

19. $\frac{2}{x^2} = \frac{1}{2x^2} - \frac{x+1}{2x^2}$

20. $\frac{1}{2} - \frac{1}{4r} = \frac{3}{4}$

21. $\frac{y-5}{3y^2} = -\frac{1}{3y} + \frac{1}{y^2}$

22. Working together, Ashton and Matt can tile a floor in 25 minutes. Working alone, it would take Ashton two hours. How long would it take Matt to tile the floor alone?
23. Bethany can paint the deck in twelve hours. Melissa can paint the deck in five hours. How long would it take the girls to paint the deck, working together?
24. A parallel circuit has $R_t = 115 \Omega$ and $R_2 = 75 \Omega$. Find R_1 .
25. A series circuit has $R_1 = 13 \Omega$ and $R_t = 21 \Omega$. Find R_2 .

Texas Instruments Resources

In the CK-12 Texas Instruments Algebra I FlexBook, there are graphing calculator activities designed to supplement the objectives for some of the lessons in this chapter. See <http://www.ck12.org/flexr/chapter/9622>.